

Load Distribution

نسألکم الدعاء

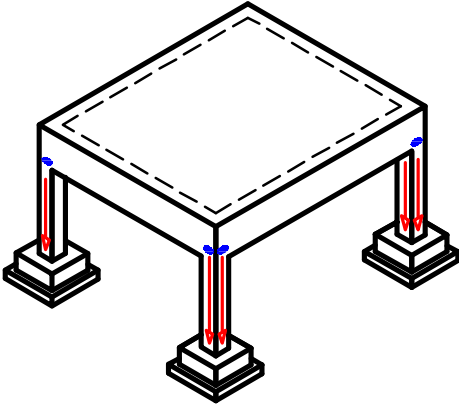
Load Distribution. Table of Contents.

<i>Introduction.</i>	<i>Page 2</i>
<i>Types of Slabs.</i>	<i>Page 3</i>
<i>Load Distribution Pattern For Slabs.</i>	<i>Page 5</i>
<i>Calculation of loads on Beams.</i>	<i>Page 12</i>
<i>o.w. of the beam.</i>	<i>Page 13</i>
<i>Weight of walls.</i>	<i>Page 16</i>
<i>Loads From the slab.</i>	<i>Page 17</i>
<i>Beams with more than one span.</i>	<i>Page 38</i>
<i>3 sided slabs.</i>	<i>Page 40</i>
<i>Slabs with external angels.</i>	<i>Page 44</i>
<i>Parapet rested on slabs.</i>	<i>Page 46</i>
<i>Max-Max B.M.D.</i>	<i>Page 49</i>
<i>Inclined Slabs.</i>	<i>Page 80</i>
<i>Reaction of Continous Beams.</i>	<i>Page 95</i>
<i>Sectional Elevation Load Dist.</i>	<i>Page 97</i>
<i>Sky Light.</i>	<i>Page 98</i>
<i>Examples of Load Distribution.</i>	<i>Page 129</i>

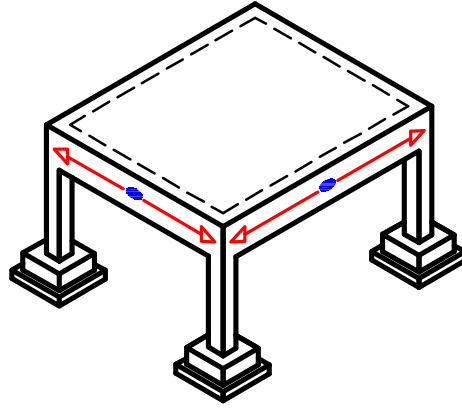
Introduction.

أى حمل موجود فى منشأ ينتقل إلى البلاطه و منه إلى الكمرات و منه إلى الأعمده و منه إلى القواعد و منه إلى الأرض .

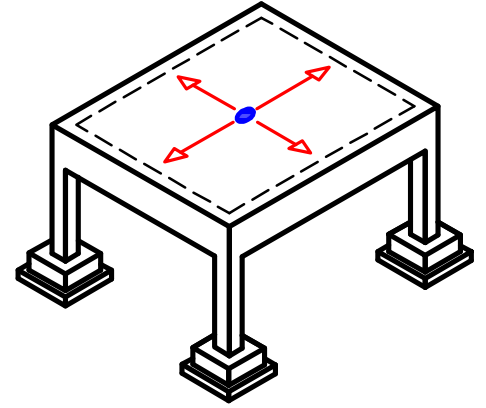
* الحمل ← البلاطه ← الكمرات ← الأعمده ← القواعد ← الأرض .



من العمود للقاعده



من الكمره للعمود



من البلاطه للكمره

∴ لكى نصمم البلاطات يجب أن نحدد الحمل الواقع عليها .

و لكى نصمم الكمرات يجب أن نحدد الحمل الواقع عليها من البلاطات .

و لكى نصمم الأعمده يجب أن نحدد الحمل الواقع عليها من الكمرات .

و لكى نصمم القواعد يجب أن نحدد الحمل الواقع من الأعمده .

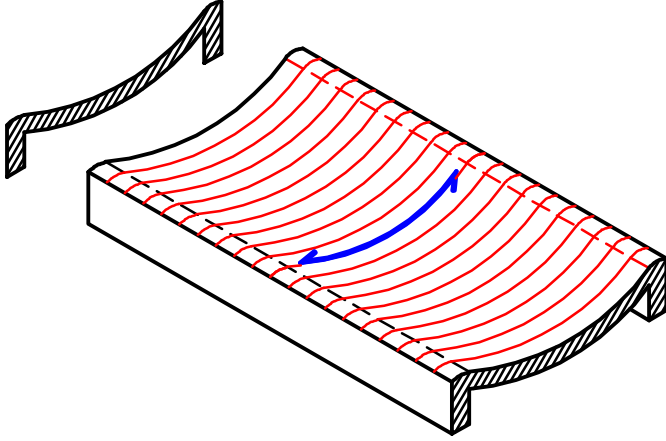
و معنى الـ **Load Distribution** هو توزيع الأحمال من البلاطه إلى الكمرات و ذلك لكى نستطيع أن نحدد الأحمال الواقعه على كل كمره لكى نرسم لها الـ **B.M.D.** ، **S.F.D.** و عن طريق الـ **B.M.D.** ، **S.F.D.** نستطيع أن نصمم الكمره (أى أن نعرف أبعادها و نحدد تسليحها) .

Types of Slabs. أنواع البلاطات

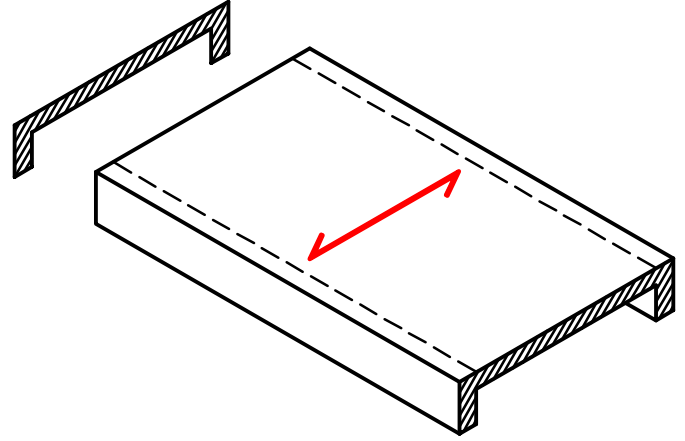
يتم تقسيم البلاطات على حسب الاتجاهات التي يسير فيها الحمل .

① One Way Slab.

ال **One Way Slab** هي عبارة عن بلاطه يسير فيها الحمل في اتجاه واحد فقط .



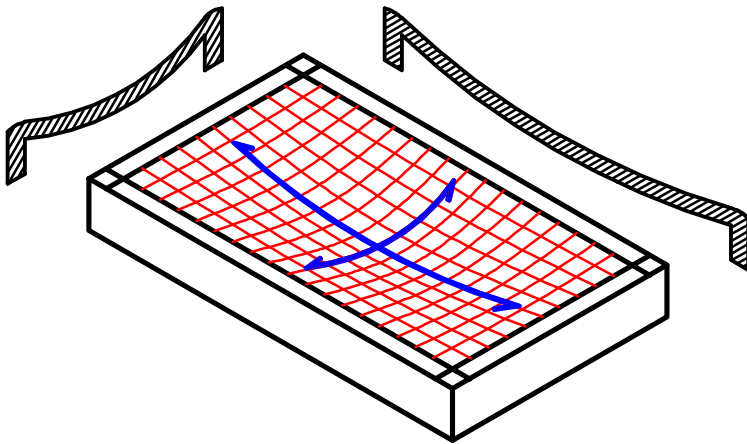
After Loading



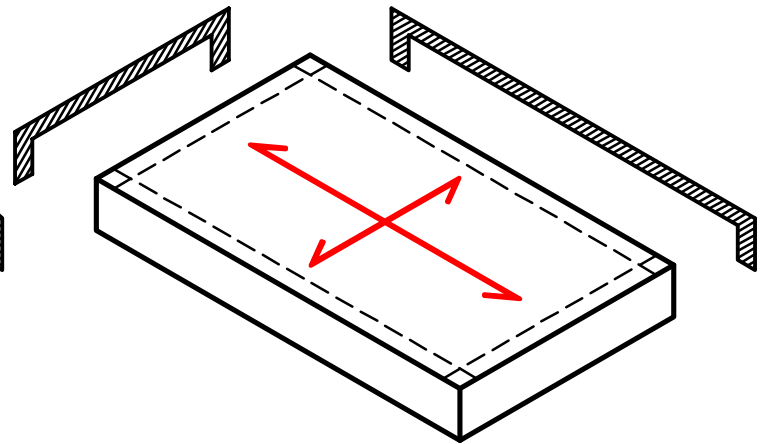
Before Loading

② Two Way Slab.

ال **Two Way Slab** هي عبارة عن بلاطه يسير فيها الحمل في الاتجاهين .



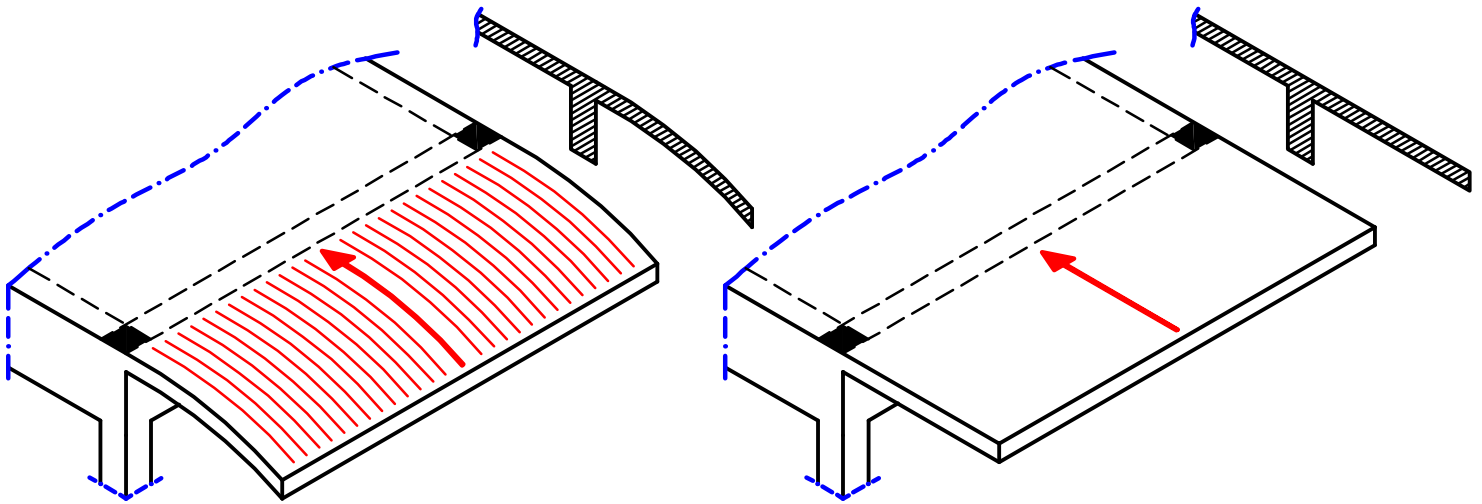
Before Loading



Before Loading

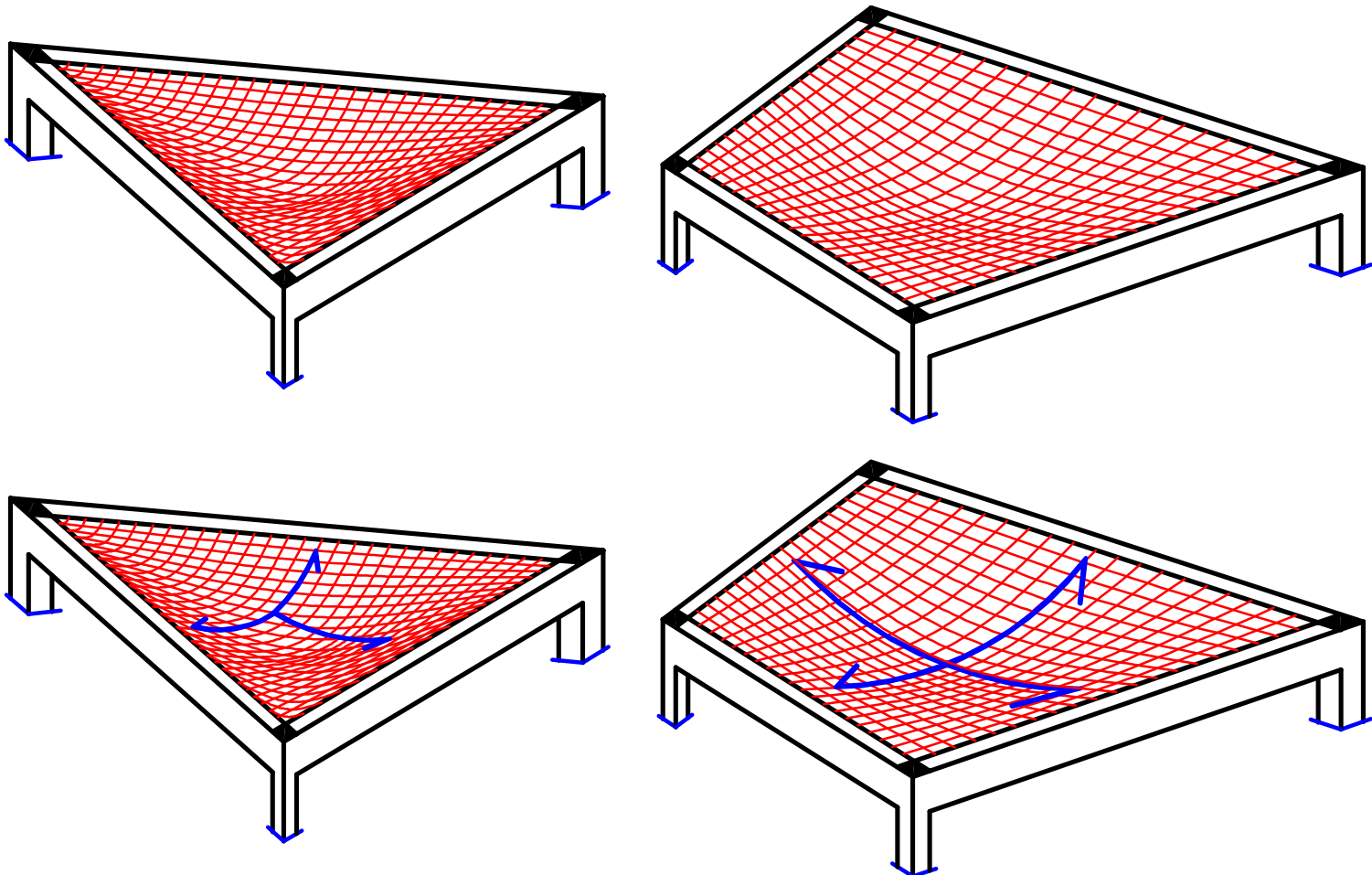
③ Cantilever Slab.

ال **Cantilever Slab** هي عبارة عن بلاطة محمولة على كمره واحده .



④ Irregular Slabs.

ال **Irregular Slabs** هي بلاطات أشكالها غير منتظمة .



Load Distribution Pattern For Slabs.

توزيع أحمال البلاطات على الكمرات هي طريقه معقده للغاية
و تعتمد على عوامل كثيره أهمها :

- ١- نسبة أبعاد البلاطة لبعضها و استمراريتها فى الاتجاهين **(r) rectangularity**
- ٢- حاله ارتكاز البلاطة على الكمره .
- ٣- نسبة تخانه البلاطة الى الكمره **relative stiffness** .
- ٤- تفاصيل التسليح بين البلاطة و الكمره **hinged or rigid joint** .
- ٥- توزيع الاعمده و طريقه اتصالها مع الكمرات و البلاطات .

و للتسهيل سيتم توزيع أحمال البلاطات على الكمره .
معتمده على الشكل النهائى المتوقع لانهايارالبلاطة (**Yield Line Theory**)

① One Way Slab.

المحموله على كمرتين متوازيتين فقط

توزيع ال **Load** على الكمرات يتم عمل خط فى منتصف البلاطة موازى للكمرتين .

المحموله على ٤ كمرات

توزيع ال **Load** على الكمرات يتم عمل خط فى منتصف البلاطة موازى للكمرتين الاطول .

② Two Way Slab.

لتحديد الحمل الذى تحمله كل كمره على حده يتم تنصيف الزوايا بين الكمرات

③ Irregular Slab.

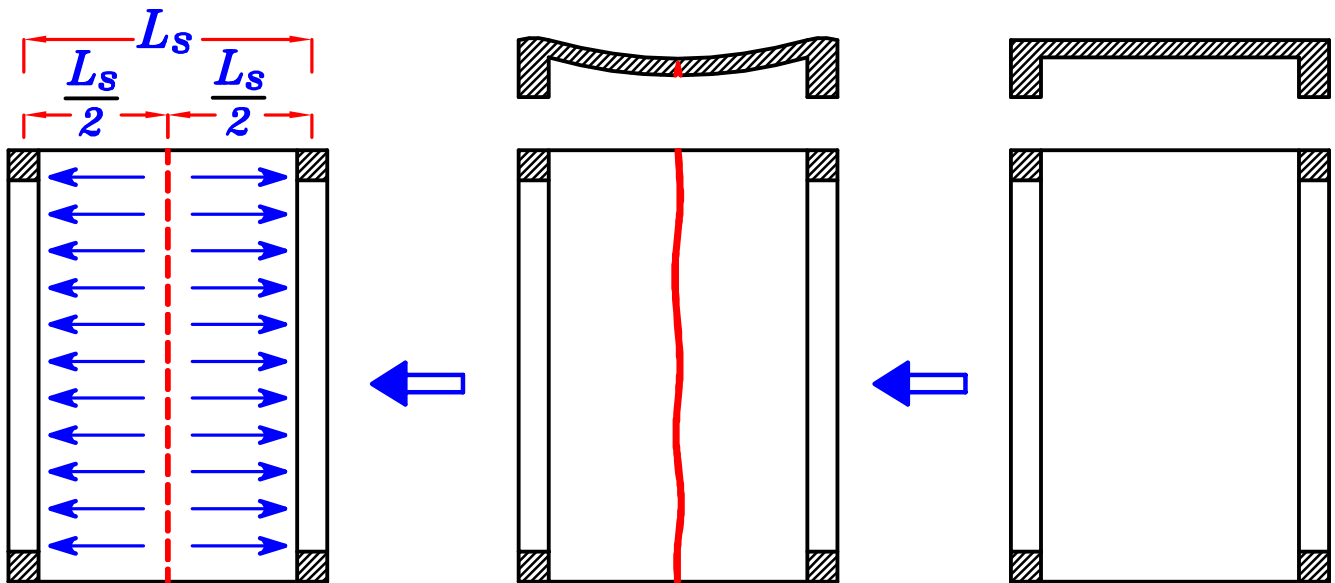
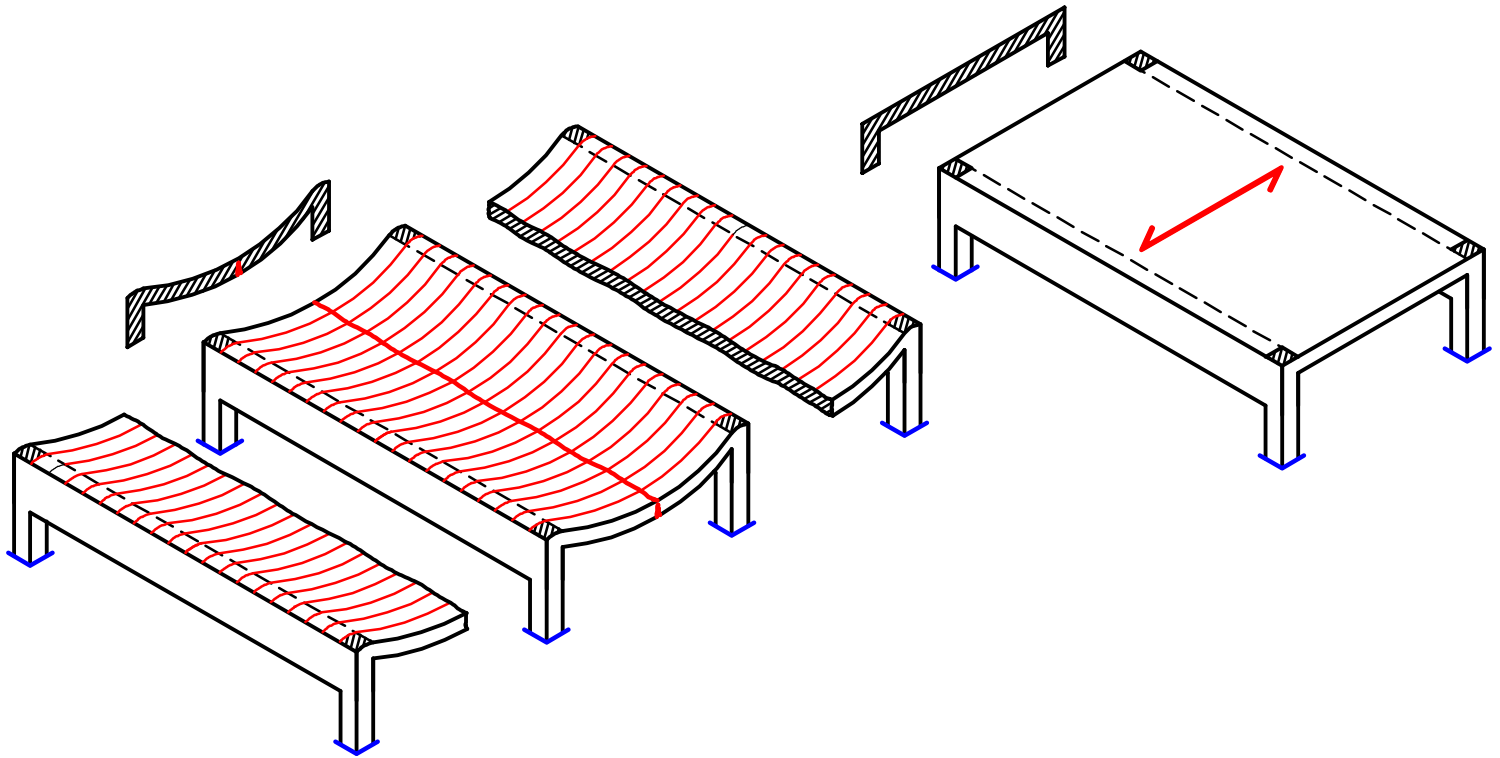
لتحديد الحمل الذى تحمله كل كمره على حده يتم تنصيف الزوايا بين الكمرات

④ Cantilever Slab.

لان البلاطة ال **Cantilever** محموله بالكامل على الكمره
فلا يوجد توزيع للاحمال انما البلاطة كلها محموله على نفس الكمره

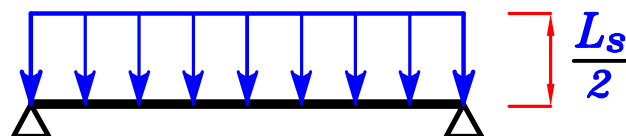
1-For Rectangular Slabs rested on 2 parallel Beams.

البلاطات المستطيلة المحمولة على كمرتين متوازييتين .



البلاطة المحمولة على كمرتين متوازييتين تكون دائما **One Way**

و لتوزيع ال **Load** على الكمرات يتم عمل خط في منتصف البلاطة موازي للكمرتين .



2-For Rectangular Slabs rested on 4 Beams.

البلاطات المستطيلة المحمولة على ٤ كمرات

البلاطات المحمولة على أربع كمرات ممكن أن تكون **one way** أى الحمل يسير فى اتجاه واحد أو ممكن أن تكون **Two way** أى الحمل يسير فى الاتجاهين .
و لتحديد اذا كانت البلاطة **one way or Two way** نحسب معامل استطالة البلاطة (γ)




معامل استطالة البلاطة. Degree of rectangularity. (γ)

$$\gamma = \frac{m L}{m' L_s}$$

L ---- الطول الكبير للبلاطة

L_s ---- الطول الصغير للبلاطة

m, m' are Factors depends on the Continuity of the slab strip.

the strip			
m or m'	1.0	0.87	0.76

IF $\gamma > 2.0$ \therefore the Slab is **One way slab**.

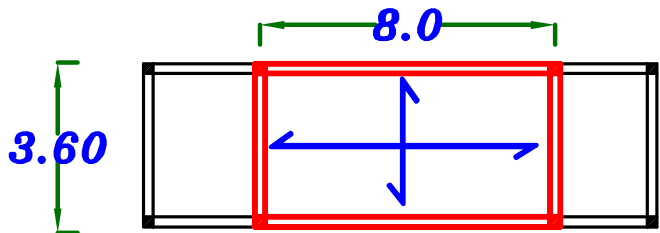
الحمل كله يسير فى اتجاه واحد فقط هو الاتجاه القصير (الموجود فى أسفل فى المقام) .

IF $\gamma \leq 2.0$ \therefore the Slab is **Two way slab**. الحمل يسير فى الاتجاهين

Example.

$$\gamma = \frac{0.76 (8.0)}{1.0 (3.60)} = 1.68 < 2.0$$

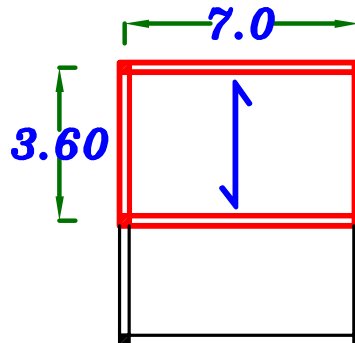
Two way



Example.

$$\gamma = \frac{1.0 (7.0)}{0.87 (3.60)} = 2.23 > 2.0$$

One way

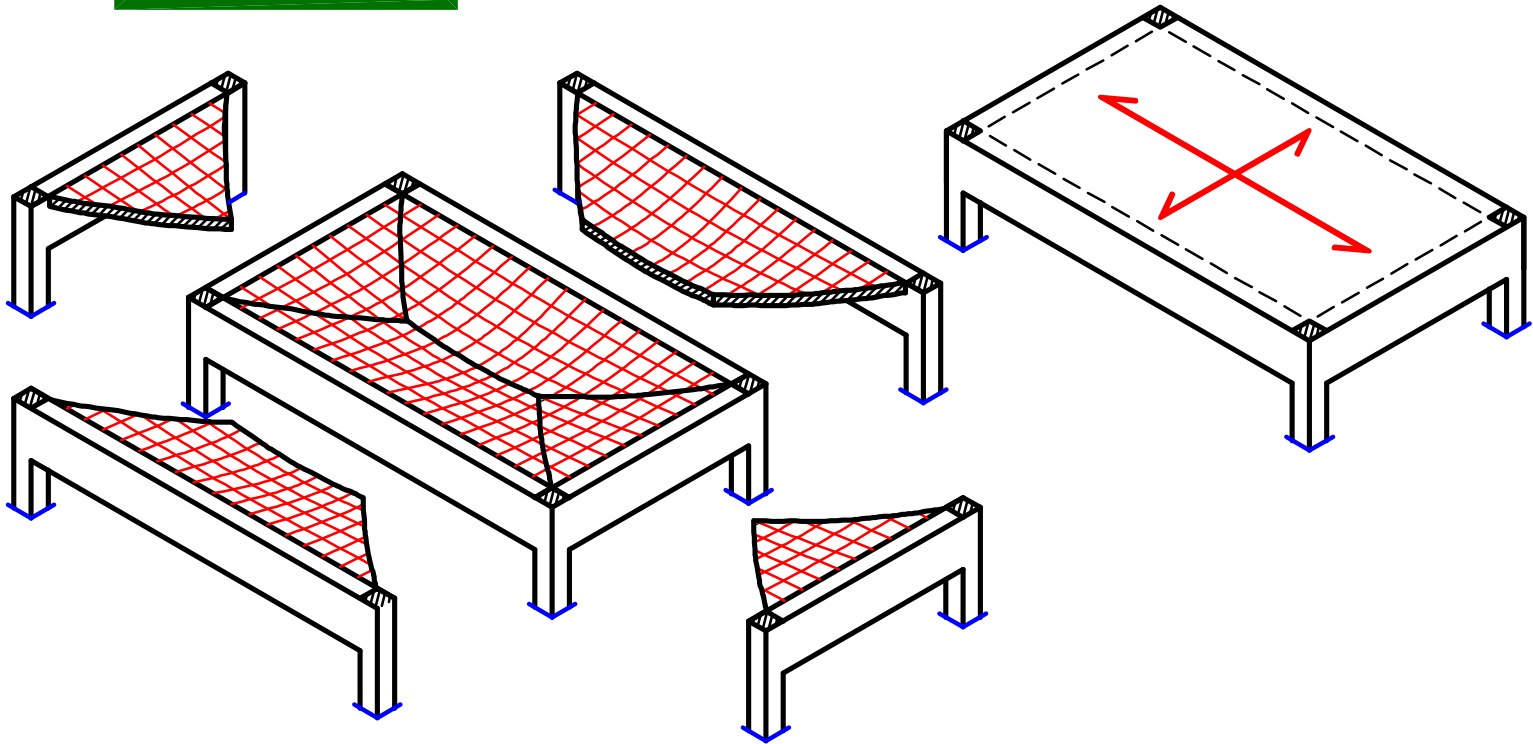


$$\gamma = \frac{L}{L_s}$$

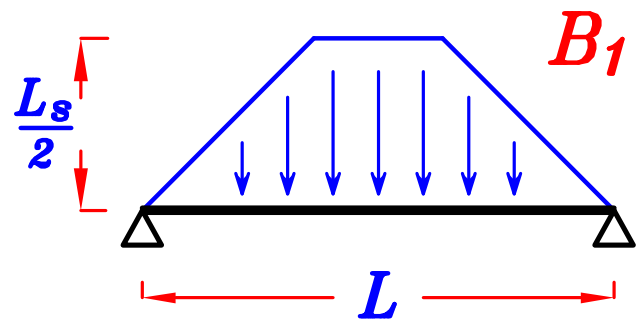
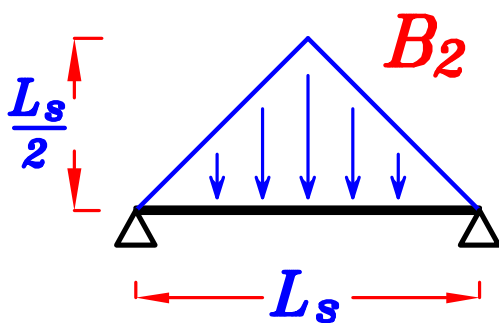
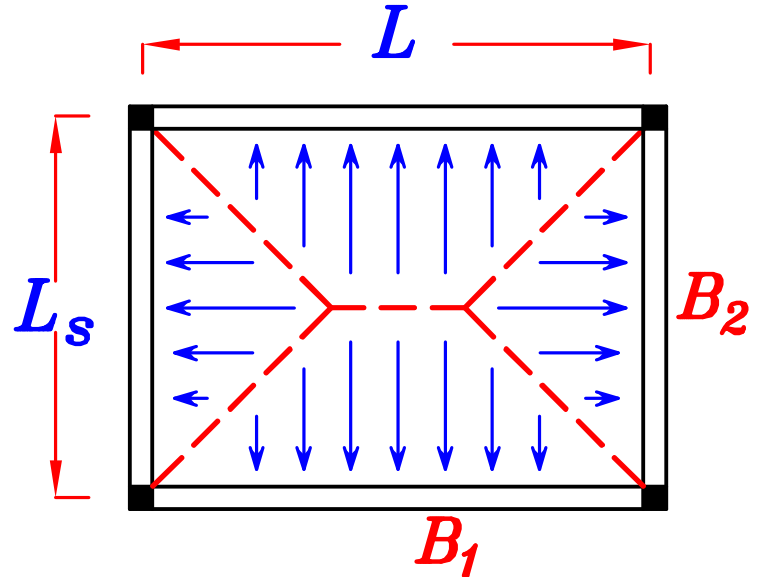
ممكن للتسهيل ممكن حساب

$$\frac{L}{L_s} \leq 2.0$$

الحمل يسير فى الاتجاهين *Two way*

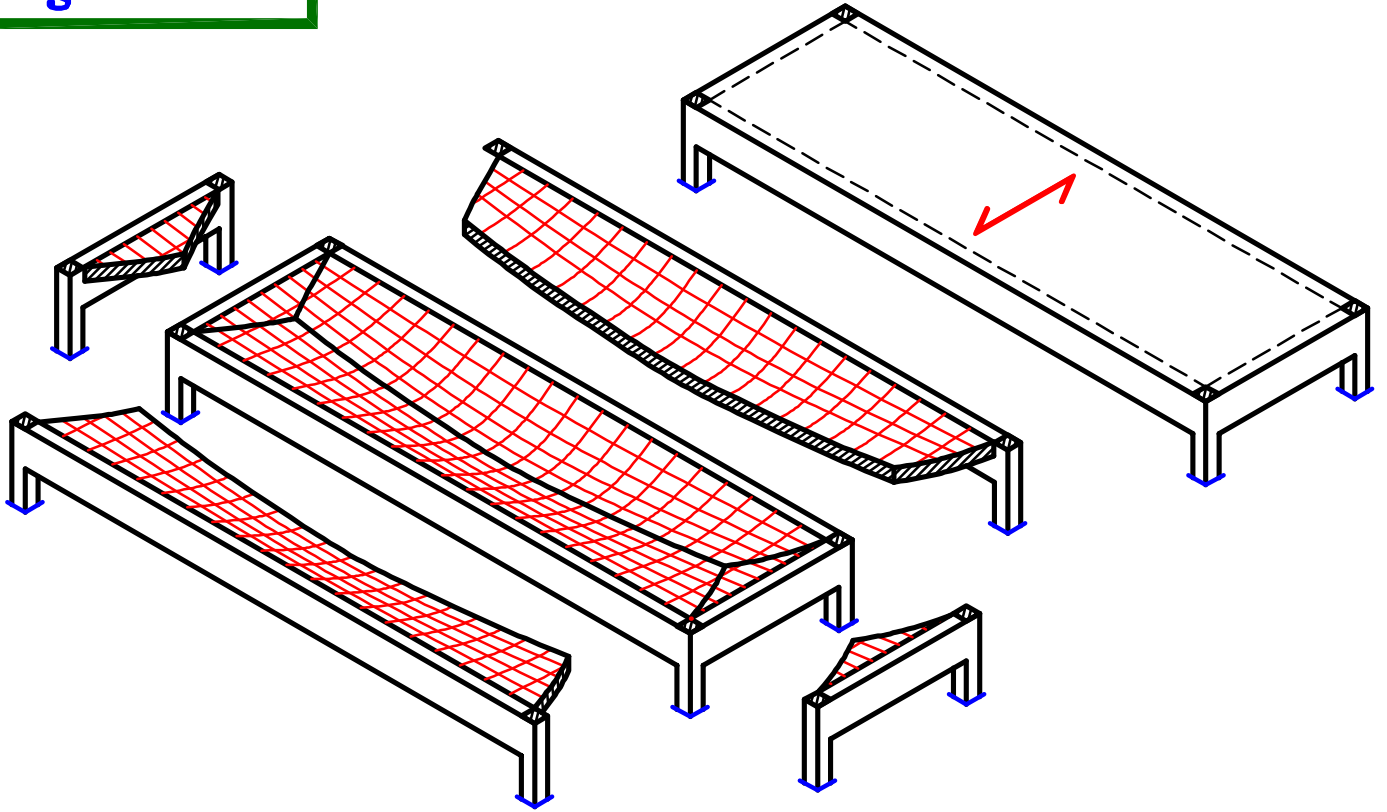


لتحديد الحمل الذى تحمله كل كمره على حده يتم تنصيف الزوايا بين الكمرات



$$\frac{L}{L_s} > 2.0$$

نعتبر الحمل يسير فى الاتجاه القصير فقط *One way*

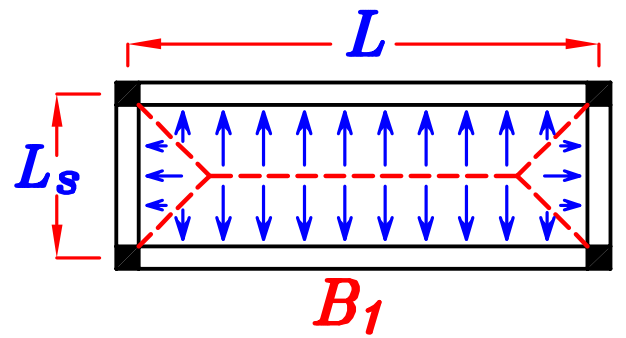
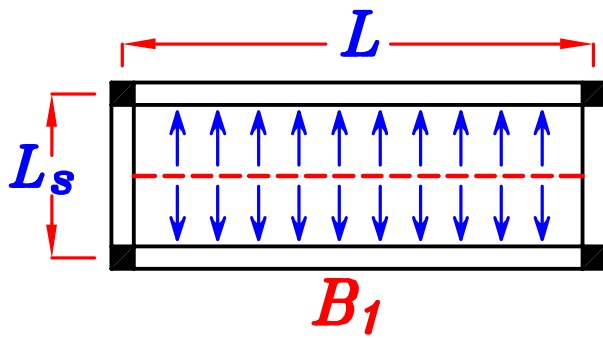


عند تصنيف الزوايا بين الكمرات

سيظهر أن الكمره الطويله تحمل نسبته كبيره جدا من الحمل

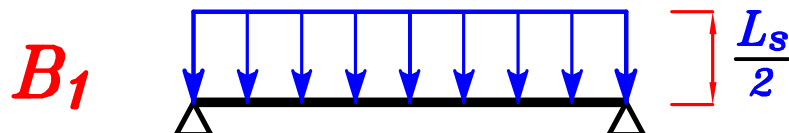
و الكمره القصيره تحمل جزء قليل جدا من الحمل

لذا نعتبرها بلاطه *One way* فى الاتجاه الاقصر فقط .

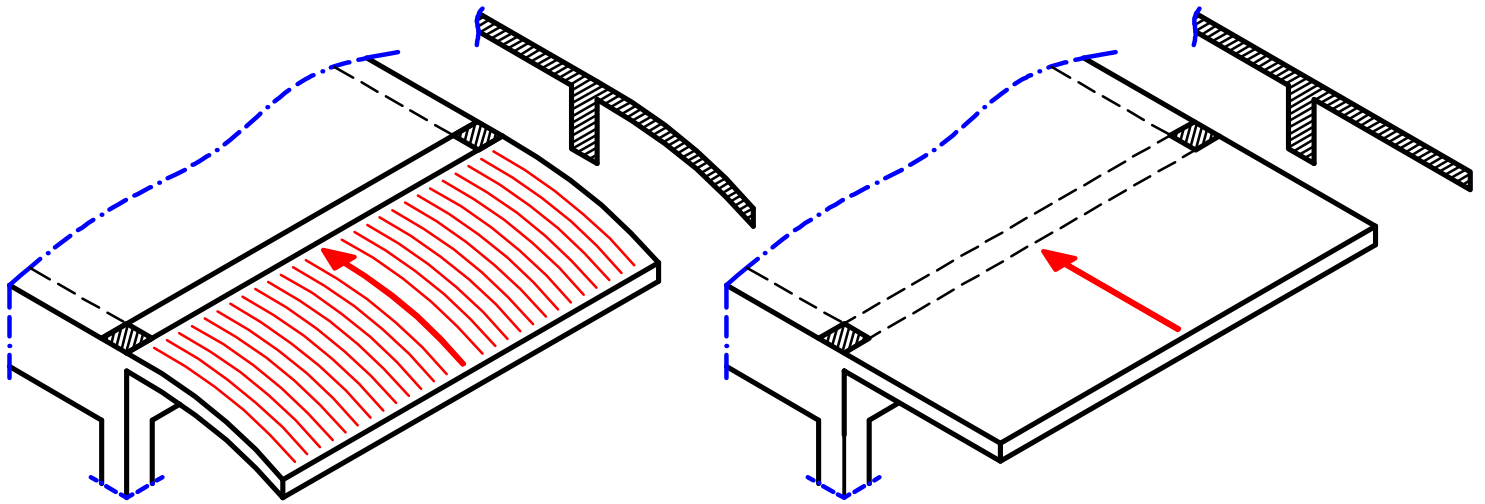


توزيع الحمل فى البلاطات ال *One way* ذات ال ٤ كمرات

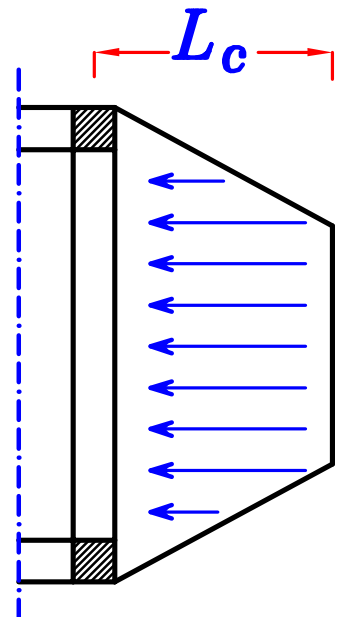
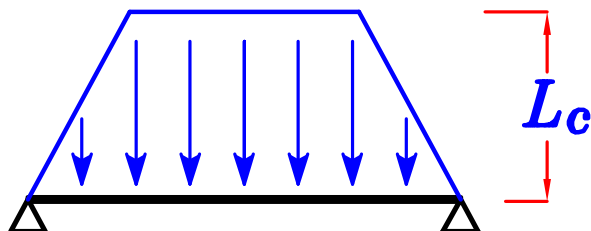
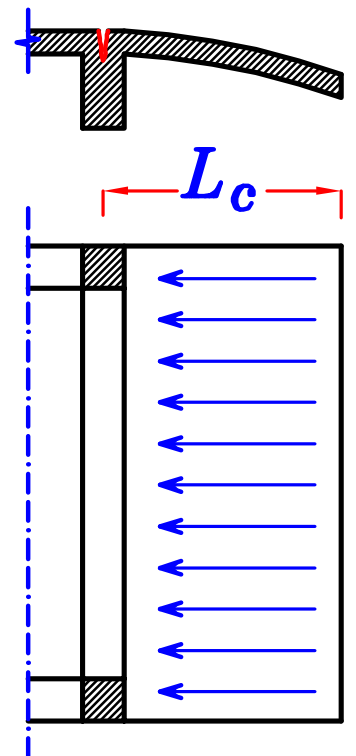
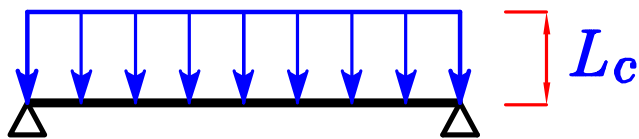
يكون بعمل خط موازى للكمرتين الاطول .



3- For Cantilever Slabs .

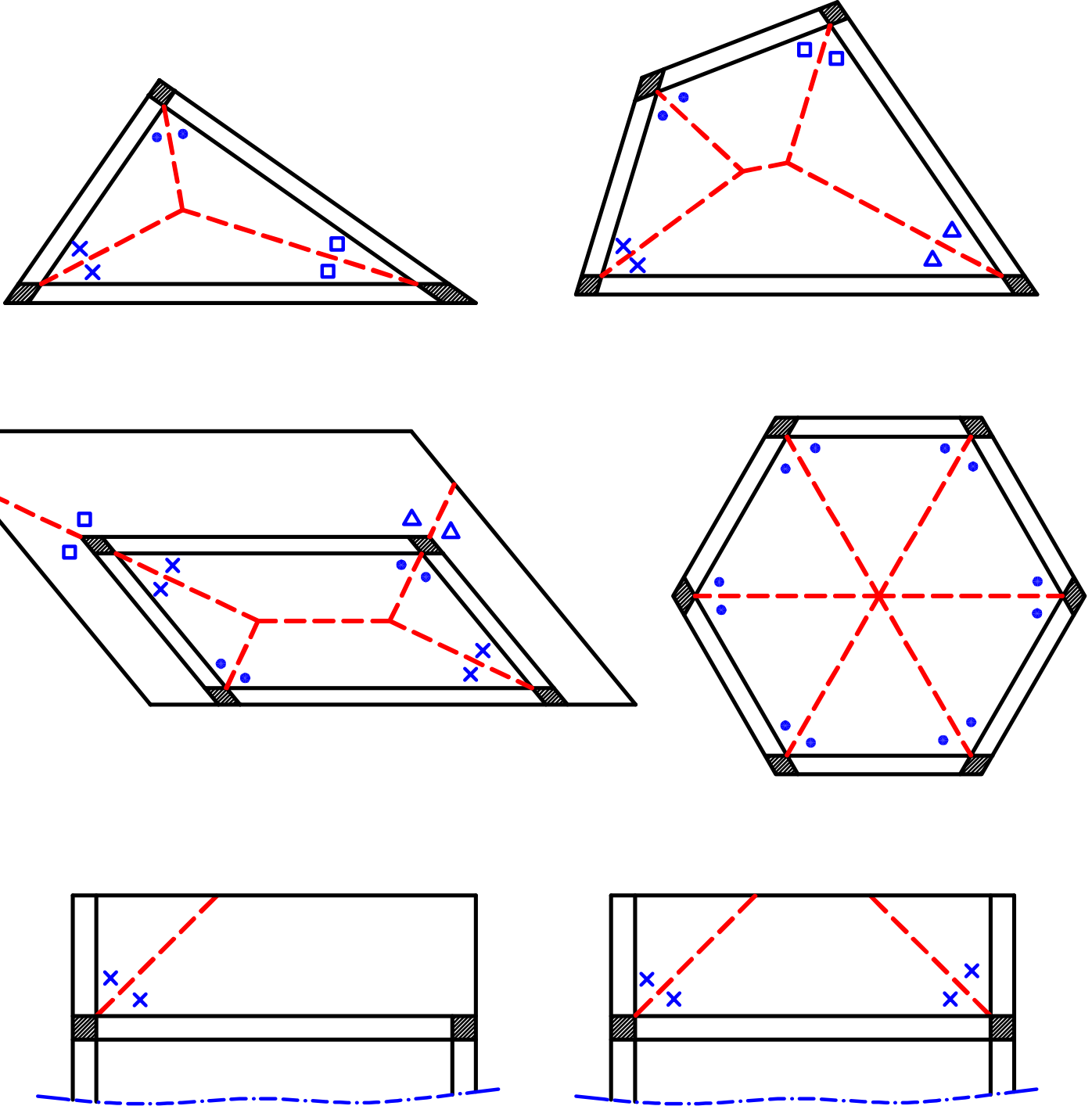


لان البلاطه الـ **Cantilever** محموله بالكامل على الكمره
فلا يوجد توزيع للاحمال انما البلاطه كلها محموله على نفس الكمره



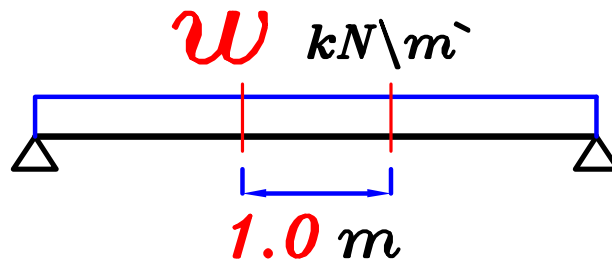
4-For Irregular Slabs .

لتحديد الحمل الذي تحمله كل كمره على حده يتم تنصيف الزوايا بين الكمرات



Calculation of loads on Beams.

لكى نصمم الكمره لاحقا يجب أن نرسم أولاً **B.M.D. & S.F.D.** و لكى نرسم **B.M.D. & S.F.D.** يجب أولاً أن نحسب قيمه (w) .
حيث (w) هى الحمل الموجود على الكمره فى المتر الطولى الواحد .



$w = \text{o.w. of the beam} + \text{Weight of the wall} + \text{Weight From the slab.}$

$$w = \text{o.w.}_{(\text{beam})} + \text{walls} + \text{Slabs} = \checkmark \text{ kN/m}$$

أى أن الوزن الواقع على الكمره يتكون من ثلاث أشياء :

① o.w. of the beam.

١- وزن الكمره نفسها . (وزن متر طولى من الكمره) .

② Weight of walls.

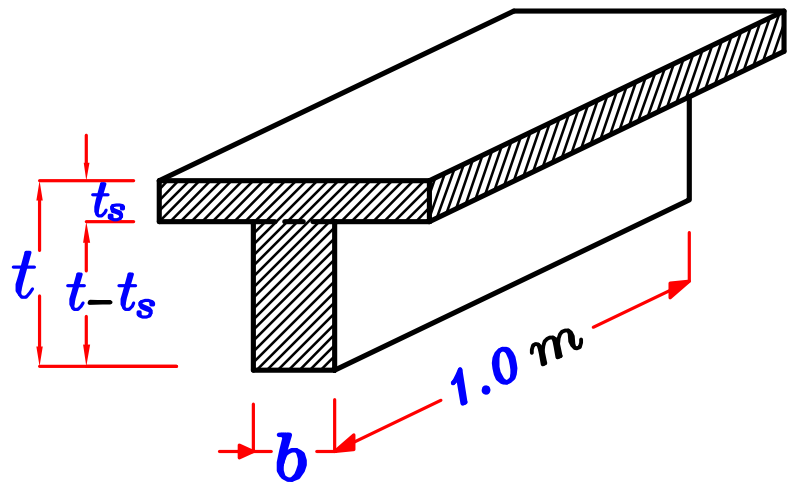
٢- وزن الحوائط التى تحملها الكمره . (وزن متر طولى من الحائط) .

③ Loads From the slab.

٣- وزن البلاطه الواقع على الكمره . (وزن البلاطه المحمول على متر طولى من الكمره) .

① o.w. of the beam (own weight)

نحسب وزن الكمره فى المتر الطولى



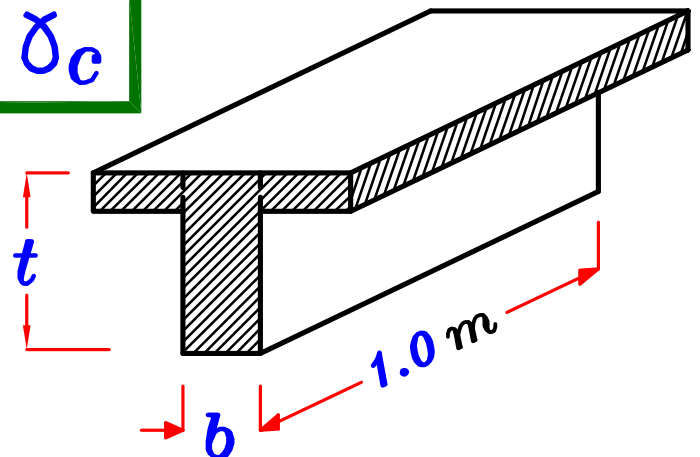
$$\text{Density of R.C. } (\delta_c) = 25 \text{ kN/m}^3$$

$$\begin{aligned} O.W._{(beam)} &= \text{Volume} * \text{Density} \\ &= [(b)(t - t_s)(1.0)] * \delta_c \end{aligned}$$

$$O.W._{(beam)} = (b)(t - t_s) \delta_c \text{ kN/m}$$

و لكن للتسهيل و فى نفس الوقت *more safe*
سنأخذ وزن المتر الطولى من الكمره

$$O.W._{(beam)} = (b)(t) \delta_c$$



١- إذا كانت أبعاد الكمره معروفه $(b * t)$

Example.

$$(250 * 600) \rightarrow b = 250 \text{ mm} = 0.25 \text{ m}, \quad t = 600 \text{ mm} = 0.60 \text{ m}$$

نحسب وزن المتر الطولى كما سبق :

$$O.W._{(beam)} = (b) (t) \delta_c = (0.25) (0.60) (25) = 3.75 \text{ kN/m}$$

Example.

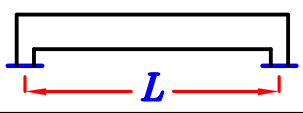
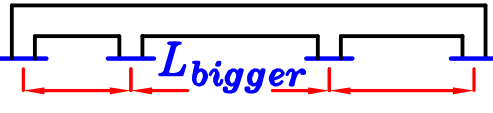
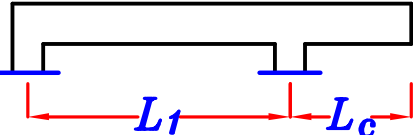
٢- لو الوزن معطى مباشره (تم فرضه) :

$$\text{Take } O.W._{(beam)} = 3.0 \text{ kN/m}$$

و فى هذه الحاله لا نحسب قيمه ال $O.W.$ بل نأخذ القيمه المُعطاه مباشره .

٣- من الممكن ان تكون ابعاد الكمره غير معطاه فنفرضها كالتالى :

$$\text{Take } b = 250 \text{ mm}$$

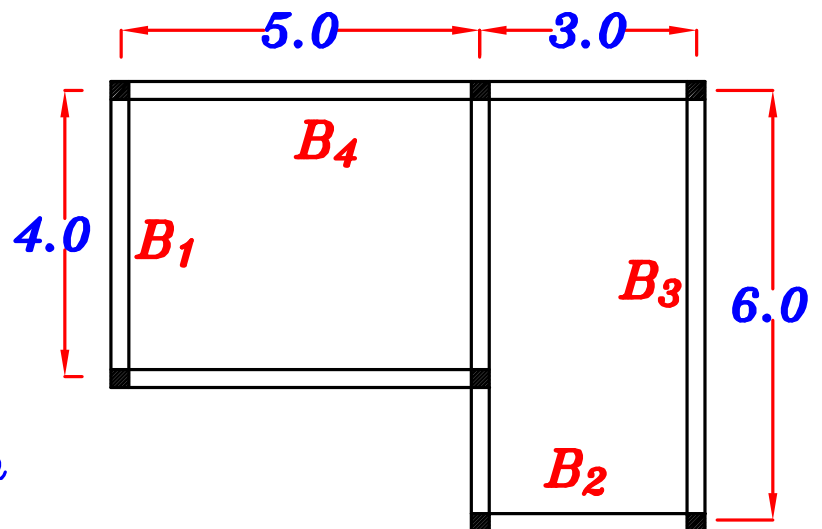
Type of beam	Thickness (t)
Simple Beam 	$t = \frac{L}{10}$
Continuous Beam 	$t = \frac{L_{bigger}}{12}$
Beam with Cantilever 	$t = \left. \begin{matrix} \frac{L_1}{12} \\ \frac{L_c}{5} \end{matrix} \right\} \text{الأكبر}$

و تقرب (t) لأقرب ٥٠ مم بالزيادة .

و أقل (t) للكمره = ٤٠٠ مم (٤٠ سم) $t_{min} = 400 \text{ mm}$

Example.

Estimate the thickness of the beams.



$$\underline{B_1} \quad t_1 = \frac{4}{10} = 0.40 \text{ m}$$

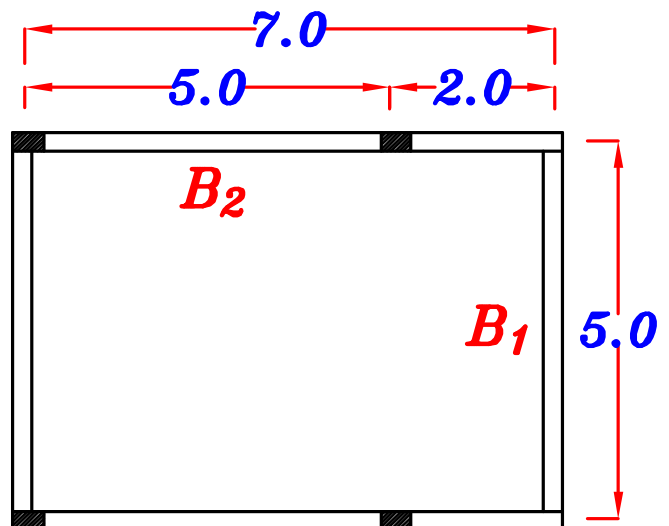
$$\underline{B_2} \quad t_2 = \frac{3}{10} = 0.3 \text{ m} < 0.40 \text{ m} \therefore t_2 = 0.4 \text{ m}$$

$$\underline{B_3} \quad t_3 = \frac{6}{10} = 0.60 \text{ m}$$

$$\underline{B_4} \quad t_4 = \frac{5}{12} = 0.416 \text{ m} = 0.45 \text{ m}$$

$$\underline{B_1} \quad t_1 = \frac{5}{10} = 0.50 \text{ m}$$

$$\begin{aligned} \underline{B_2} \quad t_2 &= \frac{5}{12} = 0.416 \text{ m} \\ &\quad \frac{2}{5} = 0.40 \text{ m} \\ &= 0.416 \text{ m} = 0.45 \text{ m} \end{aligned} \quad \left. \vphantom{\begin{aligned} t_2 &= \frac{5}{12} \\ &\frac{2}{5} \end{aligned}} \right\}$$



But B_1 supported on B_2

\therefore Take $t_2 = t_1 = 0.50 \text{ m}$

② Weight of walls.

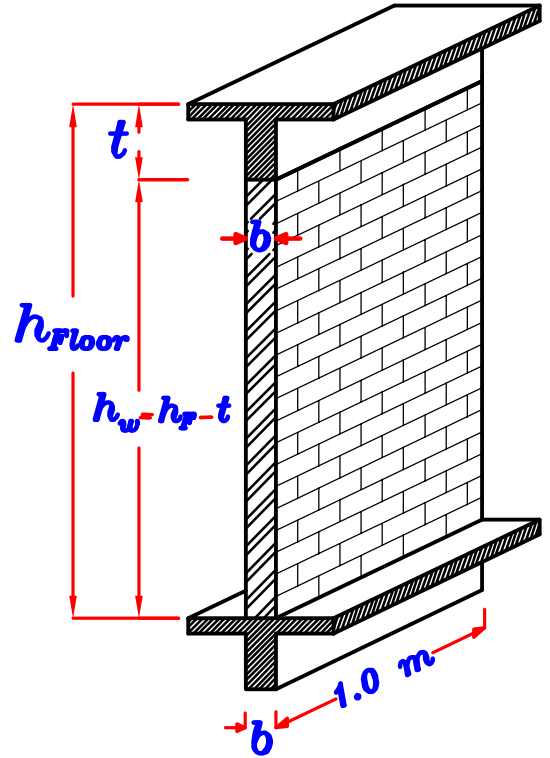
وزن الحائط في المتر الطولي

- ١- إذا كان المعطى هو ($\delta_w = \checkmark kN/m^3$) أى كثافة الحائط .

$$\delta_w = \checkmark kN/m^3$$

$$\begin{aligned}(w)_w &= Volume * Density \\ &= (b * h_w * 1.0) \delta_w \\ &= \checkmark kN/m\end{aligned}$$

$$(w)_w = b * h_w * \delta_w$$

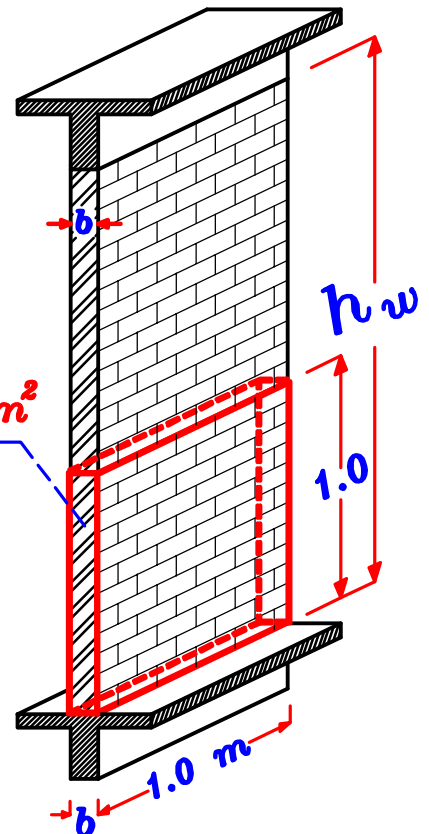


- ٢- إذا كان المعطى هو ($\delta_w = \checkmark kN/m^2$) أى وزن المتر المربع من الحائط .

$$\delta_w = \checkmark kN/m^2$$

$$(w)_w = h_w * \delta_w$$

$$\delta_w = \checkmark kN/m^2$$



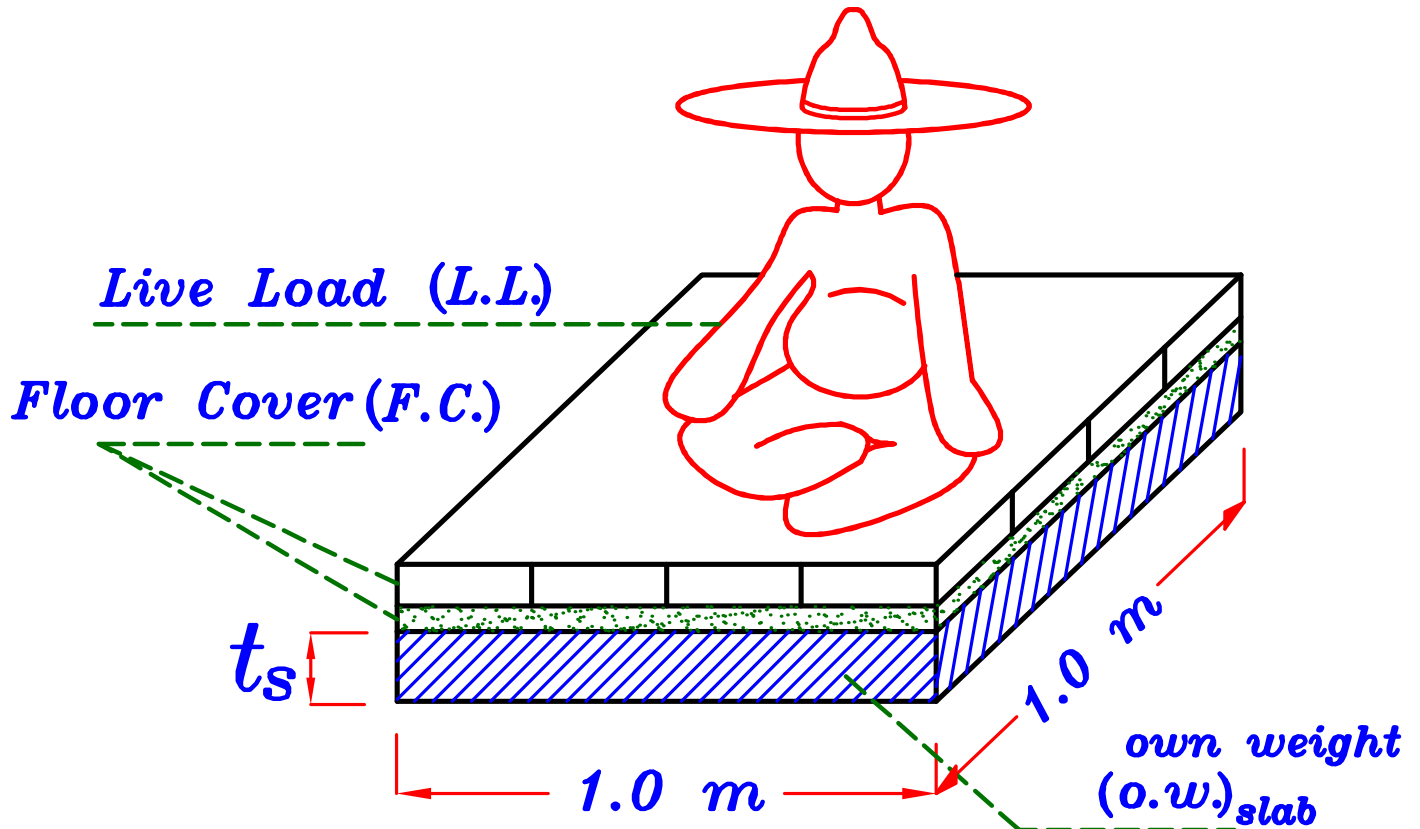
ملحوظة

إذا لم يعطينا أى معلومات عن الحائط

نعمل وجوده $(w)_w = Zero$

③ Loads From slab.

حمل البلاطه يذهب إلى الكمره .
و توزيع هذا الحمل يتوقف على نوع البلاطه و عدد الكمرات .
و لكي نحسب حمل البلاطه الذاهب إلى الكمره
يجب أولاً أن نحدد الحمل على البلاطه (الحمل على - ١,٢ م من البلاطه)
و هذا الحمل يتكون من ثلاثة أشياء :



④ Own Weight of the slab. (o.w.)

نحسب وزن البلاطه ل - ١,٢ م فقط

$$(o.w.)_{slab} = Volume * Density$$
$$= (t_s * 1.0 * 1.0) \delta_c = \checkmark \text{ kN/m}^2$$

$$(o.w.)_{slab} = t_s * \delta_c \text{ (kN/m}^2\text{)}$$

(b) Floor Cover. (F.C.)

هو وزن الأرضيه + الرمل .

و يتوقف على نوع الأرضيه (خشب باركيه أو بلاط أو سيراميك ألخ) .

و إذا لم يذكر أى معلومات عن نوع الأرضيه نأخذ $F.C. = 1.50 \text{ kN/m}^2$

(c) Live Load. (L.L.)

و هى الأحمال الحيه التى ممكن أن تتحرك أو يتغير مكانها

مثل (الناس أو الأثاث ألخ)

و تختلف قيمه الأحمال الحيه حسب إختلاف إستعمال المنشأ و هى كالاتى :

مبنى سكنى $L.L. = 2.0 \text{ kN/m}^2$ ←

مبنى إدارى أو مدرسه $L.L. = 3.0 \text{ kN/m}^2$ ←

سينما أو مسرح $L.L. = 5.0 \text{ kN/m}^2$ ←

مكتبه أو مخزن $L.L. = 10.0 \text{ kN/m}^2$ ←

فى البيوت السكنيه غالباً يكون $L.L. = 2.0 \text{ kN/m}^2$

Load of 1.0 m^2 of the slab. (w_s)

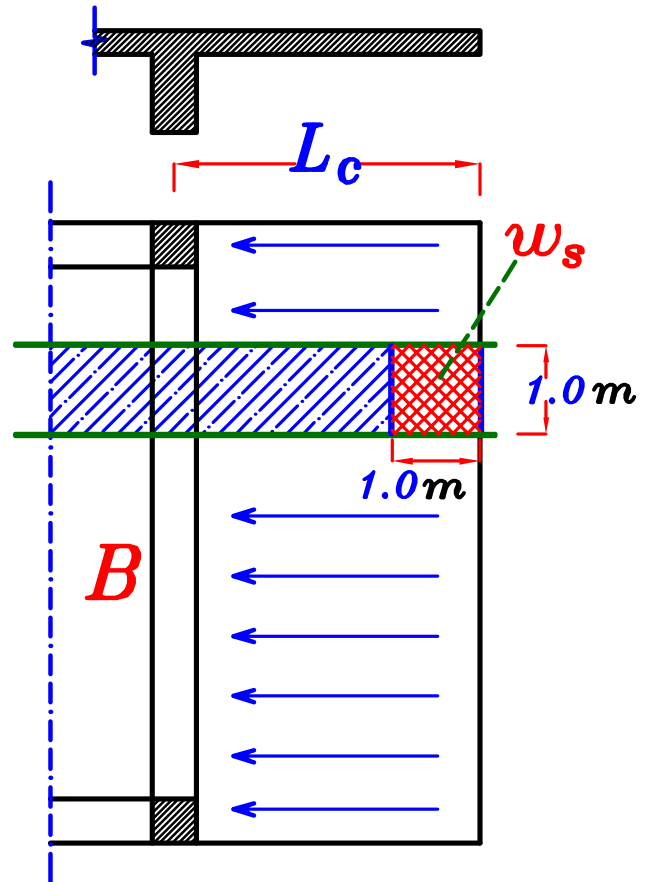
(w_s) هى الوزن الواقع على 1 m^2 من البلاطه

$$w_s = D.L. + L.L. = (o.w. + F.C.) + L.L. \\ = (t_s * \gamma_c + F.C.) + L.L.$$

$$w_s = t_s * \gamma_c + F.C. + L.L. \quad (\text{kN/m}^2)$$

بعد تحديد وزن البلاطة في المتر المربع w_s .
 نحدد حمل البلاطة الواقع على الكمره .
 حيث يتوقف هذا الحمل على نوع البلاطة و عدد الكمرات .

① Cantilever Slab.

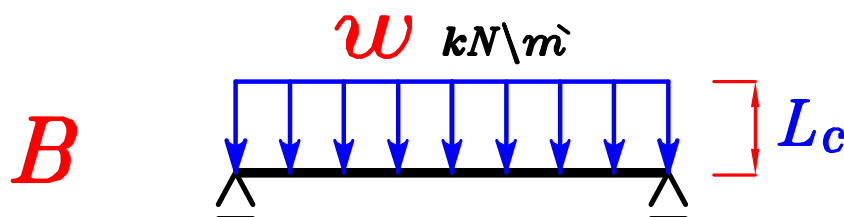


∴ الحمل على المتر المربع من البلاطة w_s =

∴ الكمره تحمل طول من البلاطة L_c =

∴ الوزن على المتر الطولى من الكمره w =

$$w = o.w.(beam) + walls + w_s L_c \text{ kN/m}$$



② One Way Slab.

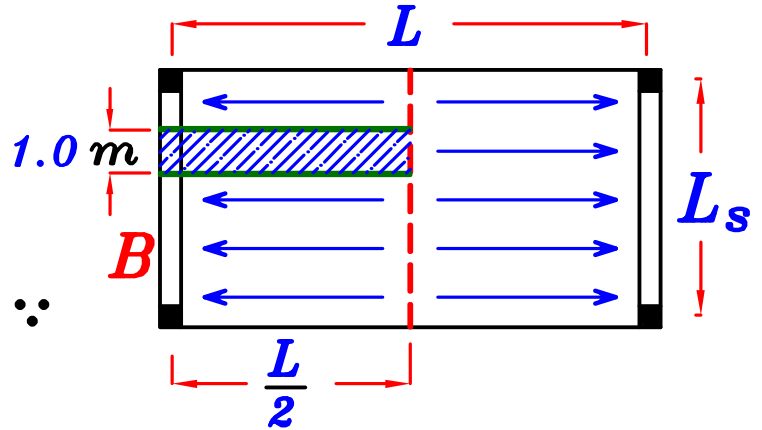
ال **One Way Slab** هي عبارة عن بلاطه يسير فيها الحمل في اتجاه واحد فقط.

• يوجد نوعان للبلاطات ال One Way

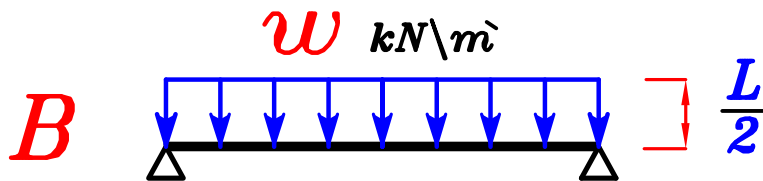
Ⓐ Two beams only.

1- (Long Direction)

∴ الكمره تحمل طول من البلاطه = $\frac{L}{2}$

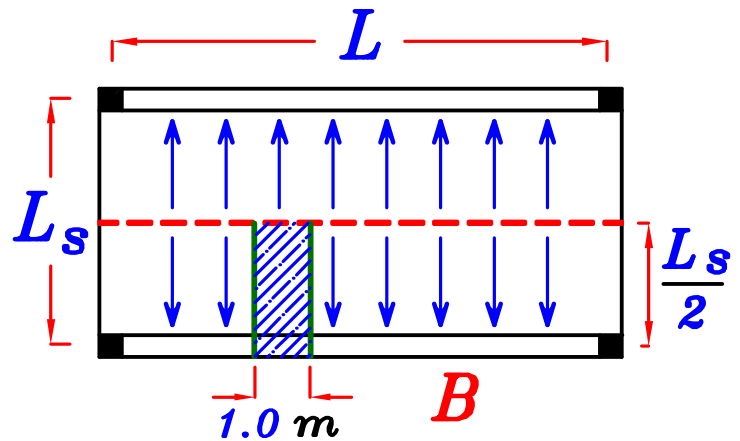


$$W = o.w.(beam) + walls + w_s \frac{L}{2} \text{ kN}\backslash\text{m}^{'}$$

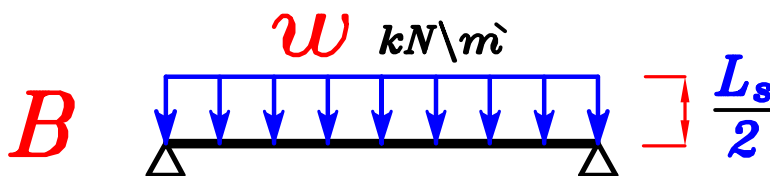


2- (Short Direction)

∴ الكمره تحمل طول من البلاطه = $\frac{L_s}{2}$



$$W = o.w.(beam) + walls + w_s \frac{L_s}{2} \text{ kN}\backslash\text{m}^{'}$$



⑥ Four beams.

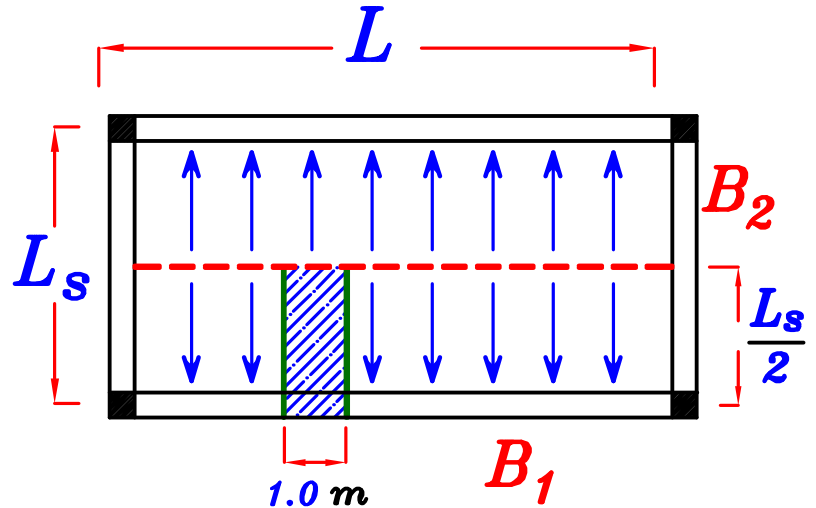
شرط لكي تكون البلاطة **One Way Slab**

$$\frac{L}{L_s} > 2.0$$

و بها ٤ كمرات يجب أن يكون

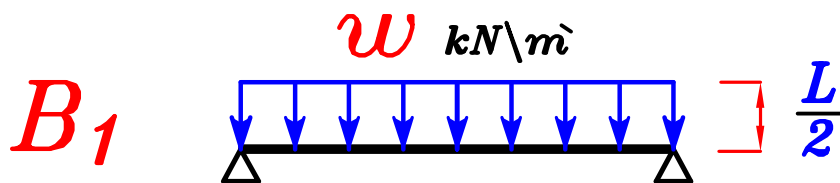
L = Longer Length

L_s = Shorter Length



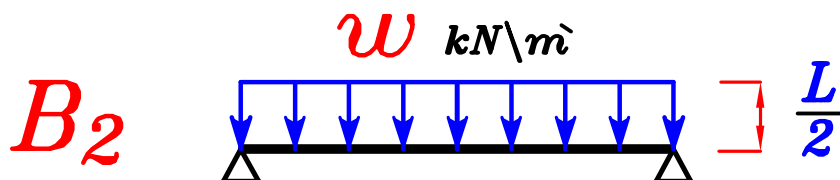
B_1 الكمره تحمل طول $\frac{L_s}{2}$ من البلاطة

$$w = o.w. (beam) + walls + w_s \frac{L_s}{2} \text{ kN/m}$$

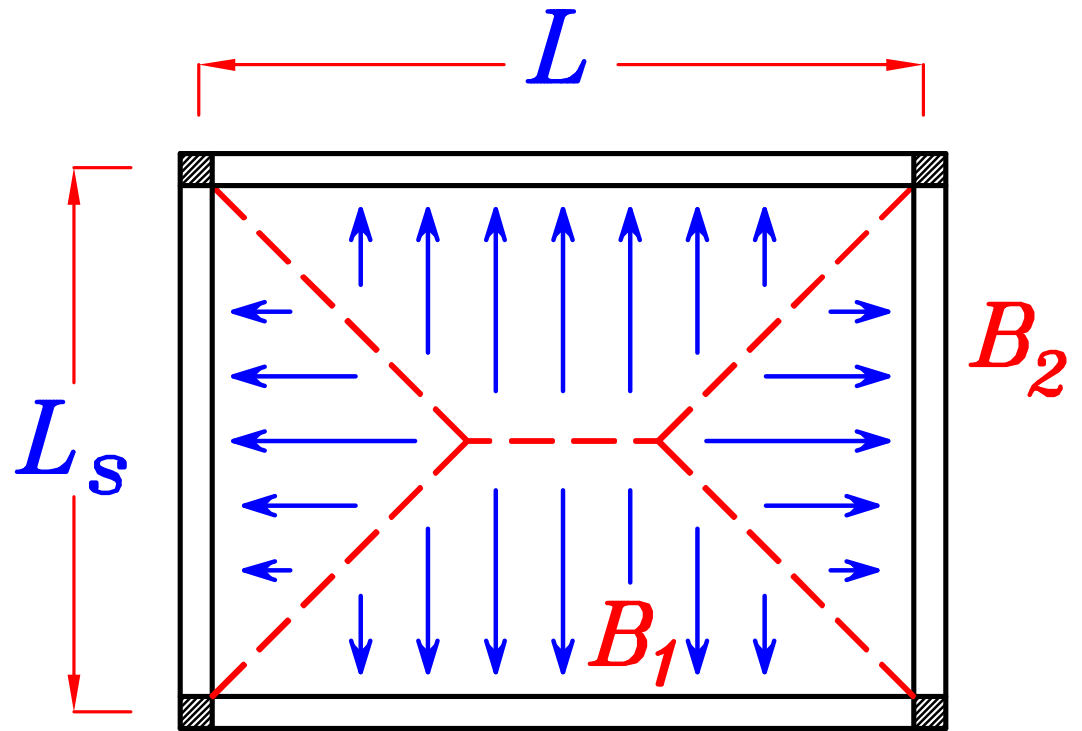


B_2 الكمره لا تحمل أى شئ من البلاطة

$$w = o.w. (beam) + walls \text{ kN/m}$$



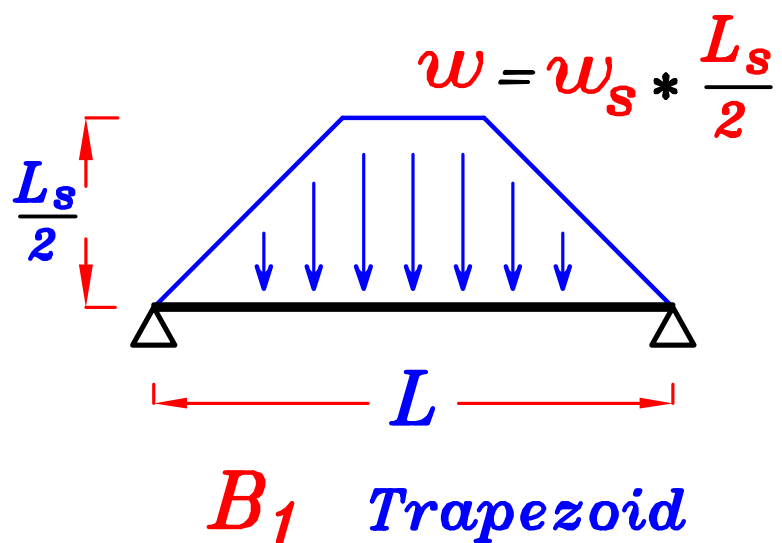
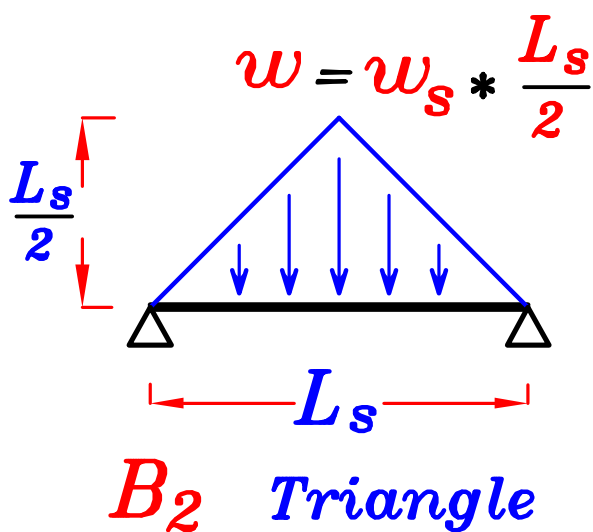
③ Two Way Slab.



البلاطات الـ *Two way* تكون محموله على ٤ كمرات

$$\frac{L}{L_s} \leq 2.0 \quad \text{و يجب أن يكون}$$

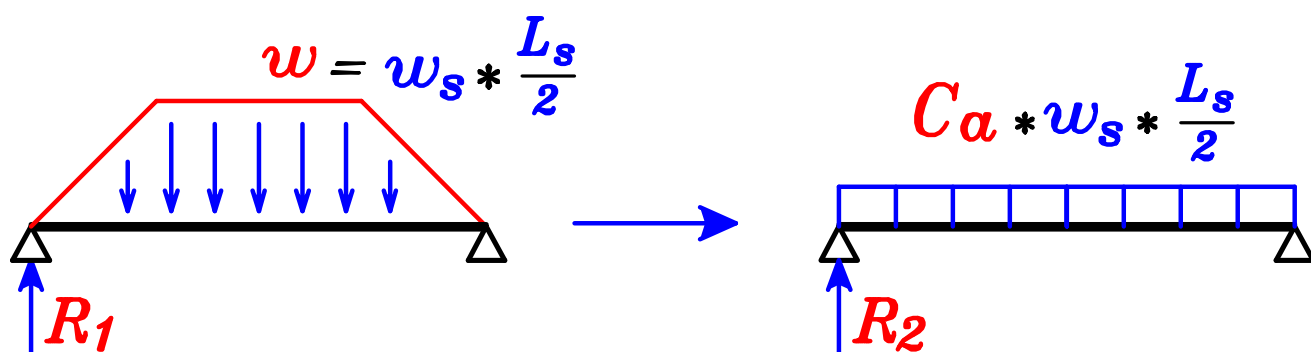
و يذهب الحمل على شكل مثلث إلى الكمره القصيره .
و على شكل شبه منحرف إلى الكمره الطويله .



و لكي نستطيع أن نصمم هذه الكمرات يجب أن نحسب ال **moment**, **shear** لذلك نحول هذه الأشكال إلى شكل مستطيل **uniform Load** و ذلك بأن نضرب قيمة **w** (حيث $w = w_s * \frac{L_s}{2}$) في **Factor** مثل C_a لكي يعطى **Reaction** مساوى لل **Reaction** الموجود فى الأشكال الأخرى. و أن نضرب **w** (حيث $w = w_s * \frac{L_s}{2}$) في **Factor** مثل C_e لكي يعطى **moment** مساوى لأكبر **moment** موجود فى الأشكال الأخرى.

* لتحديد قيم ال C_a

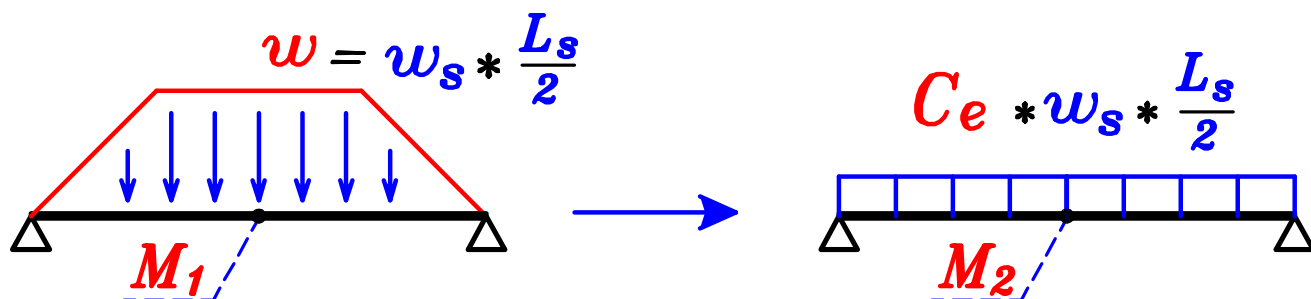
نساوى **Reaction** الحمل الاصلى R_1 بـ **Reaction** الحمل المكافئ R_2



$$R_1 = R_2 \rightarrow C_a = \checkmark$$

* لتحديد قيم ال C_e

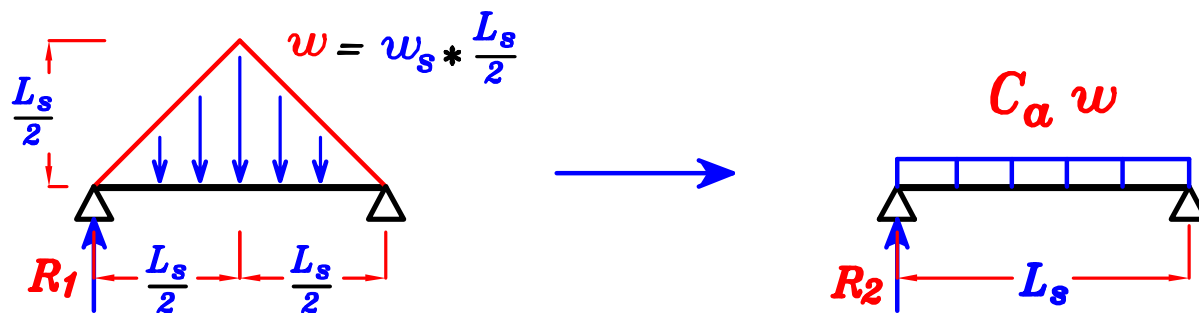
نساوى **moment** الحمل الاصلى M_1 بـ **moment** الحمل المكافئ M_2



$$M_1 = M_2 \rightarrow C_e = \checkmark$$

Triangular Load on Simple Span.

① Load For Shear.

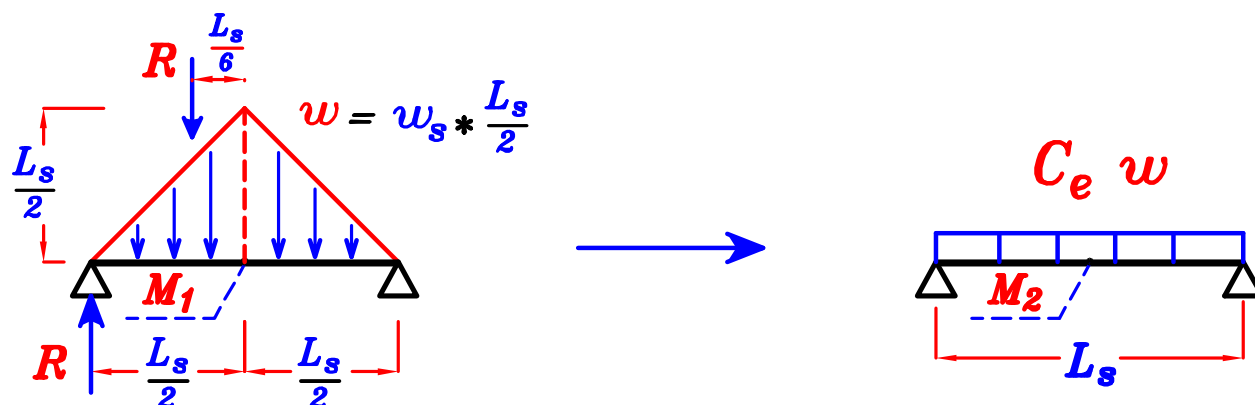


$$R_1 = \frac{\text{Total Load}}{2} = \frac{(\frac{1}{2}) * w * L_s}{2} = \frac{w * L_s}{4}$$

$$R_2 = \frac{(C_a * w) * L_s}{2}$$

$$\therefore R_1 = R_2 \quad \therefore \frac{w * L_s}{4} = \frac{(C_a * w) * L_s}{2} \longrightarrow \boxed{C_a = \frac{1}{2}}$$

② Load For Moment.



$$R = \frac{\text{Total Load}}{2} = \frac{(\frac{1}{2}) * w * L_s}{2} = \frac{w * L_s}{4}$$

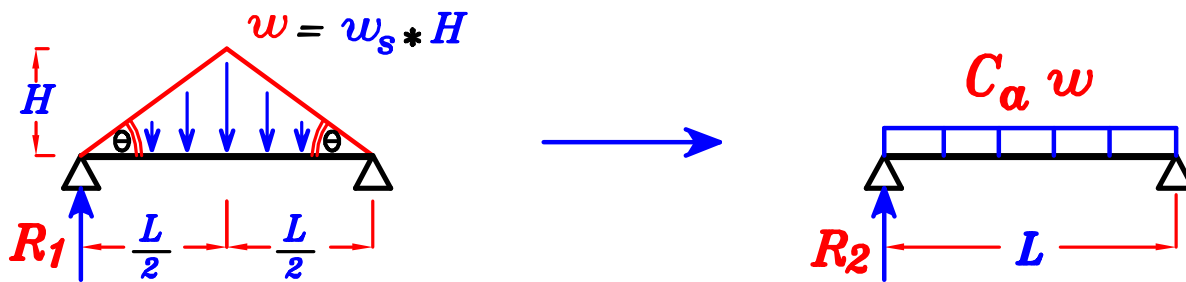
$$M_1 = R * \frac{L_s}{2} - R * \frac{L_s}{6} = R * \frac{L_s}{3} = \frac{w * L_s}{4} * \frac{L_s}{3} = \frac{w * L_s^2}{12}$$

$$M_2 = \frac{(C_e * w) * L_s^2}{8}$$

$$\therefore M_1 = M_2 \quad \therefore \frac{w * L_s^2}{12} = \frac{(C_e * w) * L_s^2}{8} \longrightarrow \boxed{C_e = \frac{2}{3}}$$

Triangular Load with equal angles.

① Load For Shear.

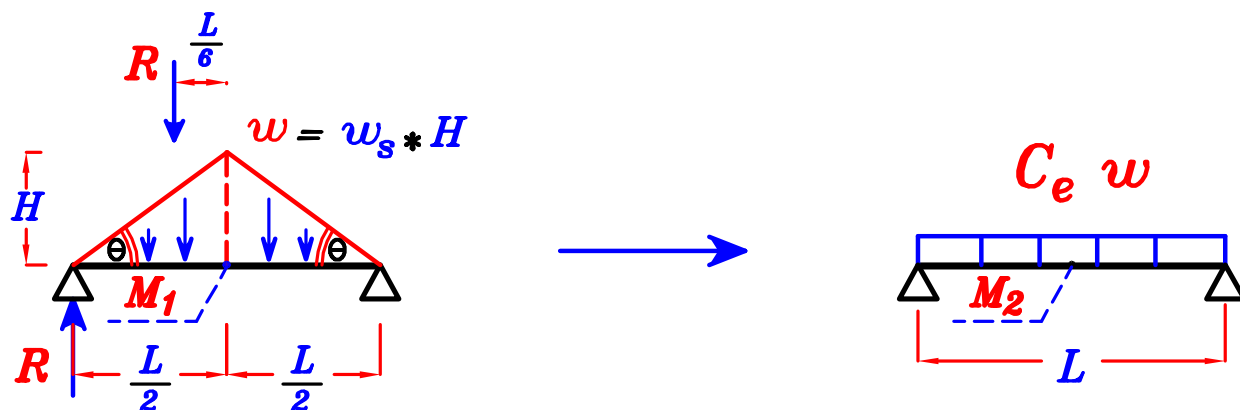


$$R_1 = \frac{\text{Total Load}}{2} = \frac{(1/2) * w * L}{2} = \frac{w * L}{4}$$

$$R_2 = \frac{(C_a * w) * L}{2}$$

$$\therefore R_1 = R_2 \quad \therefore \frac{w * L}{4} = \frac{(C_a * w) * L}{2} \longrightarrow \boxed{C_a = \frac{1}{2}}$$

② Load For Moment.



$$R = \frac{\text{Total Load}}{2} = \frac{(1/2) * w * L}{2} = \frac{w * L}{4}$$

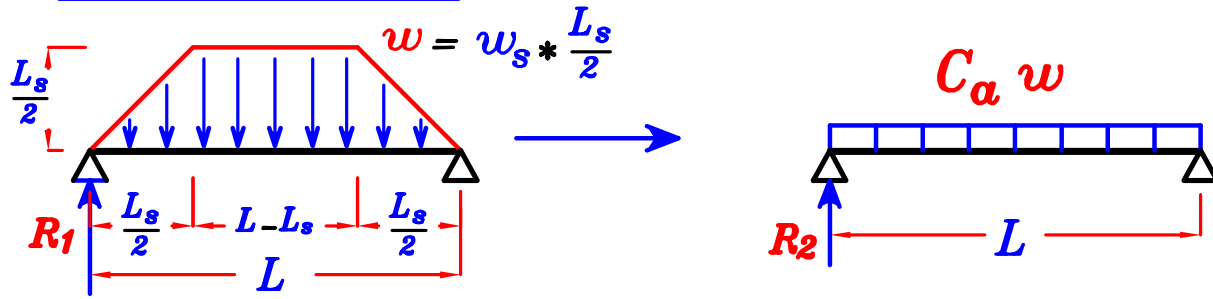
$$M_1 = R * \frac{L}{2} - R * \frac{L}{6} = R * \frac{L}{3} = \frac{w * L}{4} * \frac{L}{3} = \frac{w * L^2}{12}$$

$$M_2 = \frac{(C_e * w) * L^2}{8}$$

$$\therefore M_1 = M_2 \quad \therefore \frac{w * L^2}{12} = \frac{(C_e * w) * L^2}{8} \longrightarrow \boxed{C_e = \frac{2}{3}}$$

Trapezoidal Load on Simple Span.

① Load For Shear.

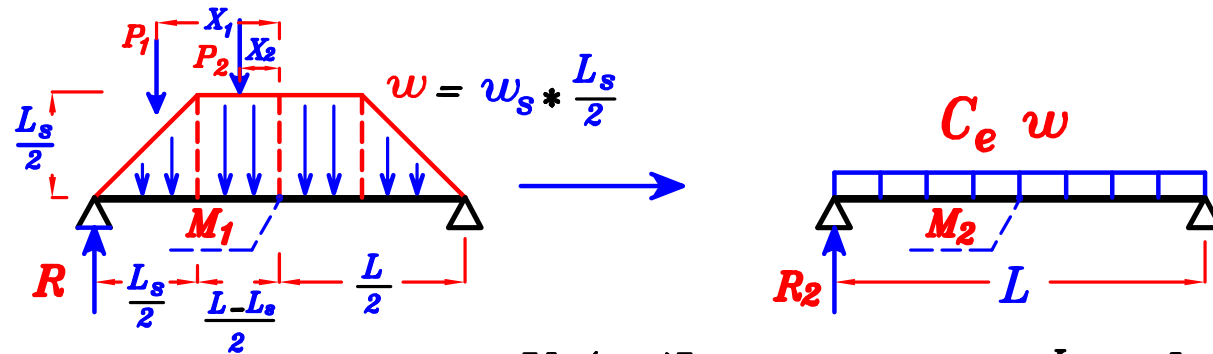


$$R_1 = (\frac{1}{2}) \text{ Total Load} = (\frac{1}{2}) \left[\frac{L + (L - L_s)}{2} \right] w = \left(\frac{2L - L_s}{4} \right) w = \frac{wL}{2} - \frac{wL_s}{4}$$

$$R_2 = \frac{(C_\alpha * w) * L}{2}$$

$$\therefore R_1 = R_2 \quad \therefore \frac{wL}{2} - \frac{wL_s}{4} = \frac{(C_\alpha * w) * L}{2} \quad \rightarrow \quad \boxed{C_\alpha = 1 - \frac{1}{2} \left(\frac{L_s}{L} \right)}$$

② Load For Moment.



$$R = (\frac{1}{2}) \text{ Total Load} = (\frac{1}{2}) \left[\frac{L + (L - L_s)}{2} \right] w = \left(\frac{2L - L_s}{4} \right) w = \frac{wL}{2} - \frac{wL_s}{4}$$

$$P_1 = (\frac{1}{2}) * w * \frac{L_s}{2} = \frac{w * L_s}{4}, \quad X_1 = \frac{L - L_s}{2} + \frac{L_s}{6} = \frac{L}{2} - \frac{L_s}{3}$$

$$P_2 = w \left(\frac{L - L_s}{2} \right) = \frac{wL}{2} - \frac{wL_s}{2}, \quad X_2 = \frac{L - L_s}{4} = \frac{L}{4} - \frac{L_s}{4}$$

$$M_1 = R * \frac{L}{2} - P_1 * X_1 - P_2 * X_2$$

$$\begin{aligned} M_1 &= \left(\frac{wL}{2} - \frac{wL_s}{4} \right) * \frac{L}{2} - \left(\frac{w * L_s}{4} \right) \left(\frac{L}{2} - \frac{L_s}{3} \right) - \left(\frac{wL}{2} - \frac{wL_s}{2} \right) \left(\frac{L}{4} - \frac{L_s}{4} \right) \\ &= \frac{wL^2}{4} - \frac{wLL_s}{8} - \frac{wLL_s}{8} + \frac{wL_s^2}{12} - \frac{wL^2}{8} + \frac{wLL_s}{8} + \frac{wLL_s}{8} - \frac{wL_s^2}{8} \\ &= \left(\frac{wL^2}{4} - \frac{wL^2}{8} \right) + \left(\frac{wL_s^2}{12} - \frac{wL_s^2}{8} \right) = \frac{wL^2}{8} - \frac{wL_s^2}{24} \end{aligned}$$

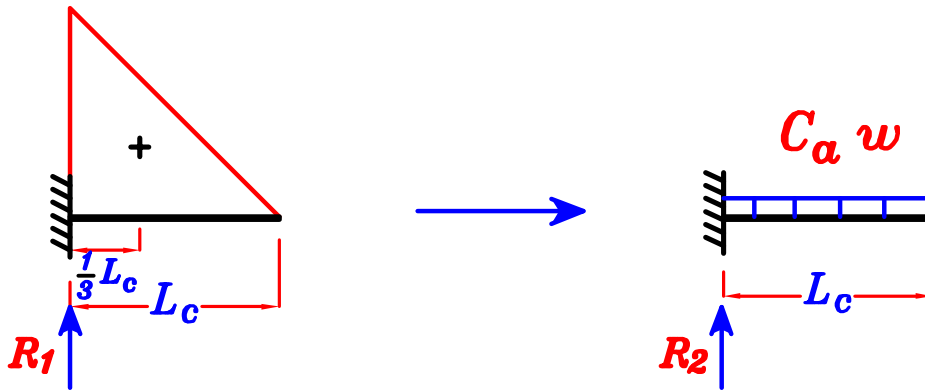
$$\therefore M_1 = M_2 \quad \therefore \frac{wL^2}{8} - \frac{wL_s^2}{24} = \frac{(C_e * w) * L^2}{8} \quad \therefore L^2 - \frac{L_s^2}{3} = C_e * L^2$$

$$\text{Divide by } (L^2) \quad \therefore C_e = \frac{1}{3} \left(3 - \frac{L_s}{L} \right)^2 \quad \rightarrow \quad \boxed{C_e = 1 - \frac{1}{3} \left(\frac{L_s}{L} \right)^2}$$

Triangular Load on Cantilever.

① Load For Shear.

$$w = w_s * L_c$$



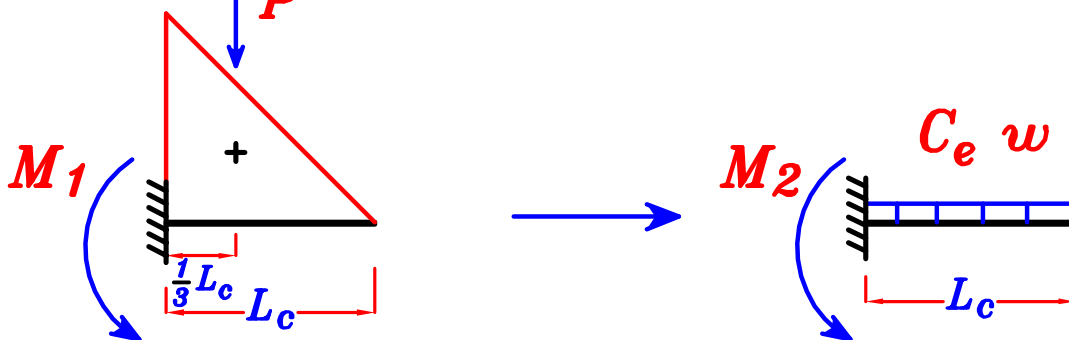
$$R_1 = \text{Total Load} = (1/2) * w * L_c = \frac{w * L_c}{2}$$

$$R_2 = (C_a * w) * L_c$$

$$\therefore R_1 = R_2 \quad \therefore \frac{w * L_c}{2} = (C_a * w) * L_c \quad \longrightarrow \quad \boxed{C_a = \frac{1}{2}}$$

② Load For Moment.

$$w = w_s * L_c$$



$$P = \text{Total Load} = (1/2) * w * L_c = \frac{w * L_c}{2}$$

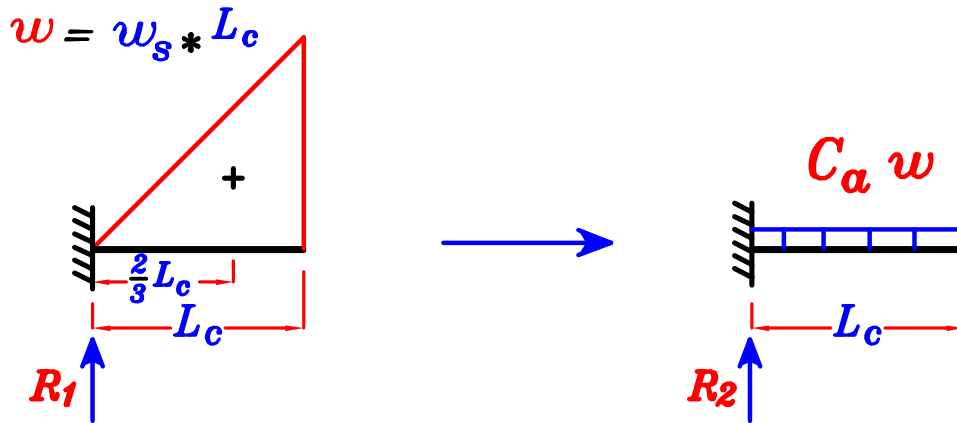
$$M_1 = P * \frac{1}{3} L_c = \frac{w * L_c}{2} * \frac{1}{3} L_c = \frac{w * L_c^2}{6}$$

$$M_2 = \frac{(C_e * w) * L_c^2}{2}$$

$$\therefore M_1 = M_2 \quad \therefore \frac{w * L_c^2}{6} = \frac{(C_e * w) * L_c^2}{2} \quad \longrightarrow \quad \boxed{C_e = \frac{1}{3}}$$

Triangular Load on Cantilever.

① Load For Shear.

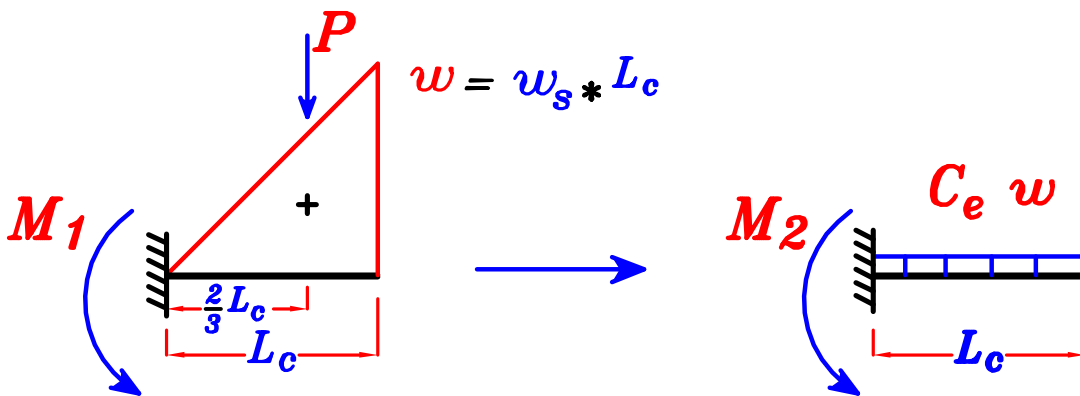


$$R_1 = \text{Total Load} = (1/2) * w * L_c = \frac{w * L_c}{2}$$

$$R_2 = (C_a * w) * L_c$$

$$\therefore R_1 = R_2 \quad \therefore \frac{w * L_c}{2} = (C_a * w) * L_c \quad \longrightarrow \quad \boxed{C_a = \frac{1}{2}}$$

② Load For Moment.



$$P = \text{Total Load} = (1/2) * w * L_c = \frac{w * L_c}{2}$$

$$M_1 = P * \frac{2}{3} L_c = \frac{w * L_c}{2} * \frac{2}{3} L_c = \frac{w * L_c^2}{3}$$

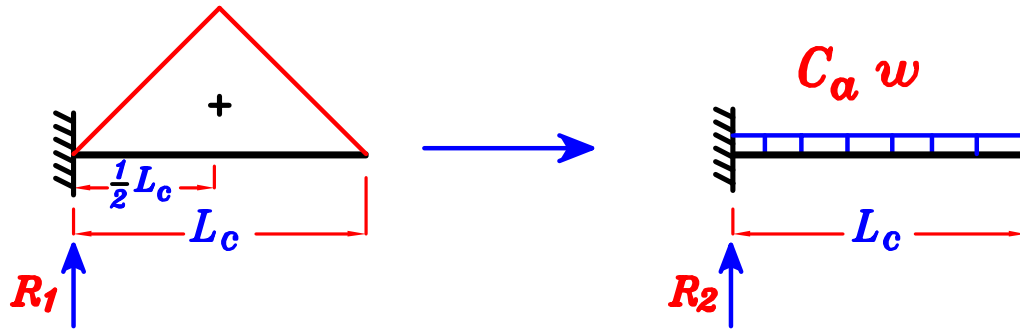
$$M_2 = \frac{(C_e * w) * L_c^2}{2}$$

$$\therefore M_1 = M_2 \quad \therefore \frac{w * L_c^2}{3} = \frac{(C_e * w) * L_c^2}{2} \quad \longrightarrow \quad \boxed{C_e = \frac{2}{3}}$$

Triangular Load on Cantilever.

① Load For Shear.

$$w = w_s * \frac{L_c}{2}$$

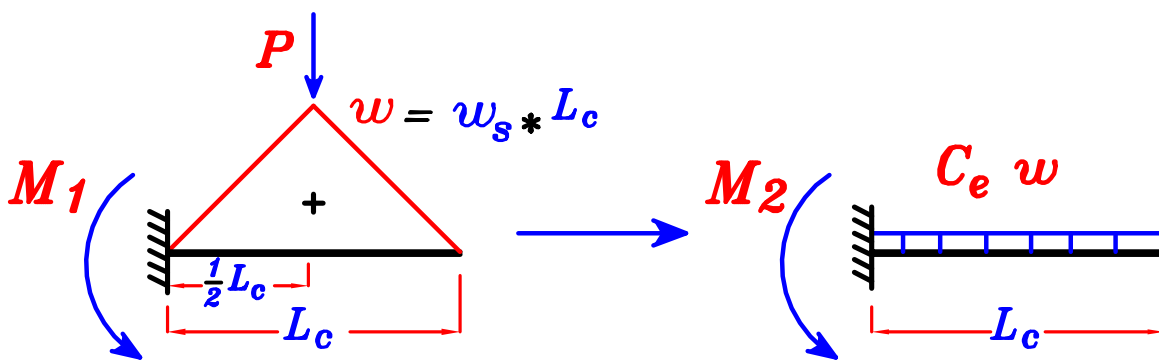


$$R_1 = \text{Total Load} = (1/2) * w * L_c = \frac{w * L_c}{2}$$

$$R_2 = (C_a * w) * L_c$$

$$\therefore R_1 = R_2 \quad \therefore \frac{w * L_c}{2} = (C_a * w) * L_c \quad \longrightarrow \quad \boxed{C_a = \frac{1}{2}}$$

② Load For Moment.



$$P = \text{Total Load} = (1/2) * w * L_c = \frac{w * L_c}{2}$$

$$M_1 = P * \frac{1}{2} L_c = \frac{w * L_c}{2} * \frac{1}{2} L_c = \frac{w * L_c^2}{4}$$

$$M_2 = \frac{(C_e * w) * L_c^2}{2}$$

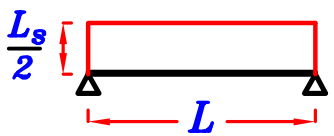
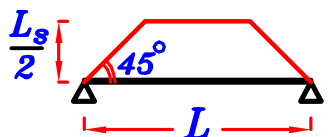
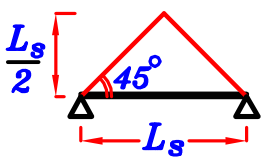
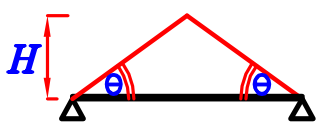
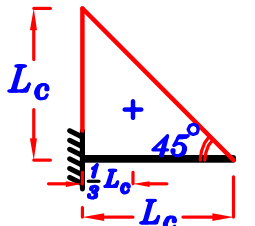
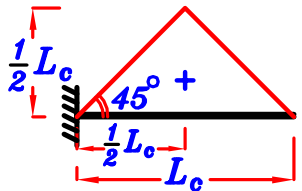
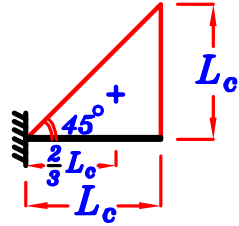
$$\therefore M_1 = M_2 \quad \therefore \frac{w * L_c^2}{4} = \frac{(C_e * w) * L_c^2}{2} \quad \longrightarrow \quad \boxed{C_e = \frac{1}{2}}$$

Equivalent Load Form Slab. =

$$\text{Factor} * w_s * (\text{Max. Load Height})$$

Where that Factor $C_a \rightarrow$ For Shear.

$C_e \rightarrow$ For Moment.

Shape of Load	C_a	C_e	Equivalent Load From the Slab
	1.0	1.0	$w_s \frac{L_s}{2}$
	$1 - \frac{1}{2} \left(\frac{L_s}{L} \right)$	$1 - \frac{1}{3} \left(\frac{L_s}{L} \right)^2$	$C_a w_s \frac{L_s}{2}$ $C_e w_s \frac{L_s}{2}$
	$\frac{1}{2}$	$\frac{2}{3}$	$C_a w_s \frac{L_s}{2}$ $C_e w_s \frac{L_s}{2}$
	$\frac{1}{2}$	$\frac{2}{3}$	$C_a w_s H$ $C_e w_s H$
	$\frac{1}{2}$	$\frac{1}{3}$	$C_a w_s L_c$ $C_e w_s L_c$
	$\frac{1}{2}$	$\frac{1}{2}$	$C_a w_s \frac{L_c}{2}$ $C_e w_s \frac{L_c}{2}$
	$\frac{1}{2}$	$\frac{2}{3}$	$C_a w_s L_c$ $C_e w_s L_c$
Any Other Shape	_____	_____	$\frac{\Sigma \text{area}}{\text{Span}} * w_s$

C_e , C_a هي **Factors** تستخدم فقط تحت عدة شروط :

- ١- أن يكون كل الحمل بين ال **2 Supports** بأكملهم .
- ٢- أن يكون شكل الحمل كما في الأشكال السابقة في الجدول .

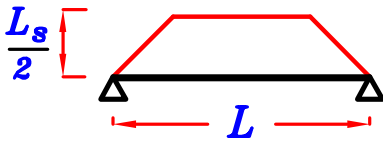
و إذا لم تتوافر هذه الشروط نستخدم طريقه $\frac{\sum \text{area}}{\text{span}}$

Where the equivalent load From the slab = $\frac{\sum \text{area}}{\text{span}} * w_s = \checkmark \text{ kN/m}$

حيث $\sum \text{area}$ هو مجموع مساحات الأحمال الواقعة بين ال **2 Supports** و ال span هي المسافه بين ال **2 Supports** .

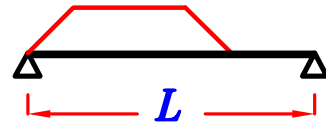
Example.

Get the Loads on the beams at the Following cases.



use C_a, C_e

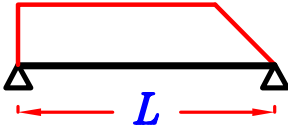
$$w = 0.W. + \text{walls} + C_a w_s \frac{L_s}{2}$$



(The load is not Covering all the span)

\therefore use $\frac{\sum \text{area}}{\text{span}}$

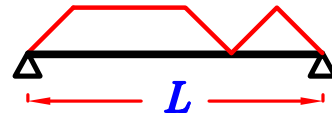
$$\therefore w = 0.W. + \text{walls} + \frac{\sum \text{area}}{L} * w_s$$



(The shape not in the table)

\therefore use $\frac{\sum \text{area}}{\text{span}}$

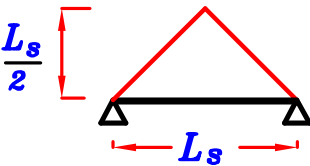
$$\therefore w = 0.W. + \text{walls} + \frac{\sum \text{area}}{L} * w_s$$



(The load is not Covering all the span)

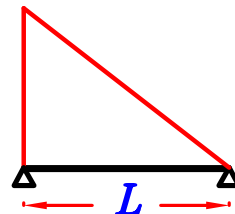
\therefore use $\frac{\sum \text{area}}{\text{span}}$

$$\therefore w = 0.W. + \text{walls} + \frac{\sum \text{area}}{L} * w_s$$



use C_a, C_e

$$w = 0.W. + \text{walls} + C_a w_s \frac{L_s}{2}$$



(The shape not in the table)

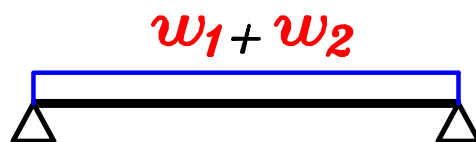
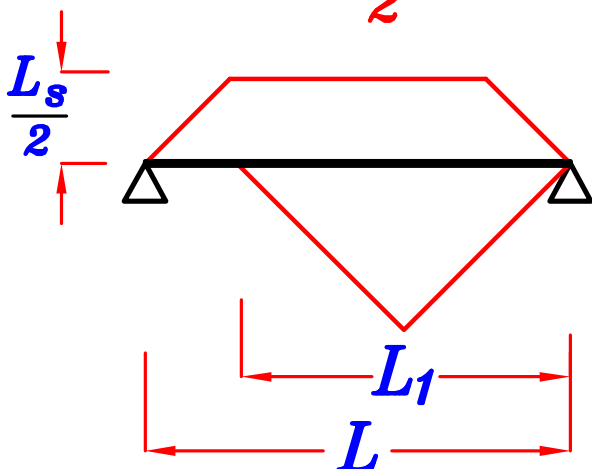
\therefore use $\frac{\sum \text{area}}{\text{span}}$

$$\therefore w = 0.W. + \text{walls} + \frac{\sum \text{area}}{L} * w_s$$

Notes.

عند وجود أكثر من حمل على الكمره نحسب كل حمل بمفرده w_1, w_2 و هناك حالتان :

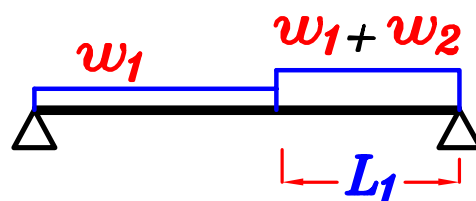
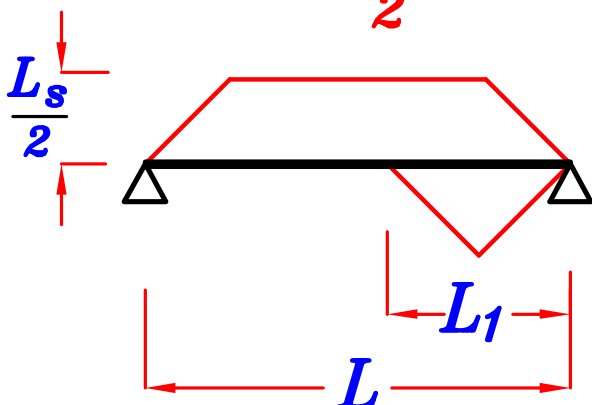
① IF $L_1 \geq \frac{L}{2}$



$$w_1 = C_a w_s \frac{L_s}{2}$$

$$w_2 = \frac{\sum \text{area} \triangle}{L} * w_s$$

② IF $L_1 < \frac{L}{2}$



$$w_1 = C_a w_s \frac{L_s}{2}$$

$$w_2 = \frac{\sum \text{area} \triangle}{L_1} * w_s$$

ملحوظه :

عند وجود كمره محموله على كمره أخرى .

يجب أولاً أن نحسب الأحمال على الكمره المحموله و نحدد لها ال **Reaction**

عن طريق ال **Load For Shear** أي باستخدام C_a

و بعد تحديد ال **Reaction** يُعكس على الكمره الاخرى (الحامله) .

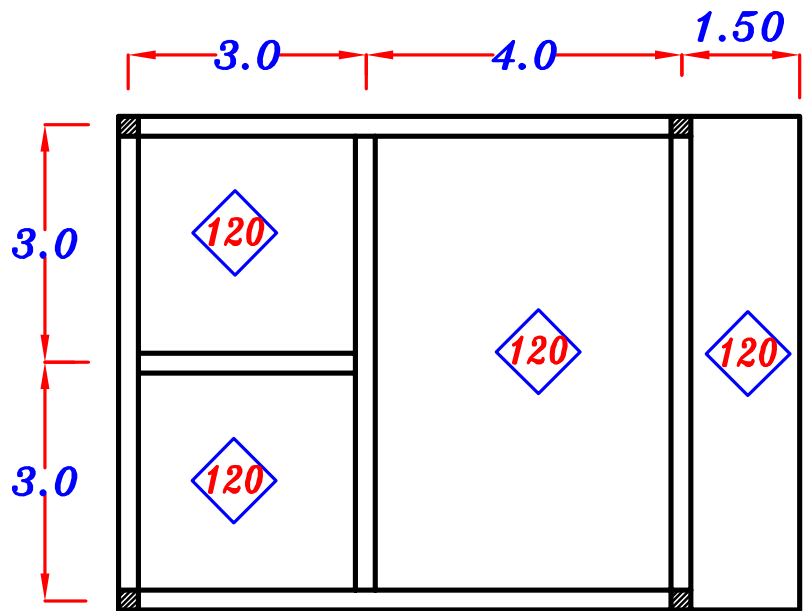
Example.

$$t_s = 120 \text{ mm}$$

$$F.C. = 1.50 \text{ kN/m}^2$$

$$L.L. = 2.0 \text{ kN/m}^2$$

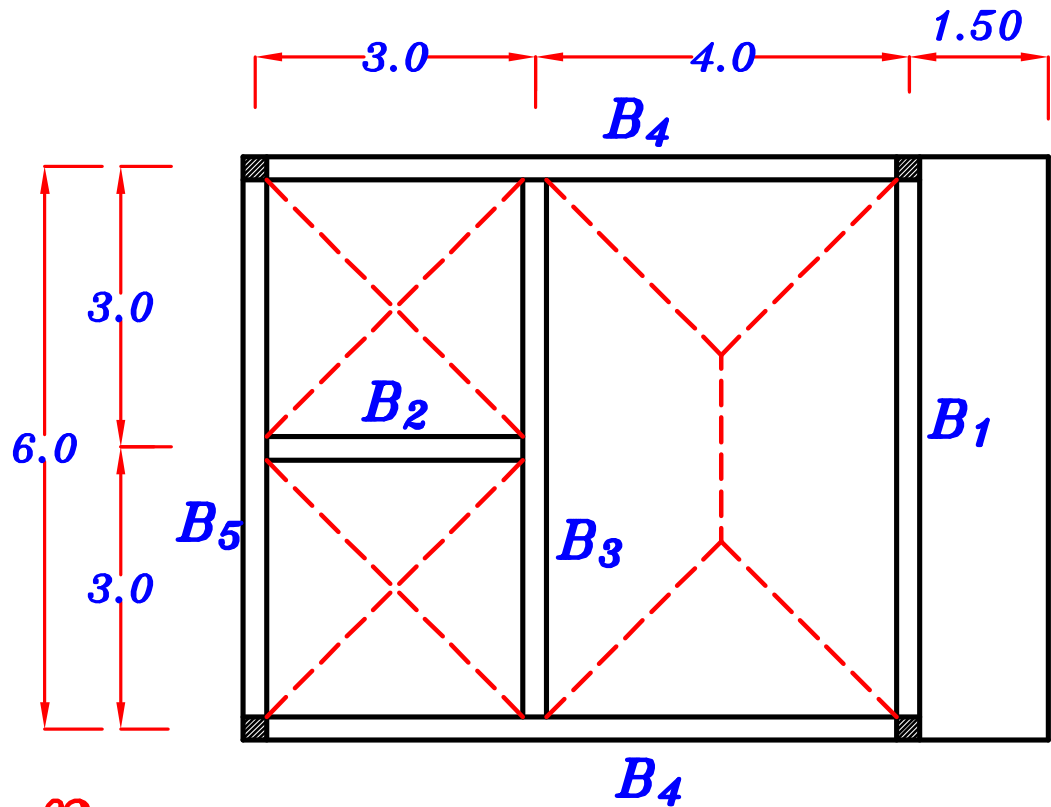
$$\begin{aligned} O.W. \text{ of beams} \\ = 3.0 \text{ kN/m} \end{aligned}$$



REQ.

Draw S.F.D. & B.M.D. For all beams.

Solution.



$$w_s = g_s + p_s$$

$$= (t_s * \delta_c + F.C.) + L.L.$$

$$= (0.12 * 25 + 1.50) + 2.0 = 6.50 \text{ kN/m}^2$$

$$w_s = 6.50 \text{ kN/m}^2$$

B₁

For Trapezoid

$$C_a = 1 - \frac{1}{2} \left(\frac{L_s}{L} \right) = 1 - \frac{1}{2} \left(\frac{4}{6} \right) = \frac{2}{3}$$

$$C_e = 1 - \frac{1}{3} \left(\frac{L_s}{L} \right)^2 = 1 - \frac{1}{3} \left(\frac{4}{6} \right)^2 = 0.85$$

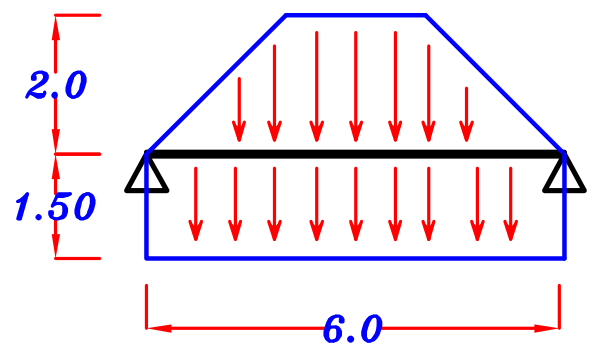
For Rectangle $C_a = C_e = 1$

Load For Shear w_a

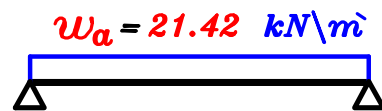
$$w_a = 0.W. + w_s L_c + C_a w_s \frac{L_s}{2} = 3.0 + (6.50)(1.5) + \frac{2}{3} (6.50) \left(\frac{4}{2} \right) = 21.42 \text{ kN/m}$$

Load For moment w_e

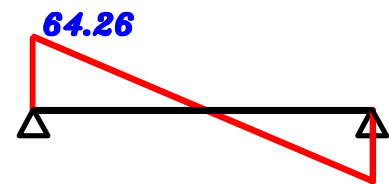
$$w_e = 0.W. + w_s L_c + C_e w_s \frac{L_s}{2} = 3.0 + (6.50)(1.5) + (0.85)(6.50) \left(\frac{4}{2} \right) = 23.80 \text{ kN/m}$$



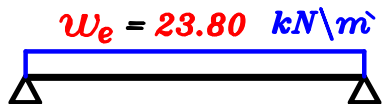
Load For Shear



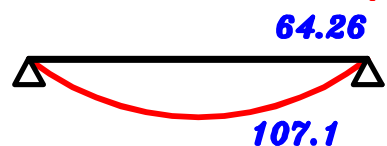
S.F.D.



Load For Moment



B.M.D.



B₂

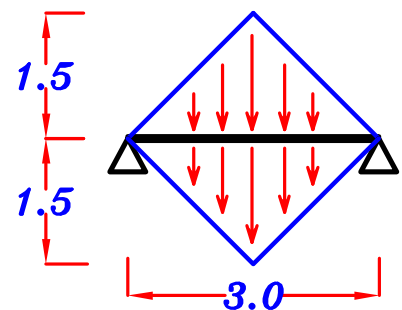
For Triangle $C_a = \frac{1}{2}$, $C_e = \frac{2}{3}$

Load For Shear w_a

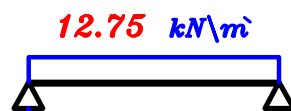
$$w_a = 0.W. + 2 \left(C_a w_s \frac{L_s}{2} \right) = 3.0 + 2 \left(\frac{1}{2} (6.50) \left(\frac{3}{2} \right) \right) = 12.75 \text{ kN/m}$$

Load For moment w_e

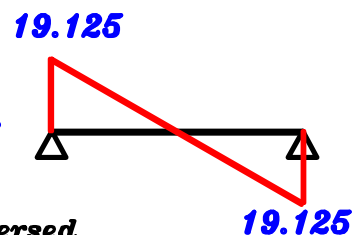
$$w_e = 0.W. + 2 \left(C_e w_s \frac{L_s}{2} \right) = 3.0 + 2 \left(\frac{2}{3} (6.50) \left(\frac{3}{2} \right) \right) = 16.0 \text{ kN/m}$$



Load For Shear

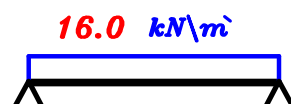


S.F.D.




$R_2 = 19.125 \text{ kN}$ will be reversed on B_3, B_5

Load For Moment



B.M.D.



B₃

For Trapezoid

$$C_a = 1 - \frac{1}{2} \left(\frac{L_s}{L} \right) = 1 - \frac{1}{2} \left(\frac{4}{6} \right) = \frac{2}{3}$$

$$C_e = 1 - \frac{1}{3} \left(\frac{L_s}{L} \right)^2 = 1 - \frac{1}{3} \left(\frac{4}{6} \right)^2 = 0.85$$

For Triangles

$$\frac{\sum \text{area}}{\text{span}} = \frac{2 \left(\frac{1}{2} (3) (1.5) \right)}{6} = 0.75$$

Load For Shear w_a

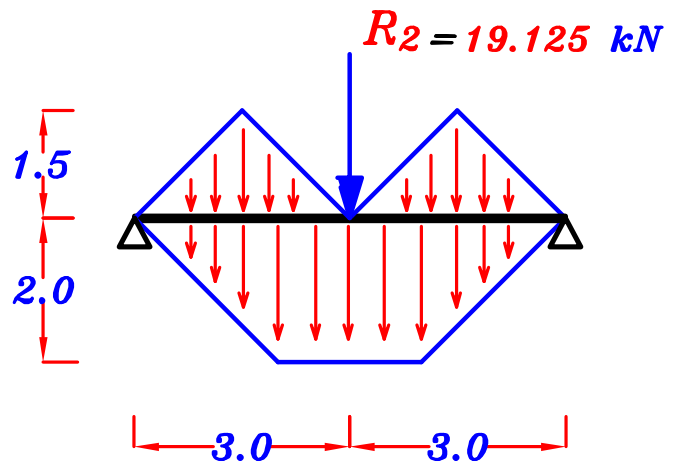
$$w_a = 0.W. + C_a w_s \frac{L_s}{2} + \frac{\sum \text{area}}{\text{span}} * w_s$$

$$w_a = 3.0 + \frac{2}{3} (6.50) \left(\frac{4}{2} \right) + 0.75 (6.50) = 16.54 \text{ kN/m}$$

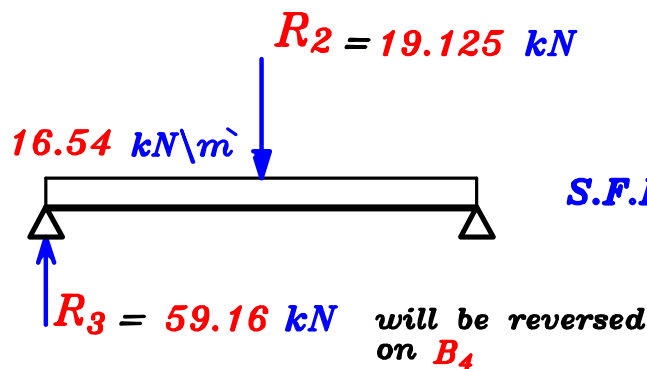
Load For moment w_e

$$w_e = 0.W. + C_e w_s \frac{L_s}{2} + \frac{\sum \text{area}}{\text{span}} * w_s$$

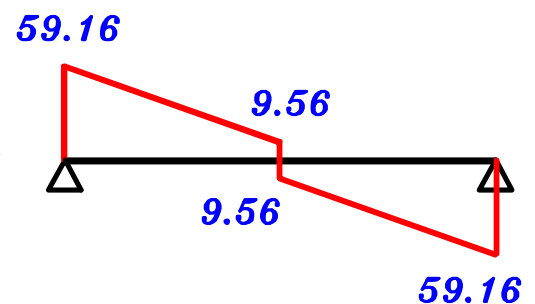
$$w_e = 3.0 + (0.85)(6.50) \left(\frac{4}{2} \right) + 0.75 (6.50) = 18.925 \text{ kN/m}$$



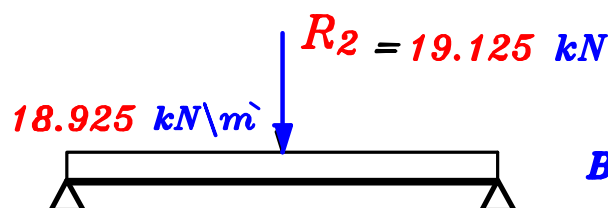
Load For Shear



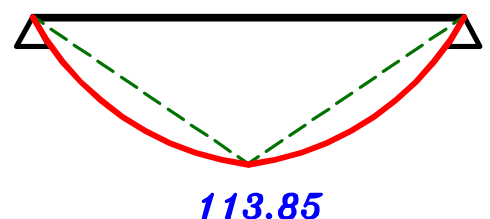
S.F.D.



Load For Moment



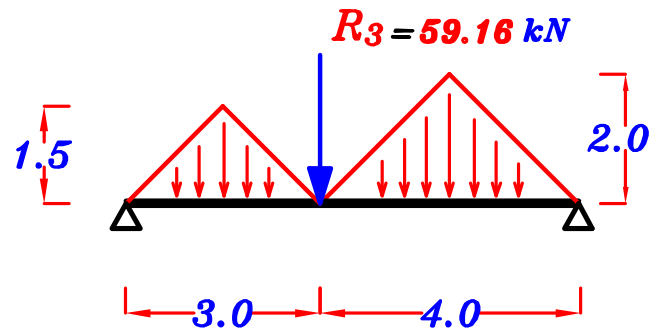
B.M.D.



B₄

For Triangles

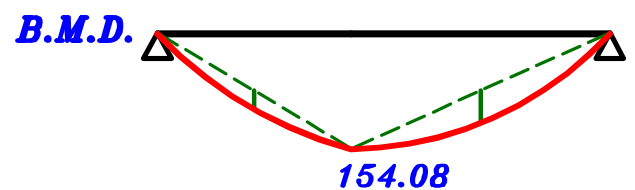
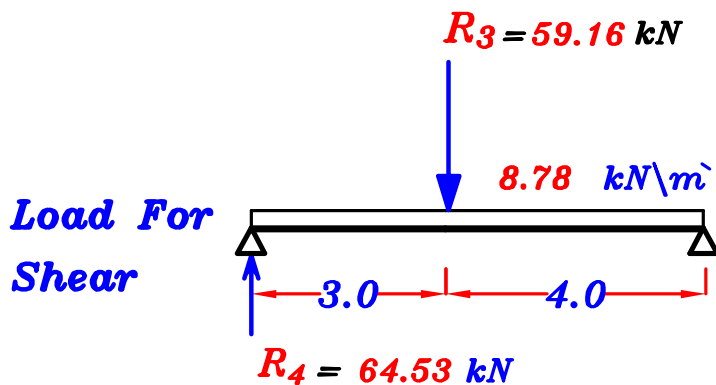
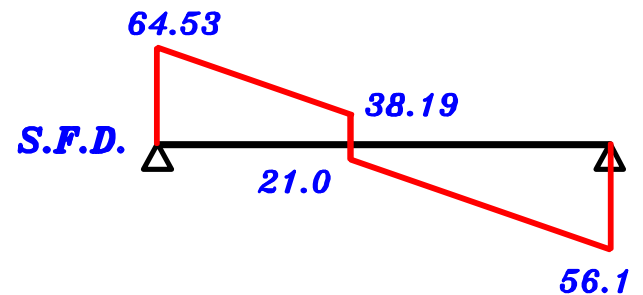
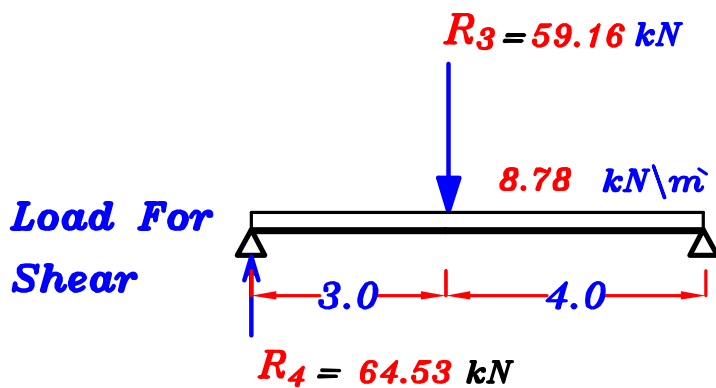
$$\frac{\sum \text{area}}{\text{span}} = \frac{\frac{1}{2}(3)(1.5) + \frac{1}{2}(4)(2)}{7.0} = 0.89$$



Load For Shear = Load For moment

$$w_a = w_e = 0.W. + \frac{\sum \text{area}}{\text{span}} * w_s$$

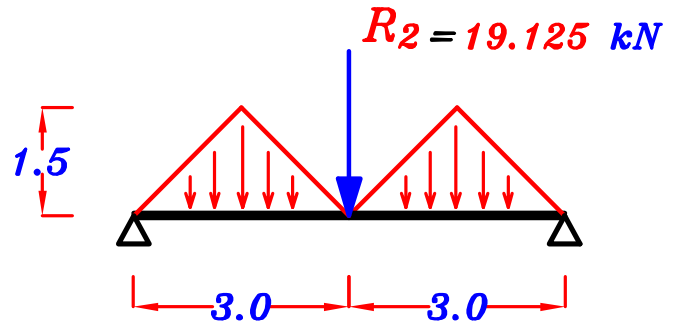
$$= 3.0 + 0.89 (6.50) = 8.78 \text{ kN/m}$$



B₅

For Triangles

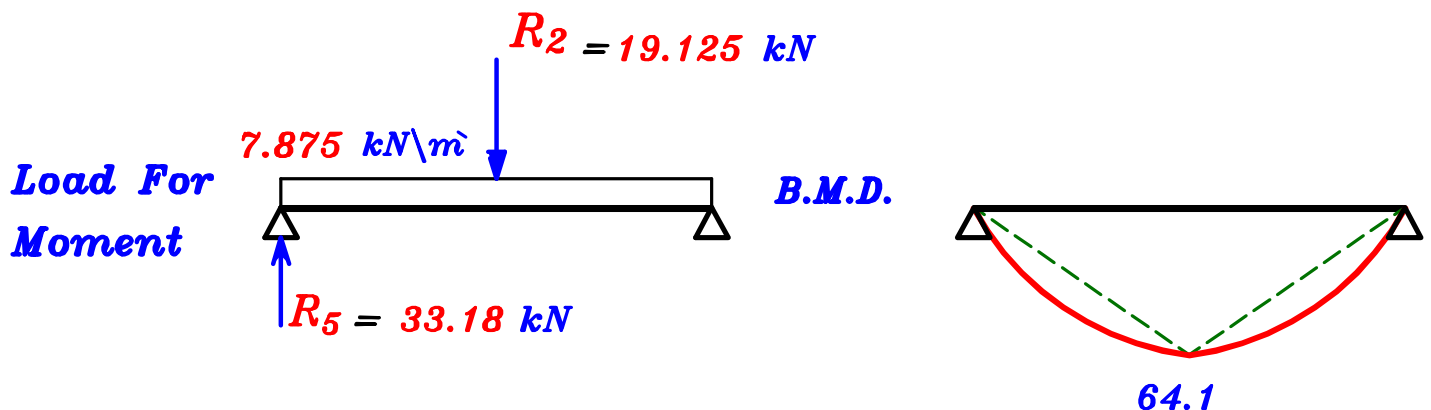
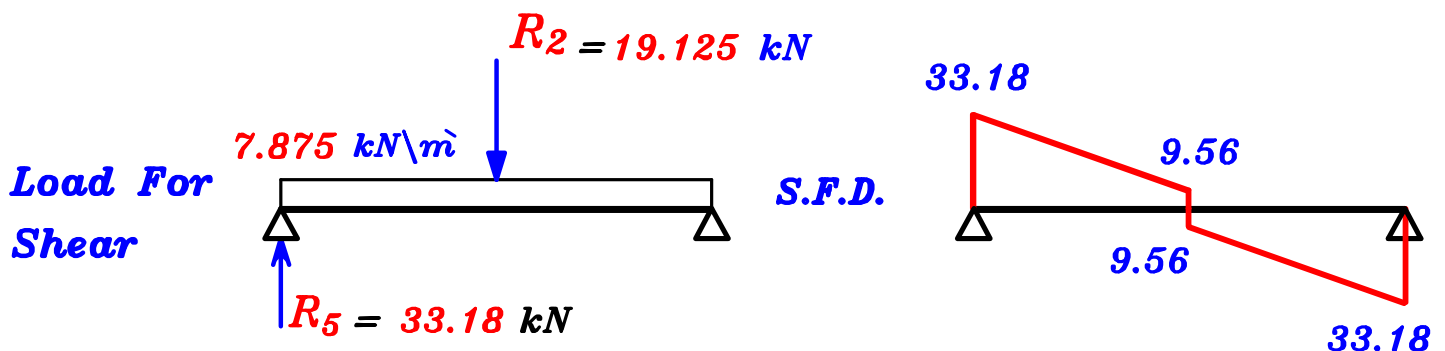
$$\frac{\sum \text{area}}{\text{span}} = \frac{2\left(\frac{1}{2}(3)(1.5)\right)}{6} = 0.75$$



Load For Shear = Load For moment

$$w_a = w_e = 0.W. + \frac{\sum \text{area}}{\text{span}} * w_s$$

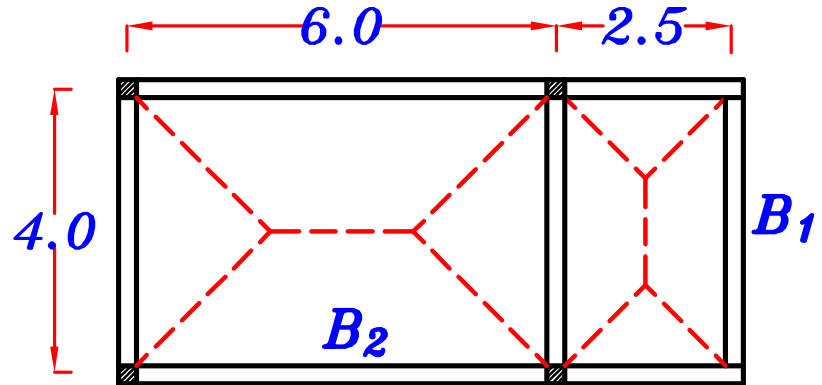
$$= 3.0 + 0.75 (6.50) = 7.875 \text{ kN/m}$$



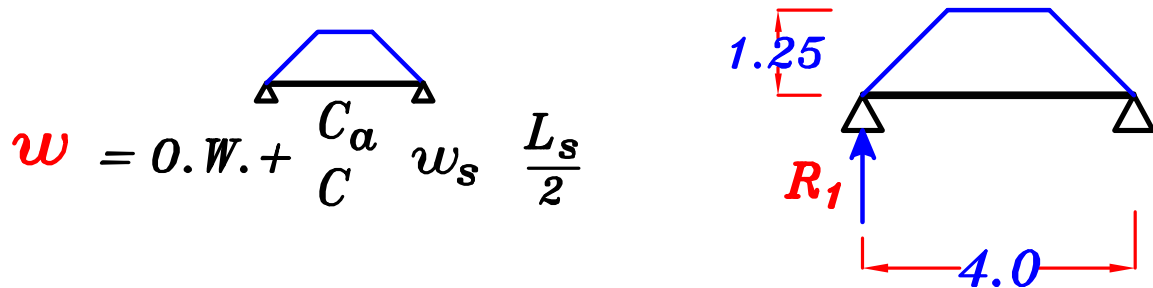
Beams with more than one span.

قاعده هامه عند حساب الاحمال على كمره بها أكثر من $span$ يتم حساب ال w لكل $span$ على حده

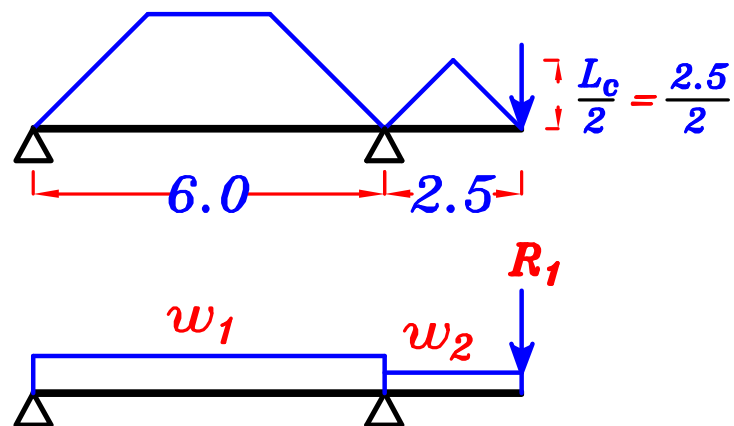
Example.



B_1



B_2

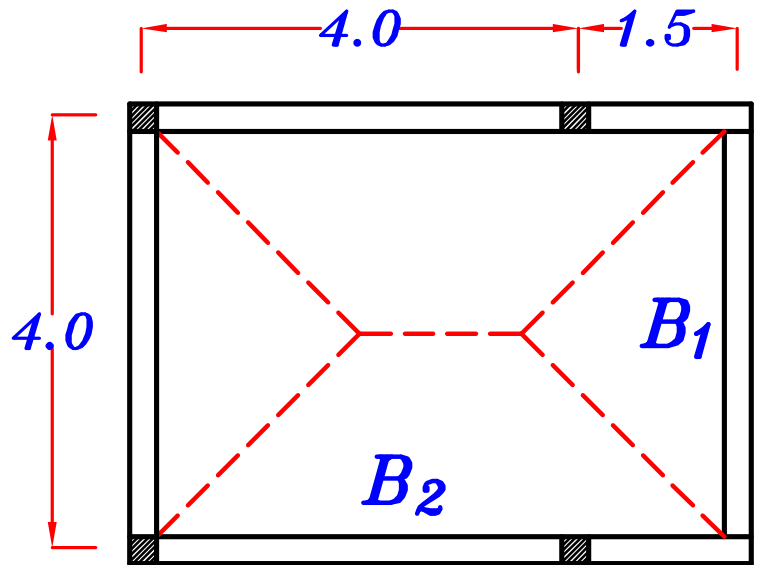
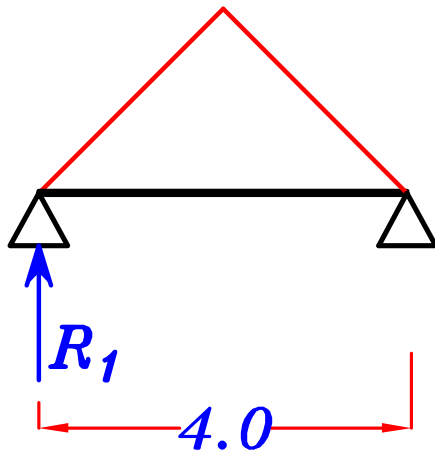


$$w_1 = 0.W. + \frac{C_a}{C_e} w_s \frac{L_s}{2}$$

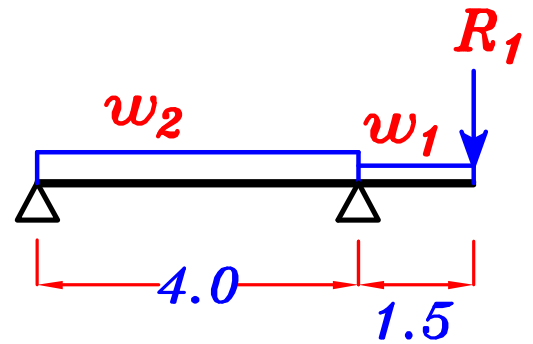
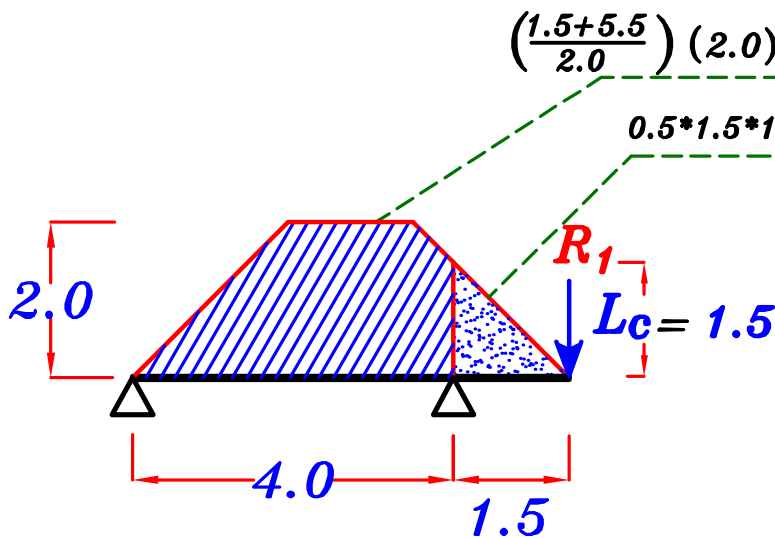
$$w_2 = 0.W. + \frac{C_a}{C_e} w_s \frac{L_c}{2}$$

Example.

B₁



B₂



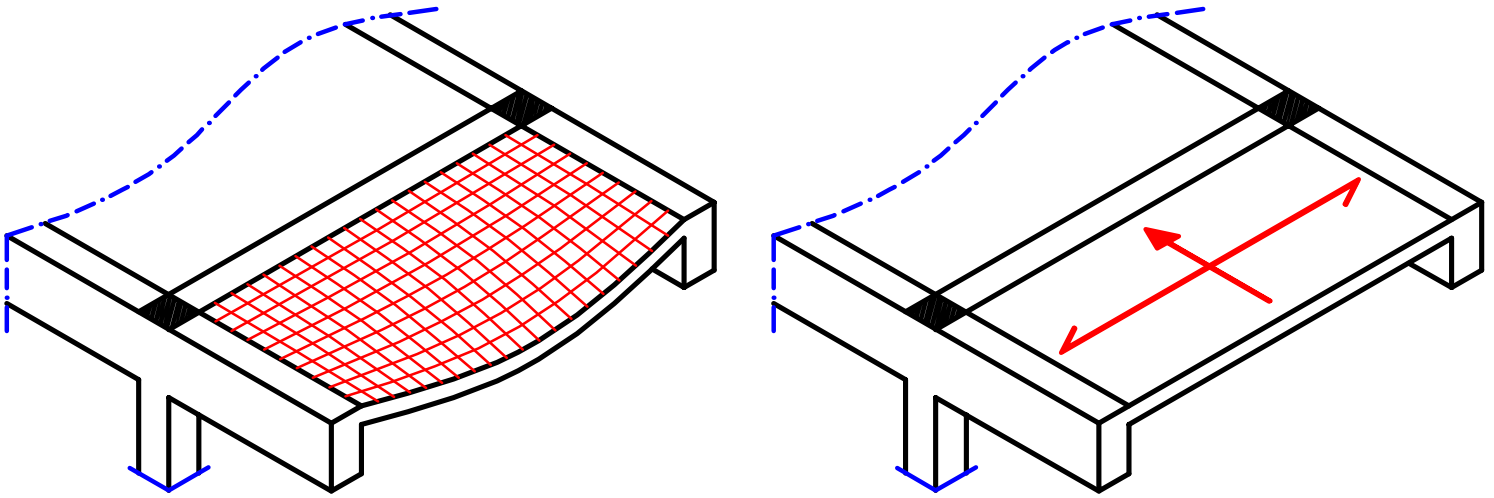
$$w_1 = 0.W. + \frac{C_a}{C_e} w_s L_c$$

where: $L_c = 1.5$

$$w_2 = 0.W. + \frac{\sum \text{area}}{\text{Span}} * w_s = 0.W. + \frac{(5.875)}{(4.0)} * w_s$$

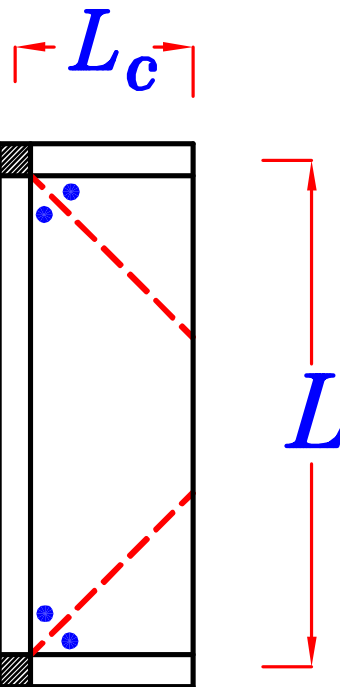
3 Sided Slabs

هي بلاطات مستطيله محموله من ثلاث جهات فقط .



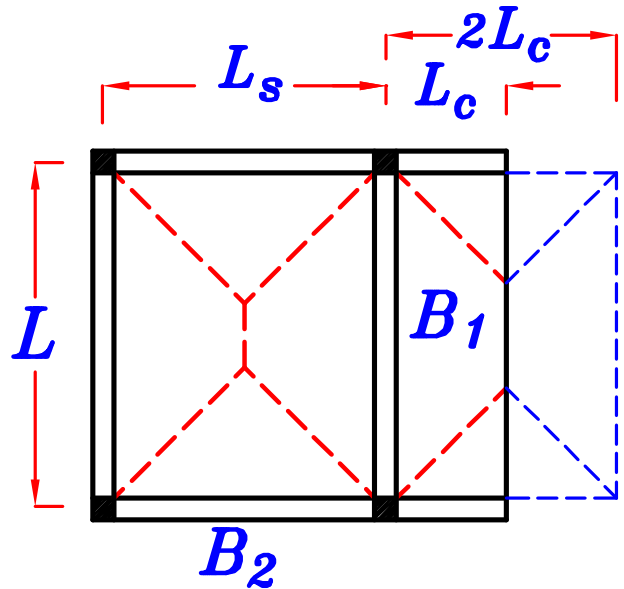
و يتوزع حمل البلاطه على الثلاث كمرات .

و لتوزيع حمل البلاطه على الكمرات يتم تنصيف **الزوايا** بين الكمرات .



و توجد ثلاث حالات لـ 3 Sided Slabs

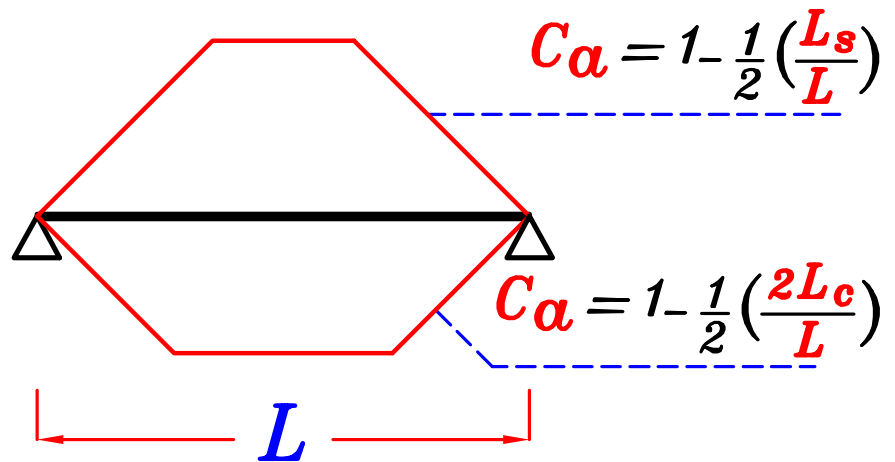
① IF $L_c < \frac{L}{2}$



لحساب الـ C_a و الـ C_e لـ *trapezium*

نحسب قيمه L و L_s للبلاطه الـ *two way* التي كان سيأتى منها نفس الـ *trapezium*

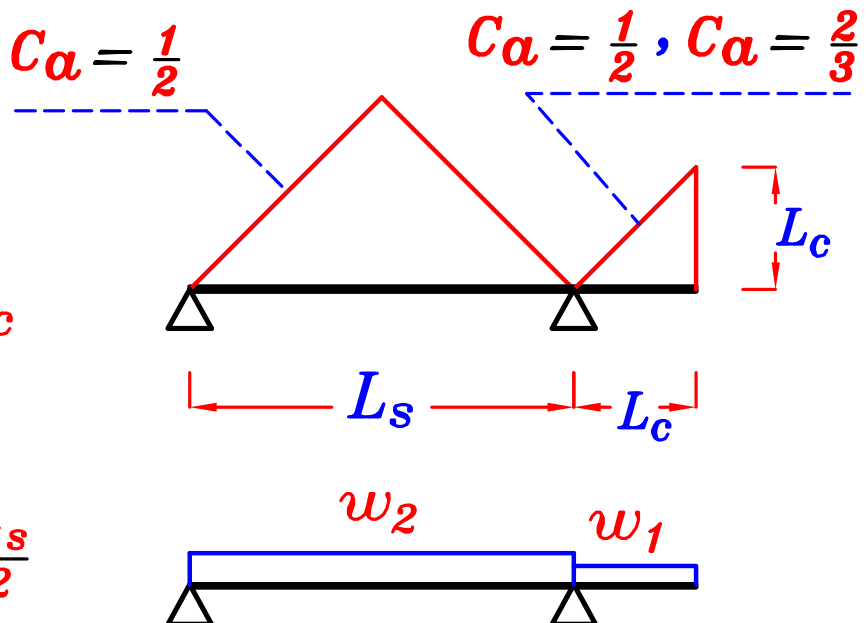
B_1



B_2

$w_1 = 0.W. + C_a w_s L_c$

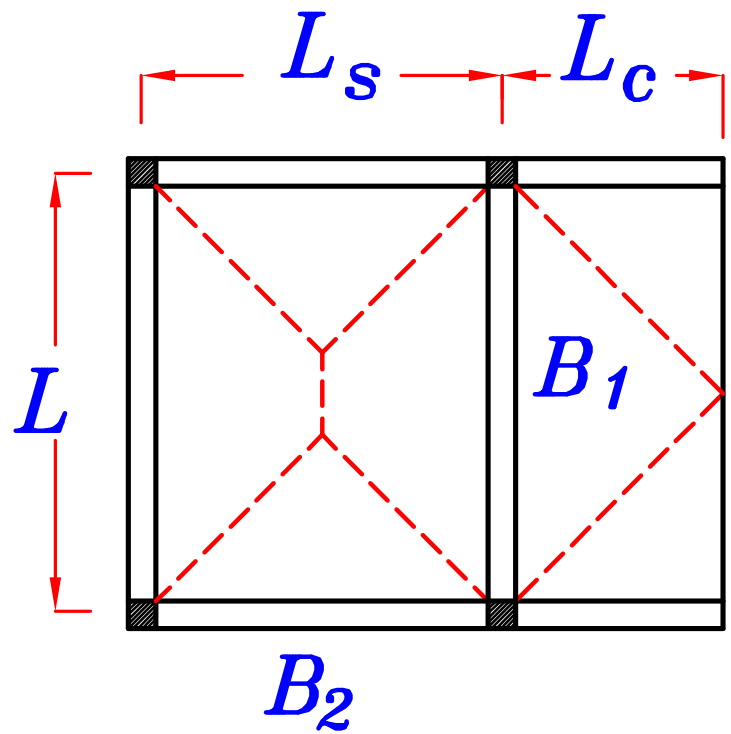
$w_2 = 0.W. + C_a w_s \frac{L_s}{2}$



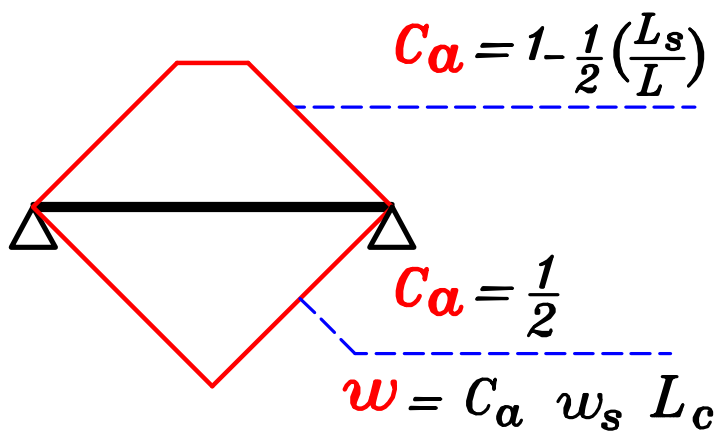
②

IF

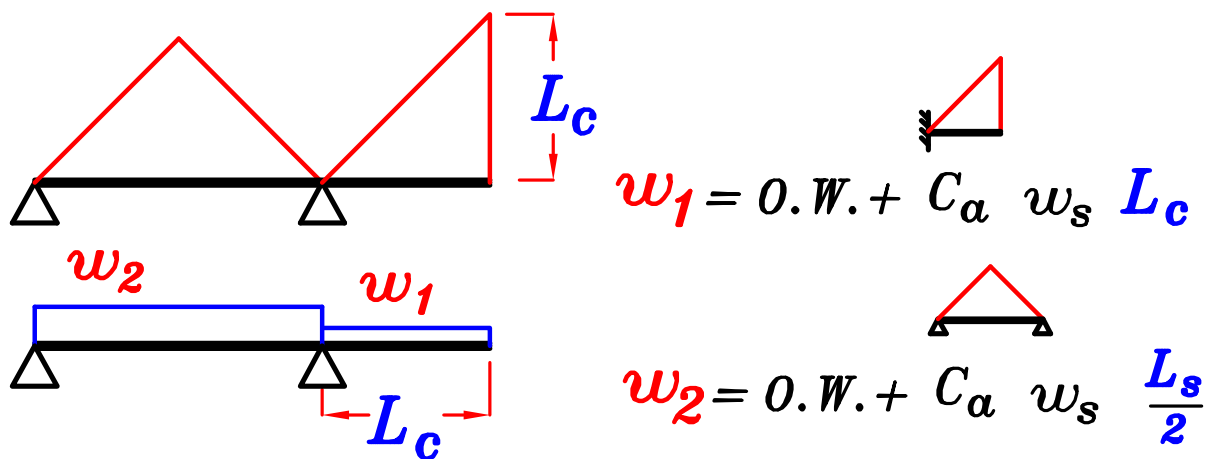
$$L_c = \frac{L}{2}$$



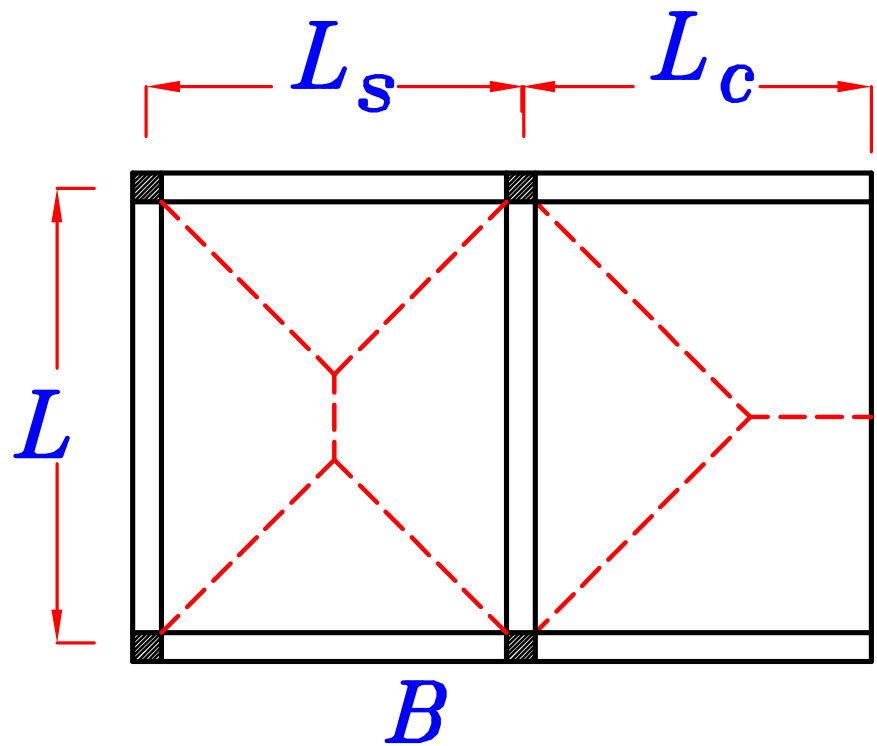
B_1



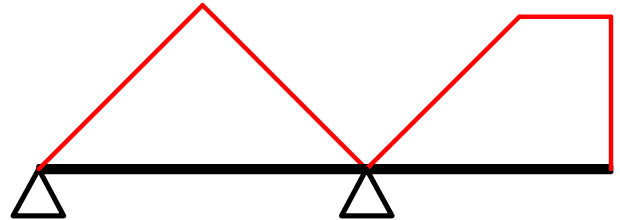
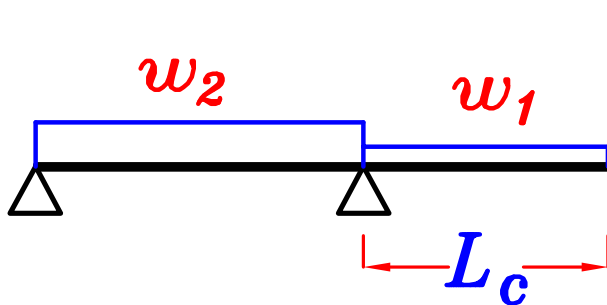
B_2



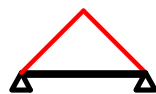
③ IF $L_c > \frac{L}{2}$



B



$$w_1 = O.W. + \frac{\sum \text{area}}{\text{Span}} * w_s$$

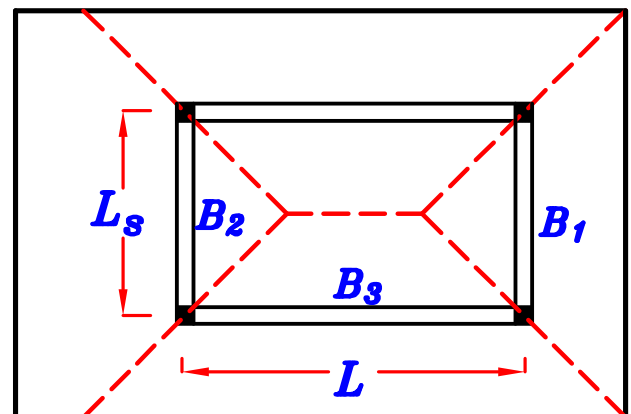
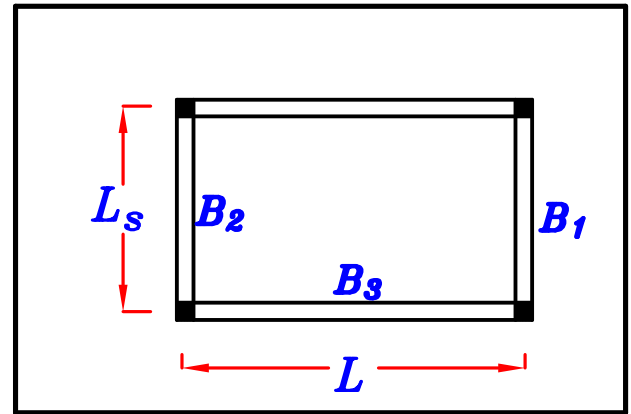


$$w_2 = O.W. + C_a w_s \frac{L_s}{2}$$

Slabs with external angles.

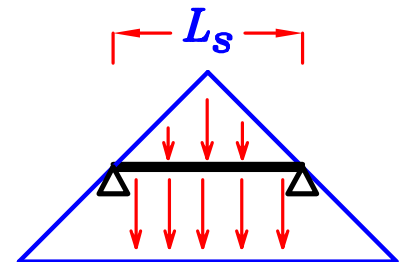
Example.

يتم تنصيف الزوايا الداخليه و الخارجيه بين الكمرات



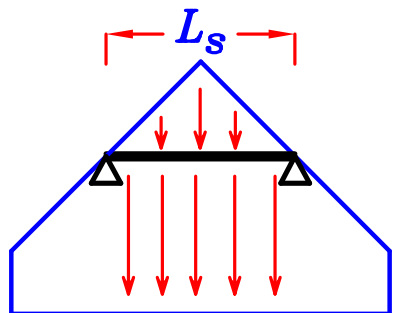
B_1

$$w_1 = O.W. + C_a w_s \frac{L_s}{2} + \frac{\sum \text{area}}{\text{Span} = L_s} * w_s$$



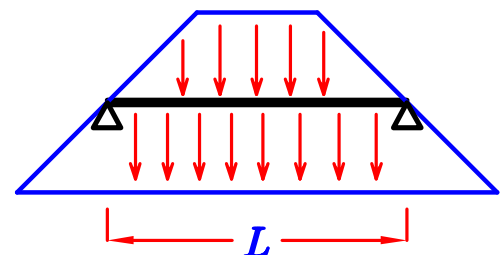
B_2

$$w_2 = O.W. + C_a w_s \frac{L_s}{2} + \frac{\sum \text{area}}{\text{Span} = L_s} * w_s$$

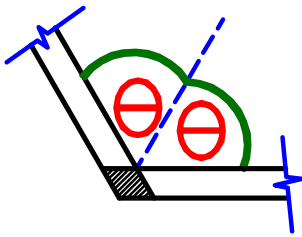
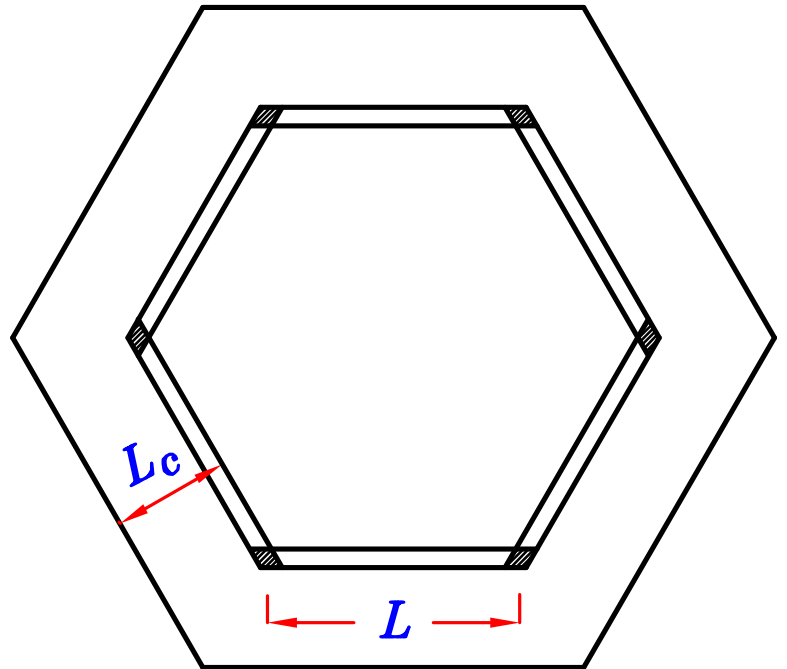


B_3

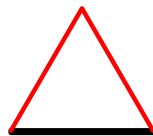
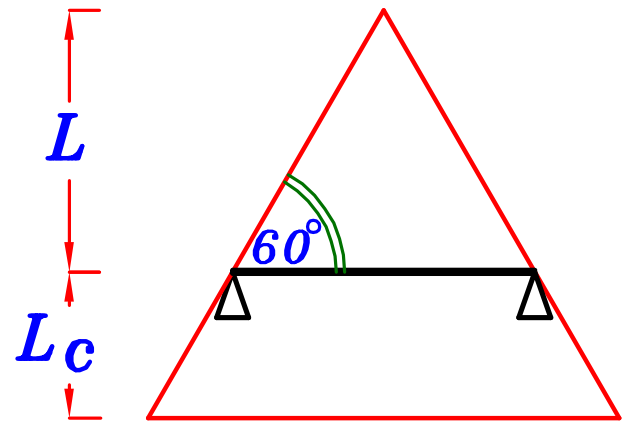
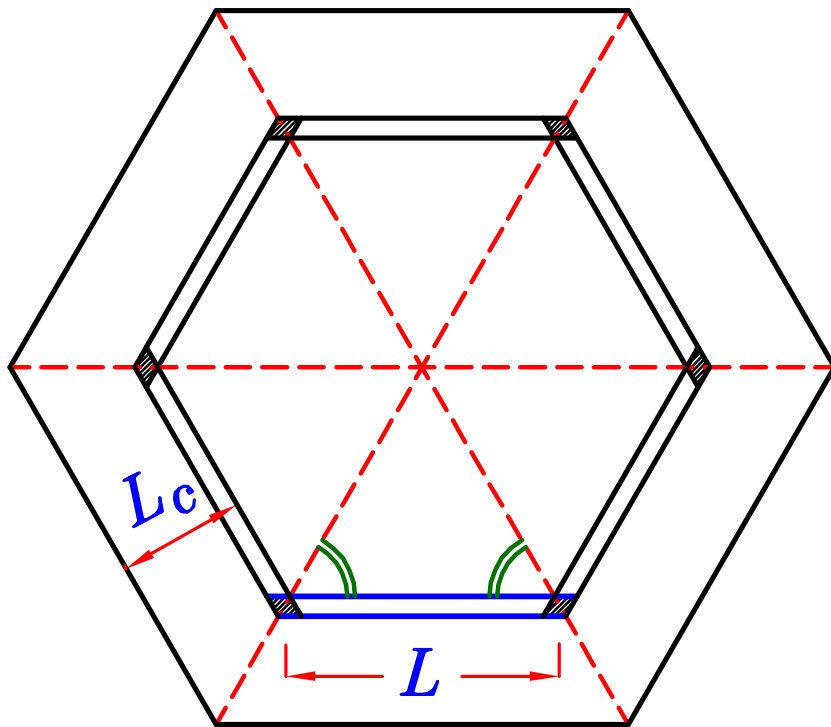
$$w_3 = O.W. + C_a w_s \frac{L_s}{2} + \frac{\sum \text{area}}{\text{Span} = L} * w_s$$



Example.

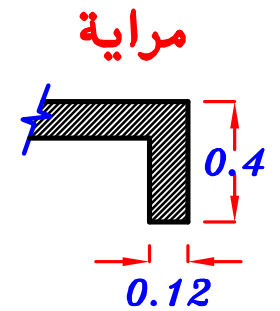


يتم تصنيف الزوايا بين الكمرات حتى لو لم تكن ٩٠°

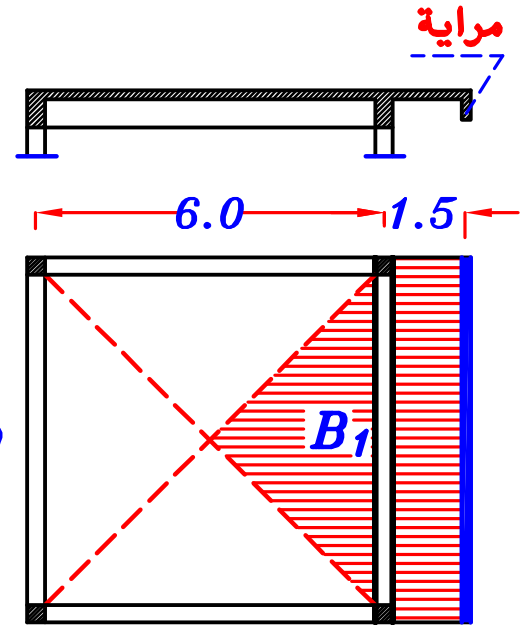


$$w = O.W. + C_a w_s L + \frac{\sum \text{area}}{\text{Span}} * w_s$$

Parapet rested on slabs. سور محمول على البلاطة

$$o.w. (المراية) = (b) (t) \delta_c = \checkmark (kN/m)$$


طول المرايه نفس طول الكمره

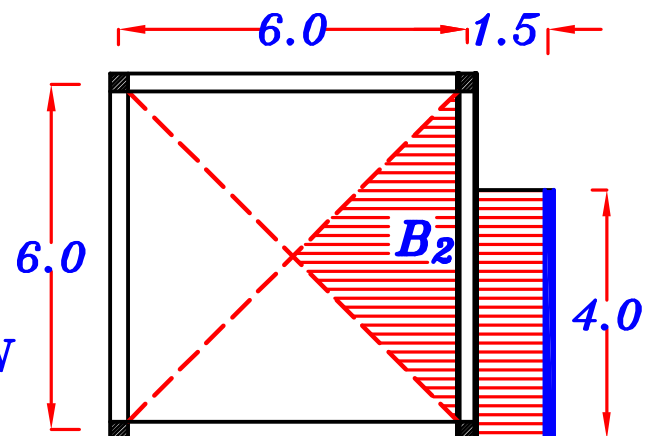


B₁

$$w = o.w. (الكمره) + o.w. (المراية) + \overline{w_s} L_c + \triangle C_a w_s \frac{L_s}{2}$$

B₂

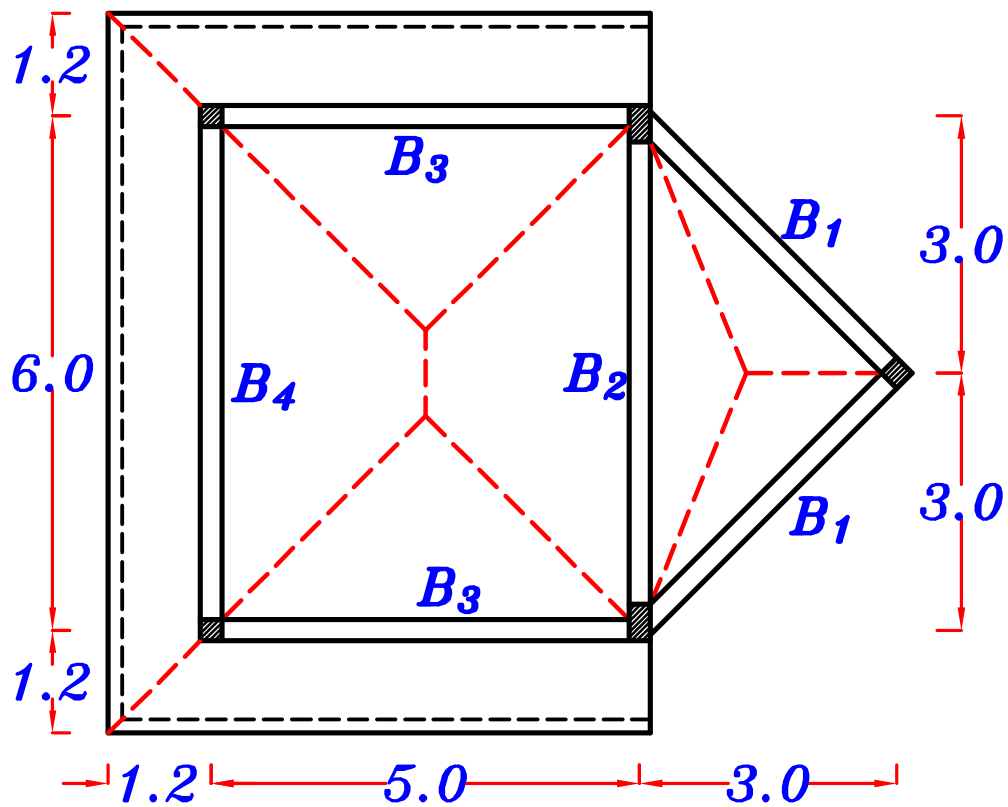
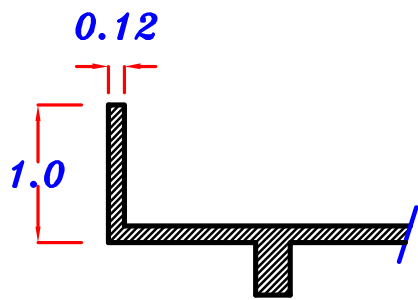
طول المرايه ليس نفس طول الكمره



$$weight (المراية) = (b) (t) \delta_c * 4.0 = \checkmark kN$$

$$w = o.w. + \triangle C_a w_s \frac{L_s}{2} + \frac{\overline{\Sigma area}}{Span = 6.0 m} * w_s + \frac{\overline{\Sigma weight}}{Span = 6.0} \text{ (المراية)}$$

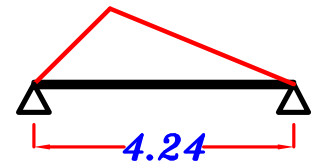
Example.




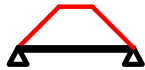
B₁



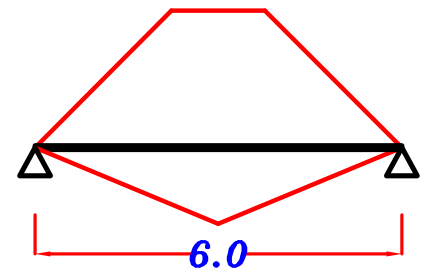
$$w_1 = 0.W. + \frac{\sum \text{area}}{\text{Span} = 4.24\text{m}} * w_s$$



B₂



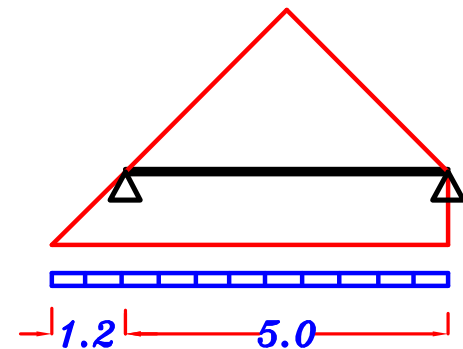
$$w_2 = 0.W. + C_a w_s \frac{L_s}{2} + C_a w_s H$$



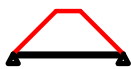
B₃



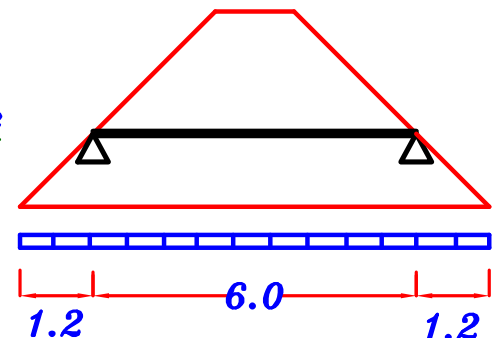
$$w_3 = 0.W. + C_a w_s \frac{L_s}{2} + \frac{\sum \text{area}}{\text{Span} = 5.0} * w_s + \frac{\sum \text{weight}}{\text{Span} = 5.0}$$



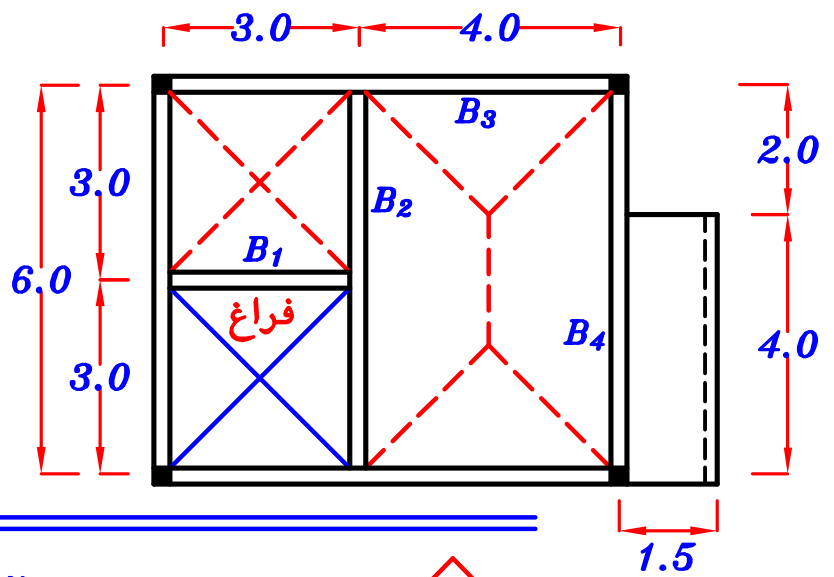
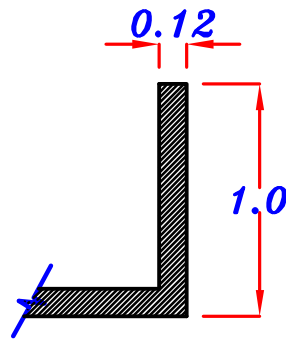
B₄



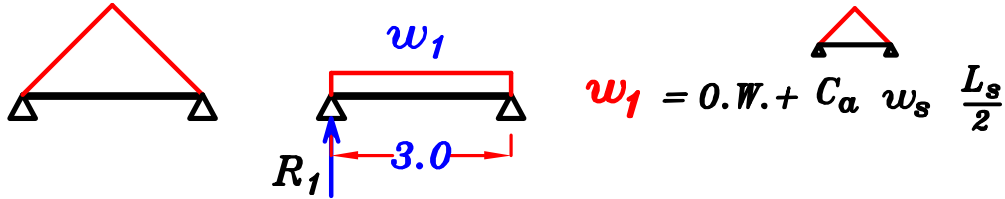
$$w_4 = 0.W. + C_a w_s \frac{L_s}{2} + \frac{\sum \text{area}}{\text{Span} = 6.0} * w_s + \frac{\sum \text{weight}}{\text{Span} = 6.0}$$



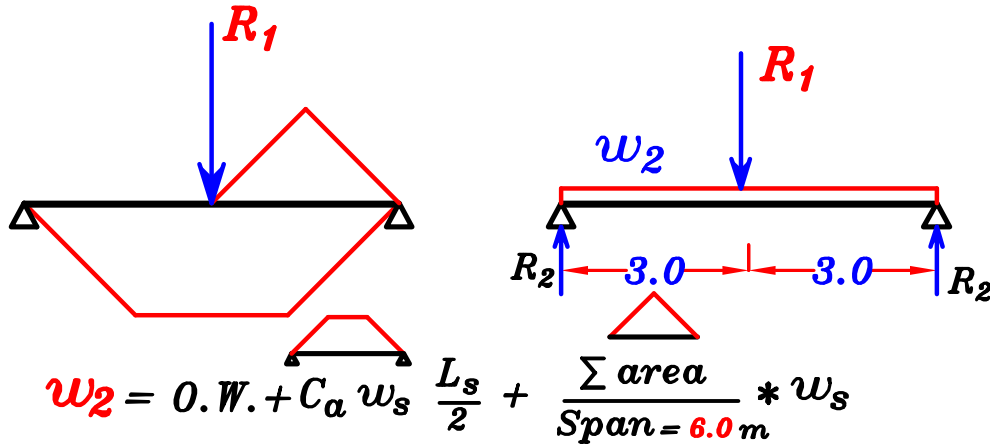
Example.



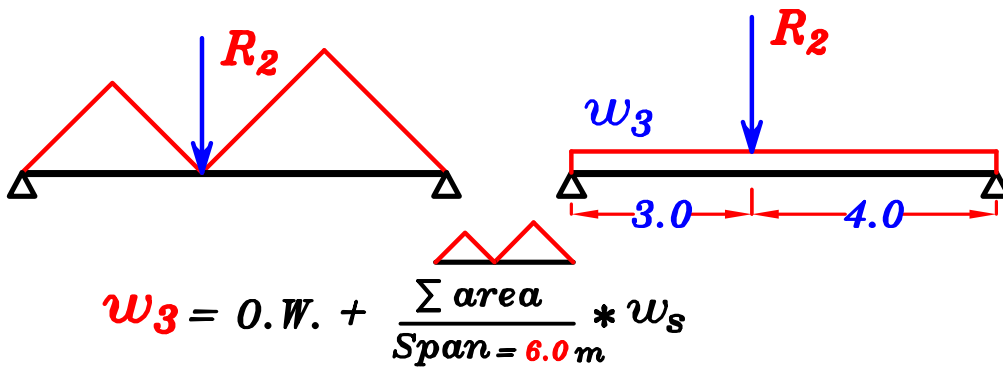
B₁



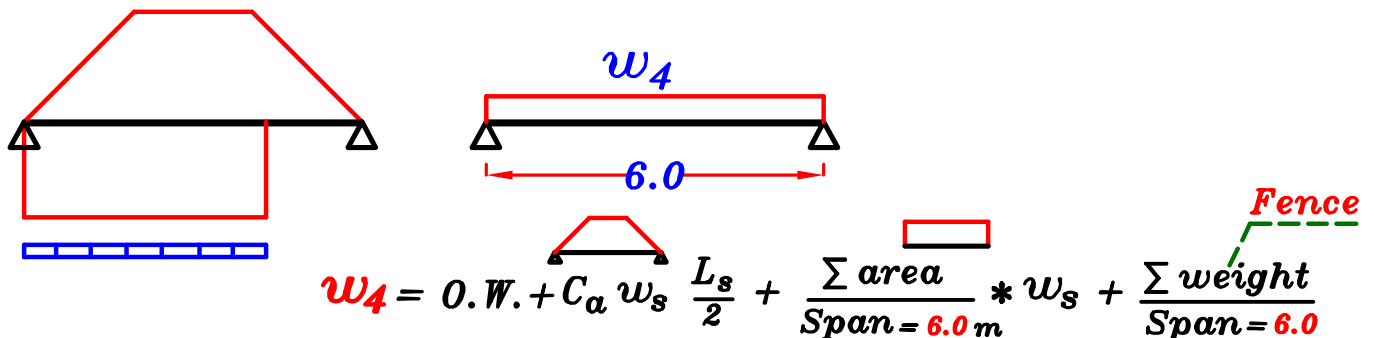
B₂



B₃



B₄



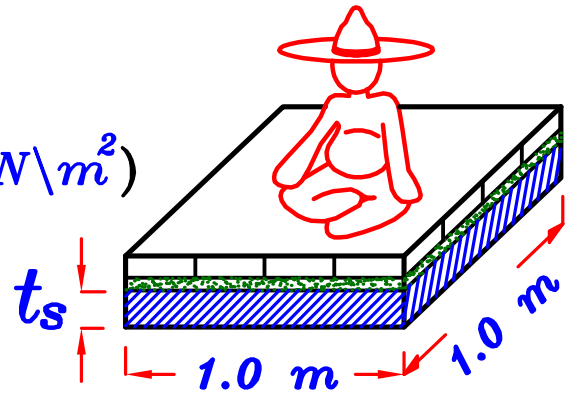
Weight of the Fence = (0.12 * 1.0 * 4.0) (25.0)

Max-Max B.M.D.

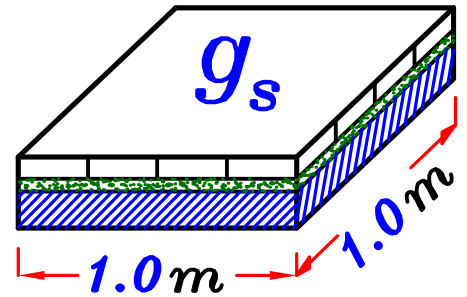
لرسم **max-max B.M.D.** للكمره يجب أولا أن نعمل على حساب كلا من **Dead Load** و **Live Load** على حده .

Load of the Slab.

$$w_s = t_s * \delta_c + F.C. + L.L. \quad (kN/m^2)$$



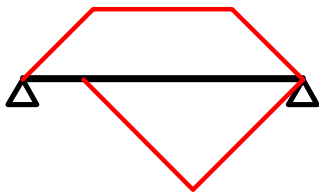
$$g_s = t_s * \delta_c + F.C. \quad (kN/m^2)$$



$$p_s = L.L. \quad (kN/m^2)$$



لحساب الاحمال على الكمره فى حاله ال **Total Load**



$$w_a = O.W. + C_a w_s \frac{L_s}{2} + \frac{\sum \text{area}}{\text{Span}} * w_s$$

لكن لحساب الاحمال فى حاله ال **max-max**


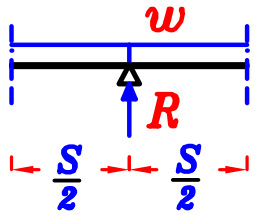
يتم حساب كلا من **D.L. & L.L.** على حده و جمعهم لحساب ال **T.L.**

$$g_a = O.W. + C_a g_s \frac{L_s}{2} + \frac{\sum \text{area}}{\text{Span}} * g_s$$

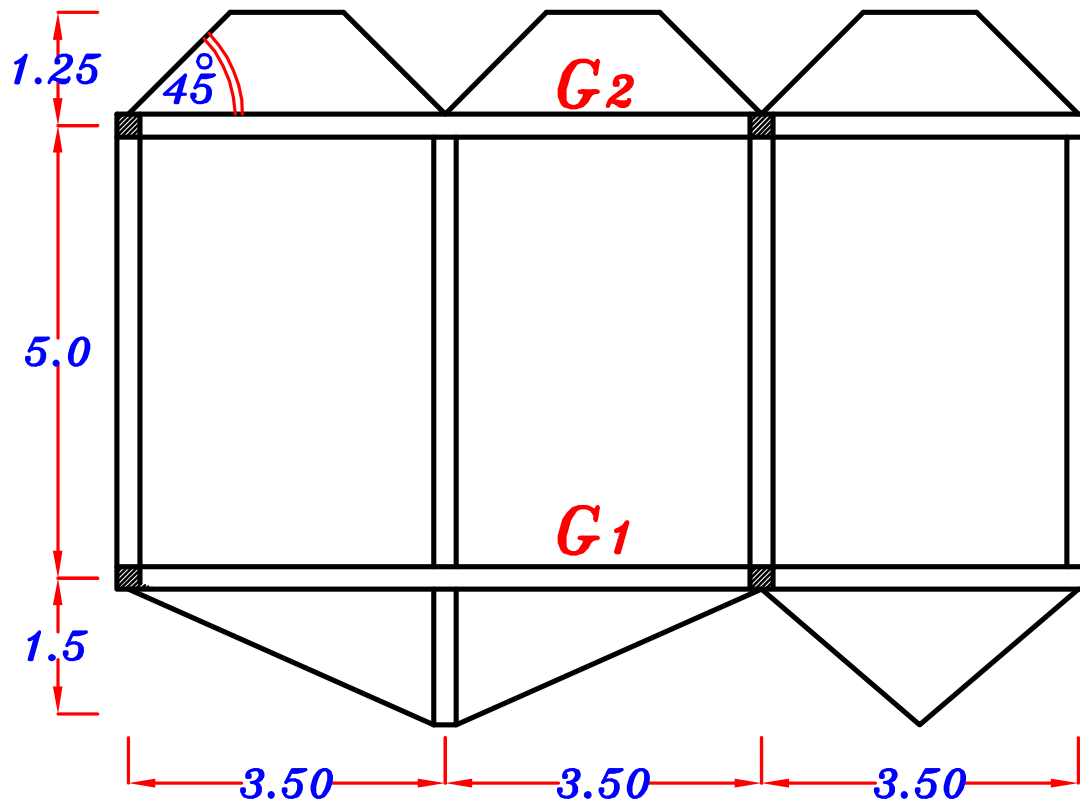
$$p_a = C_a p_s \frac{L_s}{2} + \frac{\sum \text{area}}{\text{Span}} * p_s$$

$$w_a = g_a + p_a$$

خطوات حل مسائل Load Distribution

- ١- ننقل ال plan فى ورقه الاجابه (مسائل ال plans)
نستنتج ال plan و نرسمه فى ورقه الاجابه (مسائل ال X-sec.)
يفضل الرسم بمقياس رسم ١ : ١٠٠
- ٢- نرسم شكل Load Distribution على ال plan .
- ٣- نرقم الكمرات B_1, B_2, B_3, \dots (يتم ترقيم الكمرات المحموله أولا)
و اذا وجد كمرتان لهم نفس الطول و نفس الاحمال نرقمهم بنفس الترقيم .
- ٤- نحسب قيمه w_s (اذا كانت المسأله Total Load)
نحسب قيمه p_s و g_s (اذا كانت المسأله max-max)
نحسب o.w. الكمرات اذا لم تكن معطاه .
نحسب وزن الحوائط إن وجدت .
- ٥- نحسب قيمه Reactions للكمرات المحموله على ال Girder .
(فى مسائل ال plans نحسب ال R مثل ال structure)

(فى مسائل ال X-sec. نحسب ال $R = w * S$)

- ٦- نضع الاحمال على ال Girder بالترتيب التالى :-
 - أ- نضع o.w. على ال Girder كله .
 - ب- نضع Reactions الكمرات الثانويه concentrated loads على ال Girder .
 - ج- نضع أحمال البلاطه التى تنتقل مباشره من البلاطه الى ال Girder .
و تظهر هذه الاحمال من ال plan .
- ٧- نرسم B.M.D. & S.F.D. لل Girder حسب المطلوب Total Load or max-max .

Example.



Data.

$$t_s = 0.14 \text{ m}$$

$$F.C. = 2.0 \text{ kN/m}^2$$

$$L.L. = 2.0 \text{ kN/m}^2$$

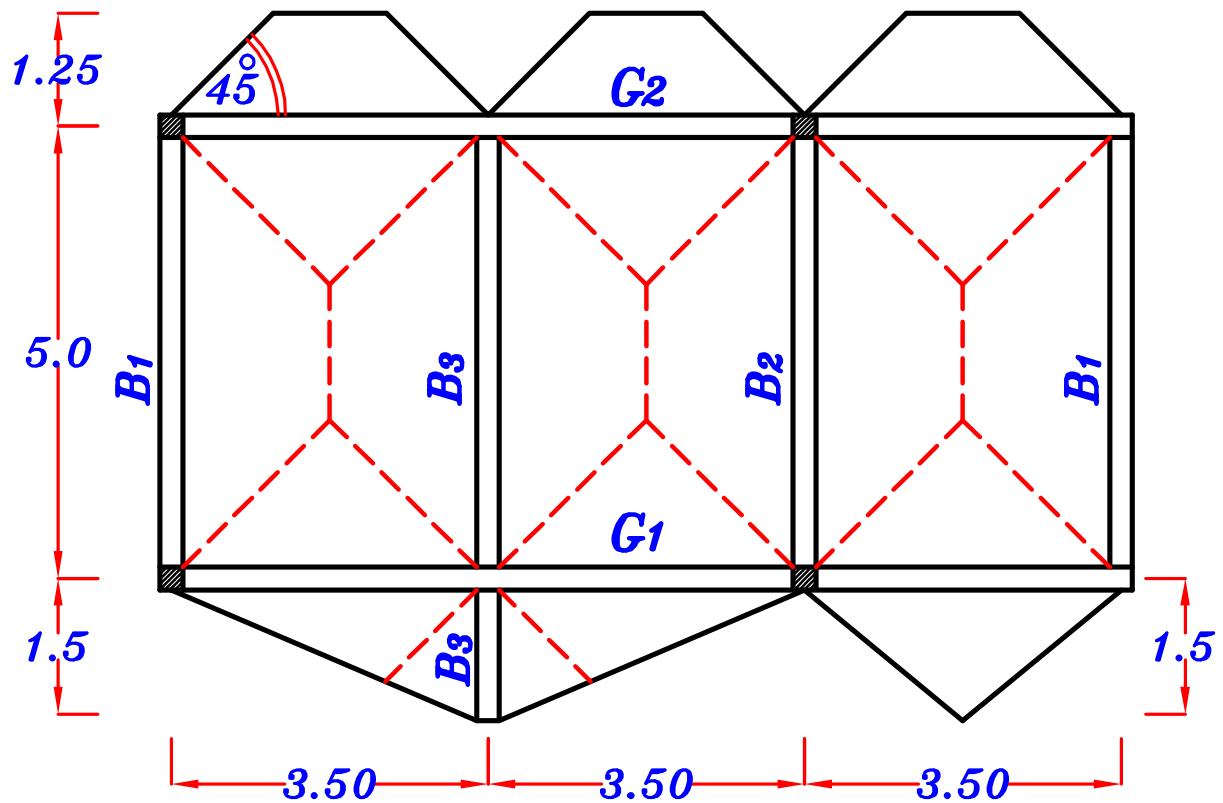
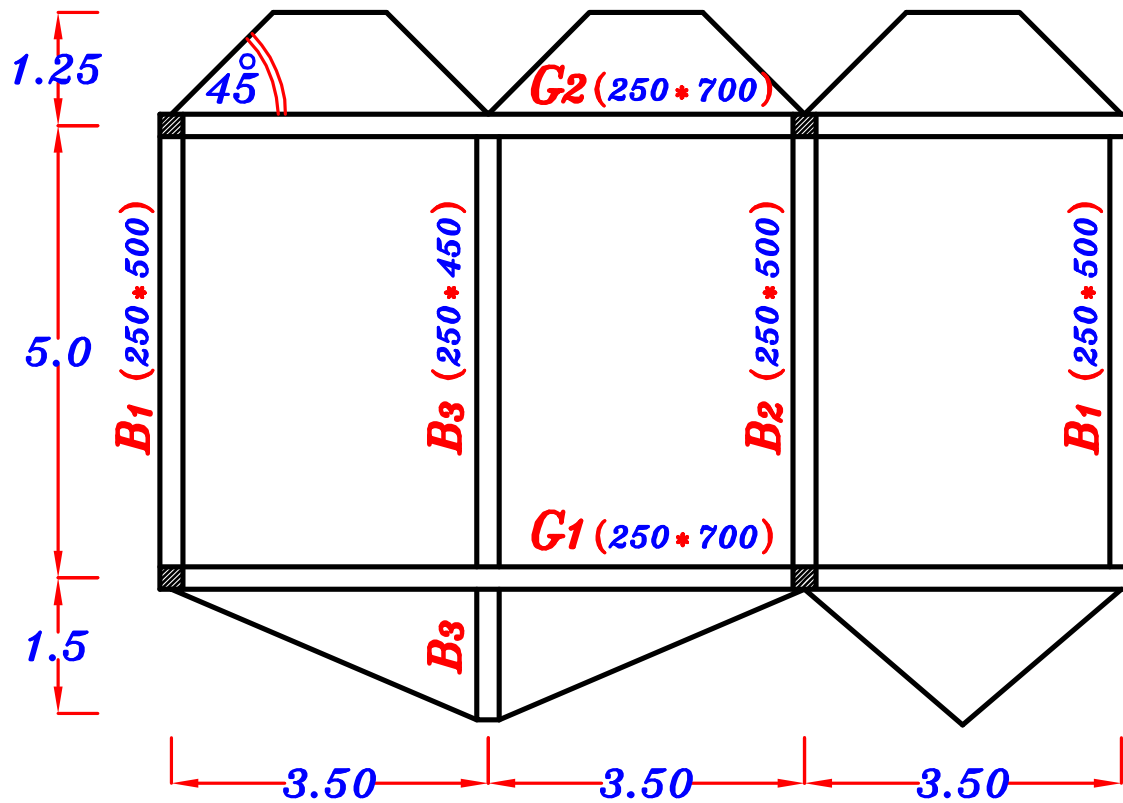
$$b \text{ (Beams \& Girders)} = 0.25 \text{ m}$$

O.W. of beams & girders are reasonably assumed according to the expected depth.

Req.

- 1- Draw the structural plan showing the pattern of Load Distribution.
- 2- Draw S.F.D. & Absolute B.M.D. For the Girders G_1 & G_2

Get **b**, **t** and o.w. For all beams.



g_s, p_s

$$g_s = t_s \cdot \delta_c + F.C. = 0.14 \cdot 25 + 2.0 = 5.50 \text{ kN/m}^2$$

$$p_s = L.L. = 2.0 \text{ kN/m}^2$$

$$g_s = 5.50 \text{ kN/m}^2$$

$$p_s = 2.0 \text{ kN/m}^2$$

o.w. of Beams. = $b \cdot t \cdot \delta_c$

$$B_1, B_2 \quad (250 \cdot 500) \quad \text{o.w.} = (0.25) (0.5) (25) = 3.12 \text{ kN/m}$$

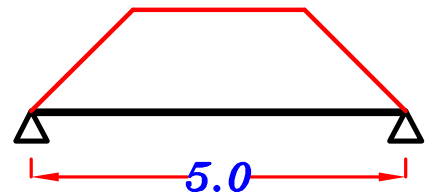
$$B_3 \quad (250 \cdot 450) \quad \text{o.w.} = (0.25) (0.45) (25) = 2.81 \text{ kN/m}$$

$$G_1, G_2 \quad (250 \cdot 700) \quad \text{o.w.} = (0.25) (0.7) (25) = 4.40 \text{ kN/m}$$

$$B_1 \quad (250 \cdot 500)$$

For Trapezoid

$$C_a = 1 - \frac{1}{2} \left(\frac{L_s}{L} \right) = 1 - \frac{1}{2} \left(\frac{3.50}{5} \right) = 0.65$$



Load For shear.

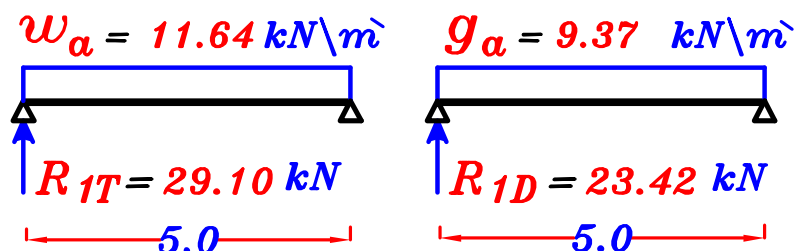
$$g_a = O.W. + C_a g_s \frac{L_s}{2} = 3.12 + 0.65 (5.50) \left(\frac{3.50}{2} \right) = 9.37 \text{ kN/m}$$

$$p_a = C_a p_s \frac{L_s}{2} = 0.65 (2.0) \left(\frac{3.50}{2} \right) = 2.27 \text{ kN/m}$$

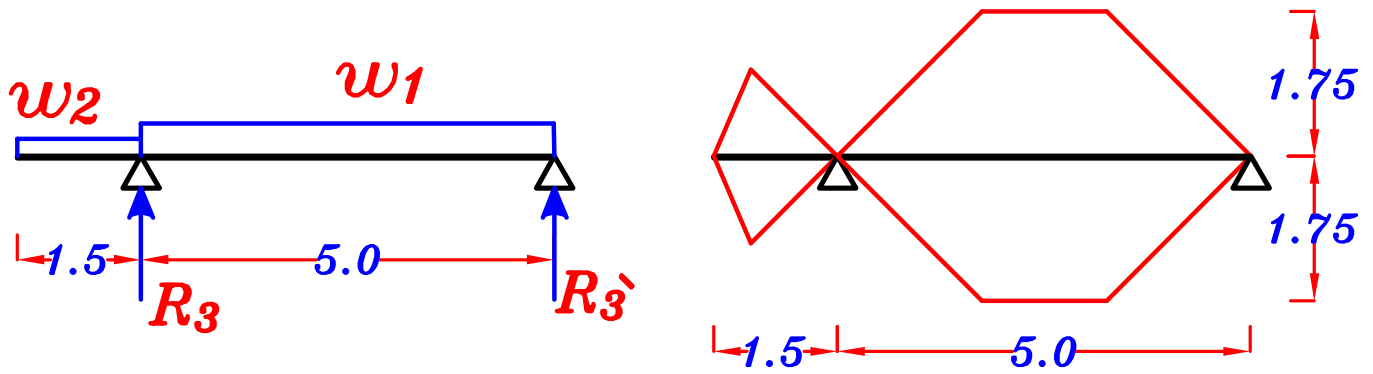
$$w_a = g_a + p_a = 9.37 + 2.27 = 11.64 \text{ kN/m}$$

$$R_{1D} = 23.42 \text{ kN}$$

$$R_{1T} = 29.10 \text{ kN}$$



B₃ (250*450)



w₁

For Trapezoid $C_a = 1 - \frac{1}{2} \left(\frac{L_s}{L} \right) = 1 - \frac{1}{2} \left(\frac{3.50}{5} \right) = 0.65$

Load For shear.

$g_1 = 0.W. + 2 C_a g_s \frac{L_s}{2} = 2.81 + 2 (0.65) (5.50) \left(\frac{3.50}{2} \right) = 15.32 \text{ kN}\backslash\text{m}$

$p_1 = 2 C_a p_s \frac{L_s}{2} = 2 (0.65) (2.0) \left(\frac{3.50}{2} \right) = 4.55 \text{ kN}\backslash\text{m}$

$w_1 = g_1 + p_1 = 15.32 + 4.55 = 19.87 \text{ kN}\backslash\text{m}$

w₂

$\text{area} = 0.787 \text{ m}^2$

$g_2 = 0.W. + \frac{\sum \text{area}}{\text{Span}} * g_s = 2.81 + \frac{2 (0.787) (5.50)}{1.50} = 8.58 \text{ kN}\backslash\text{m}$

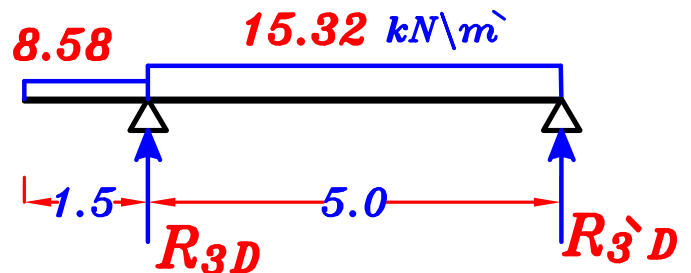
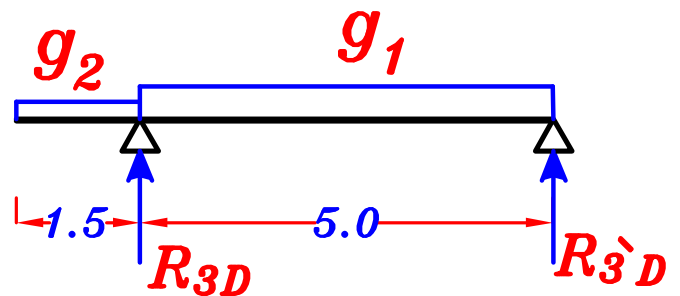
$p_2 = \frac{\sum \text{area}}{\text{Span}} * p_s = \frac{2 (0.787) (2.0)}{1.50} = 2.10 \text{ kN}\backslash\text{m}$

$w_2 = g_2 + p_2 = 8.58 + 2.10 = 10.68 \text{ kN}\backslash\text{m}$

Dead Load.

$$R_{3D} = 53.1 \text{ kN}$$

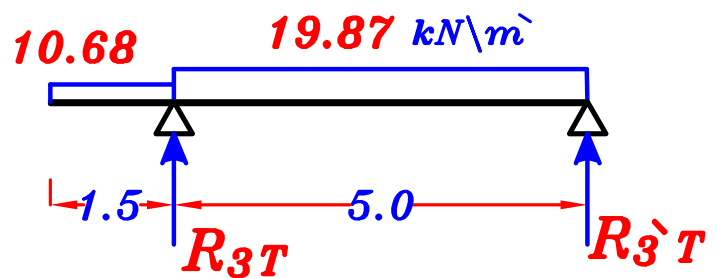
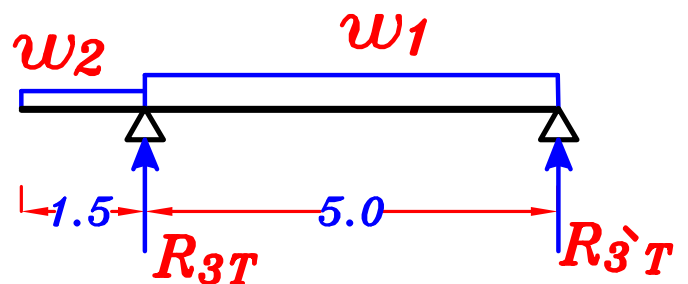
$$R_{3'D} = 36.37 \text{ kN}$$



Total Load.

$$R_{3T} = 68.1 \text{ kN}$$

$$R_{3'T} = 47.27 \text{ kN}$$



$$R_{3D} = 53.1 \text{ kN}$$

$$R_{3T} = 68.1 \text{ kN}$$



Reversed on girder G_1

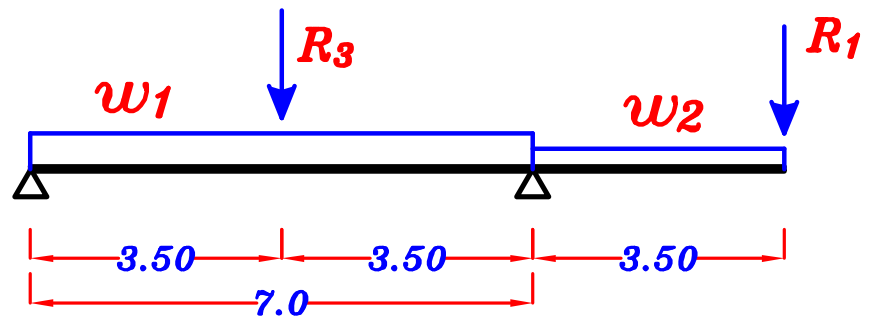
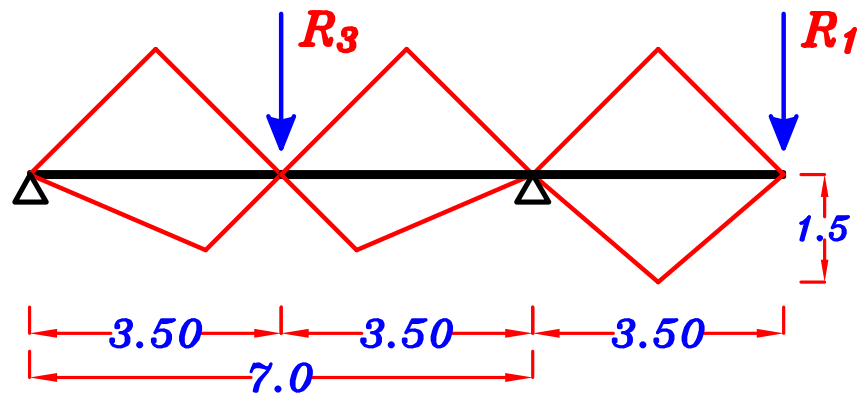
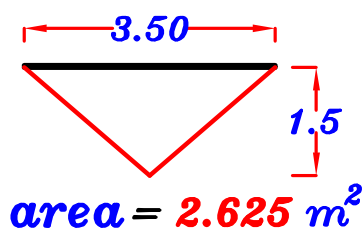
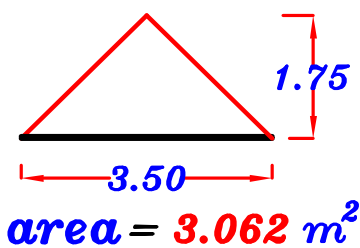
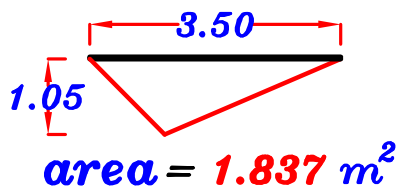
$$R_{3'D} = 36.37 \text{ kN}$$

$$R_{3'T} = 47.27 \text{ kN}$$



Reversed on girder G_2

$$\underline{\underline{G_1}} \quad (250 * 700)$$



$$\underline{\underline{w_1}} \quad g_1 = 0.W. + \frac{\sum \text{area}}{\text{Span}} * g_s$$

$$= 4.40 + \frac{2(1.837) + 2(3.062)}{7.0} (5.50) = 12.10 \text{ kN/m}$$

$$p_1 = \frac{\sum \text{area}}{\text{Span}} * p_s = \frac{2(1.837) + 2(3.062)}{7.0} (2.0) = 2.80 \text{ kN/m}$$

$$w_1 = g_1 + p_1 = 12.10 + 2.80 = 14.90 \text{ kN/m}$$

$$\underline{\underline{w_2}} \quad g_2 = 0.W. + \frac{\sum \text{area}}{\text{Span}} * g_s + c_e g_s \frac{L_c}{2}$$

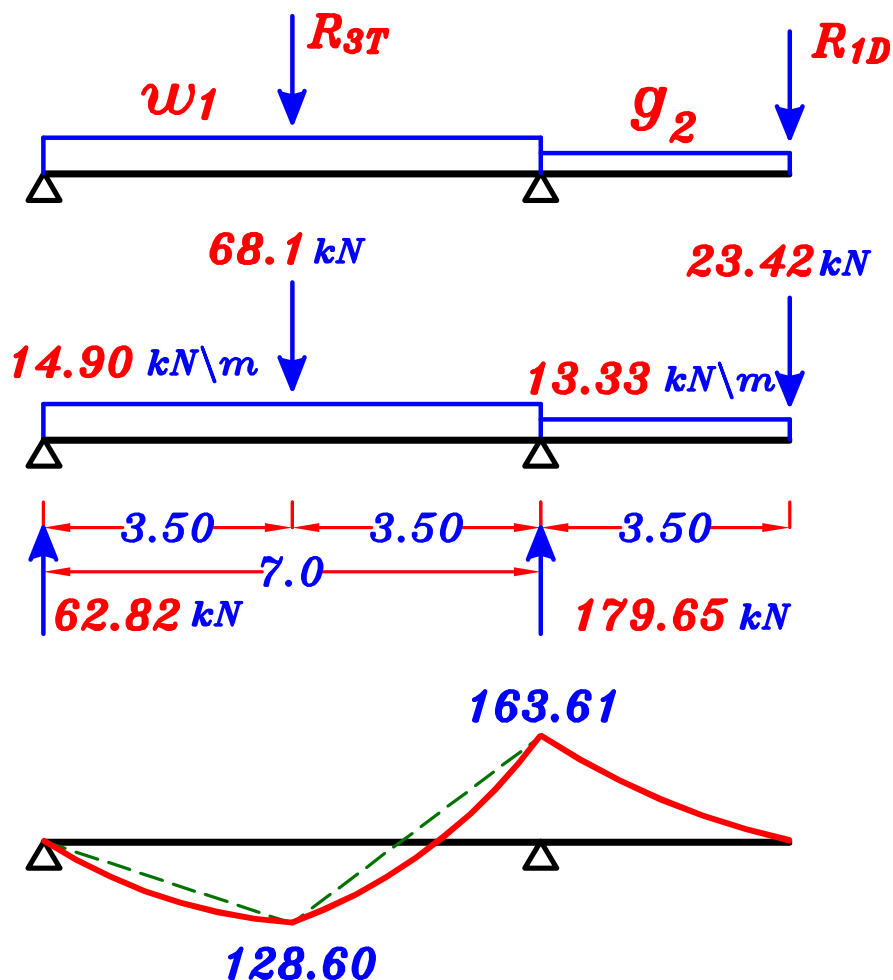
$$= 4.40 + \frac{(2.625)}{3.50} (5.50) + \frac{1}{2} (5.50) \left(\frac{3.50}{2} \right) = 13.33 \text{ kN/m}$$

$$p_2 = \frac{\sum \text{area}}{\text{Span}} * p_s + c_e p_s \frac{L_c}{2} = \frac{(2.625)}{3.50} (2.0) + \frac{1}{2} (2.0) \left(\frac{3.50}{2} \right) = 3.25 \text{ kN/m}$$

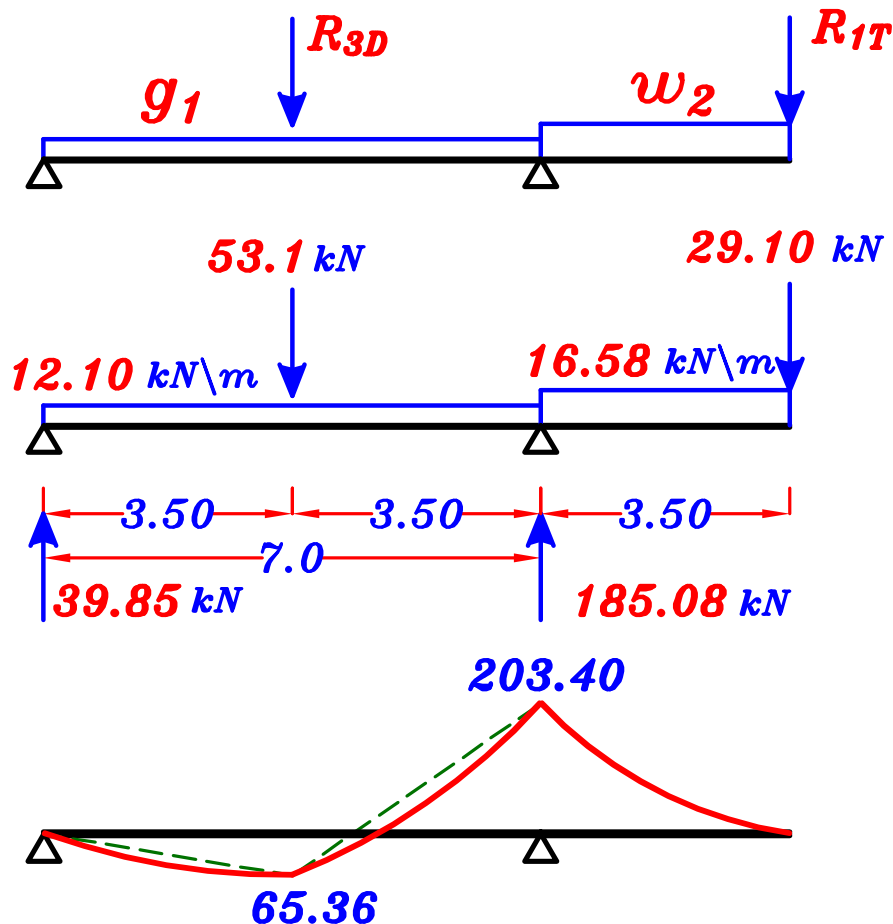
$$w_2 = g_2 + p_2 = 13.33 + 3.25 = 16.58 \text{ kN/m}$$

max-max B.M.D. For the girder (G_1)

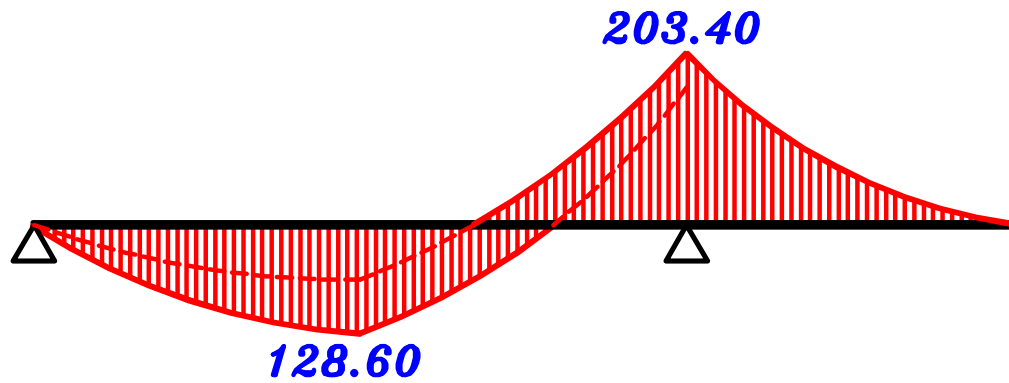
1-max. +ve B.M.D.



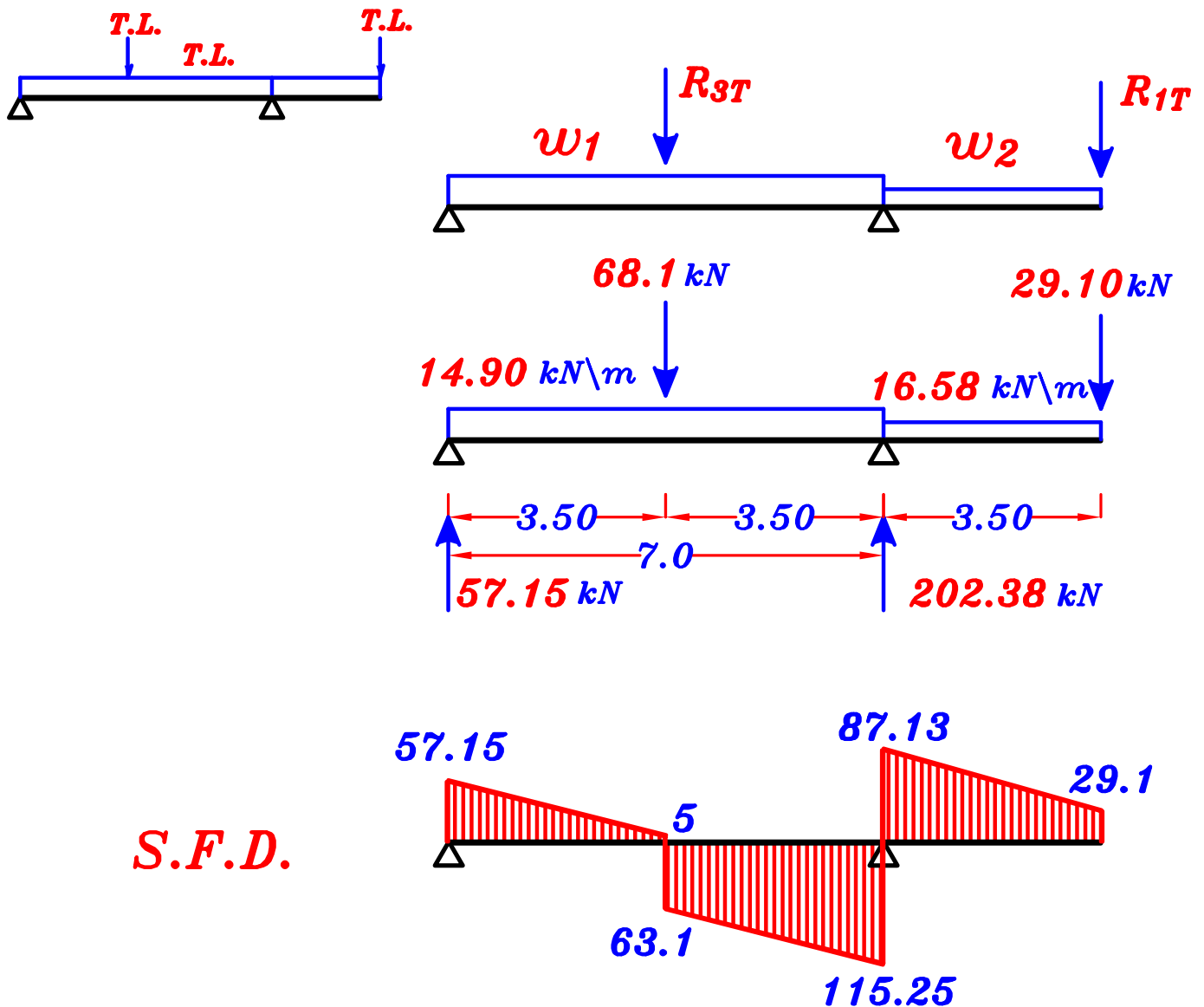
2-max. -ve B.M.D.



max-max B.M.D. For the girder (G_1)

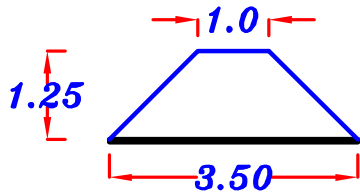


S.F.D. For the girder (G_1)

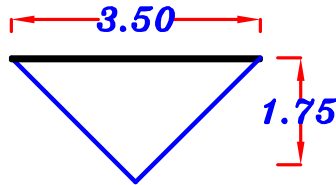


S.F.D.

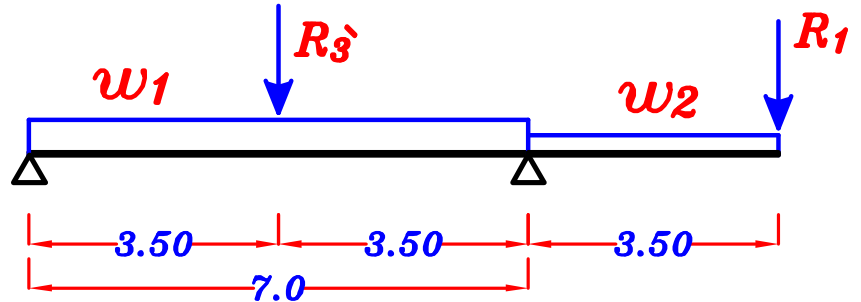
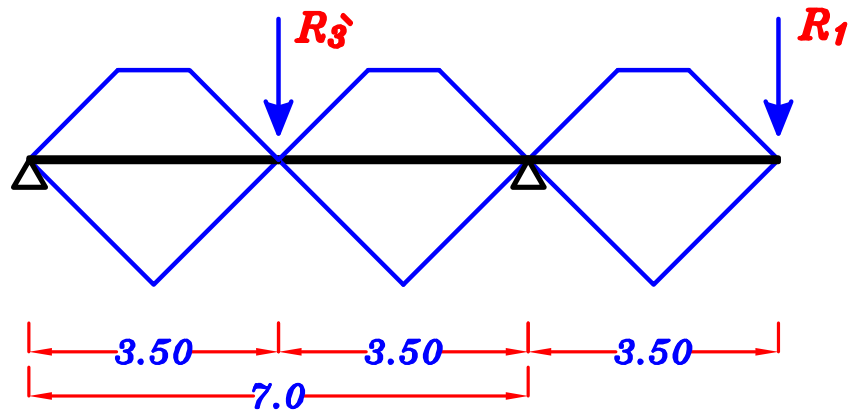
$$\underline{\underline{G_2}} \quad (250 \times 700)$$



$$\text{area} = 2.812 \text{ m}^2$$



$$\text{area} = 3.062 \text{ m}^2$$



$$\underline{\underline{w_1}} \quad g_1 = 0.W. + \frac{\sum \text{area}}{\text{Span}} * g_s$$

$$= 4.40 + \frac{2(2.812) + 2(3.062)}{7.0} (5.50) = 13.63 \text{ kN/m}$$

$$p_1 = \frac{\sum \text{area}}{\text{Span}} * p_s = \frac{2(2.812) + 2(3.062)}{7.0} (2.0) = 3.35 \text{ kN/m}$$

$$w_1 = g_1 + p_1 = 13.63 + 3.35 = 16.98 \text{ kN/m}$$

$$\underline{\underline{w_2}} \quad g_2 = 0.W. + \frac{\sum \text{area}}{\text{Span}} * g_s + c_e g_s \frac{L_c}{2}$$

$$g_2 = 4.40 + \frac{(2.812)}{3.50} (5.50) + \frac{1}{2} (5.50) \left(\frac{3.50}{2} \right) = 13.63 \text{ kN/m}$$

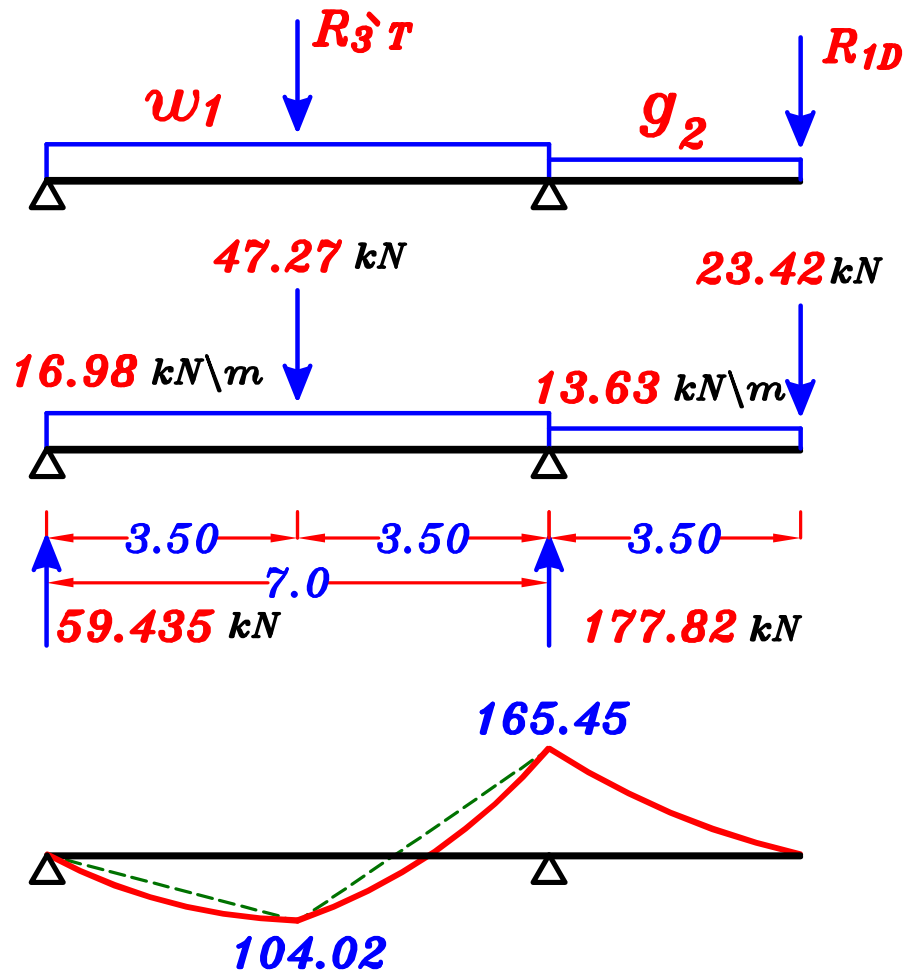
$$p_2 = \frac{\sum \text{area}}{\text{Span}} * p_s + c_e p_s \frac{L_c}{2}$$

$$= \frac{(2.812)}{3.50} (2.0) + \frac{1}{2} (2.0) \left(\frac{3.50}{2} \right) = 3.35 \text{ kN/m}$$

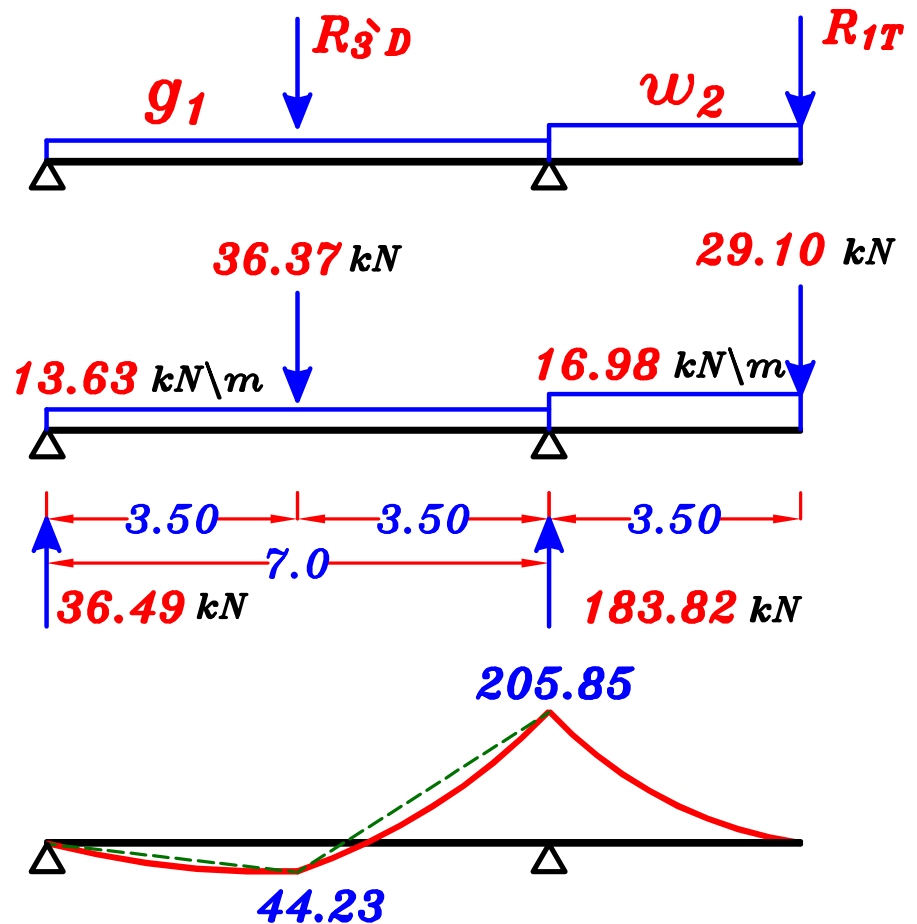
$$w_2 = g_2 + p_2 = 13.63 + 3.35 = 16.98 \text{ kN/m}$$

max-max B.M.D. For the girder (G_1)

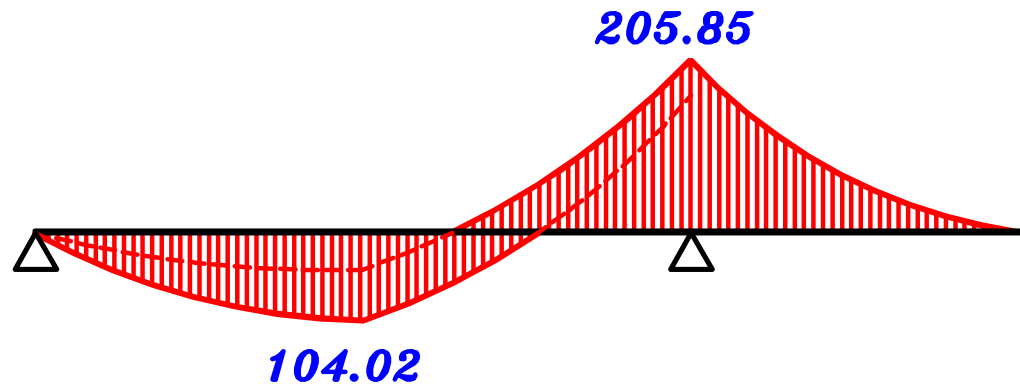
1-max. +ve B.M.D.



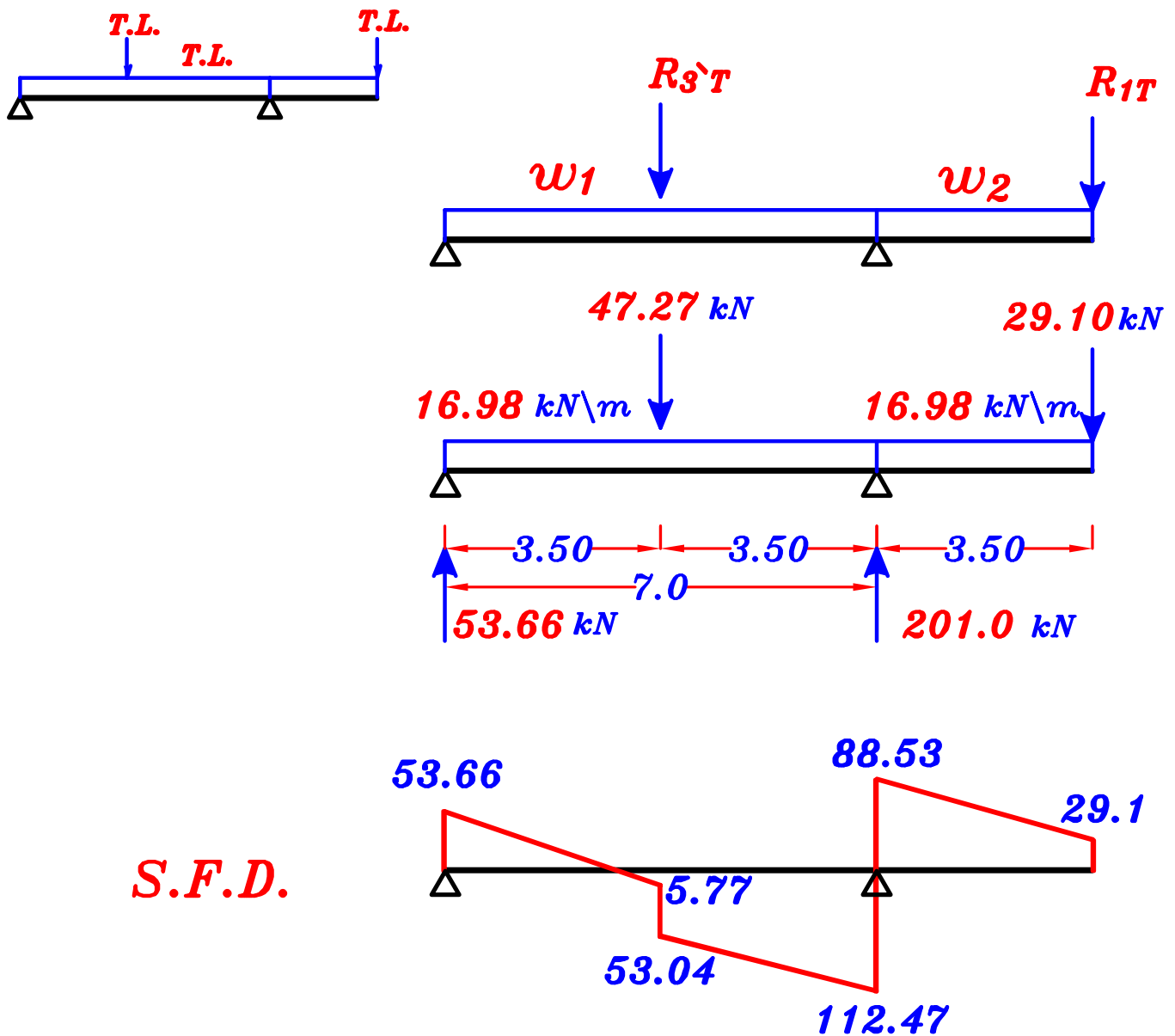
2-max. -ve B.M.D.



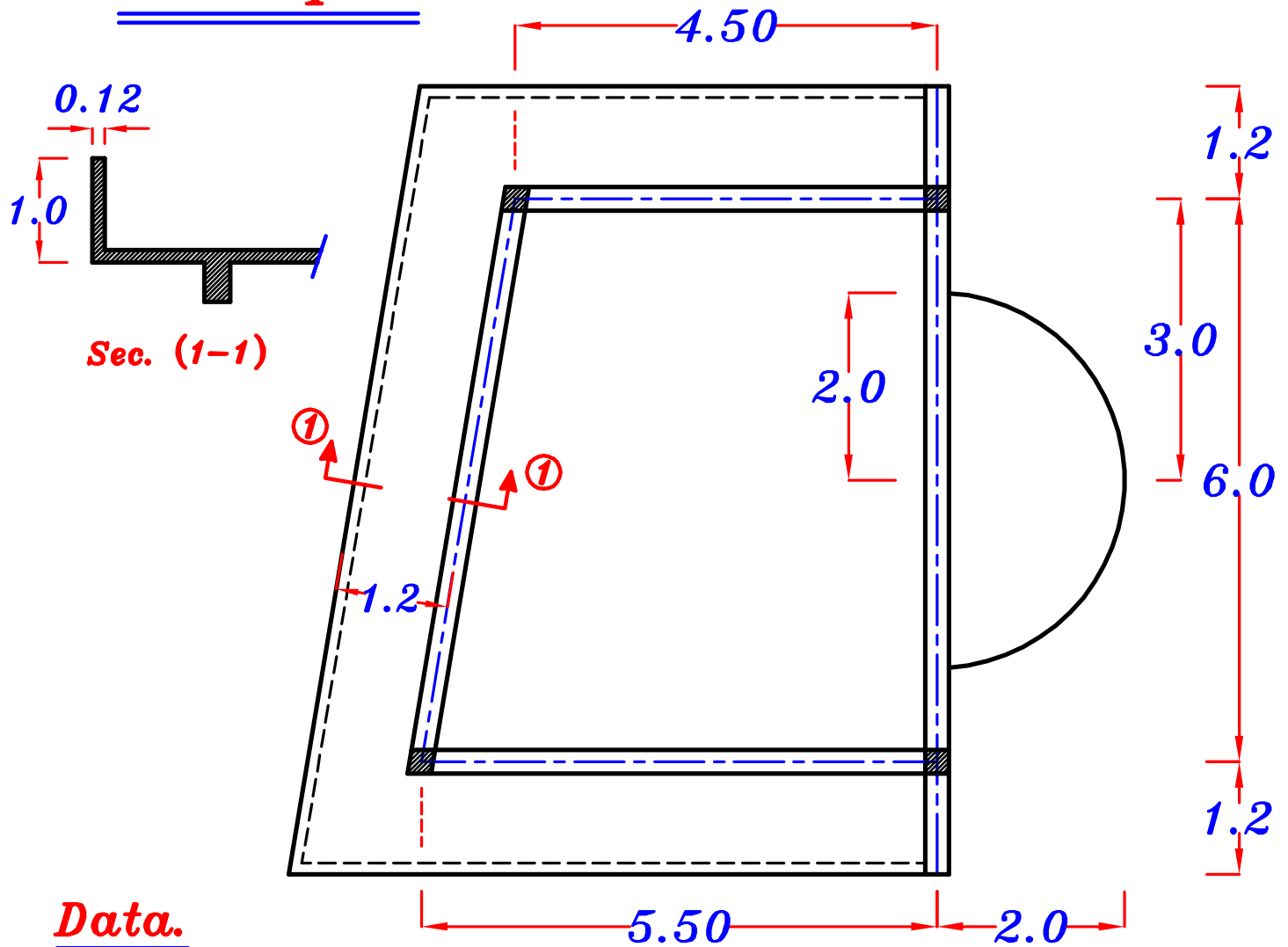
max-max B.M.D. For the girder (G_1)



S.F.D. For the girder (G_1)



Example.



Data.

$$t_s = 0.16 \text{ m}$$

$$F.C. = 1.50 \text{ kN/m}^2$$

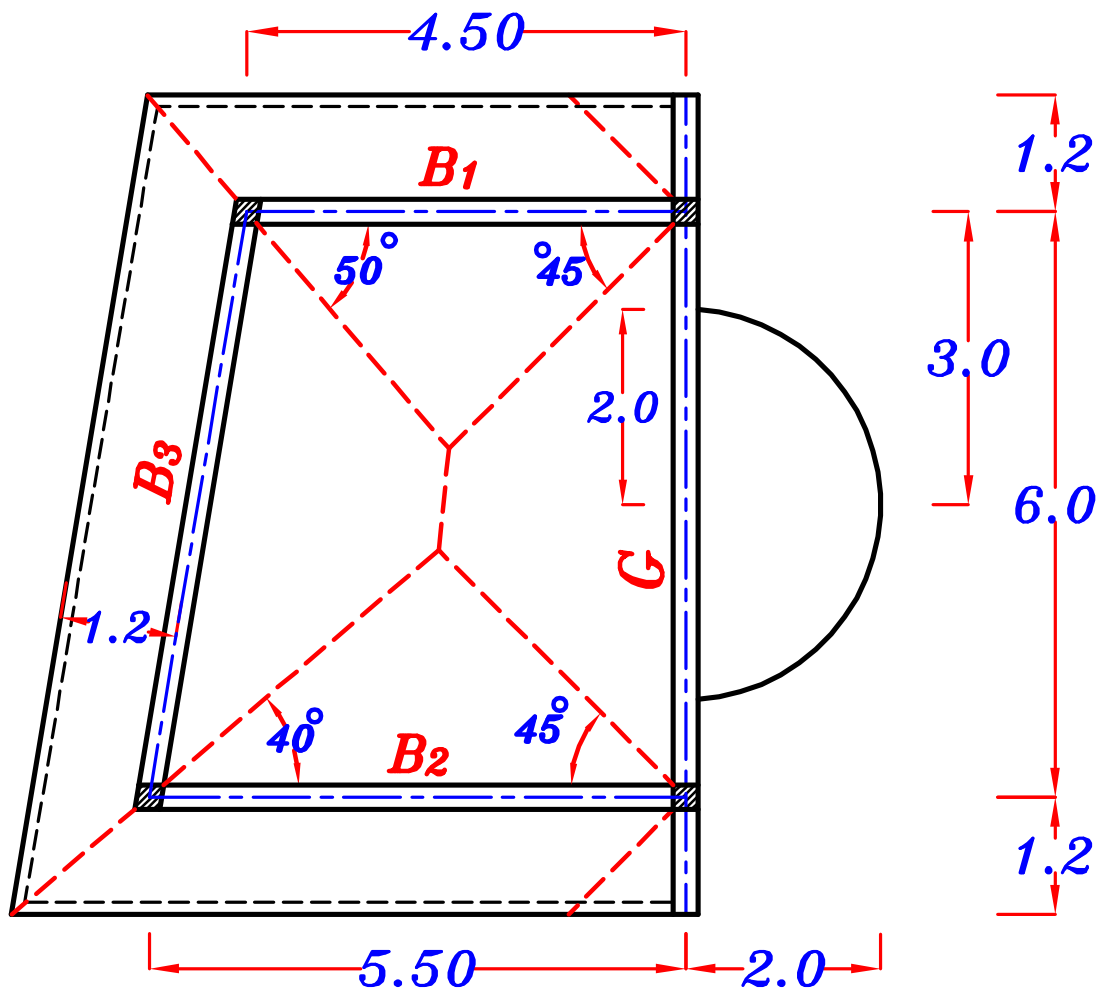
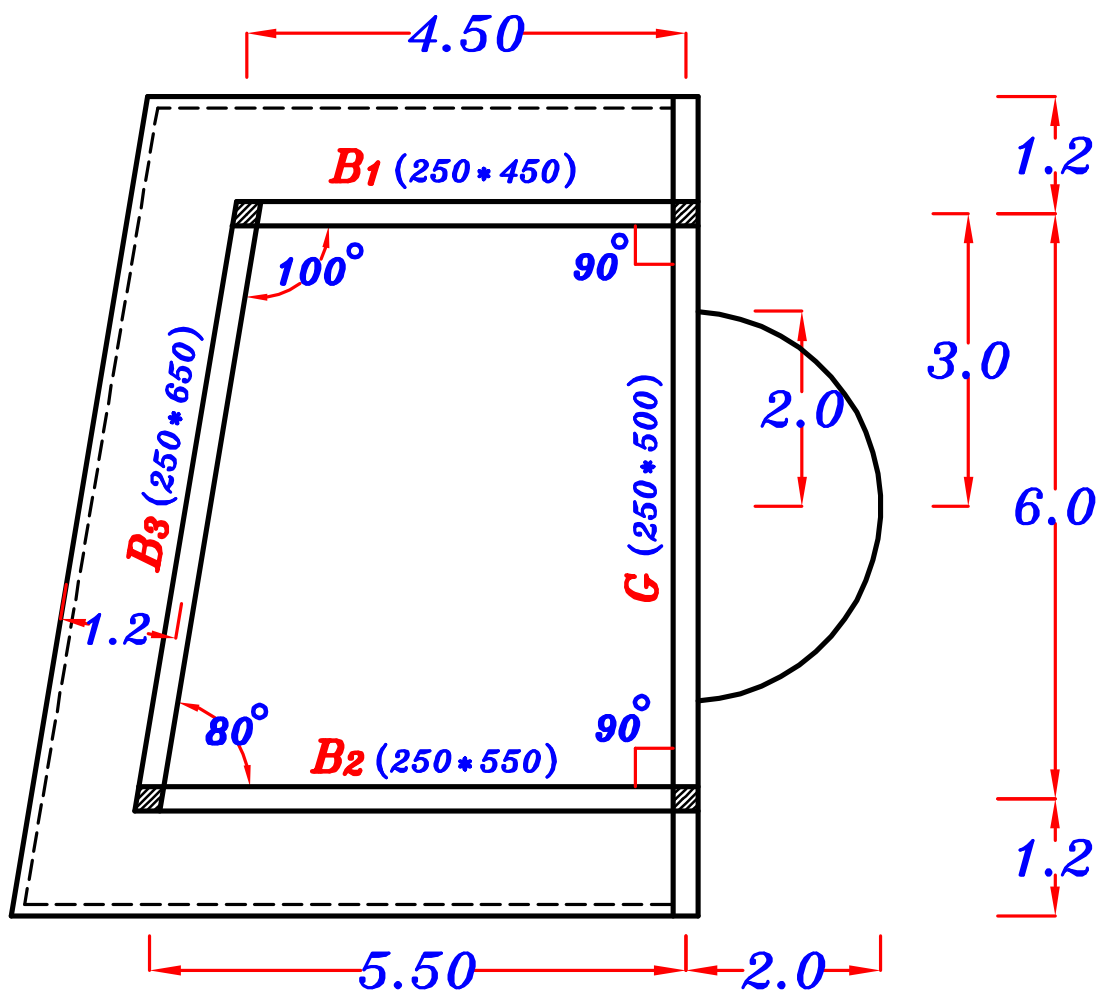
$$L.L. = 3.0 \text{ kN/m}^2$$

$$b \text{ (Beams \& Girders)} = 0.25 \text{ m}$$

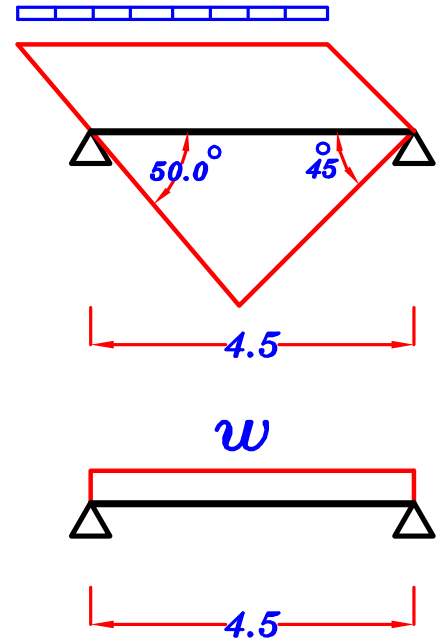
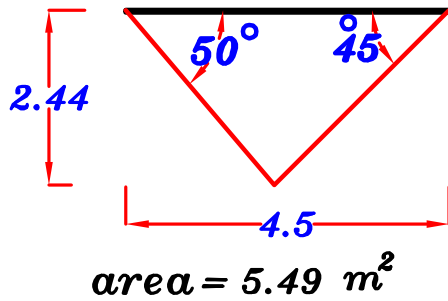
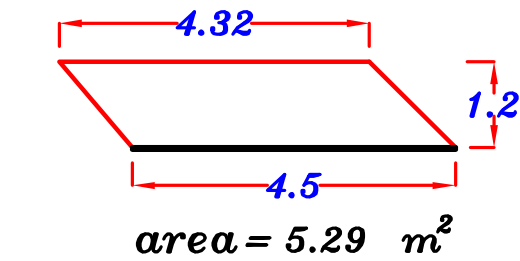
O.W. of beams & girders are reasonably assumed according to the expected depth.

Req.

- 1- Draw the structural plan showing the pattern of Load Distribution.
- 2- Calculate the equivalent load For shear and bending For all beams.
- 3- Draw S.F.D. & Absolute B.M.D. For the Girder.

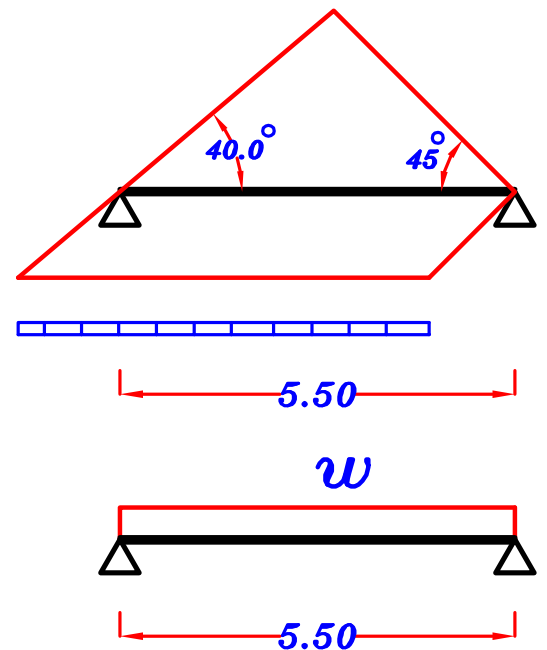
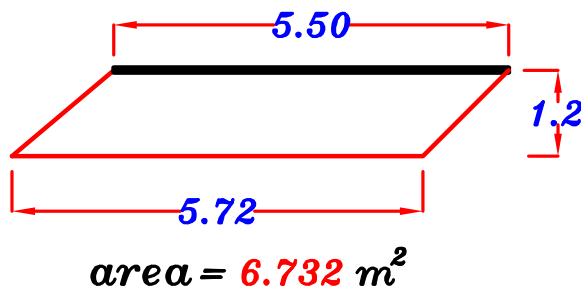
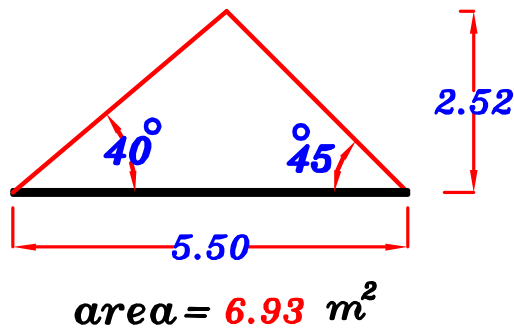


B₁



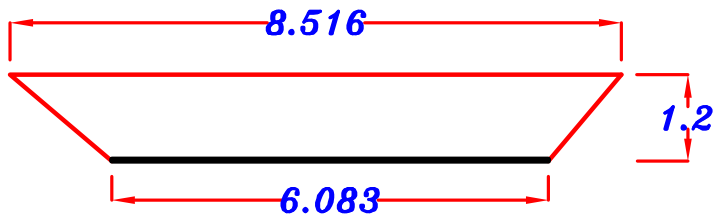
$$w = 0.w + \frac{\sum \text{area}}{\text{Span} = 4.50 \text{ m}} * w_s + \frac{\sum \text{weight} = b h \gamma_c * 4.32 \text{ m}}{\text{Span} = 4.50 \text{ m}}$$

B₂

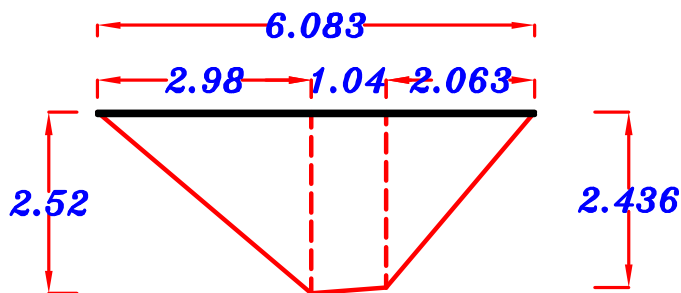
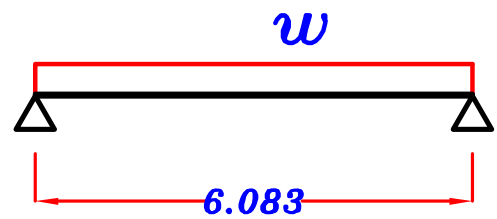
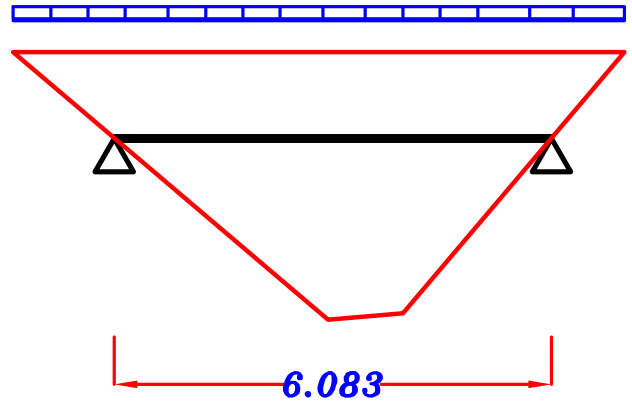


$$w = 0.w + \frac{\sum \text{area}}{\text{Span} = 5.50 \text{ m}} * w_s + \frac{\sum \text{weight} = b h \gamma_c * 5.72 \text{ m}}{\text{Span} = 5.50 \text{ m}}$$

B_3



$$area = 8.759 \text{ m}^2$$



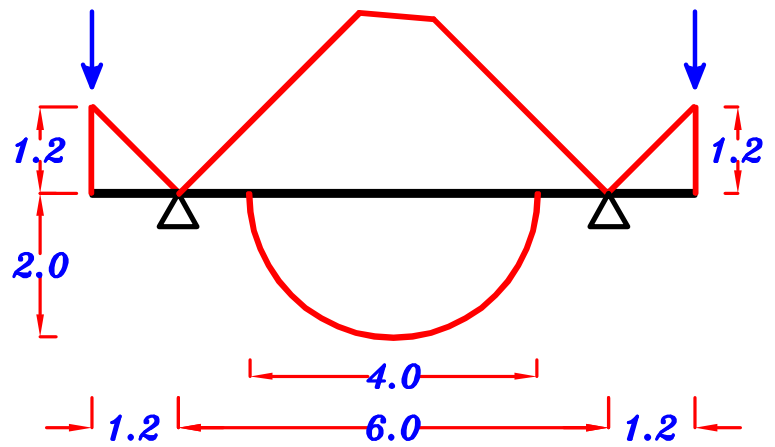
$$area = 8.844 \text{ m}^2$$

$$w = 0.w + \frac{\sum area}{Span = 6.083 \text{ m}} * w_s + \frac{\sum weight = b h \gamma_c * 8.516 \text{ m}}{Span = 6.083 \text{ m}}$$

G

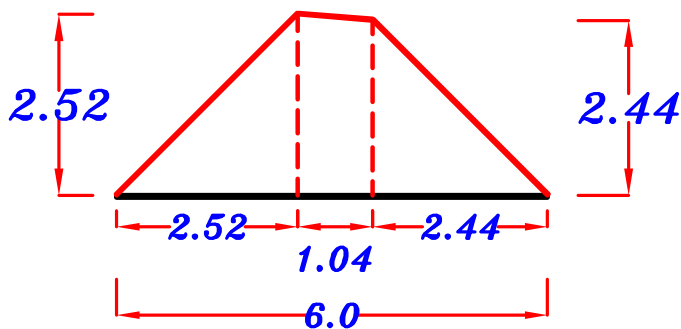
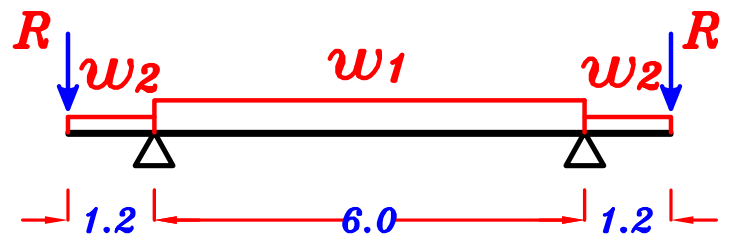
$R = \text{parapet weight}$

$R = \text{parapet weight}$

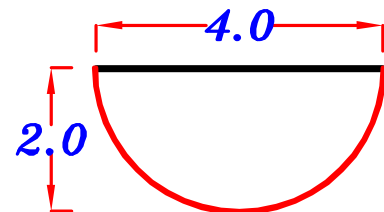


parapet weight

$$R = b h \gamma_c * 1.20 \text{ m}$$

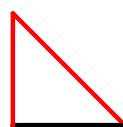


$$\text{area} = 8.731 \text{ m}^2$$



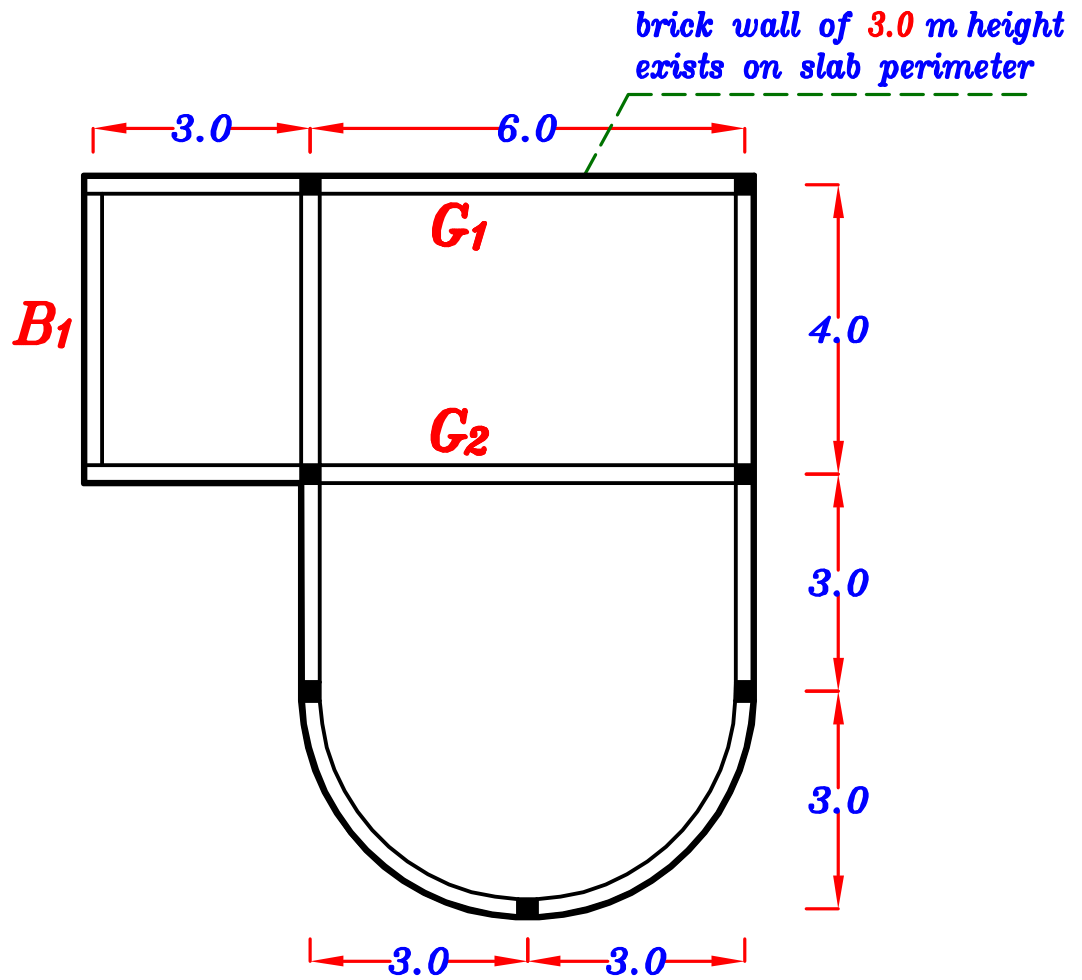
$$\text{area} = 6.283 \text{ m}^2$$

$$w_1 = 0. w + \frac{\sum \text{area}}{\text{Span} = 6.0 \text{ m}} * w_s$$



$$w_2 = 0. w + C_a w_s L_c$$

Example.

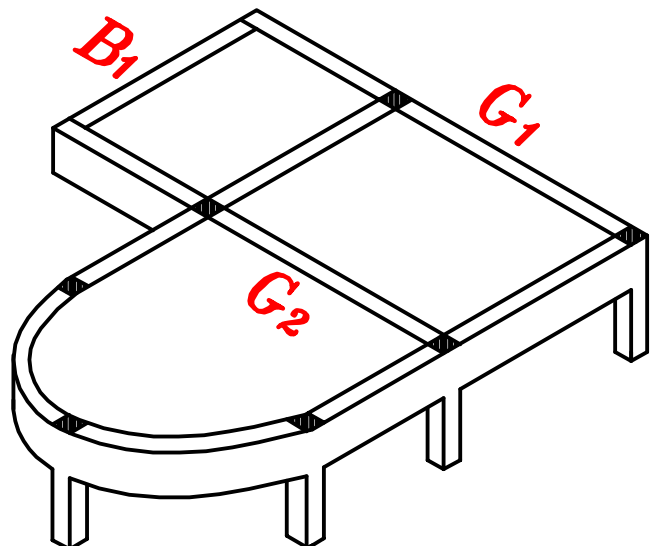
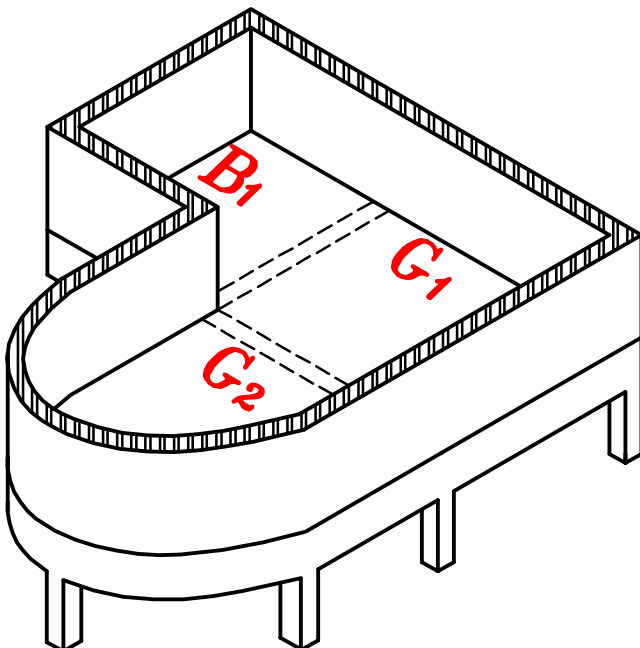


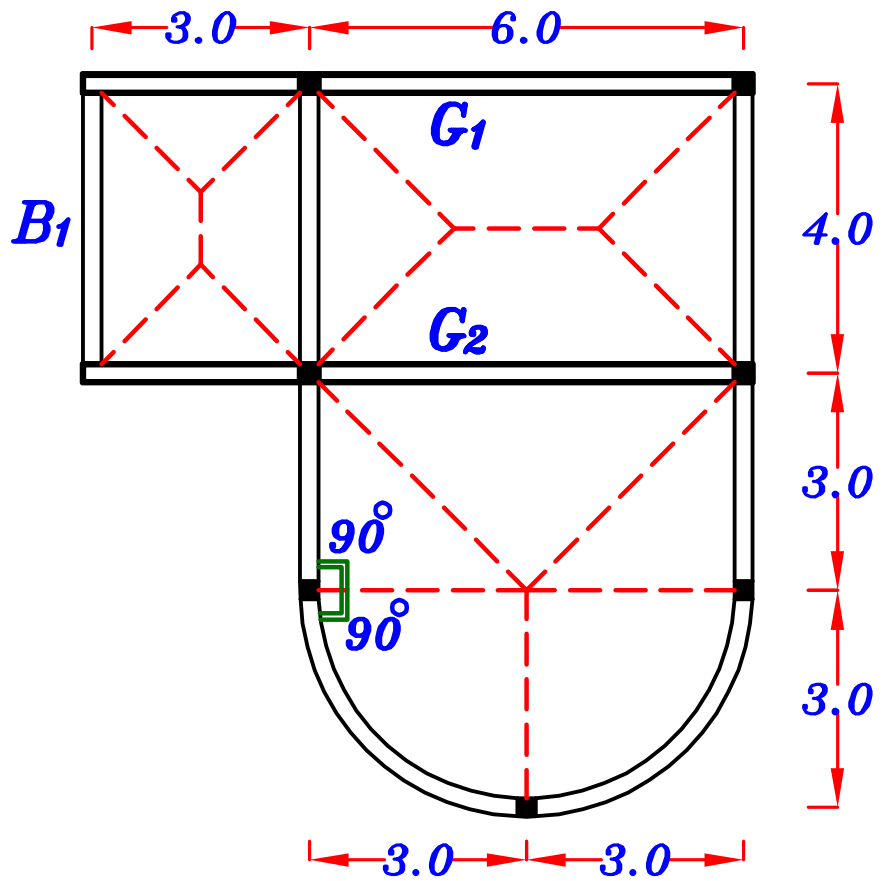
مطلوب حساب w_a و w_e لكل الكمرات .

و مطلوب رسم $max-max$ B.M.D. لل G_1 , G_2 girder

لذا سنحسب ال $Reactions$ فقط للكمرات المحمولة على ال $Girders$

الحائط على المحيط الخارجى فقط





$$F.C. = 2.0 \text{ kN/m}^2$$

$$L.L. = 2.0 \text{ kN/m}^2$$

$$\delta_{wall} = 18.0 \text{ kN/m}^3$$

$$b_{wall} = 0.25 \text{ m}$$

$$H_{wall} = 3.0 \text{ m}$$

$$g_s = t_s * \delta_c + F.C. = 0.16 * 25 + 2.0 = 6.0 \text{ kN/m}^2$$

$$p_s = L.L. = 2.0 \text{ kN/m}^2$$

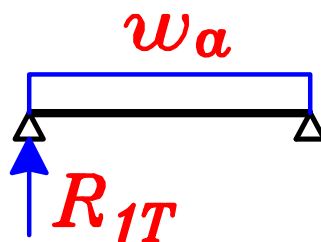
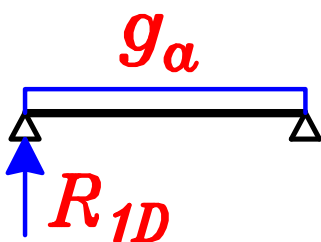
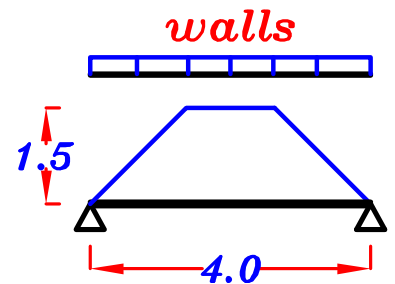
B1

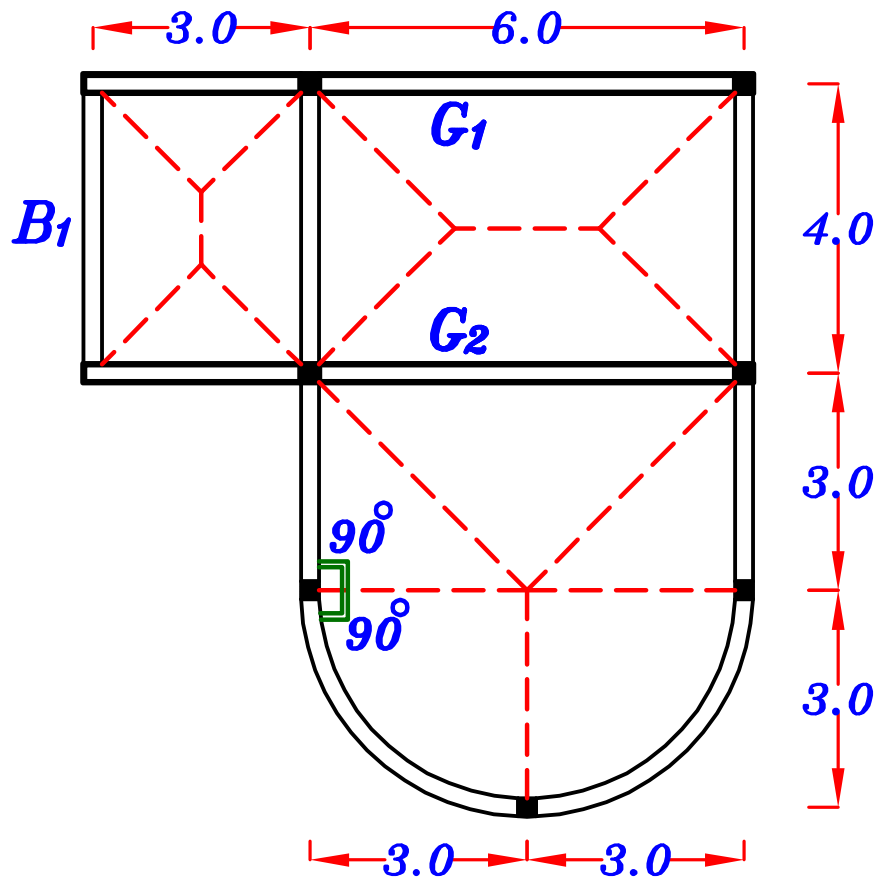
$$\frac{b * h_w * \delta_w}{0.25 * 3.0 * 18.0}$$

$$g_a = o.w. + walls + C_a * g_s * \frac{L_s}{2}$$

$$p_a = C_a * p_s * \frac{L_s}{2}$$

$$w_a = g_a + p_a$$





G₁

$$b * h_w * \delta_w$$

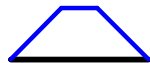
$$0.25 * 3.0 * 18.0$$



$$g_1 = o.w. + wall + C_e g_s * \frac{Lc}{2}$$

$$p_1 = C_e p_s * \frac{Lc}{2}$$

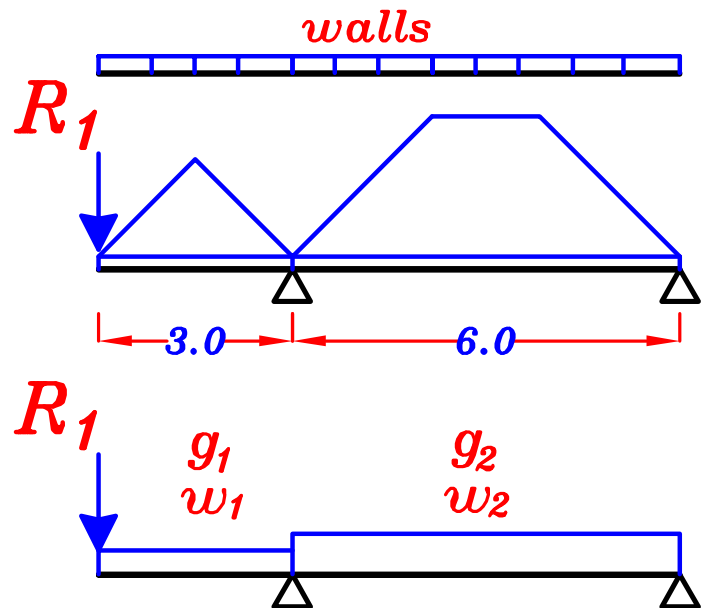
$$w_1 = g_1 + p_1$$

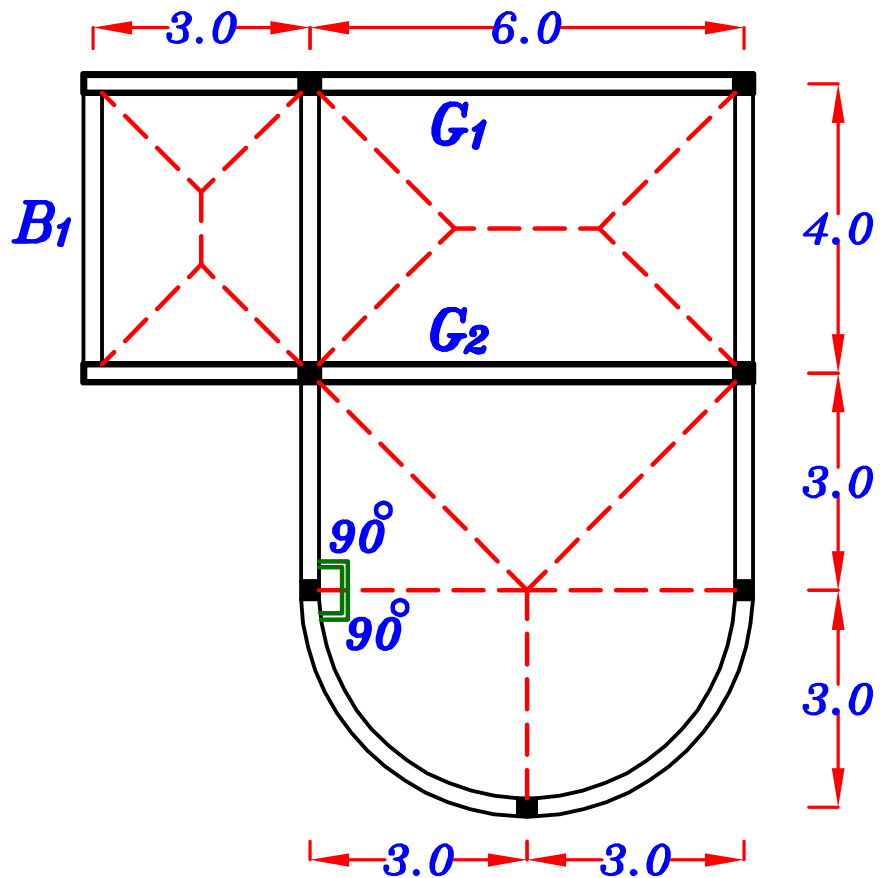


$$g_2 = o.w. + wall + C_e g_s * \frac{Ls}{2}$$

$$p_2 = C_e p_s * \frac{Ls}{2}$$

$$w_2 = g_2 + p_2$$





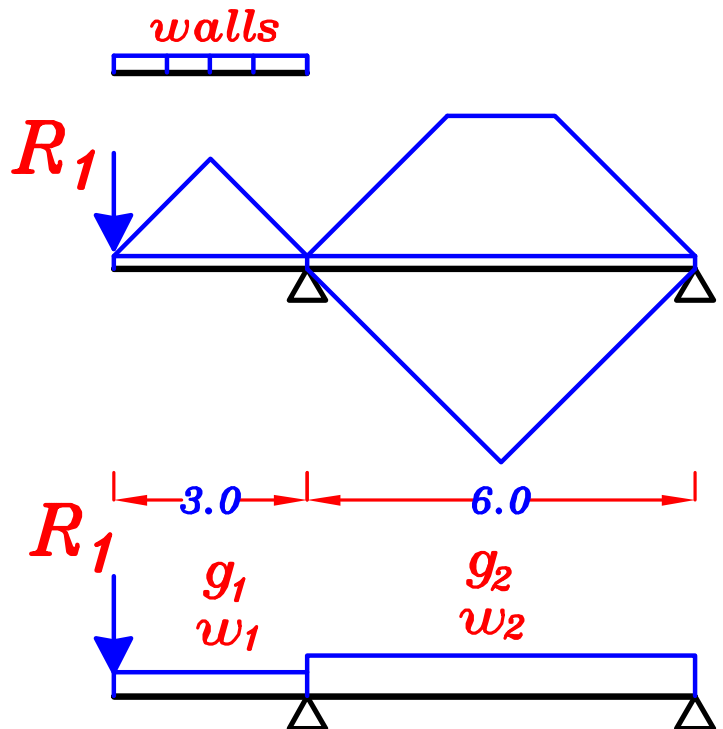
$$\underline{\underline{G_2}} = b * h_w * \delta_w$$

$$0.25 * 3.0 * 18.0$$

$$g_1 = o.w. + wall + C_e g_s * \frac{Lc}{2}$$

$$p_1 = C_e p_s * \frac{Lc}{2}$$

$$w_1 = g_1 + p_1$$

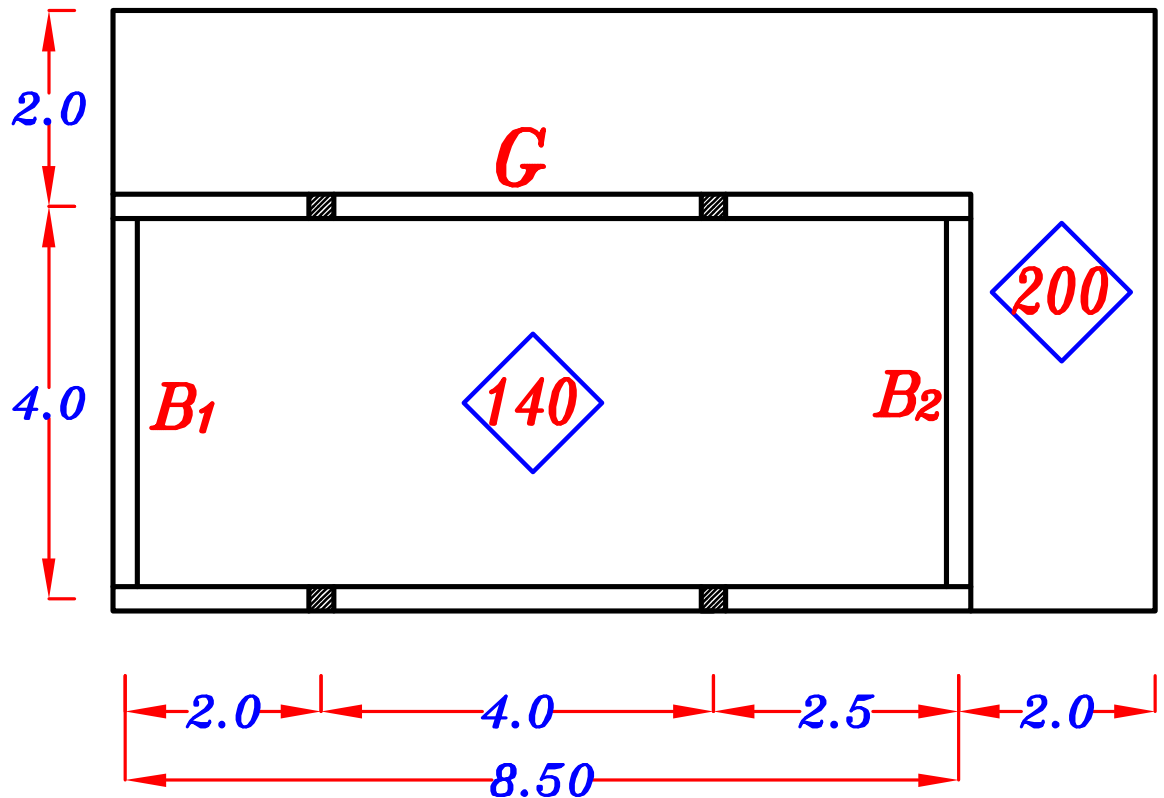


$$g_2 = o.w. + C_e g_s * \frac{Ls}{2} + C_e g_s * H$$

$$p_2 = C_e p_s * \frac{Ls}{2} + C_e p_s * H$$

$$w_2 = g_2 + p_2$$

Example.



$$F.C. = 1.5 \text{ kN/m}^2$$

$$L.L. = 2.0 \text{ kN/m}^2$$

For $t_s = 140 \text{ mm}$

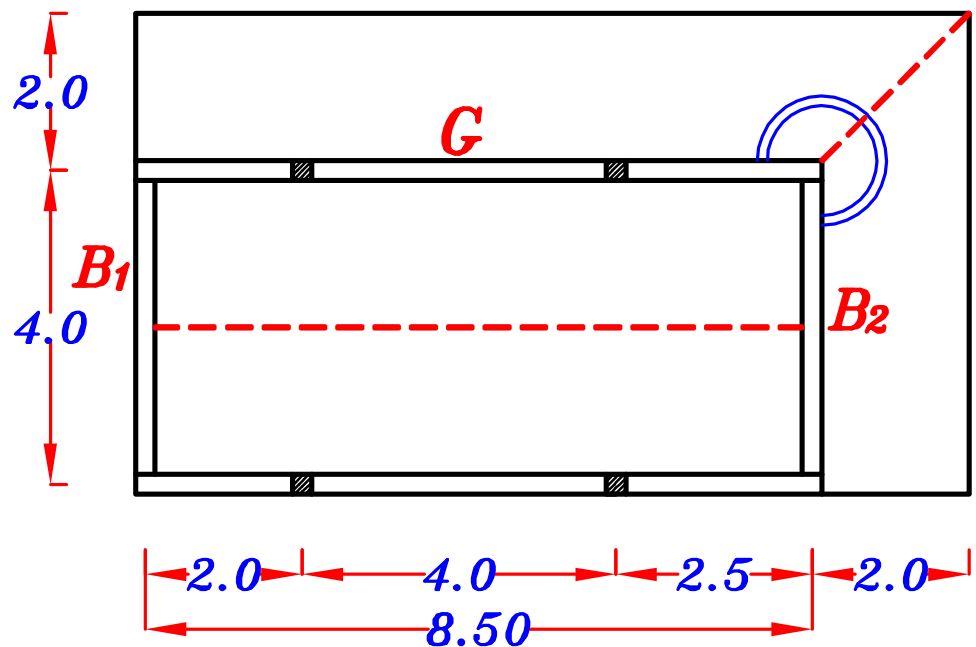
$$g_{s1} = t_{s1} * \gamma_c + F.C. = 0.14 * 25 + 1.50 = 5.0 \text{ kN/m}^2$$

$$p_s = L.L. = 2.0 \text{ kN/m}^2$$

For $t_s = 200 \text{ mm}$

$$g_{s2} = t_{s2} * \gamma_c + F.C. = 0.20 * 25 + 1.50 = 6.50 \text{ kN/m}^2$$

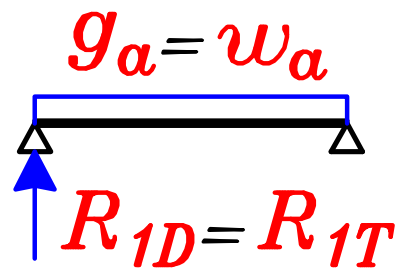
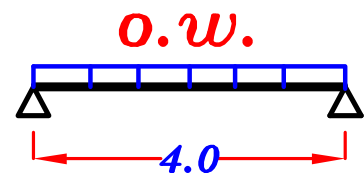
$$p_s = L.L. = 2.0 \text{ kN/m}^2$$



B₁

$$g_a = o.w. \quad p_a = \text{zero}$$

$$w_a = g_a + p_a = g_a$$

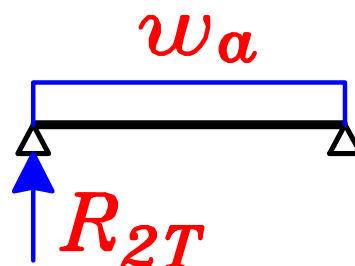
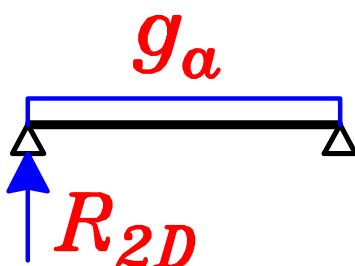
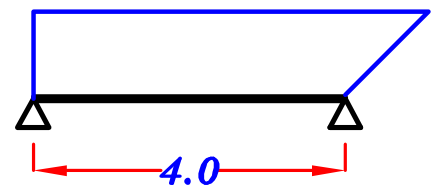


B₂

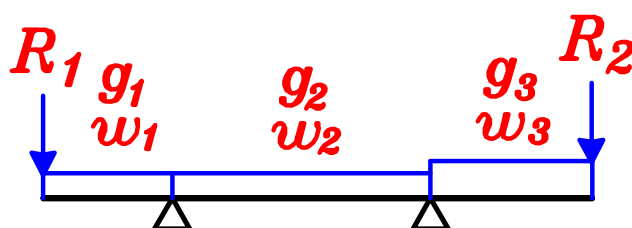
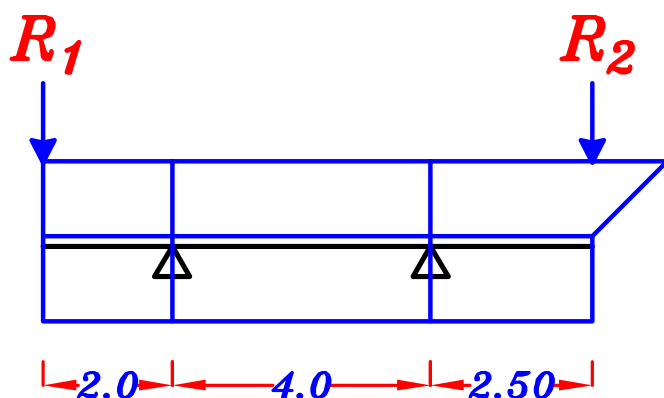
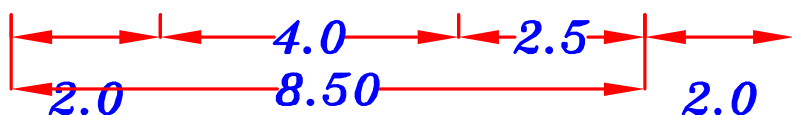
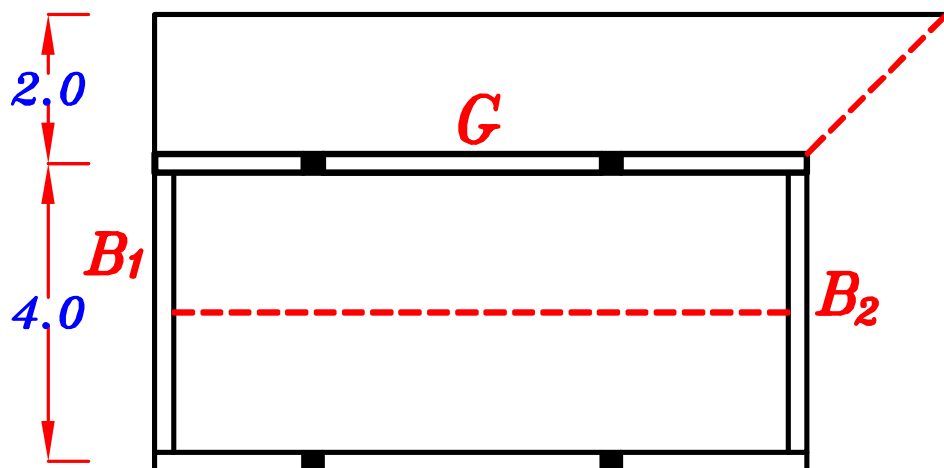
$$g_a = o.w. + \frac{\Sigma \text{area}}{\text{Span}} * g_{S2}$$

$$p_a = \frac{\Sigma \text{area}}{\text{Span}} * p_s$$

$$w_a = g_a + p_a$$



G



$$g_1 = g_2 = o.w. + g_{s1} * \frac{L_s}{2} + g_{s2} * L_c$$

$$p_1 = p_2 = p_s * \frac{L_s}{2} + p_s * L_c$$

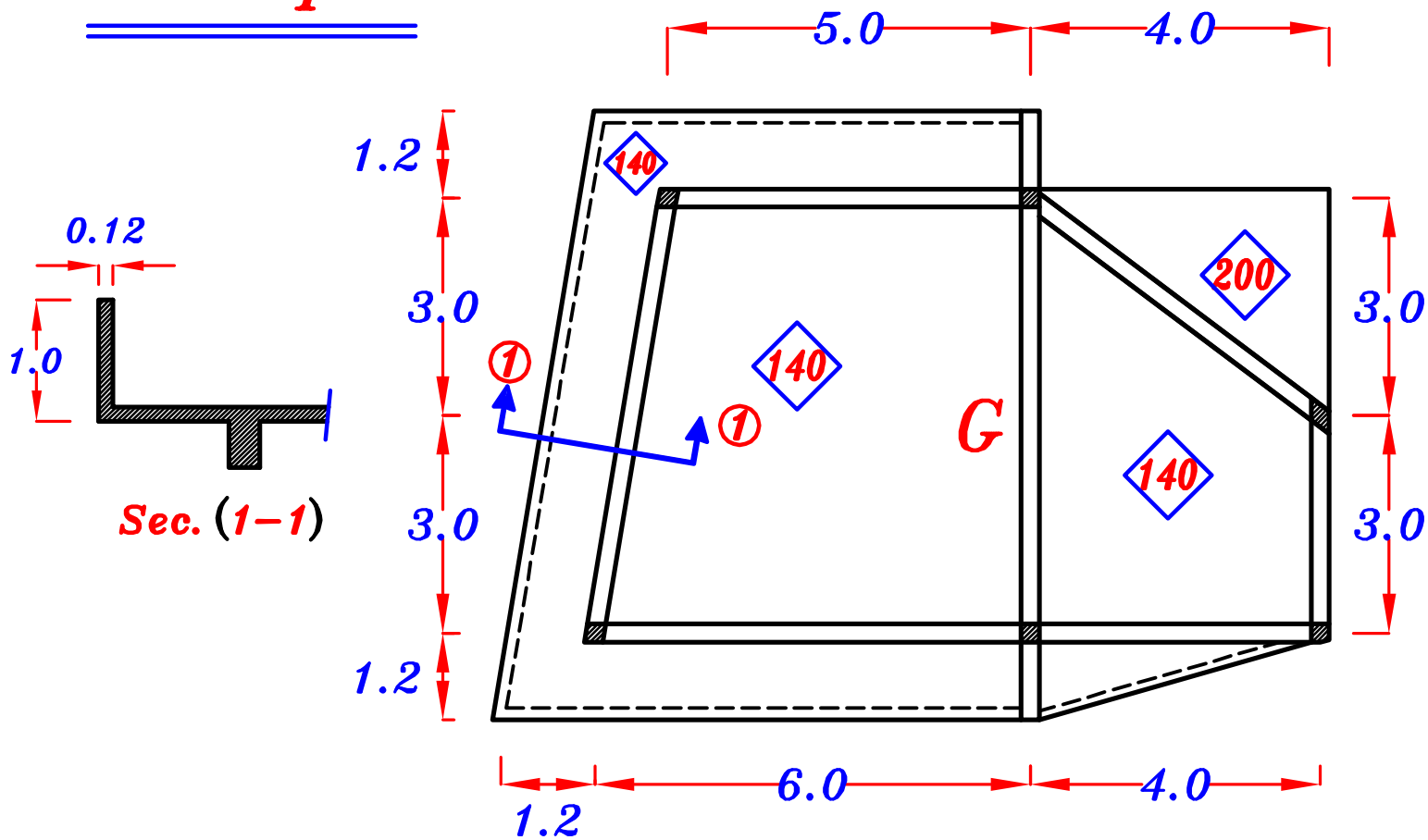
$$w_1 = w_2 = g_1 + p_1$$

$$g_3 = o.w. + g_{s1} * \frac{L_s}{2} + \frac{\sum area}{Span} * g_{s2}$$

$$p_3 = p_s * \frac{L_s}{2} + \frac{\sum area}{Span} * p_s$$

$$w_3 = g_3 + p_3$$

Example.



$$F.C. = 1.5 \text{ kN/m}^2$$

$$\text{Fence weight} = b h \gamma_c$$

$$L.L. = 3.0 \text{ kN/m}^2$$

$$= 0.12 * 1.0 * 25 \text{ (kN/m}^2\text{)}$$

For $t_s = 140 \text{ mm}$

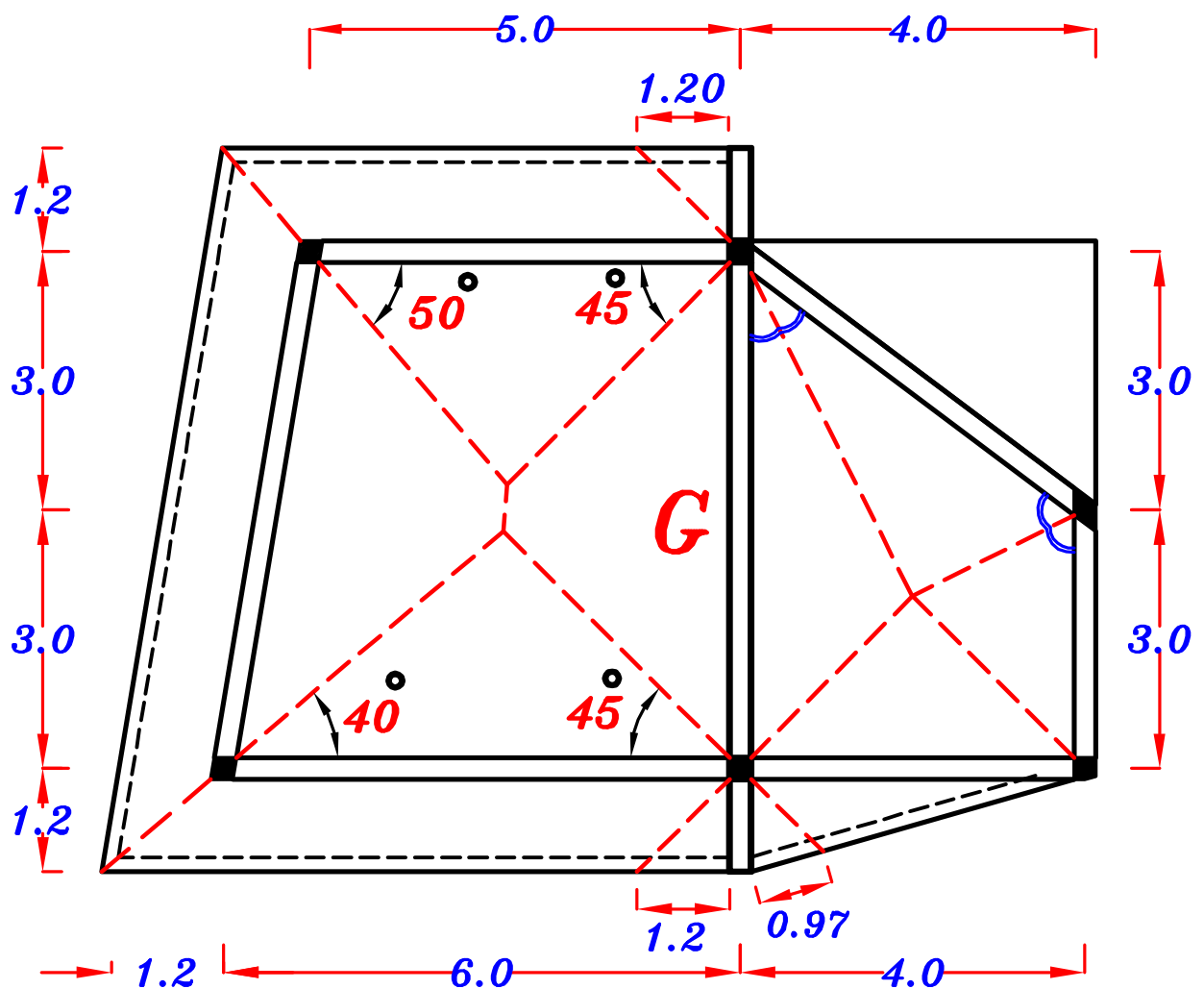
$$g_{s1} = t_{s1} * \gamma_c + F.C. = 0.14 * 25 + 1.50 = 5.0 \text{ kN/m}^2$$

$$p_s = L.L. = 3.0 \text{ kN/m}^2$$

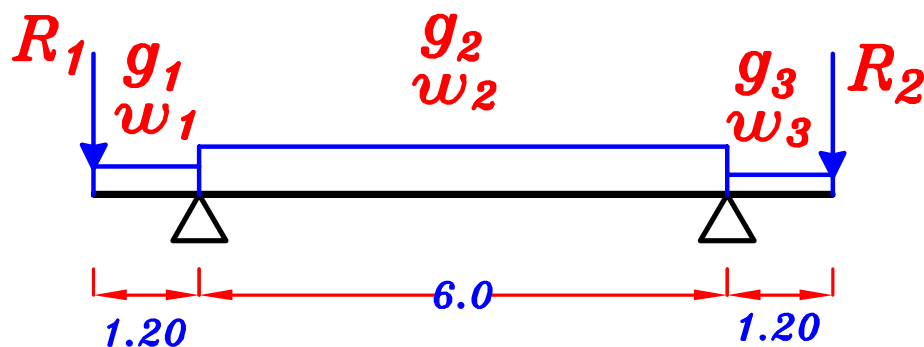
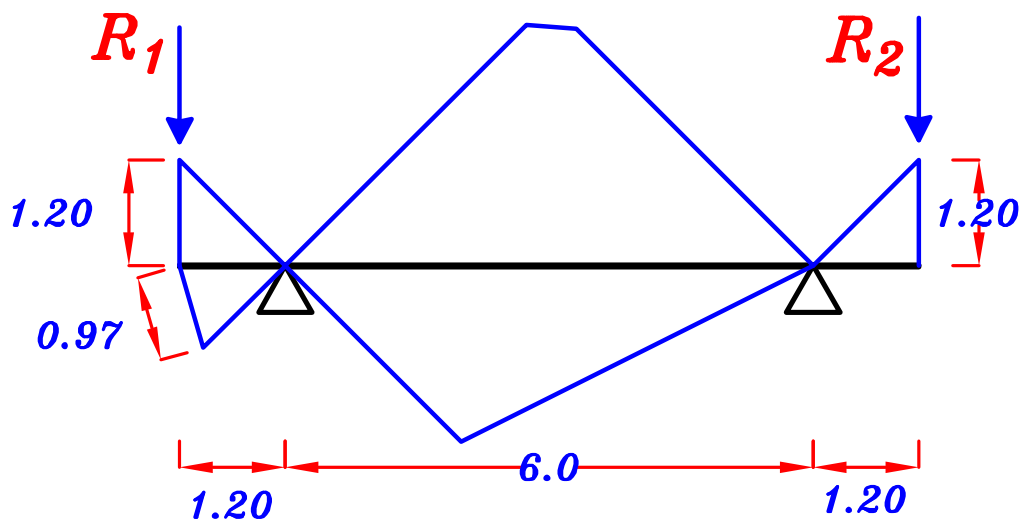
For $t_s = 200 \text{ mm}$

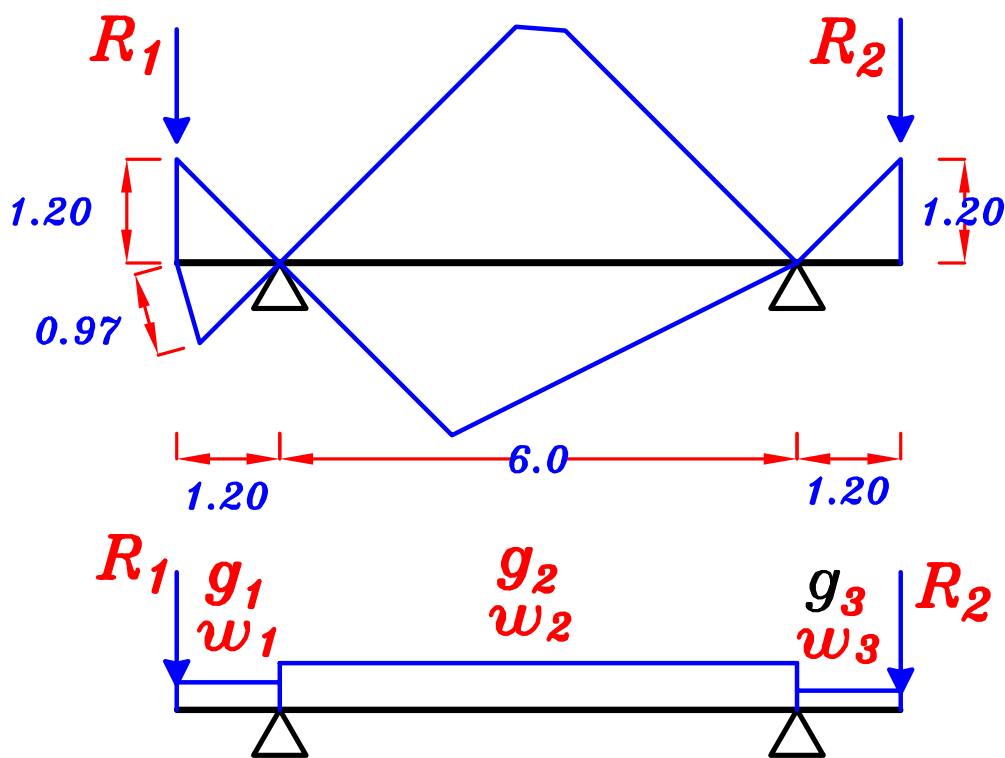
$$g_{s2} = t_{s2} * \gamma_c + F.C. = 0.20 * 25 + 1.50 = 6.50 \text{ kN/m}^2$$

$$p_s = L.L. = 3.0 \text{ kN/m}^2$$



ممکن قیاس ای بعد من علی الرسمه اذا کانت مرسومه *to scale*





$$R_1 = b h \delta_c * (1.2 + 0.97) \quad , \quad R_2 = b h \delta_c * (1.2)$$

$$g_1 = o.w. + C_e g_{s1} * L_c + \frac{\sum area}{Span} * g_{s1}$$

$$p_1 = C_e p_s * L_c + \frac{\sum area}{Span} * p_s$$

$$w_1 = g_1 + p_1$$

$$g_2 = o.w. + \frac{\sum area}{Span} * g_{s1}$$

$$p_2 = \frac{\sum area}{Span} * p_s$$

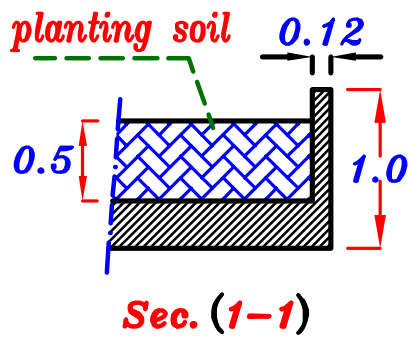
$$w_2 = g_2 + p_2$$

$$g_3 = o.w. + C_e g_{s1} * L_c$$

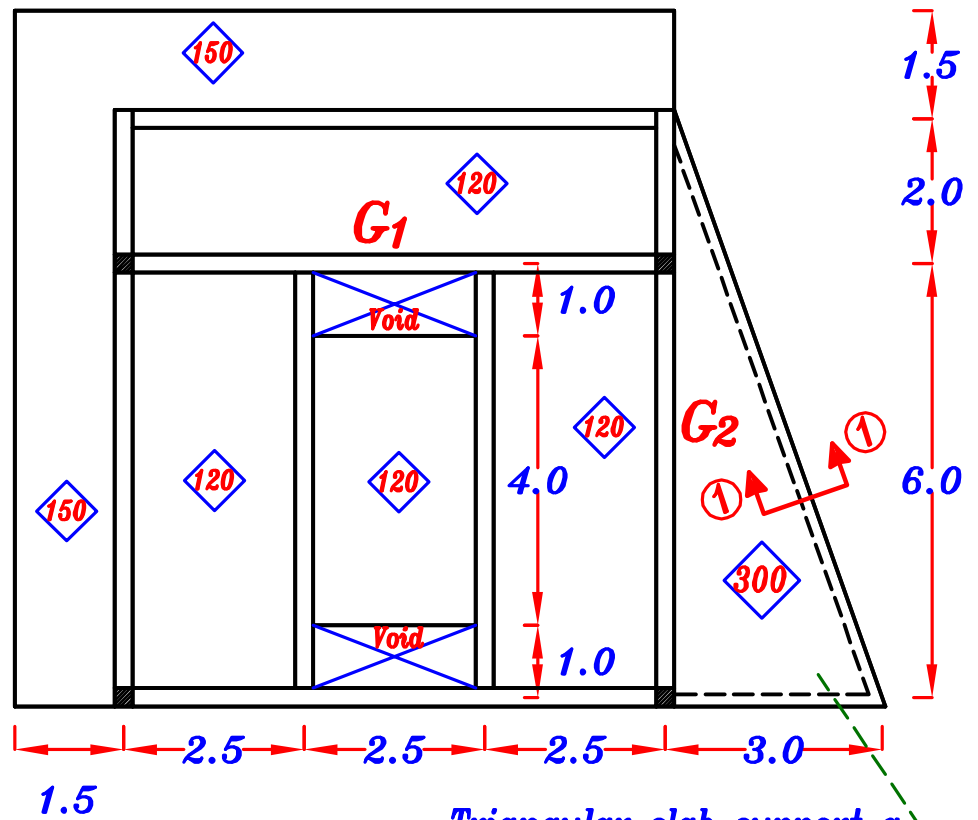
$$p_3 = C_e p_s * L_c$$

$$w_3 = g_3 + p_3$$

Example.



$$\delta_{\text{soil}} = 20 \text{ kN/m}^3$$



$$F.C. = 1.5 \text{ kN/m}^2$$

$$L.L. = 3.0 \text{ kN/m}^2$$

$$\text{Fence weight} = b h \delta_c = 0.12 * 1.0 * 25 \text{ (kN/m)}$$

$$\text{For } t_s = 120 \text{ mm}$$

$$g_{s1} = t_{s1} * \delta_c + F.C. = 0.12 * 25 + 1.50 = 4.5 \text{ kN/m}^2$$

$$p_s = L.L. = 3.0 \text{ kN/m}^2$$

$$\text{For } t_s = 150 \text{ mm}$$

$$g_{s2} = t_{s2} * \delta_c + F.C. = 0.15 * 25 + 1.50 = 5.25 \text{ kN/m}^2$$

$$p_s = L.L. = 3.0 \text{ kN/m}^2$$

$$\text{For } t_s = 300 \text{ mm}$$

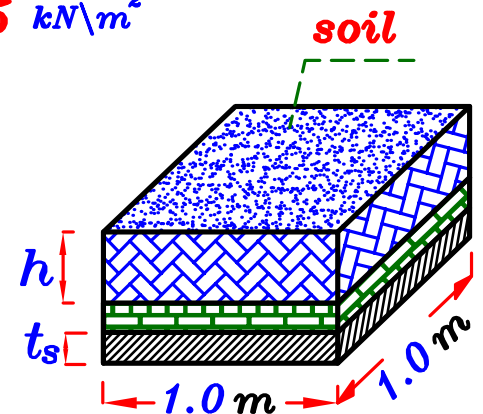
$$g_{s3} = t_{s3} * \delta_c + F.C. + \text{Soil}$$

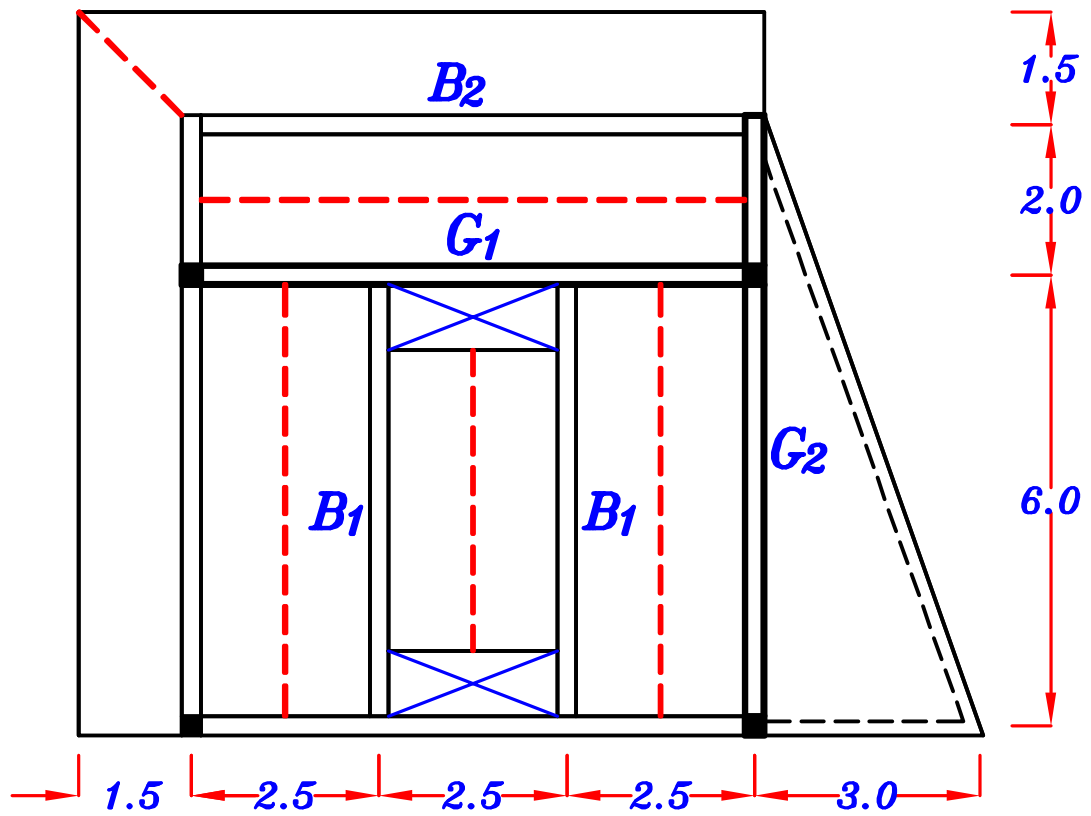
$$= 0.30 * 25 + 1.50 + 0.5 * 20 = 19.0 \text{ kN/m}^2$$

عزل رطوبه

$h_{(1.0 \times 1.0)} \delta_{\text{soil}}$

$$p_s = L.L. = 3.0 \text{ kN/m}^2$$




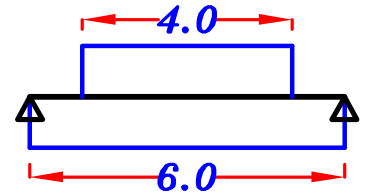


B₁

$$g_a = o.w. + g_{s1} * \frac{L_s}{2} + \frac{\sum area}{Span} * g_{s1}$$

$$p_a = p_s * \frac{L_s}{2} + \frac{\sum area}{Span} * p_s$$

$$w_a = g_a + p_a$$

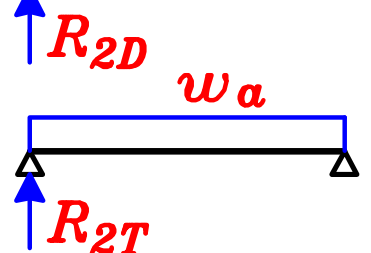
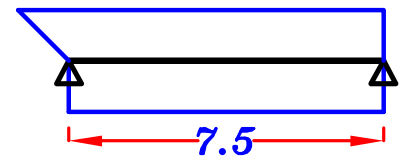


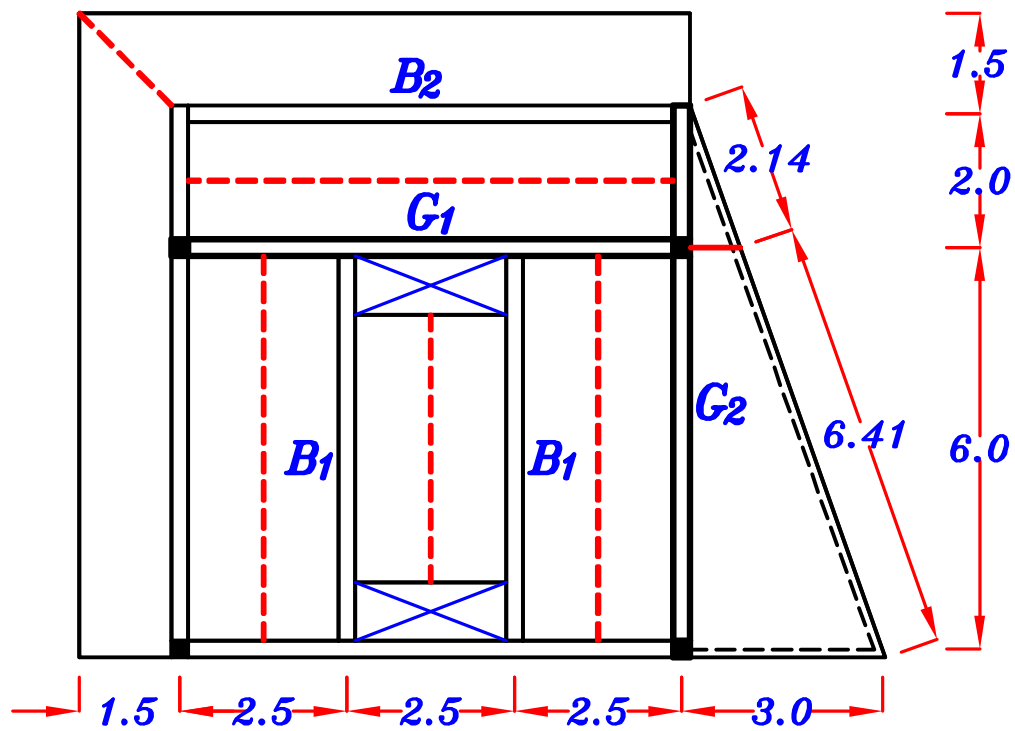
B₂

$$g_a = o.w. + g_{s1} * \frac{L_s}{2} + \frac{\sum area}{Span} * g_{s2}$$

$$p_a = p_s * \frac{L_s}{2} + \frac{\sum area}{Span} * p_s$$

$$w_a = g_a + p_a$$





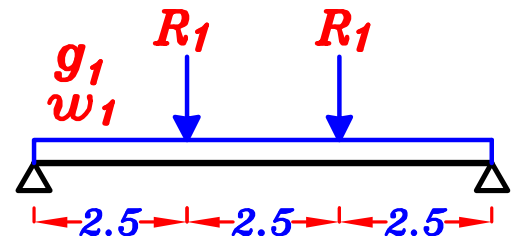
G_1




$$g_1 = o.w. + g_{s1} * \frac{L_s}{2}$$

$$p_1 = p_s * \frac{L_s}{2}$$

$$w_1 = g_1 + p_1$$



G_2



Fence weight

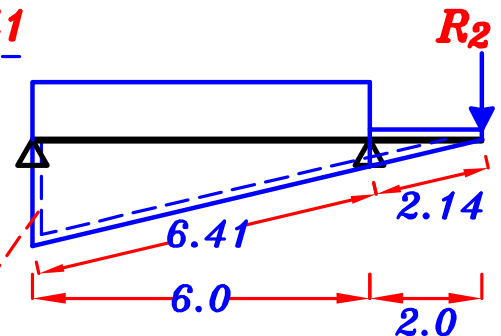
$$bh \delta_c * 6.41$$

$$g_1 = o.w. + g_{s1} * \frac{L_s}{2} + \frac{\sum \text{area}}{\text{Span}} * g_{s3} + \frac{\sum \text{weight}}{\text{Span}}$$

$$p_1 = p_s * \frac{L_s}{2} + \frac{\sum \text{area}}{\text{Span}} * p_s$$

$$w_1 = g_1 + p_1$$

وزن هذا الجزء يذهب مباشرة الى العمود

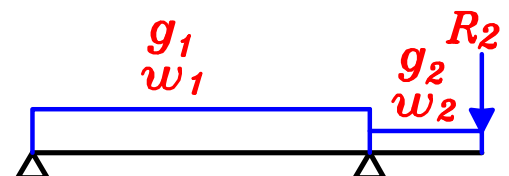


$$g_2 = o.w. + \frac{\sum \text{area}}{\text{Span}} * g_{s3} + \frac{\sum \text{weight}}{\text{Span}}$$

$$bh \delta_c * 2.14$$

$$p_2 = \frac{\sum \text{area}}{\text{Span}} * p_s$$


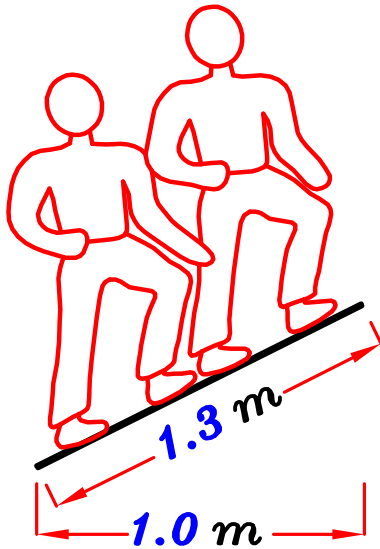
$$w_2 = g_2 + p_2$$



Inclined Slabs. البلاطات المائلة

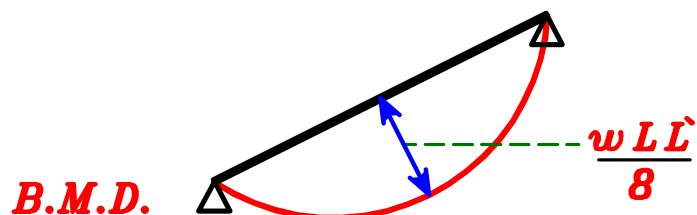
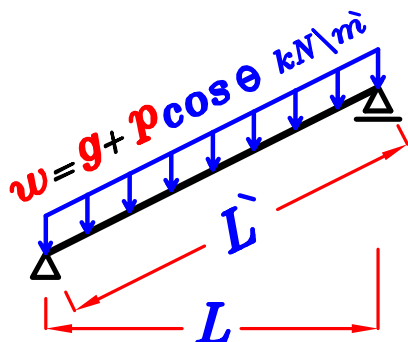
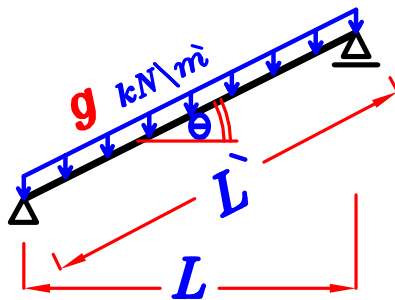
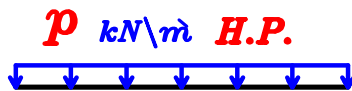
هناك نقطتان أساسيتان يجب أن تؤخذا فى الإعتبار مع البلاطات المائلة :

- 1- جميع الأحمال تؤخذ على الطول المائل .
ماعدا الحمل الحى **L.L.** يؤخذ على الطول الأفقى .



H.P. Horizontal Projection المسقط الأفقى

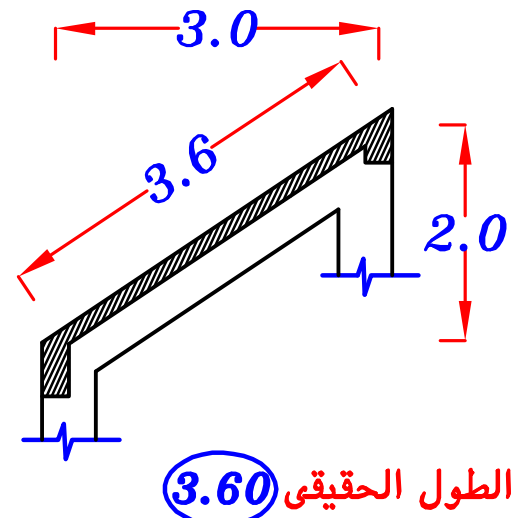
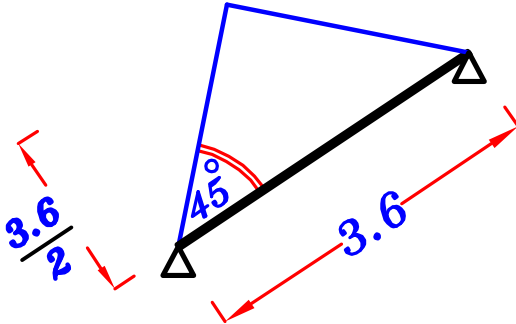
عدد الأشخاص الذين يستطيعوا أن يقفوا على 1, - م أفقى فقط
هو نفس عدد الأشخاص الذين يستطيعوا أن يقفوا على 1,3 م مائل .



٢- عند توزيع الأحمال في البلاطات المائلة يجب أن نأخذ الأطوال الحقيقية و ليس المساقط .

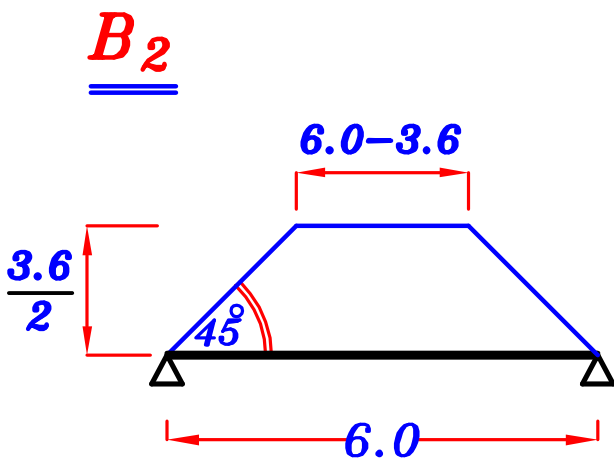
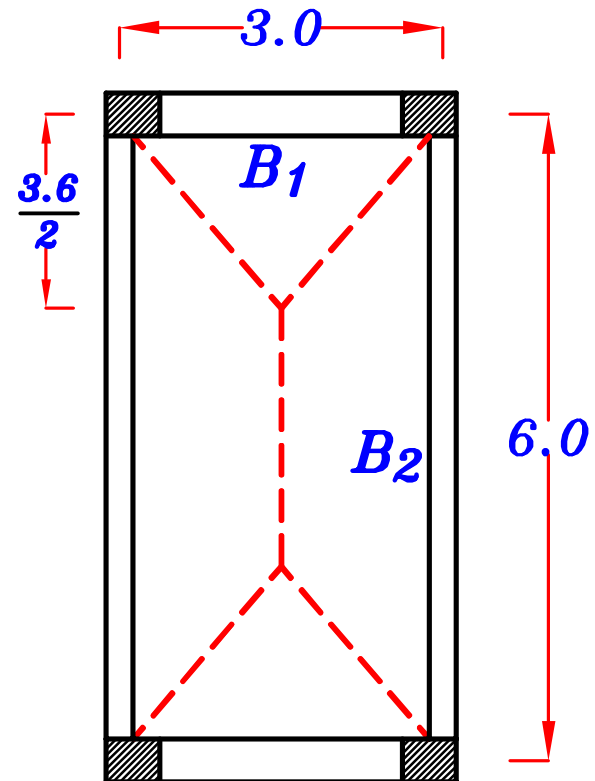
Example.

B_1



$$w_{si} = t_s \delta_c + F.C. + L.L. \cos \theta = \checkmark \text{ kN/m}^2$$

$$w = 0.W. + walls + C_a w_{si} \left(\frac{3.6}{2} \right) = \checkmark \text{ kN/m}$$



$$C_a = 1 - \frac{1}{2} \left(\frac{3.6}{6.0} \right)$$

$$C_e = 1 - \frac{1}{3} \left(\frac{3.6}{6.0} \right)^2$$

$$w_{si} = t_s \delta_c + F.C. + L.L. \cos \theta = \checkmark \text{ kN/m}^2$$

$$w = 0.W. + walls + C_a w_{si} \left(\frac{3.6}{2} \right) = \checkmark \text{ kN/m}$$

Max–Max B.M.D.

For Inclined Slabs

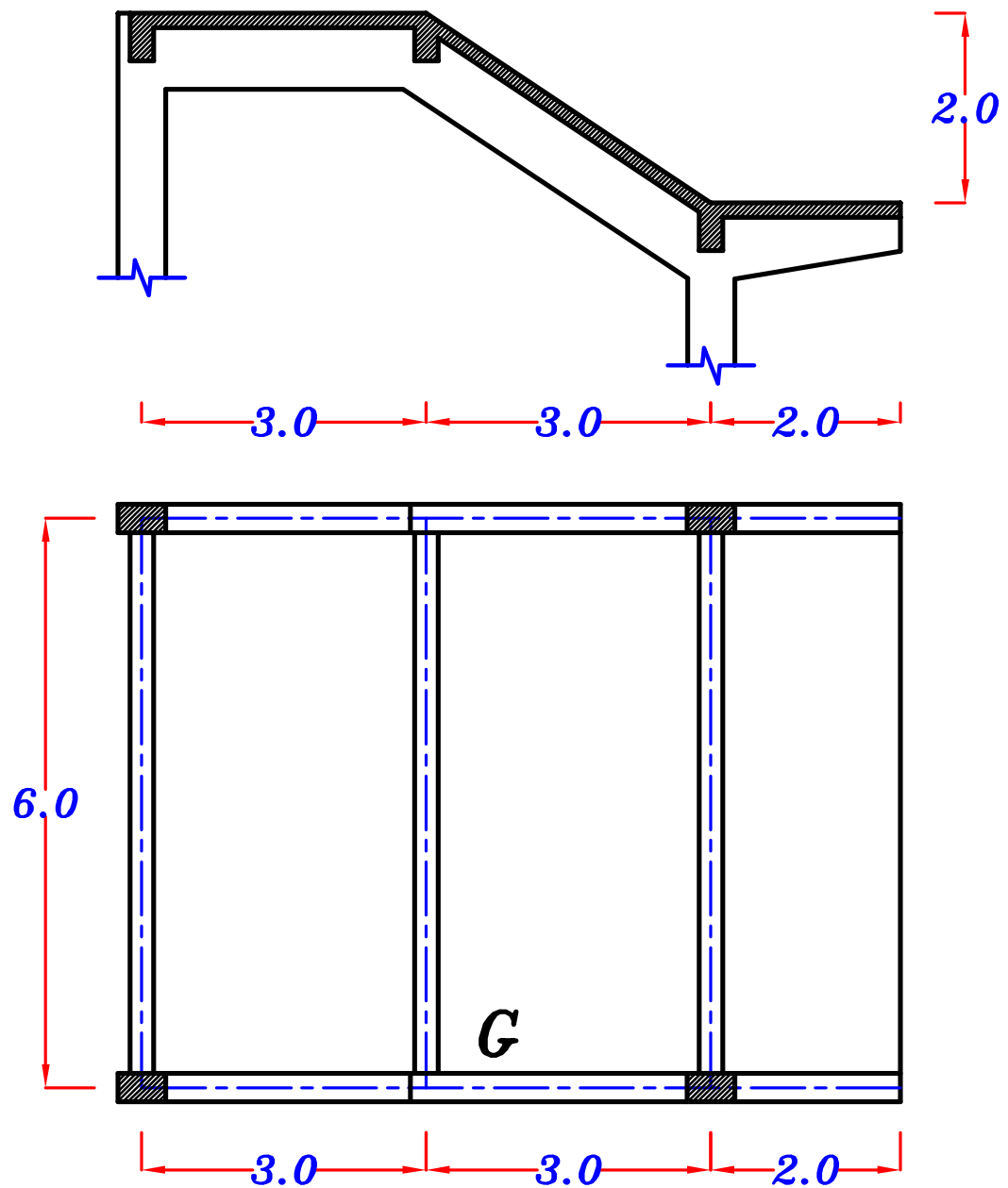
Load of the Slab.

$$g_s = t_s * \delta_c + F.C. \quad \text{For Horizontal \& Inclined Slabs}$$

$$p_{sh} = L.L. \quad \text{For Horizontal Slabs}$$

$$p_{si} = L.L. \cos \theta \quad \text{For Inclined Slabs}$$

Example.

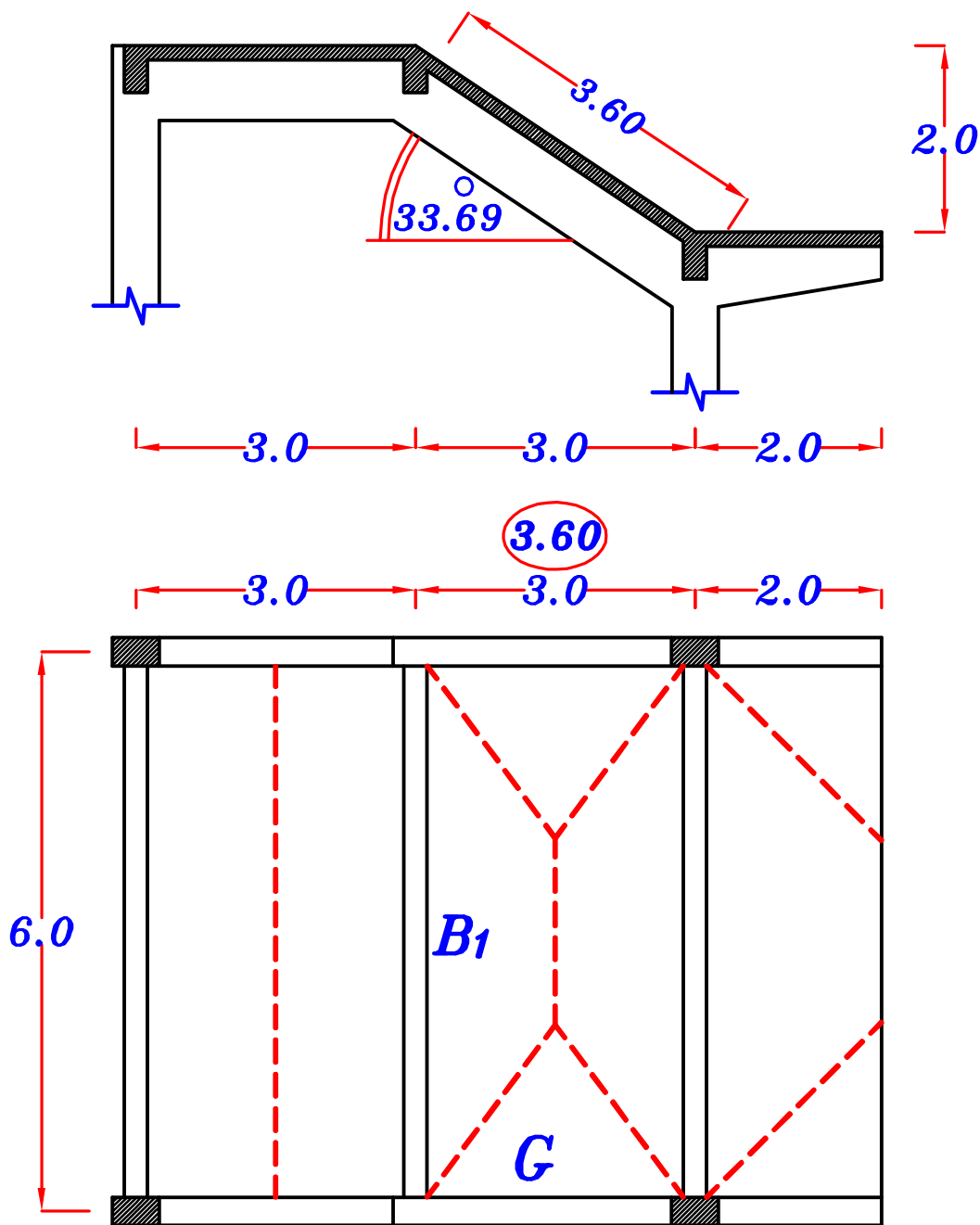


Data.

$t_s = 0.12 \text{ m}$, $F.C. = 1.50 \text{ kN/m}^2$, $L.L. = 2.0 \text{ kN/m}^2$
 $O.W. \text{ of Beam} = 3.0 \text{ kN/m}$, $O.W. \text{ of Girder} = 5.0 \text{ kN/m}$

Req.

- 1- Draw max.-max. B.M.D. For the Girder.
- 2- Draw S.F.D. & N.F.D. Case of total load only.



g_s, p_s

$$g_s = t_s * \gamma_c + F.C. = 0.12 * 25 + 1.50 = 4.50 \text{ kN/m}^2$$

$$p_{sh} = L.L. = 2.0 \text{ kN/m}^2 \text{ ----- HL. Slab.}$$

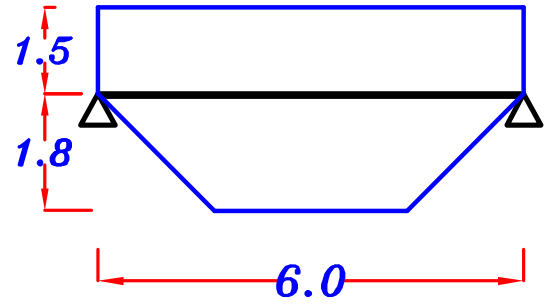
$$p_{si} = L.L. * \cos \theta = 2.0 * \cos 33.69^\circ = 1.66 \text{ kN/m}^2 \text{ ---- Inclined Slab.}$$

$$\boxed{g_s = 4.50 \text{ kN/m}^2}, \boxed{p_{sh} = 2.0 \text{ kN/m}^2}, \boxed{p_{si} = 1.66 \text{ kN/m}^2}$$

B₁

For Trapezoid

$$C_a = 1 - \frac{1}{2} \left(\frac{L_s}{L} \right) = 1 - \frac{1}{2} \left(\frac{3.6}{6.0} \right) = 0.70$$



$$g_a = 0.W. + g_s \frac{L_s}{2} + C_a g_s \frac{L_s}{2}$$

$$= 3.0 + (4.50) \left(\frac{3}{2} \right) + (0.70) (4.50) \left(\frac{3.60}{2} \right) = 15.42 \text{ kN}\backslash\text{m}^{\text{`}}$$

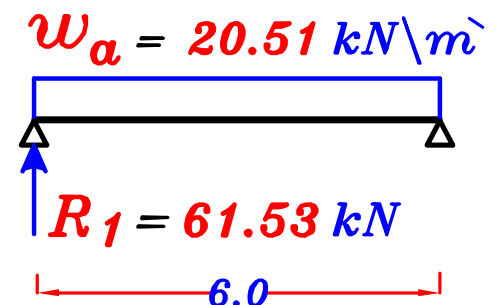
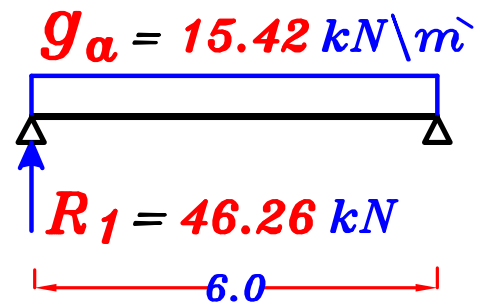
$$p_a = p_{sh} \frac{L_s}{2} + C_a p_{si} \frac{L_s}{2}$$

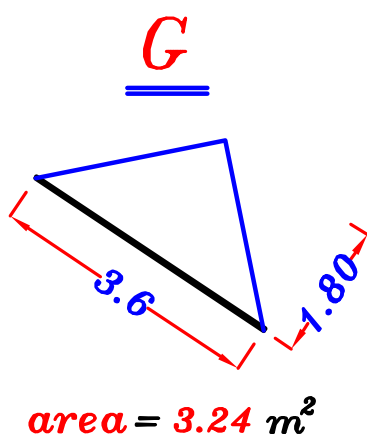
$$= (2.0) \left(\frac{3}{2} \right) + (0.70) (1.66) \left(\frac{3.60}{2} \right) = 5.09 \text{ kN}\backslash\text{m}^{\text{`}}$$

$$w_a = g_a + p_a = 15.42 + 5.09 = 20.51 \text{ kN}\backslash\text{m}^{\text{`}}$$

$$R_1 = 46.26 \text{ kN} \text{ --- D.L.}$$

$$= 61.53 \text{ kN} \text{ --- T.L.}$$

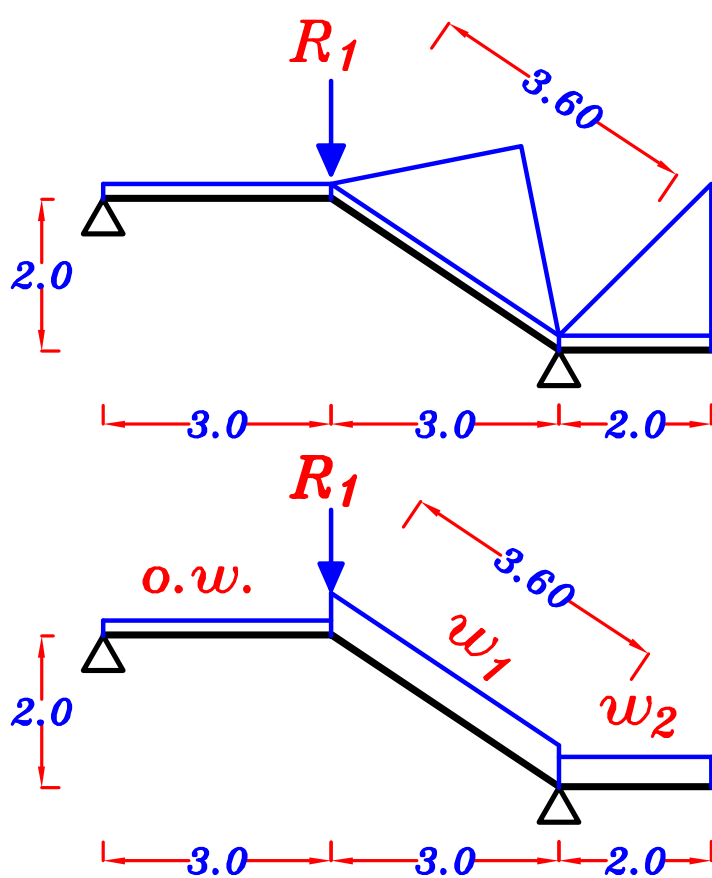




For Triangle

$$C_a = \frac{1}{2}, \quad C_e = \frac{2}{3}$$

w₁



Load For Shear = Load For Moment

$$g_1 = 0.W. + \frac{\Sigma \text{area}}{\text{span}} * g_s = 5.0 + \left(\frac{3.24}{3.60}\right)(4.50) = 9.05 \text{ kN/m}$$

$$p_1 = \frac{\Sigma \text{area}}{\text{span}} * p_{si} = \left(\frac{3.24}{3.60}\right)(1.66) = 1.49 \text{ kN/m}$$

$$w_1 = g_1 + p_1 = 9.05 + 1.49 = 10.54 \text{ kN/m}$$

w₂

Load For shear.

$$g_a = 0.W. + C_a g_s L_c = 5.0 + \frac{1}{2}(4.50)(2.0) = 9.50 \text{ kN/m}$$

$$p_a = C_a p_{sh} L_c = \frac{1}{2}(2.0)(2.0) = 2.0 \text{ kN/m}$$

$$w_a = g_a + p_a = 9.50 + 2.0 = 11.50 \text{ kN/m}$$

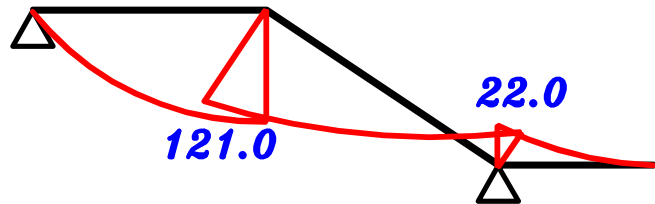
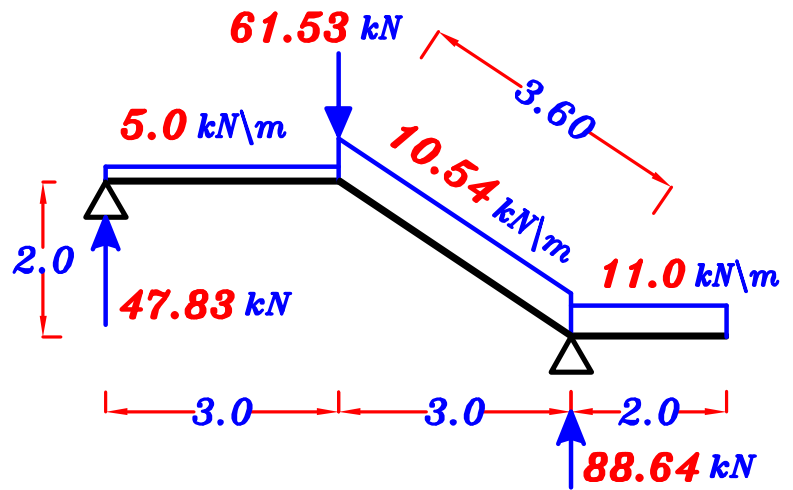
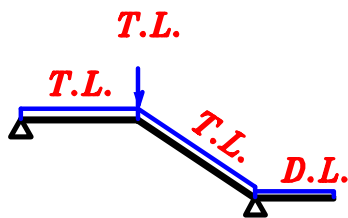
Load For Moment.

$$g_e = 0.W. + C_e g_s L_c = 5.0 + \frac{2}{3}(4.50)(2.0) = 11.0 \text{ kN/m}$$

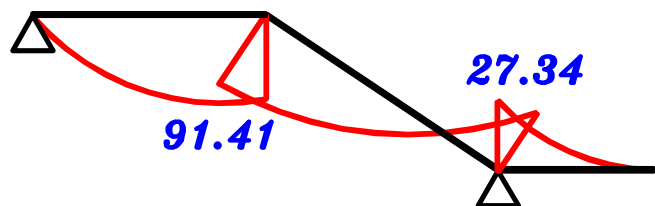
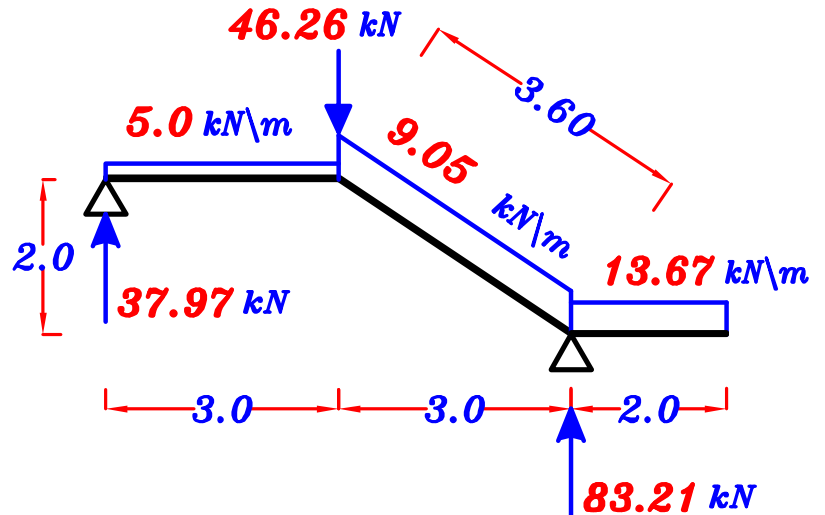
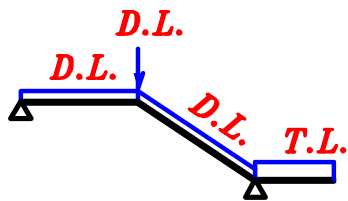
$$p_e = C_e p_{sh} L_c = \frac{2}{3}(2.0)(2.0) = 2.67 \text{ kN/m}$$

$$w_e = g_e + p_e = 11.0 + 2.67 = 13.67 \text{ kN/m}$$

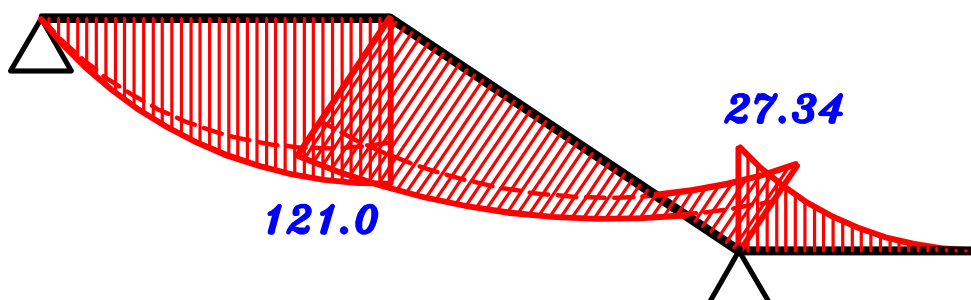
1- max. +ve B.M.D.



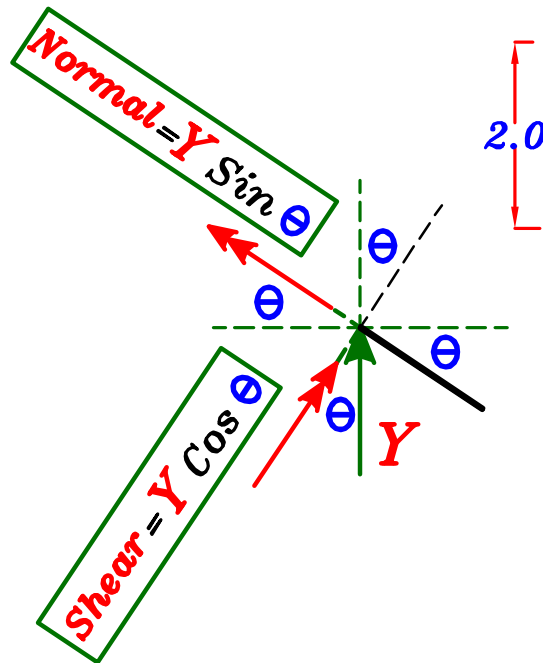
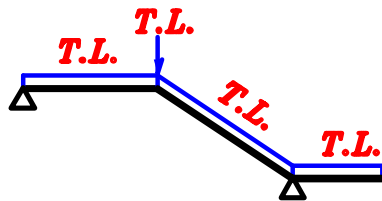
2- max. -ve B.M.D.



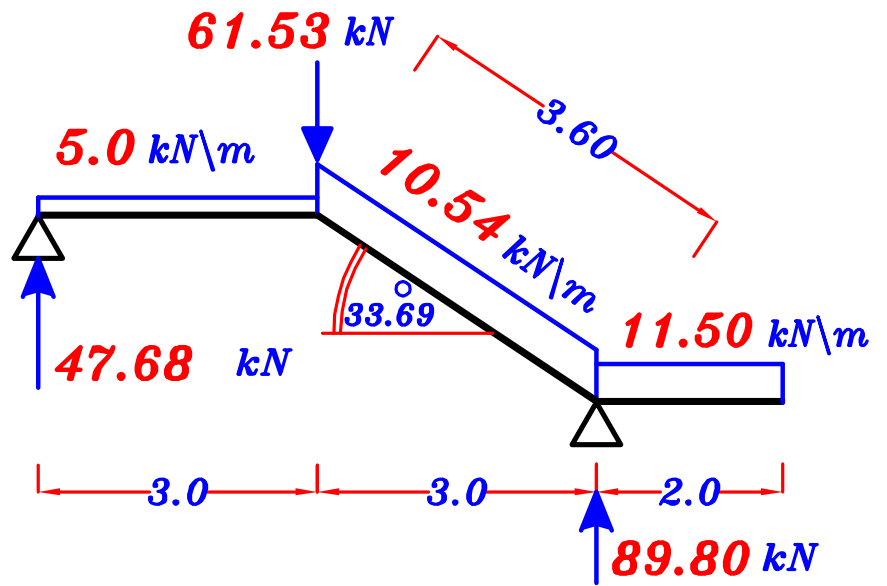
max-max B.M.D. For the Girder.



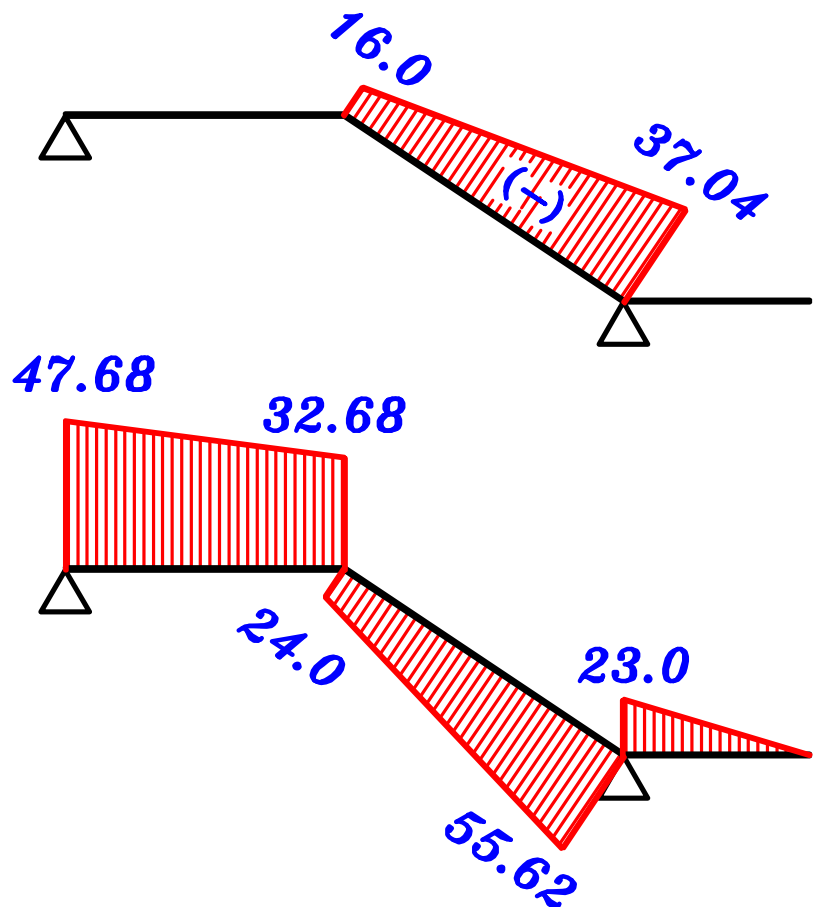
N.F.D. & S.F.D. For the Girder (G)



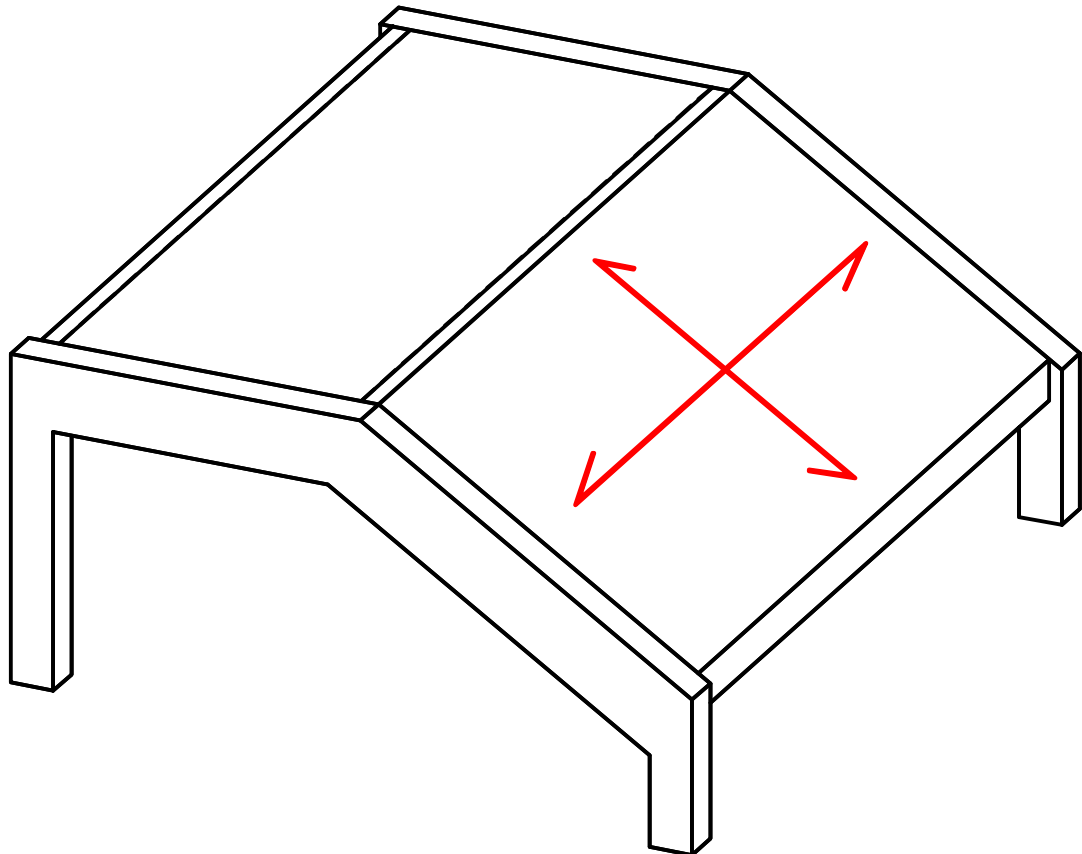
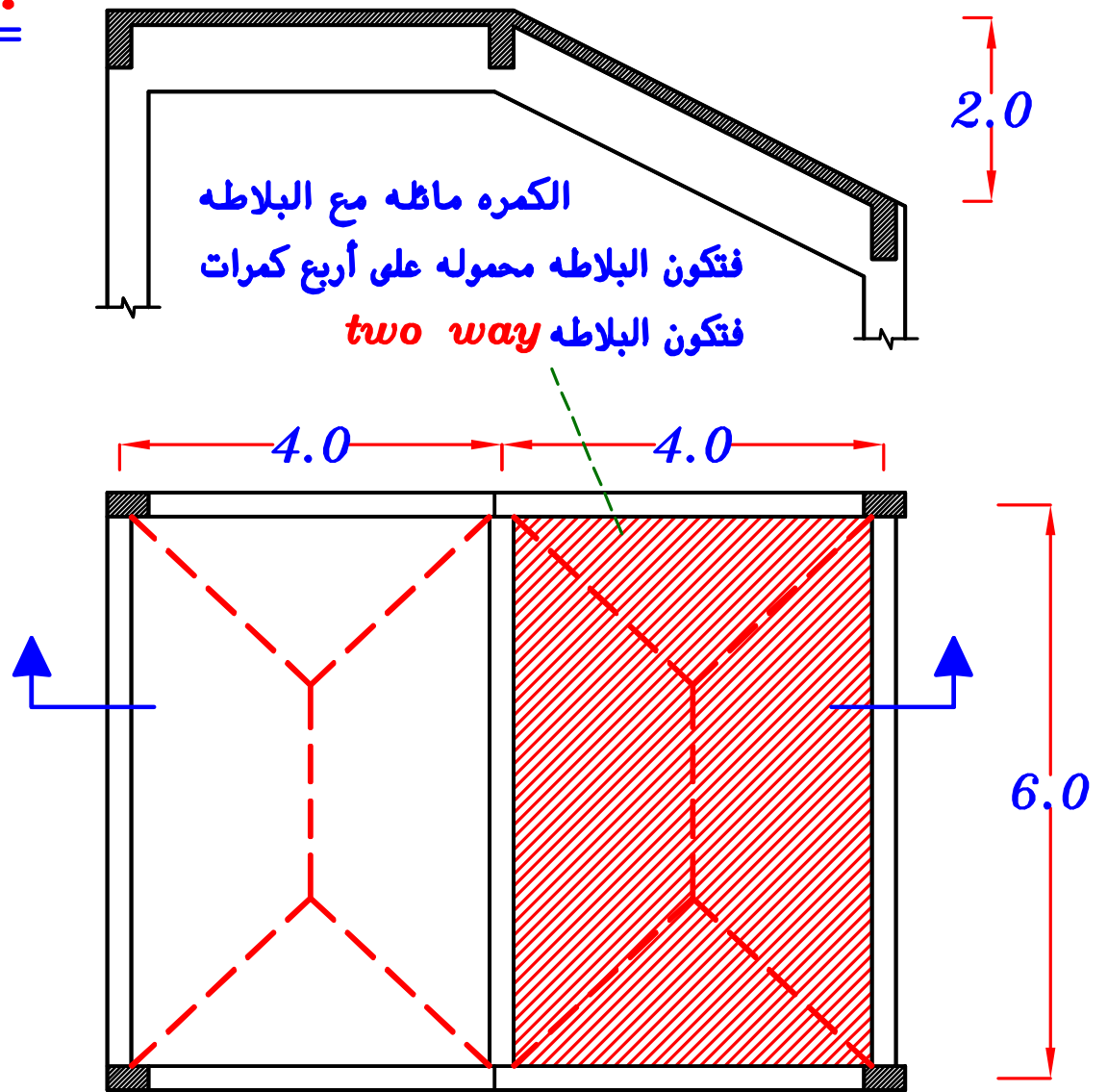
N.F.D.



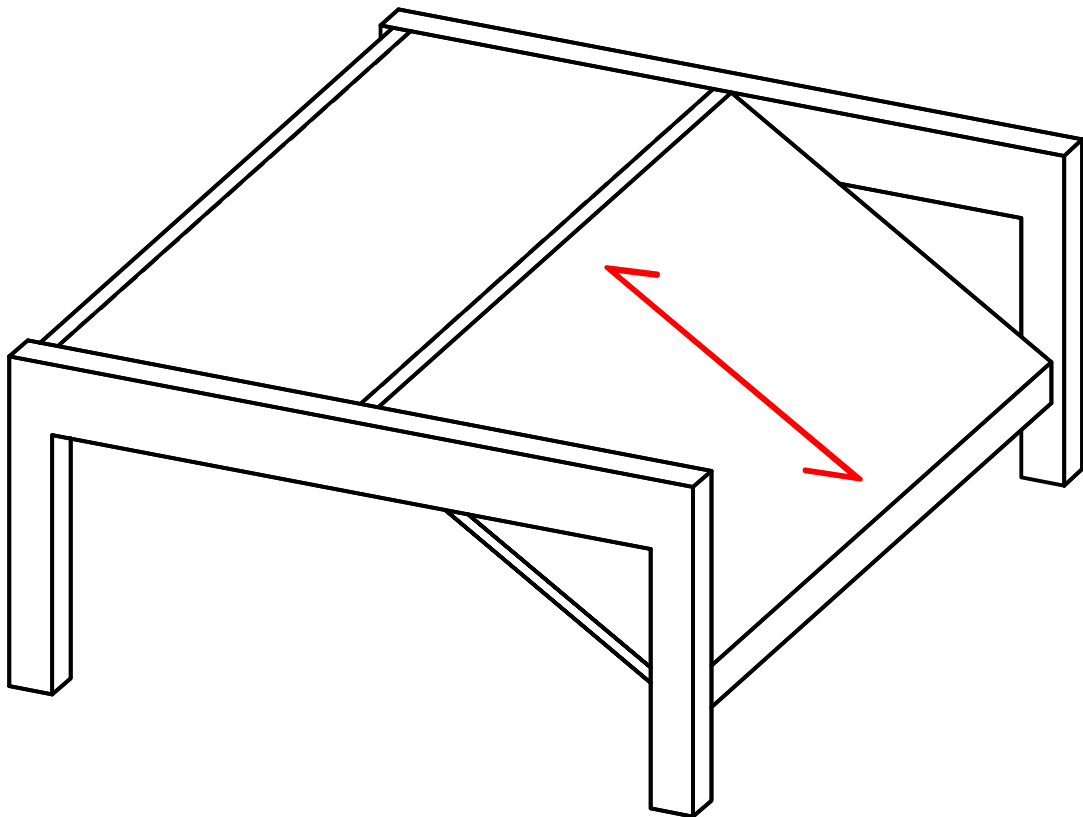
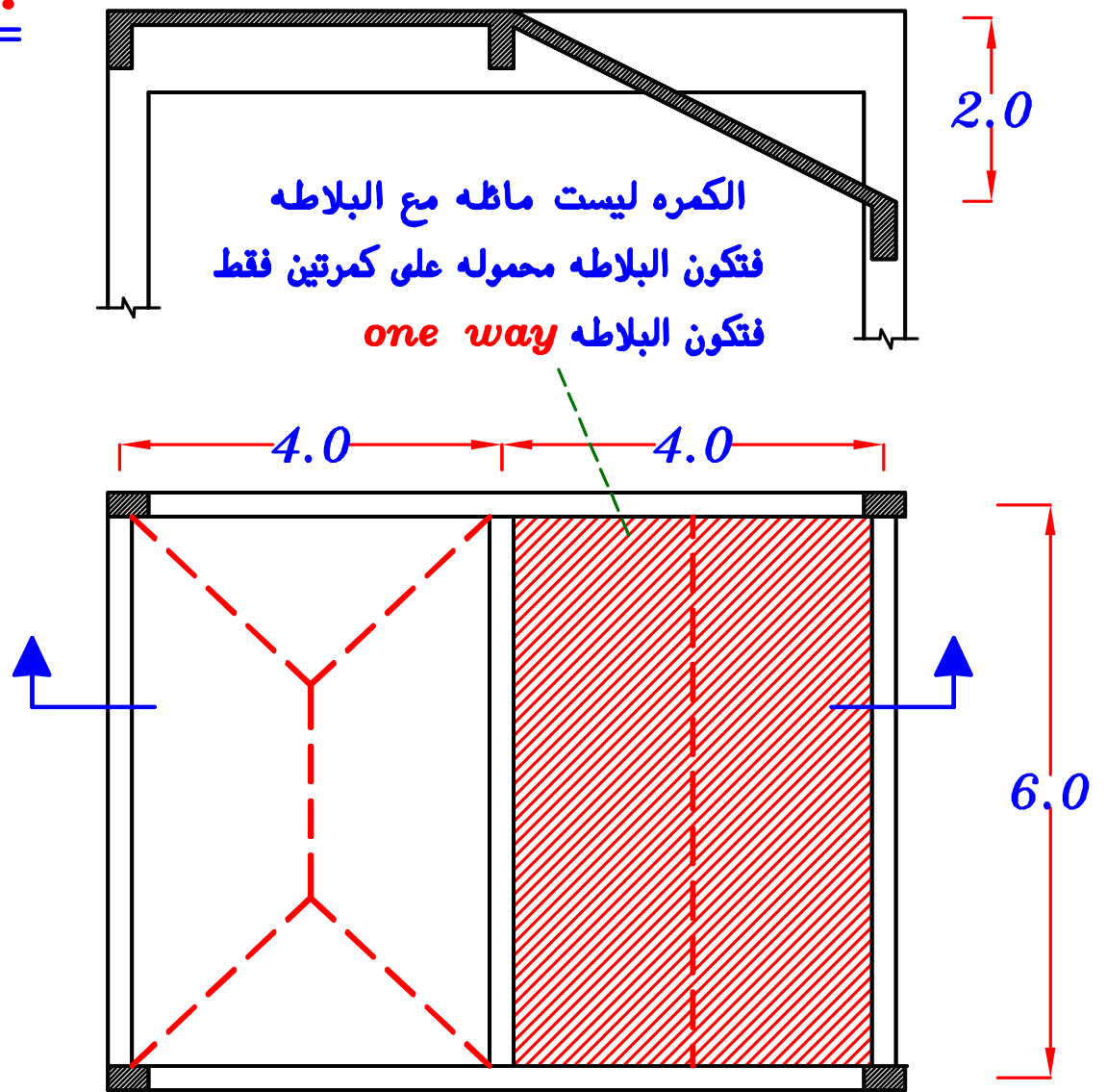
S.F.D.



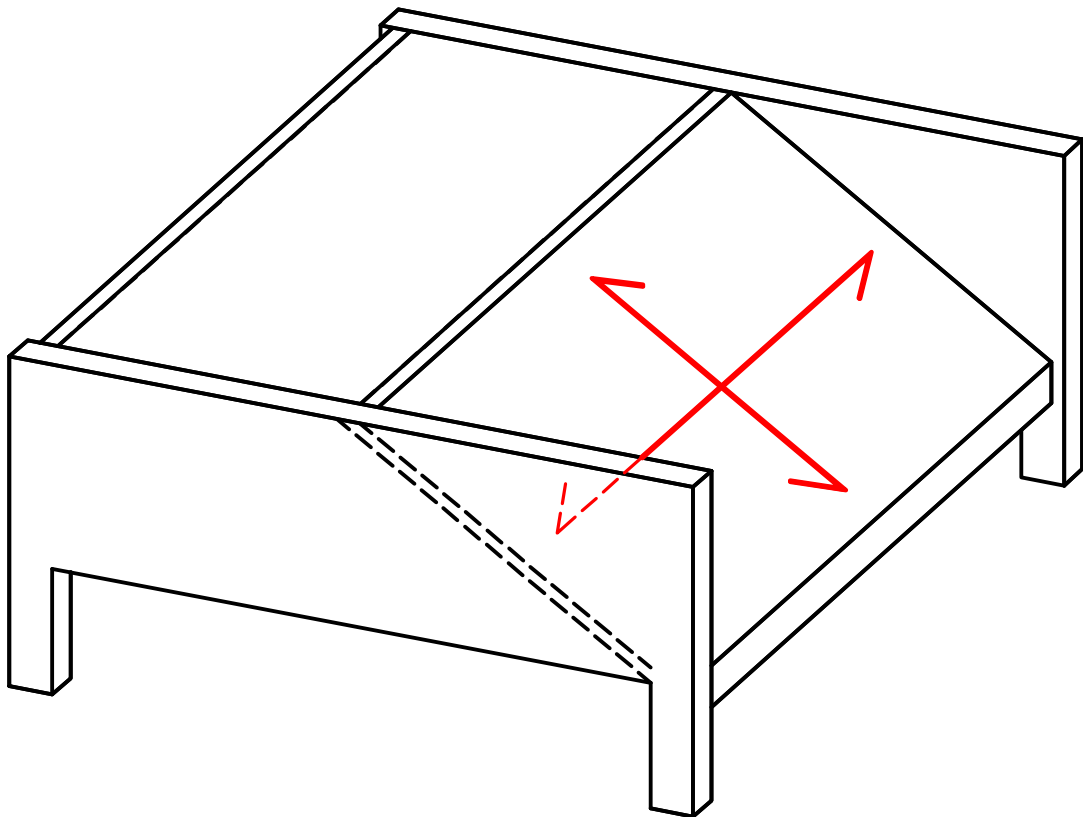
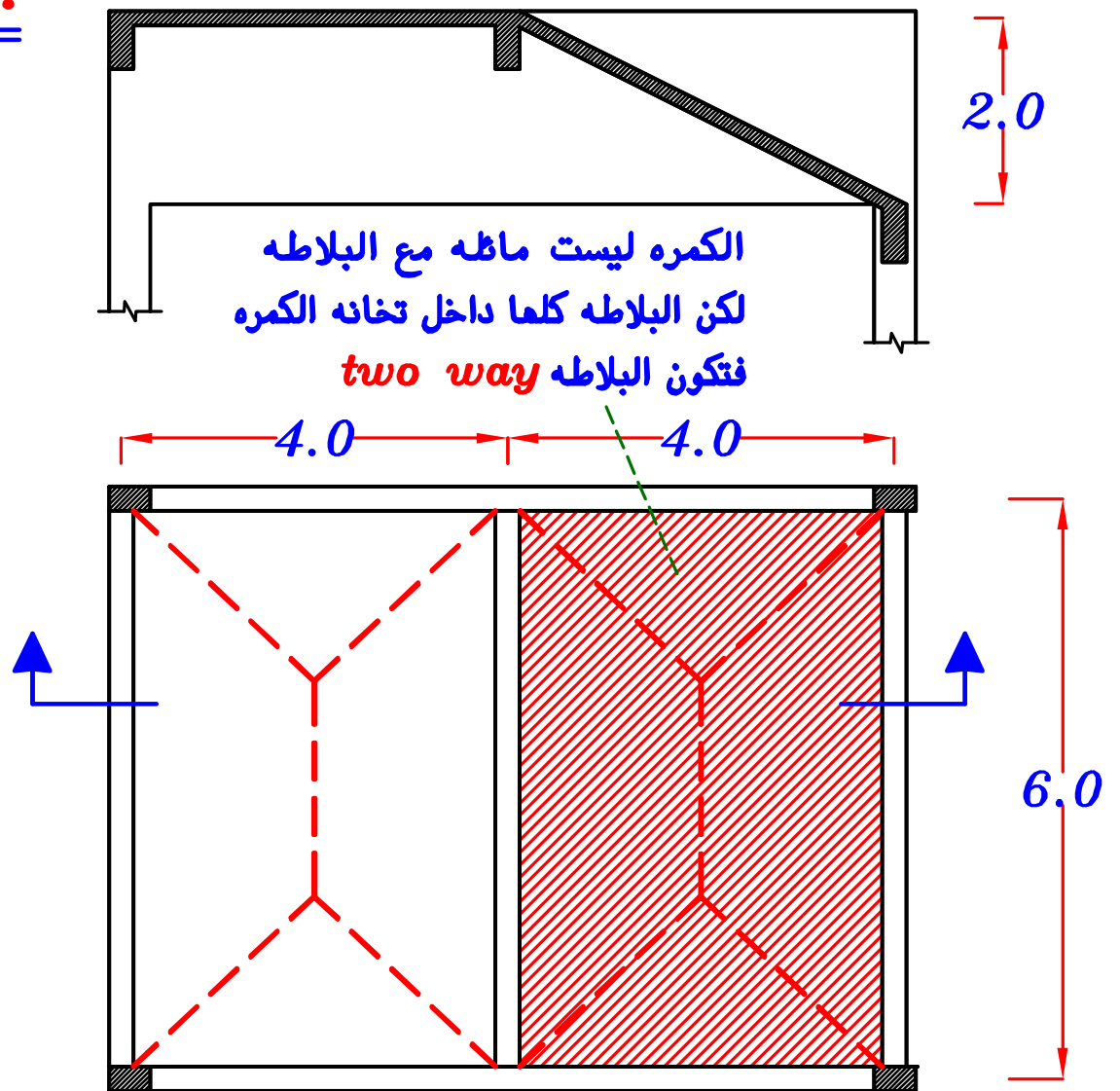
Note.



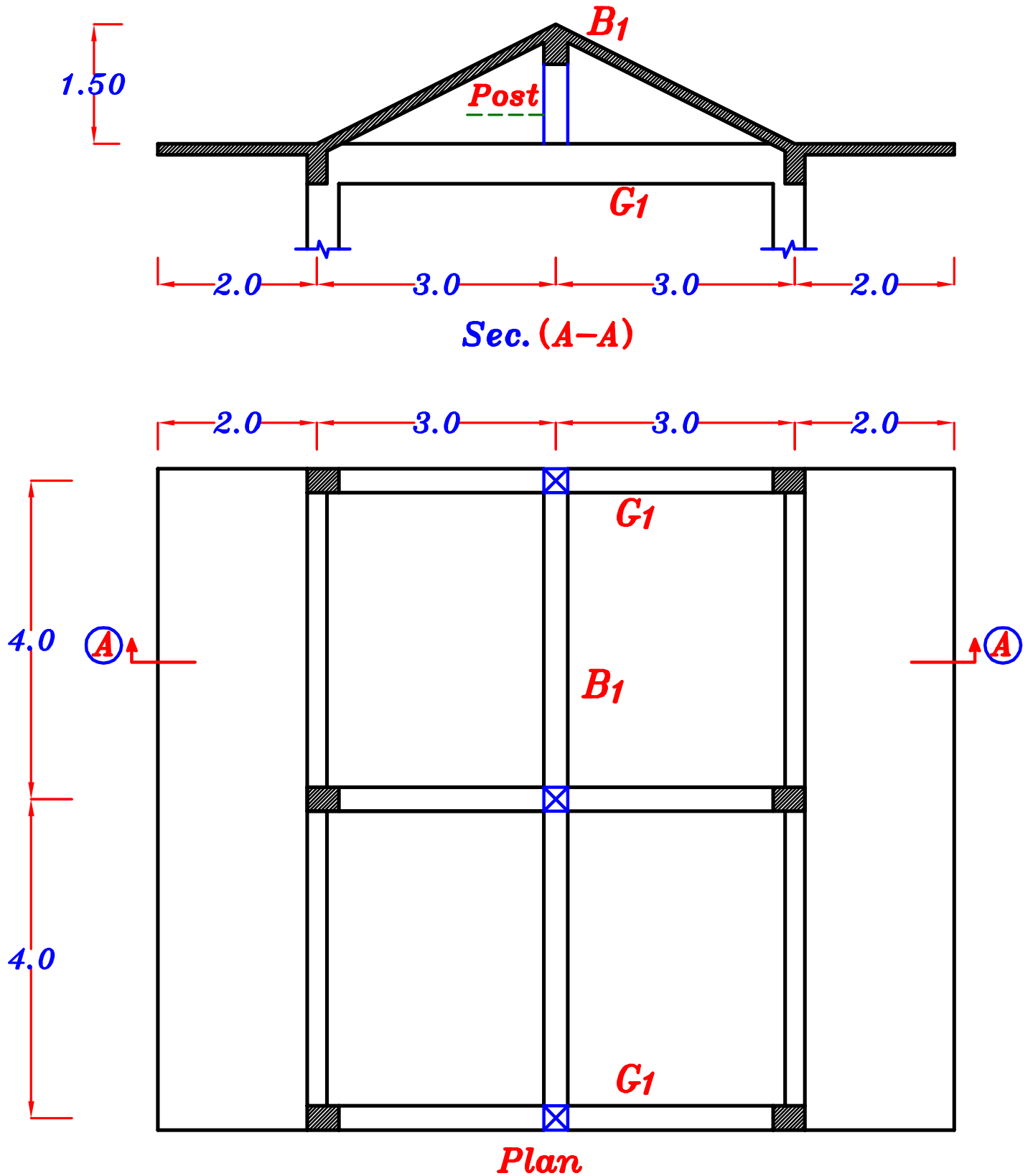
Note.



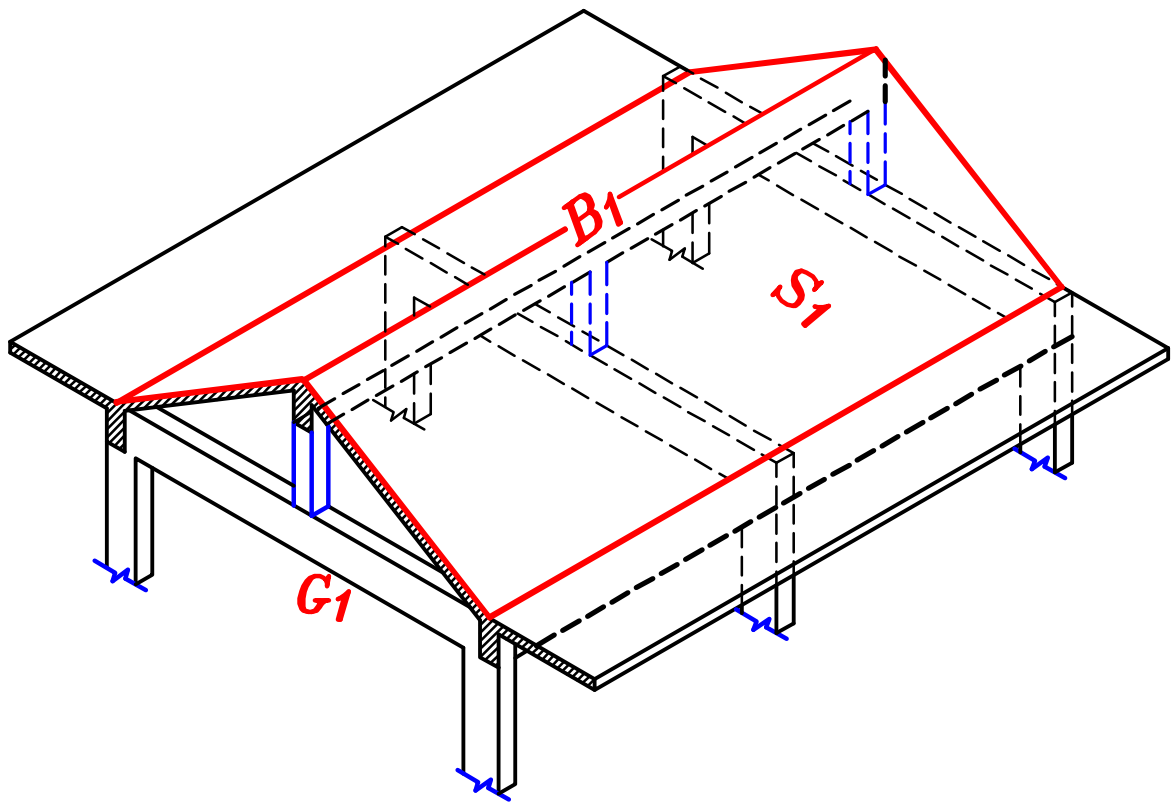
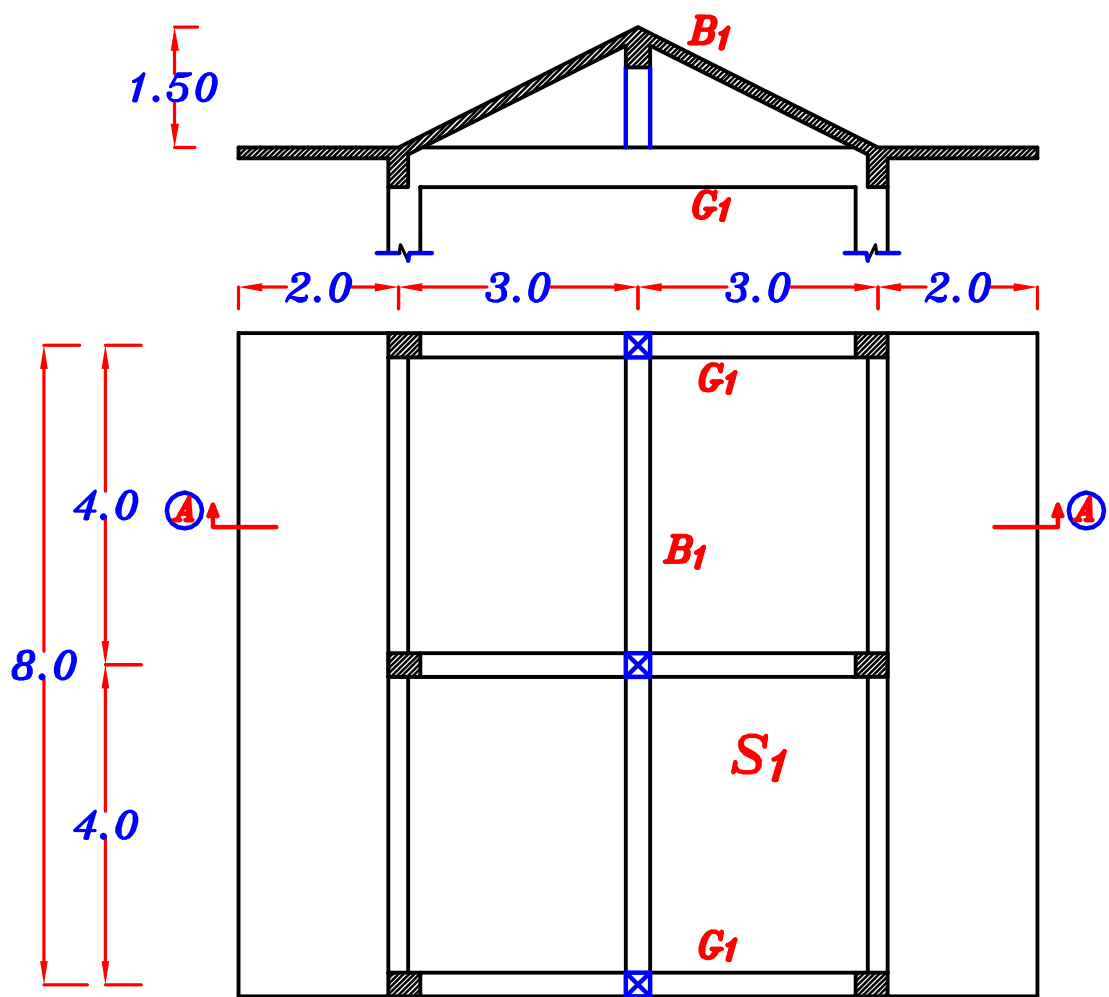
Note.



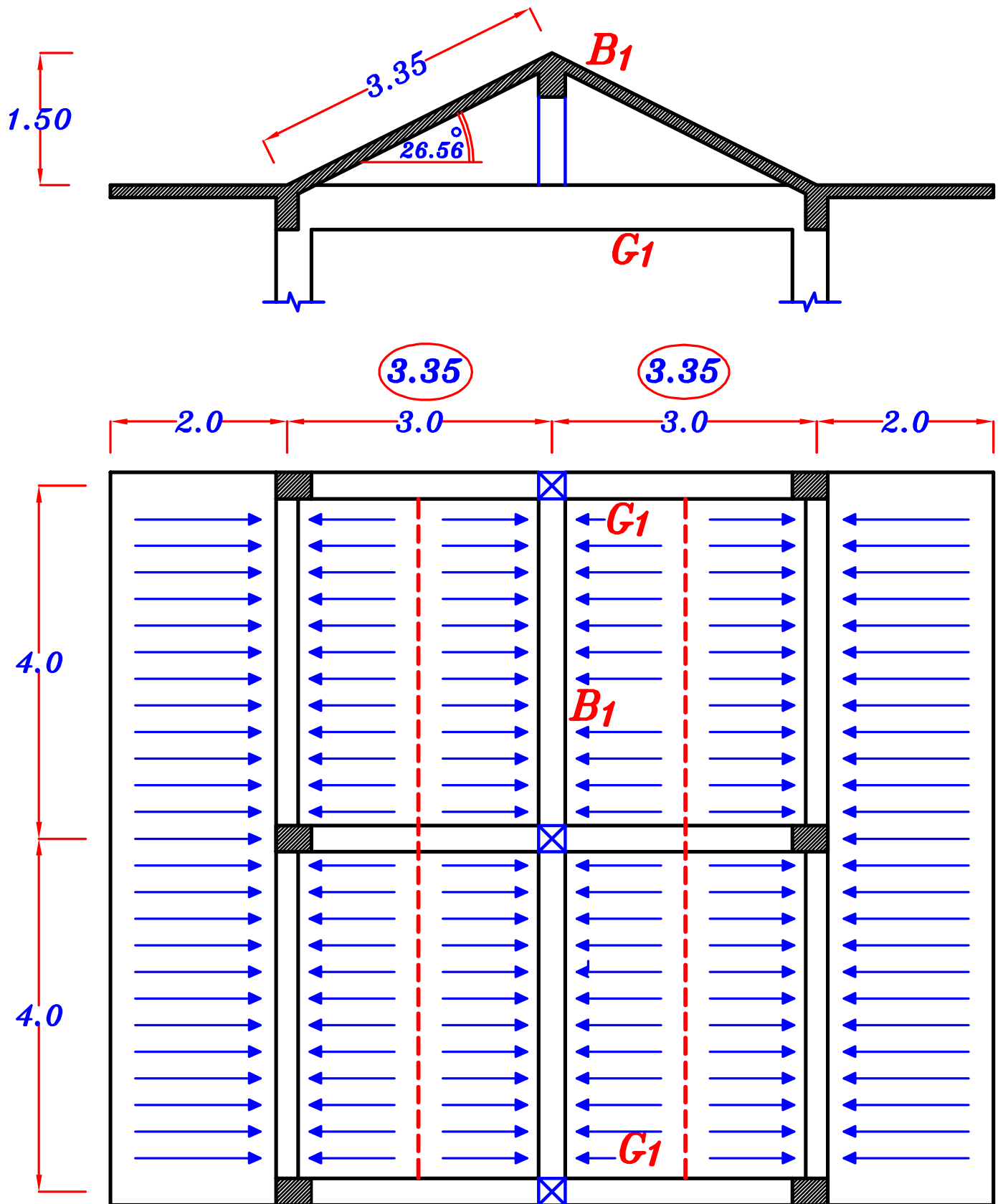
Note.



كما هو ظاهر من ال **Cross Section**
أن البلاطة المائلة محمولة على كمرتين فقط و ليست محمولة على ال **Girders**
لذا فالبلاطة المائلة تعتبر بلاطة **One way**



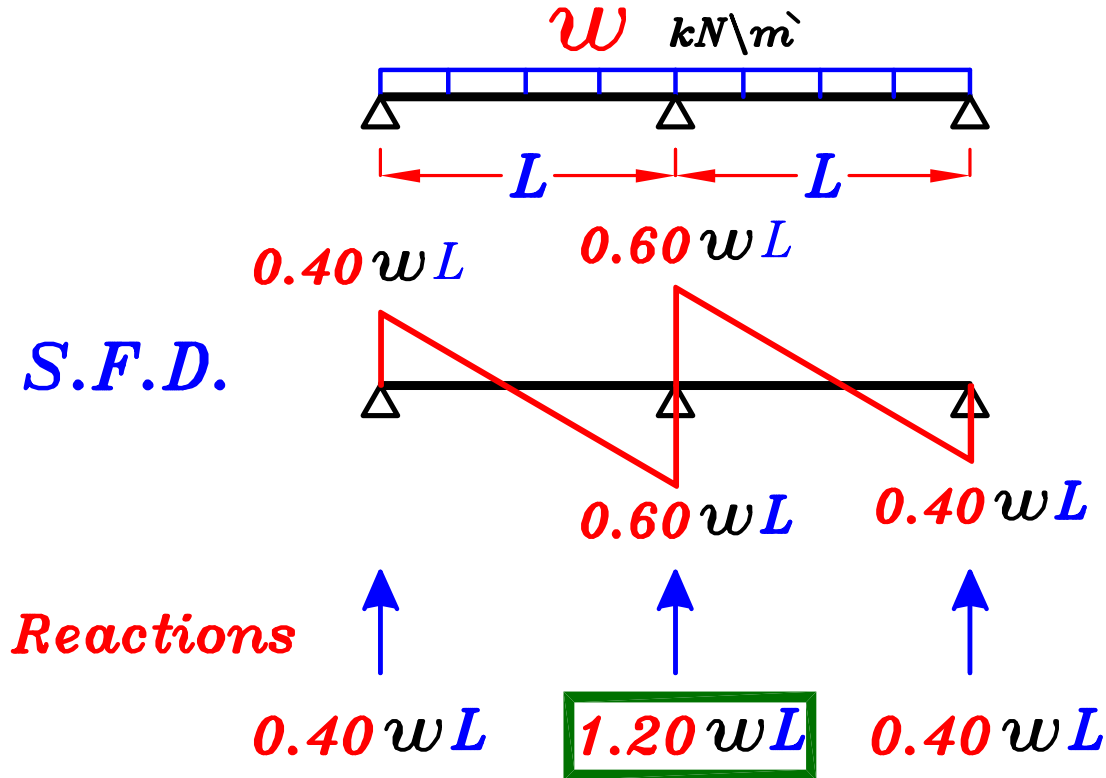
البلاطة S_1 محمولة على كمرتين فقط و بالتالى فهي بلاطة *one way*



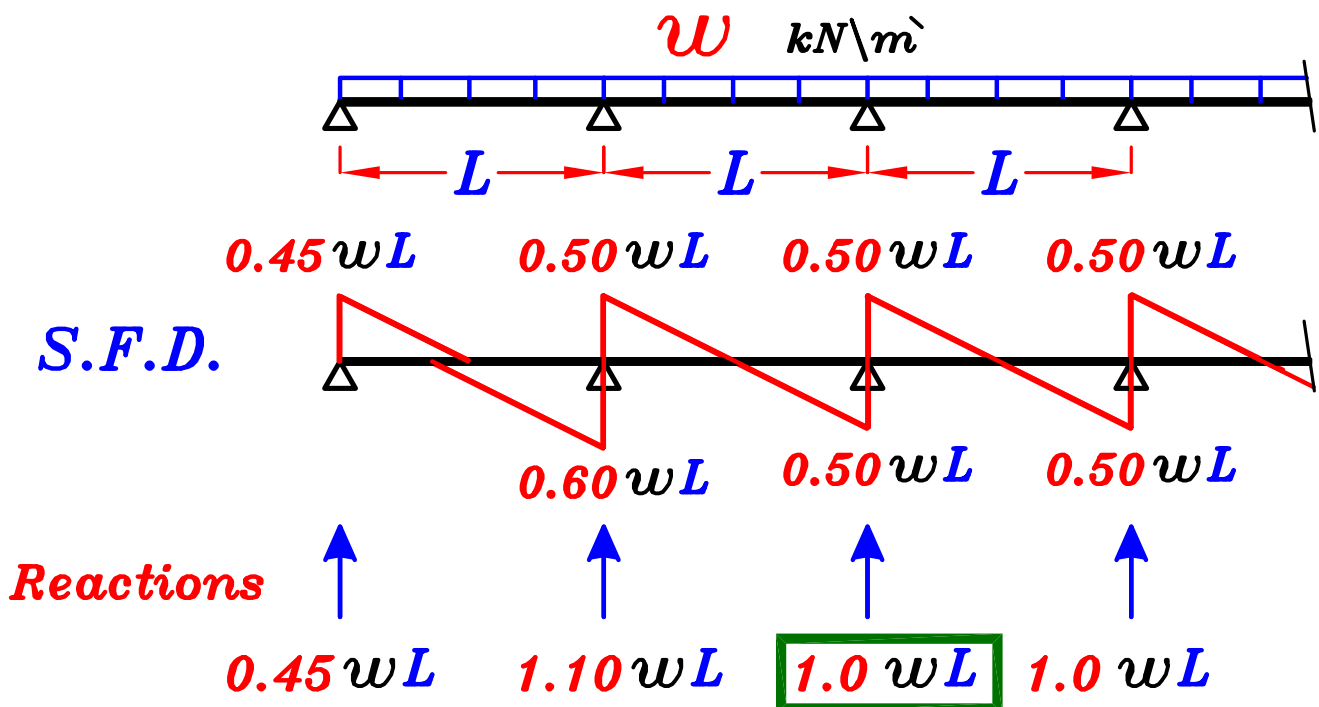
Reactions of Continuous Beams

لحساب **Reactions الكمرات** ال**Continuous** سنحتاج لحلها بطريقة من طرق حل ال**indeterminate structures** لكن اذا كانت البجور متساويه (**equal spans**) و الاحمال متساويه (**equal loads**) فمن الممكن استخدام القيم التاليه

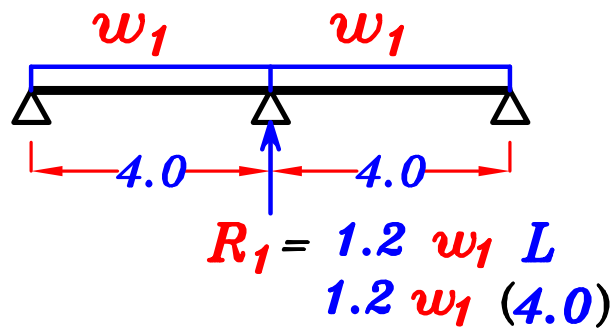
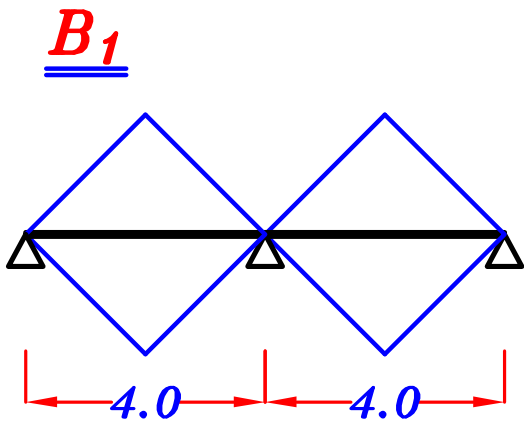
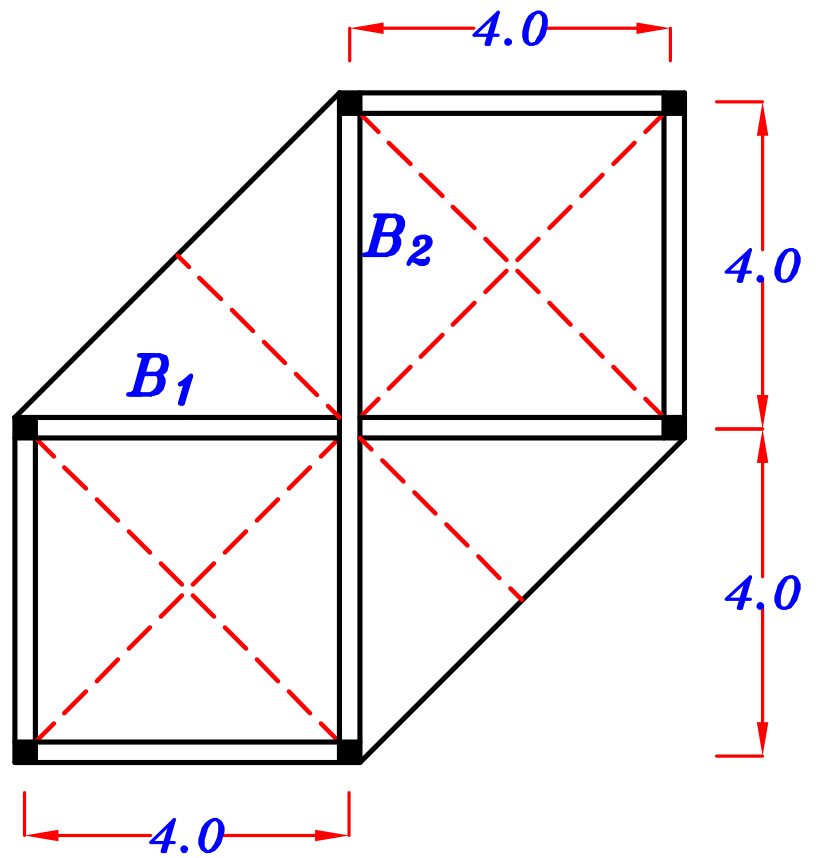
① Continuous Beam with 2 spans.



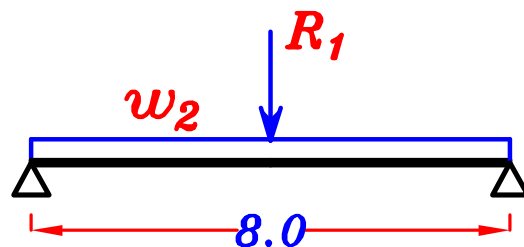
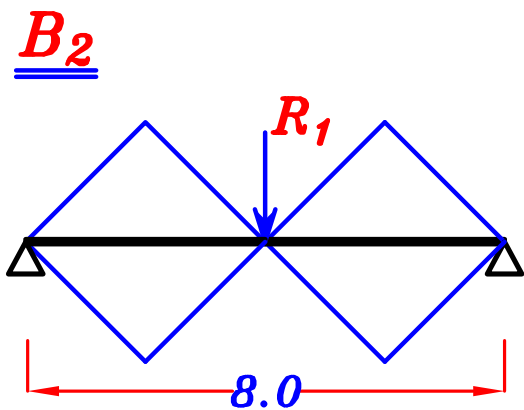
② Continuous Beam with more than 2 spans.



Example.



$$w_1 = 0.W. + 2.0 \left[\frac{C_a}{C_e} w_s \frac{L_s}{2} \right]$$



$$w_2 = 0.W. + \frac{\sum \text{area}}{\text{Span}} * w_s = 0.W. + \frac{(4*0.5*4*2)}{(8.0)} * w_s$$

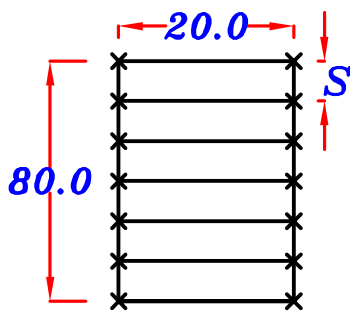
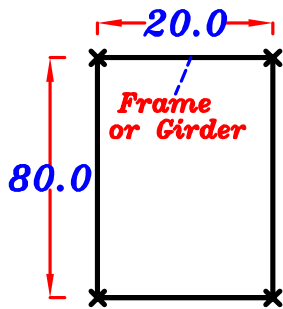
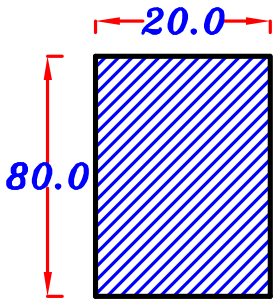
مسائل ال Sectional Elvation

لعمل تغطيه (سقف) للمساحات الكبيره مثل المصانع بدون وضع أعمده داخله .

يتم عمل الاتى :

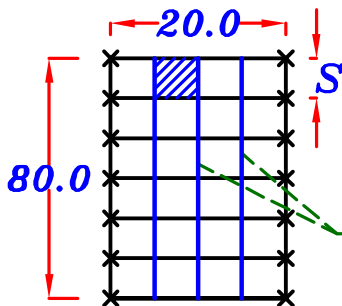
١- يتم وضع **Frame** أو **Girder** (كمره كبيره)

فى الاتجاه القصير للارض .



٢- يتكرر كل مسافه تسمى **Spacing**

$$\text{Spacing } (S) \simeq (4.0 \rightarrow 8.0 \text{ m})$$



٣- نضع كميرات ثانويه (**Secondary Beams**)

محموله على ال **Girder**

و ذلك لتقليل مساحات البلاطات

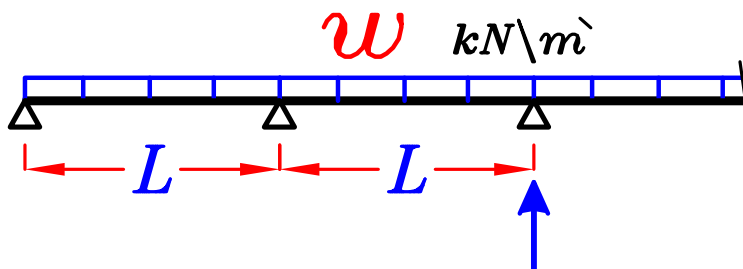
٤- لان الكميرات الثانويه محموله على ال **Girder**

فيجب حساب ال **Reactions** لها أولا

و لان الكميرات الثانويه تعتبر كميرات **Continuos Beams with more than 2 spans**

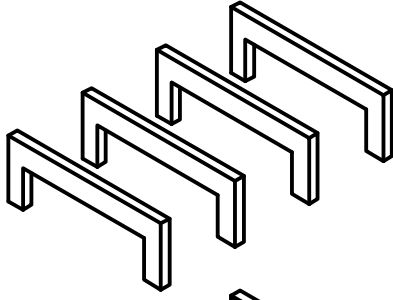
فيكون ال **Reaction** لها

$$w * S$$

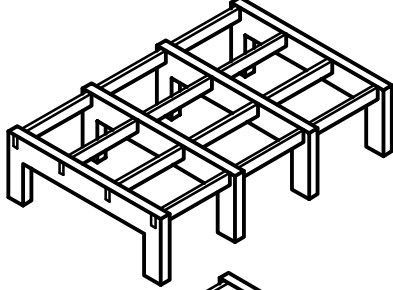


$$1.0 w L = w * S$$

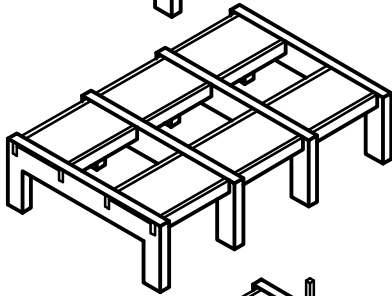
١- يتم تكرار ال **Girder** كل **Spacing**



٢- يتم وضع الكمرات الثانويه
محموله على ال **Girder**



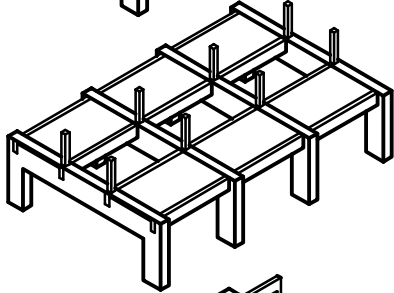
٣- توضع البلاطات محموله على ال **Girder**
و الكمرات الثانويه



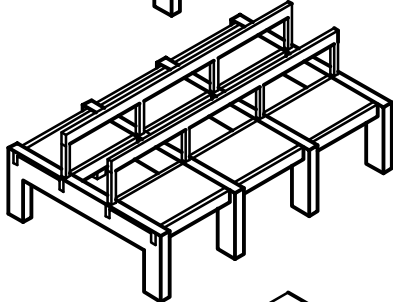
٤- يتم وضع أعمده قصيره تسمى (شمعه) **Post**



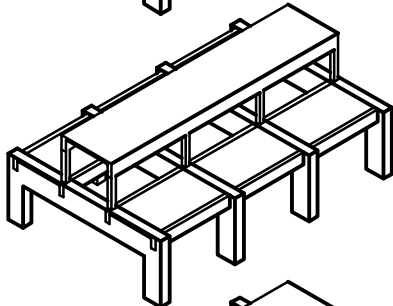
و يكون شكله في **Cross section**



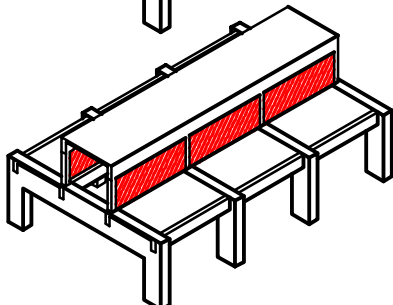
٥- توضع كمرات ثانويه محموله على ال **Posts**



٦- توضع بلاطه محموله على الكمرات الثانويه العلويه



٧- توضع الشبايك بين ال **Posts**



ما الفرق بين ال *Frame* و ال *Girder* ؟؟

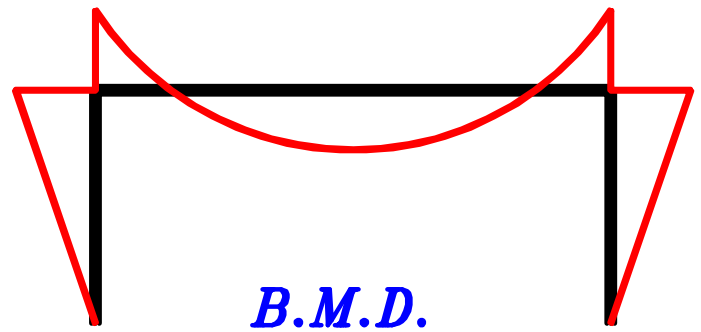

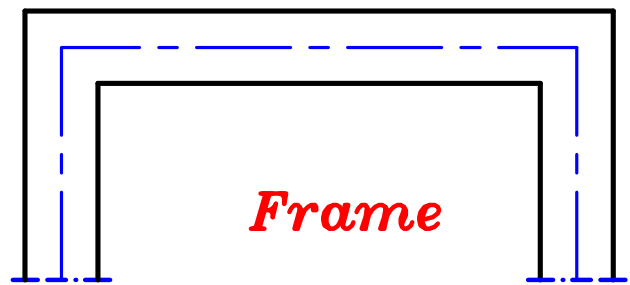
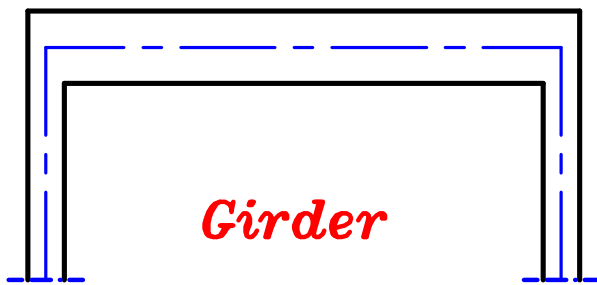
كلاً من ال *Frame* و ال *Girder* عبارة عن كمره محموله على عمودين

لكن الفرق بينهم أن في ال *Frame* الاعمده سميكه أى ان ال *stiffness* للاعمده قريب من الكمرات

و تفصيله الحديد بينهم تعمل على نقل العزوم من الكمره للعمود *Rigid joint*

أما ال *Girder* فأعمدته نحيفه نسبياً أى أن ال *stiffness* للاعمده أقل كثير من الكمرات

و تفصيله الحديد بينهم لا تعمل على نقل العزوم من الكمره للعمود *Hinged joint*



فى ال *Girder* نهمل الاعمده و نضع بدلا منها *support* أو

أما فى ال *Frame* فيجب اعطائنا ال *statical system* فى المسأله



ملحوظه

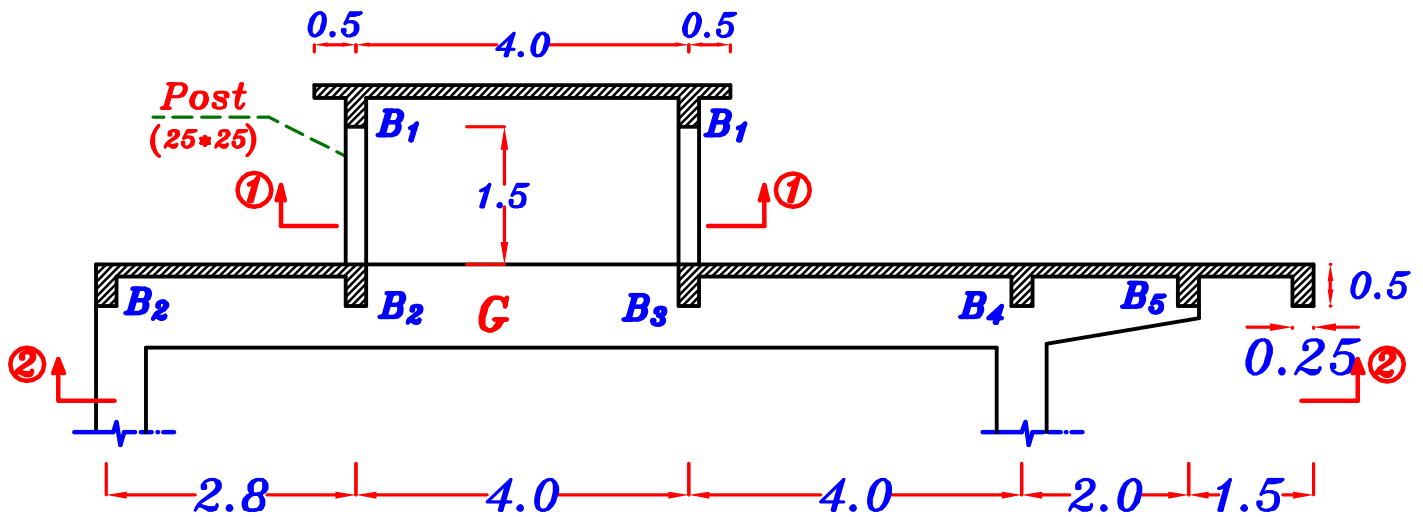
يمكن اهمال *Reaction* الكمرات الثانويه الموجوده فوق الاعمده مباشره فى ال *Girder*

و لكن يجب أخذها فى الاعتبار مع ال *Frame* لرسم ال *N.F.D.* على الاعمده

خطوات مسأله ال cross-section (Total Load)

- ١- نستنتج ال *Plan*
 - ٢- نرسم خطوط توزيع ال *Loads* (*Load Distribution*)
 - ٣- نسمى الكمرات B_1, B_2, B_3
 - ٤- نحسب w_s
 - ٥- نحسب *Load For Shear* للكمرات الثانويه و نحدد ال *Reactions*.
- $$R = w * S$$
- ٦- نضع الاحمال على ال *Girder* بالترتيب التالى :-
 - أ - نضع *o.w.* على ال *Girder* كله .
 - ب - نضع *Reactions* الكمرات الثانويه *concentrated loads* على ال *Girder*
 - ج - نضع أحمال البلاطه التى تنتقل مباشره من البلاطه الى ال *Girder* .
و تظهر هذه الاحمال من ال *plan* .
 - ٧- نرسم *B.M.D. & S.F.D.* لل *Girder*

Example.



$$t_s = 120 \text{ mm}$$

$$F.C. = 1.50 \text{ kN/m}^2, \quad L.L. = 2.0 \text{ kN/m}^2$$

$$O.W. \text{ of beams} = 3.0 \text{ kN/m}, \quad O.W. \text{ of Girder} = 6.0 \text{ kN/m}$$

$$\text{Spacing} = 6.0 \text{ m}$$

Req. Draw S.F.D. & B.M.D. For the girder (G).
Case of Total Load is only required.

$$w_s = t_s * \gamma_c + F.C. + L.L.$$

$$= 0.12 * 25 + 1.50 + 2.0 = 6.50 \text{ kN/m}^2$$

$$w_s = 6.50 \text{ kN/m}^2$$

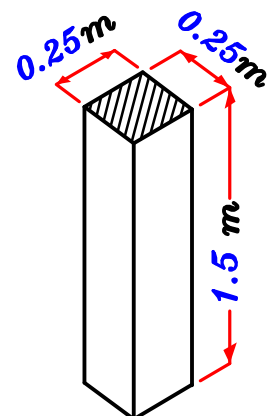
Post

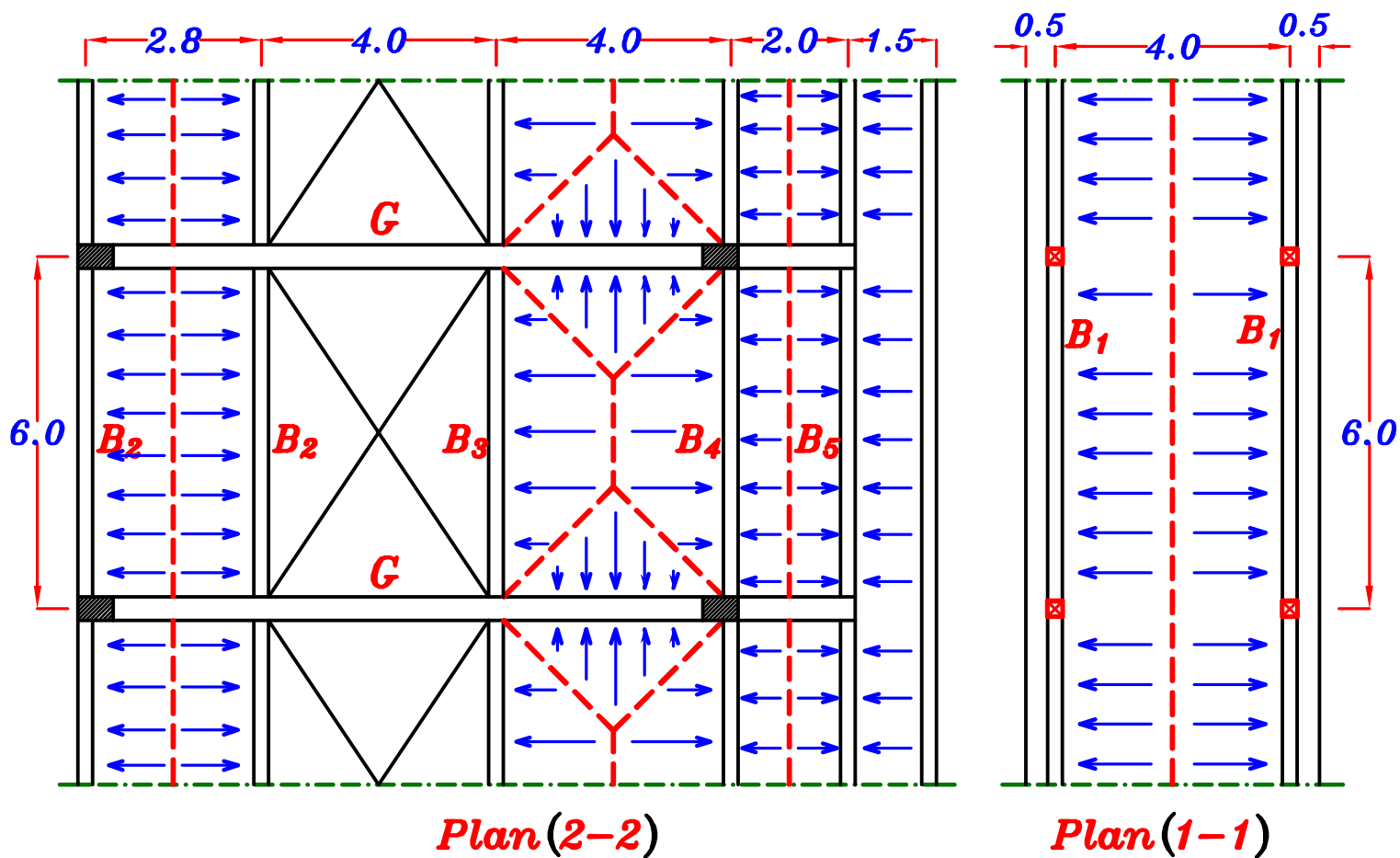
$$\text{Weight of the Post} = \text{Volume} * \text{Density}$$

$$= (0.25 * 0.25 * 1.50) (25) = 2.34 \text{ kN}$$

$$\text{Weight of the Post} = 2.34 \text{ kN}$$

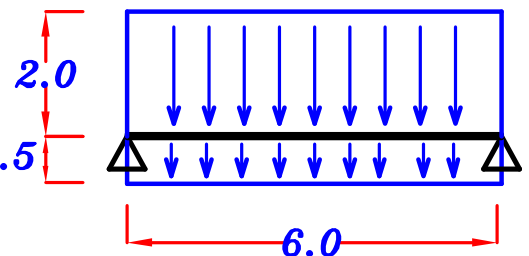
Note : Weight of Post can be neglected.





B_1

Load For Shear = Load For moment



$$w_a = w_e = 0.W. + w_s L_c + w_s \frac{L_s}{2}$$

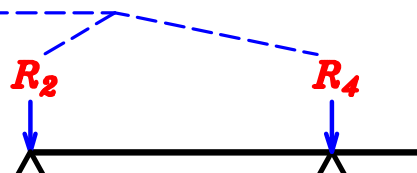
$$= 3.0 + (6.50)(0.5) + (6.50) \left(\frac{4}{2}\right) = 19.25 \text{ kN/m}$$

$$R_1 = w_a * \text{Spacing} = 19.25 * 6.0 = 115.5 \text{ kN}$$

$$R_1 = 115.5 \text{ kN}$$

ملحوظه في مسائل ال *Girders* لن نحتاج لحساب *Reactions* الكمرات الثانويه المحموله فوق الاعمده

هذه الاحمال تذهب مباشره الى الاعمده



B₂

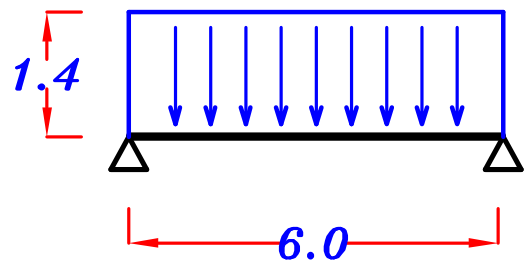
Load For Shear = Load For moment

$$W_a = W_e = 0.W. + \overline{w_s} \frac{L_s}{2}$$

$$= 3.0 + (6.50) \left(\frac{2.8}{2} \right) = 12.10 \text{ kN}\backslash\text{m}^{\circ}$$

$$R_2 = 12.10 * 6.0 = 72.60 \text{ kN}$$

$$R_2 = 72.60 \text{ kN}$$



B₃

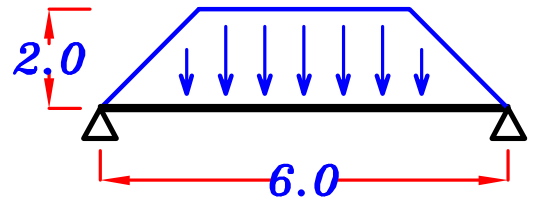
For Trapezoid

$$C_a = 1 - \frac{1}{2} \left(\frac{L_s}{L} \right) = 1 - \frac{1}{2} \left(\frac{4}{6} \right) = \frac{2}{3}$$

$$W_a = 0.W. + C_a \overline{w_s} \frac{L_s}{2} = 3.0 + \frac{2}{3} (6.50) \left(\frac{4}{2} \right) = 11.66 \text{ kN}\backslash\text{m}^{\circ}$$

$$R_3 = 11.66 * 6.0 = 70.0 \text{ kN}$$

$$R_3 = 70.0 \text{ kN}$$

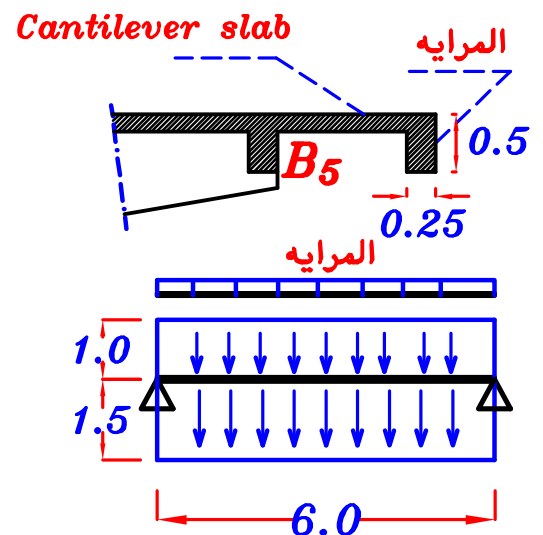


B₅

وزن المرایه

$$b \ t \ \gamma_c = (0.25) (0.5) (25) = 3.12 \text{ kN}\backslash\text{m}^{\circ}$$

المرایه محموله على ال Cantilever slab
و ال Cantilever slab محموله على B₅



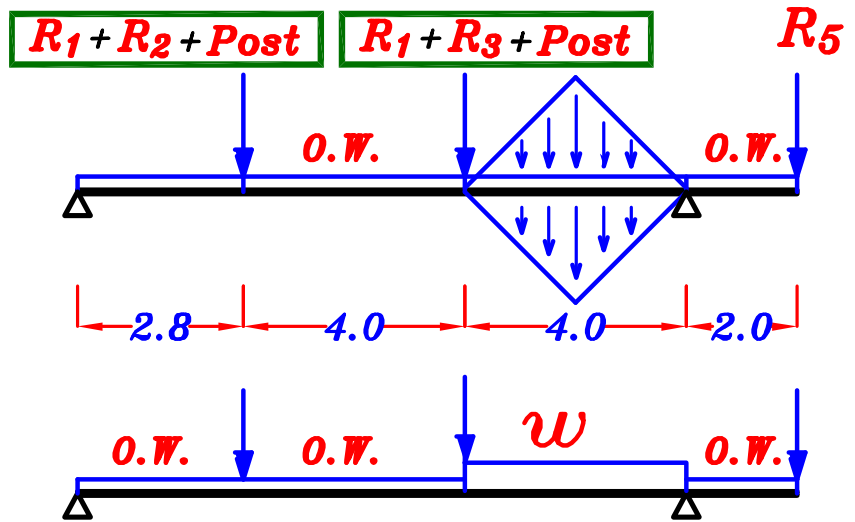
$$W_a = 0.W. (\text{الكمرة}) + 0.W. (\text{المرایه}) + \overline{w_s} L_c + \overline{w_s} \frac{L_s}{2}$$

$$= 3.0 + 3.12 + (6.50) (1.5) + (6.50) \left(\frac{2}{2} \right) = 22.37 \text{ kN}\backslash\text{m}^{\circ}$$

$$R_5 = 22.37 * 6.0 = 134.22 \text{ kN}$$

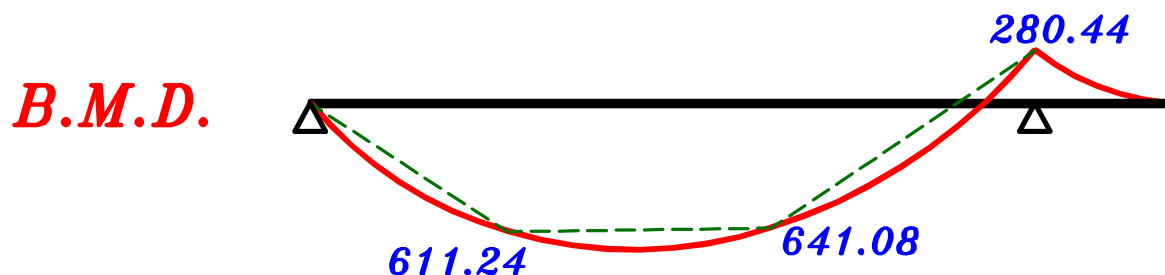
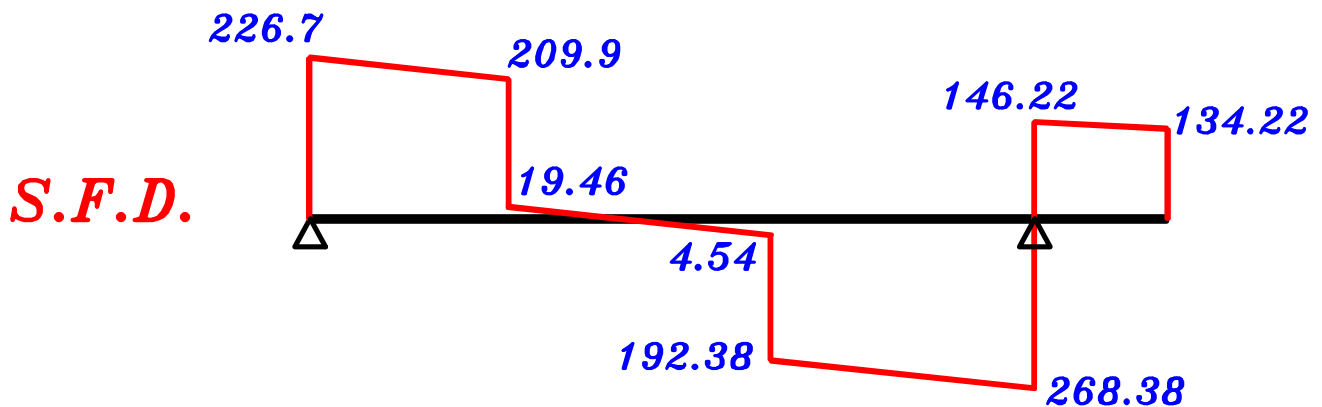
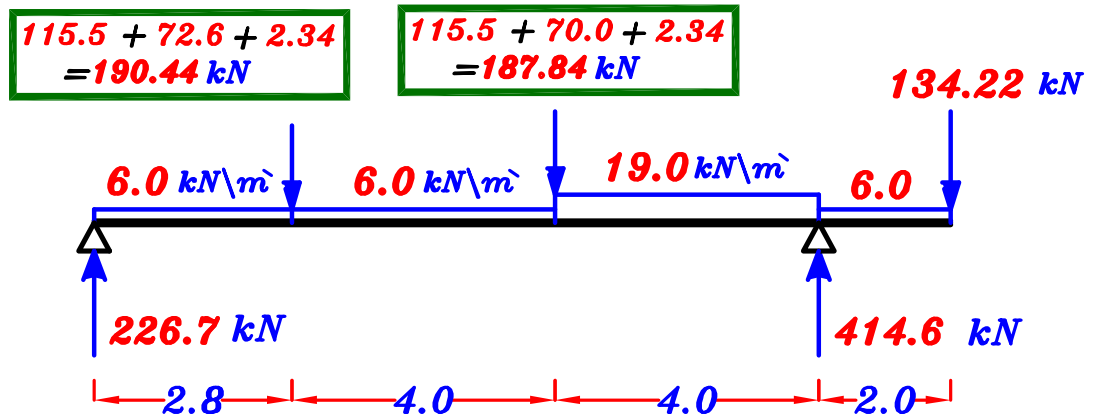
$$R_5 = 134.22 \text{ kN}$$

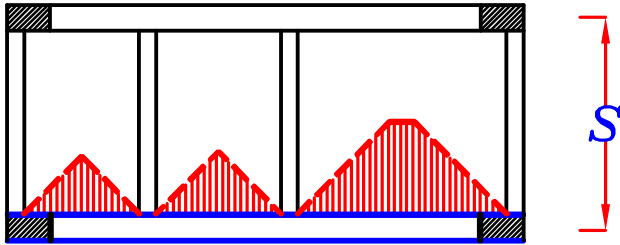
Girder (G)



$$\frac{\Sigma \text{area}}{\text{span}} = \frac{2 \left(\frac{1}{2} (4) (2) \right)}{4} = 2.0$$

$$W_a = W_e = 0.W. + \frac{\Sigma \text{area}}{\text{span}} * w_s = 6.0 + 2.0 (6.50) = 19.0 \text{ kN/m}$$





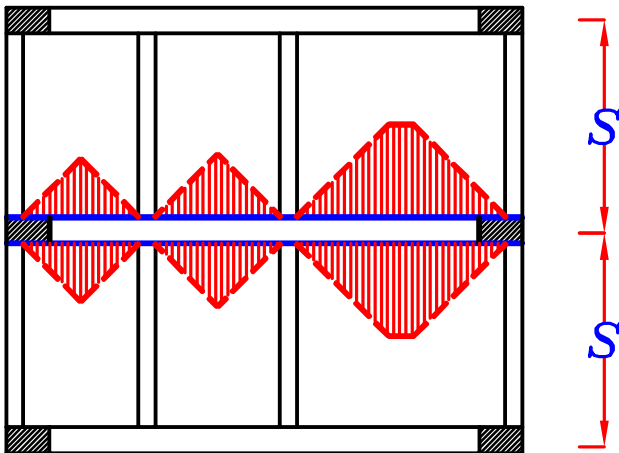
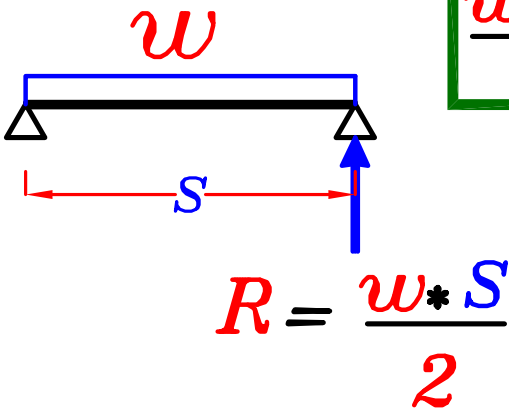
١- اذا كان عدد ال **Girders** اثنان فقط

2 Girders only

فتكون الكمره الثانويه كمره **Simple Beam**

فيكون **Reaction** الكمرات الثانويه

$$\frac{w * S}{2}$$



٢- اذا كان عدد ال **Girders** ثلاثه

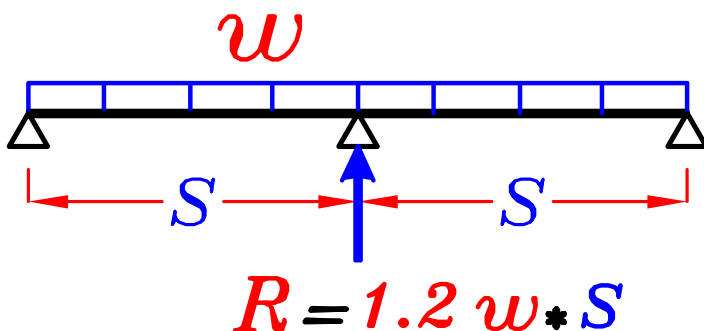
و مطلوب ال **Girder** الاوسط

فتكون الكمره الثانويه كمره

Continuos 2 spans.

$$1.2 w * S$$

فيكون **Reaction** الكمرات الثانويه



خطوات مسأله ال cross-section (max-max)

١- نستنتج ال *Plan*

٢- نرسم خطوط توزيع ال *Loads* (*Load Distribution*)

٣- نسمى الكمرات B_1, B_2, B_3

٤- نحسب g_s, p_s

٥- نحسب *Load For Shear* للكمرات الثانويه

و نحدد ال *Reactions* $R_D = g * S$, $R_T = w * S$

٦- نضع الاحمال على ال *Girder* بالترتيب التالى :-

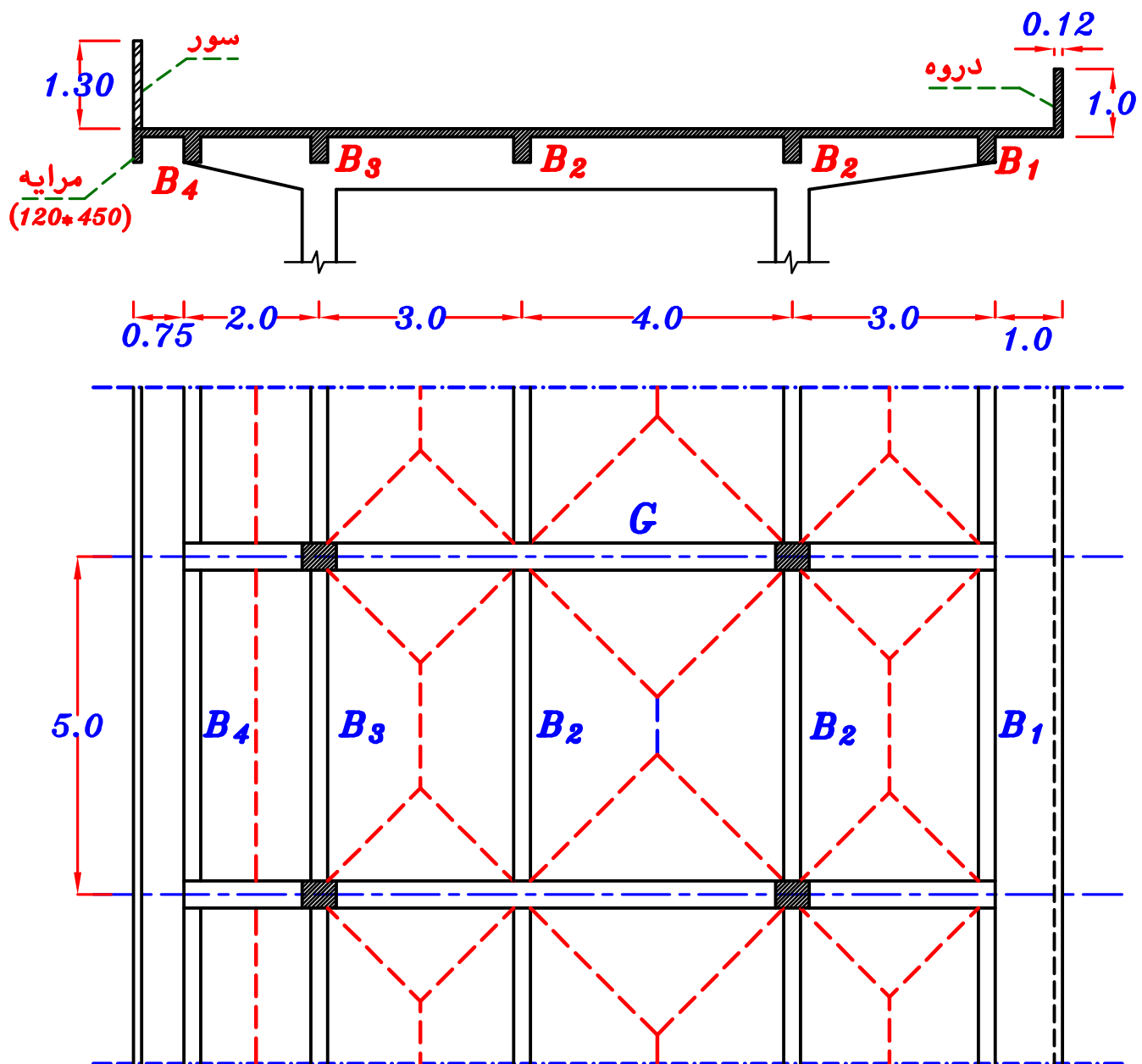
أ - نضع o.w. على ال *Girder* كله .

ب - نضع *Reactions* الكمرات الثانويه *concentrated loads* على ال *Girder*

ج - نضع أحمال البلاطه التى تنتقل مباشره من البلاطه الى ال *Girder* .
و تظهر هذه الاحمال من ال *plan* .

٧- نرسم *B.M.D. & S.F.D.* لل *Girder*

Example.



Data.

$$t_s = 0.12 \text{ m} \quad F.C. = 1.50 \text{ kN/m}^2 \quad L.L. = 2.0 \text{ kN/m}^2$$

$$O.W. \text{ of Girder} = 5.0 \text{ kN/m} \quad O.W. \text{ of Beam} = 3.0 \text{ kN/m}$$

$$O.W. \text{ Walls} = 3.0 \text{ kN/m}^2 \quad \text{Spacing} = 5.0 \text{ m}$$

Req.

- 1- Draw max.-max. S.F.D. & B.M.D. For B_2
- 2- Draw S.F.D. & max.-max. B.M.D. For the Girder.
(using woking Loads)
- 3- Draw max.-max. B.M.D. For the Girder.
(using Ultimate Limits Loads)

$$\underline{g_s, p_s}$$

$$D.L. = g_s = t_s * \gamma_c + F.C. = 0.12 * 25 + 1.50 = 4.50 \text{ kN/m}^2$$

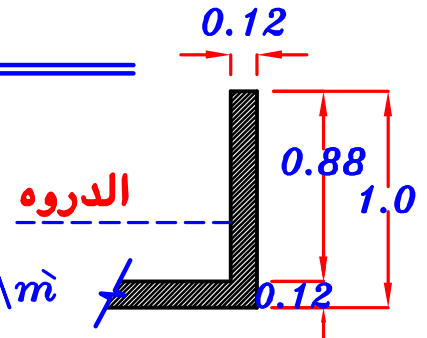
$$L.L. = p_s = L.L. = 2.0 \text{ kN/m}^2$$

$$T.L. = w_s = g_s + p_s = 6.50 \text{ kN/m}^2$$

$$g_s = 4.50 \text{ kN/m}^2,$$

$$p_s = 2.0 \text{ kN/m}^2$$

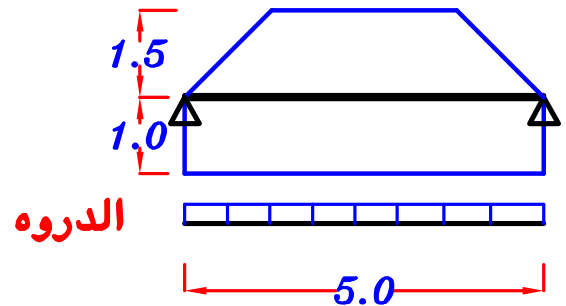
B₁



$$O.W. (Parapet) (\text{الدروه}) = (0.12) (0.88) (1.0) (25) = 2.64 \text{ kN/m}$$

For Trapezoid

$$C_a = 1 - \frac{1}{2} \left(\frac{L_s}{L} \right) = 1 - \frac{1}{2} \left(\frac{3}{5} \right) = 0.70$$



Load For Shear.

$$g_a = O.W. (\text{الكمره}) + O.W. (\text{الدروه}) + g_s L_c + C_a g_s \frac{L_s}{2}$$

$$= 3.0 + 2.64 + (4.50)(1.0) + (0.70)(4.50) \left(\frac{3}{2} \right) = 14.865 \text{ kN/m}$$

$$p_a = p_s L_c + C_a p_s \frac{L_s}{2}$$

$$= (2.0)(1.0) + (0.70)(2.0) \left(\frac{3}{2} \right) = 4.10 \text{ kN/m}$$

$$w_a = g_a + p_a = 14.865 + 4.10 = 18.965 \text{ kN/m}$$

$$R_1 = g_a * \text{Spacing} = 14.865 * 5.0 = 74.325 \text{ kN} \text{ ---- } D.L.$$

$$= w_a * \text{Spacing} = 18.965 * 5.0 = 94.825 \text{ kN} \text{ ---- } T.L.$$

$$R_1 = 74.325 \text{ kN} \text{ ---- } D.L.$$

$$= 94.825 \text{ kN} \text{ ---- } T.L.$$

B₂

For Trapezoid ①

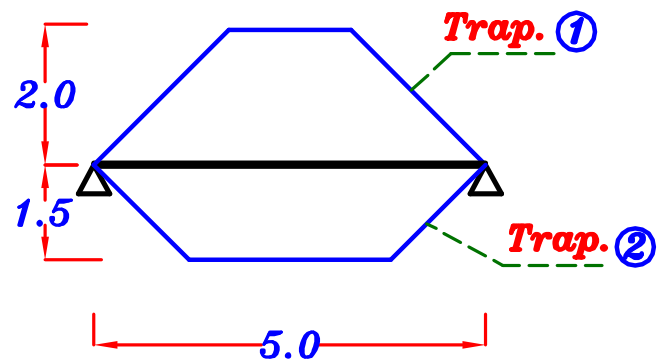
$$C_a = 1 - \frac{1}{2} \left(\frac{L_s}{L} \right) = 1 - \frac{1}{2} \left(\frac{4}{5} \right) = 0.60$$

$$C_e = 1 - \frac{1}{3} \left(\frac{L_s}{L} \right)^2 = 1 - \frac{1}{3} \left(\frac{4}{5} \right)^2 = 0.786$$

For Trapezoid ②

$$C_a = 1 - \frac{1}{2} \left(\frac{L_s}{L} \right) = 1 - \frac{1}{2} \left(\frac{3}{5} \right) = 0.70$$

$$C_e = 1 - \frac{1}{3} \left(\frac{L_s}{L} \right)^2 = 1 - \frac{1}{3} \left(\frac{3}{5} \right)^2 = 0.88$$



Load For Shear.

$$g_a = 0.W. + \overset{\text{Trap.①}}{C_a} g_s \frac{L_s}{2} + \overset{\text{Trap.②}}{C_a} g_s \frac{L_s}{2}$$

$$= 3.0 + (0.60)(4.50) \left(\frac{4}{2} \right) + (0.70)(4.50) \left(\frac{3}{2} \right) = 13.125 \text{ kN/m}$$

$$p_a = \overset{\text{Trap.①}}{C_a} p_s \frac{L_s}{2} + \overset{\text{Trap.②}}{C_a} p_s \frac{L_s}{2}$$

$$= (0.60)(2.0) \left(\frac{4}{2} \right) + (0.70)(2.0) \left(\frac{3}{2} \right) = 4.50 \text{ kN/m}$$

$$w_a = g_a + p_a = 13.125 + 4.50 = 17.625 \text{ kN/m}$$

Load For Moment.

$$g_e = 0.W. + \overset{\text{Trap.①}}{C_e} g_s \frac{L_s}{2} + \overset{\text{Trap.②}}{C_e} g_s \frac{L_s}{2}$$

$$= 3.0 + (0.786)(4.50) \left(\frac{4}{2} \right) + (0.88)(4.50) \left(\frac{3}{2} \right) = 16.014 \text{ kN/m}$$

$$p_e = \overset{\text{Trap.①}}{C_e} p_s \frac{L_s}{2} + \overset{\text{Trap.②}}{C_e} p_s \frac{L_s}{2}$$

$$= (0.786)(2.0) \left(\frac{4}{2} \right) + (0.88)(2.0) \left(\frac{3}{2} \right) = 5.784 \text{ kN/m}$$

$$w_e = g_e + p_e = 16.014 + 5.784 = 21.80 \text{ kN/m}$$

$$R_2 = g_a * \text{Spacing} = 13.125 * 5.0 = 65.625 \text{ kN} \text{ ----- D.L.}$$

$$= w_a * \text{Spacing} = 17.625 * 5.0 = 88.125 \text{ kN} \text{ ----- T.L.}$$

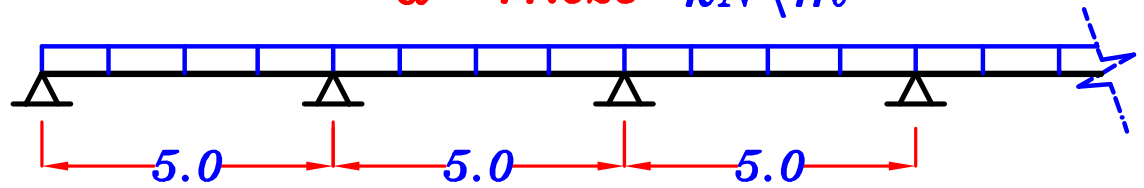
$$R_2 = 65.625 \text{ kN} \text{ ----- D.L.}$$

$$= 88.125 \text{ kN} \text{ ----- T.L.}$$

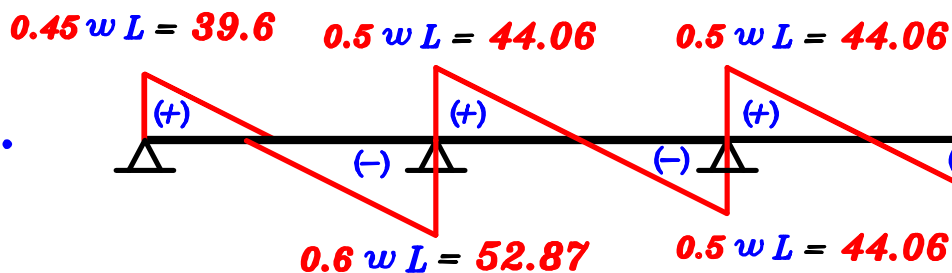
max-max S.F.D. For B_2

Load For Shear

$$w_a = 17.625 \text{ kN/m}$$



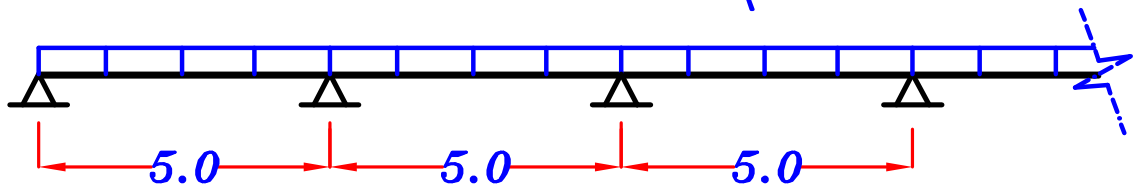
S.F.D.



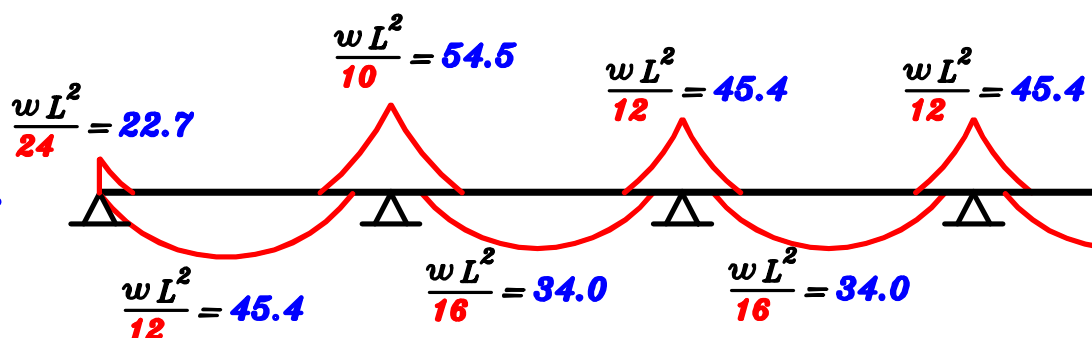
max-max B.M.D. For B_2

Load For Moment.

$$w_e = 21.8 \text{ kN/m}$$



B.M.D.



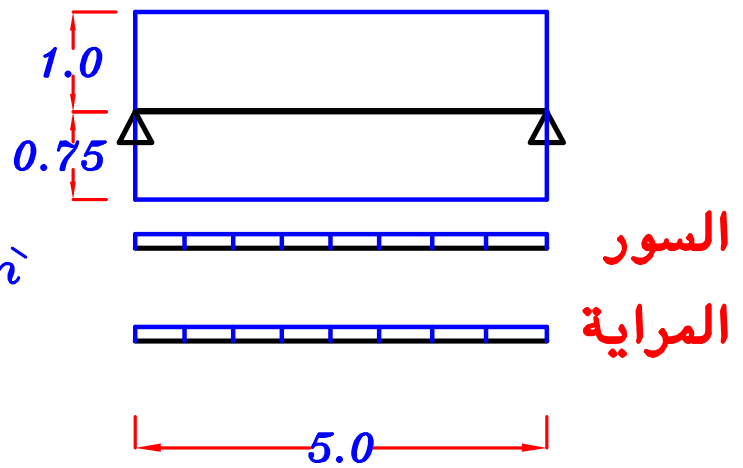
B₄

$$O.W. \text{ (السور)} = h_w * \delta_w$$

$$= (1.3)(3.0) = \mathbf{3.90 \text{ kN}\backslash\text{m}}$$

$$O.W. \text{ (المراية)} = b \ t \ \delta_c$$

$$= (0.12)(0.45)(25) = \mathbf{1.35 \text{ kN}\backslash\text{m}}$$



Load For Shear.

$$g_a = O.W. \text{ (الكمرة)} + O.W. \text{ (المراية)} + O.W. \text{ (السور)} + \overline{g_s} L_c + \overline{g_s} \frac{L_s}{2}$$
$$= 3.0 + 1.35 + 3.90 + (4.50)(0.75) + (4.50)\left(\frac{2}{2}\right) = \mathbf{16.125 \text{ kN}\backslash\text{m}}$$

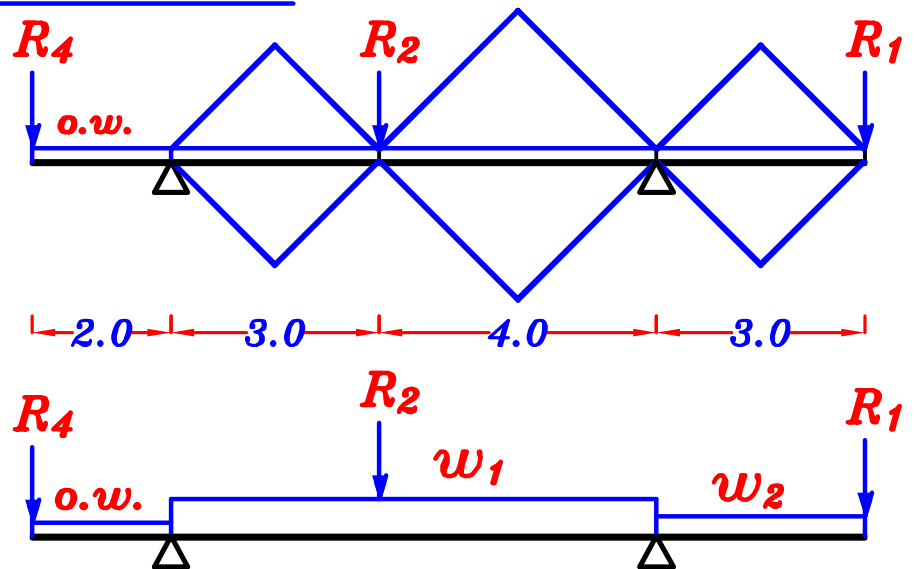
$$p_a = \overline{p_s} L_c + \overline{p_s} \frac{L_s}{2}$$
$$= (2.0)(0.75) + (2.0)\left(\frac{2}{2}\right) = \mathbf{3.50 \text{ kN}\backslash\text{m}}$$

$$w_a = g_a + p_a = 16.125 + 3.50 = \mathbf{19.625 \text{ kN}\backslash\text{m}}$$

$$R_4 = g_a * \text{Spacing} = 16.125 * 5.0 = \mathbf{80.625 \text{ kN} \text{ ---- D.L.}}$$
$$= w_a * \text{Spacing} = 19.625 * 5.0 = \mathbf{98.125 \text{ kN} \text{ ---- T.L.}}$$

$$R_4 = \mathbf{80.625 \text{ kN} \text{ ---- D.L.}}$$
$$= \mathbf{98.125 \text{ kN} \text{ ---- T.L.}}$$

Loads on the girder.



Loads on the mid. Span. (w_1)

$$\frac{\sum \text{area}}{\text{span}} = \frac{2 \left(\frac{1}{2} (3) (1.5) \right) + 2 \left(\frac{1}{2} (4) (2) \right)}{7.0} = 1.785$$

$$g_1 = g_a = g_e = \text{o.w.} + \frac{\sum \text{area}}{\text{span}} * g_s = 5.0 + 1.785 (4.50) = 13.03 \text{ kN/m}$$

$$p_1 = p_a = p_e = \frac{\sum \text{area}}{\text{span}} * p_s = 1.785 (2.0) = 3.57 \text{ kN/m}$$

$$w_1 = w_a = w_e = g_1 + p_1 = 13.03 + 3.57 = 16.60 \text{ kN/m}$$

$$g_1 = 13.03 \text{ kN/m} \text{ --- D.L.}$$

$$w_1 = 16.60 \text{ kN/m} \text{ --- T.L.}$$

Loads on the right Cantilever. (w_2)

$$\left[\frac{L_c}{2} \right] C_a = C_e = \frac{1}{2} \quad \text{Load For Shear} = \text{Load For Moment}$$

$$g_2 = \text{o.w.} + 2 \left[C_a g_s \frac{L_c}{2} \right] = 5.0 + 2 \left[\left(\frac{1}{2} \right) (4.50) \left(\frac{3}{2} \right) \right] = 11.75 \text{ kN/m}$$

$$p_2 = 2 \left[C_a p_s \frac{L_c}{2} \right] = 2 \left[\left(\frac{1}{2} \right) (2.0) \left(\frac{3}{2} \right) \right] = 3.0 \text{ kN/m}$$

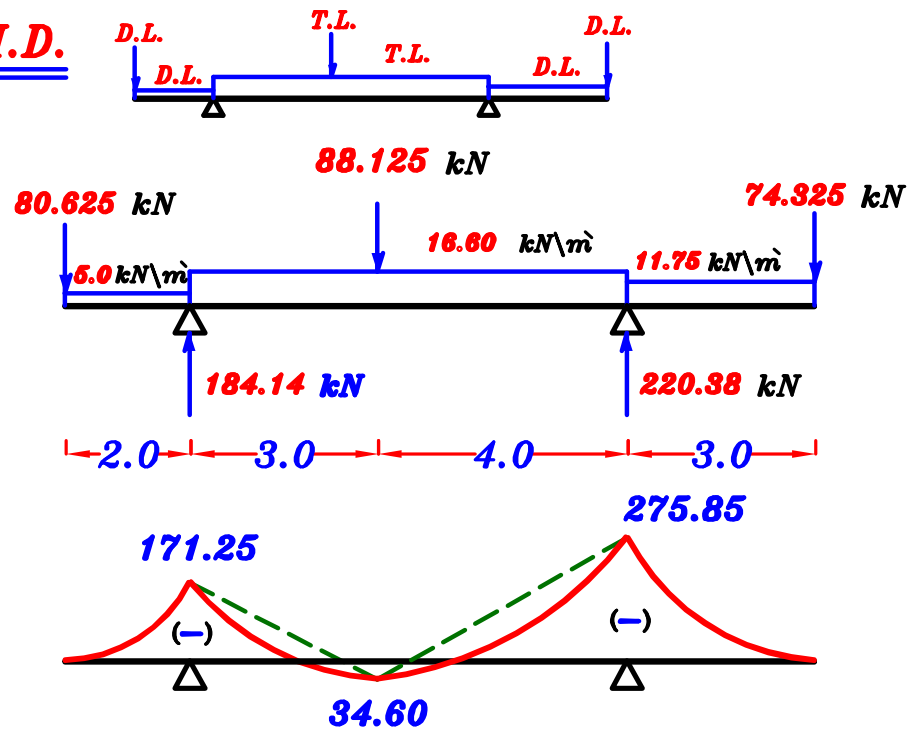
$$w_2 = g_2 + p_2 = 11.75 + 3.0 = 14.75 \text{ kN/m}$$

$$g_2 = 11.75 \text{ kN/m} \text{ --- D.L.}$$

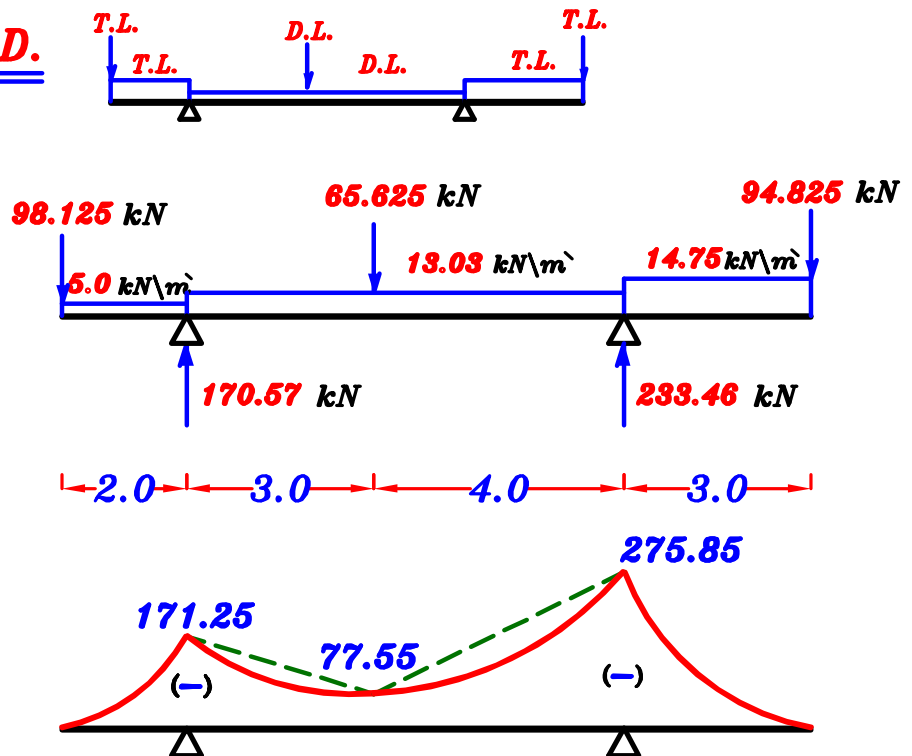
$$w_2 = 14.75 \text{ kN/m} \text{ --- T.L.}$$

max-max B.M.D. For the Girder. (using working Loads)

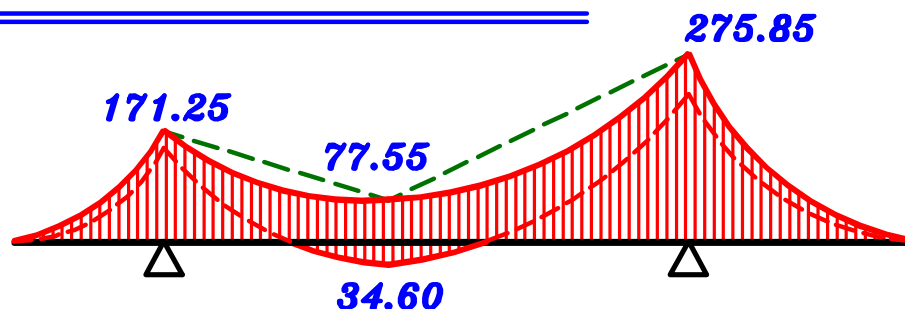
1- max. +ve B.M.D.



2- max. -ve B.M.D.

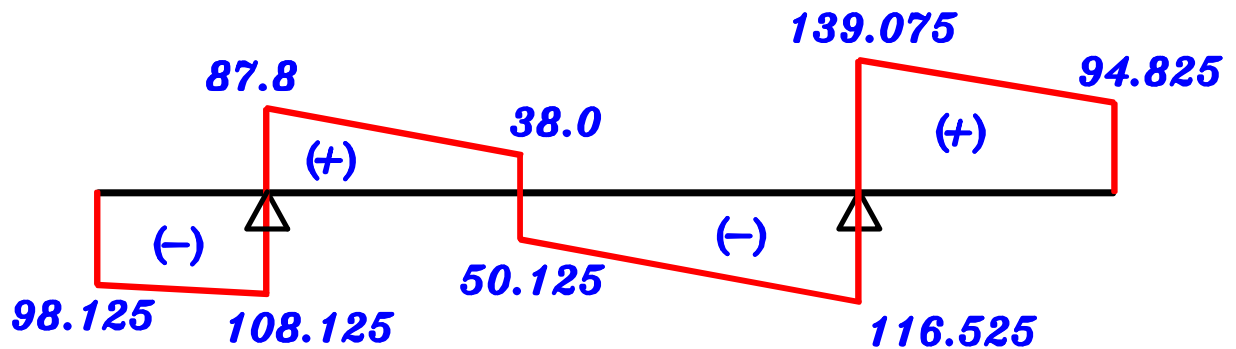
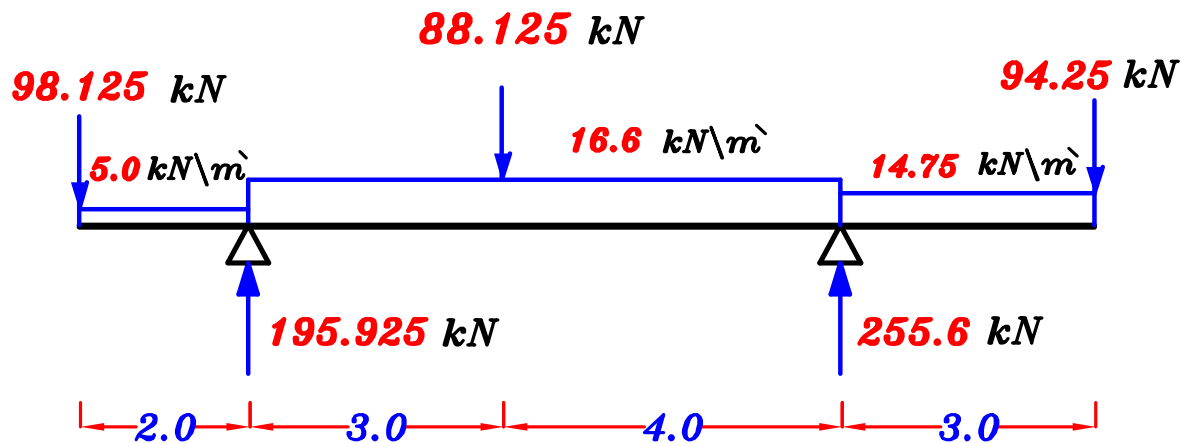
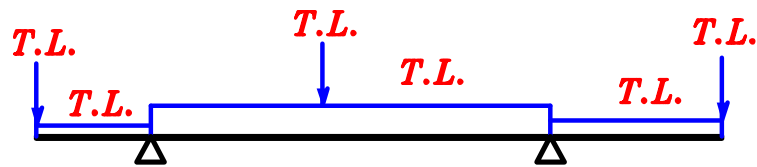


max-max B.M.D. For the Girder.



S.F.D. For the Girder.

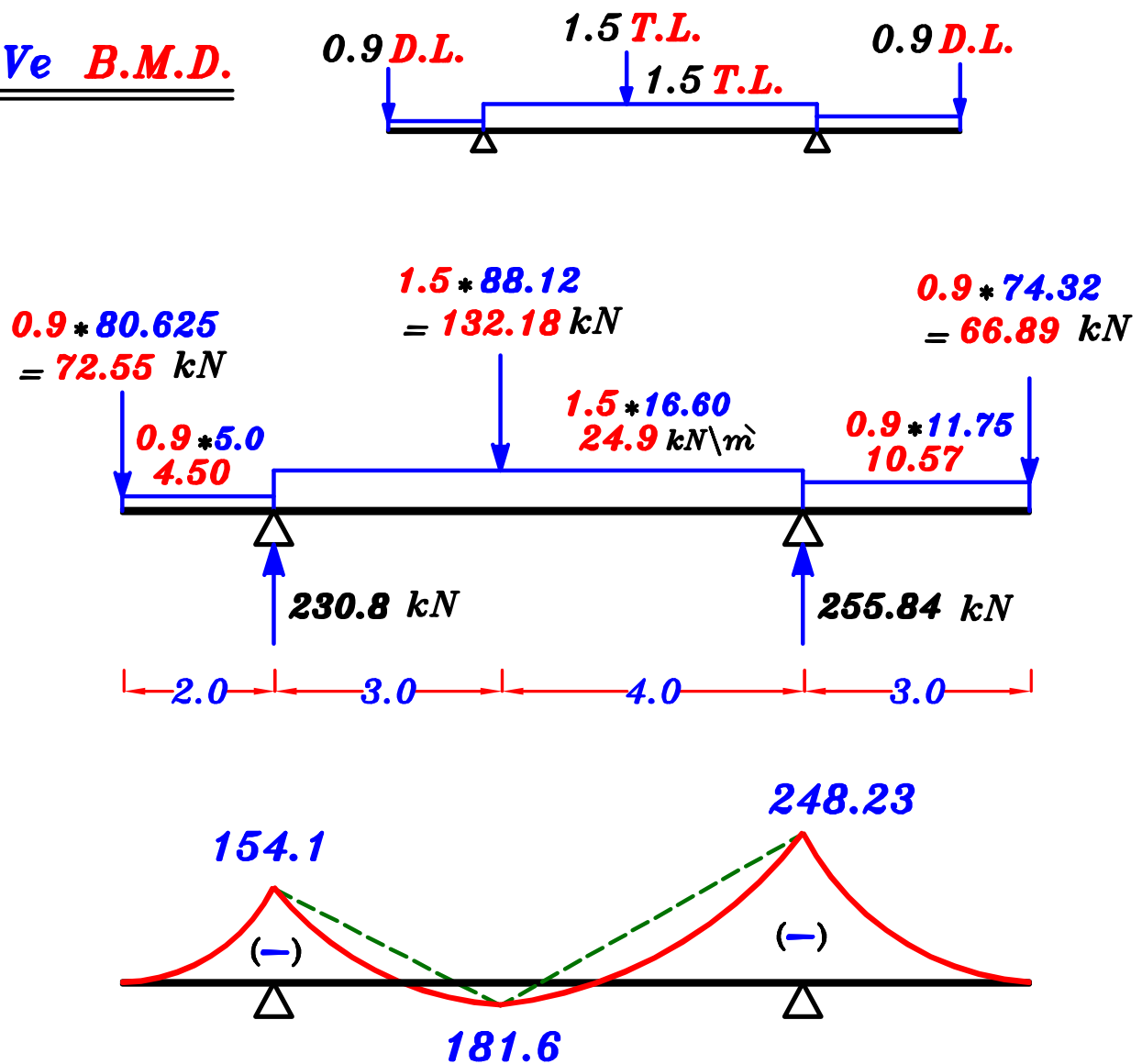
Take Total Load on all the spans.



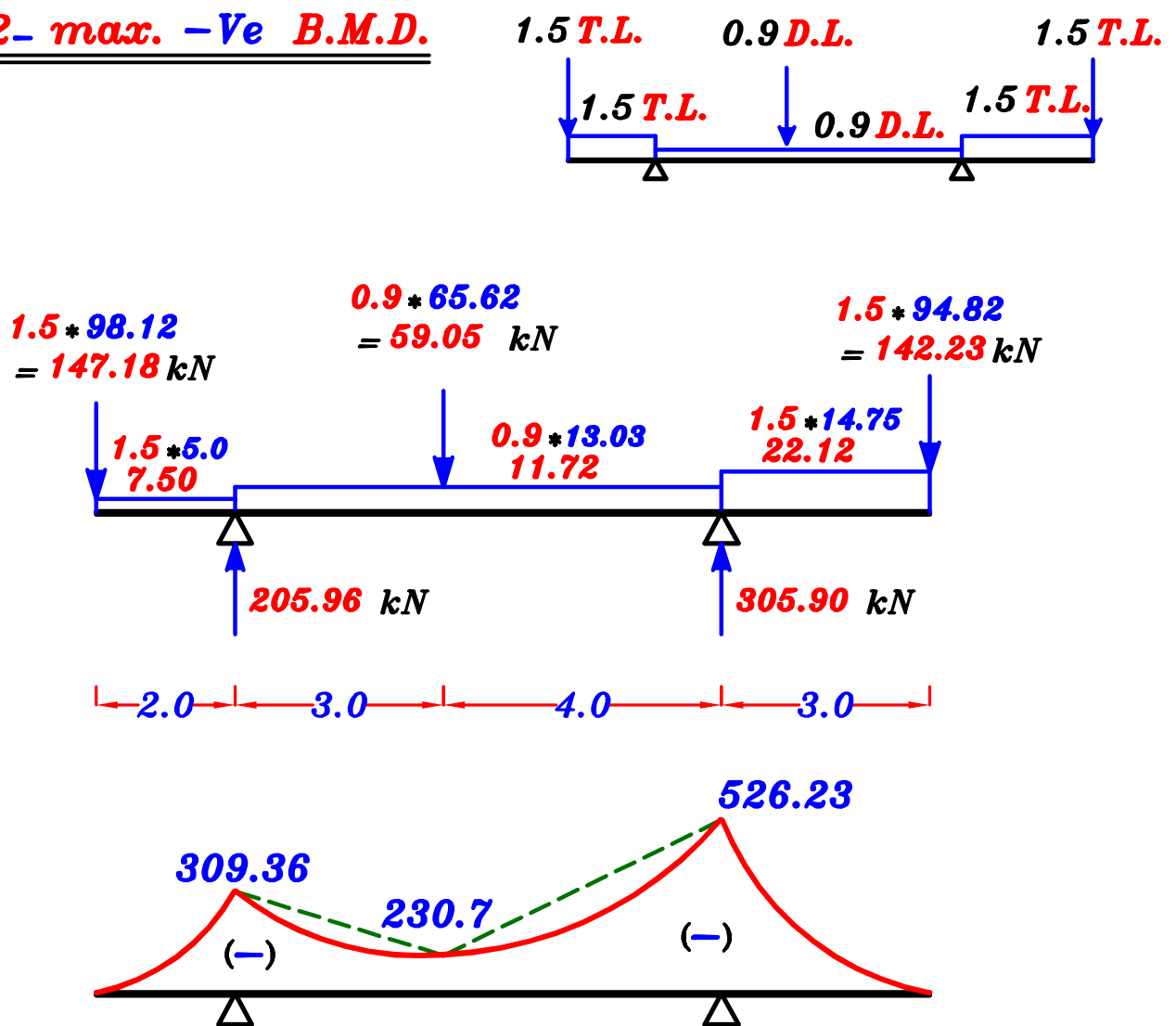
max-max B.M.D. For the Girder.

(using Ultimate Limits Loads)

1- max. +Ve B.M.D.

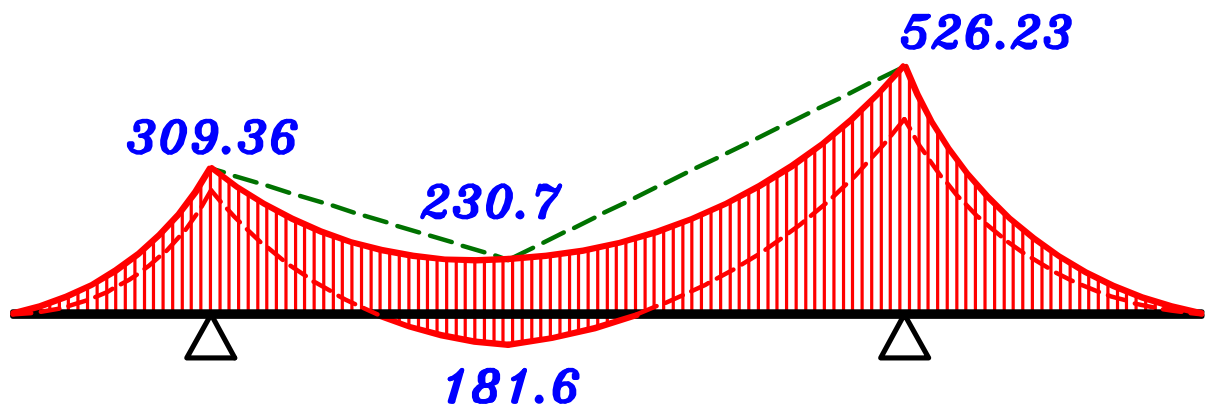


2- max. -Ve B.M.D.

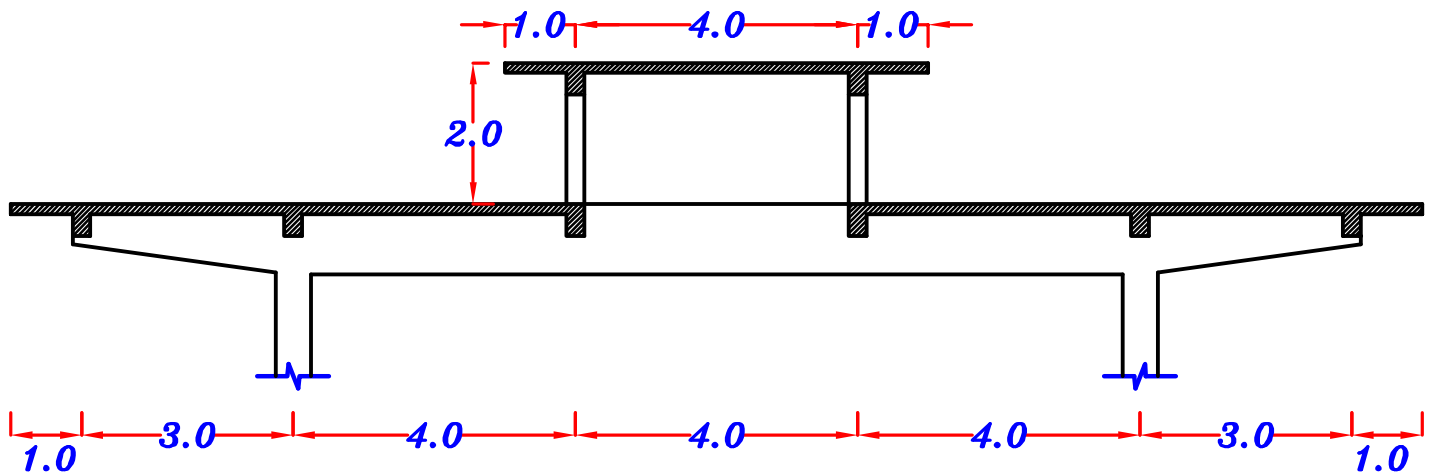


max-max B.M.D. For the Girder.

(using Ultimate Limits Loads)



Example.



- a** - Draw structural plan showing the pattern of load distribution.
- b** - Calculate the equivalent working loads For shear and moment For an interior girder (**G**).
- c** - Draw the maximum-maximum bending moment on the girder (**G**). (**using working loads**).
- d** - Draw the maximum-maximum bending moment on the girder (**G**). (**using ultimat limits loads**).
- e** - Draw the shearing Force diagram For the girder (**G**) For the case of the total load only. (**using working loads**).

Data :

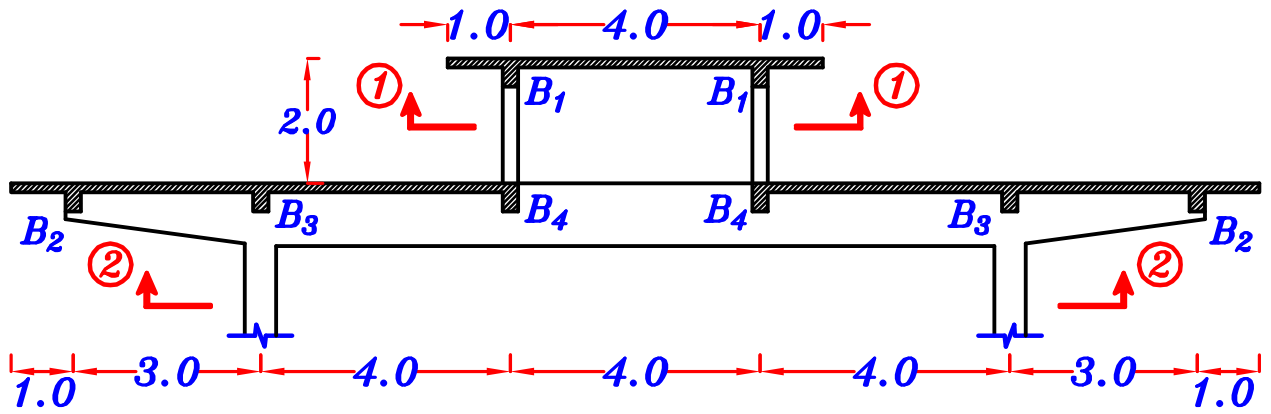
$$t_s = 0.12 \text{ m}$$

$$F.C. = 1.0 \text{ kN/m}^2, \quad L.L. = 1.0 \text{ kN/m}^2$$

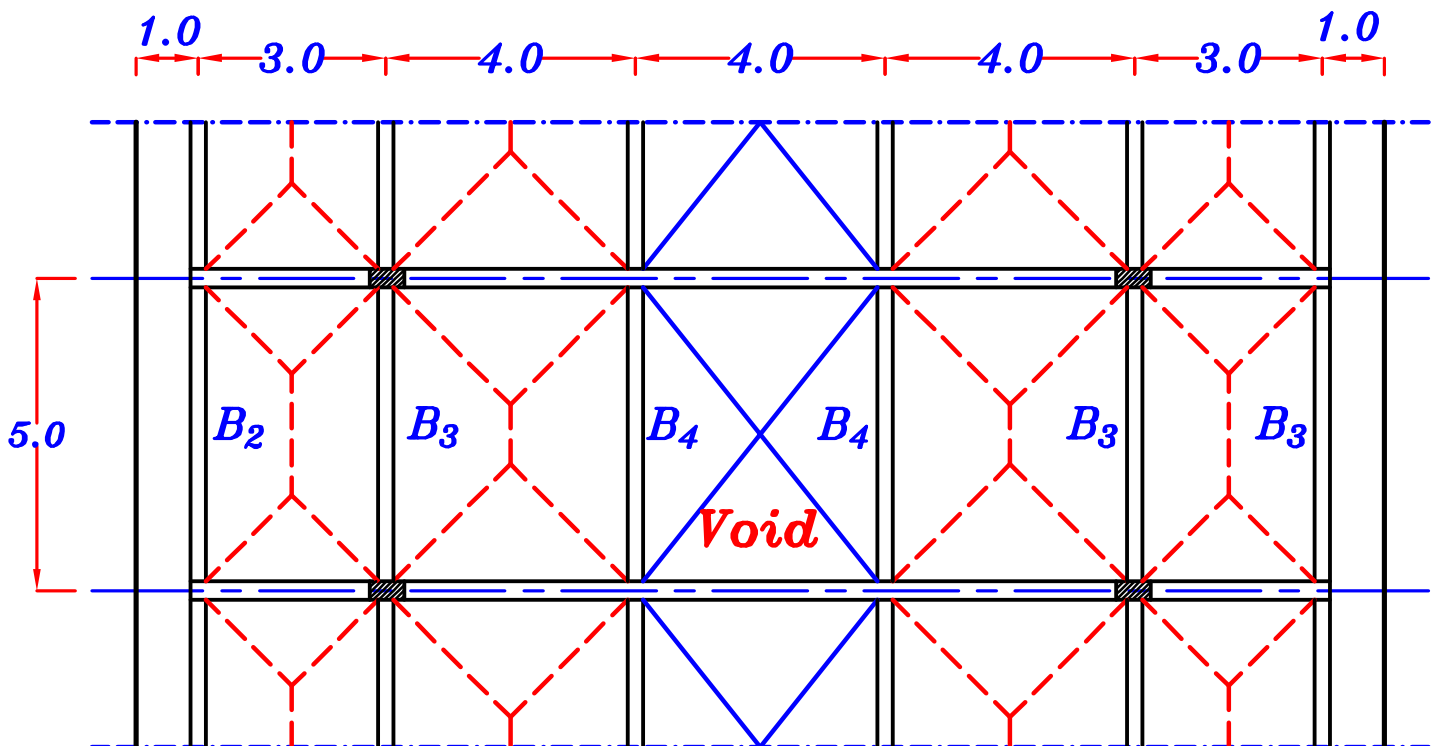
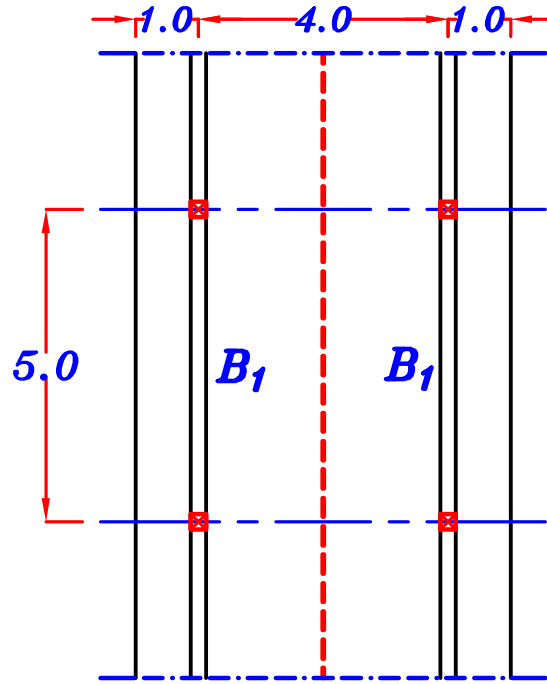
$$O.W. (\text{beams}) = 3.0 \text{ kN/m}, \quad O.W. (\text{girder}) = 6.0 \text{ kN/m}$$

$$b(\text{beams}) = 250 \text{ mm}, \quad b(\text{girder}) = 300 \text{ mm}$$

1- Structural plans.



Plan ①



Plan ②

$$\underline{g_s, p_s}$$

$$D.L. = g_s = t_s * \gamma_c + F.C. = 0.12 * 25 + 1.0 = 4.0 \text{ kN/m}^2$$

$$L.L. = p_s = L.L. = 1.0 \text{ kN/m}^2$$

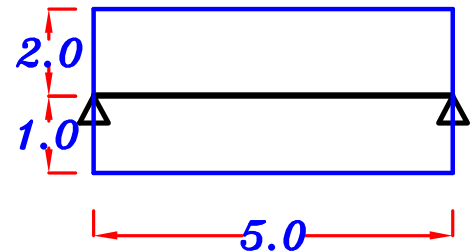
$$T.L. = w_s = g_s + p_s = 5.0 \text{ kN/m}^2$$

$$g_s = 4.0 \text{ kN/m}^2$$

,

$$p_s = 1.0 \text{ kN/m}^2$$

B₁ Load For Shear.



$$g_a = 0.W. + g_s L_c + g_s \frac{L_s}{2}$$

$$= 3.0 + (4.0)(1.0) + (4.0)\left(\frac{4}{2}\right) = 15.0 \text{ kN/m}$$

$$p_a = p_s L_c + p_s \frac{L_s}{2} = (1.0)(1.0) + (1.0)\left(\frac{4}{2}\right) = 3.0 \text{ kN/m}$$

$$w_a = g_a + p_a = 15.0 + 3.0 = 18.0 \text{ kN/m}$$

$$R_1 = g_a * \text{Spacing} = 15.0 * 5.0 = 75.0 \text{ kN} \text{ ----- D.L.}$$

$$= w_a * \text{Spacing} = 18.0 * 5.0 = 90.0 \text{ kN} \text{ ----- T.L.}$$

$$R_1 = 75.0 \text{ kN} \text{ ----- D.L.}$$

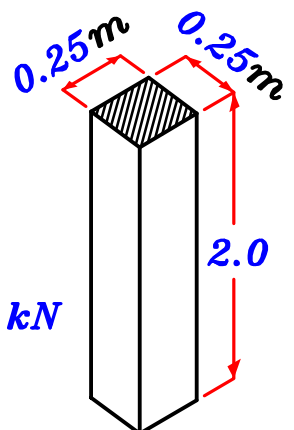
$$= 90.0 \text{ kN} \text{ ----- T.L.}$$

Post

$$\text{Weight of the Post} = \text{Volume} * \text{Density}$$

$$= (0.25 * 0.25 * 2.0) (25) = 3.10 \text{ kN}$$

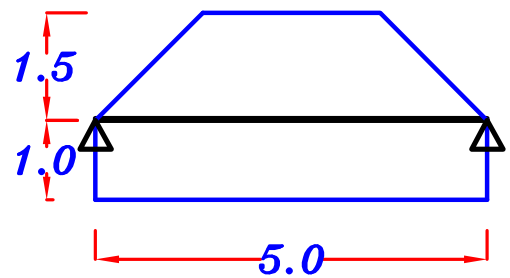
$$\text{Weight of the Post} = 3.10 \text{ kN}$$



B₂

For Trapezoid

$$C_a = 1 - \frac{1}{2} \left(\frac{L_s}{L} \right) = 1 - \frac{1}{2} \left(\frac{3}{5} \right) = 0.70$$



Load For Shear.

$$g_a = 0.W. + C_a g_s \frac{L_s}{2} + g_s L_c = 3.0 + (0.70)(4.0) \left(\frac{3}{2} \right) + (4.0)(1.0) = 11.2 \text{ kN/m}$$

$$p_a = C_a p_s \frac{L_s}{2} + p_s L_c = (0.70)(1.0) \left(\frac{3}{2} \right) + (1.0)(1.0) = 2.05 \text{ kN/m}$$

$$w_a = g_a + p_a = 11.2 + 2.05 = 13.25 \text{ kN/m}$$

$$R_2 = g_a * \text{Spacing} = 11.2 * 5.0 = 56.0 \text{ kN} \text{ ----- D.L.}$$

$$= w_a * \text{Spacing} = 13.25 * 5.0 = 66.25 \text{ kN} \text{ ----- T.L.}$$

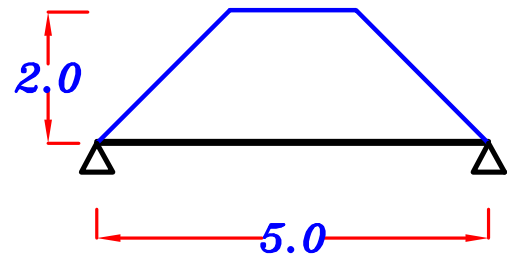
$$R_2 = 56.0 \text{ kN} \text{ ----- D.L.}$$

$$= 66.25 \text{ kN} \text{ ----- T.L.}$$

B₄

For Trapezoid

$$C_a = 1 - \frac{1}{2} \left(\frac{L_s}{L} \right) = 1 - \frac{1}{2} \left(\frac{4}{5} \right) = 0.60$$



Load For Shear.

$$g_a = 0.W. + C_a g_s \frac{L_s}{2} = 3.0 + (0.60)(4.0) \left(\frac{4}{2} \right) = 7.8 \text{ kN/m}$$

$$p_a = C_a p_s \frac{L_s}{2} = (0.60)(1.0) \left(\frac{4}{2} \right) = 1.2 \text{ kN/m}$$

$$w_a = g_a + p_a = 7.80 + 1.20 = 9.0 \text{ kN/m}$$

$$R_4 = g_a * \text{Spacing} = 7.8 * 5.0 = 39.0 \text{ kN} \text{ ----- D.L.}$$

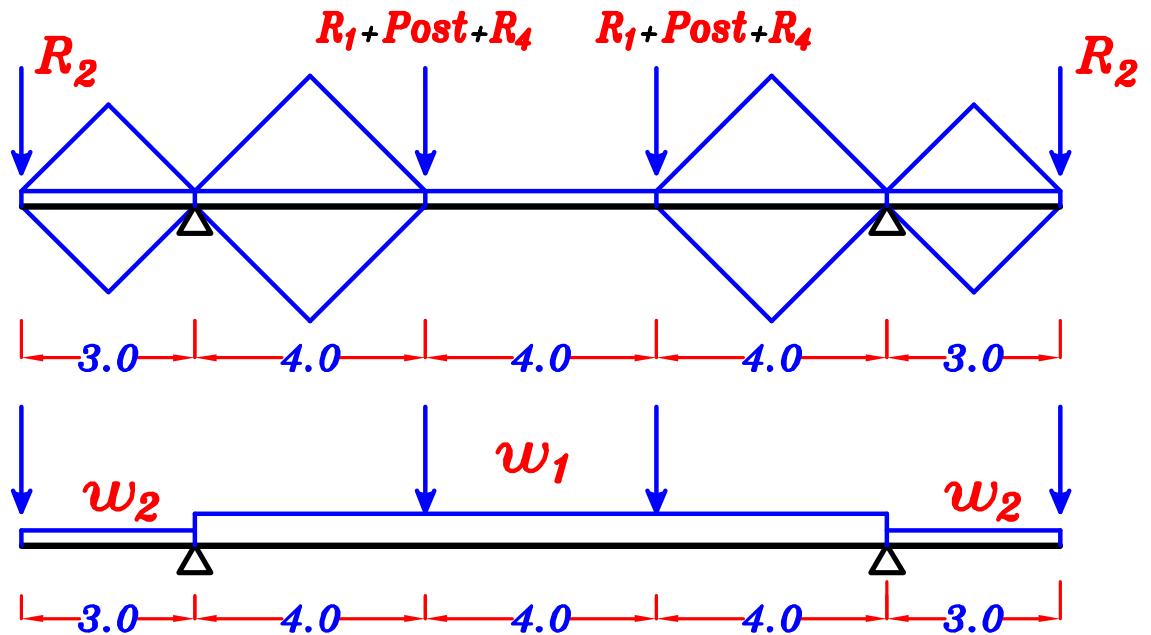
$$= w_a * \text{Spacing} = 9.0 * 5.0 = 45.0 \text{ kN} \text{ ----- T.L.}$$

$$R_4 = 39.0 \text{ kN} \text{ ----- D.L.}$$

$$= 45.0 \text{ kN} \text{ ----- T.L.}$$

G

Load on Girder.



w₁ Load For shear = Load For Moment

$$\frac{\sum \text{area}}{\text{span}} = \frac{4 \left(\frac{1}{2} \right) (4.0) (2.0)}{12.0} = \frac{4}{3}$$

$$g_1 = 0.w. + \frac{\sum \text{area}}{\text{span}} * g_s = 6.0 + \left(\frac{4}{3} \right) (4.0) = 11.33 \text{ kN/m}$$

$$p_1 = \frac{\sum \text{area}}{\text{span}} * p_s = \left(\frac{4}{3} \right) (1.0) = 1.33 \text{ kN/m}$$

$$w_1 = g_1 + p_1 = 11.33 + 1.33 = 12.66 \text{ kN/m}$$

$$g_1 = 11.33 \text{ kN/m} \text{ --- D.L.}$$

$$w_1 = 12.66 \text{ kN/m} \text{ --- T.L.}$$

w₂ For triangle $C_a = C_e = \frac{1}{2}$

$$g_a = g_e = 0.w. + 2 C_a g_s \frac{L_c}{2} = 6.0 + 2 \left(\frac{1}{2} \right) (4.0) \left(\frac{3.0}{2} \right) = 12.0 \text{ kN/m}$$

$$p_a = p_e = 2 C_a p_s \frac{L_c}{2} = 2 \left(\frac{1}{2} \right) (1.0) \left(\frac{3.0}{2} \right) = 1.50 \text{ kN/m}$$

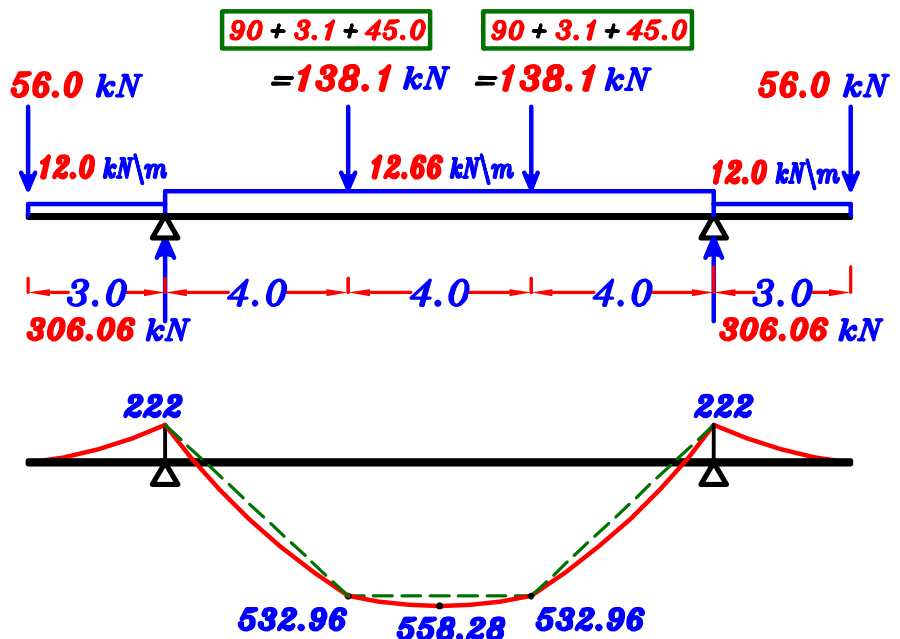
$$w_a = w_e = g_a + p_a = 12.0 + 1.50 = 13.5 \text{ kN/m}$$

$$g_2 = 12.0 \text{ kN/m} \text{ --- D.L.}$$

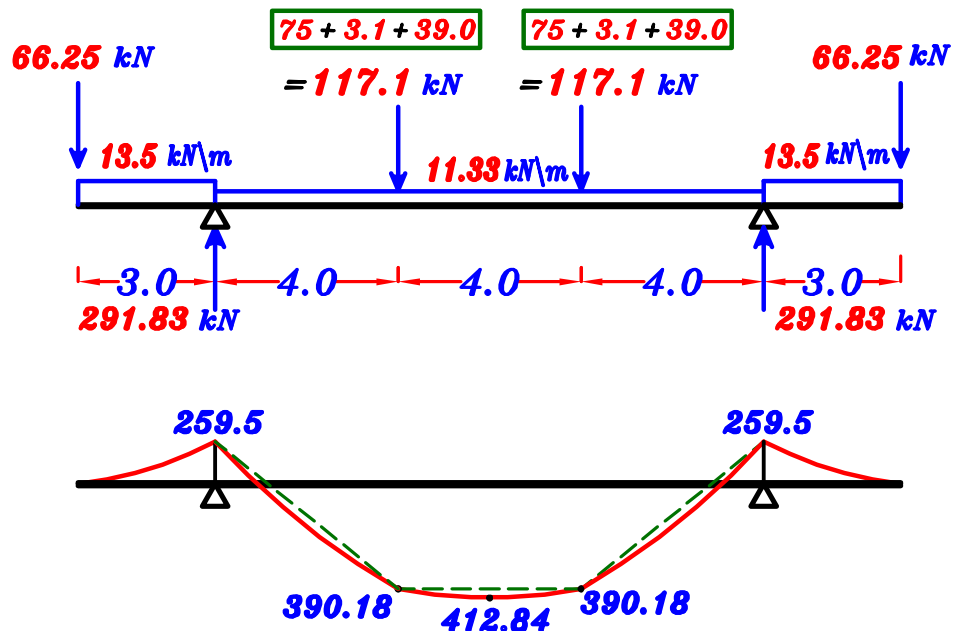
$$w_2 = 13.5 \text{ kN/m} \text{ --- T.L.}$$

max-max B.M.D. on Girder (G) (using working loads)

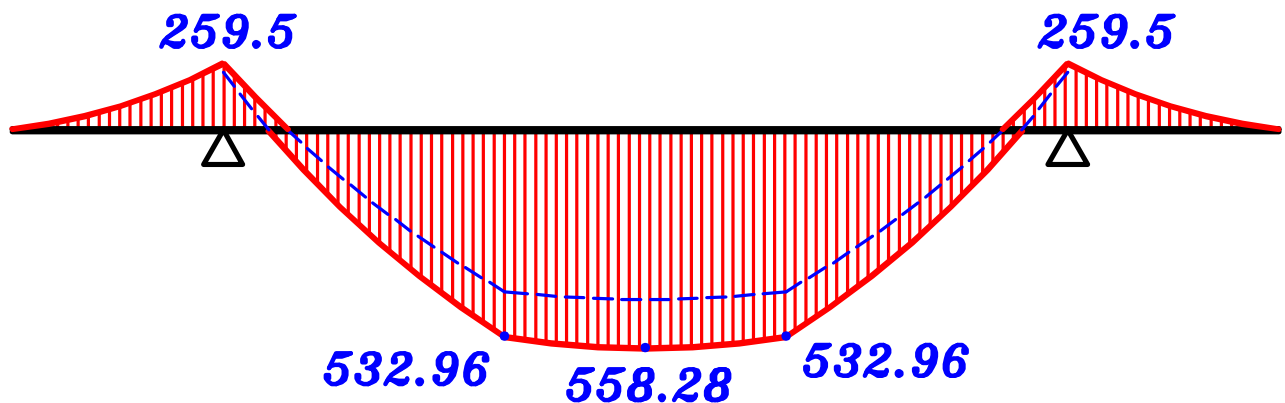
1- max. +ve B.M.D.



2- max. -ve B.M.D.

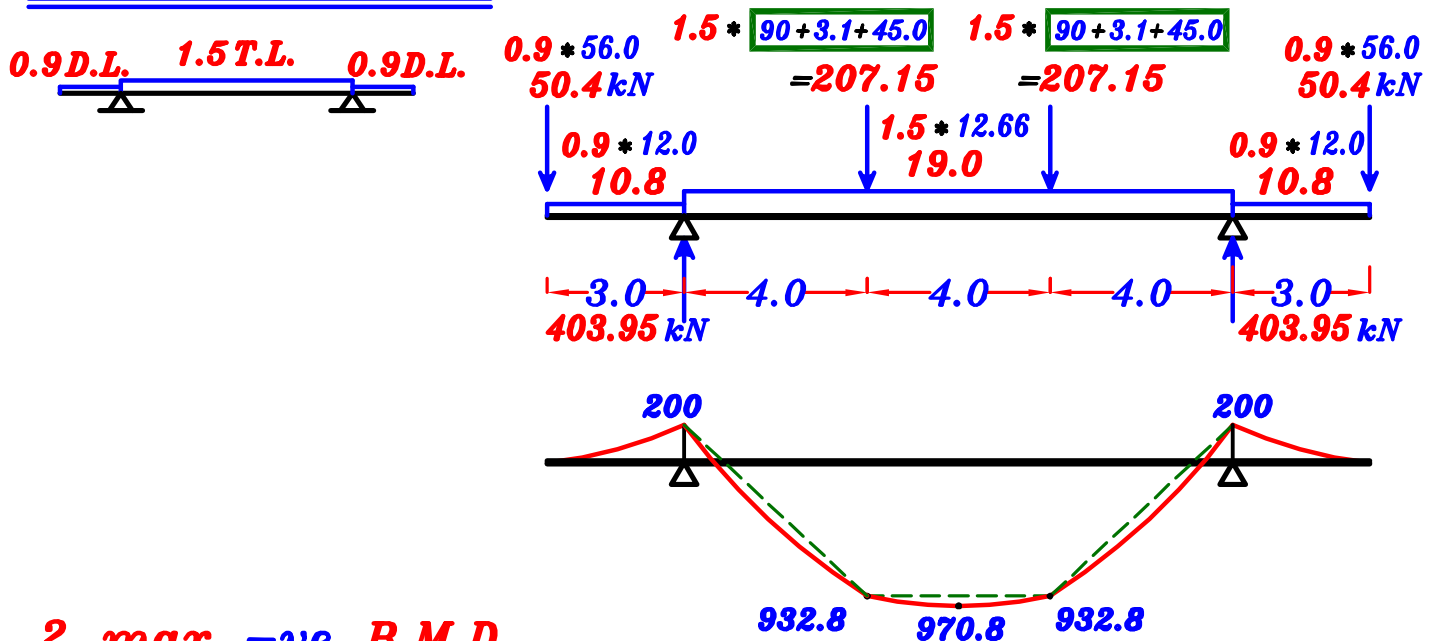


max-max B.M.D. For the Girder.

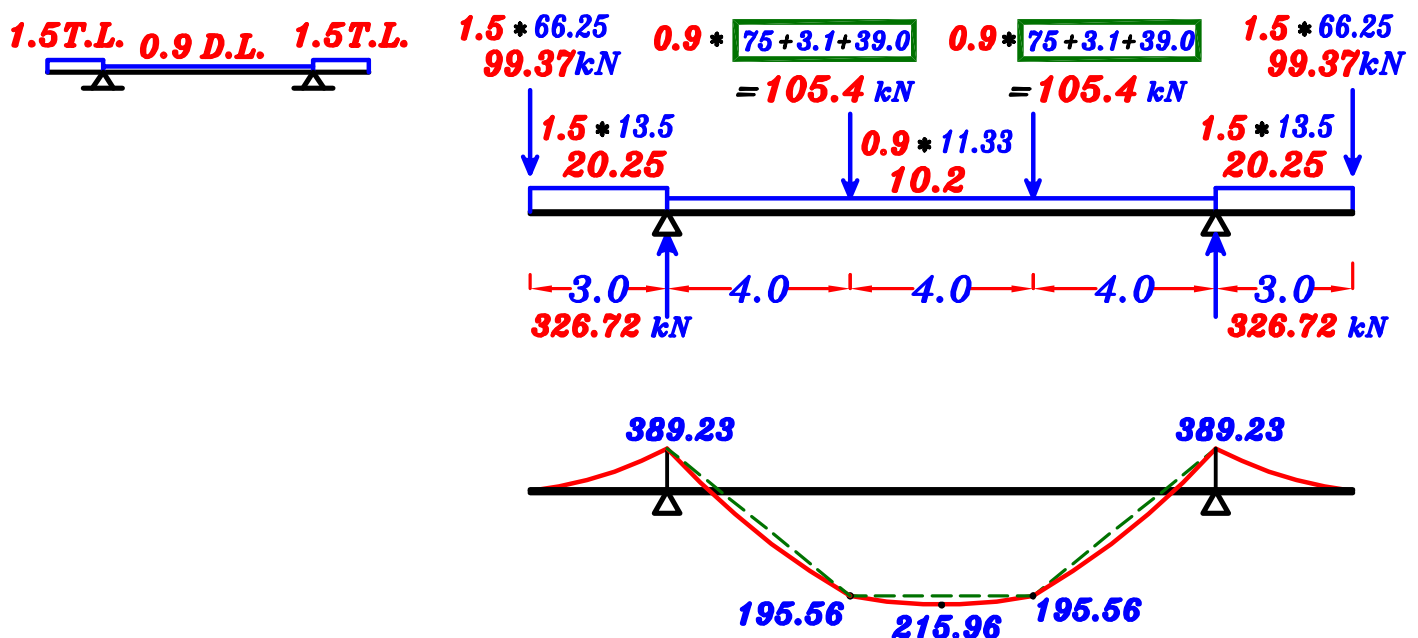


max-max B.M.D. on Girder (G) (using ultimate limits loads)

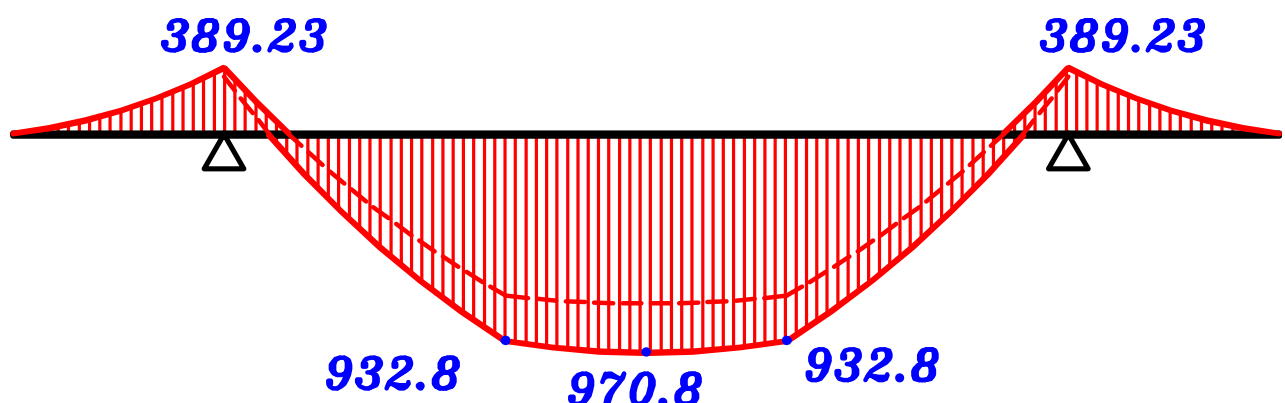
1- max. +ve B.M.D.



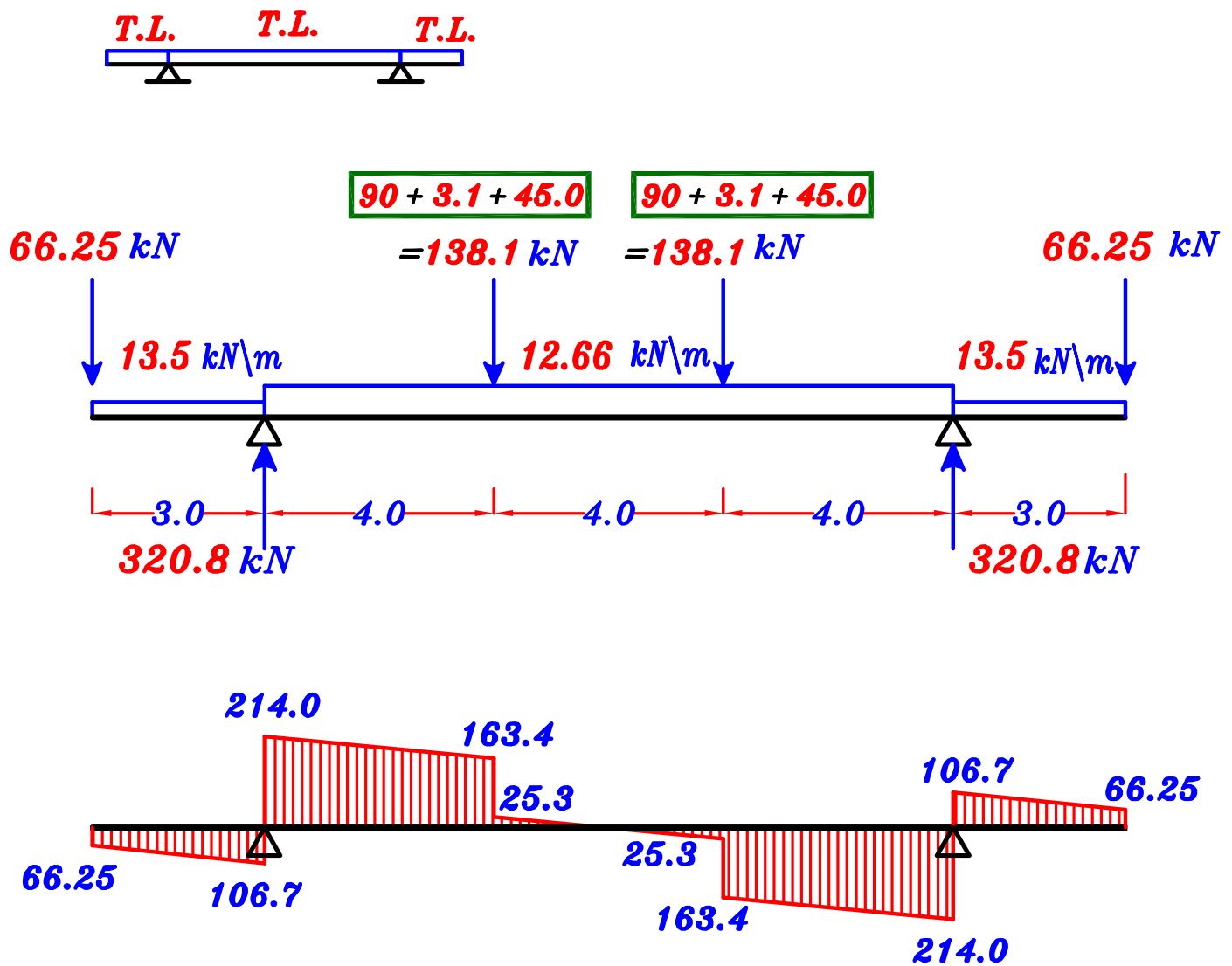
2- max. -ve B.M.D.



max-max B.M.D. For the Girder.



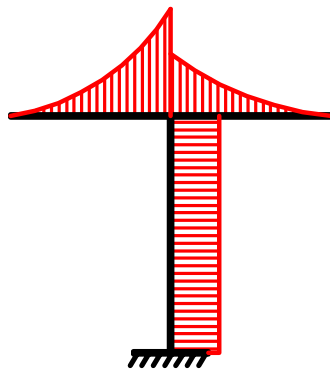
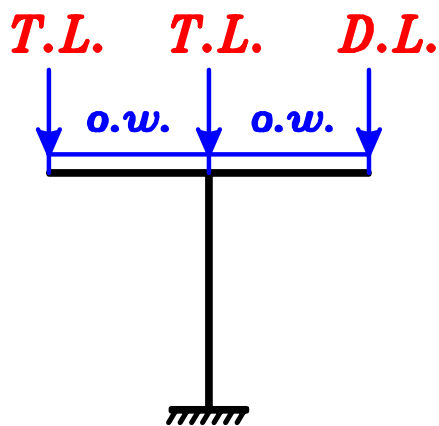
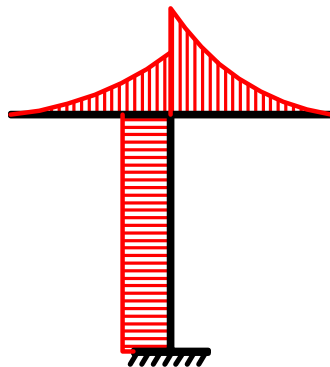
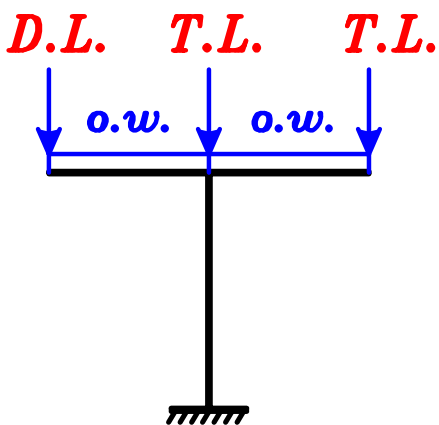
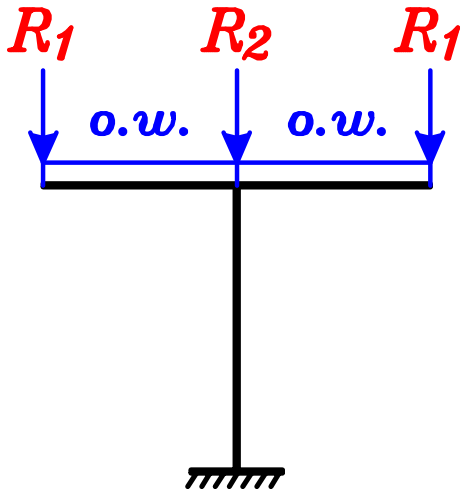
S.F.D. For the Girder (G) (using working loads)



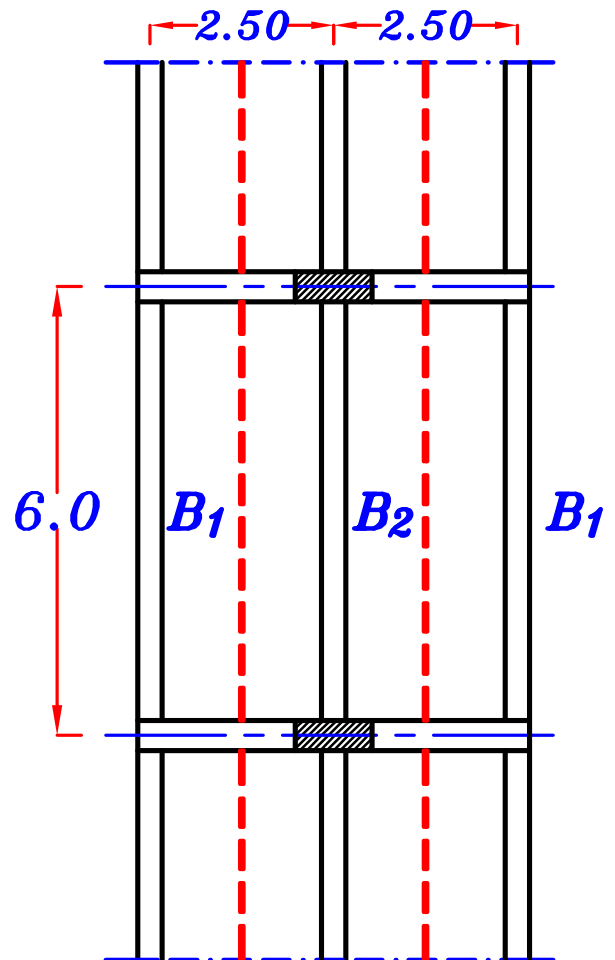
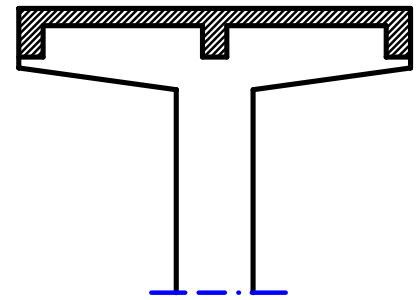
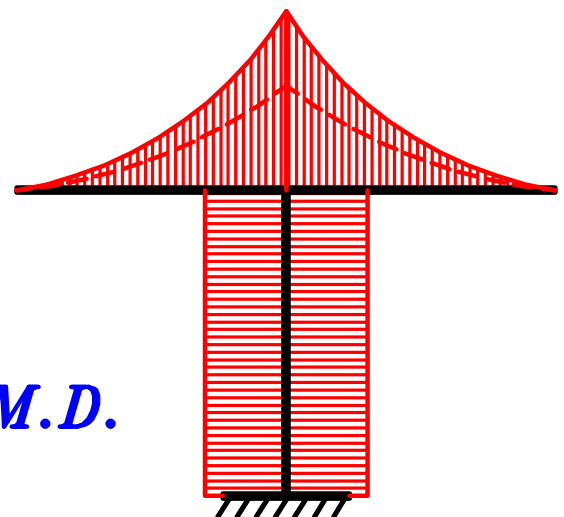
Notes.

Double Cantilever Frame.

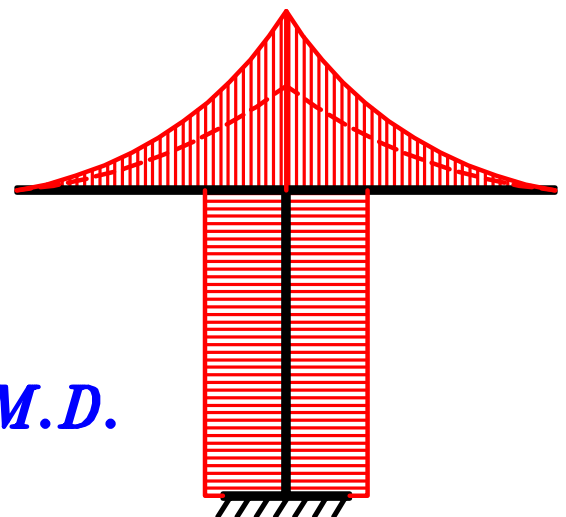

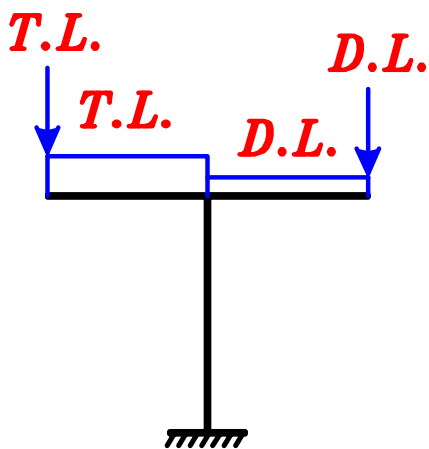
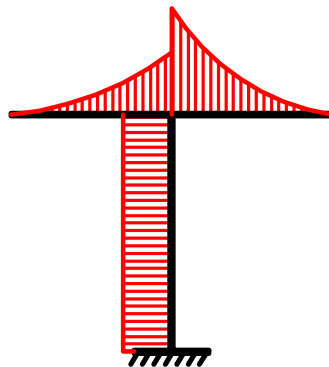
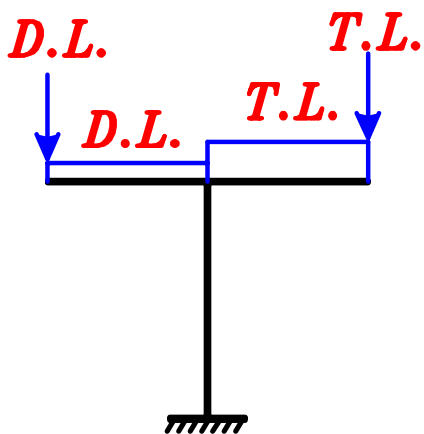
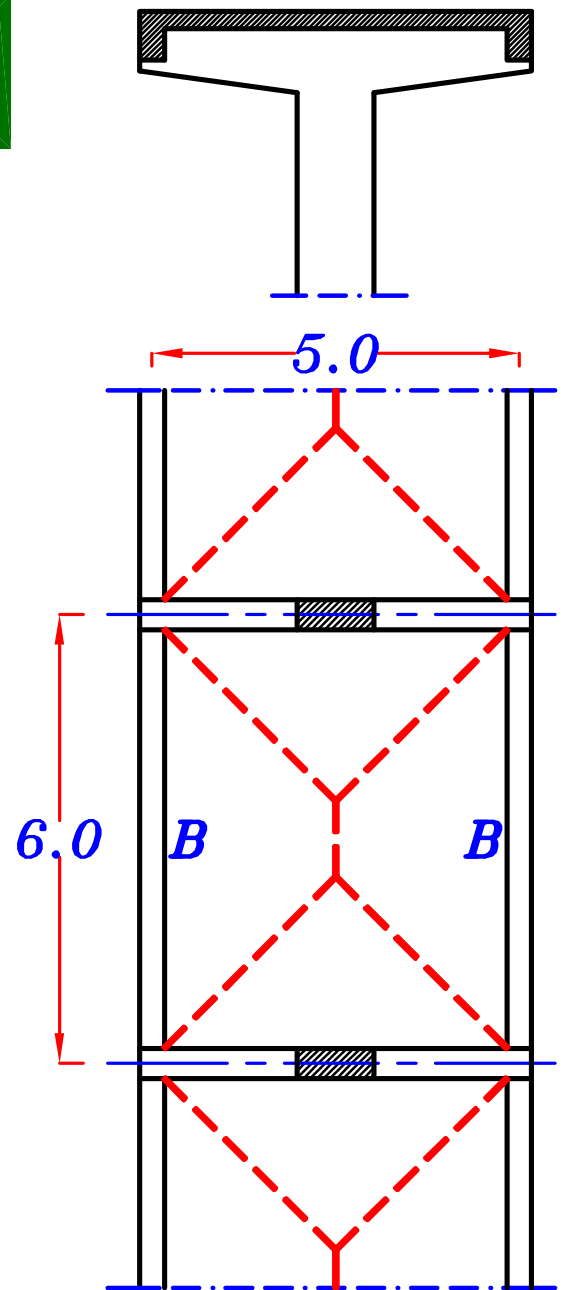
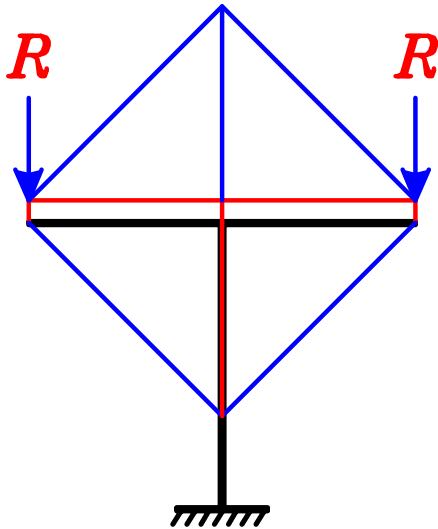
توجد ثلاث كمّرات محمولين على ال *Frame*
البلاطات *one way* في اتجاه الكمّرات



max-max B.M.D.

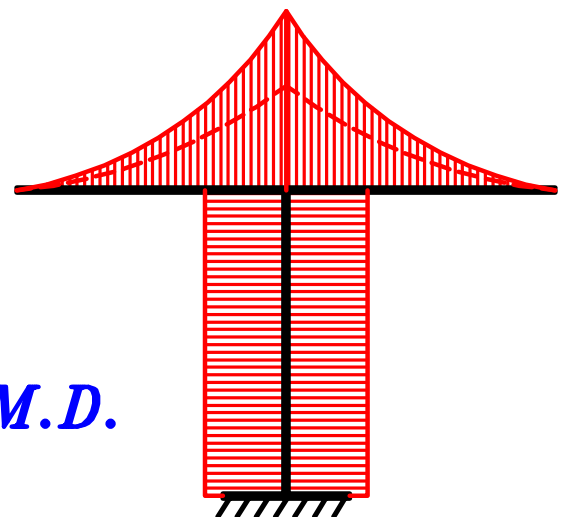
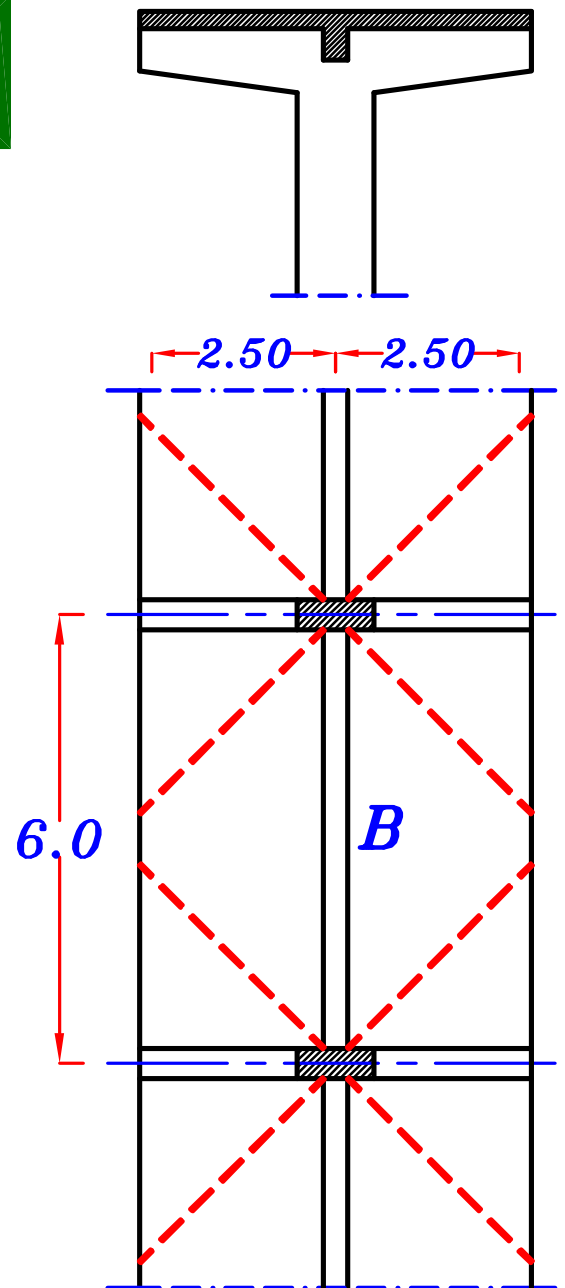

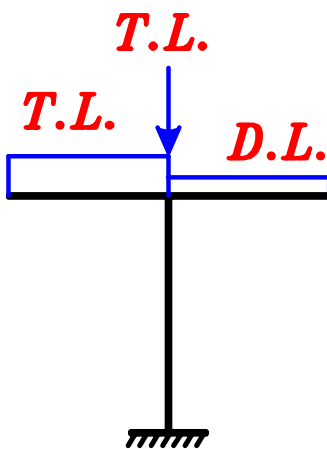
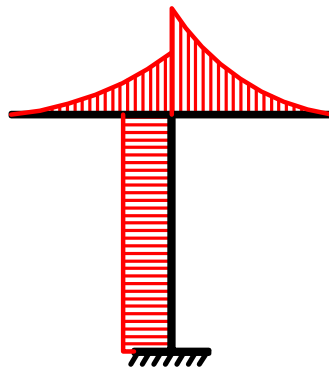
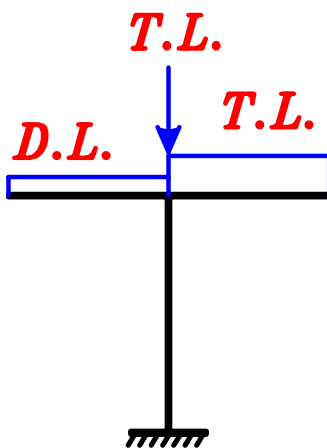
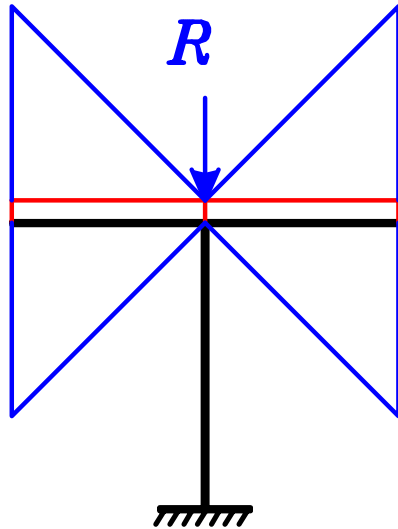


توجد كمرتان فقط محمولتان على الـ **Frame**
البلاطات **Two way**



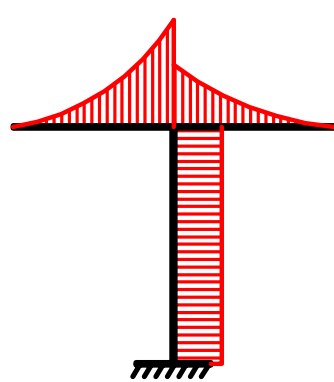
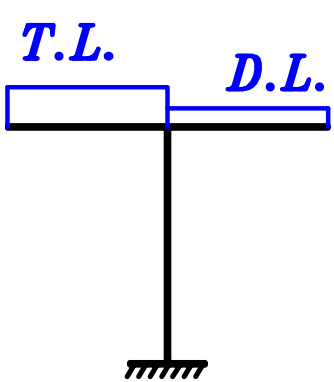
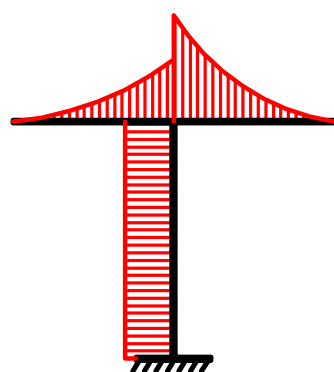
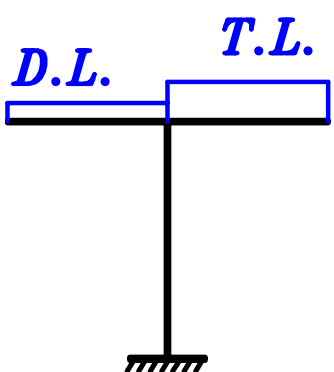
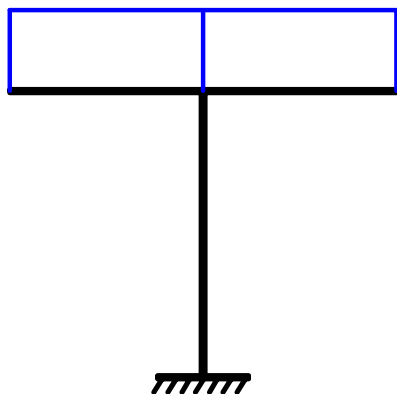
max-max B.M.D.

توجد كمره واحده فقط محموله على ال **Frame**
البلاطات **3 sided slab**

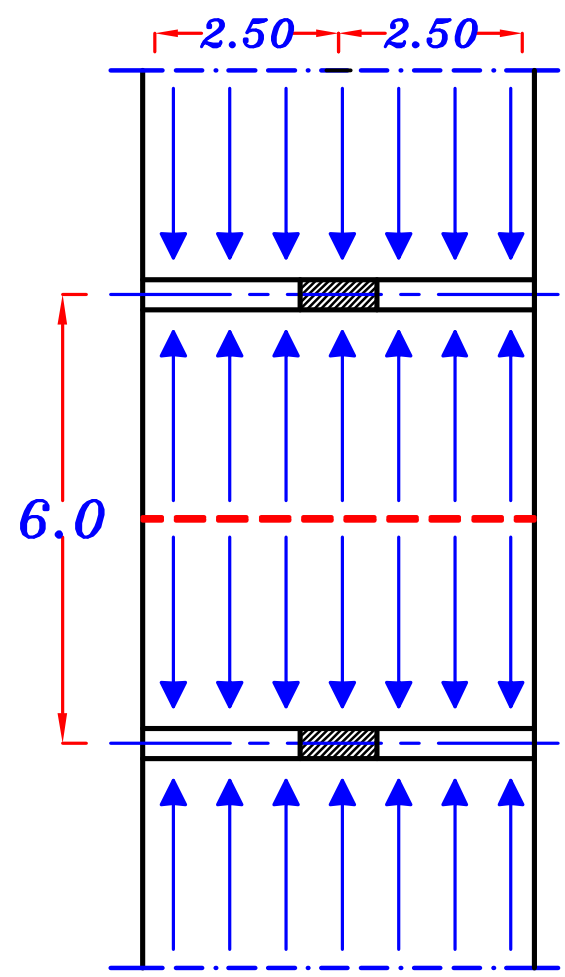
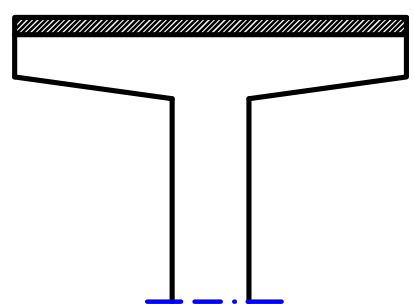
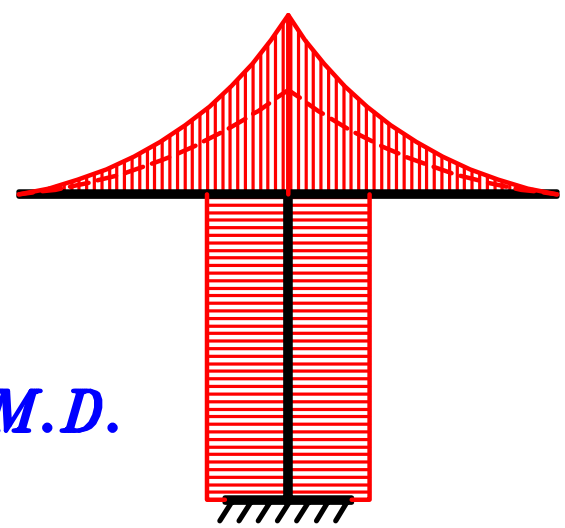


max-max B.M.D.

لا توجد كمّرات محموله على ال *Frame*
البلاطات *one way* فى اتجاه ال *Frame*



max-max B.M.D.



Examples on Load Distribution.

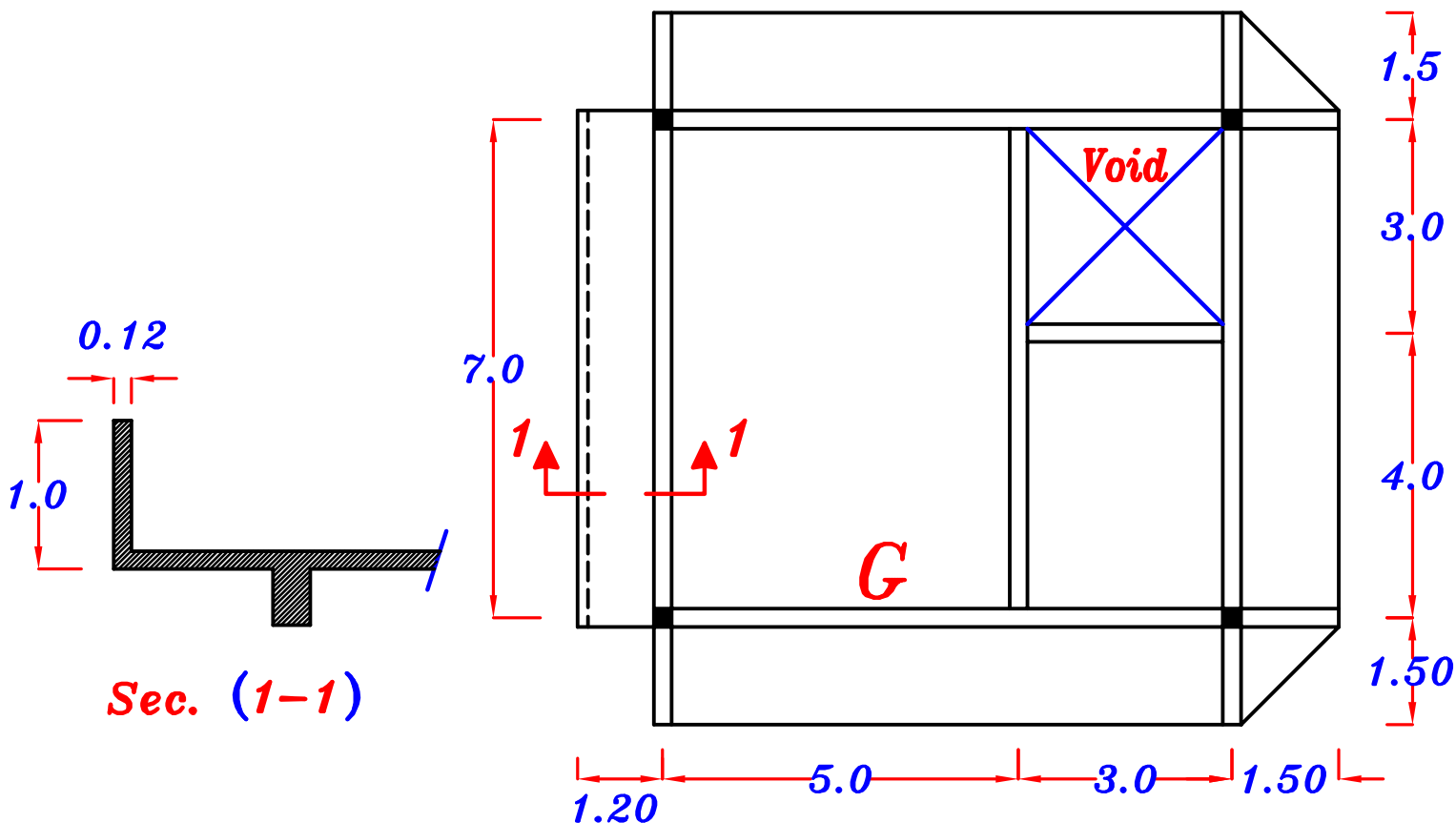
Example.

For the given Figure of structural plans, It is required to:

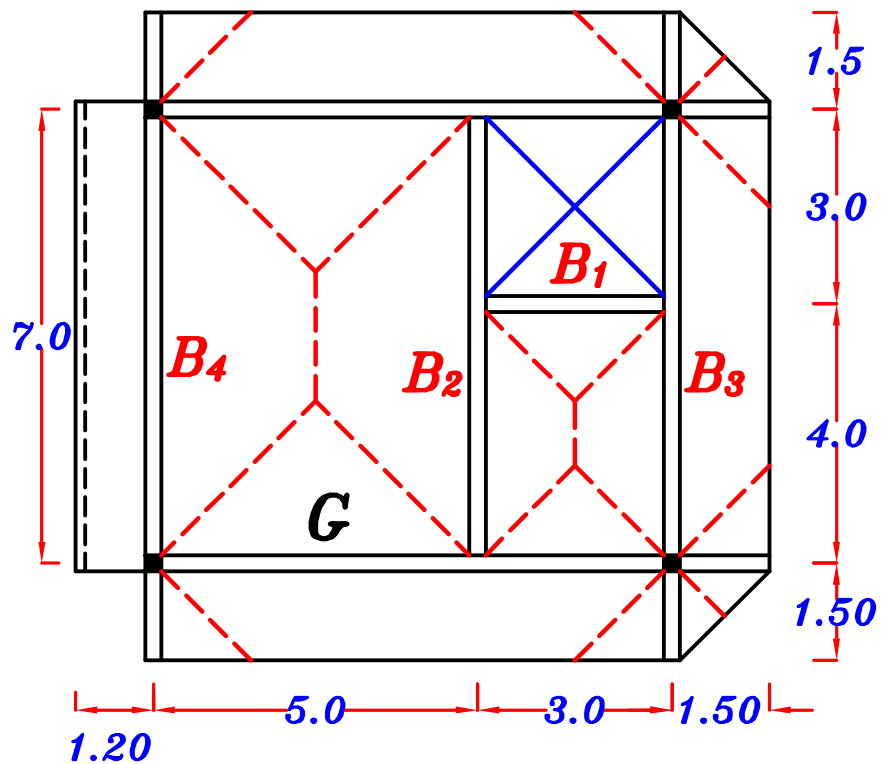
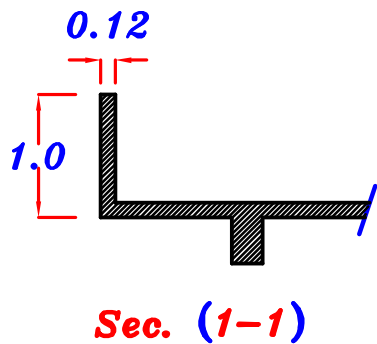
- 1- Draw a structural plan showing the shape of load distribution.
- 2- Calculate the equivalent loads For shear and bending For all Beams.
- 3- For girder marked (**G**), draw the S.F.D. and absolute (**max-max**) **B.M.D.**

$$O.W. \text{ beams} = 3.0 \text{ kN/m} \quad O.W. \text{ girder} = 6.0 \text{ kN/m} \quad t_s = 0.12 \text{ m}$$

$$F.C. = 1.5 \text{ kN/m}^2 \quad L.L. = 3.0 \text{ kN/m}^2$$



1- Draw a structural plan showing the shape of load distribution.



g_s, p_s

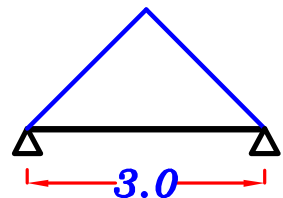
$$g_s = t_s * \gamma_c + F.C. = 0.12 * 25 + 1.5 = 4.50 \text{ kN/m}^2$$

$$p_s = L.L. = 3.0 \text{ kN/m}^2 \quad \boxed{g_s = 4.50 \text{ kN/m}^2}, \quad \boxed{p_s = 3.0 \text{ kN/m}^2}$$

2- Calculate the equivalent working loads For shear and moment For beams B_1, B_2, B_3 & B_4 .

B_1 For Triangle $C_a = \frac{1}{2}$, $C_e = \frac{2}{3}$

Load For Shear.



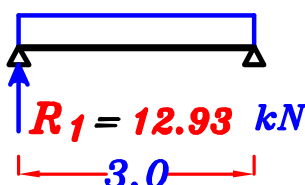
$$g_a = O.W. + C_a g_s \frac{L_s}{2} = 3.0 + \frac{1}{2} (4.50) \left(\frac{3.0}{2}\right) = 6.37 \text{ kN/m}$$

$$p_a = C_a p_s \frac{L_s}{2} = \frac{1}{2} (3.0) \left(\frac{3.0}{2}\right) = 2.25 \text{ kN/m}$$

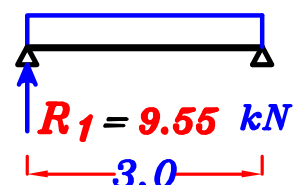
$$w_a = g_a + p_a = 6.37 + 2.25 = 8.62 \text{ kN/m}$$

$$\boxed{R_1 = 9.55 \text{ kN} \text{ ---- D.L.}} \\ \boxed{= 12.93 \text{ kN} \text{ ---- T.L.}}$$

$$w_a = 8.62 \text{ kN/m}$$



$$g_a = 6.37 \text{ kN/m}$$



Load For Moment.

$$g_e = 0.W. + C_e g_s \frac{L_s}{2} = 3.0 + \frac{2}{3} (4.50) \left(\frac{3.0}{2}\right) = 7.50 \text{ kN}\backslash\text{m}$$

$$p_e = C_e p_s \frac{L_s}{2} = \frac{2}{3} (3.0) \left(\frac{3.0}{2}\right) = 3.0 \text{ kN}\backslash\text{m}$$

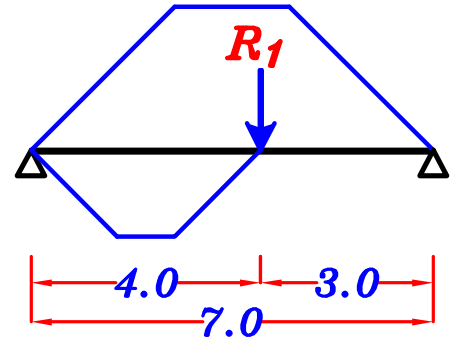
$$w_e = g_a + p_a = 7.50 + 3.0 = 10.50 \text{ kN}\backslash\text{m}$$

B₂

For Trapezoid

$$C_a = 1 - \frac{1}{2} \left(\frac{L_s}{L}\right) = 1 - \frac{1}{2} \left(\frac{5.0}{7.0}\right) = 0.64$$

$$C_e = 1 - \frac{1}{3} \left(\frac{L_s}{L}\right)^2 = 1 - \frac{1}{3} \left(\frac{5.0}{7.0}\right)^2 = 0.83$$



$$\frac{\sum \text{area}}{\text{span}} = \frac{\left(\frac{4+1}{2}\right)(1.5)}{7.0} = 0.53$$

Load For Shear.

$$g_a = 0.w. + C_a g_s \frac{L_s}{2} + \frac{\sum \text{area}}{\text{span}} * g_s$$

$$= 3.0 + (0.64)(4.50) \left(\frac{5.0}{2}\right) + (0.53)(4.50) = 12.58 \text{ kN}\backslash\text{m}$$

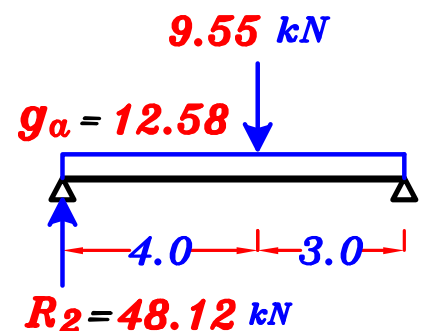
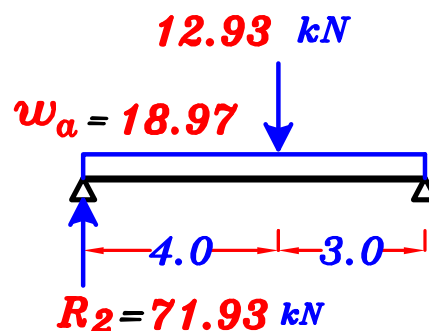
$$p_a = C_a p_s \frac{L_s}{2} + \frac{\sum \text{area}}{\text{span}} * p_s$$

$$= (0.64)(3.0) \left(\frac{5.0}{2}\right) + (0.53)(3.0) = 6.39 \text{ kN}\backslash\text{m}$$

$$w_a = g_a + p_a = 12.58 + 6.39 = 18.97 \text{ kN}\backslash\text{m}$$

$$R_2 = 48.12 \text{ kN} \text{--- D.L.}$$

$$= 71.93 \text{ kN} \text{--- T.L.}$$



Load For Moment.

$$g_e = o.w. + C_e g_s \frac{L_s}{2} + \frac{\sum \text{area}}{\text{span}} * g_s$$

$$= 3.0 + (0.83)(4.50) \left(\frac{5.0}{2}\right) + (0.53)(4.50) = 14.72 \text{ kN/m}$$

$$p_e = C_e p_s \frac{L_s}{2} + \frac{\sum \text{area}}{\text{span}} * p_s$$

$$= (0.83)(3.0) \left(\frac{5.0}{2}\right) + (0.53)(3.0) = 7.81 \text{ kN/m}$$

$$w_e = g_e + p_e = 14.72 + 7.81 = 22.53 \text{ kN/m}$$

B₃

w₁

$$\frac{\sum \text{area}}{\text{span}} = \frac{\left(\frac{4+1}{2}\right)(1.5)}{7.0} = 0.53$$

For Trapezoid

$$C_a = 1 - \frac{1}{2} \left(\frac{2L_c}{L}\right) = 1 - \frac{1}{2} \left(\frac{3.0}{7.0}\right) = 0.78$$

$$C_e = 1 - \frac{1}{3} \left(\frac{2L_c}{L}\right)^2 = 1 - \frac{1}{3} \left(\frac{3.0}{7.0}\right)^2 = 0.94$$

Load For Shear.

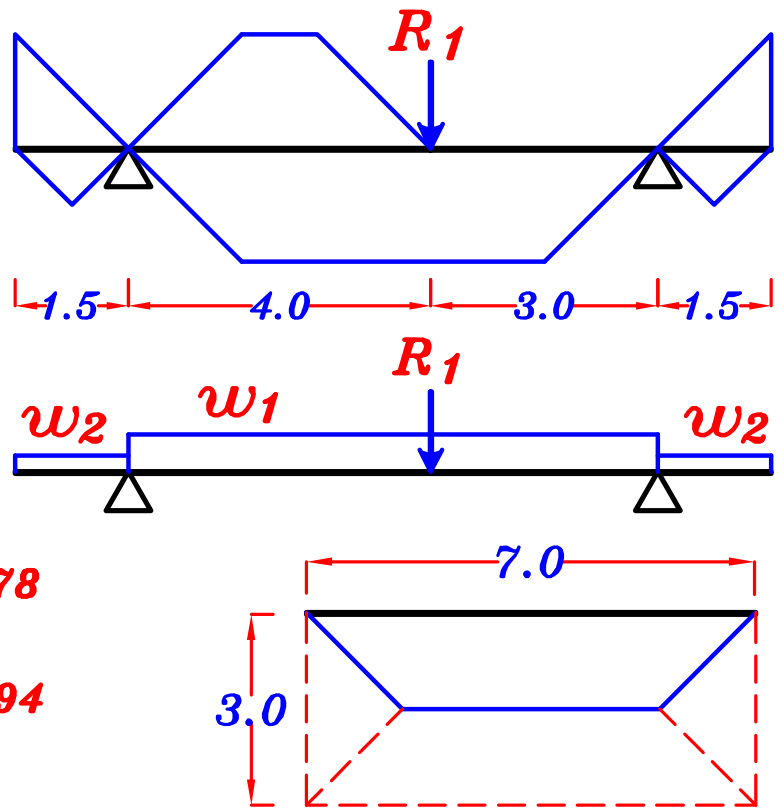
$$g_{1a} = o.w. + C_a g_s L_c + \frac{\sum \text{area}}{\text{span}} * g_s$$

$$= 3.0 + (0.78)(4.50)(1.5) + (0.53)(4.50) = 10.65 \text{ kN/m}$$

$$p_{1a} = C_a p_s L_c + \frac{\sum \text{area}}{\text{span}} * p_s$$

$$= (0.78)(2.0)(1.5) + (0.53)(2.0) = 3.4 \text{ kN/m}$$

$$w_{1a} = g_{1a} + p_{1a} = 10.65 + 3.4 = 14.05 \text{ kN/m}$$



Load For Moment.




$$g_{1e} = o.w.+ C_e g_s L_c + \frac{\sum area}{span} * g_s$$

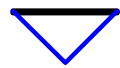
$$= 3.0 + (0.94)(4.50)(1.5) + (0.53)(4.50) = \mathbf{11.73 \text{ kN}\backslash m}$$

$$p_{1e} = C_e p_s \frac{L_s}{2} + \frac{\sum area}{span} * p_s$$

$$= (0.94)(2.0) \left(\frac{3.0}{2}\right) + (0.53)(2.0) = \mathbf{3.88 \text{ kN}\backslash m}$$

$$w_{1e} = g_{1e} + p_{1e} = 11.73 + 3.88 = \mathbf{15.61 \text{ kN}\backslash m}$$

w_2 For Triangle  $C_a = \frac{1}{2}$, $C_e = \frac{2}{3}$

For Triangle  $C_a = \frac{1}{2}$, $C_e = \frac{1}{2}$

Load For Shear.

$$g_{2a} = o.w.+ C_a g_s L_c + C_a g_s \frac{L_c}{2}$$

$$= 3.0 + \left(\frac{1}{2}\right)(4.50)(1.5) + \left(\frac{1}{2}\right)(4.50)\left(\frac{1.5}{2}\right) = \mathbf{8.06 \text{ kN}\backslash m}$$

$$p_{2a} = C_a p_s L_c + C_a p_s \frac{L_c}{2}$$

$$= \left(\frac{1}{2}\right)(2.0)(1.5) + \left(\frac{1}{2}\right)(2.0)\left(\frac{1.5}{2}\right) = \mathbf{2.25 \text{ kN}\backslash m}$$

$$w_{2a} = g_{2a} + p_{2a} = 8.06 + 2.25 = \mathbf{10.31 \text{ kN}\backslash m}$$

Load For Moment.

$$g_{2e} = o.w.+ C_e g_s L_c + C_e g_s \frac{L_c}{2}$$

$$= 3.0 + \left(\frac{2}{3}\right)(4.50)(1.5) + \left(\frac{1}{2}\right)(4.50)\left(\frac{1.5}{2}\right) = \mathbf{9.18 \text{ kN}\backslash m}$$

$$p_{2e} = C_e p_s L_c + C_e p_s \frac{L_c}{2}$$

$$= \left(\frac{2}{3}\right)(2.0)(1.5) + \left(\frac{1}{2}\right)(2.0)\left(\frac{1.5}{2}\right) = \mathbf{2.75 \text{ kN}\backslash m}$$

$$w_{2e} = g_{2a} + p_{2a} = 9.18 + 2.75 = \mathbf{11.93 \text{ kN}\backslash m}$$

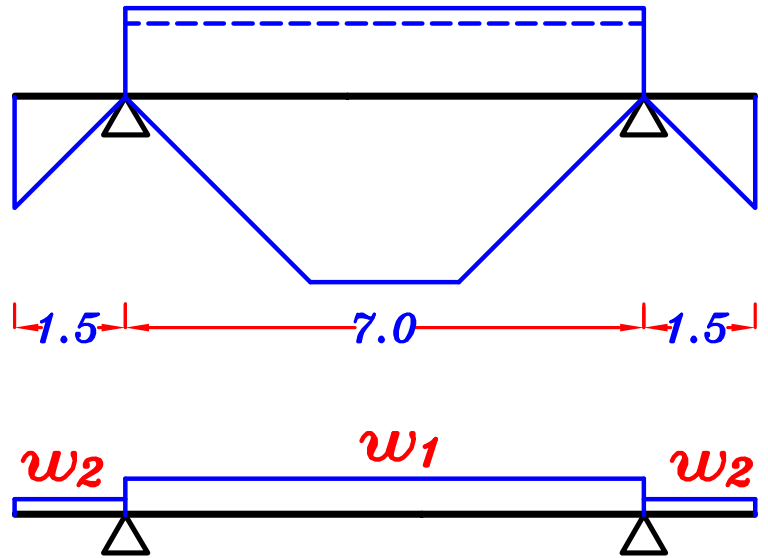
B₄

w₁

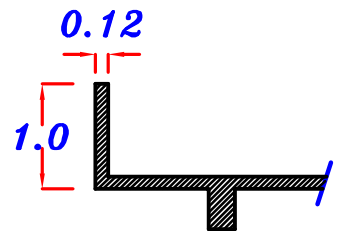
For Trapezoid

$$C_a = 0.64$$

$$C_e = 0.83$$



$$\begin{aligned} \text{Parapet weight} &= b * h * \gamma_c \\ &= 0.12 * 1.0 * 25 = 3.0 \text{ kN/m} \end{aligned}$$



Load For Shear.

$$\begin{aligned} g_{1a} &= o.w. + C_a g_s \frac{L_s}{2} + g_s L_c + \text{Parapet} \\ &= 3.0 + (0.64)(4.50) \left(\frac{5.0}{2} \right) + (4.5)(1.2) + 3.0 = 18.60 \text{ kN/m} \end{aligned}$$

$$\begin{aligned} p_{1a} &= C_a p_s \frac{L_s}{2} + p_s L_c \\ &= (0.64)(3.0) \left(\frac{5.0}{2} \right) + (3.0)(1.2) = 8.4 \text{ kN/m} \end{aligned}$$

$$w_{1a} = g_{1a} + p_{1a} = 18.60 + 8.4 = 27.0 \text{ kN/m}$$

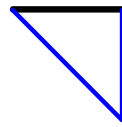
Load For Moment.

$$\begin{aligned} g_{1e} &= o.w. + C_e g_s \frac{L_s}{2} + g_s L_c + \text{Parapet} \\ &= 3.0 + (0.83)(4.50) \left(\frac{5.0}{2} \right) + (4.5)(1.2) + 3.0 = 20.73 \text{ kN/m} \end{aligned}$$

$$\begin{aligned} p_{1e} &= C_e p_s \frac{L_s}{2} + p_s L_c \\ &= (0.83)(3.0) \left(\frac{5.0}{2} \right) + (3.0)(1.2) = 9.82 \text{ kN/m} \end{aligned}$$

$$w_{1e} = g_{1e} + p_{1e} = 20.73 + 9.82 = 30.55 \text{ kN/m}$$

w_2 For Triangle



$$C_a = \frac{1}{2} , C_e = \frac{2}{3}$$

Load For Shear.



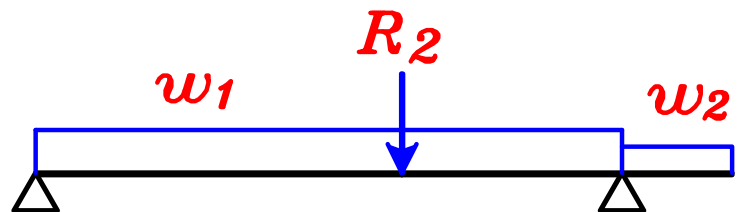
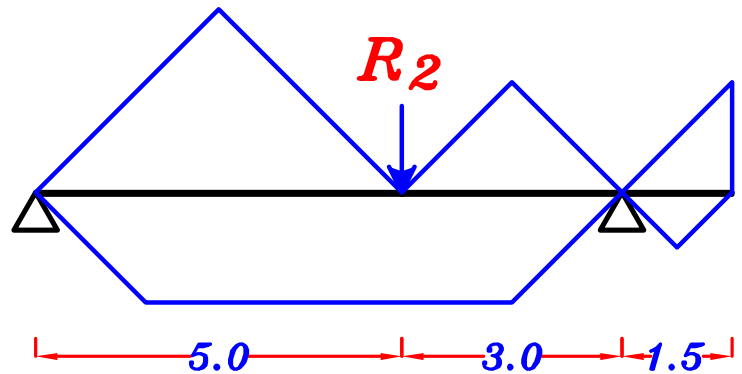
$$g_{2a} = o.w. + C_a g_s L_c = 3.0 + \left(\frac{1}{2}\right)(4.50)(1.5) = 6.37 \text{ kN/m}$$

$$p_{2a} = C_a p_s L_c = \left(\frac{1}{2}\right)(2.0)(1.5) = 1.5 \text{ kN/m}$$

$$w_{2a} = g_{2a} + p_{2a} = 6.37 + 1.5 = 7.87 \text{ kN/m}$$

Loads on the girder G

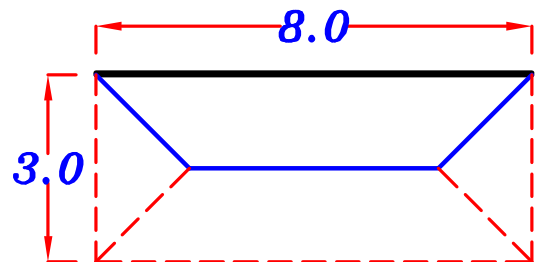
w_1



For Trapezoid

$$C_a = 1 - \frac{1}{2} \left(\frac{2L_c}{L} \right) = 1 - \frac{1}{2} \left(\frac{3.0}{8.0} \right) = 0.81$$

$$C_e = 1 - \frac{1}{3} \left(\frac{2L_c}{L} \right)^2 = 1 - \frac{1}{3} \left(\frac{3.0}{8.0} \right)^2 = 0.95$$



$$\frac{\sum \text{area}}{\text{span}} = \frac{\left(\frac{1}{2}\right)(5)(2.5) + \left(\frac{1}{2}\right)(3)(1.5)}{8.0} = 1.062$$

Load For Shear.



$$g_{1a} = o.w. + C_a g_s L_c + \frac{\sum \text{area}}{\text{span}} * g_s$$

$$= 3.0 + (0.81)(4.50)(1.5) + (1.062)(4.50) = 13.24 \text{ kN/m}$$

$$p_{1a} = C_a p_s L_c + \frac{\sum \text{area}}{\text{span}} * p_s$$

$$= (0.81)(2.0)(1.5) + (1.062)(2.0) = 4.55 \text{ kN/m}$$

$$w_{1a} = g_{1a} + p_{1a} = 13.24 + 4.55 = 17.79 \text{ kN/m}$$

Load For Moment.




$$g_{1e} = o.w. + C_e g_s L_c + \frac{\sum \text{area}}{\text{span}} * g_s$$

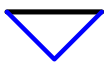
$$= 3.0 + (0.95)(4.50)(1.5) + (1.062)(4.50) = 14.19 \text{ kN/m}$$

$$p_{1e} = C_e p_s L_c + \frac{\sum \text{area}}{\text{span}} * p_s$$


$$= (0.95)(2.0)(1.5) + (1.062)(2.0) = 4.97 \text{ kN/m}$$

$$w_{1e} = g_{1e} + p_{1e} = 14.19 + 4.97 = 19.16 \text{ kN/m}$$

w₂ For Triangle  $C_a = \frac{1}{2}$, $C_e = \frac{2}{3}$

For Triangle  $C_a = \frac{1}{2}$, $C_e = \frac{1}{2}$

Load For Shear.



$$g_{2a} = o.w. + C_a g_s L_c + C_a g_s \frac{L_c}{2}$$

$$= 3.0 + \left(\frac{1}{2}\right)(4.50)(1.5) + \left(\frac{1}{2}\right)(4.50)\left(\frac{1.5}{2}\right) = 8.06 \text{ kN/m}$$

$$p_{2a} = C_a p_s L_c + C_a p_s \frac{L_c}{2}$$

$$= \left(\frac{1}{2}\right)(2.0)(1.5) + \left(\frac{1}{2}\right)(2.0)\left(\frac{1.5}{2}\right) = 2.25 \text{ kN/m}$$

$$w_{2a} = g_{2a} + p_{2a} = 8.06 + 2.25 = 10.31 \text{ kN/m}$$

Load For Moment.



$$g_{2e} = o.w. + C_e g_s L_c + C_e g_s \frac{L_c}{2}$$

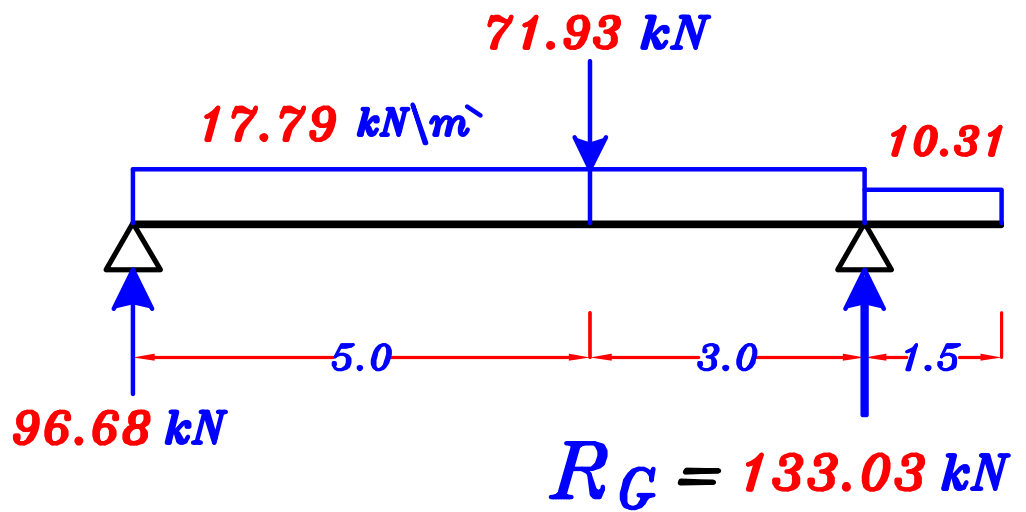
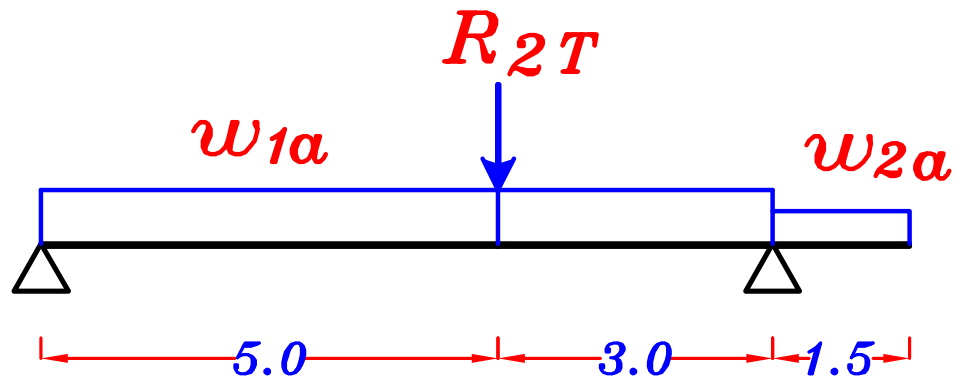
$$= 3.0 + \left(\frac{2}{3}\right)(4.50)(1.5) + \left(\frac{1}{2}\right)(4.50)\left(\frac{1.5}{2}\right) = 9.18 \text{ kN/m}$$

$$p_{2e} = C_e p_s L_c + C_e p_s \frac{L_c}{2}$$

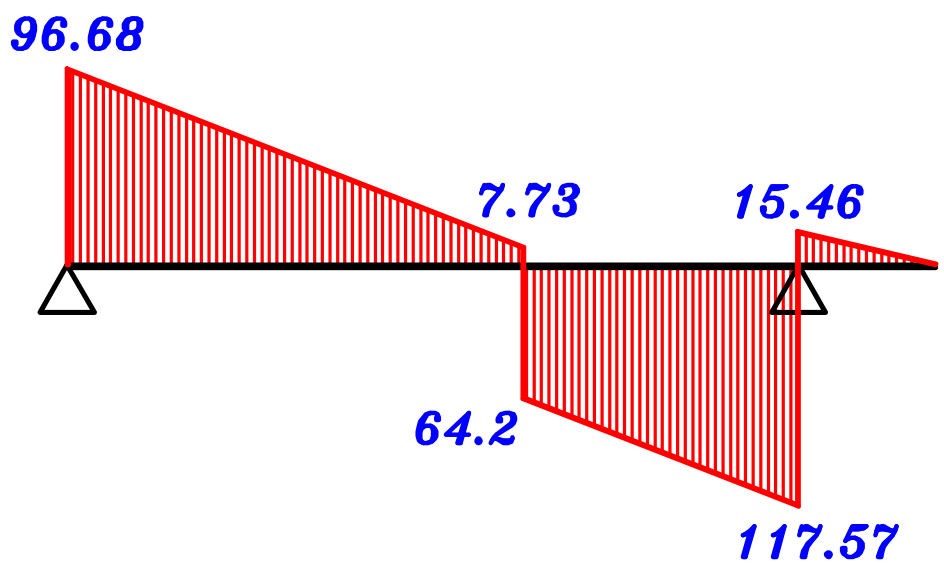
$$= \left(\frac{2}{3}\right)(2.0)(1.5) + \left(\frac{1}{2}\right)(2.0)\left(\frac{1.5}{2}\right) = 2.75 \text{ kN/m}$$

$$w_{2e} = g_{2e} + p_{2e} = 9.18 + 2.75 = 11.93 \text{ kN/m}$$

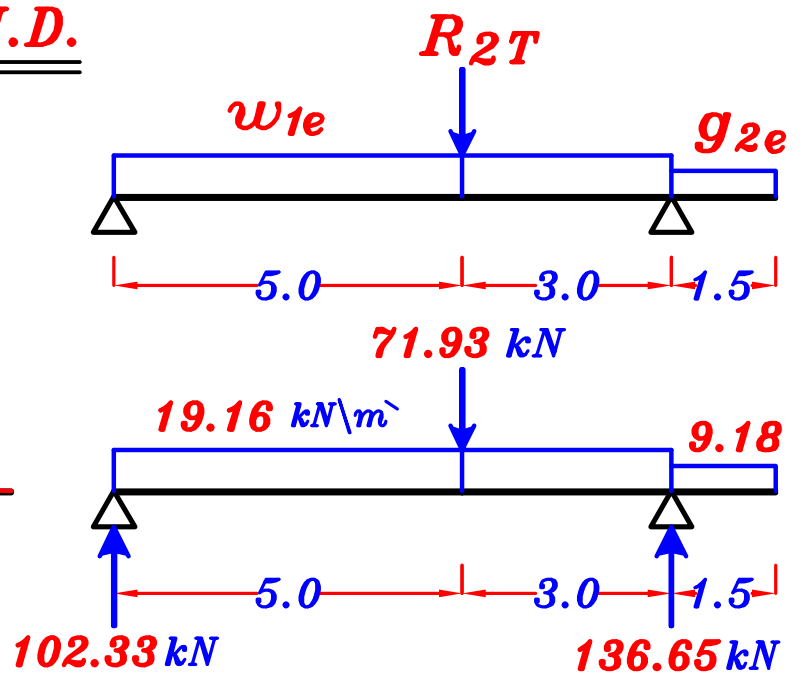
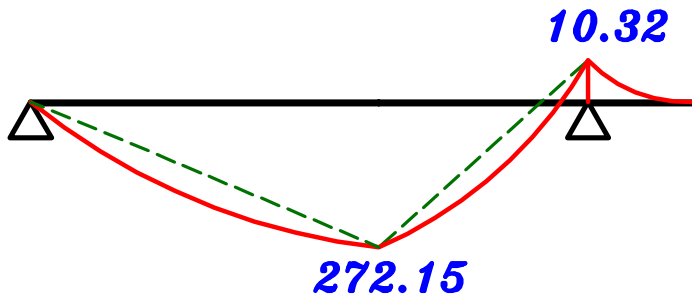
Draw the S.F.D.



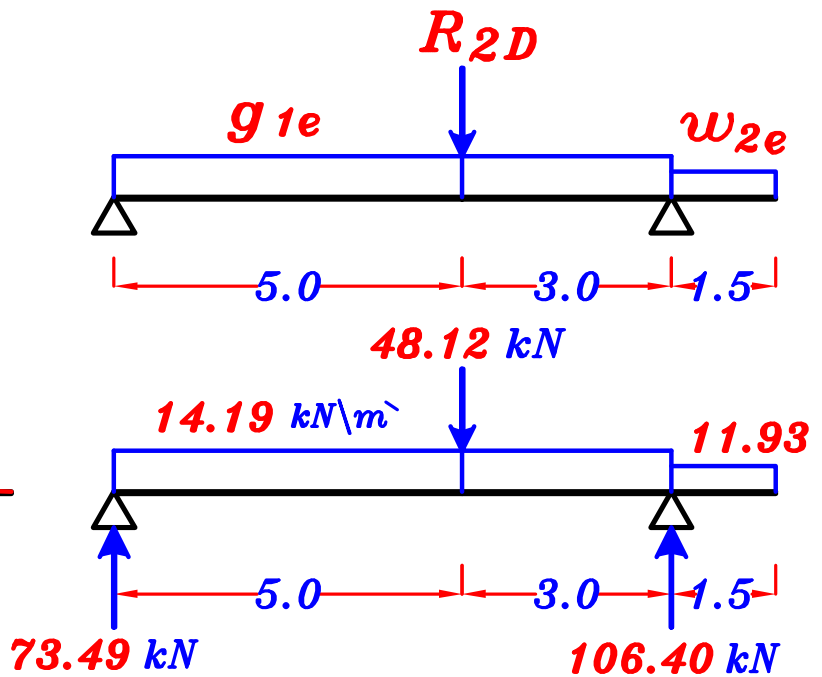
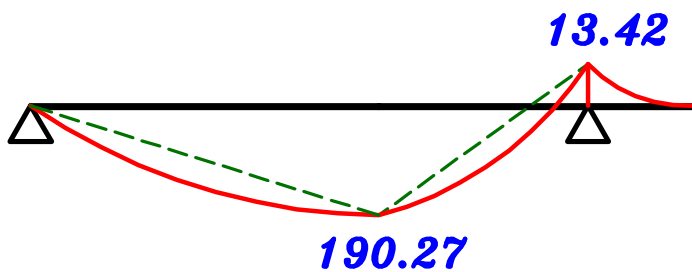
S.F.D.



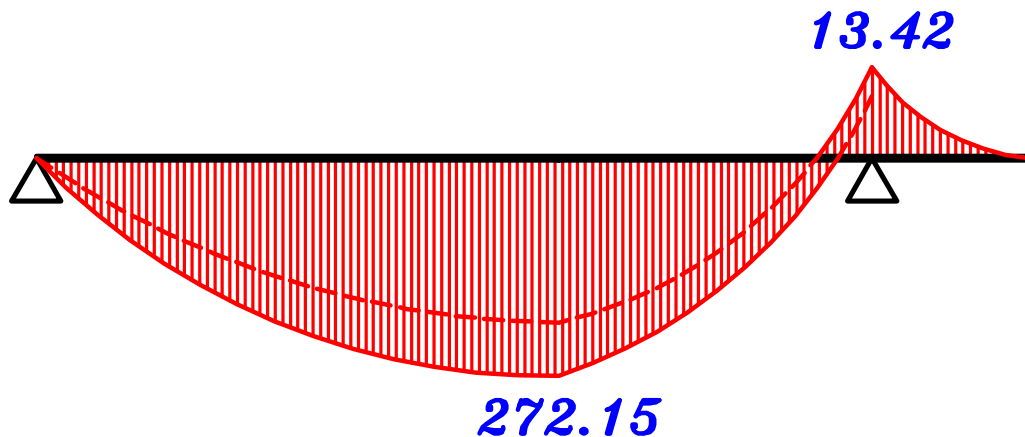
1- max. +ve B.M.D.



2- max. -ve B.M.D.



max.-max. B.M.D.



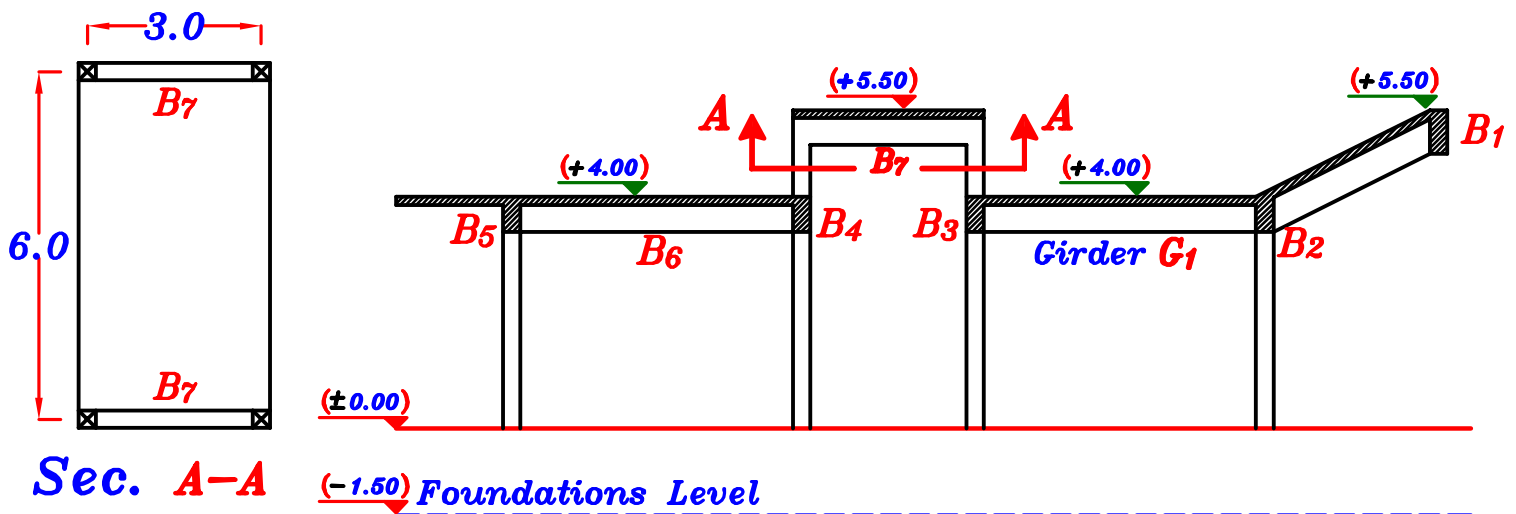
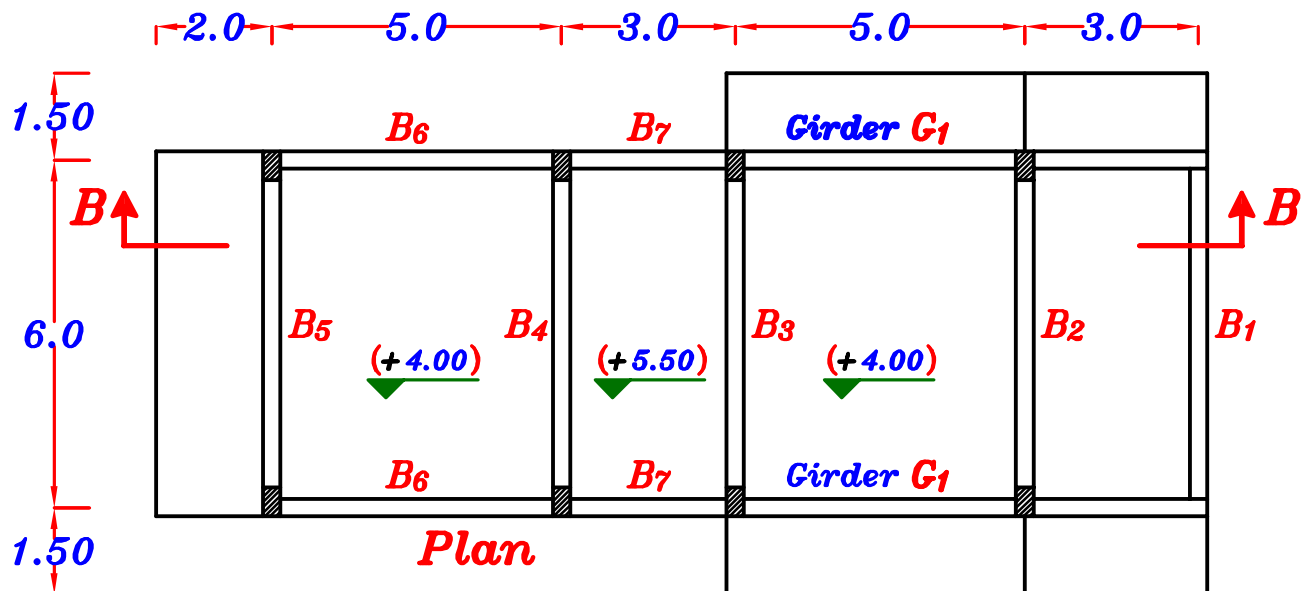
Example.

Data:

Slab thickness = 140 mm , F.C. = 3.0 kN/m² , L.L. = 1.0 kN/m²

For the shown reinforced concrete building in the Figure It is required to :

- 1- Draw to scale 1:50 a structural plan and section showing concrete dimensions of all structural elements.
- 2- Carry out load distribution For all beams at levels +4.00 and +5.50
- 3- Calculate the loads For bending and shear For all beams and girder (G₁).
- 4- Draw the absolute B.M.D. and S.F.D. For the girder (G₁).



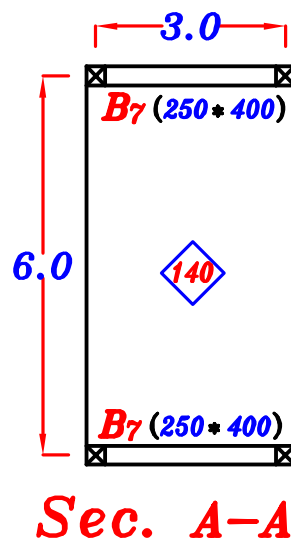
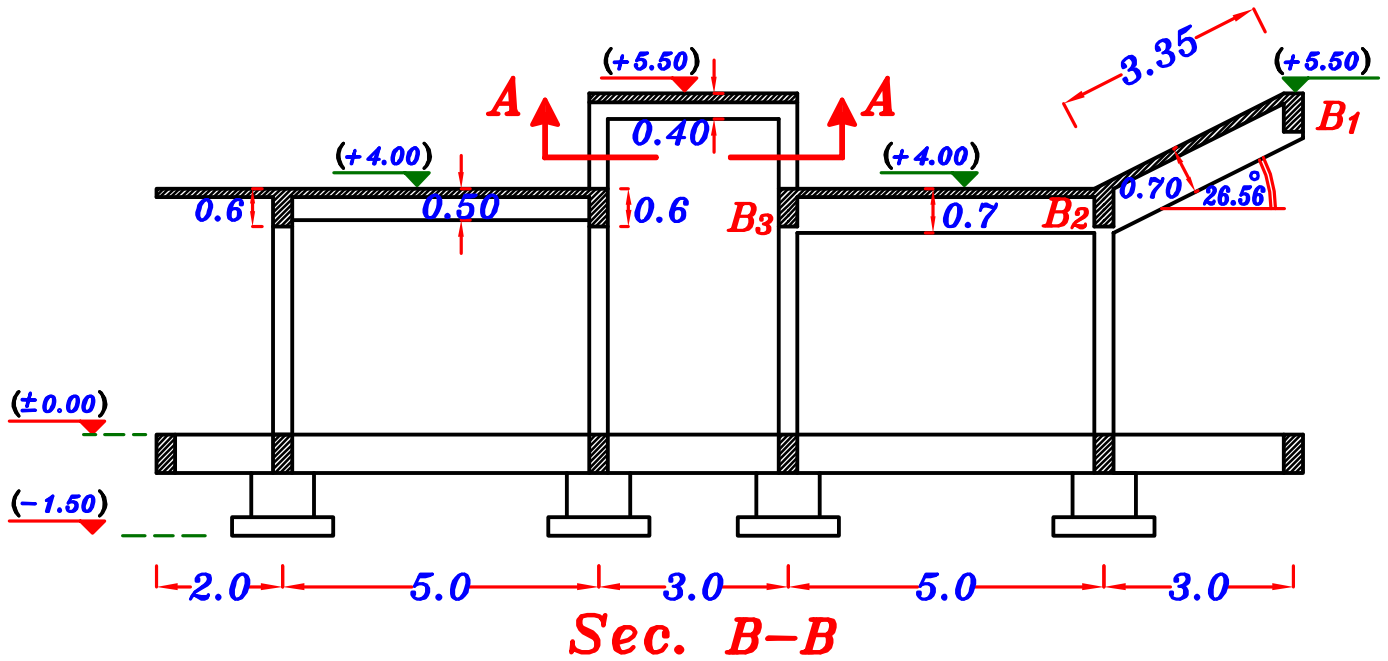
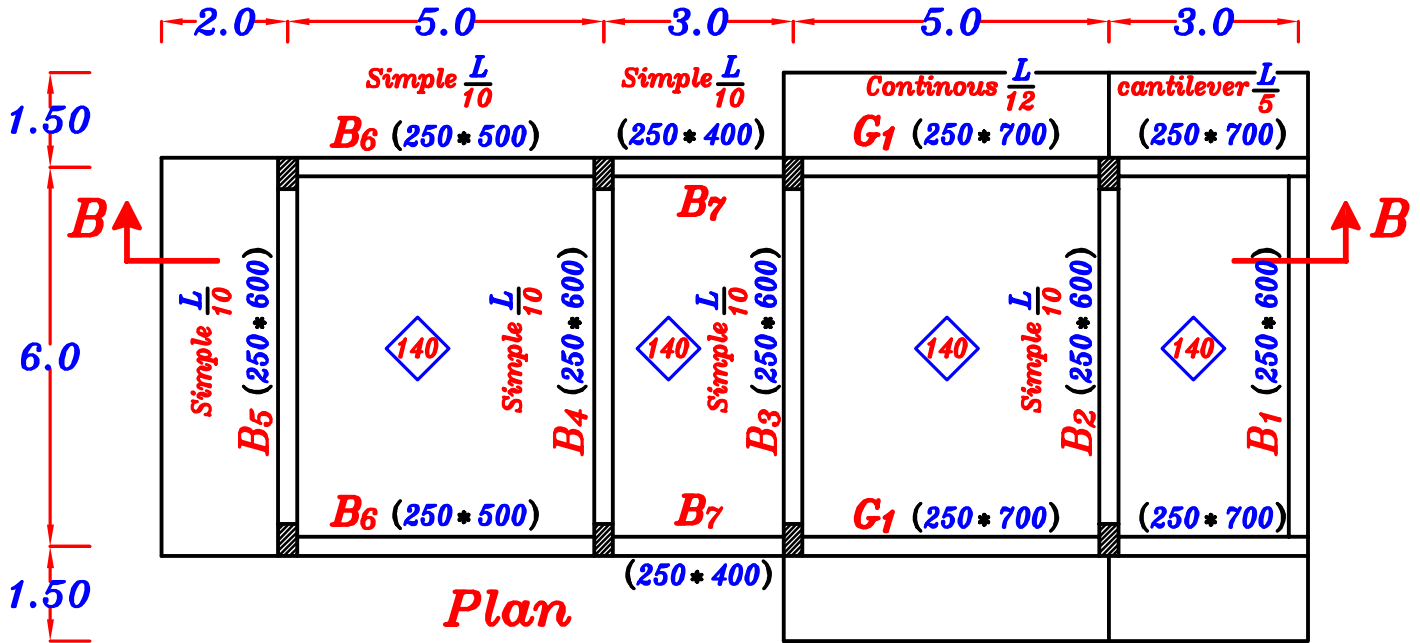
(-1.50) Foundations Level

2.0 5.0 3.0 5.0 3.0

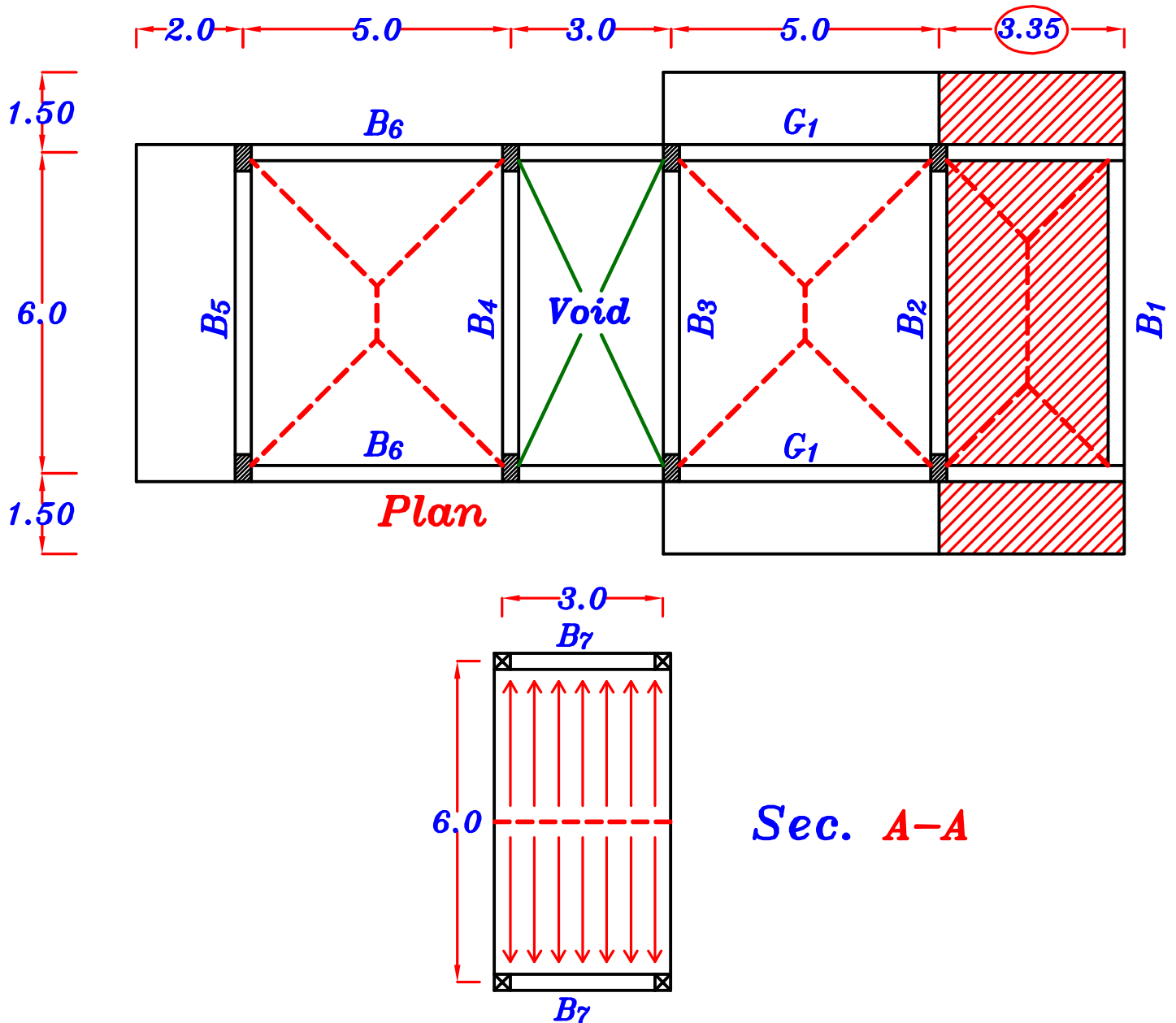
Sec. B-B

Solution.

1- Draw to scale 1:50 a structural plan and section showing concrete dimensions of all structural elements.



2- Carry out load distribution For all beams at levels +4.00 and +5.50



3- Calculate the loads For bending and shear For all beams and girder (G_1).

g_s, p_s

$$g_s = t_s * \gamma_c + F.C. = 0.14 * 25 + 3.0 = 6.5 \text{ kN/m}^2$$

$$p_{sh} = L.L. = 1.0 \text{ kN/m}^2$$

$$p_{si} = L.L. * \cos \theta = 1.0 \cos 26.56 = 0.89 \text{ kN/m}^2$$

$$g_s = 6.5 \text{ kN/m}^2, \quad p_{sh} = 1.0 \text{ kN/m}^2, \quad p_{si} = 0.89 \text{ kN/m}^2$$

o.w. of Beams & Frames = $b \ t \ \delta_c$

Beams (250*400) **o.w.** = (0.25) (0.4) (25) = **2.50 kN\m**

Beams (250*500) **o.w.** = (0.25) (0.5) (25) = **3.12 kN\m**

Beams (250*600) **o.w.** = (0.25) (0.6) (25) = **3.75 kN\m**

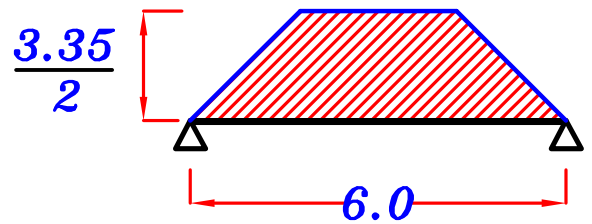
Girder (250*700) **o.w.** = (0.25) (0.7) (25) = **4.37 kN\m**

B_1 (250*600) \rightarrow **o.w.** = **3.75 kN\m**

For Trapezoid

C_a = $1 - \frac{1}{2} \left(\frac{L_s}{L} \right) = 1 - \frac{1}{2} \left(\frac{3.35}{6.0} \right) = \mathbf{0.72}$

C_e = $1 - \frac{1}{3} \left(\frac{L_s}{L} \right)^2 = 1 - \frac{1}{3} \left(\frac{3.35}{6.0} \right)^2 = \mathbf{0.89}$



Load For Shear.

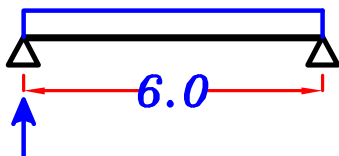


g_a = $o.w. + C_a g_s \frac{L_s}{2} = 3.75 + (0.72)(6.5) \left(\frac{3.35}{2} \right) = \mathbf{11.59 kN\m}$

p_a = $C_a p_{si} \frac{L_s}{2} = (0.72)(0.89) \left(\frac{3.35}{2} \right) = \mathbf{1.07 kN\m}$

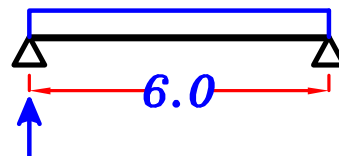
w_a = **$g_a + p_a$** = $11.59 + 1.07 = \mathbf{12.66 kN\m}$

$w_a = 12.66 kN\m$



$R_{1T} = 37.98 kN$

$g_a = 11.59 kN\m$



$R_{1D} = 34.77 kN$

Load For Moment.



g_e = $o.w. + C_e g_s \frac{L_s}{2} = 3.75 + (0.89)(6.5) \left(\frac{3.35}{2} \right) = \mathbf{13.44 kN\m}$

p_e = $C_e p_{si} \frac{L_s}{2} = (0.89)(0.89) \left(\frac{3.35}{2} \right) = \mathbf{1.32 kN\m}$

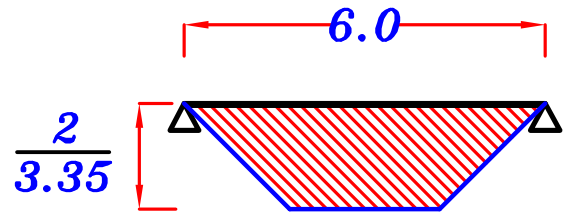
w_e = **$g_e + p_e$** = $13.44 + 1.32 = \mathbf{14.76 kN\m}$

$$\underline{\underline{B_2}} \quad (250 * 600) \rightarrow O.W. = 3.75 \text{ kN/m}$$

For Trapezoid 1

$$C_a = 1 - \frac{1}{2} \left(\frac{L_s}{L} \right) = 1 - \frac{1}{2} \left(\frac{3.35}{6.0} \right) = 0.72$$

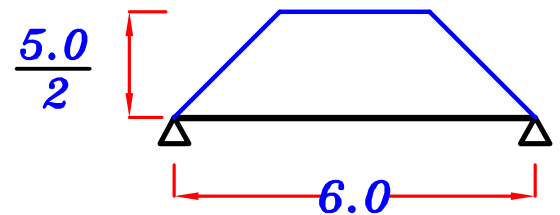
$$C_e = 1 - \frac{1}{3} \left(\frac{L_s}{L} \right)^2 = 1 - \frac{1}{3} \left(\frac{3.35}{6.0} \right)^2 = 0.89$$



For Trapezoid 2

$$C_a = 1 - \frac{1}{2} \left(\frac{L_s}{L} \right) = 1 - \frac{1}{2} \left(\frac{5.0}{6.0} \right) = 0.58$$

$$C_e = 1 - \frac{1}{3} \left(\frac{L_s}{L} \right)^2 = 1 - \frac{1}{3} \left(\frac{5.0}{6.0} \right)^2 = 0.77$$



Load For Shear.

$$g_a = O.W. + C_{a1} g_s \frac{L_s}{2} + C_{a2} g_s \frac{L_s}{2}$$

$$= 3.75 + (0.72)(6.5) \left(\frac{3.35}{2} \right) + (0.58)(6.5) \left(\frac{5.0}{2} \right) = 21.0 \text{ kN/m}$$

$$p_a = C_{a1} p_{si} \frac{L_s}{2} + C_{a2} p_{sh} \frac{L_s}{2} =$$

$$= (0.72)(0.89) \left(\frac{3.35}{2} \right) + (0.58)(1.0) \left(\frac{5.0}{2} \right) = 2.52 \text{ kN/m}$$

$$w_a = g_a + p_a = 21.0 + 2.52 = 23.52 \text{ kN/m}$$

Load For Moment.

$$g_e = O.W. + C_{e1} g_s \frac{L_s}{2} + C_{e2} g_s \frac{L_s}{2}$$

$$= 3.75 + (0.89)(6.5) \left(\frac{3.35}{2} \right) + (0.77)(6.5) \left(\frac{5.0}{2} \right) = 25.95 \text{ kN/m}$$

$$p_e = C_{e1} p_{si} \frac{L_s}{2} + C_{e2} p_{sh} \frac{L_s}{2} =$$

$$= (0.89)(0.89) \left(\frac{3.35}{2} \right) + (0.77)(1.0) \left(\frac{5.0}{2} \right) = 3.25 \text{ kN/m}$$

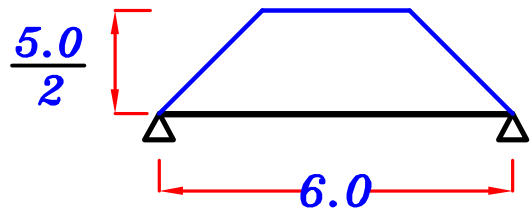
$$w_e = g_e + p_e = 25.95 + 3.25 = 29.20 \text{ kN/m}$$

$$\underline{\underline{B_3 \& B_4}} \quad (250 \times 600) \rightarrow O.W. = 3.75 \text{ kN/m}$$

For Trapezoid

$$C_a = 1 - \frac{1}{2} \left(\frac{L_s}{L} \right) = 1 - \frac{1}{2} \left(\frac{5.0}{6.0} \right) = 0.58$$

$$C_e = 1 - \frac{1}{3} \left(\frac{L_s}{L} \right)^2 = 1 - \frac{1}{3} \left(\frac{5.0}{6.0} \right)^2 = 0.77$$



Load For Shear.

$$g_a = O.W. + C_a g_s \frac{L_s}{2} = 3.75 + (0.58)(6.5) \left(\frac{5.0}{2} \right) = 13.17 \text{ kN/m}$$

$$p_a = C_a p_{sh} \frac{L_s}{2} = (0.58)(1.0) \left(\frac{5.0}{2} \right) = 1.45 \text{ kN/m}$$

$$w_a = g_a + p_a = 13.17 + 1.45 = 14.62 \text{ kN/m}$$

Load For Moment.

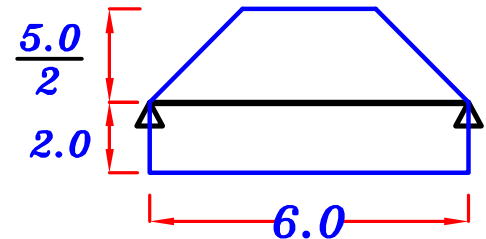
$$g_e = O.W. + C_e g_s \frac{L_s}{2} = 3.75 + (0.77)(6.5) \left(\frac{5.0}{2} \right) = 16.26 \text{ kN/m}$$

$$p_e = C_e p_{sh} \frac{L_s}{2} = (0.77)(1.0) \left(\frac{5.0}{2} \right) = 1.92 \text{ kN/m}$$

$$w_e = g_e + p_e = 16.26 + 1.92 = 18.18 \text{ kN/m}$$

$$\underline{\underline{B_5}} \quad (250 \times 600) \rightarrow O.W. = 3.75 \text{ kN/m}$$

For Trapezoid $C_a = 0.58$, $C_e = 0.77$



Load For Shear.

$$g_a = O.W. + C_a g_s \frac{L_s}{2} + g_s L_c = 3.75 + (0.58)(6.5) \left(\frac{5.0}{2} \right) + (6.5)(2.0) = 26.17 \text{ kN/m}$$

$$p_a = C_a p_{sh} \frac{L_s}{2} + p_s L_c = (0.58)(1.0) \left(\frac{5.0}{2} \right) + (1.0)(2.0) = 3.45 \text{ kN/m}$$

$$w_a = g_a + p_a = 26.17 + 3.45 = 29.62 \text{ kN/m}$$

Load For Moment.

$$g_e = O.W. + C_e g_s \frac{L_s}{2} + g_s L_c = 3.75 + (0.77)(6.5) \left(\frac{5.0}{2} \right) + (6.5)(2.0) = 29.26 \text{ kN/m}$$

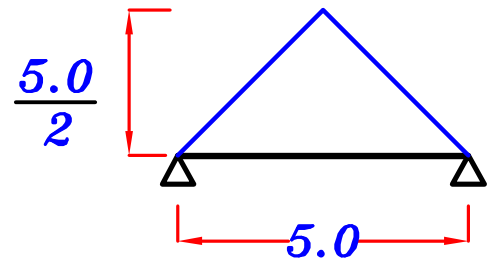
$$p_e = C_e p_{sh} \frac{L_s}{2} + p_s L_c = (0.77)(1.0) \left(\frac{5.0}{2} \right) + (1.0)(2.0) = 3.92 \text{ kN/m}$$

$$w_e = g_e + p_e = 29.26 + 3.92 = 33.18 \text{ kN/m}$$

$$\underline{\underline{B_6}} \quad (250 * 500) \rightarrow o.w. = 3.12 \text{ kN/m}$$

For Triangle $C_a = \frac{1}{2}$ $C_e = \frac{2}{3}$

Load For Shear.



$$g_a = 0.W. + C_a g_s \frac{L_s}{2} = 3.12 + \left(\frac{1}{2}\right)(6.5)\left(\frac{5.0}{2}\right) = 11.24 \text{ kN/m}$$

$$p_a = C_a p_{sh} \frac{L_s}{2} = \left(\frac{1}{2}\right)(1.0)\left(\frac{5.0}{2}\right) = 1.25 \text{ kN/m}$$

$$w_a = g_a + p_a = 11.24 + 1.25 = 12.49 \text{ kN/m}$$

Load For Moment.

$$g_e = 0.W. + C_e g_s \frac{L_s}{2} = 3.12 + \left(\frac{2}{3}\right)(6.5)\left(\frac{5.0}{2}\right) = 13.95 \text{ kN/m}$$

$$p_e = C_e p_{sh} \frac{L_s}{2} = \left(\frac{2}{3}\right)(1.0)\left(\frac{5.0}{2}\right) = 1.67 \text{ kN/m}$$

$$w_e = g_e + p_e = 13.95 + 1.67 = 15.62 \text{ kN/m}$$

$$\underline{\underline{B_7}} \quad (250 * 400) \rightarrow o.w. = 2.50 \text{ kN/m}$$

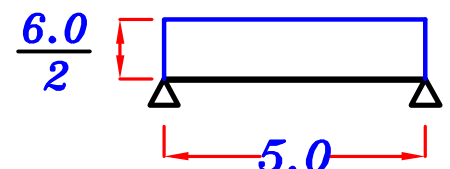
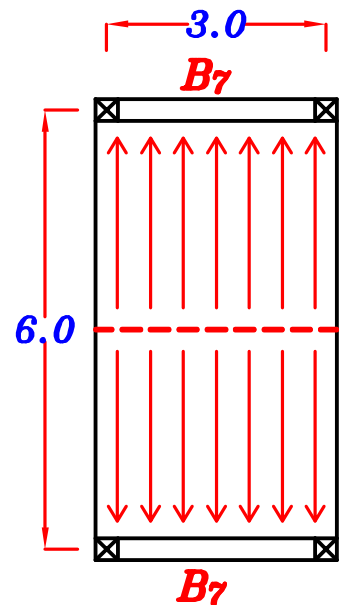
Load For Shear. = Load For Moment.

$$g_a = g_e = 0.W. + g_s \frac{L_s}{2}$$

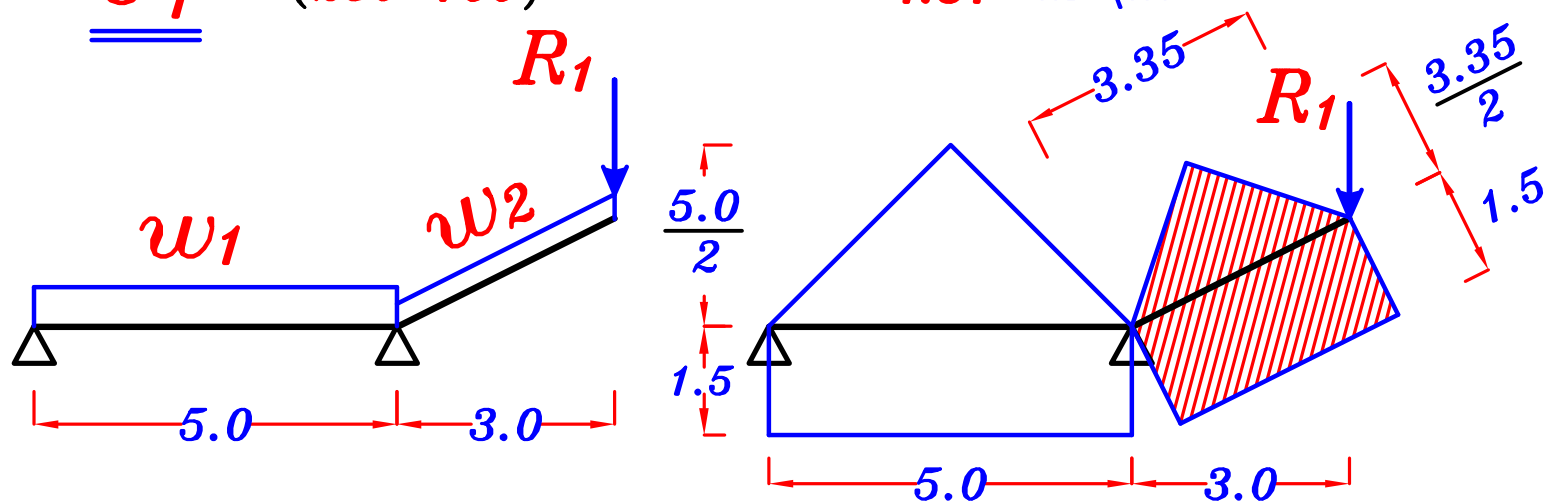
$$= 2.50 + (6.5)\left(\frac{6.0}{2}\right) = 22.0 \text{ kN/m}$$

$$p_a = p_e = p_{sh} \frac{L_s}{2} = (1.0)\left(\frac{6.0}{2}\right) = 3.0 \text{ kN/m}$$

$$w_a = g_a + p_a = 22.0 + 3.0 = 25.0 \text{ kN/m}$$



$$\underline{\underline{G_1}} \quad (250 * 700) \rightarrow o.w. = 4.37 \text{ kN/m}$$



$$\underline{\underline{W_1}} \quad \text{For triangle} \quad C_a = \frac{1}{2} \quad C_e = \frac{2}{3}$$

Load For Shear.

$$g_{1a} = o.w. + C_a g_s \frac{L_s}{2} + g_s L_c = 4.37 + \left(\frac{1}{2}\right)(6.5)\left(\frac{5.0}{2}\right) + (6.5)(1.5) = 22.25 \text{ kN/m}$$

$$p_{1a} = C_a p_{sh} \frac{L_s}{2} + p_{sh} L_c = \left(\frac{1}{2}\right)(1.0)\left(\frac{5.0}{2}\right) + (1.0)(1.5) = 2.75 \text{ kN/m}$$

$$w_{1a} = g_{1a} + p_{1a} = 22.25 + 2.75 = 25.0 \text{ kN/m}$$

Load For Moment.

$$g_{1e} = o.w. + C_e g_s \frac{L_s}{2} + g_s L_c = 4.37 + \left(\frac{2}{3}\right)(6.5)\left(\frac{5.0}{2}\right) + (6.5)(1.5) = 24.95 \text{ kN/m}$$

$$p_{1e} = C_e p_{sh} \frac{L_s}{2} + p_{sh} L_c = \left(\frac{2}{3}\right)(1.0)\left(\frac{5.0}{2}\right) + (1.0)(1.5) = 3.16 \text{ kN/m}$$

$$w_{1e} = g_{1e} + p_{1e} = 24.95 + 3.16 = 28.11 \text{ kN/m}$$

$$\underline{\underline{W_2}} \quad \text{For triangle} \quad C_a = \frac{1}{2} \quad C_e = \frac{1}{2}$$

Load For Shear. = Load For Moment.

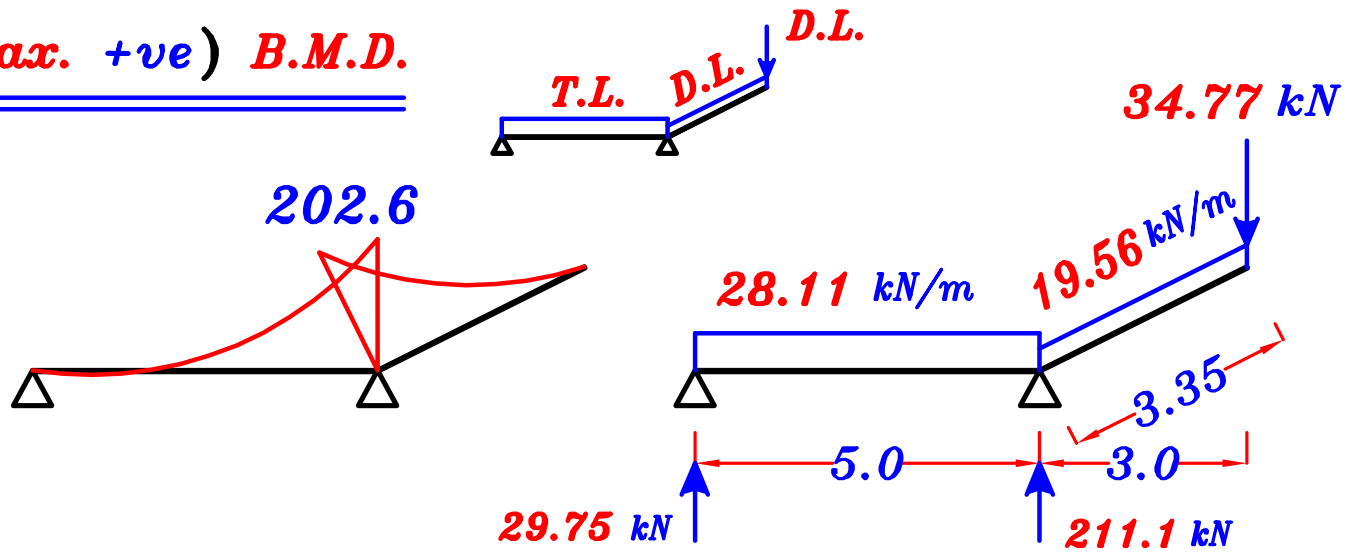
$$g_{2a} = g_{2e} = o.w. + C_a g_s \frac{L_c}{2} + g_s L_c = 4.37 + \left(\frac{1}{2}\right)(6.5)\left(\frac{3.35}{2}\right) + (6.5)(1.5) = 19.56 \text{ kN/m}$$

$$p_{2a} = p_{2e} = C_a p_{si} \frac{L_c}{2} + p_{si} L_c = \left(\frac{1}{2}\right)(0.89)\left(\frac{3.35}{2}\right) + (0.89)(1.5) = 2.08 \text{ kN/m}$$

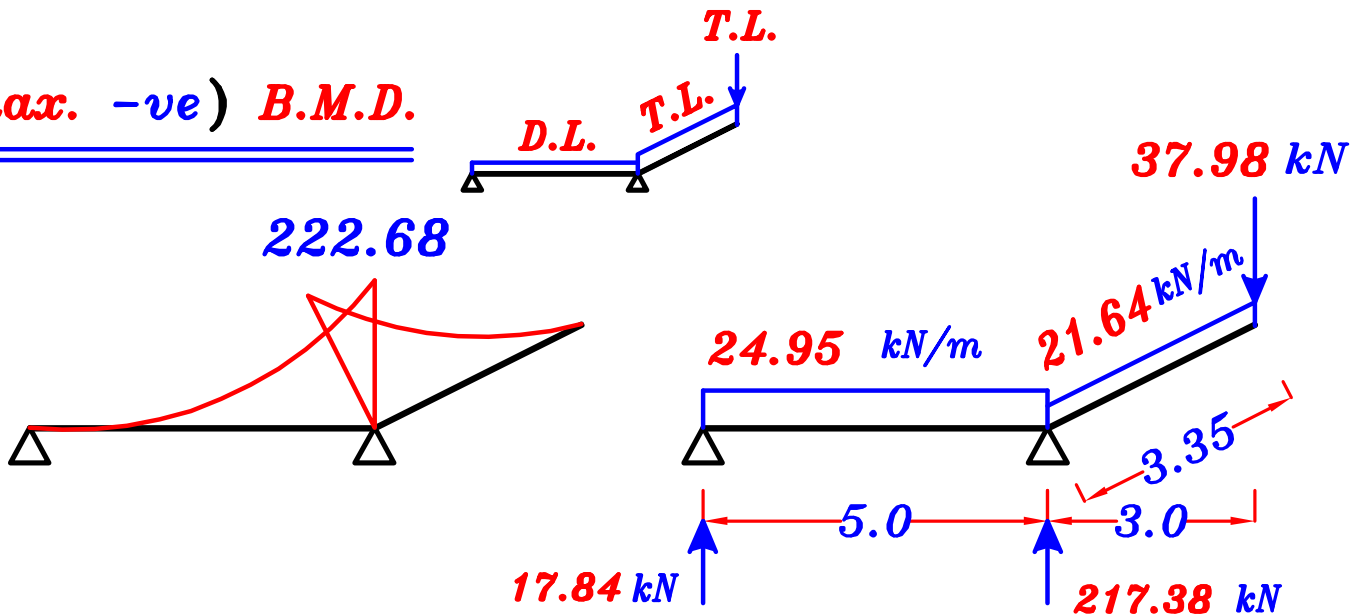
$$w_{2a} = w_{2e} = g_{2a} + p_{2a} = 19.56 + 2.08 = 21.64 \text{ kN/m}$$

4- Draw the absolute B.M.D. and S.F.D. For the girder (G_1).

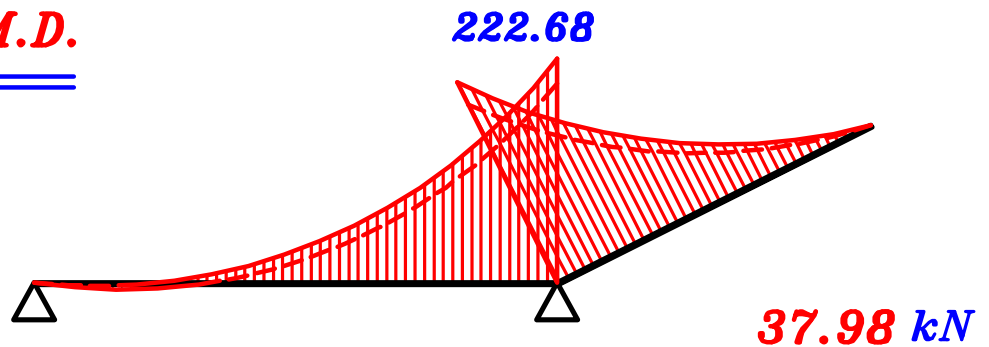
(max. +ve) B.M.D.



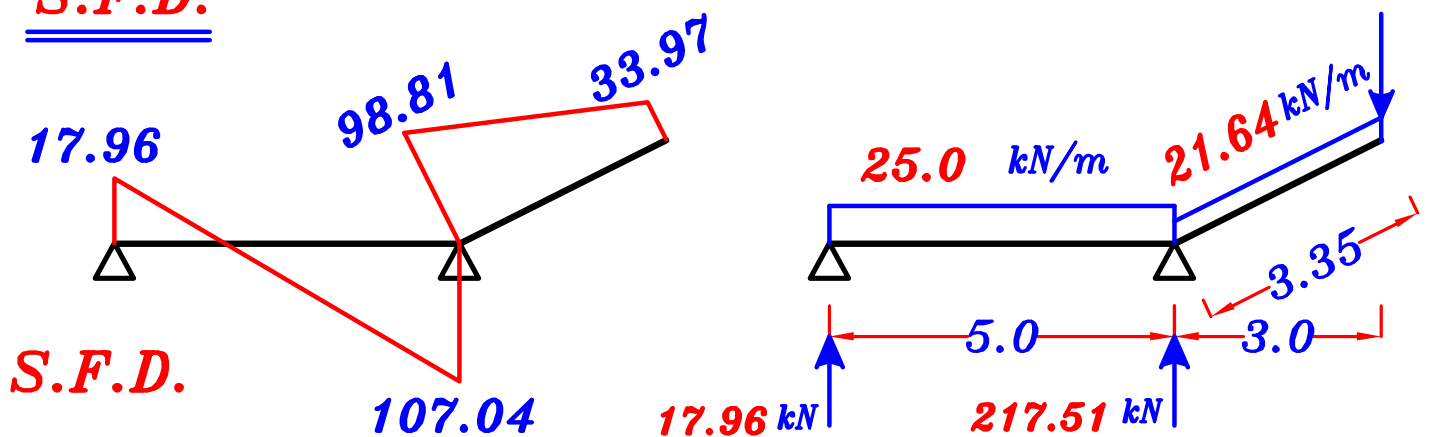
(max. -ve) B.M.D.



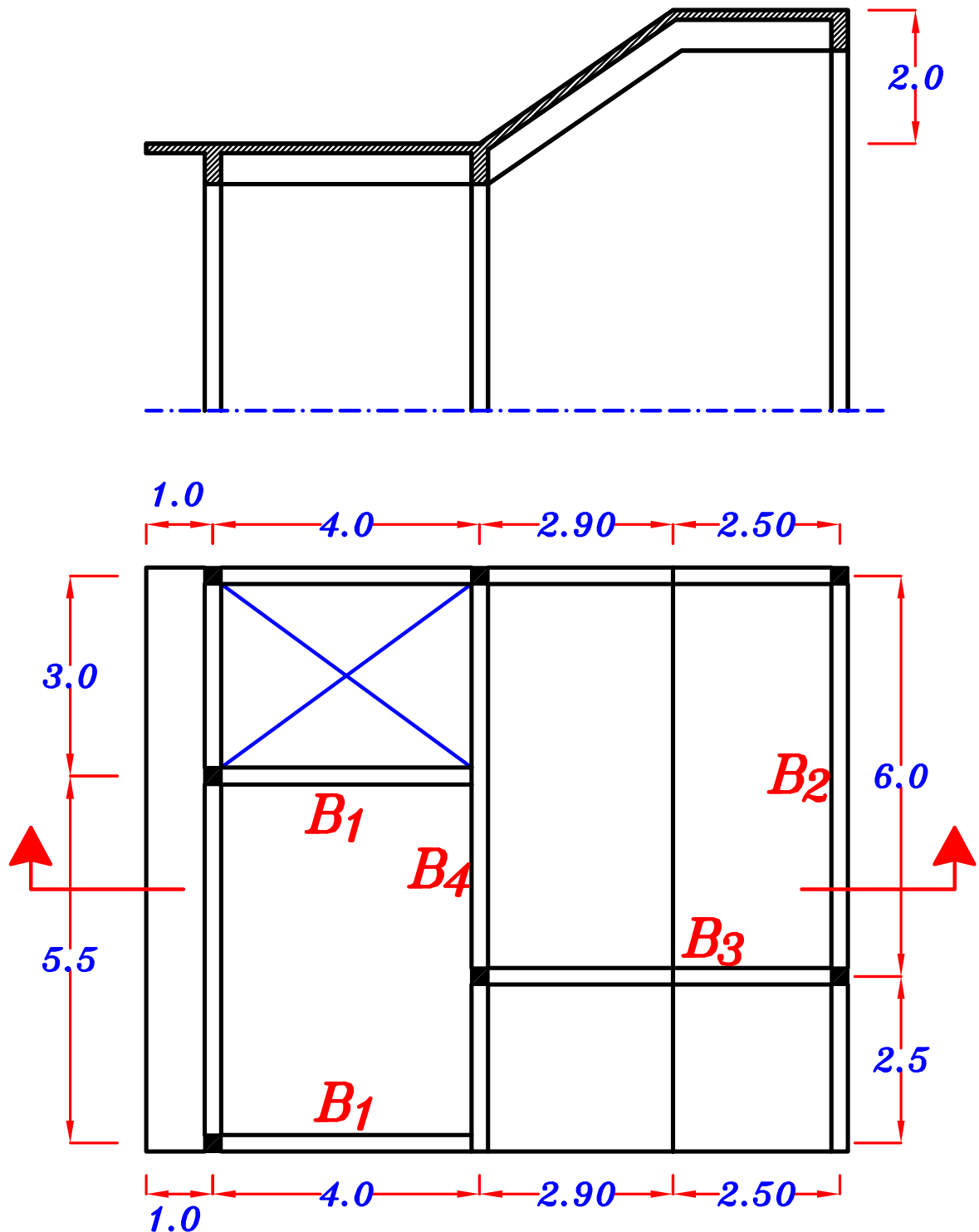
(max-max) B.M.D.



S.F.D.



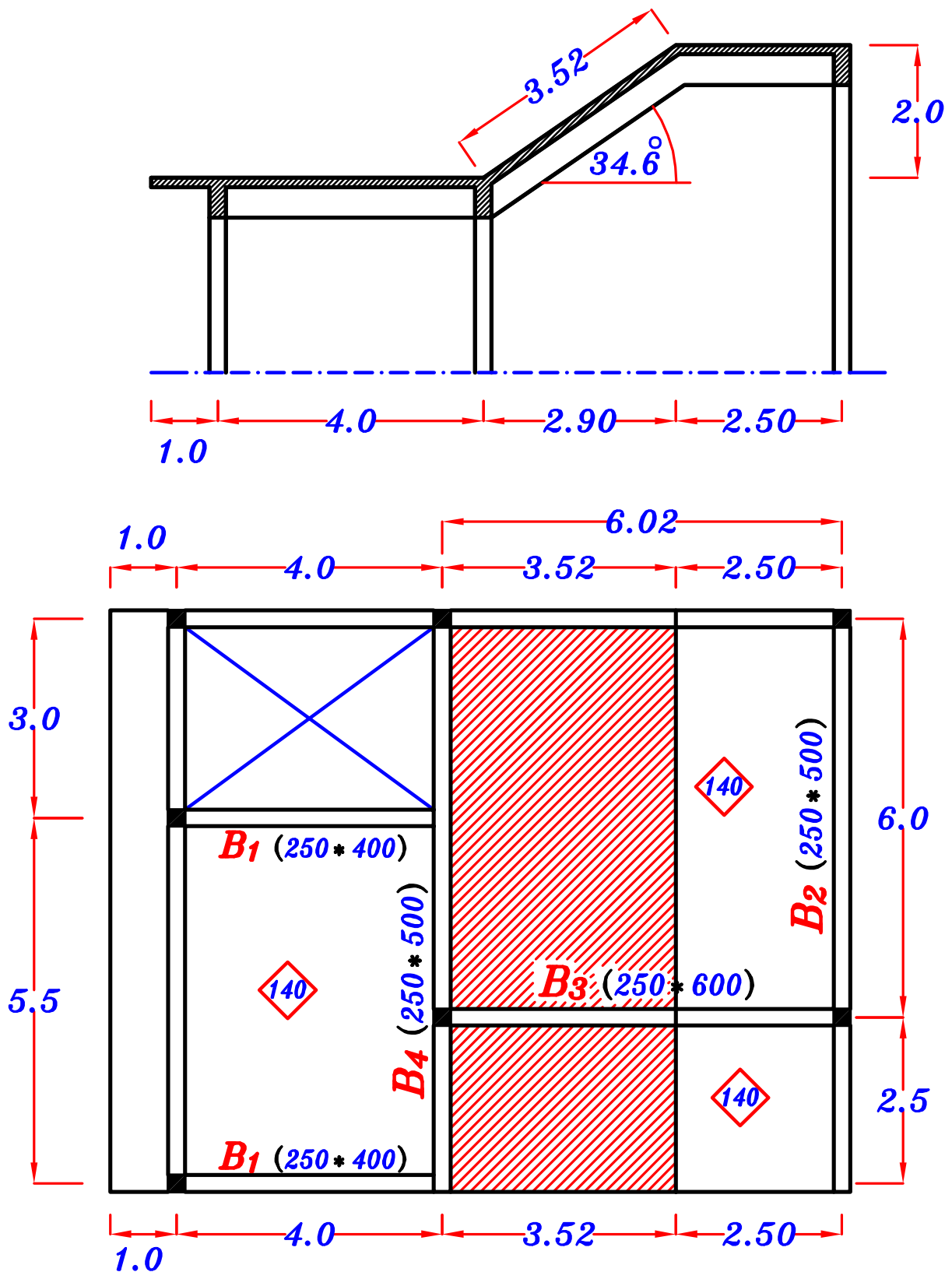
Example.



- Data:**
- Slab thickness $t_s = 140 \text{ mm}$
 - Live load = 2.0 kN/m^2 HL. projection.
 - Floor cover = 1.50 kN/m^2

Required:

Draw max-max B.M.D. For Beams (B_2 , B_3 & B_4)



o.w. of Beams & Frames = $b \ t \ \delta_c$

Beams (250*400) *o.w.* = (0.25) (0.4) (25) = 2.50 kN\m

Beams (250*500) *o.w.* = (0.25) (0.5) (25) = 3.12 kN\m

Beams (250*600) *o.w.* = (0.25) (0.6) (25) = 3.75 kN\m

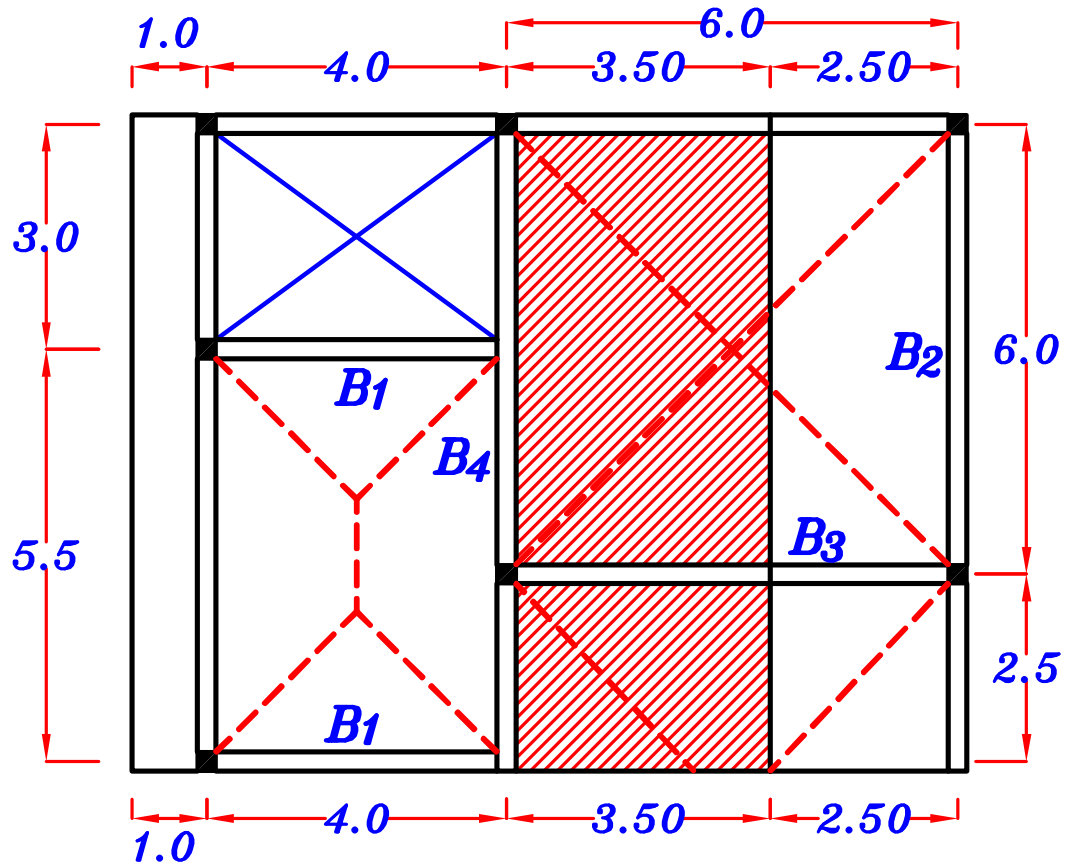
g_s, p_s

$$g_s = t_s * \gamma_c + F.C. = 0.14 * 25 + 1.5 = 5.0 \text{ kN/m}^2$$

$$p_{sh} = L.L. = 2.0 \text{ kN/m}^2$$

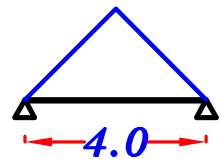
$$p_{si} = L.L. * \cos \theta = 2.0 \cos 34.6 = 1.64 \text{ kN/m}^2$$

$$g_s = 5.0 \text{ kN/m}^2, p_{sh} = 2.0 \text{ kN/m}^2, p_{si} = 1.64 \text{ kN/m}^2$$



B_1 $(250 * 400) \rightarrow O.W. = 2.50 \text{ kN/m}$

Triangle $C_a = \frac{1}{2}$, $C_e = \frac{2}{3}$

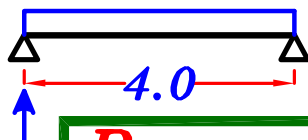


$$g_a = O.W. + C_a g_s \frac{L_s}{2} = 2.50 + \frac{1}{2} (5.0) \left(\frac{4.0}{2}\right) = 7.50 \text{ kN/m}$$

$$p_a = C_a p_{sh} \frac{L_s}{2} = \frac{1}{2} (2.0) \left(\frac{4.0}{2}\right) = 2.0 \text{ kN/m}$$

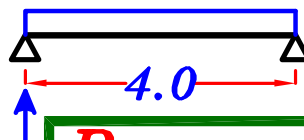
$$w_a = g_a + p_a = 7.50 + 2.0 = 9.50 \text{ kN/m}$$

$$w_a = 9.50 \text{ kN/m}$$



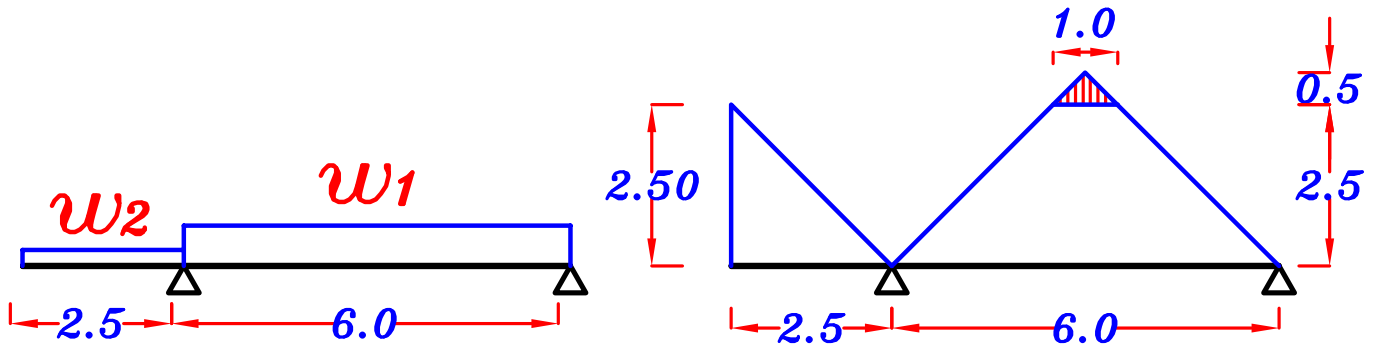
$$R_{1T} = 19.0 \text{ kN}$$

$$g_a = 7.50 \text{ kN/m}$$



$$R_{1D} = 15.0 \text{ kN}$$

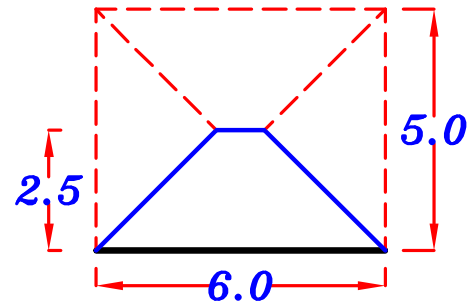
$$\underline{\underline{B_2}} \quad (250 \times 500) \rightarrow \text{o.w.} = 3.12 \text{ kN/m}$$



w_1 For Trapezoid

$$C_a = 1 - \frac{1}{2} \left(\frac{L_s}{L} \right) = 1 - \frac{1}{2} \left(\frac{5.0}{6.0} \right) = 0.58$$

$$C_e = 1 - \frac{1}{3} \left(\frac{L_s}{L} \right)^2 = 1 - \frac{1}{3} \left(\frac{5.0}{6.0} \right)^2 = 0.77$$



For Triangle $\frac{\sum \text{area}}{\text{span}} = \frac{0.5 (1.0) (0.5)}{6.0} = 0.0416$

Load For moment.

$$\begin{aligned} g_{1e} &= \text{o.w.} + C_e g_s \frac{L_s}{2} + \frac{\sum \text{area}}{\text{span}} * g_s \\ &= 3.12 + (0.77) (5.0) (2.5) + (0.0416) (5.0) = 12.95 \text{ kN/m} \end{aligned}$$

$$\begin{aligned} p_{1e} &= C_e p_{sh} \frac{L_s}{2} + \frac{\sum \text{area}}{\text{span}} * p_{si} \\ &= (0.77) (2.0) (2.5) + (0.0416) (1.64) = 3.92 \text{ kN/m} \end{aligned}$$

$$w_{1e} = g_{1e} + p_{1e} = 12.95 + 3.92 = 16.87 \text{ kN/m}$$

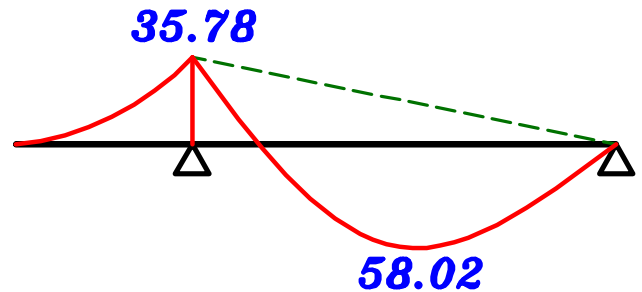
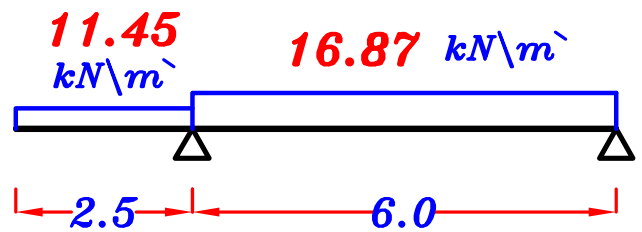
w_2 For Triangle $C_e = \frac{2}{3}$

$$g_{2e} = \text{o.w.} + C_e g_s L_c = 3.12 + \left(\frac{2}{3} \right) (5.0) (2.5) = 11.45 \text{ kN/m}$$

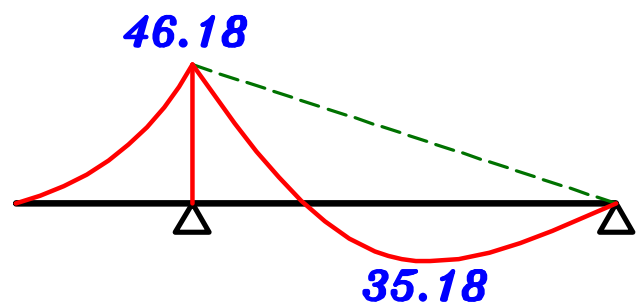
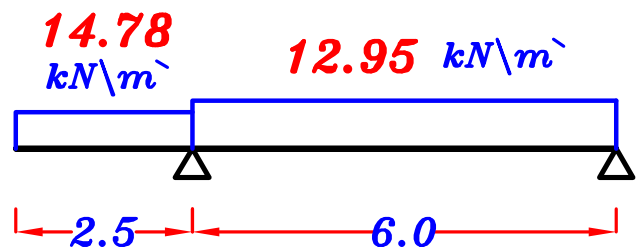
$$p_{2e} = C_e p_{sh} L_c = \left(\frac{2}{3} \right) (2.0) (2.5) = 3.33 \text{ kN/m}$$

$$w_{2e} = g_{2e} + p_{2e} = 11.45 + 3.33 = 14.78 \text{ kN/m}$$

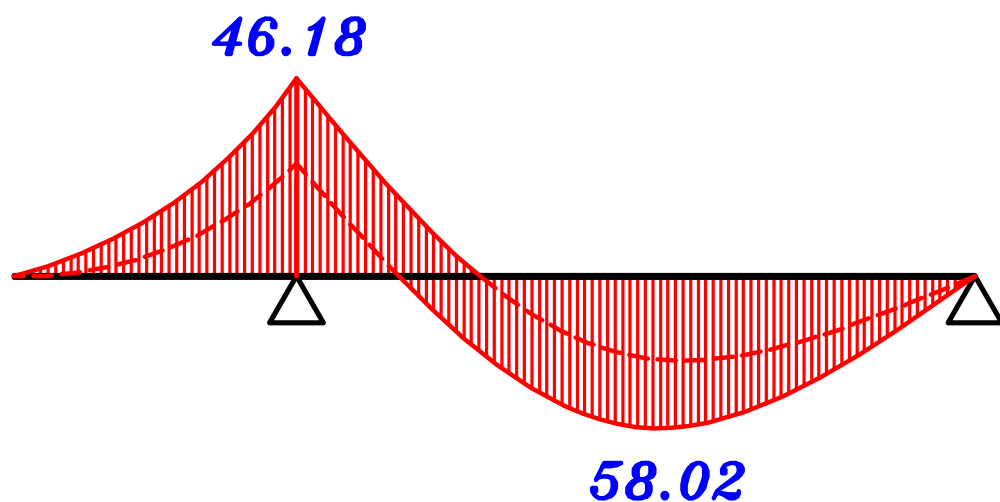
1- max. +ve B.M.D.



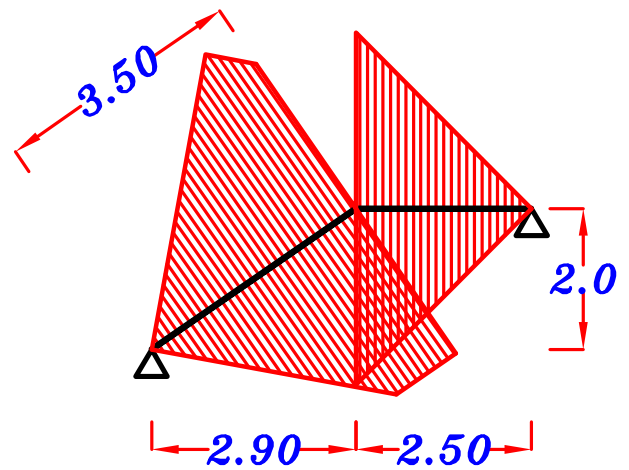
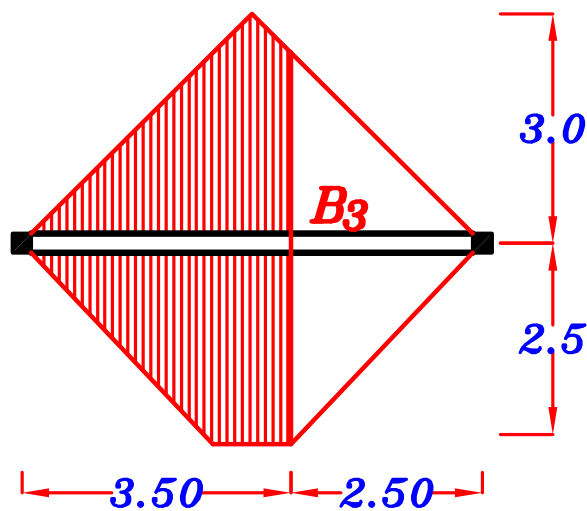
2- max. -ve B.M.D.



max.-max. B.M.D. B_2

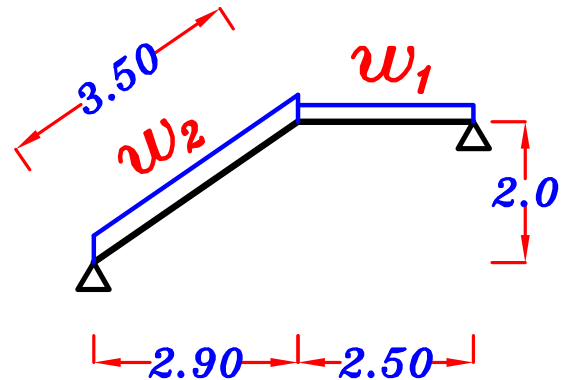


$$\underline{\underline{B_3}} \quad (250 \times 600) \rightarrow o.w. = 3.75 \text{ kN/m}$$



w_1 For Triangle

$$\frac{\sum \text{area}}{\text{span}} = \frac{2(0.5)(2.5)(2.5)}{2.50} = 2.50$$

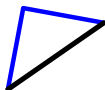


$$g_{1e} = o.w. + \frac{\sum \text{area}}{\text{span}} * g_s = 3.75 + (2.50)(5.0) = 16.25 \text{ kN/m}$$

$$p_{1e} = \frac{\sum \text{area}}{\text{span}} * p_{sh} = (2.50)(2.0) = 5.0 \text{ kN/m}$$

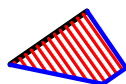
$$w_{1e} = g_{1e} + p_{1e} = 16.25 + 5.0 = 21.25 \text{ kN/m}$$

w_2 For area

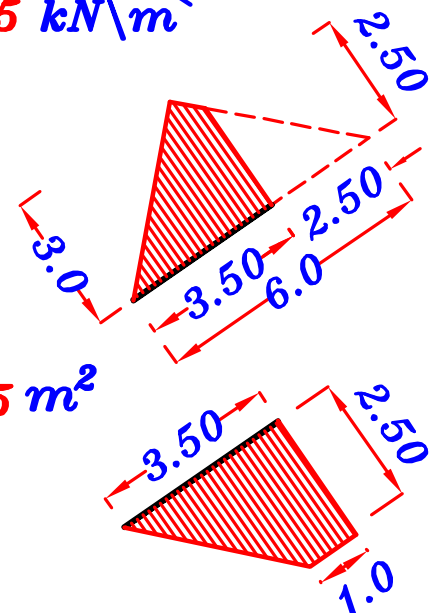


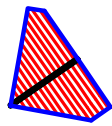
$$\text{area} = (0.5)(6.0)(3.0) - (0.5)(2.5)(2.5) = 5.875 \text{ m}^2$$

For area



$$\left(\frac{3.50 + 2.5}{2.0} \right) (2.5) = 7.50 \text{ m}^2$$





$$\frac{\sum \text{area}}{\text{span}} = \frac{5.875 + 7.50}{3.50} = 3.82$$

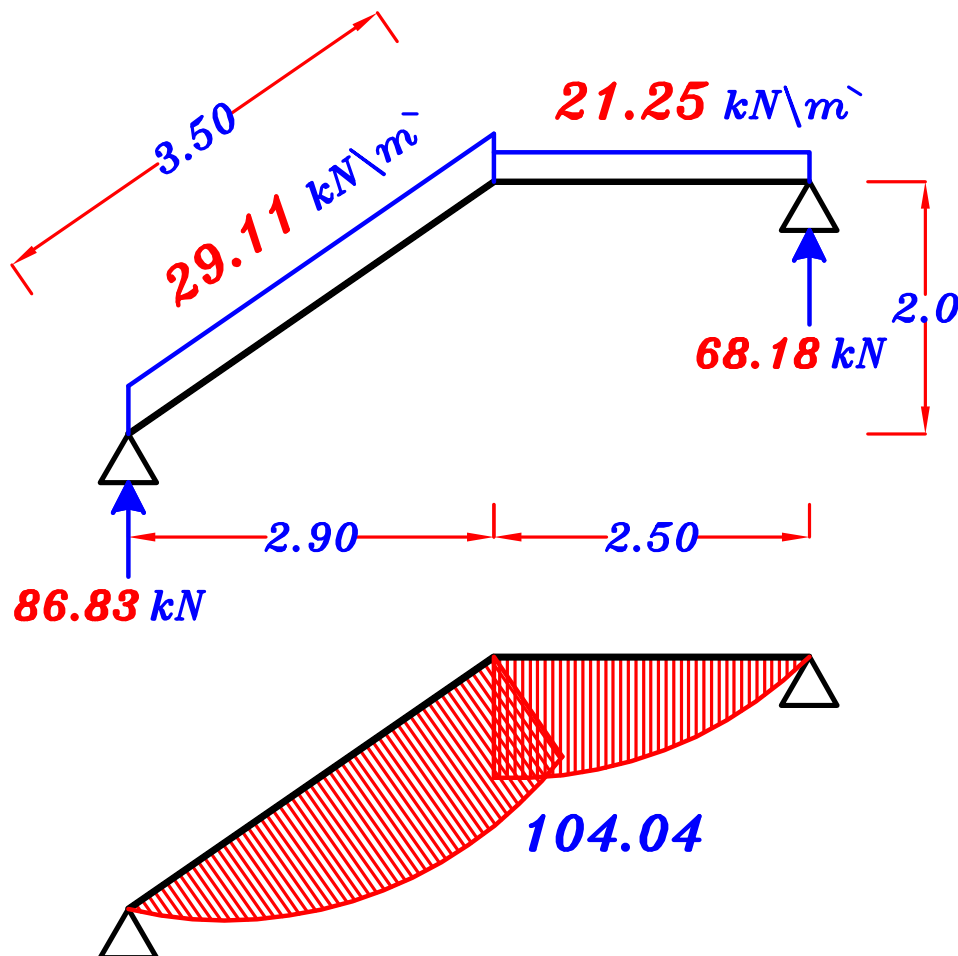


$$g_{2e} = o.w. + \frac{\sum \text{area}}{\text{span}} * g_s = 3.75 + (3.82)(5.0) = 22.85 \text{ kN/m}$$

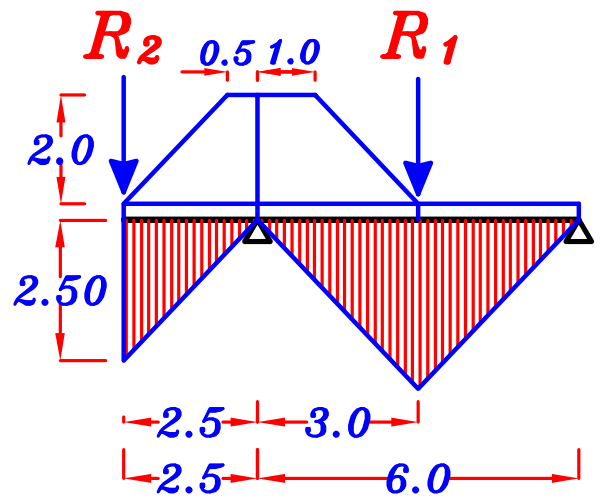
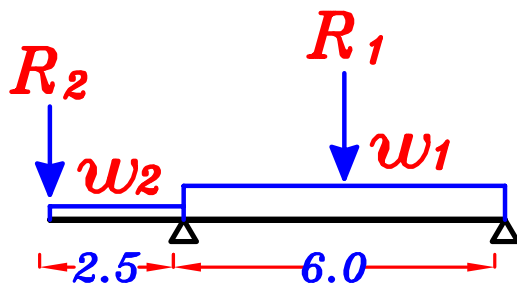
$$p_{2e} = \frac{\sum \text{area}}{\text{span}} * p_{si} = (3.82)(1.64) = 6.26 \text{ kN/m}$$

$$w_{2e} = g_{2e} + p_{2e} = 22.85 + 6.26 = 29.11 \text{ kN/m}$$

max.-max. B.M.D. B_3



$$\underline{\underline{B_4}} \quad (250 \times 500) \rightarrow o.w. = 3.12 \text{ kN/m}$$



w_1

For Triangle $C_e = \frac{2}{3}$

For Trapezoid $\frac{\sum \text{area}}{\text{span}} = \frac{\left(\frac{3.0+1.0}{2.0}\right)(2.0)}{6.0} = 0.67$

$$g_{1e} = o.w. + C_e g_s \frac{L_s}{2} + \frac{\sum \text{area}}{\text{span}} * g_s$$

$$= 3.12 + \left(\frac{2}{3}\right)(5.0)(3.0) + (0.67)(5.0) = 16.47 \text{ kN/m}$$

$$p_{1e} = C_e p_{si} \frac{L_s}{2} + \frac{\sum \text{area}}{\text{span}} * p_{sh}$$

$$= \left(\frac{2}{3}\right)(1.64)(3.0) + (0.67)(2.0) = 4.62 \text{ kN/m}$$

$$w_{1e} = g_{1e} + p_{1e} = 16.47 + 4.62 = 21.09 \text{ kN/m}$$

w_2

For Triangle $C_e = \frac{2}{3}$

For Trapezoid $\frac{\sum \text{area}}{\text{span}} = \frac{\left(\frac{2.5+0.5}{2.0}\right)(2.0)}{2.5} = 1.20$

$$g_{2e} = o.w. + C_e g_s L_c + \frac{\sum \text{area}}{\text{span}} * g_s$$

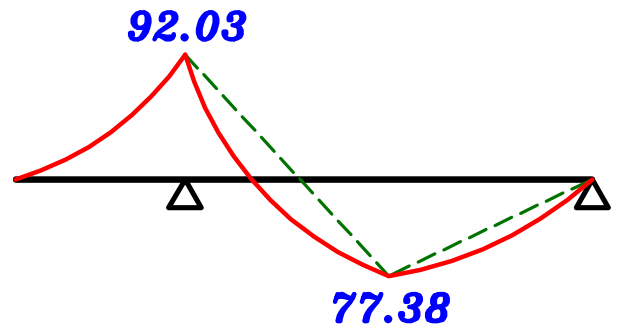
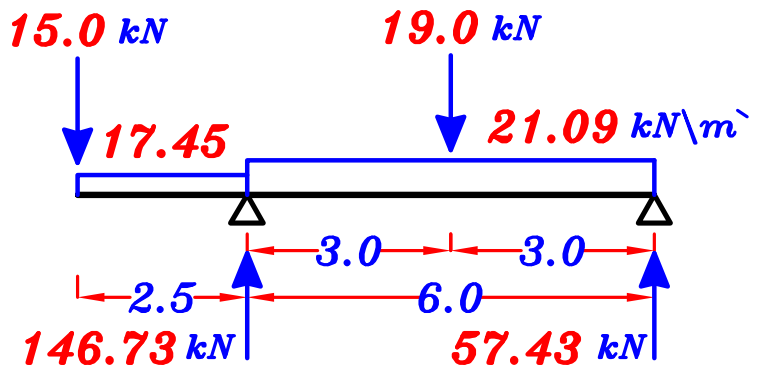
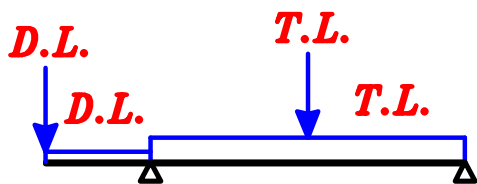
$$= 3.12 + \left(\frac{2}{3}\right)(5.0)(2.5) + (1.20)(5.0) = 17.45 \text{ kN/m}$$

$$p_{2e} = C_e p_{si} L_c + \frac{\sum \text{area}}{\text{span}} * p_{sh}$$

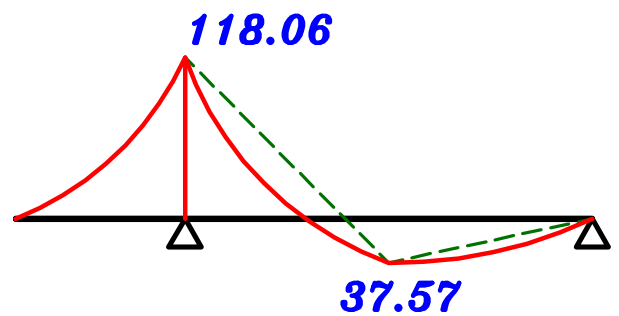
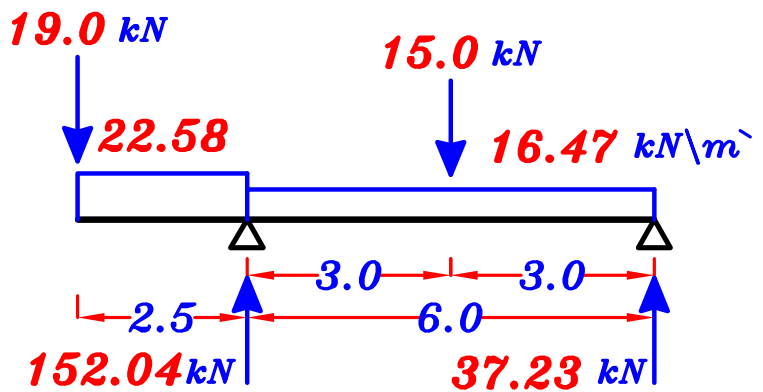
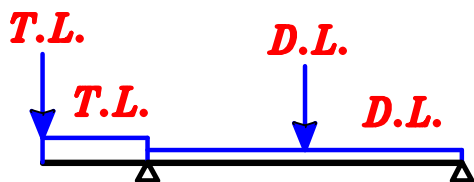
$$= \left(\frac{2}{3}\right)(1.64)(2.5) + (1.20)(2.0) = 5.13 \text{ kN/m}$$

$$w_{2e} = g_{2e} + p_{2e} = 17.45 + 5.13 = 22.58 \text{ kN/m}$$

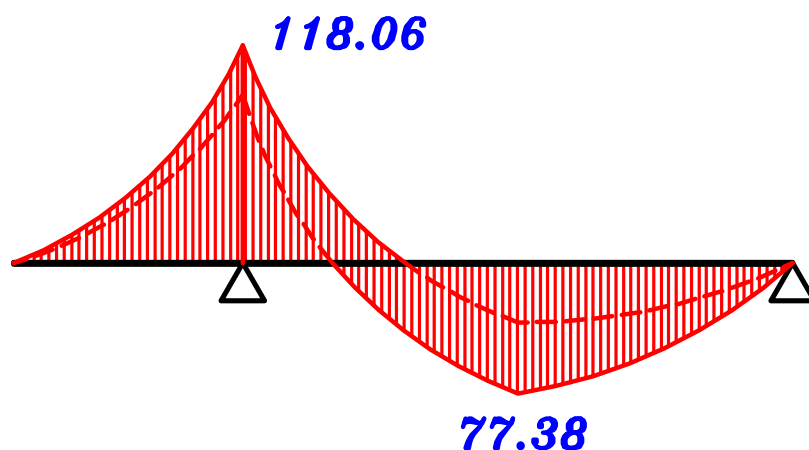
1- max. +ve B.M.D.



2- max. -ve B.M.D.



max.-max. B.M.D. B₄

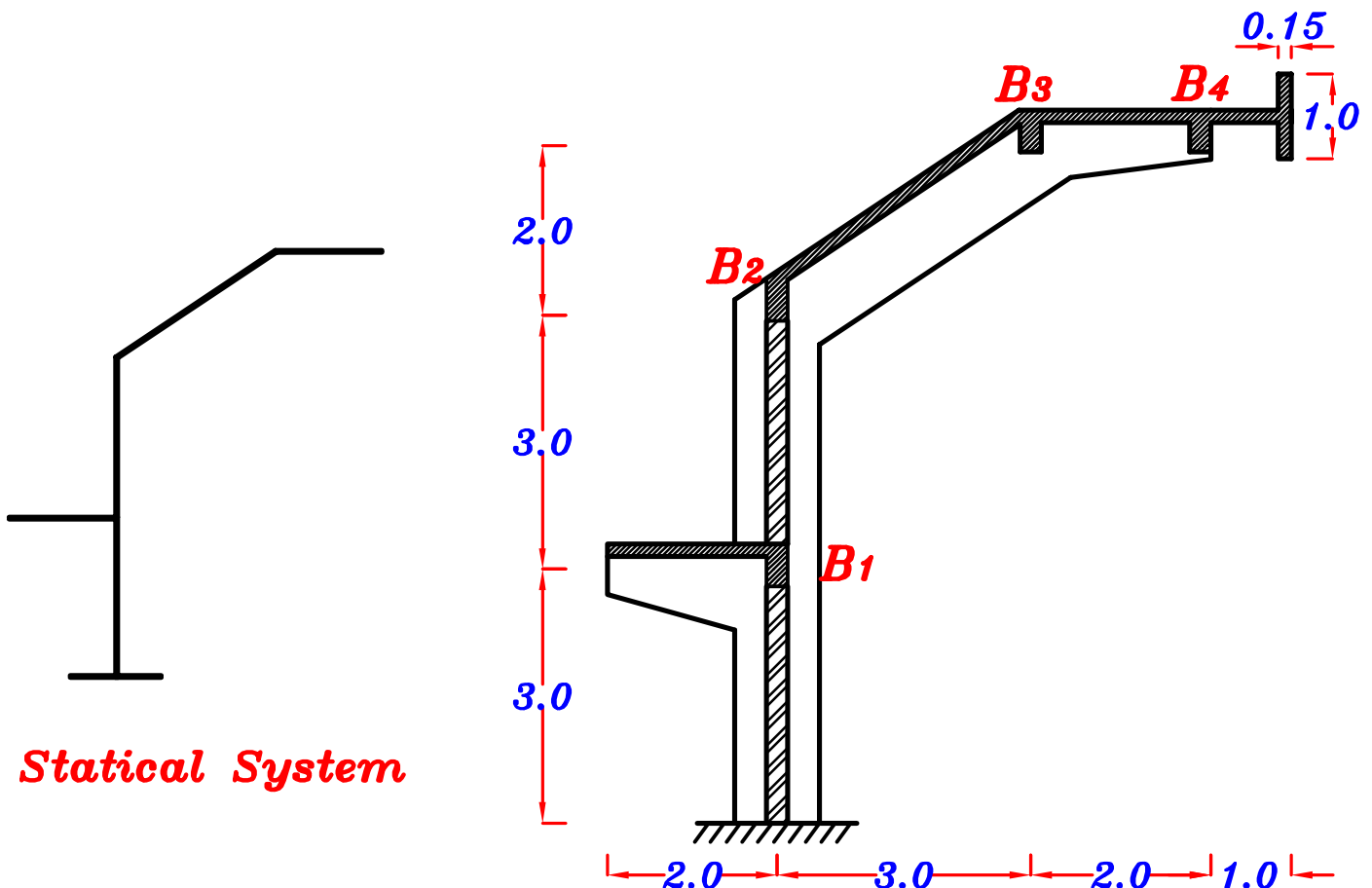


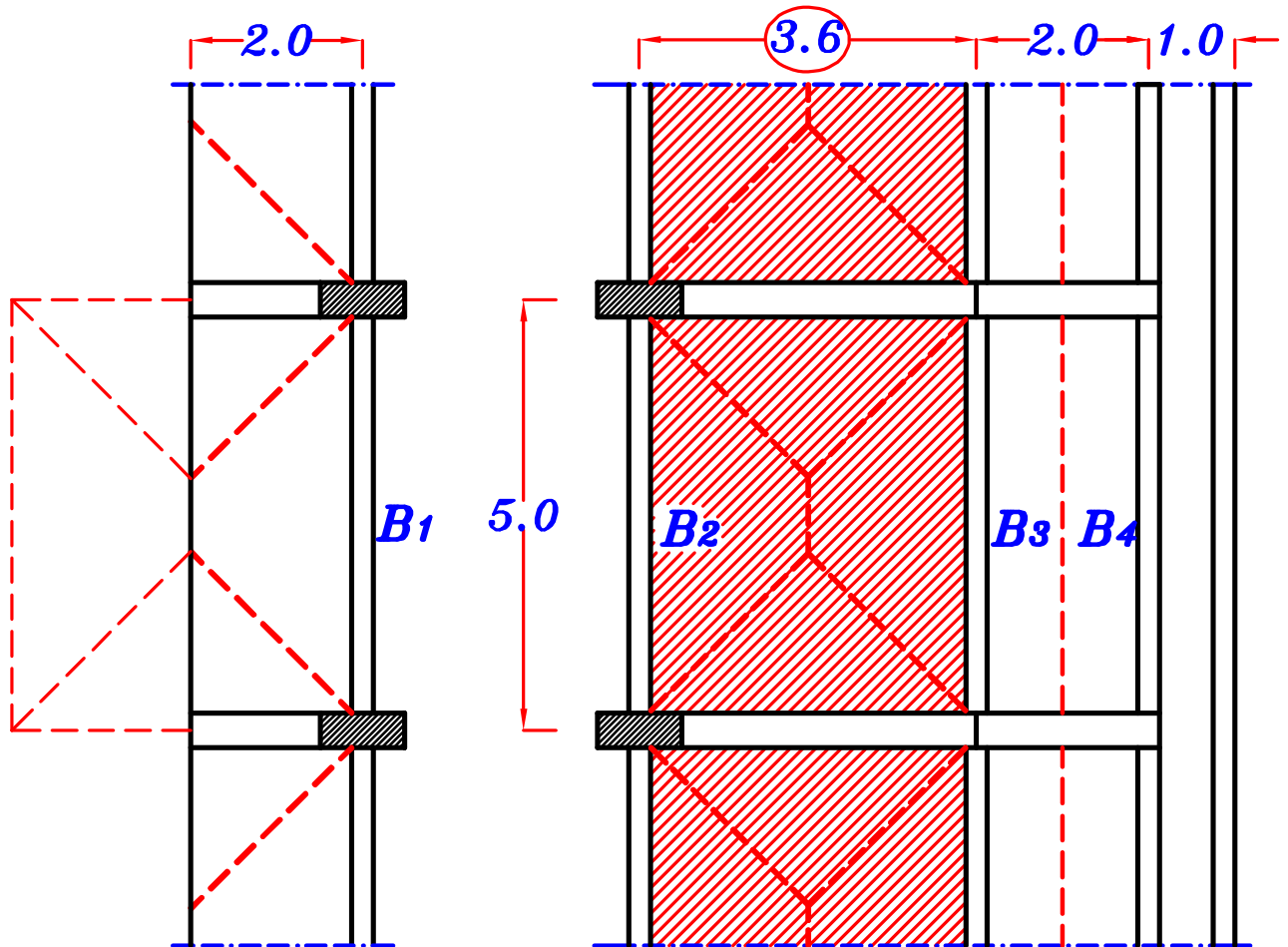
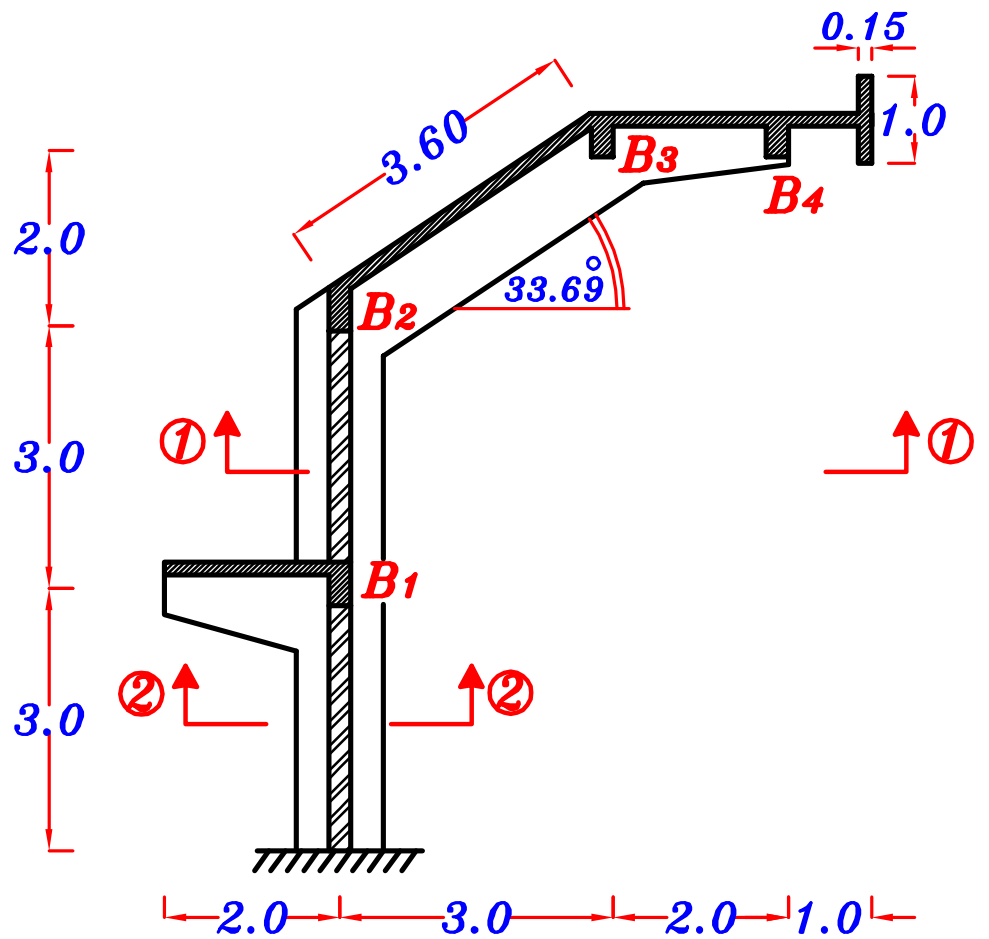
Example.

The **Figure** shows a sectional elevation of a reinforced concrete roof. The roof is covered by reinforced concrete slabs supported by a system of secondary beams and Frames (**F**) spaced at **5.0 m**. For an intermediate panel, it is required to :

- 1 – Draw a structural plan showing the pattern of load distribution.
- 2 – Calculate the equivalent working loads for shear and moment For all secondary beams (**B₁** , **B₂** , **B₃** & **B₄**) and an intermediate Frame (**F**) .
- 3 – Draw the **N.F.D.** (total load) , **S.F.D.** (total load) and **max-max B.M.D.** For an intermediate Frame (**F**) , **using ultimate limit loads.**

- Data:**
- Slab thickness $t_s = 120 \text{ mm}$
 - Live load = 1.0 kN/m^2 **HL. projection.**
 - Floor cover = 1.5 kN/m^2
 - $b_{(\text{beams})} = 0.25 \text{ m}$, $b_{(\text{Frame})} = 0.30 \text{ m}$, $\gamma_{\text{brick}} = 18 \text{ kN/m}^3$
 - Own weight of beams = 3.0 kN/m
 - Own weight of Frame = 6.0 kN/m





Plan ②

Plan ①

2 – Calculate the equivalent working loads for shear and moment For all secondary beams (B_1 , B_2 , B_3 & B_4) and an intermediate Frame (F).

g_s, p_s

$$g_s = t_s * \delta_c + F.C. = 0.12 * 25 + 1.50 = 4.50 \text{ kN/m}^2$$

$$p_{sh} = L.L. = 1.0 \text{ kN/m}^2 \text{ ----- HL. Slab.}$$

$$p_{si} = L.L. * \cos \theta = 1.0 * \cos 33.69^\circ = 0.83 \text{ kN/m}^2 \text{ ----- Inclined Slab.}$$

$$g_s = 4.50 \text{ kN/m}^2, \quad p_{sh} = 1.0 \text{ kN/m}^2, \quad p_{si} = 0.83 \text{ kN/m}^2$$

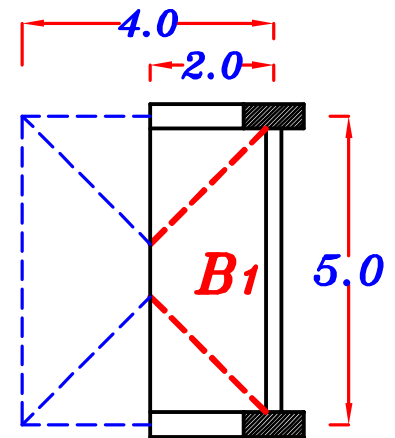
B_1

$$\text{Weight of Wall} = b h \delta_{bricks} = (0.25)(3.0)(18.0) = 13.50 \text{ kN/m}$$

For Trapezoid

$$C_a = 1 - \frac{1}{2} \left(\frac{2L_c}{L} \right) = 1 - \frac{1}{2} \left(\frac{4}{5} \right) = 0.60$$

$$C_e = 1 - \frac{1}{3} \left(\frac{2L_c}{L} \right)^2 = 1 - \frac{1}{3} \left(\frac{4}{5} \right)^2 = 0.78$$



Load For Shear.



$$g_a = 0.W. + \text{Wall} + C_a g_s L_c = 3.0 + 13.5 + (0.60)(4.50)(2.0) = 21.9 \text{ kN/m}$$

$$p_a = C_a p_{sh} L_c = (0.60)(1.0)(2.0) = 1.20 \text{ kN/m}$$

$$w_a = g_a + p_a = 21.9 + 1.20 = 23.1 \text{ kN/m}$$

$$R_1 = g_a * \text{Spacing} = 21.9 * 5.0 = 109.5 \text{ kN ----- D.L.}$$

$$= w_a * \text{Spacing} = 23.1 * 5.0 = 115.5 \text{ kN ----- T.L.}$$

$$R_1 = 109.5 \text{ kN ----- D.L.}$$

$$= 115.5 \text{ kN ----- T.L.}$$

Load For Moment.

$$g_e = 0.W. + Wall + C_e g_s L_c = 3.0 + 13.5 + (0.78)(4.50)(2.0) = \mathbf{23.52 \text{ kN}\backslash\text{m}}$$

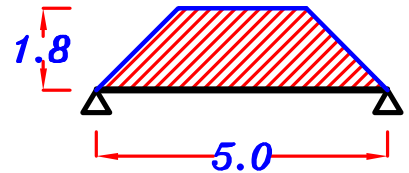
$$p_e = C_e p_{sh} L_c = (0.78)(1.0)(2.0) = \mathbf{1.56 \text{ kN}\backslash\text{m}}$$

$$w_e = g_e + p_e = 23.52 + 1.56 = \mathbf{25.08 \text{ kN}\backslash\text{m}}$$

B₂ For Trapezoid

$$C_a = 1 - \frac{1}{2} \left(\frac{L_s}{L} \right) = 1 - \frac{1}{2} \left(\frac{3.60}{5} \right) = \mathbf{0.64}$$

$$C_e = 1 - \frac{1}{3} \left(\frac{L_s}{L} \right)^2 = 1 - \frac{1}{3} \left(\frac{3.60}{5} \right)^2 = \mathbf{0.83}$$



Load For Shear.

$$g_a = 0.W. + C_a g_s \frac{L_s}{2} = 3.0 + (0.64)(4.50) \left(\frac{3.6}{2} \right) = \mathbf{8.18 \text{ kN}\backslash\text{m}}$$

$$p_a = C_a p_{si} \frac{L_s}{2} = (0.64)(0.83) \left(\frac{3.6}{2} \right) = \mathbf{0.95 \text{ kN}\backslash\text{m}}$$

$$w_a = g_a + p_a = 8.18 + 0.95 = \mathbf{9.13 \text{ kN}\backslash\text{m}}$$

$$R_2 = g_a * \text{Spacing} = 8.18 * 5.0 = \mathbf{40.9 \text{ kN}} \text{ ----- D.L.}$$

$$= w_a * \text{Spacing} = 9.13 * 5.0 = \mathbf{45.65 \text{ kN}} \text{ ----- T.L.}$$

$$\boxed{R_2 = 40.9 \text{ kN} \text{ ----- D.L.}} \\ \boxed{= 45.65 \text{ kN} \text{ ----- T.L.}}$$

Load For Moment.

$$g_e = 0.W. + C_e g_s \frac{L_s}{2} = 3.0 + (0.83)(4.50) \left(\frac{3.6}{2} \right) = \mathbf{9.72 \text{ kN}\backslash\text{m}}$$

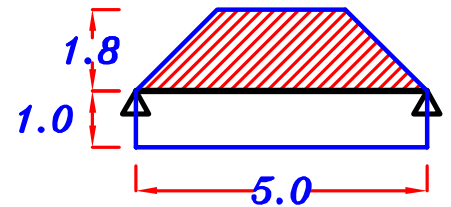
$$p_e = C_e p_{si} \frac{L_s}{2} = (0.83)(0.83) \left(\frac{3.6}{2} \right) = \mathbf{1.24 \text{ kN}\backslash\text{m}}$$

$$w_e = g_e + p_e = 9.72 + 1.24 = \mathbf{10.96 \text{ kN}\backslash\text{m}}$$

B₃ For Trapezoid

$$C_a = 1 - \frac{1}{2} \left(\frac{L_s}{L} \right) = 1 - \frac{1}{2} \left(\frac{3.60}{5} \right) = 0.64$$

$$C_e = 1 - \frac{1}{3} \left(\frac{L_s}{L} \right)^2 = 1 - \frac{1}{3} \left(\frac{3.60}{5} \right)^2 = 0.83$$



Load For Shear.

$$g_a = 0.W. + C_a g_s \frac{L_s}{2} + g_s \frac{L_s}{2}$$

$$= 3.0 + (0.64) (4.50) \left(\frac{3.6}{2} \right) + (4.50) \left(\frac{2.0}{2} \right) = 12.68 \text{ kN/m}$$

$$p_a = C_a p_{si} \frac{L_s}{2} + p_{sh} \frac{L_s}{2} = (0.64)(0.83) \left(\frac{3.6}{2} \right) + (1.0) \left(\frac{2.0}{2} \right) = 1.95 \text{ kN/m}$$

$$w_a = g_a + p_a = 12.68 + 1.95 = 14.63 \text{ kN/m}$$

$$R_3 = g_a * \text{Spacing} = 12.68 * 5.0 = 63.4 \text{ kN} \text{ ----- D.L.}$$

$$= w_a * \text{Spacing} = 14.63 * 5.0 = 73.15 \text{ kN} \text{ ----- T.L.}$$

$$\begin{aligned} R_3 &= 63.4 \text{ kN} \text{ ----- D.L.} \\ &= 73.15 \text{ kN} \text{ ----- T.L.} \end{aligned}$$

Load For Moment.

$$g_e = 0.W. + C_e g_s \frac{L_s}{2} + g_s \frac{L_s}{2}$$

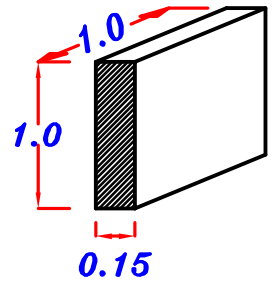
$$= 3.0 + (0.83) (4.50) \left(\frac{3.6}{2} \right) + (4.50) \left(\frac{2.0}{2} \right) = 14.22 \text{ kN/m}$$

$$p_e = C_e p_{si} \frac{L_s}{2} + p_{sh} \frac{L_s}{2} = (0.83)(0.83) \left(\frac{3.6}{2} \right) + (1.0) \left(\frac{2.0}{2} \right) = 2.24 \text{ kN/m}$$

$$w_e = g_e + p_e = 14.22 + 2.24 = 16.46 \text{ kN/m}$$

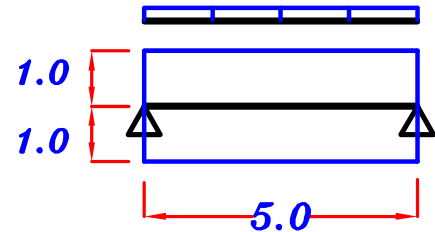
B₄

$$O.W. \text{ of the Parapet} = (0.15) (1.0) (1.0) (25) = 3.75 \text{ kN/m}$$



Load For Shear. = Load For Moment.

$$g_a = O.W. + \text{Parapet} + g_s \frac{L_s}{2} + g_s L_c$$



$$= 3.0 + 3.75 + (4.50) \left(\frac{2.0}{2} \right) + (4.50) (1.0) = 15.75 \text{ kN/m}$$

$$p_a = p_{sh} \frac{L_s}{2} + p_{sh} L_c = (1.0) \left(\frac{2.0}{2} \right) + (1.0) (1.0) = 2.0 \text{ kN/m}$$

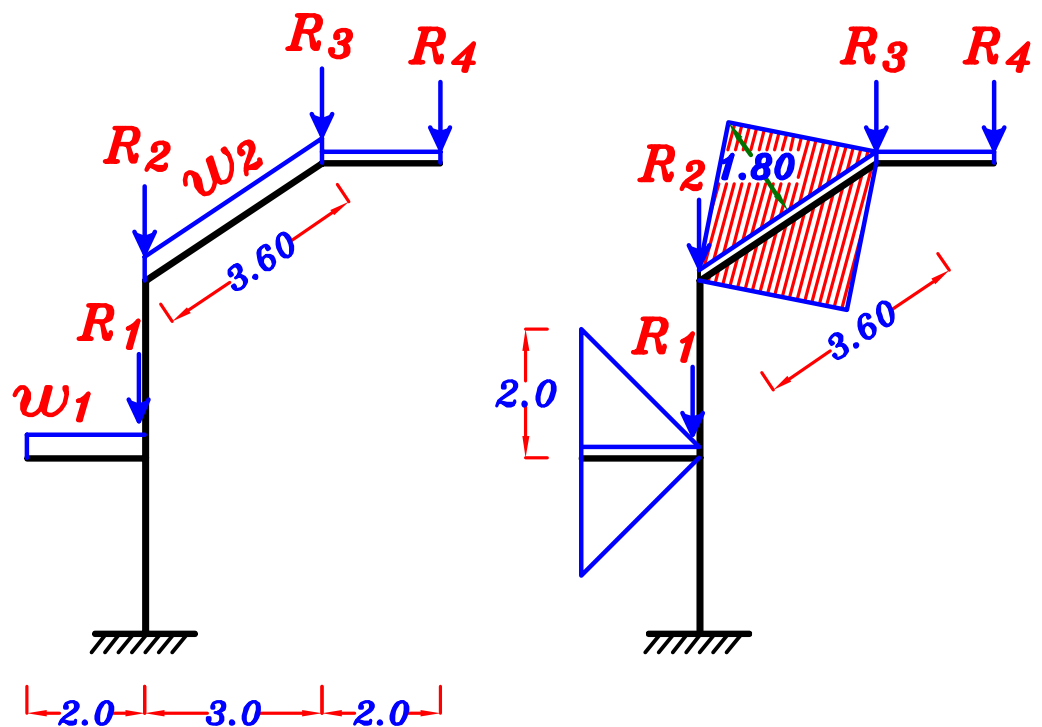
$$w_a = g_a + p_a = 15.75 + 2.0 = 17.75 \text{ kN/m}$$

$$R_4 = g_a * \text{Spacing} = 15.75 * 5.0 = 78.75 \text{ kN} \text{ ----- D.L.}$$

$$= w_a * \text{Spacing} = 17.75 * 5.0 = 88.75 \text{ kN} \text{ ----- T.L.}$$

$$\begin{aligned} R_4 &= 78.75 \text{ kN} \text{ ----- D.L.} \\ &= 88.75 \text{ kN} \text{ ----- T.L.} \end{aligned}$$

Frame.



w_1 For Triangle \triangle $C_a = \frac{1}{2}$, $C_e = \frac{2}{3}$

$g_a = 0.W. + 2 C_a g_s L_c = 6.0 + 2 \left(\frac{1}{2}\right) (4.5) (2.0) = 15.0 \text{ kN}\backslash\text{m}^{\text{'}}$

$p_a = 2 C_a p_{sh} L_c = 2 \left(\frac{1}{2}\right) (1.0) (2.0) = 2.0 \text{ kN}\backslash\text{m}^{\text{'}}$

$w_a = g_a + p_a = 15.0 + 2.0 = 17.0 \text{ kN}\backslash\text{m}^{\text{'}}$

$g_e = 0.W. + 2 C_e g_s L_c = 6.0 + 2 \left(\frac{2}{3}\right) (4.5) (2.0) = 18.0 \text{ kN}\backslash\text{m}^{\text{'}}$

$p_e = 2 C_e p_{sh} L_c = 2 \left(\frac{2}{3}\right) (1.0) (2.0) = 2.67 \text{ kN}\backslash\text{m}^{\text{'}}$

$w_e = g_e + p_e = 18.0 + 2.67 = 20.67 \text{ kN}\backslash\text{m}^{\text{'}}$

w_2 $\frac{\sum \text{area}}{\text{span}} = \frac{2 \left(\frac{1}{2} (3.6) (1.8)\right)}{3.6} = 1.80$

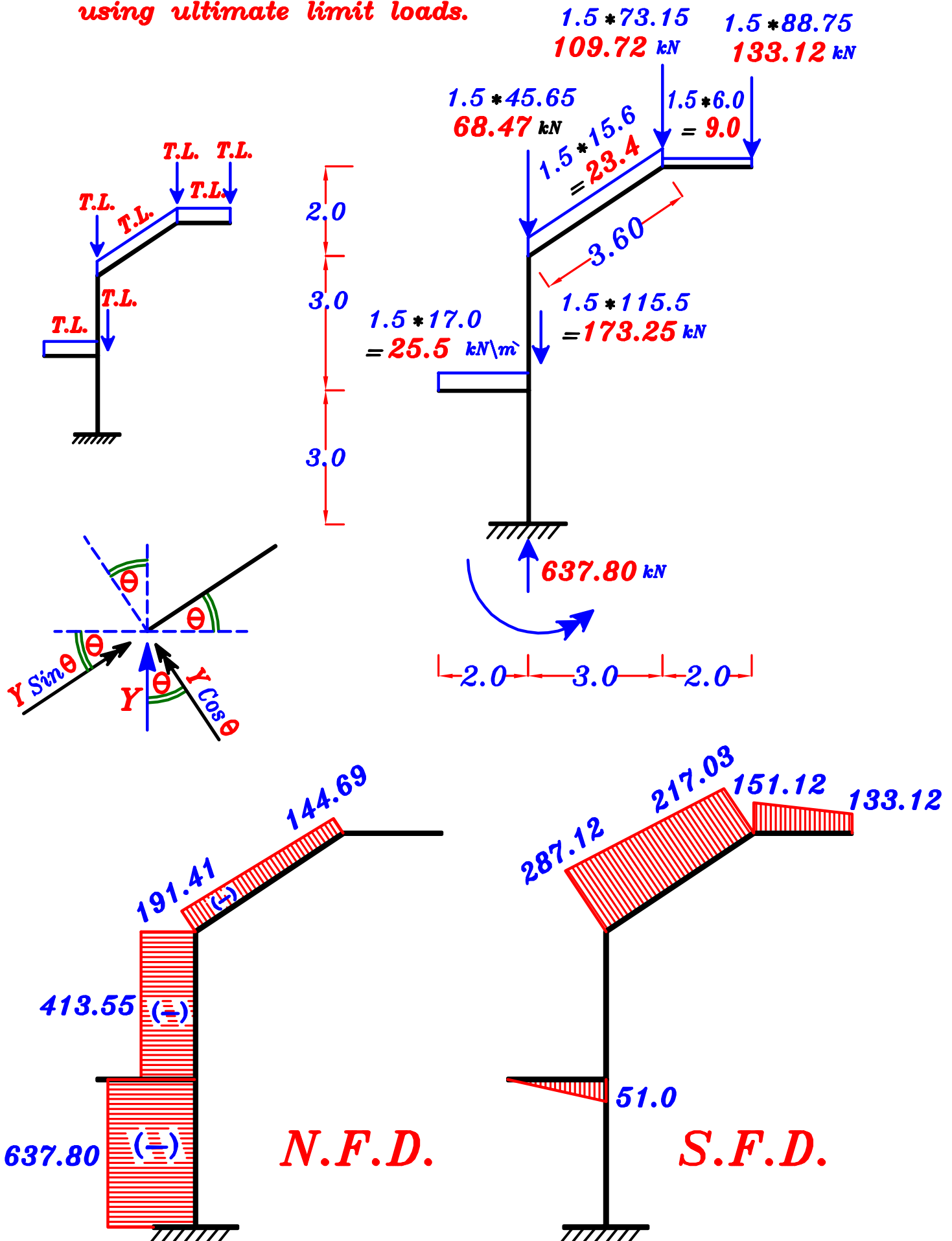
$g_a = g_e = 0.W. + \frac{\sum \text{area}}{\text{span}} * g_s = 6.0 + (1.80) (4.50) = 14.1 \text{ kN}\backslash\text{m}^{\text{'}}$

$p_a = p_e = \frac{\sum \text{area}}{\text{span}} * p_{si} = (1.80) (0.83) = 1.50 \text{ kN}\backslash\text{m}^{\text{'}}$

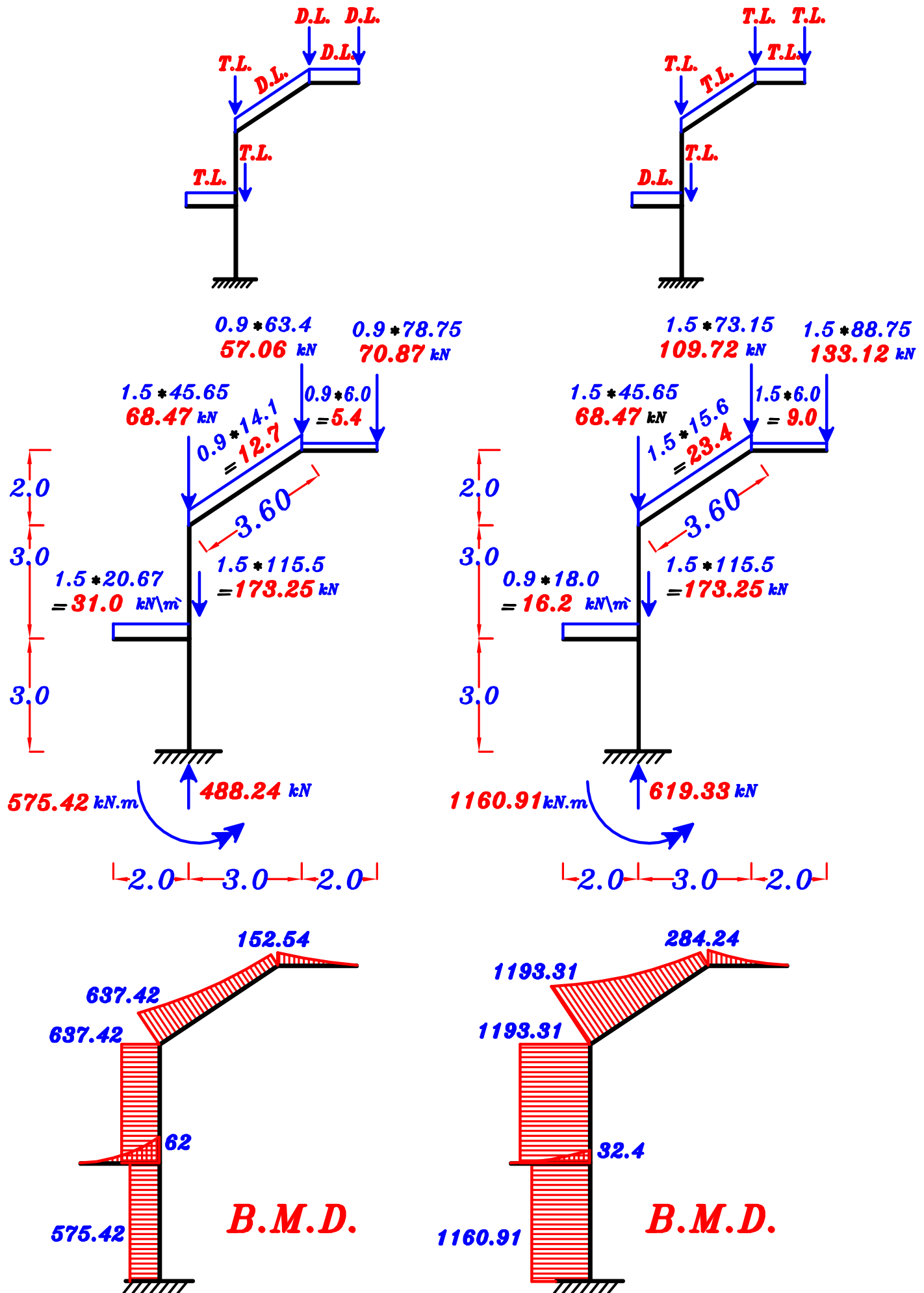
$w_a = w_e = g_a + p_a = 14.1 + 1.50 = 15.60 \text{ kN}\backslash\text{m}^{\text{'}}$

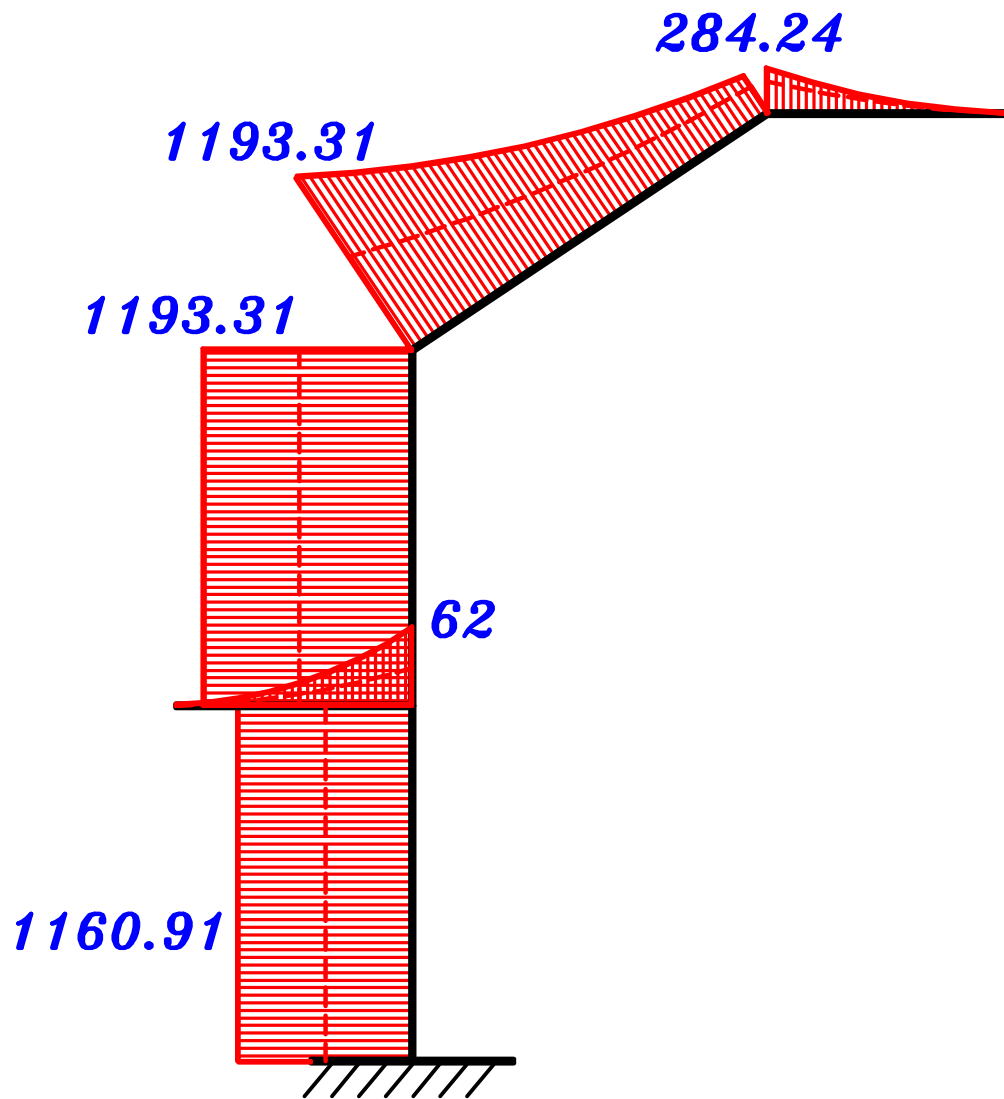
3- Draw the *N.F.D.* (total load), *S.F.D.* (total load) For an intermediate Frame (*F*)

using ultimate limit loads.



3- Draw the max-max B.M.D. For an intermediate Frame (F) using ultimate limit loads.





max-max B.M.D.

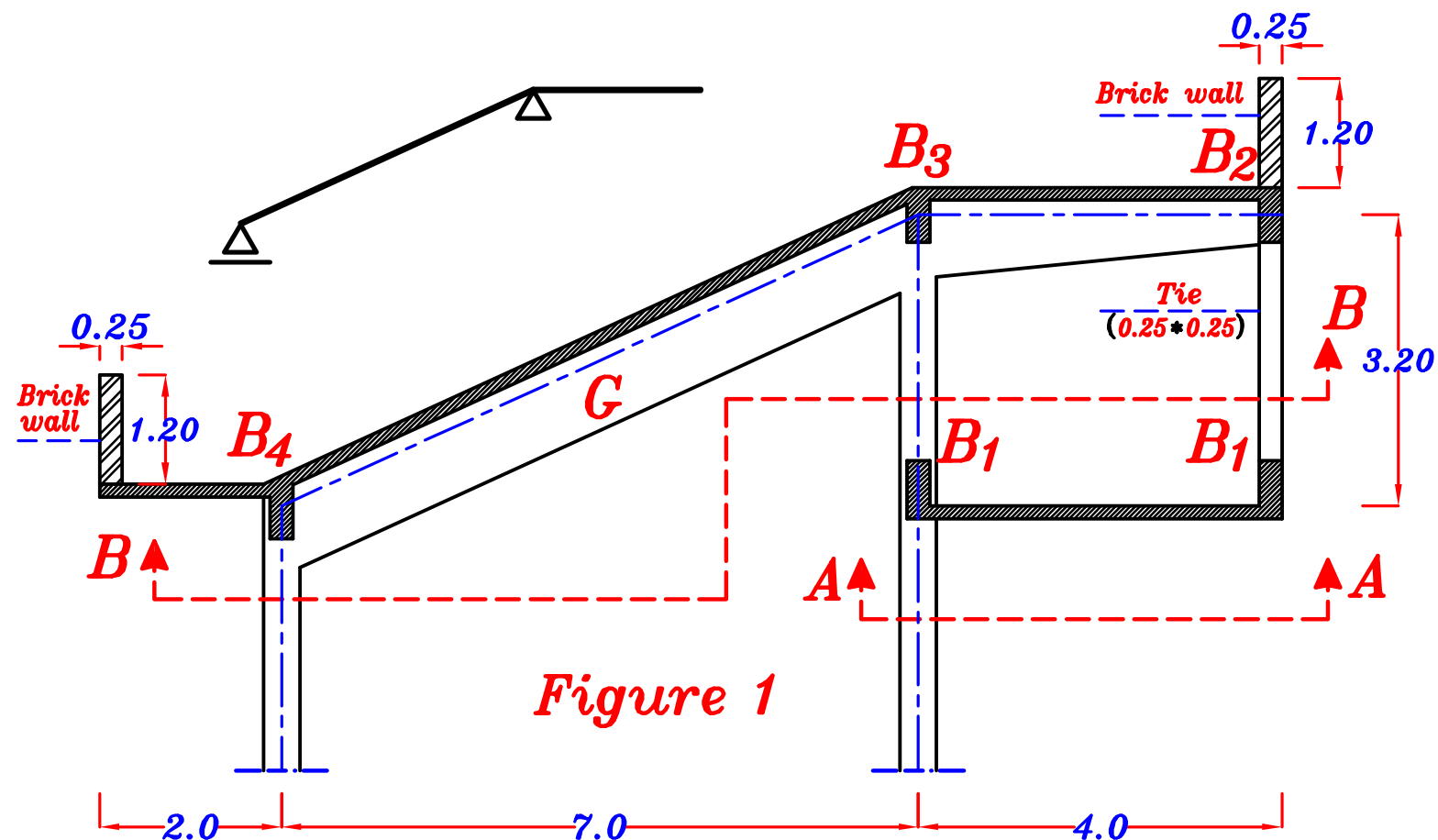
Example.

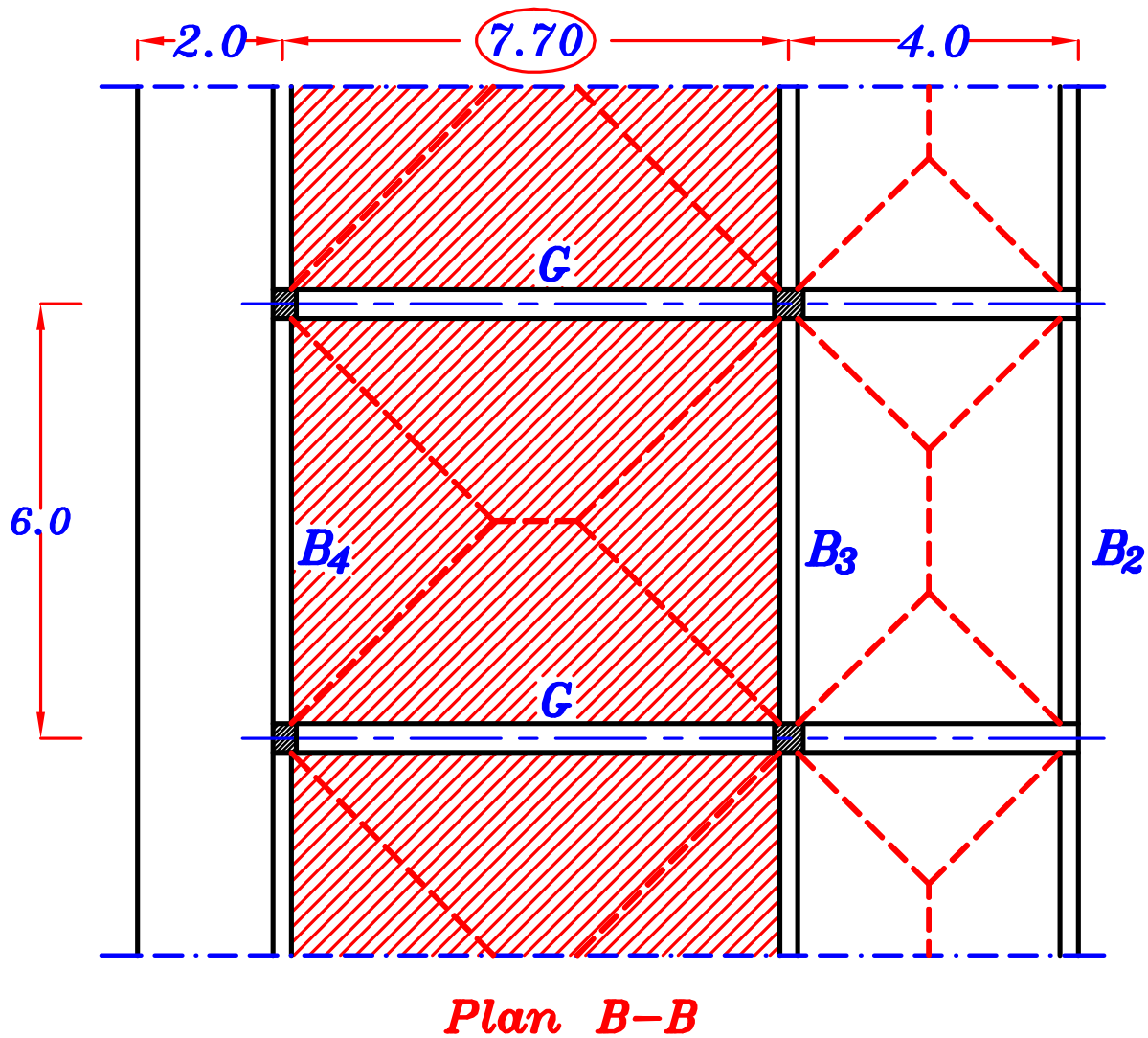
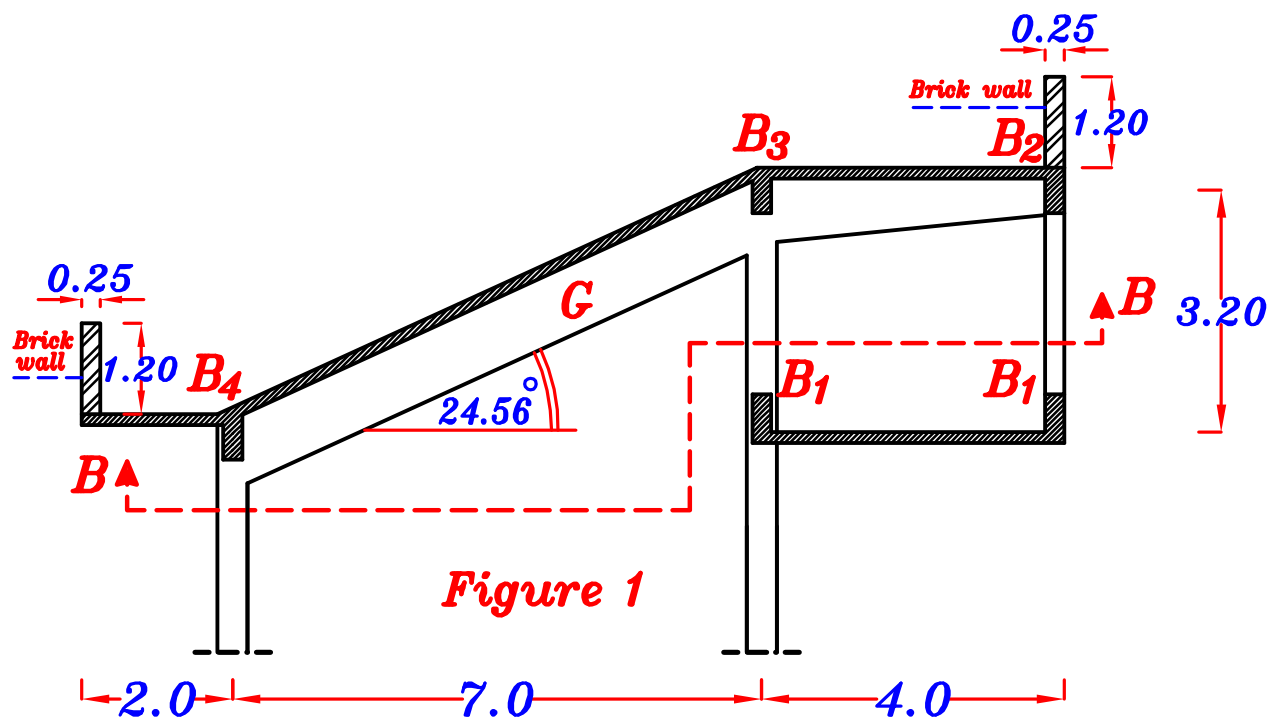
Figure 1 is showing the structural section of the covering system of a reinforced concrete hall. Using the Following data:

- The slab thickness $t_s = 140 \text{ mm}$
- The density of used bricks = 15 kN/m^3
- Live Load = 2.0 kN/m^2
- Floor cover Load = 1.50 kN/m^2
- Self weight of all beams and girders = 3.50 kN/m
- Spacing of the main girders = 6.0 m

It is required :

- 1- Draw the structural plans **A-A & B-B** showing the pattern of slab load distribution on all Beams.
- 2- Calculate the equivalent loads For shear and moment For all beams.
- 3- Draw the max-max bending moment diagram For girder **G** using Ultimate limits loads.
- 4- Draw the shearing Force diagram **For the case of total load only** For girder **G**.





2- Calculate the equivalent loads For shear and moment For all beams.

g_s, p_s

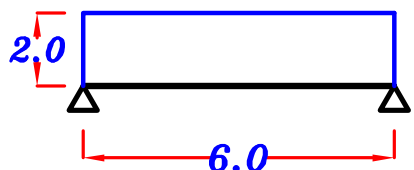
$$g_s = t_s * \gamma_c + F.C. = 0.14 * 25 + 1.50 = 5.0 \text{ kN/m}^2$$

$$p_{sh} = L.L. = 2.0 \text{ kN/m}^2 \text{ ----- HL. Slab.}$$

$$p_{si} = L.L. * \cos \theta = 2.0 * \cos 24.56^\circ = 1.82 \text{ kN/m}^2 \text{ ----- Inclined Slab.}$$

$$g_s = 5.0 \text{ kN/m}^2, \quad p_{sh} = 2.0 \text{ kN/m}^2, \quad p_{si} = 1.82 \text{ kN/m}^2$$

B_1 Load For Shear. = Load For Moment.

$$g_a = g_e = O.W. + g_s \frac{L_s}{2} = 3.5 + (5.0) \left(\frac{4.0}{2} \right) = 13.50 \text{ kN/m}$$


$$p_a = p_e = p_{sh} \frac{L_s}{2} = (2.0) \left(\frac{4.0}{2} \right) = 4.0 \text{ kN/m}$$

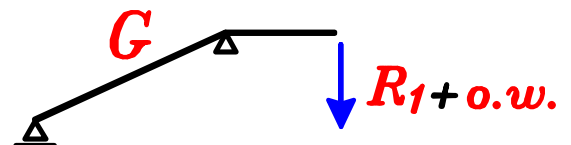
$$w_a = g_a + p_a = 13.50 + 4.0 = 17.50 \text{ kN/m}$$

$$R_1 = g_a * \text{Spacing} = 13.50 * 6.0 = 81.0 \text{ kN} \text{ ----- D.L.}$$

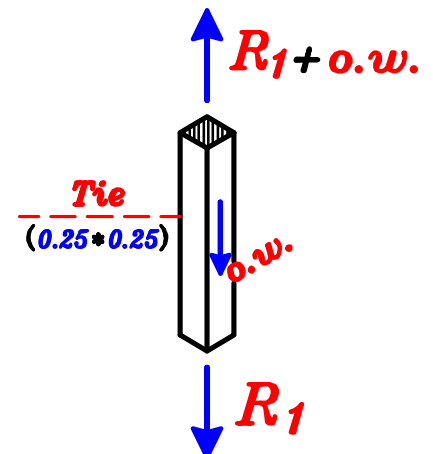
$$= w_a * \text{Spacing} = 17.50 * 6.0 = 105 \text{ kN} \text{ ----- T.L.}$$

$$R_1 = 81.0 \text{ kN} \text{ ----- D.L.}$$

$$= 105 \text{ kN} \text{ ----- T.L.}$$



ينتقل ال reaction (R_1) من الكمره B_1 الى ال Tie
و منه الى ال Girder .



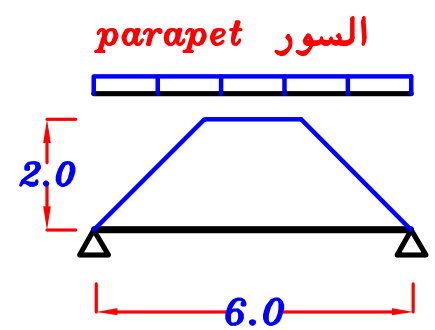
$$o.w. (Tie) = (0.25 * 0.25 * 3.20) * 25$$

$$= 5.0 \text{ kN}$$

B₂ For Trapezoid 1 H.L.

$$C_a = 1 - \frac{1}{2} \left(\frac{L_s}{L} \right) = 1 - \frac{1}{2} \left(\frac{4.0}{6} \right) = 0.67$$


$$C_e = 1 - \frac{1}{3} \left(\frac{L_s}{L} \right)^2 = 1 - \frac{1}{3} \left(\frac{4.0}{6} \right)^2 = 0.85$$



السور

$$\text{parapet} = b * h * \gamma_{wall} = 0.25 * 1.20 * 15.0 = 4.50 \text{ kN/m}$$

Load For Shear.


$$g_a = O.W. + \text{parapet} + C_a g_s \frac{L_s}{2} = 3.5 + 4.5 + (0.67) (5.0) \left(\frac{4.0}{2} \right) = 14.70 \text{ kN/m}$$

$$p_a = C_a p_{sh} \frac{L_s}{2} = (0.67) (2.0) \left(\frac{4.0}{2} \right) = 2.68 \text{ kN/m}$$


$$w_a = g_a + p_a = 14.70 + 2.68 = 17.38 \text{ kN/m}$$

$$R_2 = g_a * \text{Spacing} = 14.70 * 6.0 = 88.20 \text{ kN} \text{ ----- D.L.}$$

$$= w_a * \text{Spacing} = 17.38 * 6.0 = 104.3 \text{ kN} \text{ ----- T.L.}$$

$$\begin{aligned} R_2 &= 88.20 \text{ kN} \text{ --- D.L.} \\ &= 104.3 \text{ kN} \text{ --- T.L.} \end{aligned}$$

Load For Moment.


$$g_e = O.W. + \text{parapet} + C_e g_s \frac{L_s}{2} = 3.5 + 4.5 + (0.85) (5.0) \left(\frac{4.0}{2} \right) = 16.5 \text{ kN/m}$$

$$p_e = C_e p_{sh} \frac{L_s}{2} = (0.85) (2.0) \left(\frac{4.0}{2} \right) = 3.40 \text{ kN/m}$$

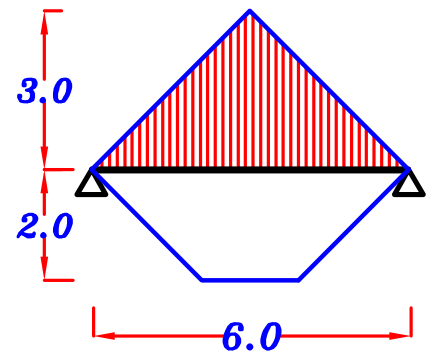
$$w_e = g_e + p_e = 16.5 + 3.40 = 19.90 \text{ kN/m}$$

B_3 For Trapezoid 1 H.L.

$$C_a = 1 - \frac{1}{2} \left(\frac{L_s}{L} \right) = 1 - \frac{1}{2} \left(\frac{4.0}{6} \right) = 0.67$$

$$C_e = 1 - \frac{1}{3} \left(\frac{L_s}{L} \right)^2 = 1 - \frac{1}{3} \left(\frac{4.0}{6} \right)^2 = 0.85$$

For triangle $C_a = \frac{1}{2}$ $C_e = \frac{2}{3}$



Load For Shear.

$$g_a = 0.W. + C_a g_s \frac{L_s}{2} + C_a g_s \frac{L_s}{2}$$

$$= 3.5 + (0.67) (5.0) \left(\frac{4.0}{2} \right) + \left(\frac{1}{2} \right) (5.0) \left(\frac{6.0}{2} \right) = 17.70 \text{ kN}\backslash\text{m}$$

$$p_a = C_a p_{sh} \frac{L_s}{2} + C_a p_{si} \frac{L_s}{2}$$

$$= (0.67) (2.0) \left(\frac{4.0}{2} \right) + \left(\frac{1}{2} \right) (1.82) \left(\frac{6.0}{2} \right) = 5.41 \text{ kN}\backslash\text{m}$$

$$w_a = g_a + p_a = 17.70 + 5.41 = 23.11 \text{ kN}\backslash\text{m}$$

Load For Moment.

$$g_e = 0.W. + C_e g_s \frac{L_s}{2} + C_e g_s \frac{L_s}{2}$$

$$= 3.5 + (0.85) (5.0) \left(\frac{4.0}{2} \right) + \left(\frac{2}{3} \right) (5.0) \left(\frac{6.0}{2} \right) = 22.0 \text{ kN}\backslash\text{m}$$

$$p_e = C_e p_{sh} \frac{L_s}{2} + C_e p_{si} \frac{L_s}{2}$$

$$= (0.85) (2.0) \left(\frac{4.0}{2} \right) + \left(\frac{2}{3} \right) (1.82) \left(\frac{6.0}{2} \right) = 7.04 \text{ kN}\backslash\text{m}$$

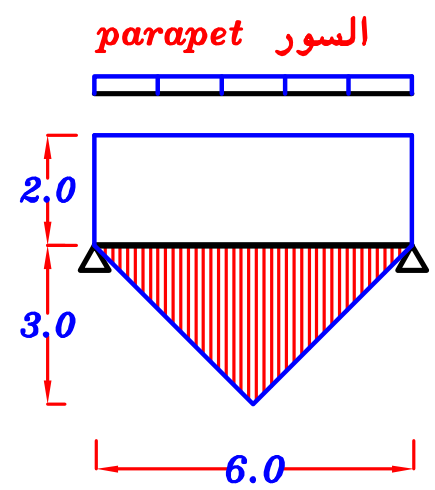
$$w_e = g_e + p_e = 22.0 + 7.04 = 29.04 \text{ kN}\backslash\text{m}$$

B₄

السور

$$parapet = b * h * \gamma_{wall}$$

$$= 0.25 * 1.20 * 15.0 = 4.50 \text{ kN/m}$$




Load For Shear.



$$g_a = 0.W. + parapet + g_s L_c + C_a g_s \frac{L_s}{2}$$

$$= 3.5 + 4.5 + (5.0)(2.0) + \left(\frac{1}{2}\right)(5.0)\left(\frac{6.0}{2}\right) = 25.5 \text{ kN/m}$$



$$p_a = p_{sh} L_c + C_a p_{si} \frac{L_s}{2}$$

$$= (2.0)(2.0) + \left(\frac{1}{2}\right)(1.82)\left(\frac{6.0}{2}\right) = 6.73 \text{ kN/m}$$


$$w_a = g_a + p_a = 25.5 + 6.73 = 32.23 \text{ kN/m}$$

Load For Moment.



$$g_e = 0.W. + parapet + g_s L_c + C_e g_s \frac{L_s}{2}$$

$$= 3.5 + 4.5 + (5.0)(2.0) + \left(\frac{2}{3}\right)(5.0)\left(\frac{6.0}{2}\right) = 28.0 \text{ kN/m}$$

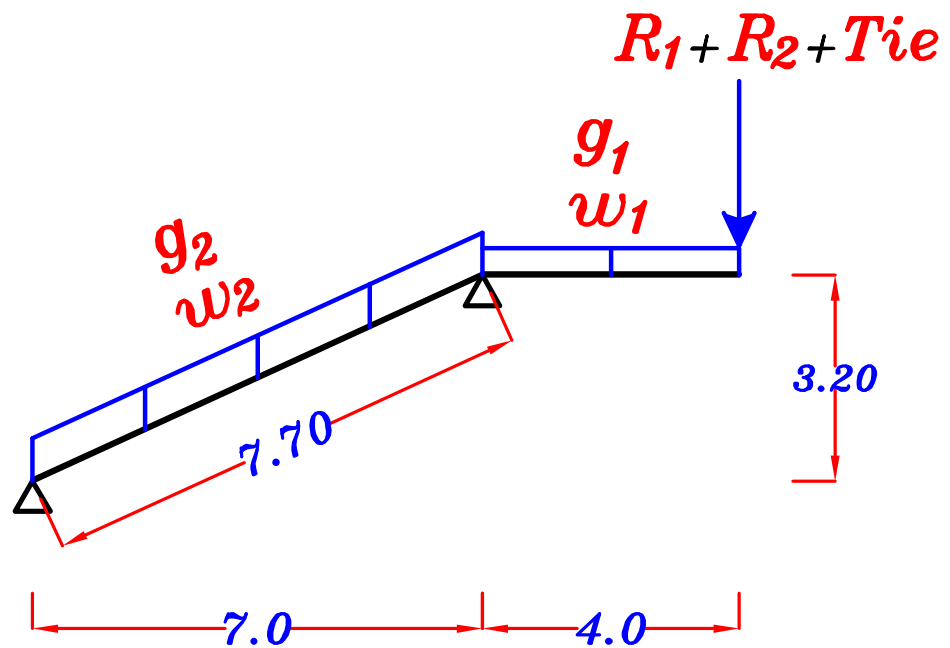
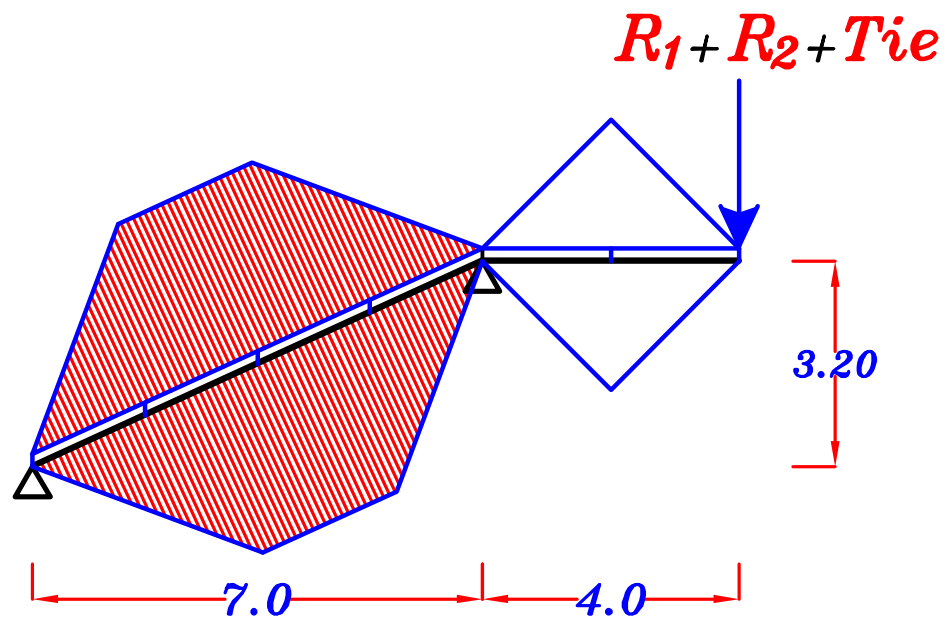


$$p_e = p_{sh} L_c + C_e p_{si} \frac{L_s}{2}$$

$$= (2.0)(2.0) + \left(\frac{2}{3}\right)(1.82)\left(\frac{6.0}{2}\right) = 7.64 \text{ kN/m}$$

$$w_e = g_e + p_e = 28.0 + 7.64 = 35.64 \text{ kN/m}$$

G



w_1 For Triangle $C_a = \frac{1}{2}$, $C_e = \frac{1}{2}$

Load For Shear. = Load For Moment.



$$g_1 = 0.W. + 2 C_a g_s \frac{L_s}{2} = 3.50 + 2 \left(\frac{1}{2} \right) (5.0) \left(\frac{4}{2} \right) = 13.5 \text{ kN/m}$$

$$p_1 = 2 C_a p_{sh} \frac{L_s}{2} = 2 \left(\frac{1}{2} \right) (2.0) \left(\frac{4}{2} \right) = 4.0 \text{ kN/m}$$

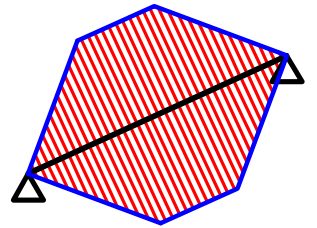
$$w_1 = g_1 + p_1 = 13.5 + 4.0 = 17.5 \text{ kN/m}$$

W₂

For Trapezoid 2 Inclined

$$C_a = 1 - \frac{1}{2} \left(\frac{L_s}{L} \right) = 1 - \frac{1}{2} \left(\frac{6.0}{7.7} \right) = 0.61$$

$$C_e = 1 - \frac{1}{3} \left(\frac{L_s}{L} \right)^2 = 1 - \frac{1}{3} \left(\frac{6.0}{7.7} \right)^2 = 0.80$$



Load For Shear.



$$g_{2a} = 0.W. + 2 C_a g_s \frac{L_s}{2} = 3.50 + 2 (0.61) (5.0) \left(\frac{6}{2} \right) = 21.80 \text{ kN}\backslash\text{m}^{\text{`}}$$

$$p_{2a} = 2 C_a p_{si} \frac{L_s}{2} = 2 (0.61) (1.82) \left(\frac{6}{2} \right) = 6.66 \text{ kN}\backslash\text{m}^{\text{`}}$$

$$w_{2a} = g_{2a} + p_{2a} = 21.80 + 6.66 = 28.46 \text{ kN}\backslash\text{m}^{\text{`}}$$

Load For Moment.

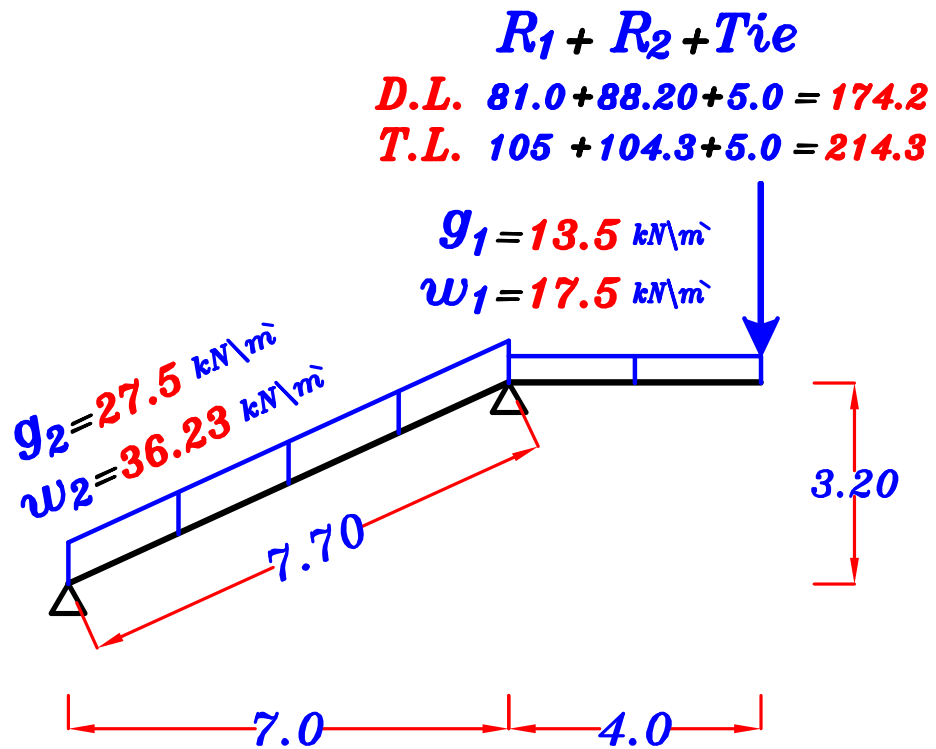


$$g_{2e} = 0.W. + 2 C_e g_s \frac{L_s}{2} = 3.50 + 2 (0.80) (5.0) \left(\frac{6}{2} \right) = 27.50 \text{ kN}\backslash\text{m}^{\text{`}}$$

$$p_{2e} = 2 C_e p_{si} \frac{L_s}{2} = 2 (0.80) (1.82) \left(\frac{6}{2} \right) = 8.73 \text{ kN}\backslash\text{m}^{\text{`}}$$

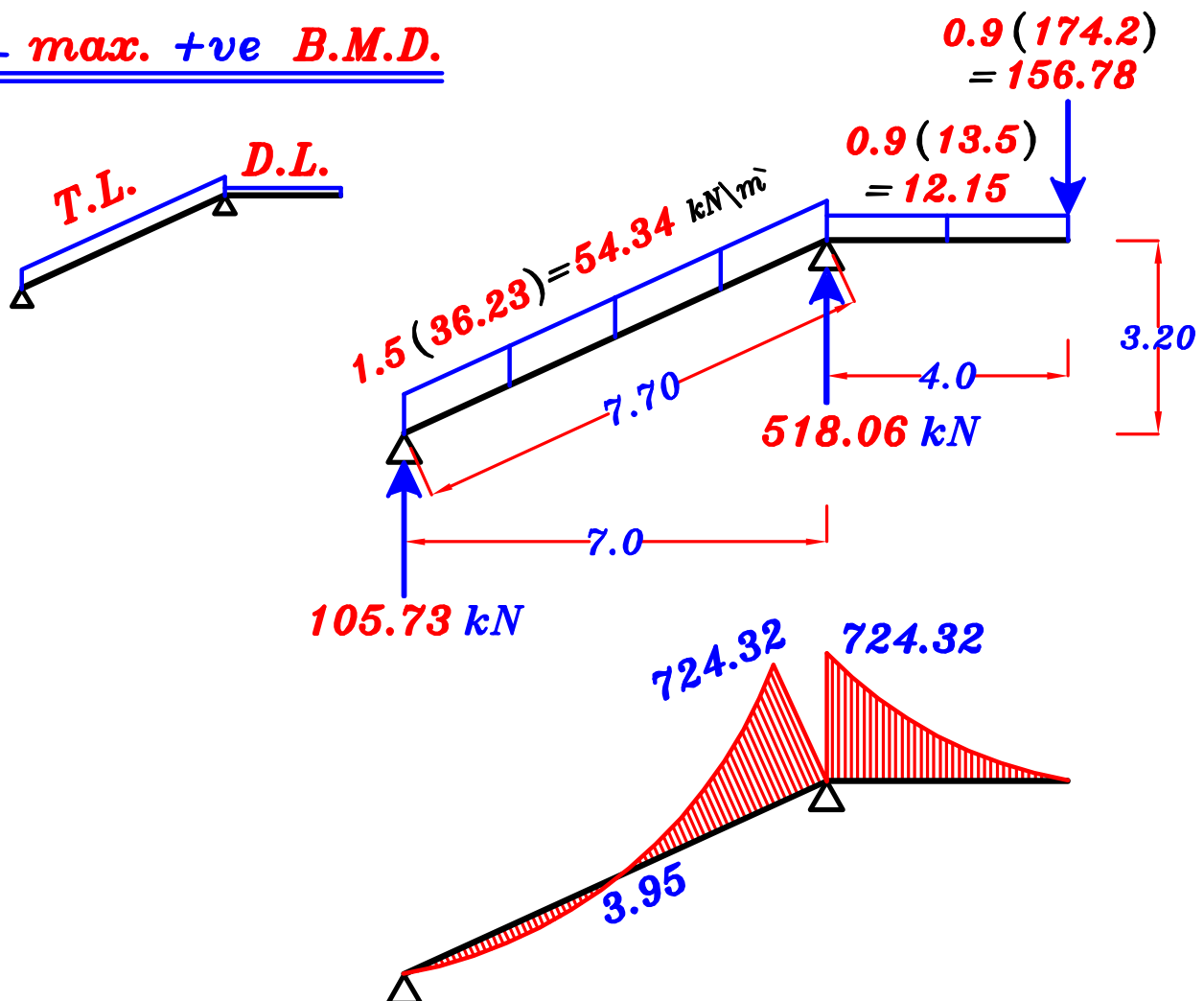
$$w_{2e} = g_{2e} + p_{2e} = 27.50 + 8.73 = 36.23 \text{ kN}\backslash\text{m}^{\text{`}}$$

3 – Draw the max-max bending moment diagram For girder **G** using Ultimate limits loads.

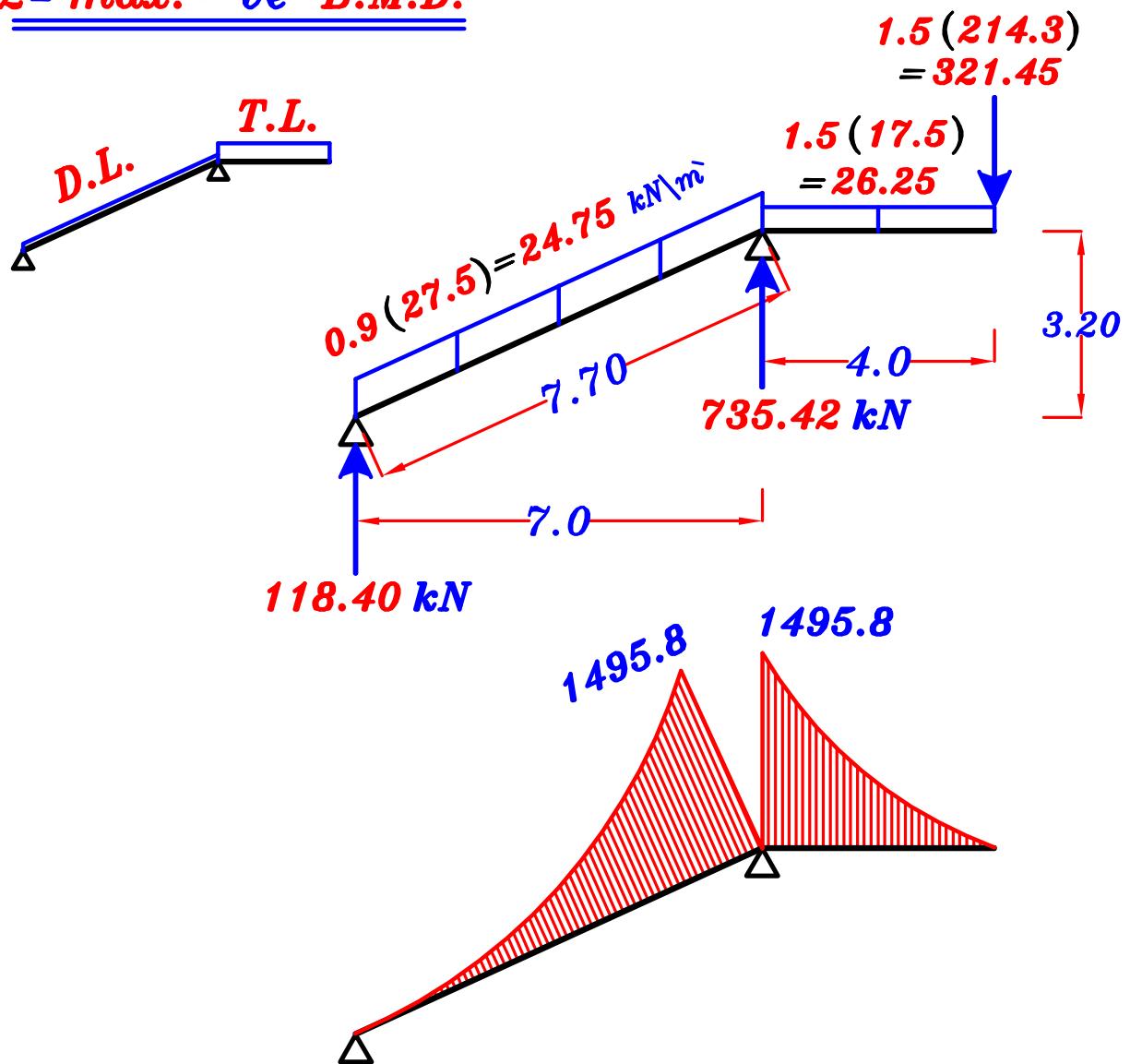


max-max B.M.D. For the Girder.

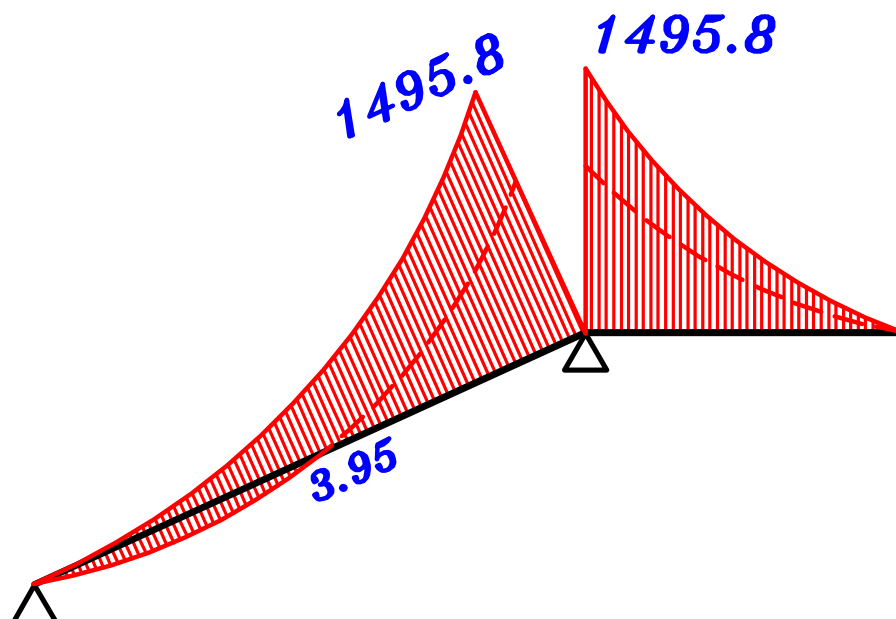
1- max. +ve B.M.D.



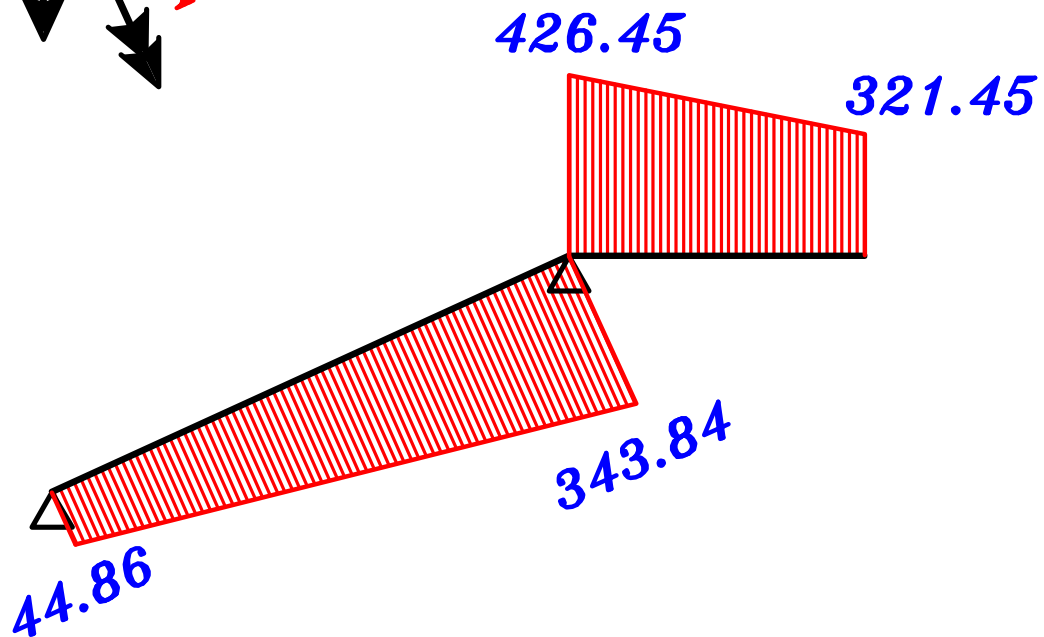
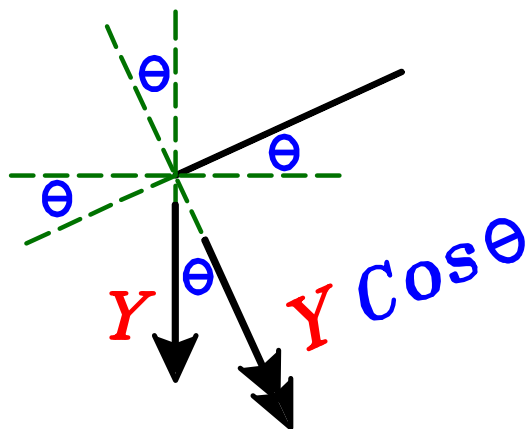
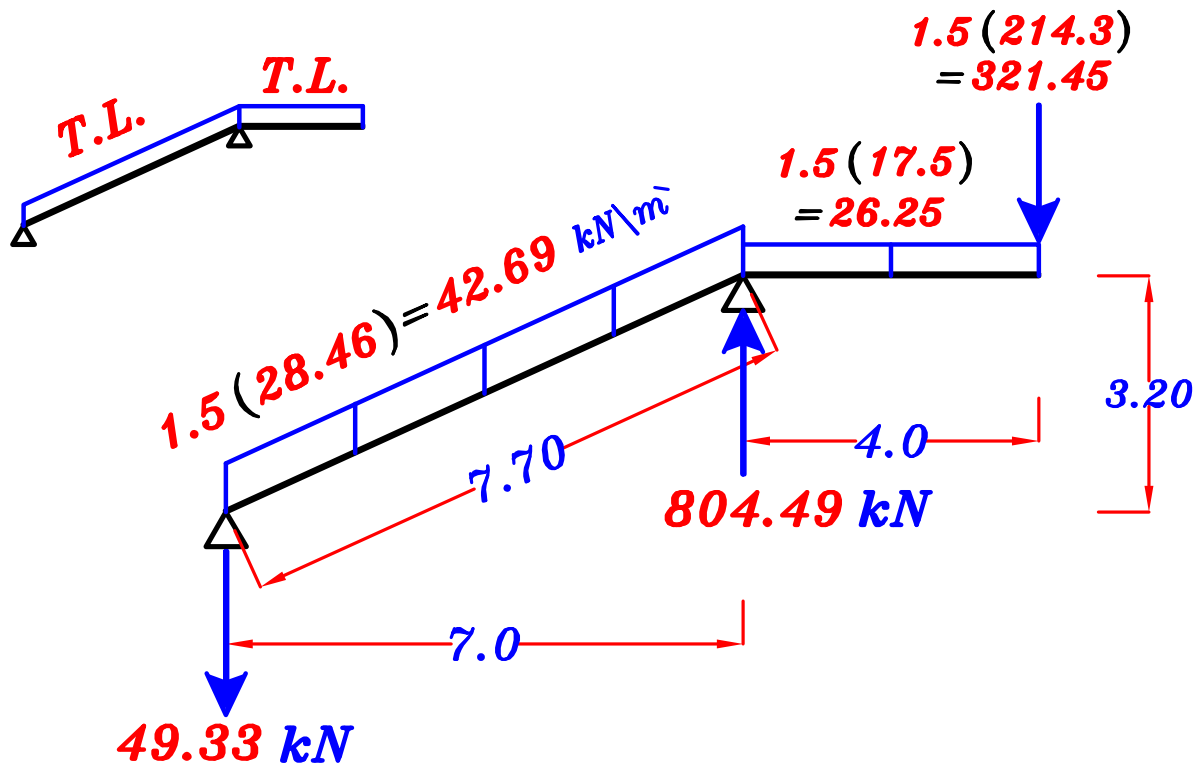
2- max. -ve B.M.D.



max-max B.M.D. For the Girder.

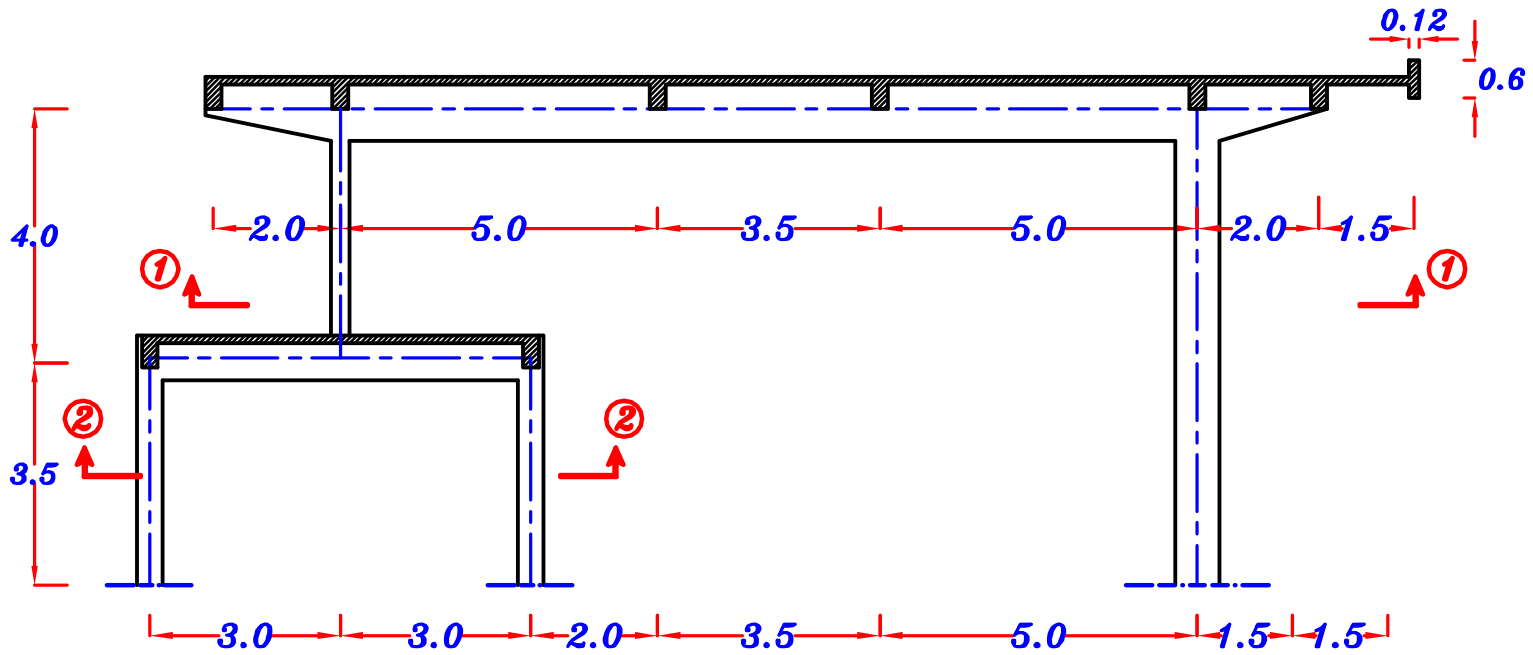


4 – Draw the shearing Force diagram For the case of total load only For girder G .



S.F.D.

Example.



Data.

$$t_s = 0.12 \text{ m}$$

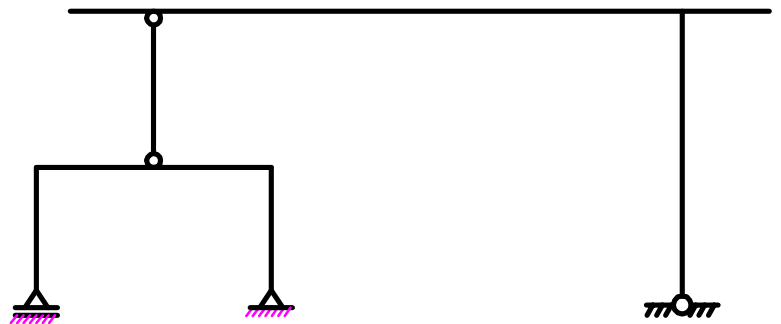
$$F.C. = 2.0 \text{ kN/m}^2$$

$$L.L. = 2.50 \text{ kN/m}^2$$

$$b_{\text{(beam)}} = 0.25 \text{ m}$$

$$b_{\text{(Frame)}} = 0.35 \text{ m}$$

$$\text{Spacing} = 6.0 \text{ m}$$

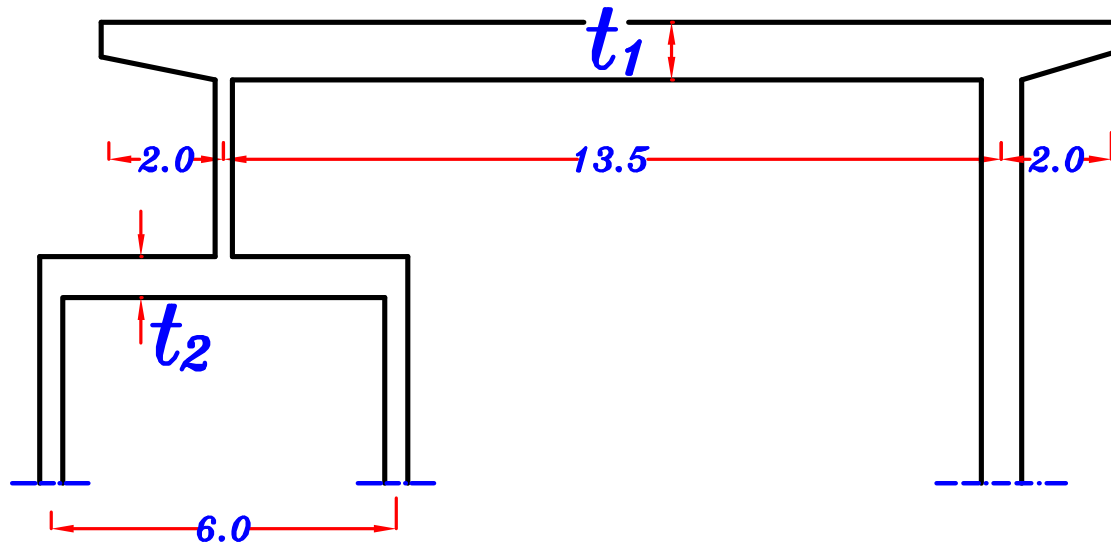


Static System

Req.

- 1- Estimate the concrete dimensions and own weight of the beams and Frame.
- 2- Draw plans ① & ② illustrate the pattern of load distribution.
- 3- Draw **N.F.D. & S.F.D.** (case of total load only) For the Frame.
- 4- Draw **max-max B.M.D.** For the Frame.

1 – Estimate the concrete dimensions and own weight of the beams and Frame.



$$t_{\text{secondary beams}} = \frac{\text{spacing}}{12} = \frac{6.0}{12} = 0.50 \text{ m}$$

$$\left. \begin{aligned} \text{upper Frame } t_1 &= \frac{13.5}{12} = 1.125 \text{ m} \\ &= \frac{2.0}{5} = 0.40 \text{ m} \end{aligned} \right\} = 1.125 \text{ m} = 1.15 \text{ m}$$

$$\text{lower Frame } t_2 = \frac{6.0}{10} = 0.60 \text{ m}$$

o.w. of Beams & Frames = $b \ t \ \gamma_c$

Beams $(250 * 500)$ **o.w.** = $(0.25) (0.5) (25) = 3.12 \text{ kN/m}$

upper Frame (F_1) $(350 * 1150)$ **o.w.** = $(0.35) (1.15) (25) = 10.0 \text{ kN/m}$

lower Frame (F_2) $(350 * 600)$ **o.w.** = $(0.35) (0.60) (25) = 5.25 \text{ kN/m}$

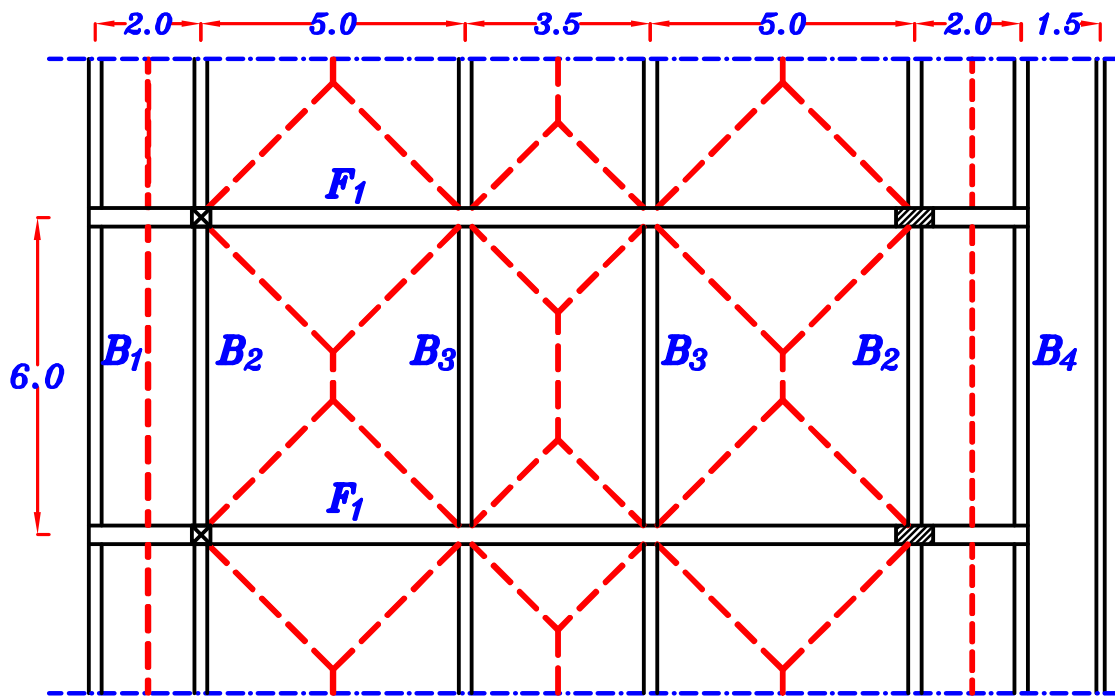
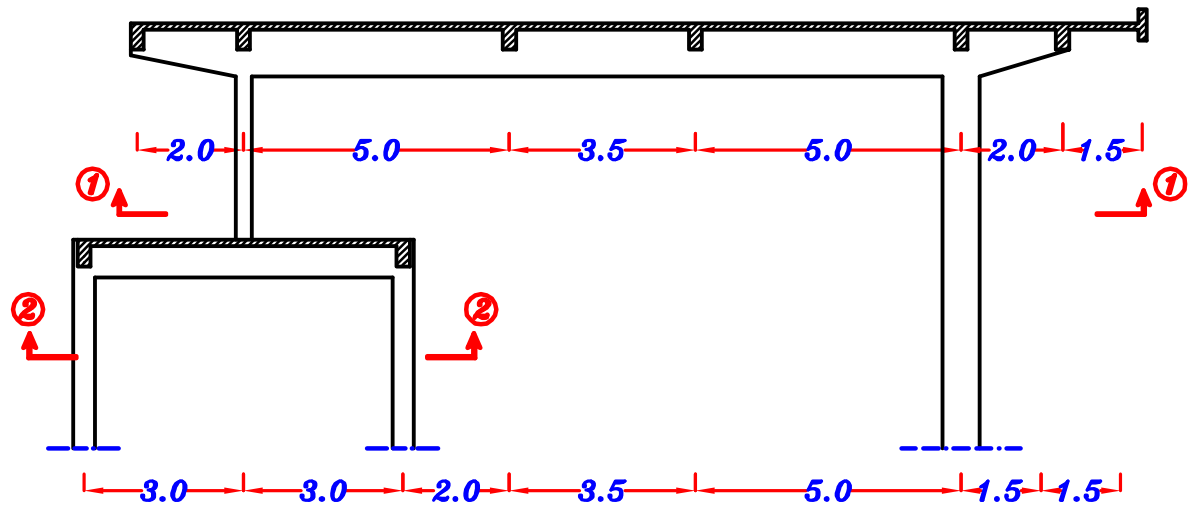
g_s, p_s

$$g_s = t_s * \gamma_c + F.C. = 0.12 * 25 + 2.0 = 5.0 \text{ kN/m}^2$$

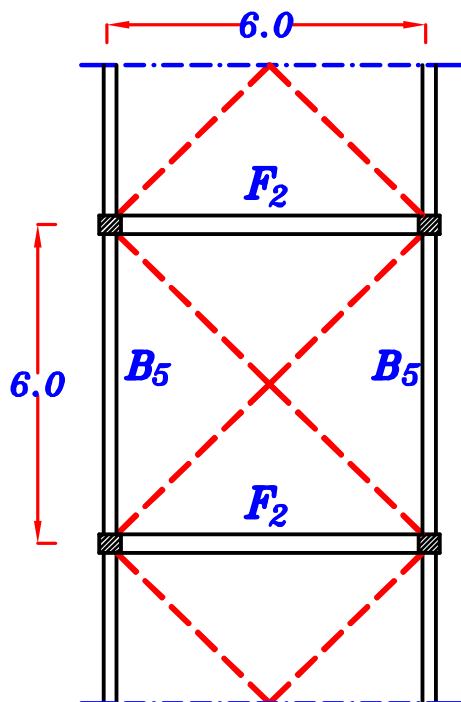
$$p_s = L.L. = 2.50 \text{ kN/m}^2$$

$$\boxed{g_s = 5.0 \text{ kN/m}^2}, \quad \boxed{p_s = 2.50 \text{ kN/m}^2}$$

2 – Draw plans ① & ② illustrate the pattern of load distribution.



Plan ①



Plan ②

B₁

$$g_a = 0.W. + g_s \frac{L_s}{2} = 3.12 + (5.0) \left(\frac{2}{2}\right) = 8.12 \text{ kN/m}$$

$$p_a = p_s \frac{L_s}{2} = (2.50) \left(\frac{2}{2}\right) = 2.50 \text{ kN/m}$$

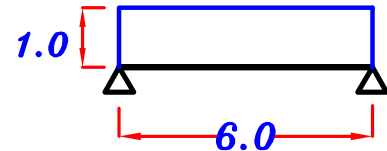
$$w_a = g_a + p_a = 8.12 + 2.50 = 10.62 \text{ kN/m}$$

$$R_1 = g_a * \text{Spacing} = 8.12 * 6.0 = 48.72 \text{ kN} \text{ ----- D.L.}$$

$$= w_a * \text{Spacing} = 10.62 * 6.0 = 63.72 \text{ kN} \text{ ----- T.L.}$$

$$R_1 = 48.72 \text{ kN} \text{ ----- D.L.}$$

$$= 63.72 \text{ kN} \text{ ----- T.L.}$$



B₂

For Trapezoid $C_a = 1 - \frac{1}{2} \left(\frac{L_s}{L}\right) = 1 - \frac{1}{2} \left(\frac{5}{6}\right) = 0.583$

$$g_a = 0.W. + g_s \frac{L_s}{2} + C_a g_s \frac{L_s}{2} = 3.12 + (5.0) \left(\frac{2}{2}\right) + 0.583 (5.0) \left(\frac{5}{2}\right) = 15.4 \text{ kN/m}$$

$$p_a = p_s \frac{L_s}{2} + C_a p_s \frac{L_s}{2} = (2.50) \left(\frac{2}{2}\right) + 0.583 (2.50) \left(\frac{5}{2}\right) = 6.14 \text{ kN/m}$$

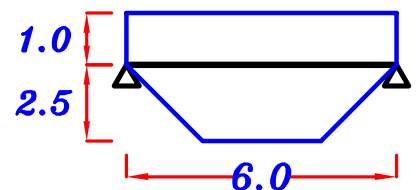
$$w_a = g_a + p_a = 15.4 + 6.14 = 21.54 \text{ kN/m}$$

$$R_2 = g_a * \text{Spacing} = 15.4 * 6.0 = 92.40 \text{ kN} \text{ ----- D.L.}$$

$$= w_a * \text{Spacing} = 21.54 * 6.0 = 129.2 \text{ kN} \text{ ----- T.L.}$$

$$R_2 = 92.40 \text{ kN} \text{ ----- D.L.}$$

$$= 129.2 \text{ kN} \text{ ----- T.L.}$$



B₃

For Trapezoid ① $C_a = 1 - \frac{1}{2} \left(\frac{L_s}{L}\right) = 1 - \frac{1}{2} \left(\frac{5}{6}\right) = 0.583$

For Trapezoid ② $C_a = 1 - \frac{1}{2} \left(\frac{L_s}{L}\right) = 1 - \frac{1}{2} \left(\frac{3.5}{6}\right) = 0.708$

$$g_a = 0.W. + C_a g_s \frac{L_s}{2} + C_a g_s \frac{L_s}{2} = 3.12 + 0.583 (5.0) \left(\frac{5}{2}\right) + 0.708 (5.0) \left(\frac{3.5}{2}\right) = 16.6 \text{ kN/m}$$

$$p_a = C_a p_s \frac{L_s}{2} + C_a p_s \frac{L_s}{2} = 0.583 (2.50) \left(\frac{5}{2}\right) + 0.708 (2.50) \left(\frac{3.5}{2}\right) = 6.74 \text{ kN/m}$$

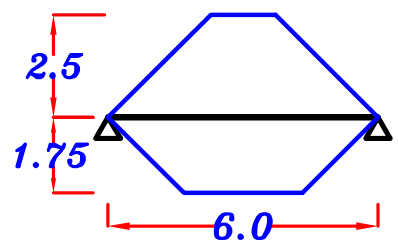
$$w_a = g_a + p_a = 16.6 + 6.74 = 23.34 \text{ kN/m}$$

$$R_3 = g_a * \text{Spacing} = 16.6 * 6.0 = 99.6 \text{ kN} \text{ ----- D.L.}$$

$$= w_a * \text{Spacing} = 23.34 * 6.0 = 140 \text{ kN} \text{ ----- T.L.}$$

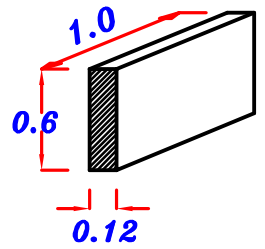
$$R_3 = 99.6 \text{ kN} \text{ ----- D.L.}$$

$$= 140 \text{ kN} \text{ ----- T.L.}$$

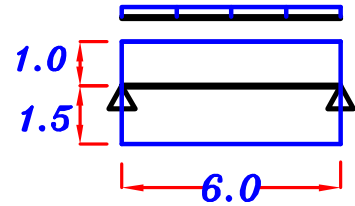


B₄

$$O.W. \text{ of the Fence} = (0.12) (0.6) (1.0) (25) = 1.80 \text{ kN/m}$$



$$g_a = O.W. (beam) + O.W. (Fence) + g_s \frac{L_s}{2} + g_s L_c$$
$$= 3.12 + 1.80 + (5.0) \left(\frac{2}{2}\right) + (5.0) (1.5) = 17.42 \text{ kN/m}$$



$$p_a = p_s \frac{L_s}{2} + p_s L_c = (2.50) \left(\frac{2}{2}\right) + (2.50) (1.5) = 6.25 \text{ kN/m}$$

$$w_a = g_a + p_a = 17.42 + 6.25 = 23.67 \text{ kN/m}$$

$$R_4 = g_a * \text{Spacing} = 17.42 * 6.0 = 104.5 \text{ kN} \text{ ----- D.L.}$$

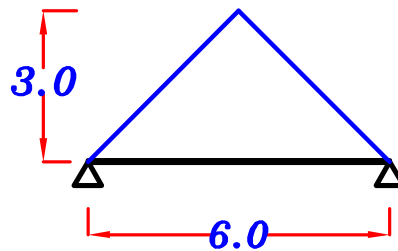
$$= w_a * \text{Spacing} = 23.67 * 6.0 = 142.0 \text{ kN} \text{ ----- T.L.}$$

$$R_4 = 104.5 \text{ kN} \text{ ----- D.L.}$$
$$= 142.0 \text{ kN} \text{ ----- T.L.}$$

B₅

For Triangle

$$C_a = \frac{1}{2}, \quad C_e = \frac{2}{3}$$



$$g_a = O.W. + C_a g_s \frac{L_s}{2} = 3.12 + \left(\frac{1}{2}\right) (5.0) \left(\frac{6.0}{2}\right) = 10.6 \text{ kN/m}$$

$$p_a = C_a p_s \frac{L_s}{2} = \left(\frac{1}{2}\right) (2.50) \left(\frac{6.0}{2}\right) = 3.75 \text{ kN/m}$$

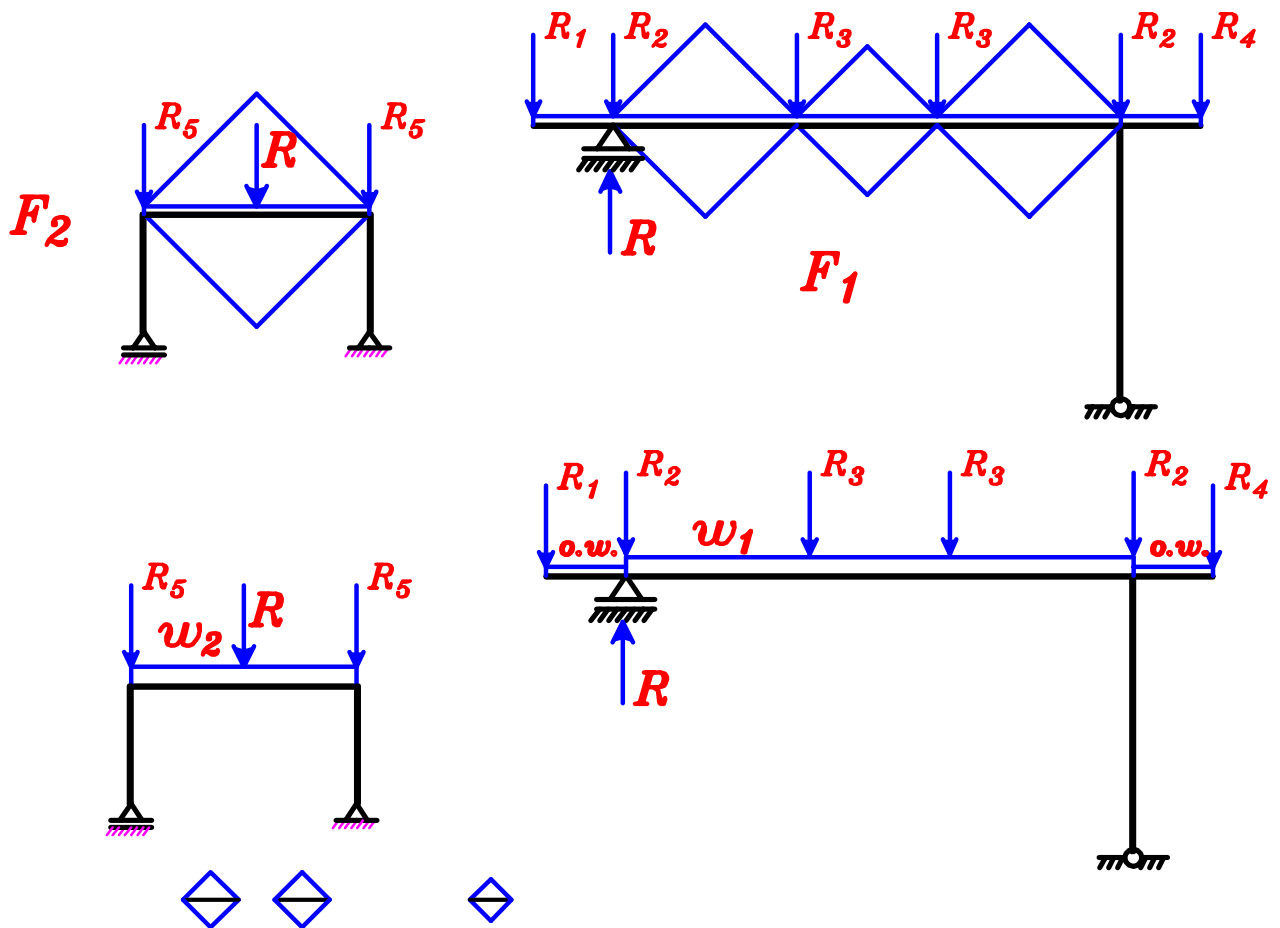
$$w_a = g_a + p_a = 10.6 + 3.75 = 14.35 \text{ kN/m}$$

$$R_5 = g_a * \text{Spacing} = 10.6 * 6.0 = 63.6 \text{ kN} \text{ ----- D.L.}$$

$$= w_a * \text{Spacing} = 14.35 * 6.0 = 86.1 \text{ kN} \text{ ----- T.L.}$$

$$R_5 = 63.6 \text{ kN} \text{ ----- D.L.}$$
$$= 86.1 \text{ kN} \text{ ----- T.L.}$$

Loads on the Frame.



$$\frac{\sum \text{area}}{\text{span}} = \frac{4\left(\frac{1}{2}\right)(5.0)(2.5) + 2\left(\frac{1}{2}\right)(3.5)(1.75)}{13.5} = 2.305$$

w_1 Load For shear = Load For Moment

$$g_1 = 0.W. + \frac{\sum \text{area}}{\text{span}} * g_s = 10.0 + (2.305)(5.0) = 21.52 \text{ kN/m}$$

$$p_1 = \frac{\sum \text{area}}{\text{span}} * p_s = (2.305)(2.50) = 5.76 \text{ kN/m}$$

$$w_1 = g_1 + p_1 = 21.52 + 5.76 = 27.28 \text{ kN/m}$$

w_2

$$g_a = 0.W. + 2 C_a g_s \frac{L_s}{2} = 5.25 + 2\left(\frac{1}{2}\right)(5.0)\left(\frac{6}{2}\right) = 20.25 \text{ kN/m}$$

$$p_a = 2 C_a p_s \frac{L_s}{2} = 2\left(\frac{1}{2}\right)(2.50)\left(\frac{6}{2}\right) = 7.50 \text{ kN/m}$$

$$w_a = g_a + p_a = 20.25 + 7.50 = 27.75 \text{ kN/m}$$

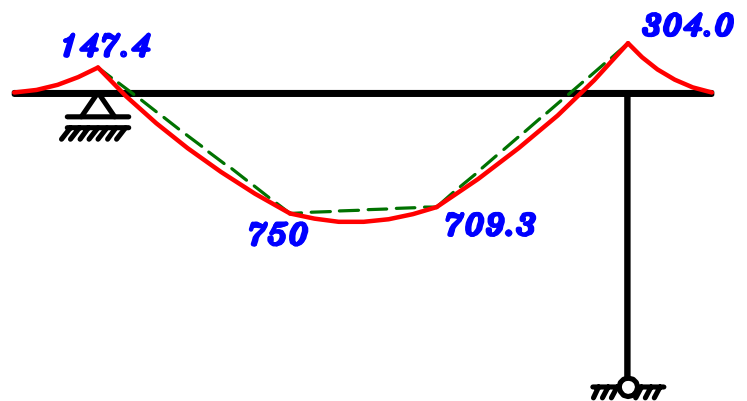
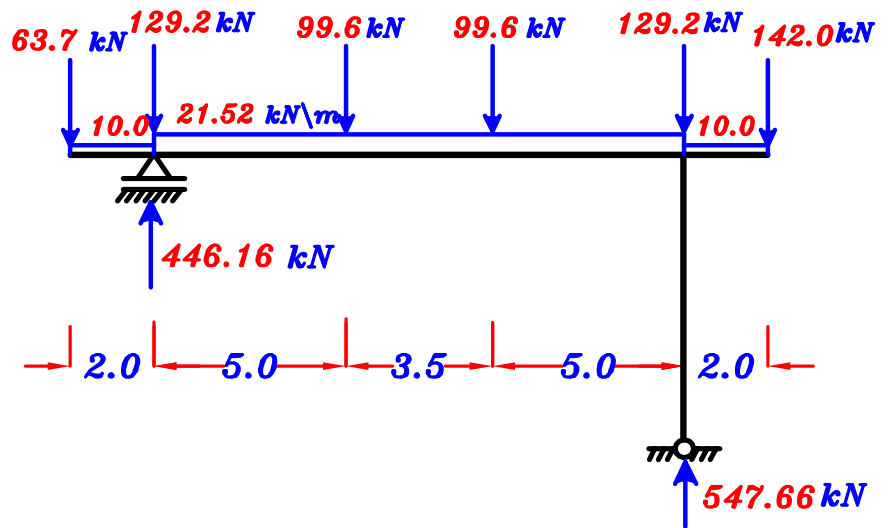
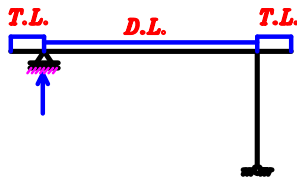
$$g_e = 0.W. + 2 C_e g_s \frac{L_s}{2} = 5.25 + 2\left(\frac{2}{3}\right)(5.0)\left(\frac{6}{2}\right) = 25.35 \text{ kN/m}$$

$$p_e = 2 C_e p_s \frac{L_s}{2} = 2\left(\frac{2}{3}\right)(2.50)\left(\frac{6}{2}\right) = 10.0 \text{ kN/m}$$

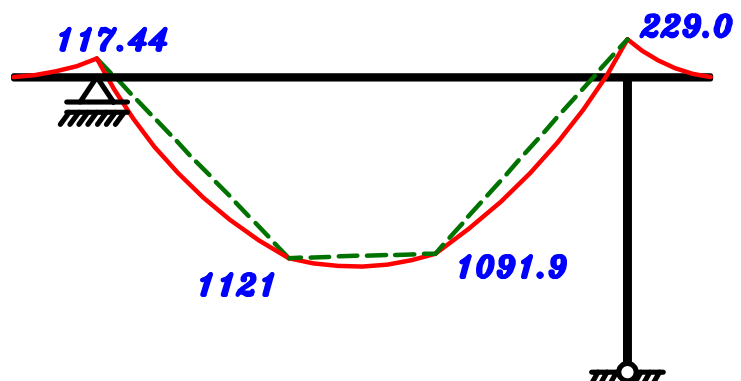
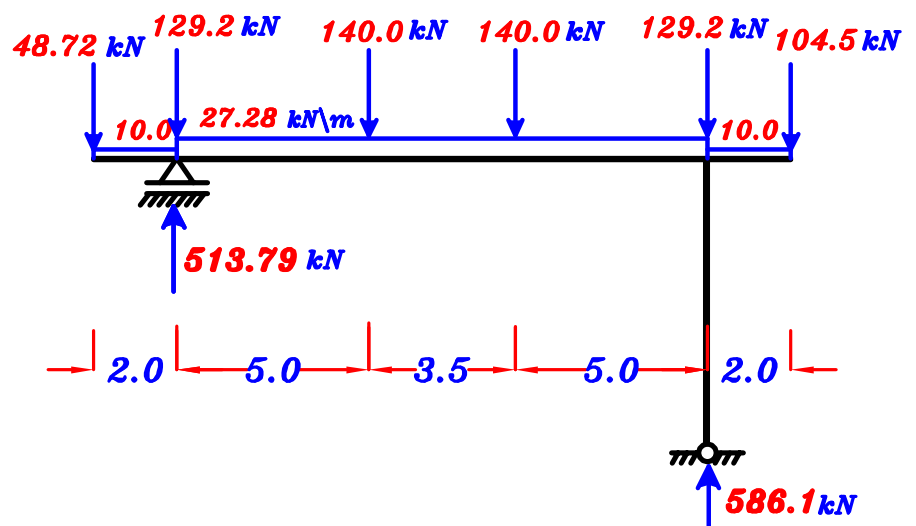
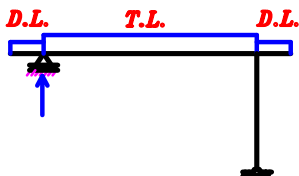
$$w_e = g_e + p_e = 25.35 + 10.0 = 35.35 \text{ kN/m}$$

max-max B.M.D. on Frame (F₁)

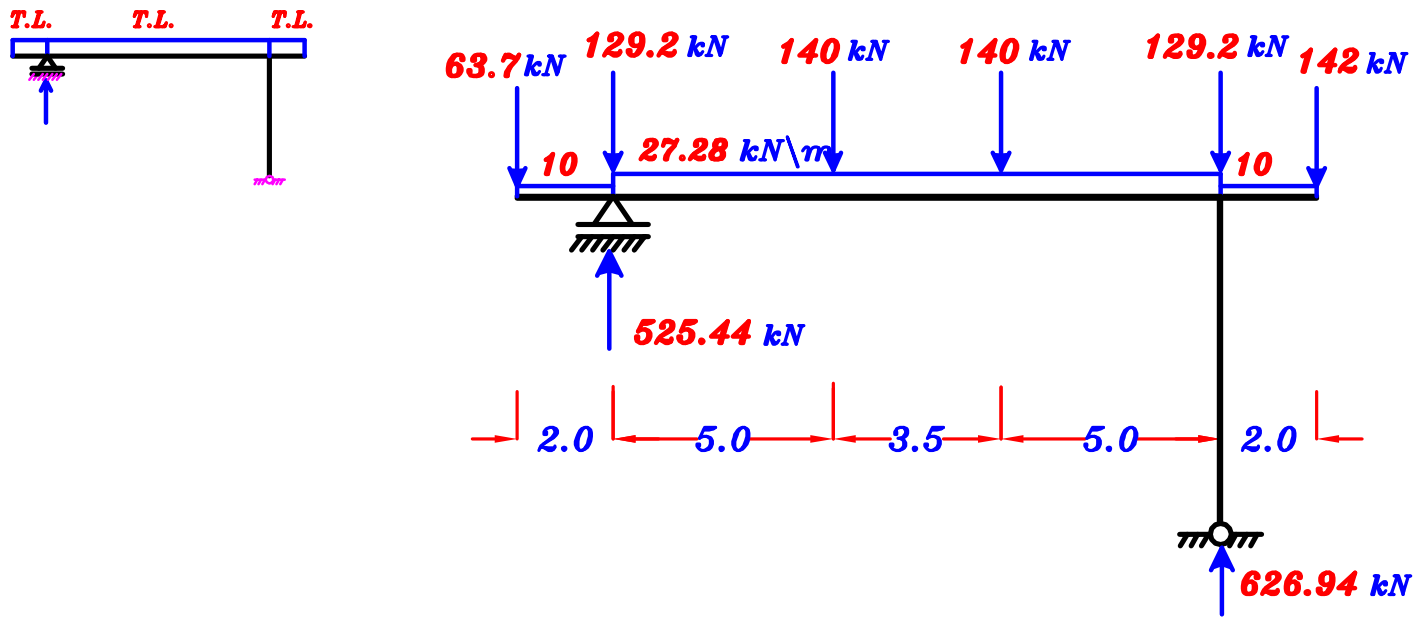
1- max. -ve B.M.D.



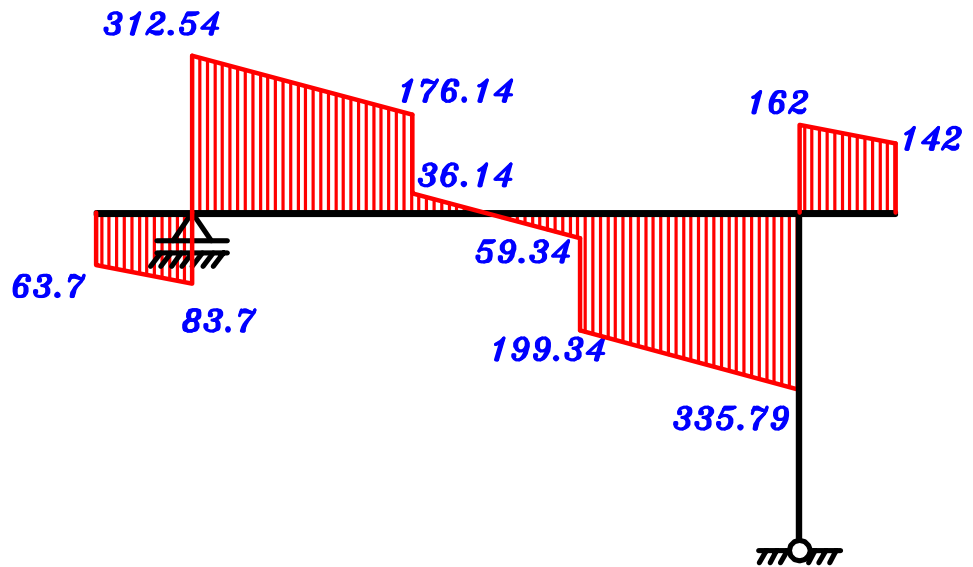
2- max. +ve B.M.D.



max-max S.F.D. & N.F.D. For Frame (F1)



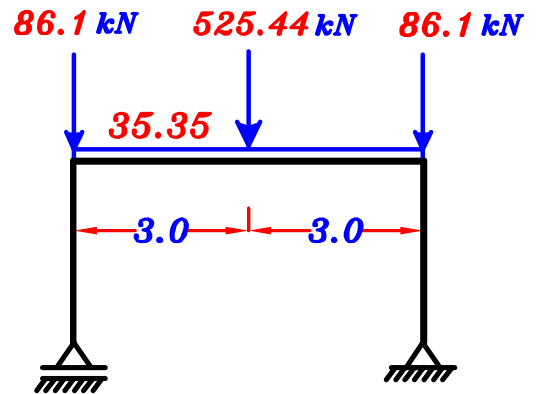
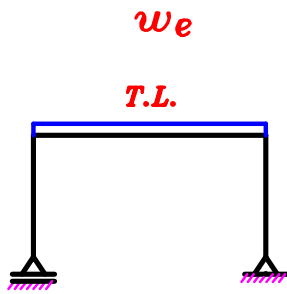
S.F.D.



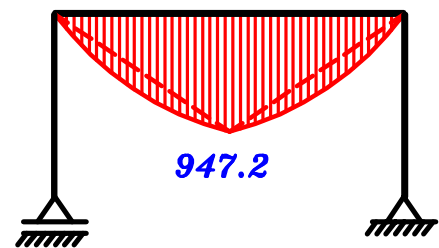
N.F.D.



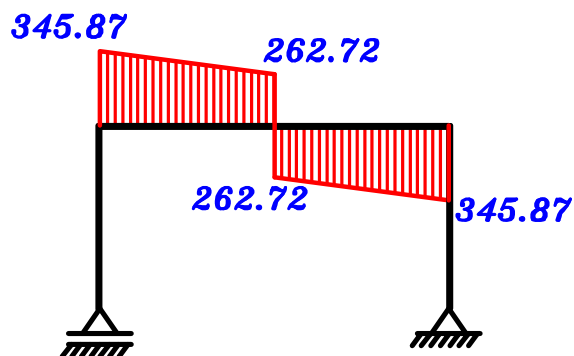
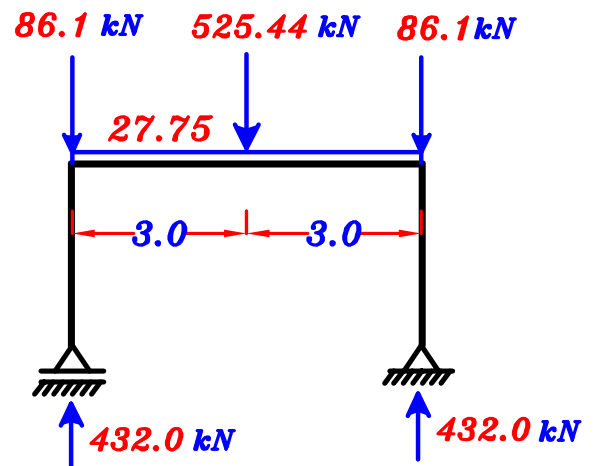
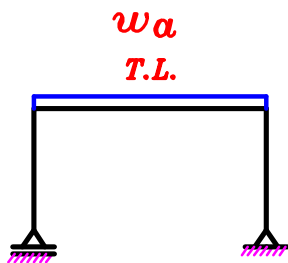
max-max B.M.D. on Frame (F2)



B.M.D.



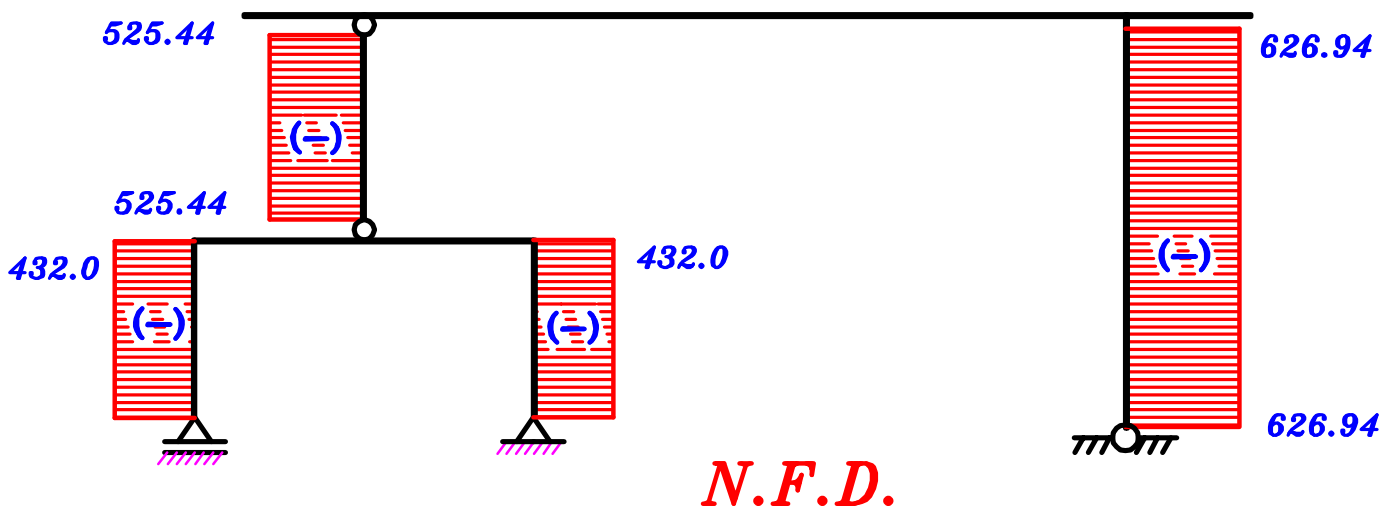
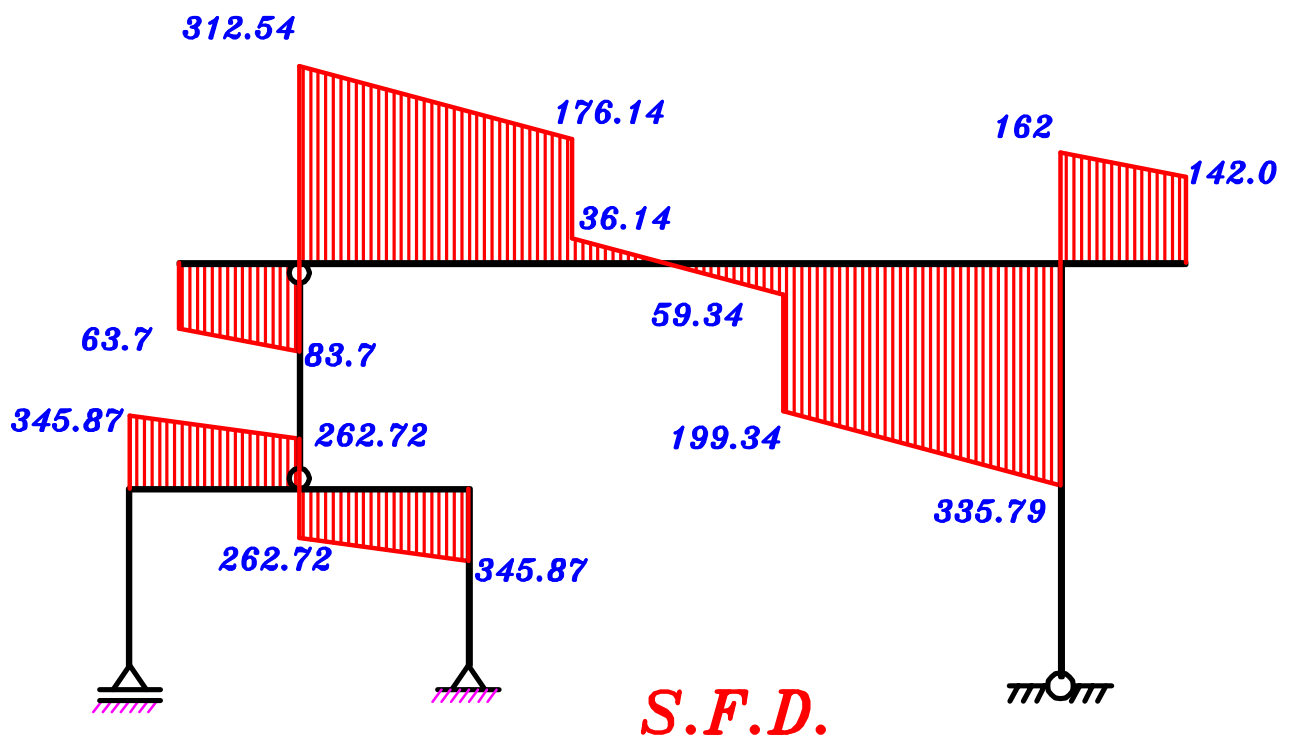
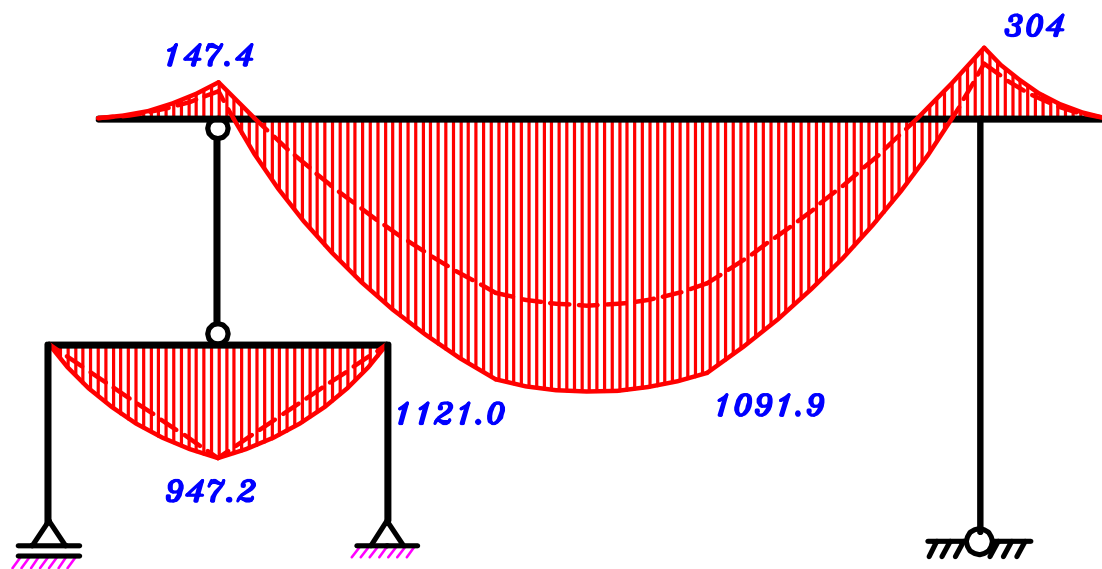
max-max S.F.D. & N.F.D. For Frame (F2)



S.F.D.



N.F.D.



Example.

Figure 1 shows a sectional elevation of a reinforced concrete roof. The roof is covered by reinforced concrete slabs supported by a system of secondary beams and Frames (**F**) spaced at **6.0 m**. For an intermediate panel, it is required to :

- 1** – Draw a structural plan showing the pattern of load distribution.
- 2** – Calculate the equivalent working loads For shear and moment For all secondary beams (B_1 , B_2 , B_3 , B_4 & B_5) and an intermediate Frame (F) .
- 3** – Draw the **N.F.D.** (total load) , **S.F.D.** (total load) and **max-max B.M.D.** For an intermediate Frame (F) , **using ultimate limit loads.**

Data:

- Slab thickness $t_s = 140 \text{ mm}$
- Live load $= 2.0 \text{ kN/m}^2$ HL. projection.
- Floor cover $= 1.0 \text{ kN/m}^2$
- Own weight of beams $= 3.0 \text{ kN/m}$
- Own weight of Frame $= 6.0 \text{ kN/m}$

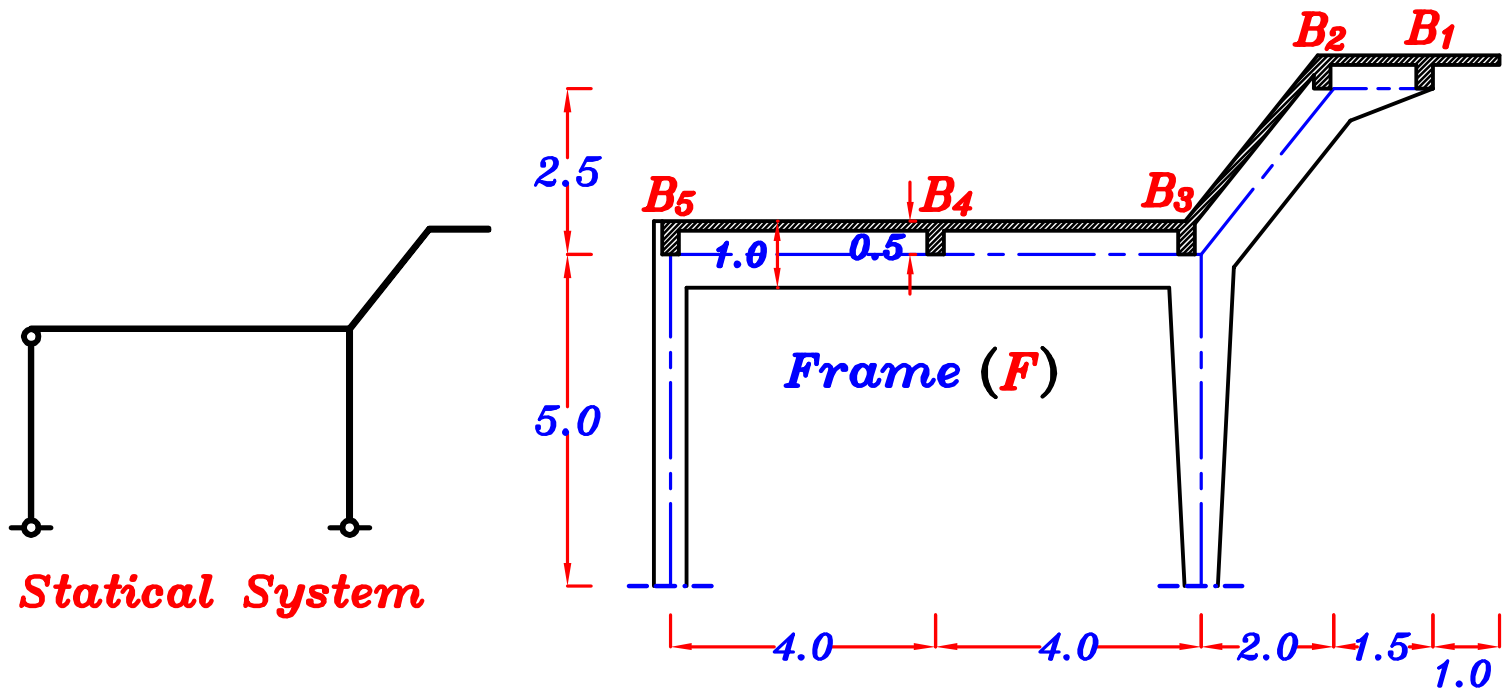
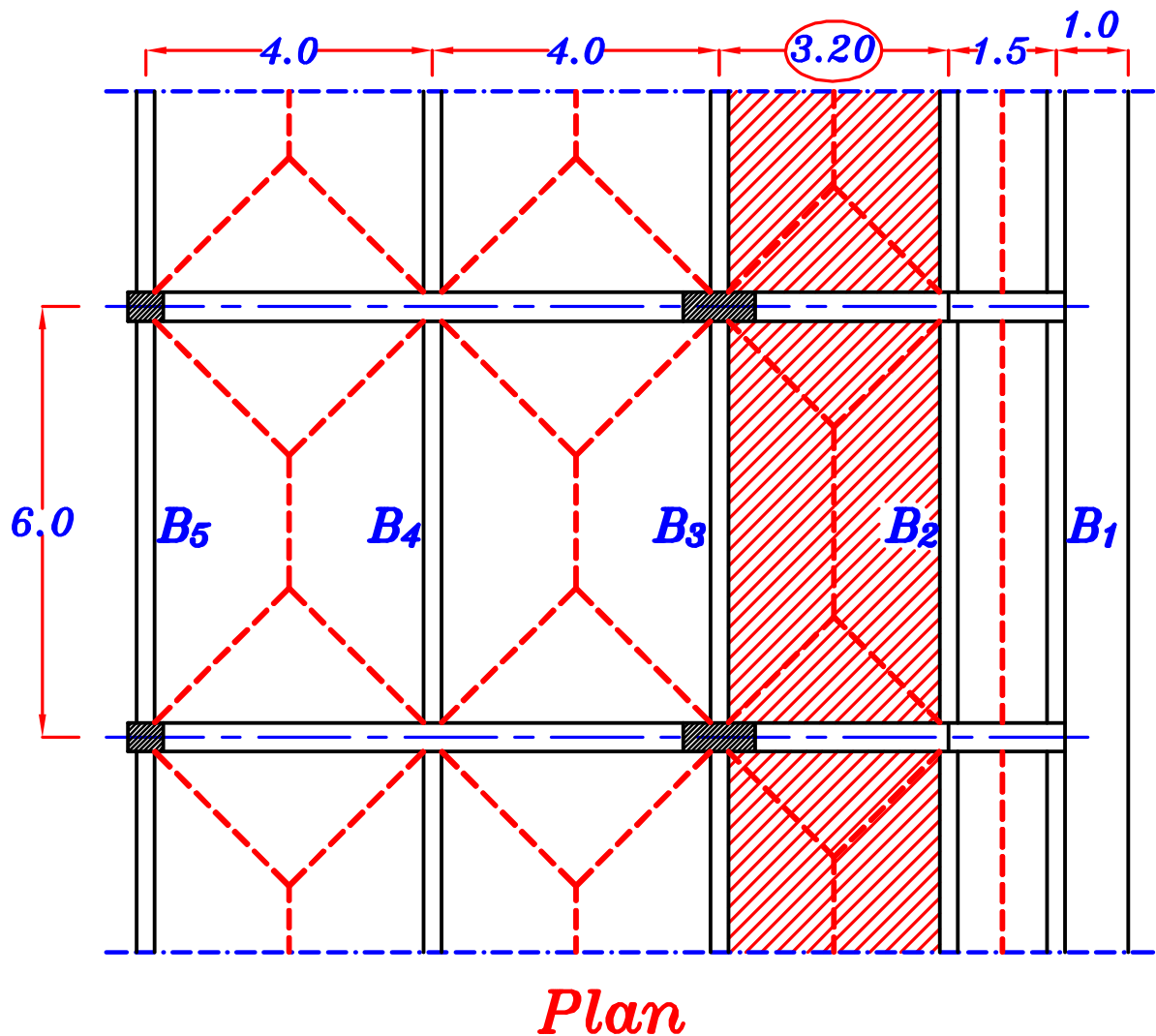
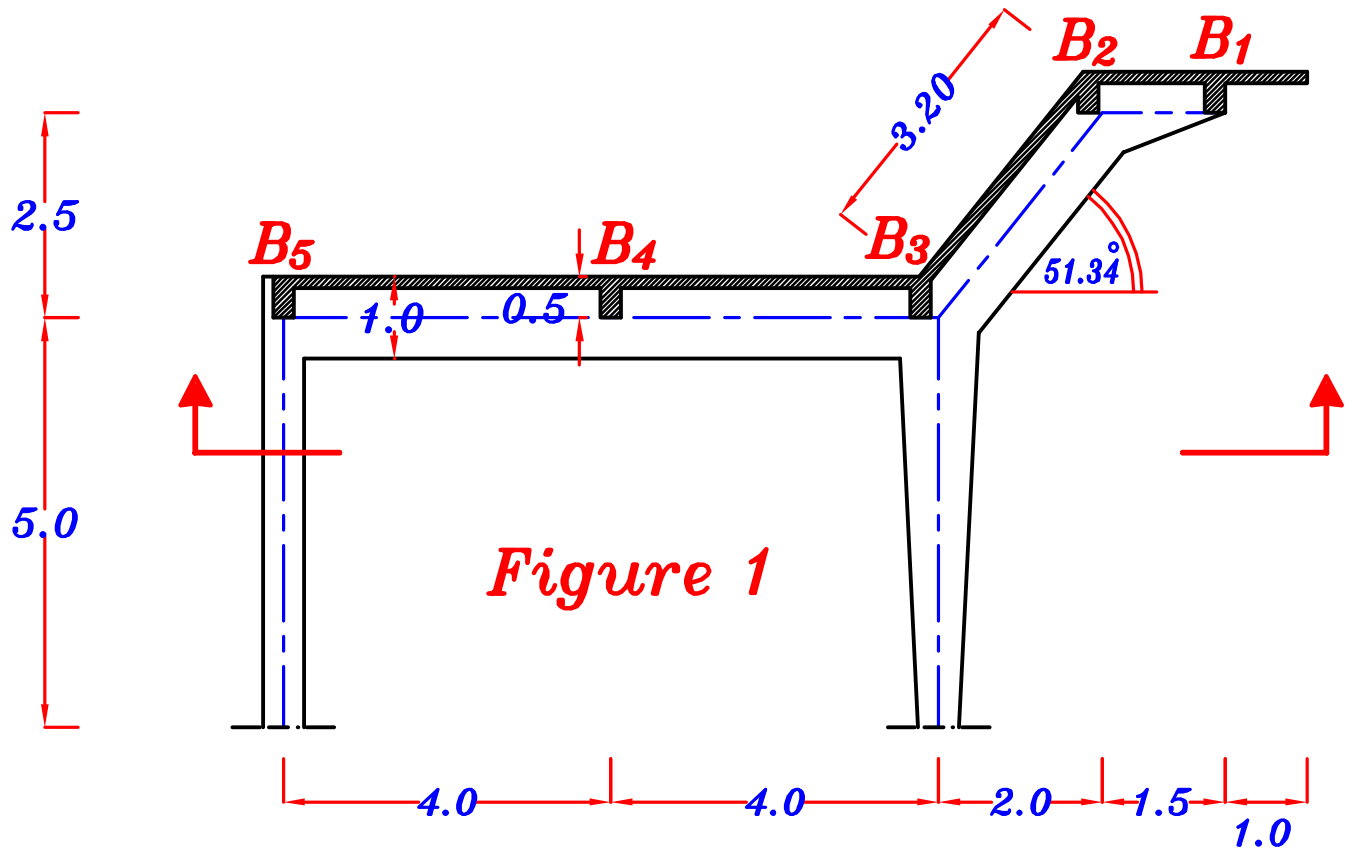


Figure 1

1 – Draw a structural plan showing the pattern of load distribution.



2- Calculate the equivalent working loads For shear and moment For all secondary beams (B_1 , B_2 , B_3 , B_4 & B_5) and an intermediate Frame (F) .

$$\underline{\underline{g_s, p_s}}$$

$$g_s = t_s * \gamma_c + F.C. = 0.14 * 25 + 1.0 = 4.50 \text{ kN/m}^2$$

$$p_{sh} = L.L. = 2.0 \text{ kN/m}^2 \text{ ----- HL. Slab.}$$

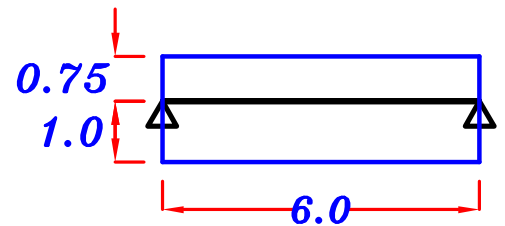
$$p_{si} = L.L. * \cos \theta = 2.0 * \cos 51.34^\circ = 1.25 \text{ kN/m}^2 \text{ ----- Inclined Slab.}$$

$$g_s = 4.50 \text{ kN/m}^2, \quad p_{sh} = 2.0 \text{ kN/m}^2, \quad p_{si} = 1.25 \text{ kN/m}^2$$

$$\underline{\underline{B_1}}$$

$$\underline{\underline{\text{Load For Shear.}}} = \underline{\underline{\text{Load For Moment.}}}$$

$$\begin{aligned} g_a &= O.W. + g_s \frac{L_s}{2} + g_s L_c \\ &= 3.0 + (4.50) \left(\frac{1.5}{2} \right) + (4.50) (1.0) \\ &= 10.875 \text{ kN/m} \end{aligned}$$



$$p_a = p_{sh} \frac{L_s}{2} + p_{sh} L_c = (2.0) \left(\frac{1.5}{2} \right) + (2.0) (1.0) = 3.5 \text{ kN/m}$$

$$w_a = g_a + p_a = 10.875 + 3.5 = 14.375 \text{ kN/m}$$

$$R_1 = g_a * \text{Spacing} = 10.875 * 6.0 = 65.25 \text{ kN} \text{ ----- D.L.}$$

$$= w_a * \text{Spacing} = 14.375 * 6.0 = 86.25 \text{ kN} \text{ ----- T.L.}$$

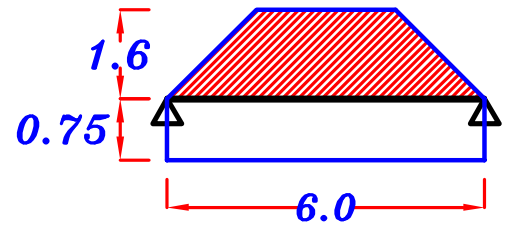
$$\begin{aligned} R_1 &= 65.25 \text{ kN} \text{ ----- D.L.} \\ &= 86.25 \text{ kN} \text{ ----- T.L.} \end{aligned}$$

B₂


For Trapezoid

$$C_a = 1 - \frac{1}{2} \left(\frac{L_s}{L} \right) = 1 - \frac{1}{2} \left(\frac{3.20}{6} \right) = 0.733$$

$$C_e = 1 - \frac{1}{3} \left(\frac{L_s}{L} \right)^2 = 1 - \frac{1}{3} \left(\frac{3.20}{6} \right)^2 = 0.905$$



Load For Shear.



$$g_a = 0.W. + C_a g_s \frac{L_s}{2} + g_s \frac{L_s}{2}$$

$$= 3.0 + (0.733) (4.50) \left(\frac{3.2}{2} \right) + (4.50) \left(\frac{1.5}{2} \right) = 11.65 \text{ kN/m}$$

$$p_a = C_a p_{si} \frac{L_s}{2} + p_{sh} \frac{L_s}{2} = (0.733) (1.25) \left(\frac{3.2}{2} \right) + (2.0) \left(\frac{1.5}{2} \right) = 2.96 \text{ kN/m}$$

$$w_a = g_a + p_a = 11.65 + 2.96 = 14.61 \text{ kN/m}$$

$$R_2 = g_a * \text{Spacing} = 11.65 * 6.0 = 69.9 \text{ kN} \text{ ----- D.L.}$$

$$= w_a * \text{Spacing} = 14.61 * 6.0 = 87.66 \text{ kN} \text{ ----- T.L.}$$

$$\begin{aligned} R_2 &= 69.9 \text{ kN} \text{ ---- D.L.} \\ &= 87.66 \text{ kN} \text{ ---- T.L.} \end{aligned}$$

Load For Moment.



$$g_e = 0.W. + C_e g_s \frac{L_s}{2} + g_s \frac{L_s}{2}$$

$$= 3.0 + (0.905) (4.50) \left(\frac{3.2}{2} \right) + (4.50) \left(\frac{1.5}{2} \right) = 12.89 \text{ kN/m}$$

$$p_e = C_e p_{si} \frac{L_s}{2} + p_{sh} \frac{L_s}{2} = (0.905) (1.25) \left(\frac{3.2}{2} \right) + (2.0) \left(\frac{1.5}{2} \right) = 3.31 \text{ kN/m}$$

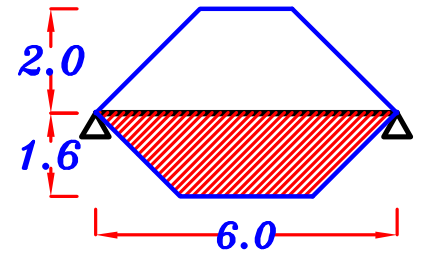
$$w_e = g_e + p_e = 12.89 + 3.31 = 16.20 \text{ kN/m}$$

B₃

For Trapezoid 1 Inclined

$$C_a = 1 - \frac{1}{2} \left(\frac{L_s}{L} \right) = 1 - \frac{1}{2} \left(\frac{3.20}{6} \right) = 0.733$$

$$C_e = 1 - \frac{1}{3} \left(\frac{L_s}{L} \right)^2 = 1 - \frac{1}{3} \left(\frac{3.20}{6} \right)^2 = 0.905$$



For Trapezoid 2 H.L.

$$C_a = 1 - \frac{1}{2} \left(\frac{L_s}{L} \right) = 1 - \frac{1}{2} \left(\frac{4.0}{6} \right) = 0.67$$

$$C_e = 1 - \frac{1}{3} \left(\frac{L_s}{L} \right)^2 = 1 - \frac{1}{3} \left(\frac{4.0}{6} \right)^2 = 0.85$$

Load For Shear.

$$g_a = 0.W. + C_a g_s \frac{L_s}{2} + C_a g_s \frac{L_s}{2}$$

$$= 3.0 + (0.733) (4.50) \left(\frac{3.2}{2} \right) + (0.67) (4.50) \left(\frac{4.0}{2} \right) = 14.30 \text{ kN/m}$$

$$p_a = C_a p_{si} \frac{L_s}{2} + C_a p_{sh} \frac{L_s}{2} = (0.733) (1.25) \left(\frac{3.2}{2} \right) + (0.67) (2.0) \left(\frac{4.0}{2} \right) = 4.14 \text{ kN/m}$$

$$w_a = g_a + p_a = 14.30 + 4.14 = 18.44 \text{ kN/m}$$

$$R_3 = g_a * \text{Spacing} = 14.30 * 6.0 = 85.8 \text{ kN} \text{ ----- D.L.}$$

$$= w_a * \text{Spacing} = 18.44 * 6.0 = 110.64 \text{ kN} \text{ ----- T.L.}$$

$$\boxed{R_3 = 85.8 \text{ kN} \text{ --- D.L.}} \\ \boxed{= 110.64 \text{ kN} \text{ --- T.L.}}$$

Load For Moment.

$$g_e = 0.W. + C_e g_s \frac{L_s}{2} + C_e g_s \frac{L_s}{2}$$

$$= 3.0 + (0.905) (4.50) \left(\frac{3.2}{2} \right) + (0.85) (4.50) \left(\frac{4.0}{2} \right) = 17.16 \text{ kN/m}$$

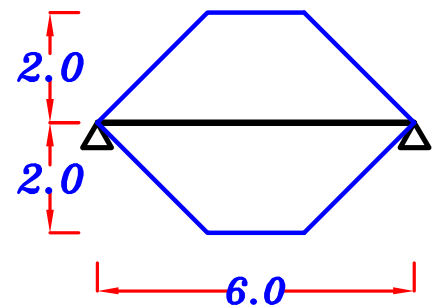
$$p_e = C_e p_{si} \frac{L_s}{2} + C_e p_{sh} \frac{L_s}{2} = (0.905) (1.25) \left(\frac{3.2}{2} \right) + (0.85) (2.0) \left(\frac{4.0}{2} \right) = 5.21 \text{ kN/m}$$

$$w_e = g_e + p_e = 17.16 + 5.21 = 22.37 \text{ kN/m}$$

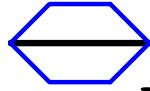
B_4 For Trapezoid 2 H.L.

$$C_a = 1 - \frac{1}{2} \left(\frac{L_s}{L} \right) = 1 - \frac{1}{2} \left(\frac{4.0}{6} \right) = 0.67$$

$$C_e = 1 - \frac{1}{3} \left(\frac{L_s}{L} \right)^2 = 1 - \frac{1}{3} \left(\frac{4.0}{6} \right)^2 = 0.85$$



Load For Shear.



$$g_a = 0.W. + 2 C_a g_s \frac{L_s}{2} = 3.0 + 2 (0.67) (4.50) \left(\frac{4.0}{2} \right) = 15.06 \text{ kN}\backslash\text{m}$$

$$p_a = 2 C_a p_{sh} \frac{L_s}{2} = 2 (0.67) (2.0) \left(\frac{4.0}{2} \right) = 5.36 \text{ kN}\backslash\text{m}$$

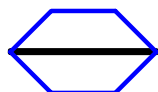
$$w_a = g_a + p_a = 15.06 + 5.36 = 20.42 \text{ kN}\backslash\text{m}$$

$$R_4 = g_a * \text{Spacing} = 15.06 * 6.0 = 90.36 \text{ kN} \text{ ----- D.L.}$$

$$= w_a * \text{Spacing} = 20.42 * 6.0 = 122.52 \text{ kN} \text{ ----- T.L.}$$

$$R_4 = 90.36 \text{ kN} \text{ --- D.L.}$$
$$= 122.52 \text{ kN} \text{ --- T.L.}$$

Load For Moment.



$$g_e = 0.W. + 2 C_e g_s \frac{L_s}{2} = 3.0 + 2 (0.85) (4.50) \left(\frac{4.0}{2} \right) = 18.30 \text{ kN}\backslash\text{m}$$

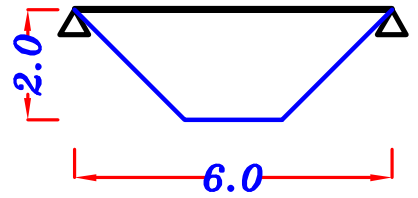
$$p_e = 2 C_e p_{sh} \frac{L_s}{2} = 2 (0.85) (2.0) \left(\frac{4.0}{2} \right) = 6.80 \text{ kN}\backslash\text{m}$$

$$w_e = g_e + p_e = 18.30 + 6.80 = 25.10 \text{ kN}\backslash\text{m}$$

B₅ For Trapezoid 2 H.L.

$$C_a = 1 - \frac{1}{2} \left(\frac{L_s}{L} \right) = 1 - \frac{1}{2} \left(\frac{4.0}{6} \right) = 0.67$$

$$C_e = 1 - \frac{1}{3} \left(\frac{L_s}{L} \right)^2 = 1 - \frac{1}{3} \left(\frac{4.0}{6} \right)^2 = 0.85$$



Load For Shear.



$$g_a = 0.W. + C_a g_s \frac{L_s}{2} = 3.0 + (0.67) (4.50) \left(\frac{4.0}{2} \right) = 9.03 \text{ kN/m}$$

$$p_a = C_a p_{sh} \frac{L_s}{2} = (0.67) (2.0) \left(\frac{4.0}{2} \right) = 2.68 \text{ kN/m}$$

$$w_a = g_a + p_a = 9.03 + 2.68 = 11.71 \text{ kN/m}$$

$$R_5 = g_a * \text{Spacing} = 9.03 * 6.0 = 54.18 \text{ kN} \text{ ---- D.L.}$$

$$= w_a * \text{Spacing} = 11.71 * 6.0 = 70.26 \text{ kN} \text{ ---- T.L.}$$

$$R_5 = 54.18 \text{ kN} \text{ ---- D.L.}$$
$$= 70.26 \text{ kN} \text{ ---- T.L.}$$

Load For Moment.

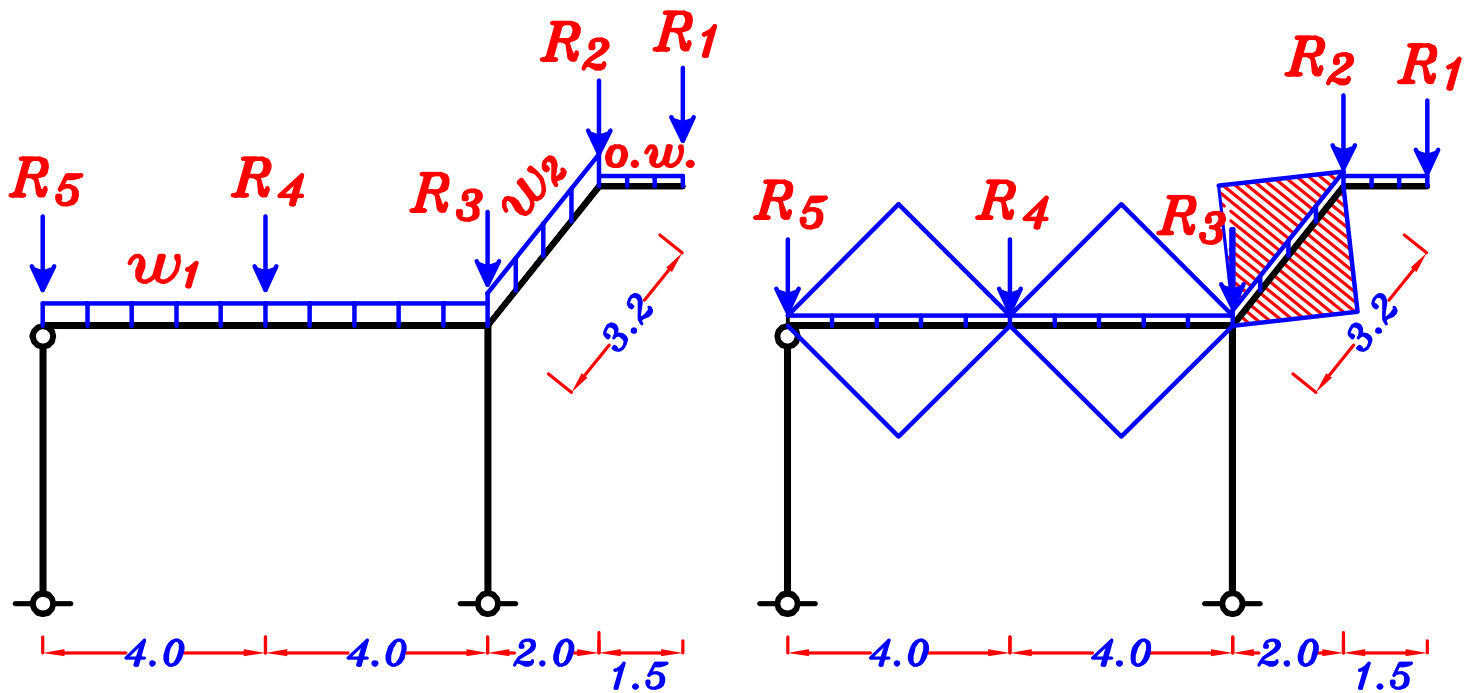


$$g_e = 0.W. + C_e g_s \frac{L_s}{2} = 3.0 + (0.85) (4.50) \left(\frac{4.0}{2} \right) = 10.65 \text{ kN/m}$$

$$p_e = C_e p_{sh} \frac{L_s}{2} = (0.85) (2.0) \left(\frac{4.0}{2} \right) = 3.40 \text{ kN/m}$$

$$w_e = g_e + p_e = 10.65 + 3.40 = 14.05 \text{ kN/m}$$

3- Draw the N.F.D. (total load), S.F.D. (total load) and max-max B.M.D. For an intermediate Frame (F), using ultimate limit loads.



w_1

$$\frac{\sum \text{area}}{\text{span}} = \frac{4 \left(\frac{1}{2} (4.0) (2.0) \right)}{8.0} = 2.0$$

$$g_{1a} = g_{1e} = 0.W. + \frac{\sum \text{area}}{\text{span}} * g_s = 6.0 + (2.0)(4.50) = 15.0 \text{ kN/m}$$

$$p_{1a} = p_{1e} = \frac{\sum \text{area}}{\text{span}} * p_{sh} = (2.0)(2.0) = 4.0 \text{ kN/m}$$

$$w_{1a} = w_{1e} = g_a + p_a = 15.0 + 4.0 = 19.0 \text{ kN/m}$$

w_2

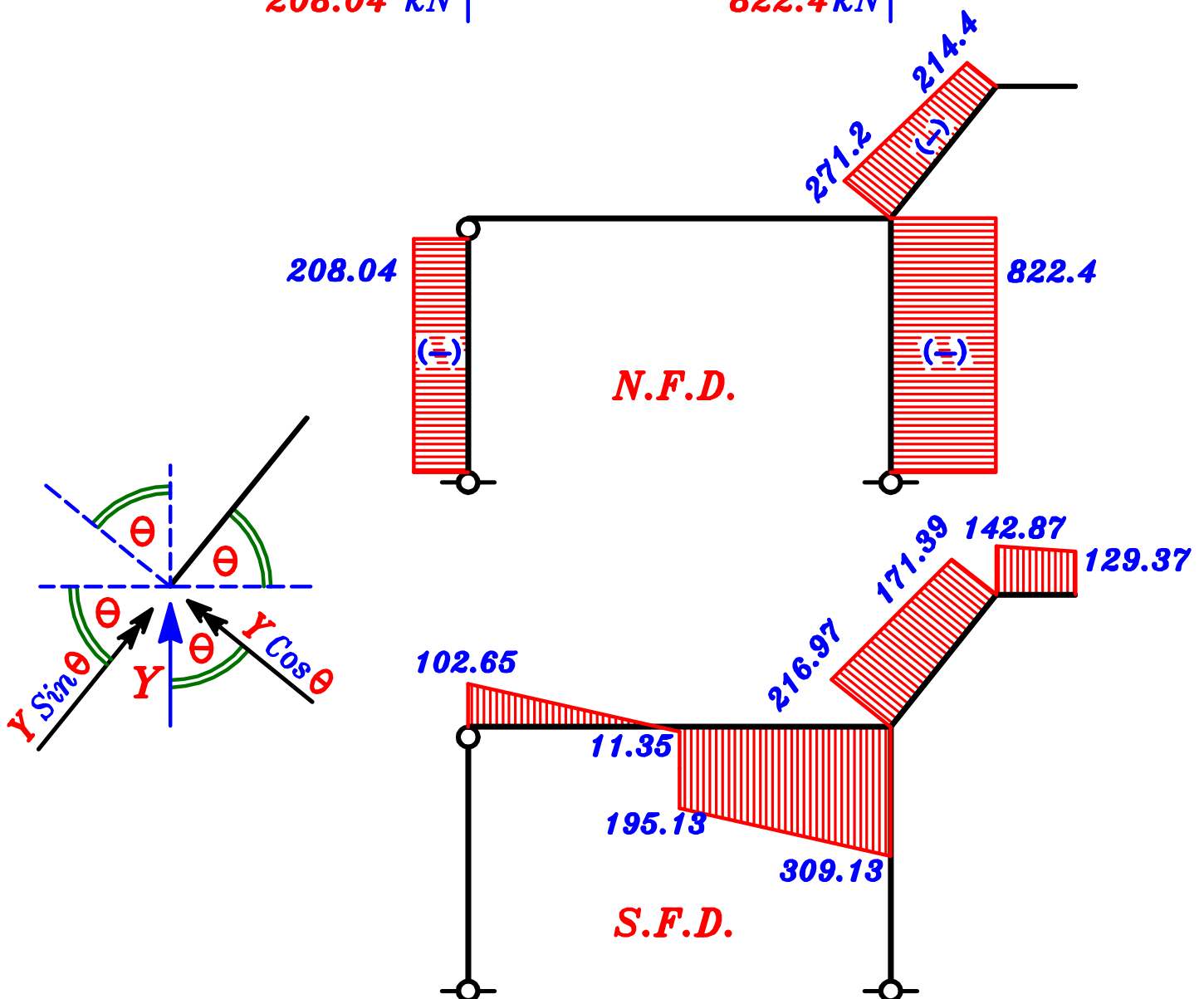
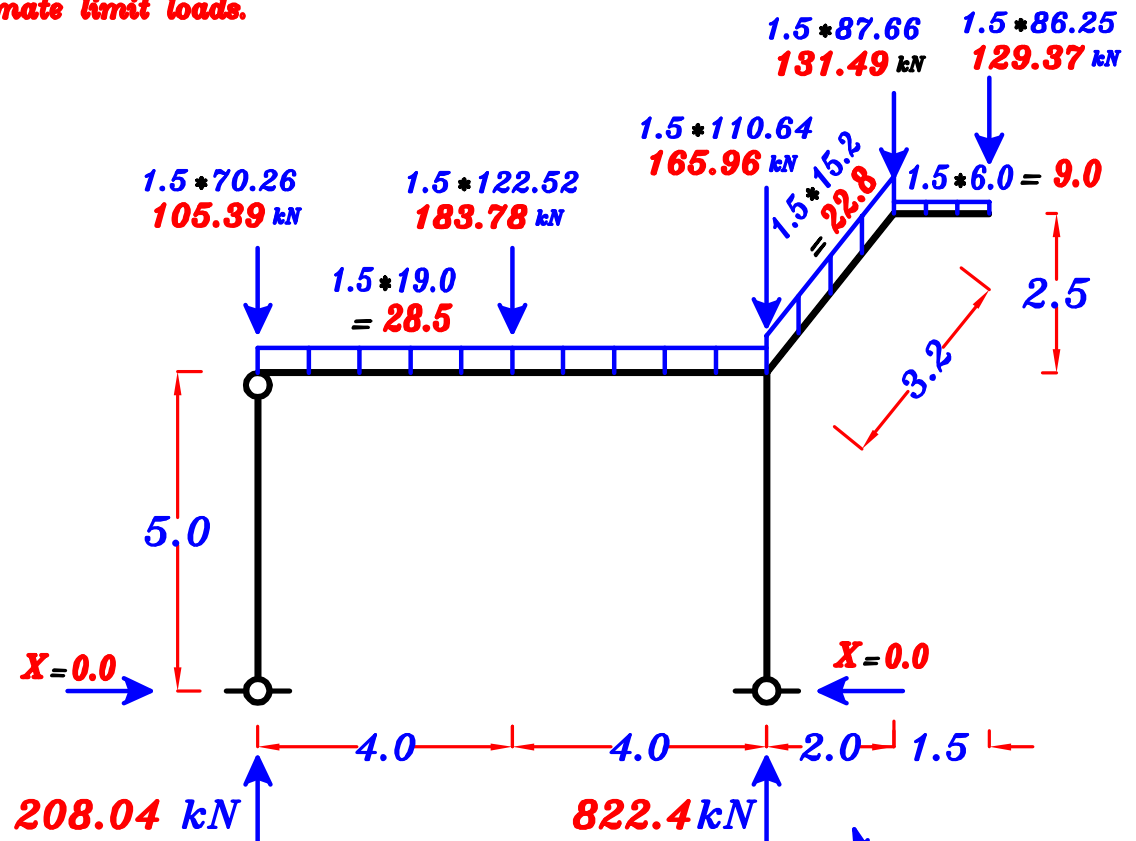
$$\frac{\sum \text{area}}{\text{span}} = \frac{2 \left(\frac{1}{2} (3.2) (1.6) \right)}{3.2} = 1.60$$

$$g_{2a} = g_{2e} = 0.W. + \frac{\sum \text{area}}{\text{span}} * g_s = 6.0 + (1.60)(4.50) = 13.2 \text{ kN/m}$$

$$p_{2a} = p_{2e} = \frac{\sum \text{area}}{\text{span}} * p_{si} = (1.60)(1.25) = 2.0 \text{ kN/m}$$

$$w_{2a} = w_{2e} = g_a + p_a = 13.2 + 2.0 = 15.2 \text{ kN/m}$$

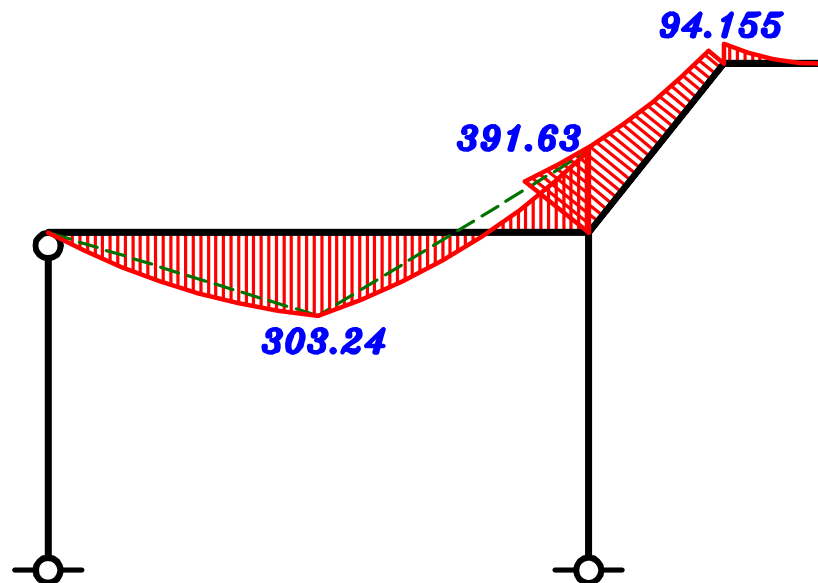
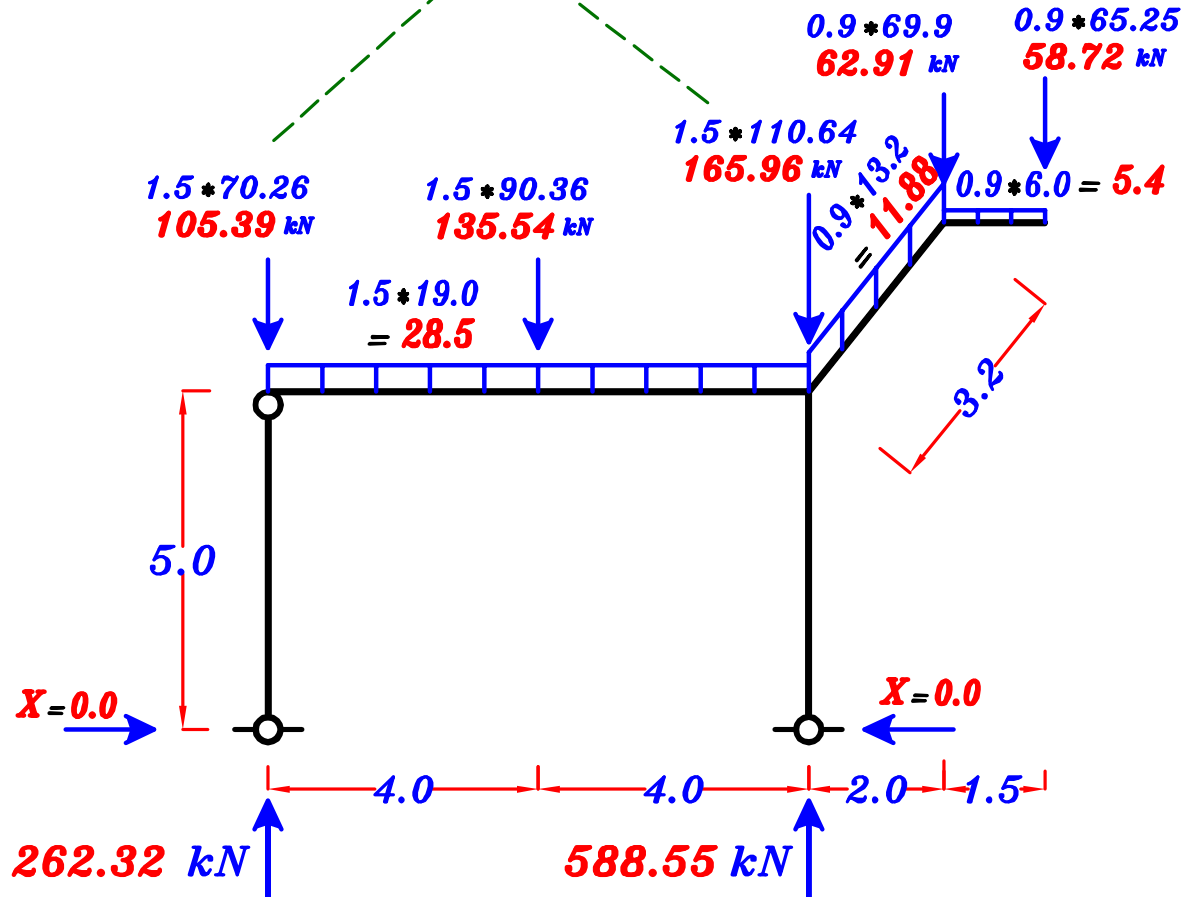
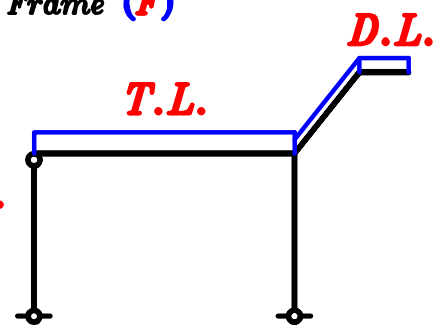
3- Draw the *N.F.D. (total load)*, *S.F.D. (total load)* For an intermediate Frame (*F*) using ultimate limit loads.



3- Draw the max-max B.M.D. For an intermediate Frame (F) using ultimate limit loads.

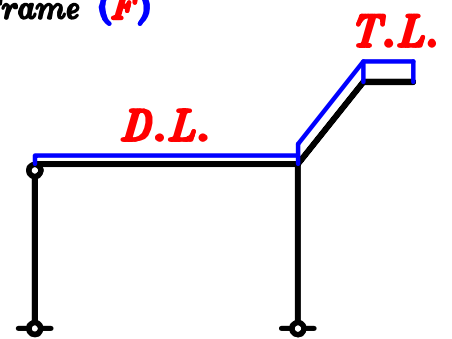
في جميع حالات التحميل نأخذ الحمل فوق العمود $T.L.$ لانه لن يؤثر على عزم ال $Frame$ و لكنه سيزيد من ال $Normal$ على العمود

max (+Ve) B.M.D.

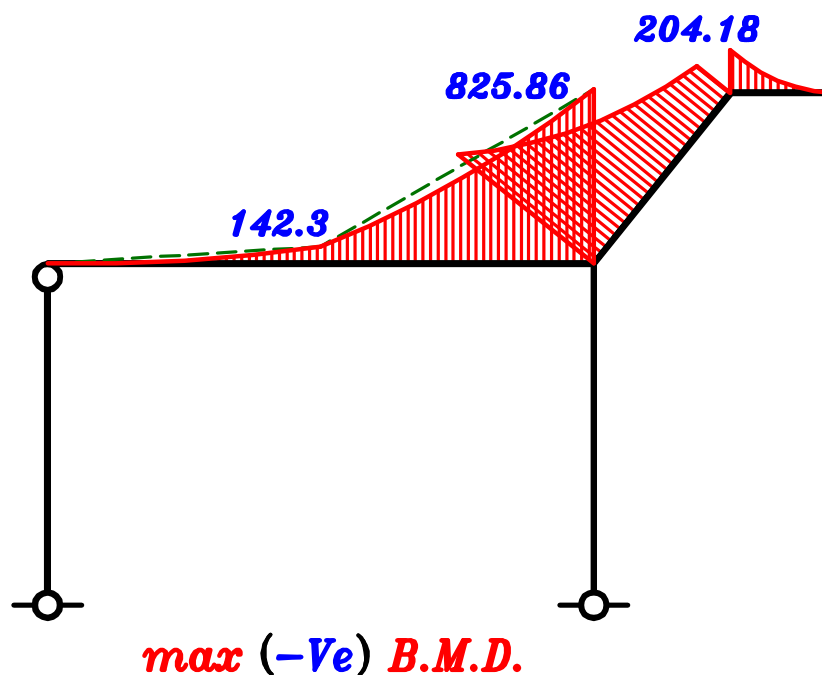
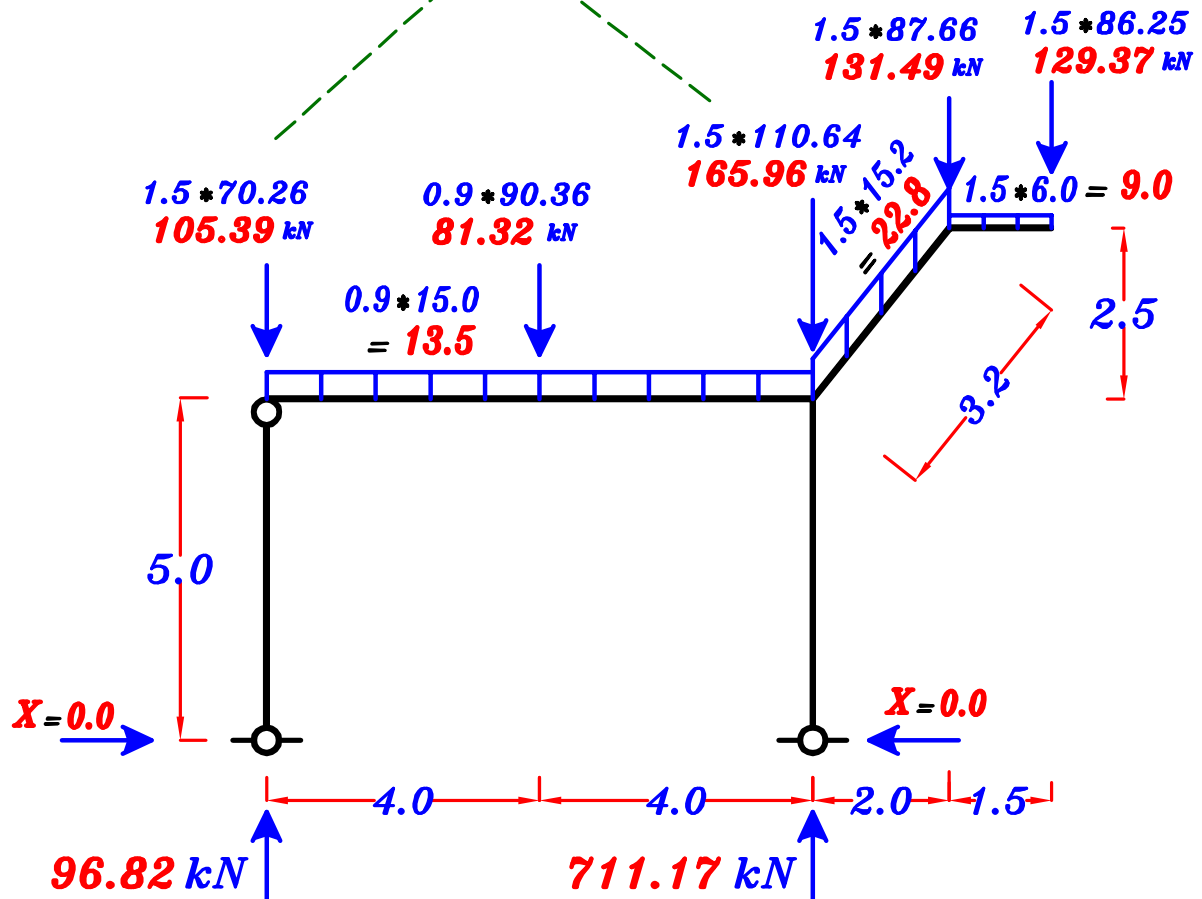


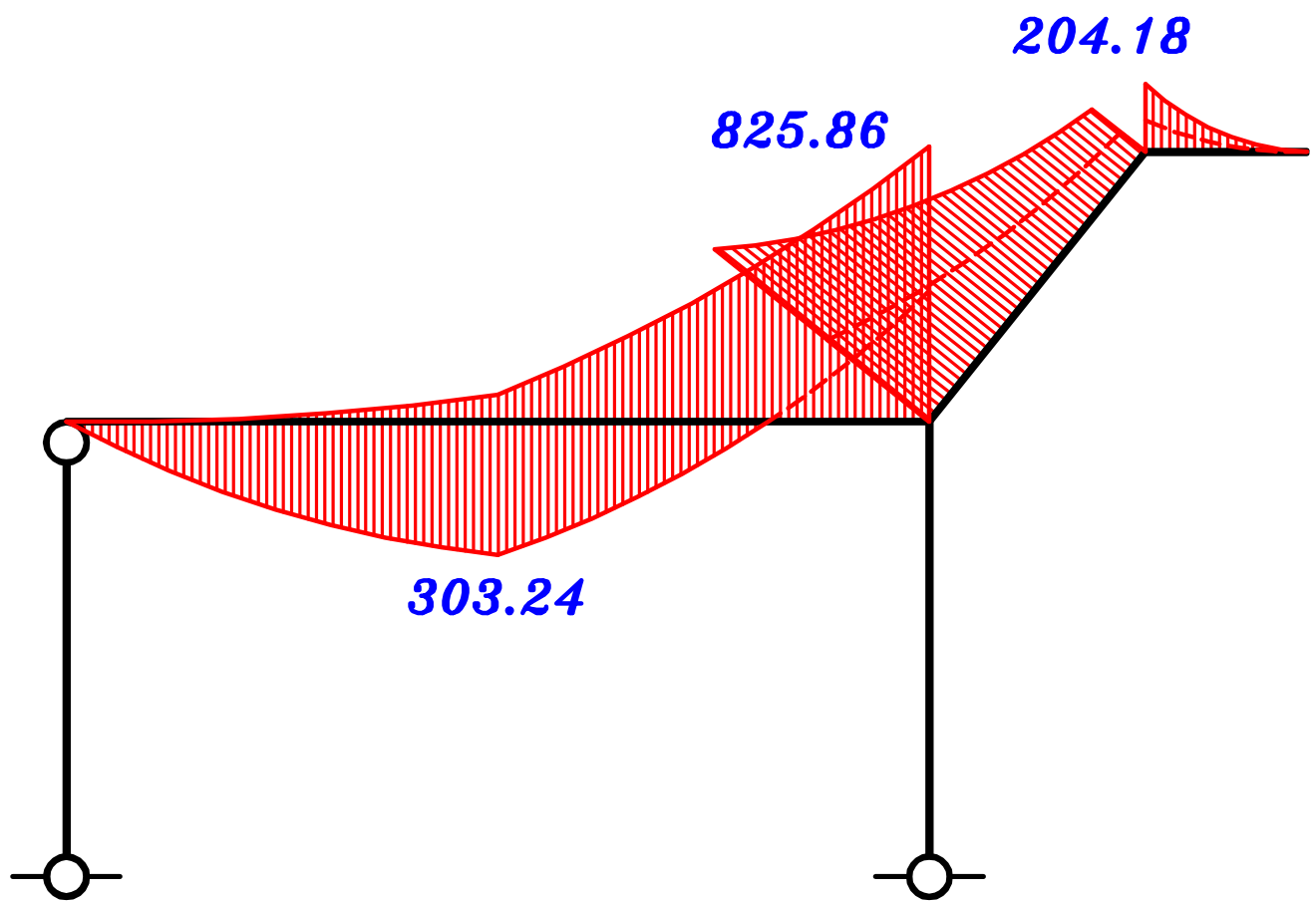
max (+Ve) B.M.D.

3- Draw the **max-max B.M.D.** For an intermediate Frame (F) using ultimate limit loads.



max (-Ve) B.M.D.
 في جميع حالات التحميل نأخذ الحمل
 فوق العمود T.L. لانه لن يؤثر على عزم ال
 Frame ولكن سيزيد من ال Normal على العمود





max-max B.M.D.

Example.

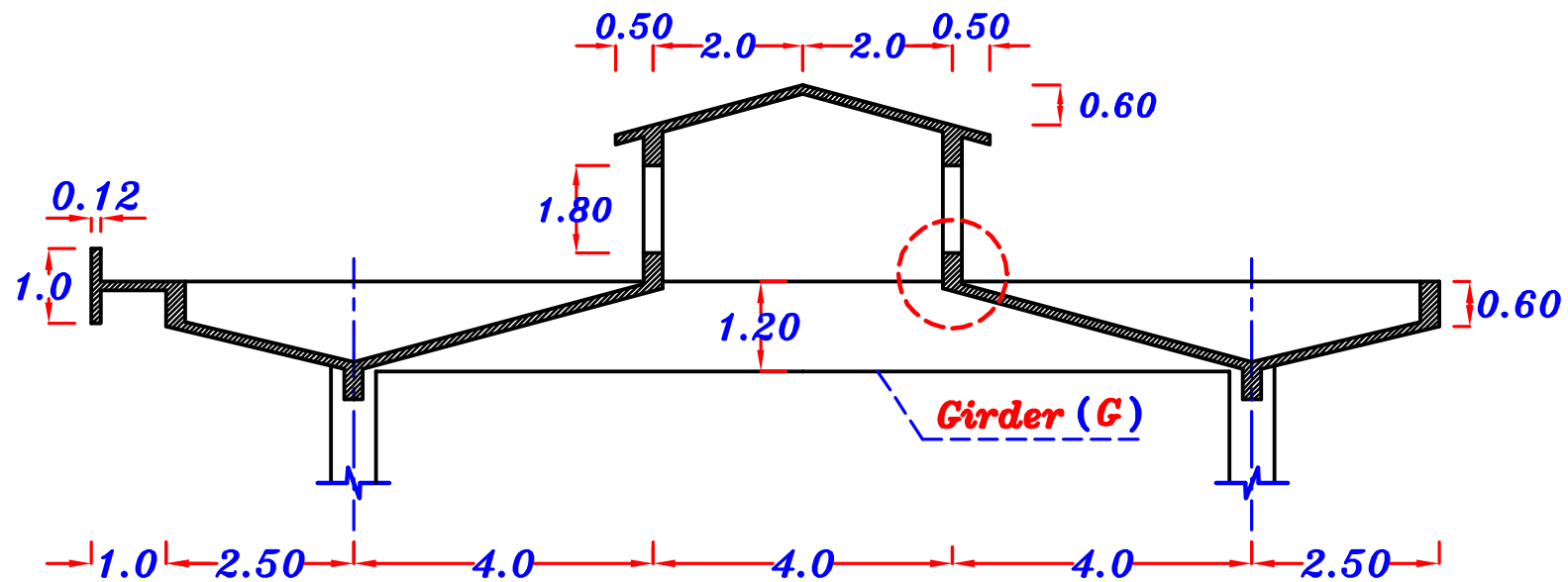


Figure 1

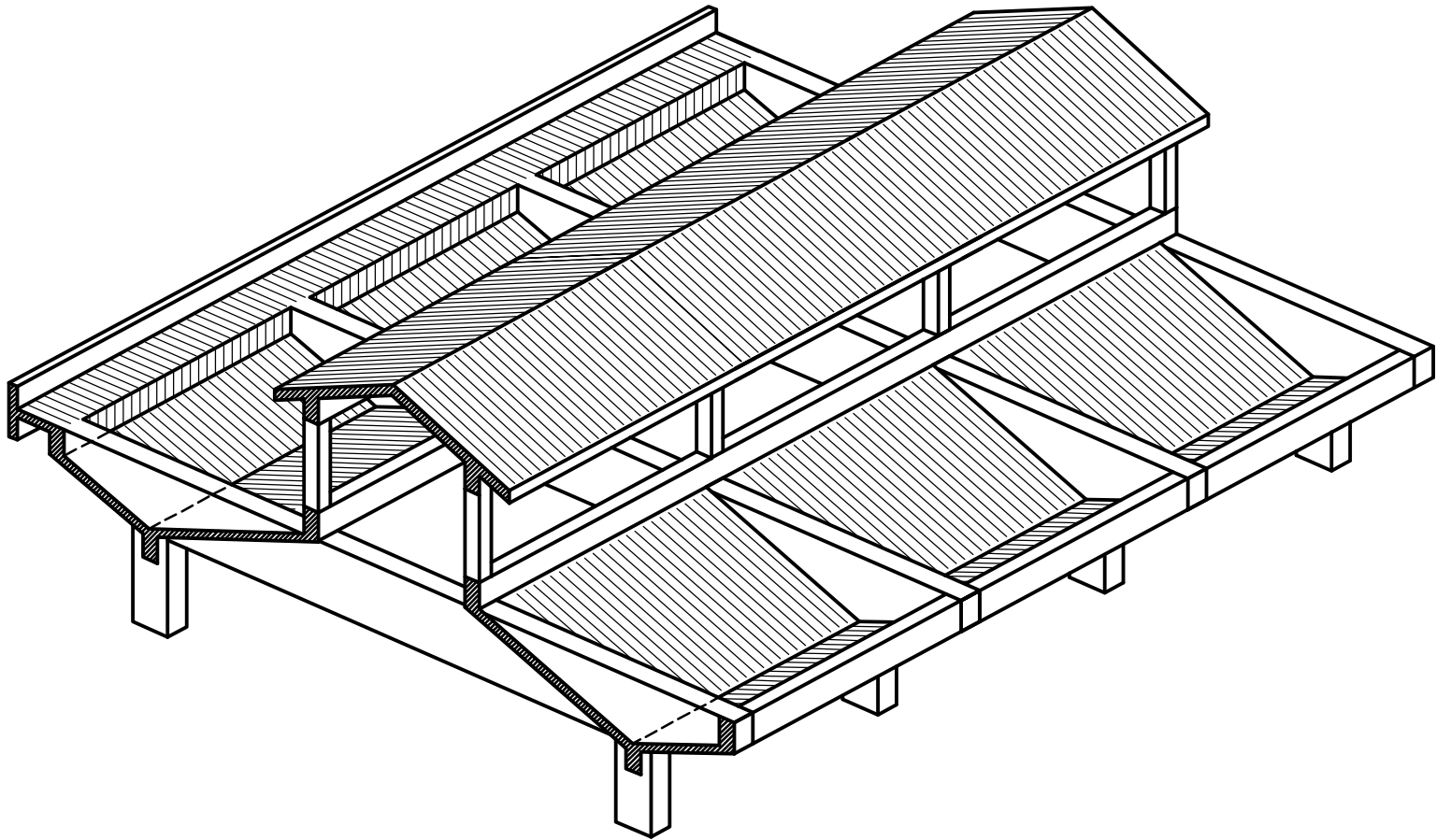
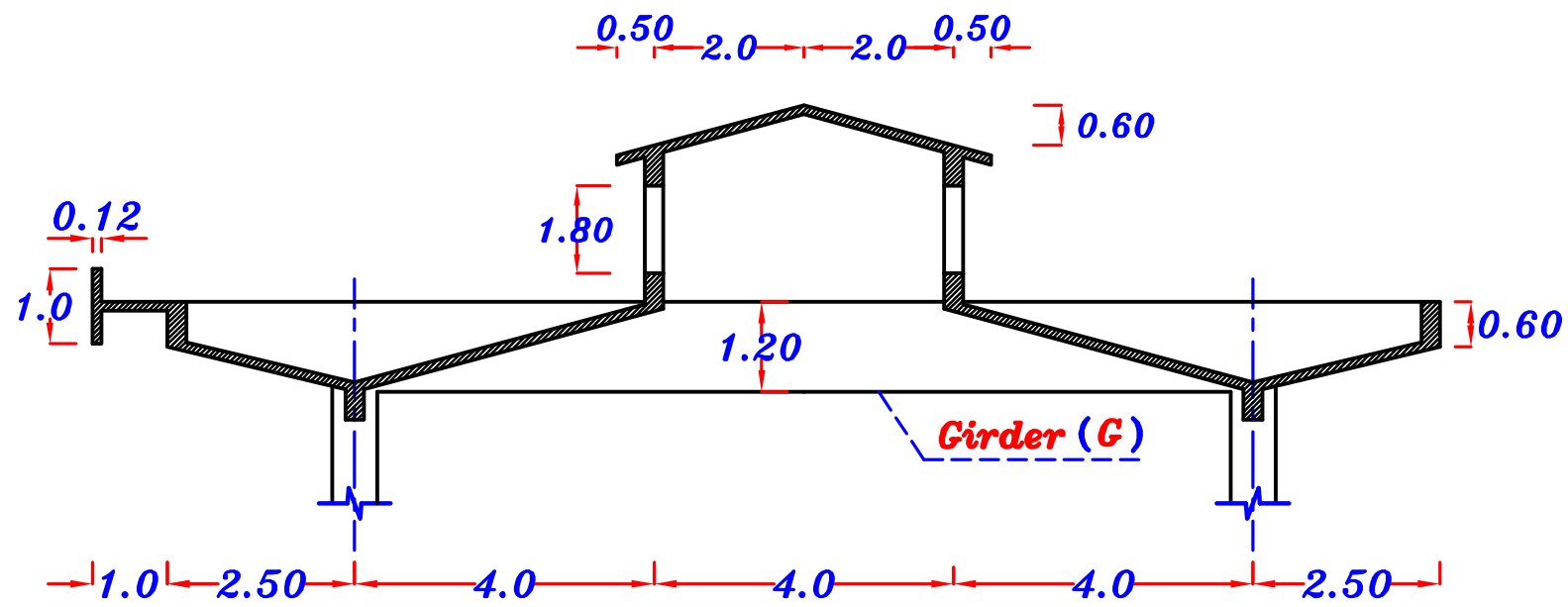
Figure 1 shows a sectional elevation of a reinforced concrete roof. The roof is covered by reinforced concrete slabs supported by a system of secondary beams and Girders (G), spaced at 6.0 m.

It is required:

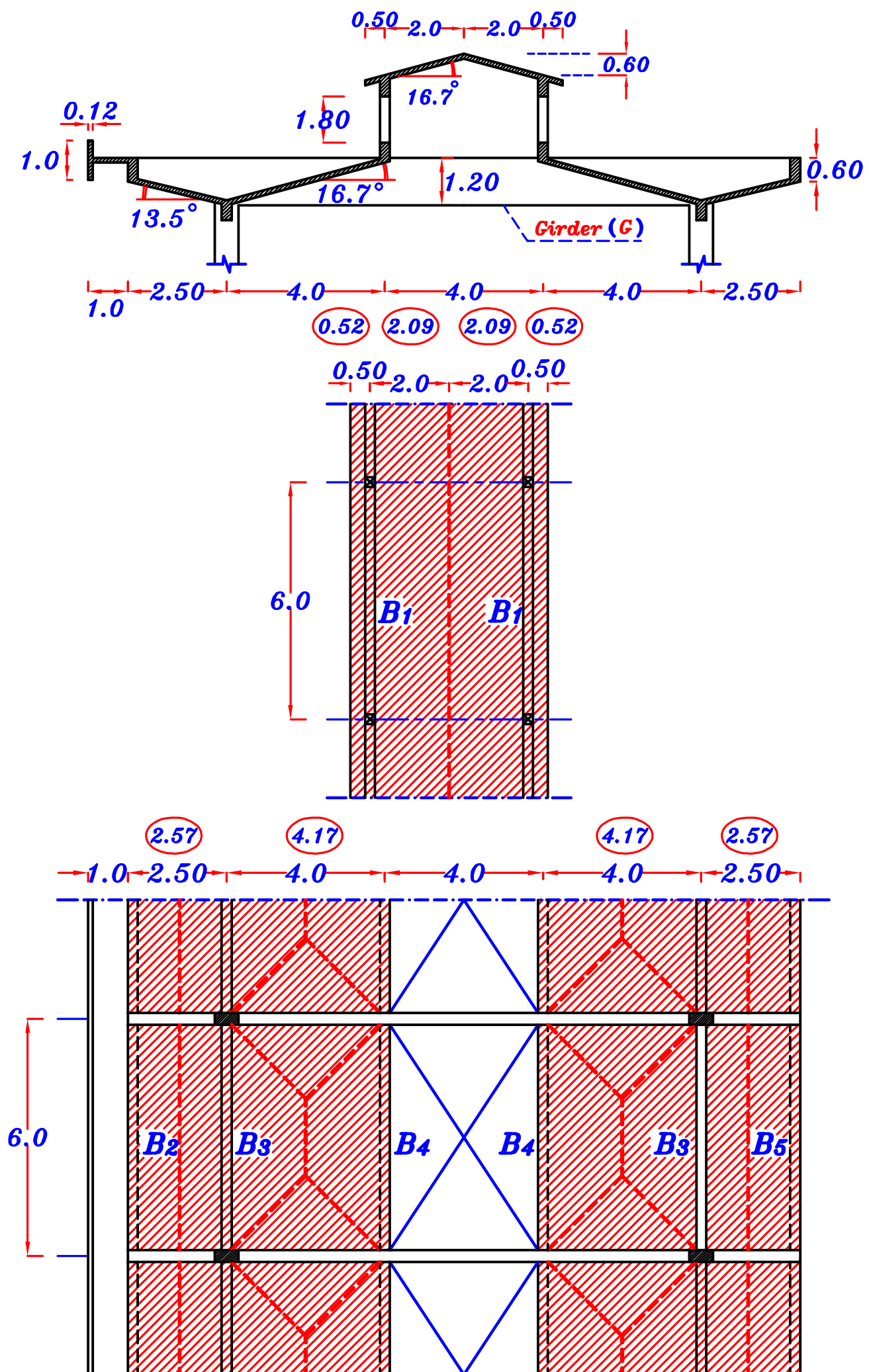
- 1** – Draw a structural plan showing the pattern of load distribution.
- 2** – Calculate the equivalent working loads for shear and moment
For an intermediate Girder (G).
- 3** – Draw the S.F.D. (total loads) and max.–max. B.M.D.
For an intermediate Girder (G). using ultimate limit loads.

Data:

- Slab thickness $t_s = 120$ mm
- Live load = 1.0 kN/m^2
- Floor cover = 1.5 kN/m^2
- Breadth of all beams = 250 mm
- Breadth of all girders = 300 mm
- Own weight of beams = 3.0 kN/m
- Own weight of girders = 6.0 kN/m



ملحوظه هامه . البلاطه مائه لكن ال *Girder* أفقى



g_s, p_s

$$g_s = t_s * \gamma_c + F.C. = 0.12 * 25 + 1.50 = 4.50 \text{ kN/m}^2$$

$$p_{sh} = L.L. = 1.0 \text{ kN/m}^2 \text{ ----- HL. Slab.}$$

$$p_{si1} = L.L. * \cos \theta = 1.0 * \cos 16.7^\circ = 0.957 \text{ kN/m}^2 \text{ ---- For Inclination } 16.7^\circ$$

$$p_{si2} = L.L. * \cos \theta = 1.0 * \cos 13.5^\circ = 0.972 \text{ kN/m}^2 \text{ ---- For Inclination } 13.5^\circ$$

$$g_s = 4.50 \text{ kN/m}^2$$

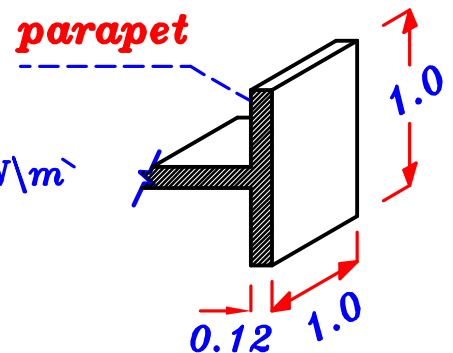
$$p_{sh} = 1.0 \text{ kN/m}^2$$

$$p_{si1} = 0.957 \text{ kN/m}^2$$

$$p_{si2} = 0.972 \text{ kN/m}^2$$

O.W. of parapet

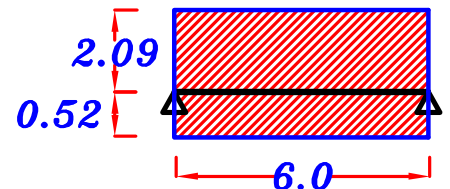
$$O.W. \text{ of parapet} = (0.12) (1.0) (1.0) (25) = 3.0 \text{ kN/m}$$



B_1 Load For Shear.



$$\begin{aligned} g_a &= o.w. + g_s \frac{L_s}{2} + g_s L_c \\ &= 3.0 + (4.50) (2.09) + (4.50) (0.52) = 14.74 \text{ kN/m} \end{aligned}$$



$$\begin{aligned} p_a &= p_{si1} \frac{L_s}{2} + p_{si1} L_c \\ &= (0.957) (2.09) + (0.957) (0.52) = 2.49 \text{ kN/m} \end{aligned}$$

$$w_a = g_a + p_a = 14.74 + 2.49 = 17.23 \text{ kN/m}$$

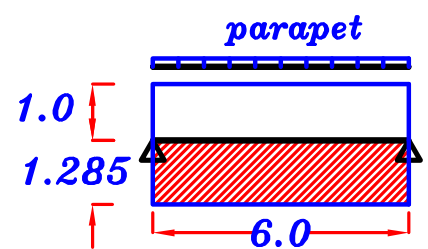
$$R_1 = g_a * \text{Spacing} = 14.74 * 6.0 = 88.44 \text{ kN} \text{ ----- D.L.}$$

$$= w_a * \text{Spacing} = 17.23 * 6.0 = 103.38 \text{ kN} \text{ ----- T.L.}$$

$$R_1 = 88.44 \text{ kN} \text{ ----- D.L.}$$

$$= 103.38 \text{ kN} \text{ ----- T.L.}$$

B₂ Load For Shear.



$$g_a = o.w. + g_s \frac{L_s}{2} + g_s L_c + \text{parapet}$$

$$= 3.0 + (4.50) \left(\frac{2.57}{2} \right) + (4.50) (1.0) + 3.0 = \mathbf{16.28 \text{ kN/m}}$$

$$p_a = p_{si2} \frac{L_s}{2} + p_{sh} L_c$$

$$= (0.972) \left(\frac{2.57}{2} \right) + (1.0) (1.0) = \mathbf{2.25 \text{ kN/m}}$$

$$w_a = g_a + p_a = 16.28 + 2.25 = \mathbf{18.53 \text{ kN/m}}$$

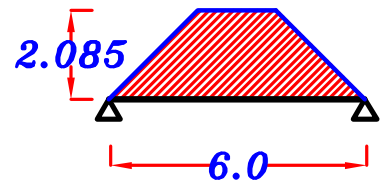
$$R_2 = g_a * \text{Spacing} = 16.28 * 6.0 = \mathbf{97.68 \text{ kN}} \text{ ----- D.L.}$$

$$= w_a * \text{Spacing} = 18.53 * 6.0 = \mathbf{111.18 \text{ kN}} \text{ ----- T.L.}$$

$$R_2 = \mathbf{97.68 \text{ kN}} \text{ ----- D.L.}$$

$$= \mathbf{111.18 \text{ kN}} \text{ ----- T.L.}$$

B₄ For Trapezoid



$$C_a = 1 - \frac{1}{2} \left(\frac{L_s}{L} \right) = 1 - \frac{1}{2} \left(\frac{4.17}{6} \right) = \mathbf{0.652}$$

$$C_e = 1 - \frac{1}{3} \left(\frac{L_s}{L} \right)^2 = 1 - \frac{1}{3} \left(\frac{4.17}{6} \right)^2 = \mathbf{0.839}$$

Load For Shear.



$$g_a = o.w. + C_a g_s \frac{L_s}{2} = 3.0 + (0.652) (4.50) \left(\frac{4.17}{2} \right) = \mathbf{9.12 \text{ kN/m}}$$

$$p_a = C_a p_{si1} \frac{L_s}{2} = (0.652) (0.957) \left(\frac{4.17}{2} \right) = \mathbf{1.30 \text{ kN/m}}$$

$$w_a = g_a + p_a = 9.12 + 1.30 = \mathbf{10.42 \text{ kN/m}}$$

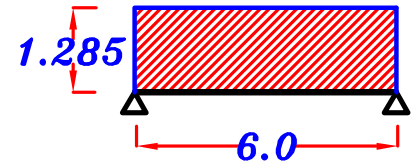
$$R_4 = g_a * \text{Spacing} = 9.12 * 6.0 = \mathbf{54.72 \text{ kN}} \text{ ----- D.L.}$$

$$= w_a * \text{Spacing} = 10.42 * 6.0 = \mathbf{62.52 \text{ kN}} \text{ ----- T.L.}$$

$$R_4 = \mathbf{54.72 \text{ kN}} \text{ ----- D.L.}$$

$$= \mathbf{62.52 \text{ kN}} \text{ ----- T.L.}$$

B5 Load For Shear.



$$g_a = o.w. + g_s \frac{L_s}{2} = 3.0 + (4.50) \left(\frac{2.57}{2} \right) = 8.78 \text{ kN/m}$$

$$p_a = p_{s12} \frac{L_s}{2} = (0.972) \left(\frac{2.57}{2} \right) = 1.25 \text{ kN/m}$$

$$w_a = g_a + p_a = 8.78 + 1.25 = 10.03 \text{ kN/m}$$

$$R_5 = g_a * \text{Spacing} = 8.78 * 6.0 = 52.68 \text{ kN} \text{ ----- D.L.}$$

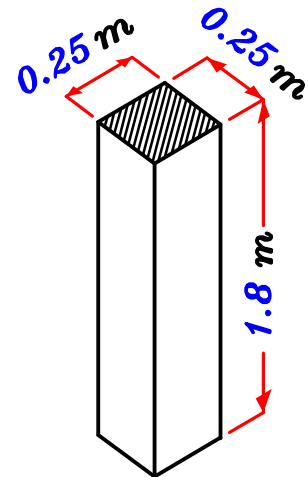
$$= w_a * \text{Spacing} = 10.03 * 6.0 = 60.18 \text{ kN} \text{ ----- T.L.}$$

$$\begin{aligned} R_5 &= 52.68 \text{ kN} \text{ ----- D.L.} \\ &= 60.18 \text{ kN} \text{ ----- T.L.} \end{aligned}$$

Post

$$\text{Weight of the Post} = \text{Volume} * \text{Density}$$

$$= (0.25 * 0.25 * 1.80) (25) = 2.81 \text{ kN}$$

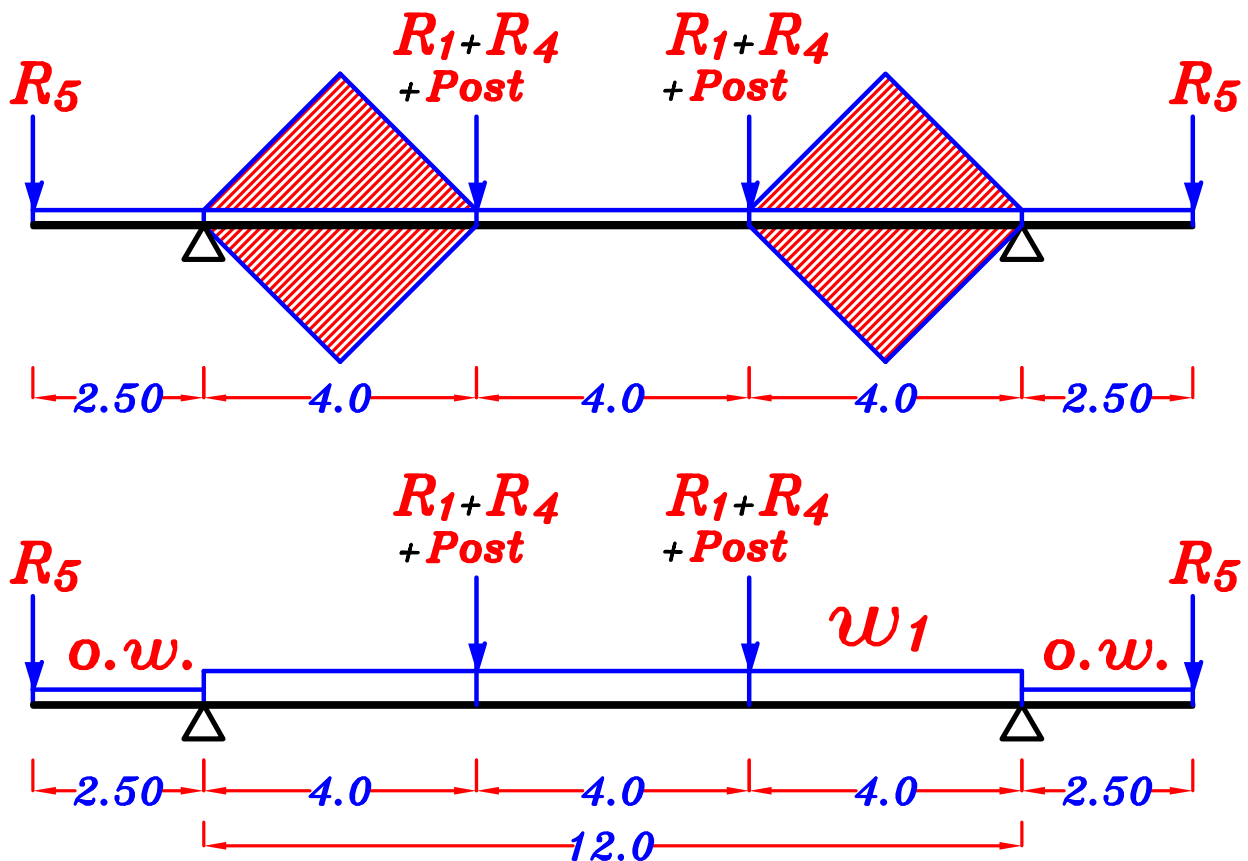


$$\text{Weight of the Post} = 2.81 \text{ kN}$$

Note : Weight of Post can be neglected.

Loads on the Girder.

ملحوظه هامه . البلاطه ماظه لكن ال Girder أفقى



$$\frac{\sum \text{area}}{\text{span}} = \frac{4 \left(\frac{1}{2} (4.17) \left(\frac{4.17}{2} \right) \right)}{12.0} = 1.45$$

$$g_1 = g_a = g_e = \text{o.w.} + \frac{\sum \text{area}}{\text{span}} * g_s$$

$$= 6.0 + 1.45 (4.50) = 12.52 \text{ kN/m}$$

$$p_1 = p_a = p_e = \frac{\sum \text{area}}{\text{span}} * p_{si1}$$

$$= 1.45 (0.957) = 1.387 \text{ kN/m}$$

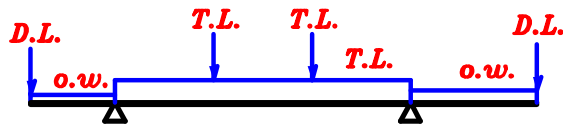
$$w_1 = w_a = w_e = g_1 + p_1 = 12.52 + 1.387 = 13.91 \text{ kN/m}$$

$$g_1 = 12.52 \text{ kN/m} \text{ ---- D.L.}$$

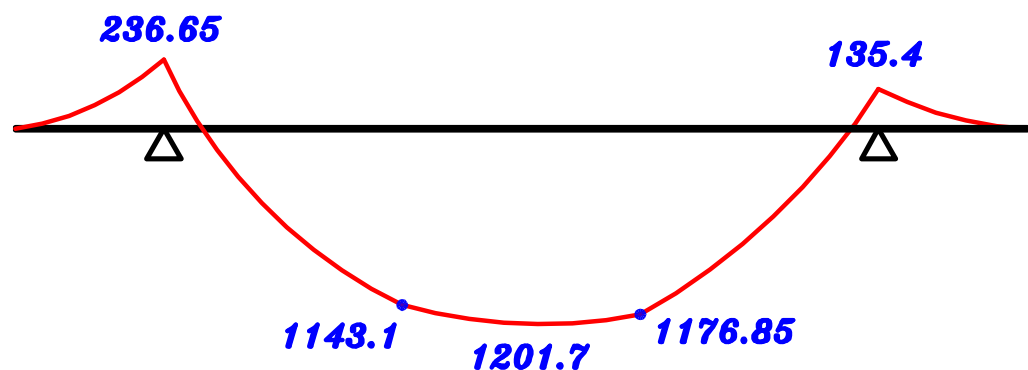
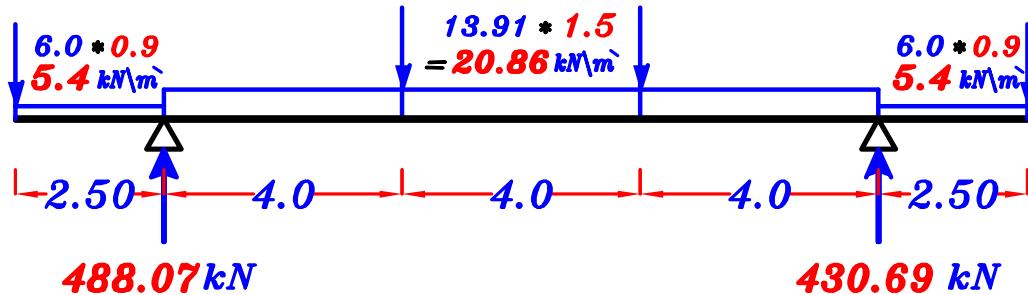
$$w_1 = 13.91 \text{ kN/m} \text{ ---- T.L.}$$

max-max U.L. B.M.D. For the Girder.

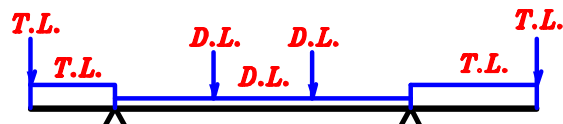
1- max. +ve B.M.D.



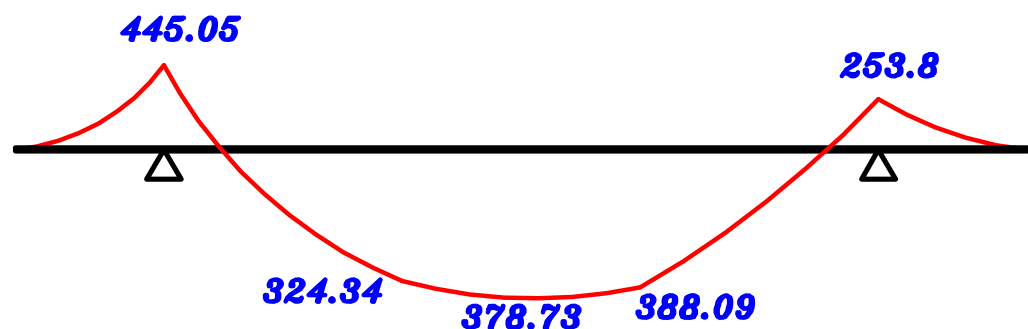
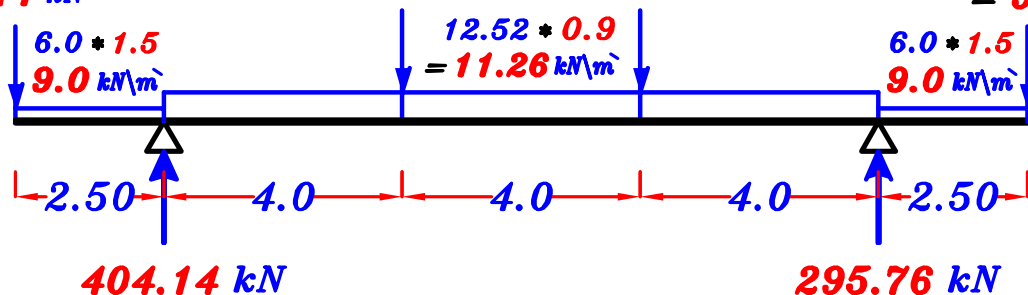
$$\begin{aligned}
 R_2 &= 97.68 * 0.9 = 87.91 \text{ kN} \\
 R_1 &= (103.38 + 62.52 + 2.81) * 1.5 = 253.06 \text{ kN} \\
 R_4 &= (103.38 + 62.52 + 2.81) * 1.5 = 253.06 \text{ kN} \\
 R_5 &= 52.68 * 0.9 = 47.41 \text{ kN}
 \end{aligned}$$



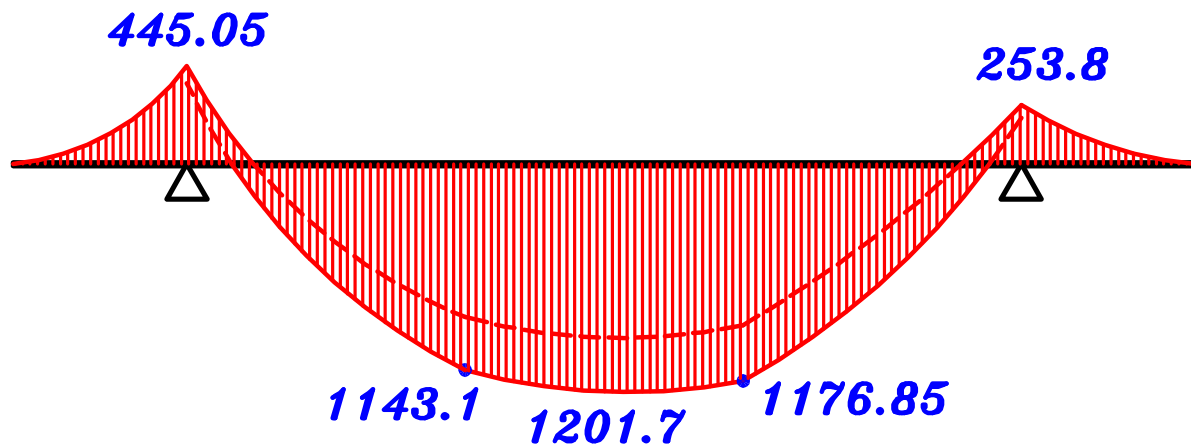
2- max. -ve B.M.D.



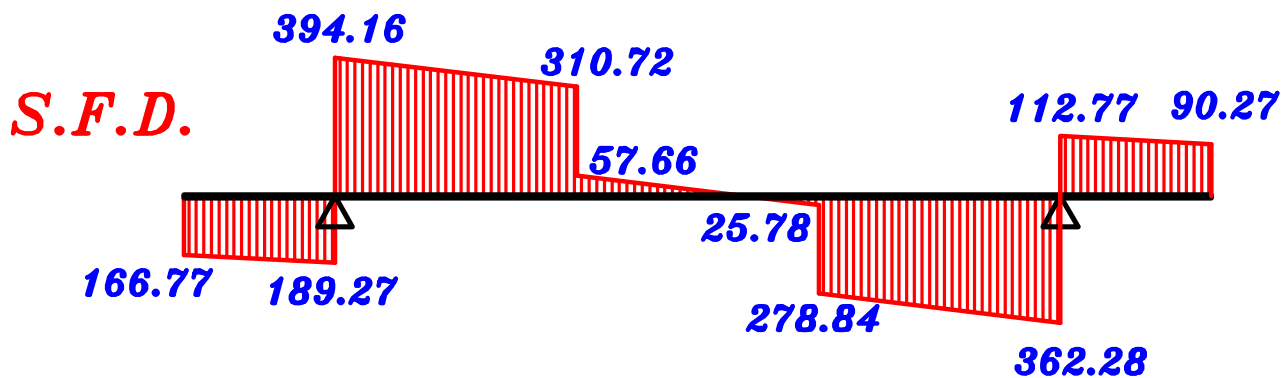
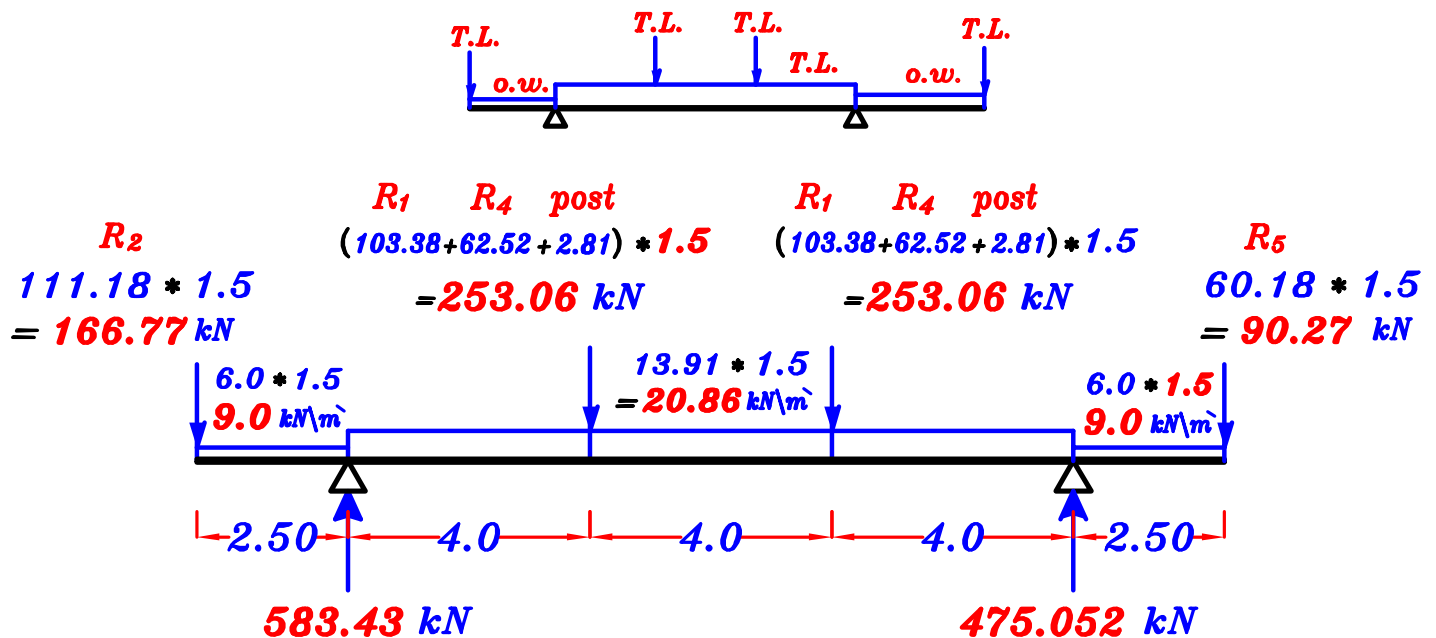
$$\begin{aligned}
 R_2 &= 111.18 * 1.5 = 166.77 \text{ kN} \\
 R_1 &= (88.44 + 54.72 + 2.81) * 0.9 = 131.37 \text{ kN} \\
 R_4 &= (88.44 + 54.72 + 2.81) * 0.9 = 131.37 \text{ kN} \\
 R_5 &= 60.18 * 1.5 = 90.27 \text{ kN}
 \end{aligned}$$



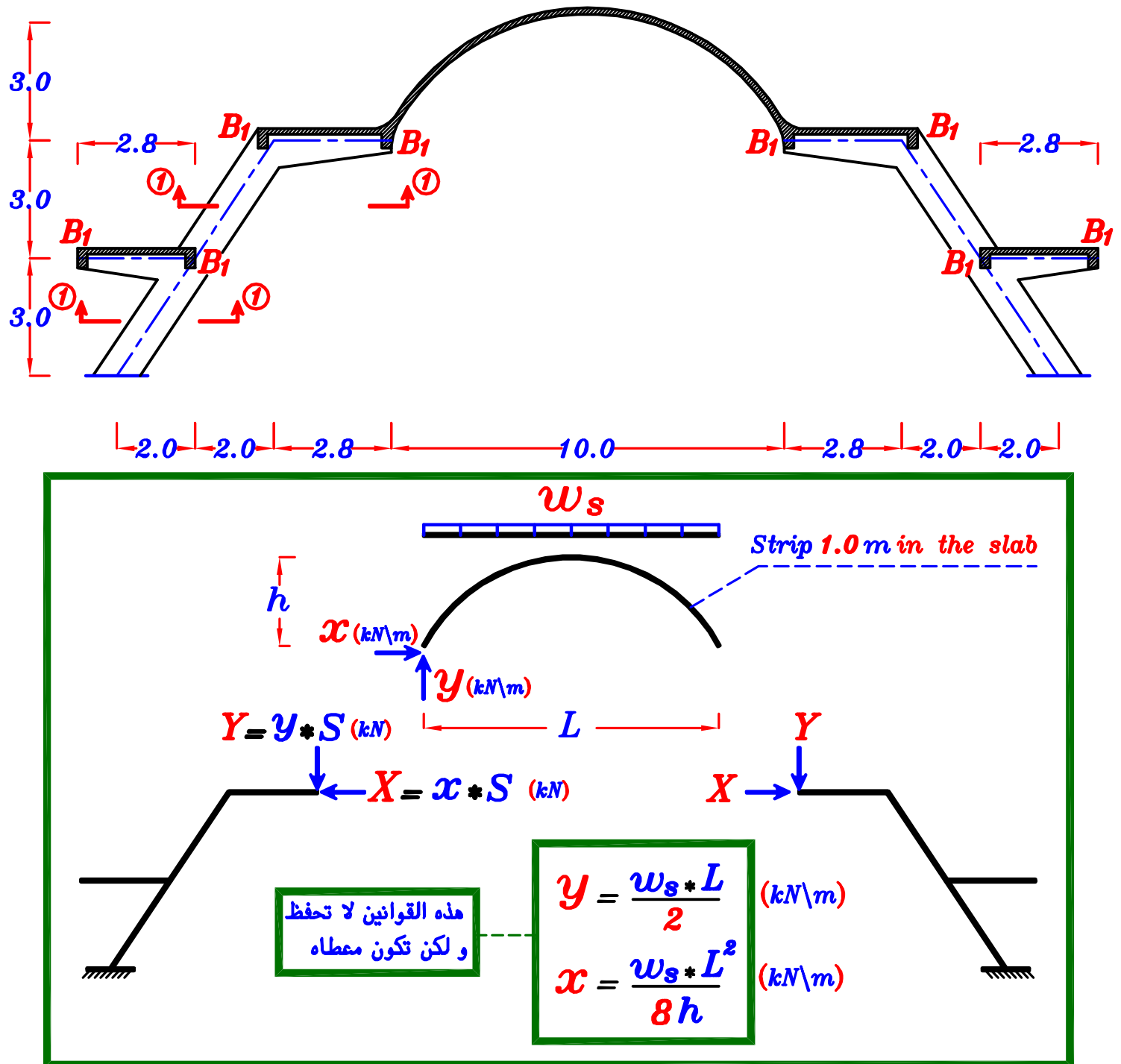
max-max B.M.D. For the Girder.



S.F.D. For the Girder.



Example.



Data.

$$t_s = 0.12 \text{ m} , \quad F.C. = 1.50 \text{ N/mm}^2 , \quad L.L. = 2.0 \text{ N/mm}^2$$

$$\text{Spacing} = 6.0 \text{ m} , \quad \text{o.w.} = 6.0 \text{ kN/m} \quad (\text{Frame}) , \quad \text{o.w.} = 3.0 \text{ kN/m} \quad (\text{Beams})$$

Req.

Draw Internal Forces Diagrams For the Frame.

(Case of total Load only)

$$w_s = t_s * \gamma_c + F.C. + L.L.$$

$$= 0.12 * 25 + 1.50 + 2.0 = 6.50 \text{ kN/m}^2$$

$$w_s = 6.50 \text{ kN/m}^2$$

$$L = 10 \text{ m} , \quad h = 3.0 \text{ m}$$

$$y = \frac{w_s * L}{2} = \frac{6.50 * 10}{2} = 32.5 \text{ kN/m}$$

هذه القوانين لا تحفظ
و لكن تكون معطاه

$$Y = y * S = 32.5 * 6.0 = 195 \text{ kN}$$

$$Y = 195 \text{ kN}$$

$$x = \frac{w_s * L^2}{8h} = \frac{6.50 * 10^2}{8 * 3.0} = 27.08 \text{ kN/m}$$

$$X = x * S = 27.08 * 6.0 = 162.5 \text{ kN}$$

$$X = 162.5 \text{ kN}$$

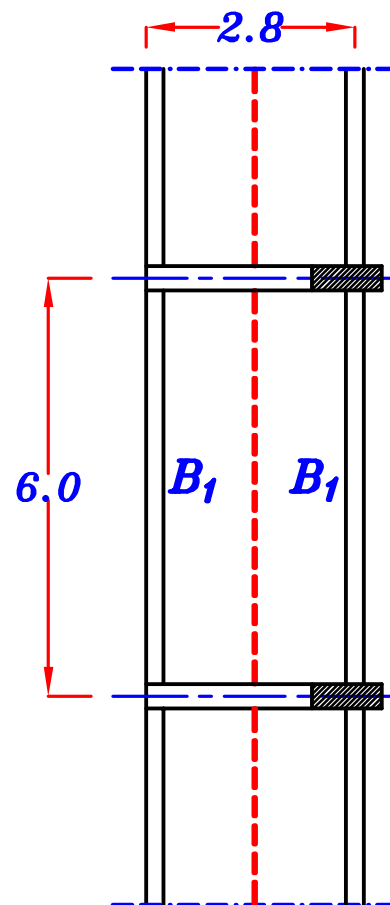
B_1

$$w_a = w_e = 0.W. + w_s \frac{L_s}{2}$$

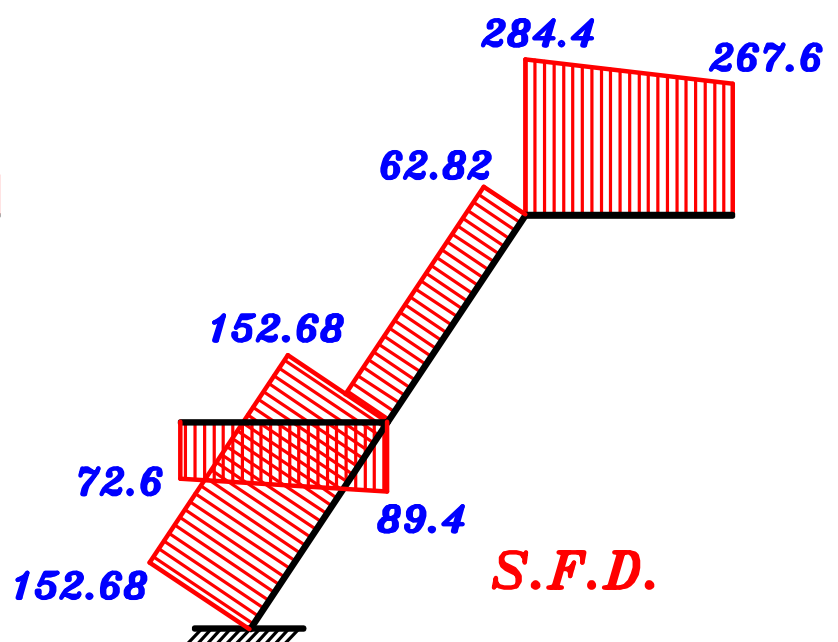
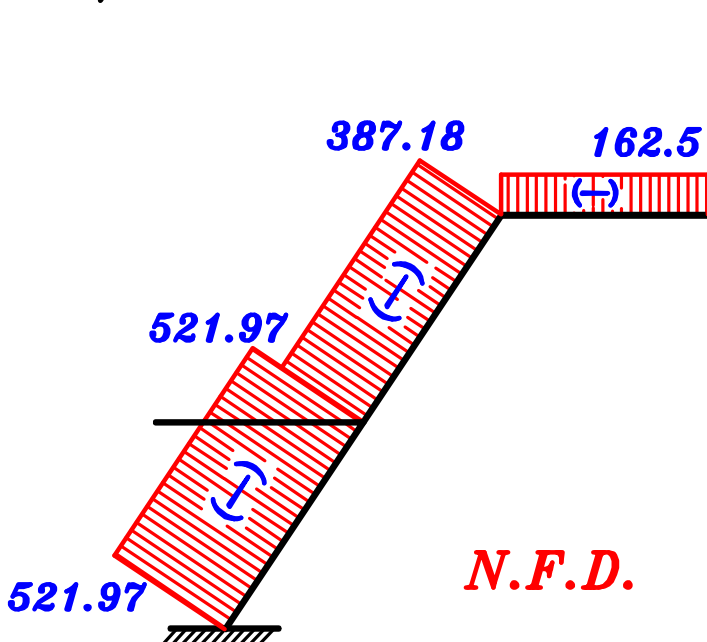
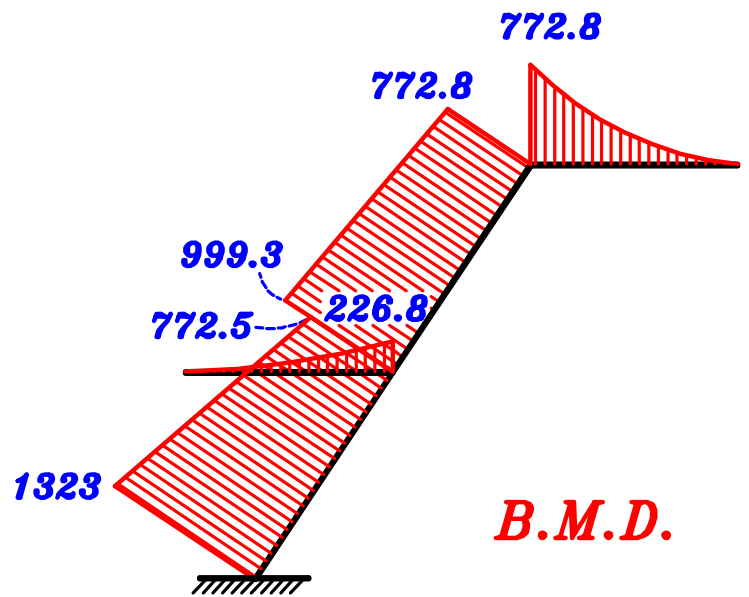
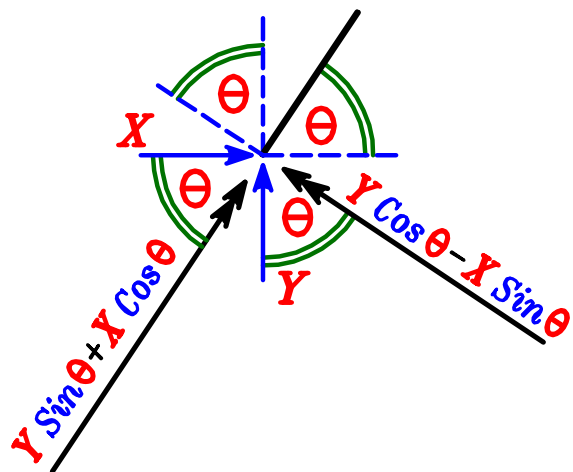
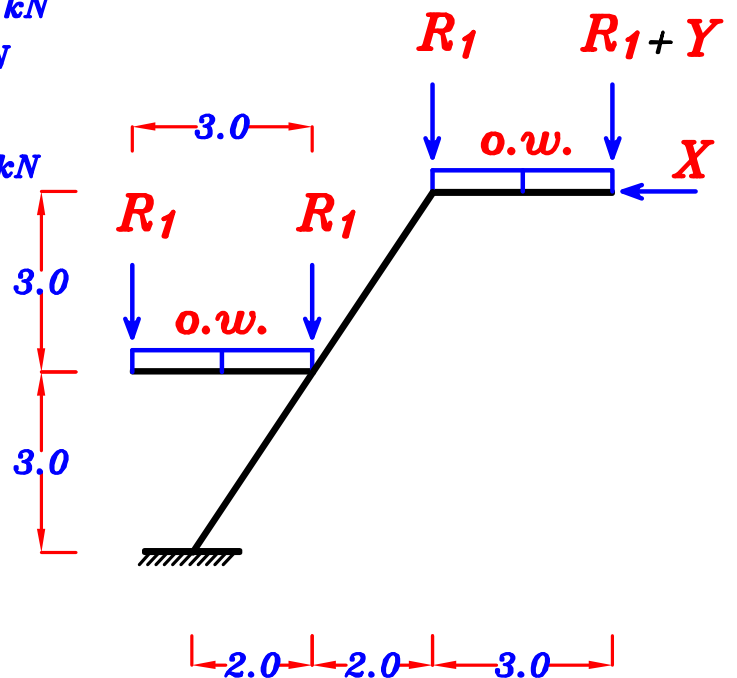
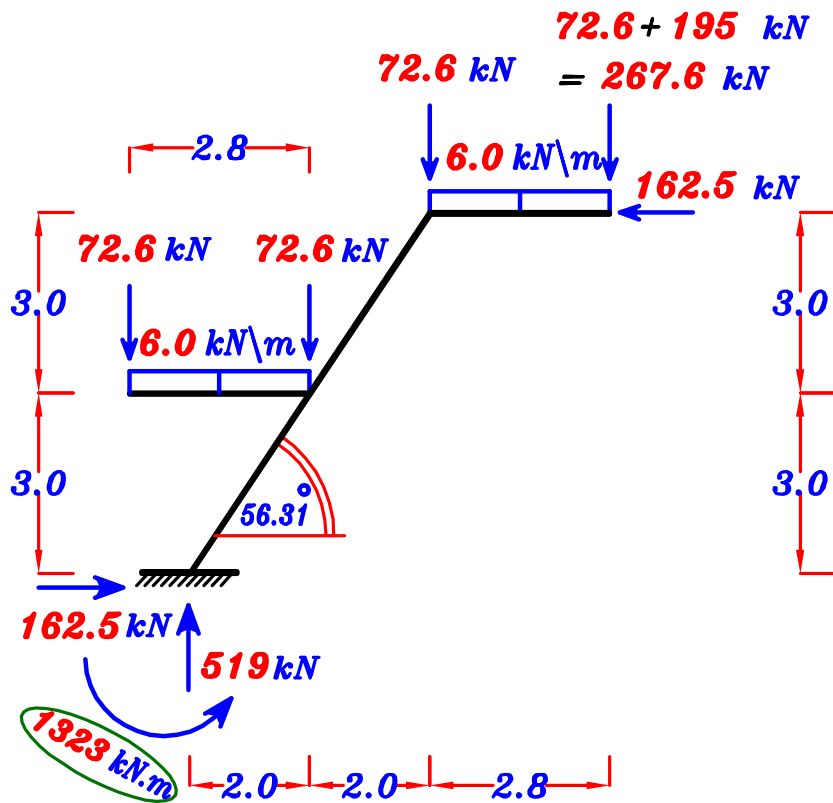
$$= 3.0 + (6.50) \left(\frac{2.8}{2} \right) = 12.1 \text{ kN/m}$$

$$R_1 = 12.10 * 6.0 = 72.6 \text{ kN}$$

$$R_1 = 72.6 \text{ kN}$$



Plan (1-1)



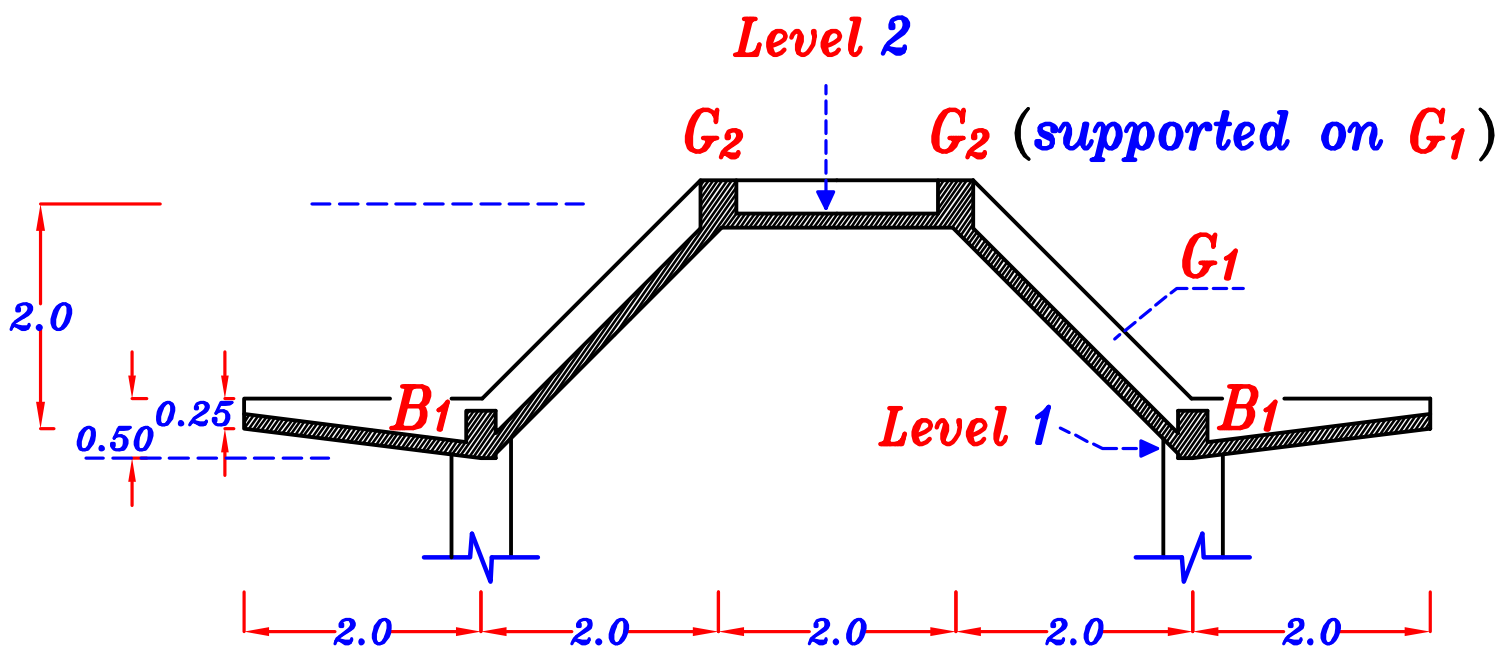
Example.

Figure 1 shows a sectional elevation and plan of a reinforced concrete shed. The shed covered by reinforced concrete slabs supported by a system of secondary beams (B_1) and Girders (G_1 & G_2) It is required to :

- 1** – Draw a structural plan showing the pattern of load distribution.
- 2** – Calculate the equivalent working loads for shear and moment For secondary Beams (B_1) and Girders (G_1 & G_2).
- 3** – Draw the **N.F.D.** (Total Loads), **S.F.D.** (Total Loads) and (**max-max B.M.D.**) For Girder (G_1) only, Using ultimate limit loads.

Data:

- Slab thickness $t_s = 140 \text{ mm}$
- Live load $= 1.5 \text{ kN/m}^2$ HL. projection.
- Floor cover $= 1.0 \text{ kN/m}^2$
- Own weight of beams $= 3.0 \text{ kN/m}$
- Own weight of girders $= 6.0 \text{ kN/m}$



Cross-Section (X-X)

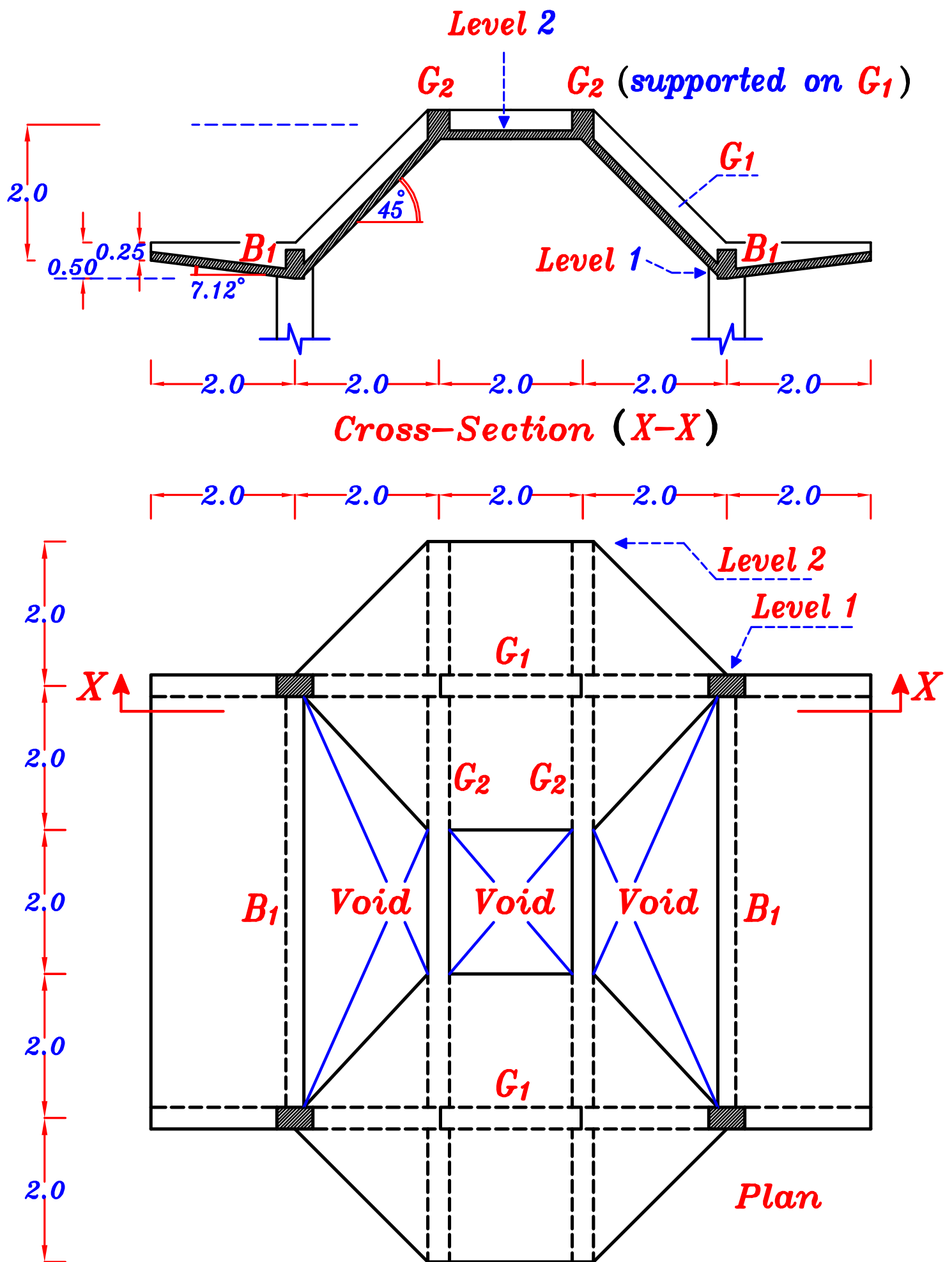
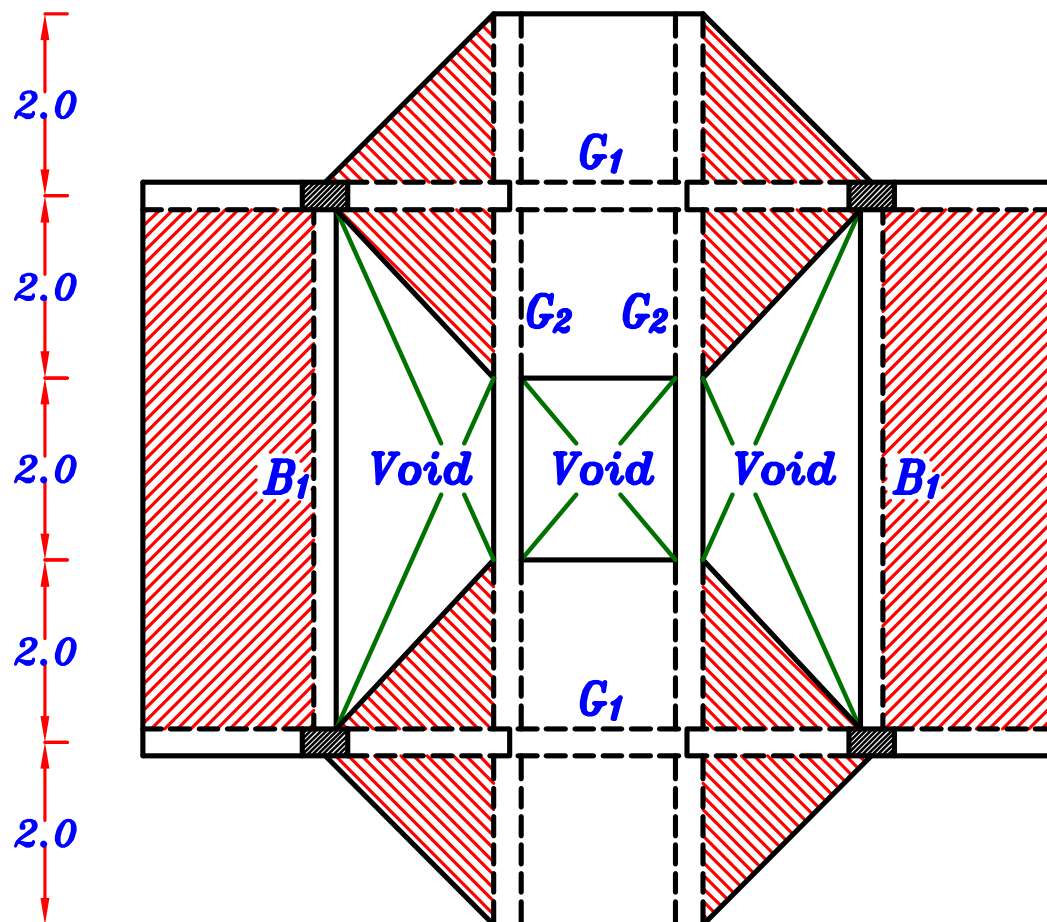
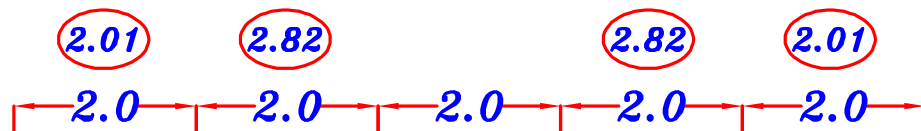
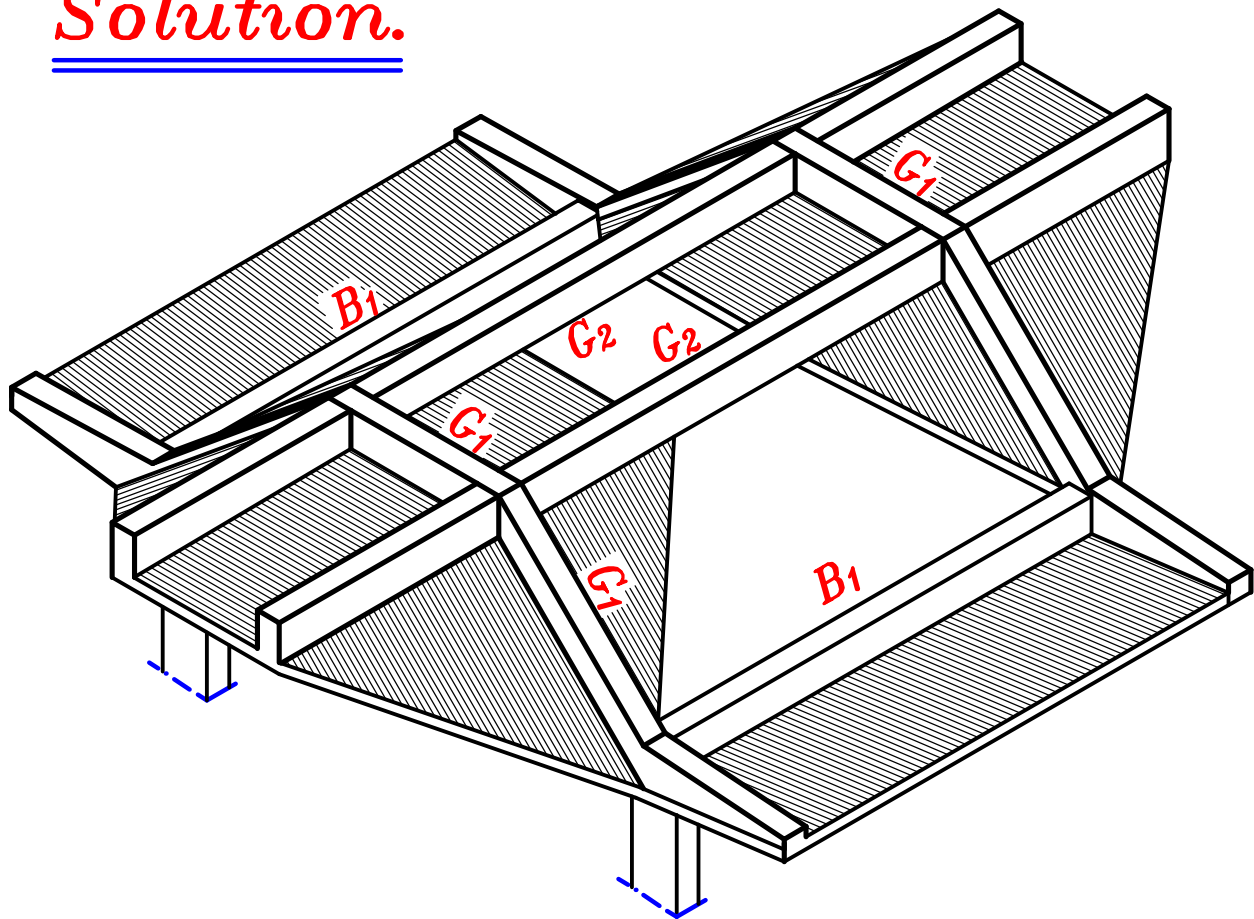


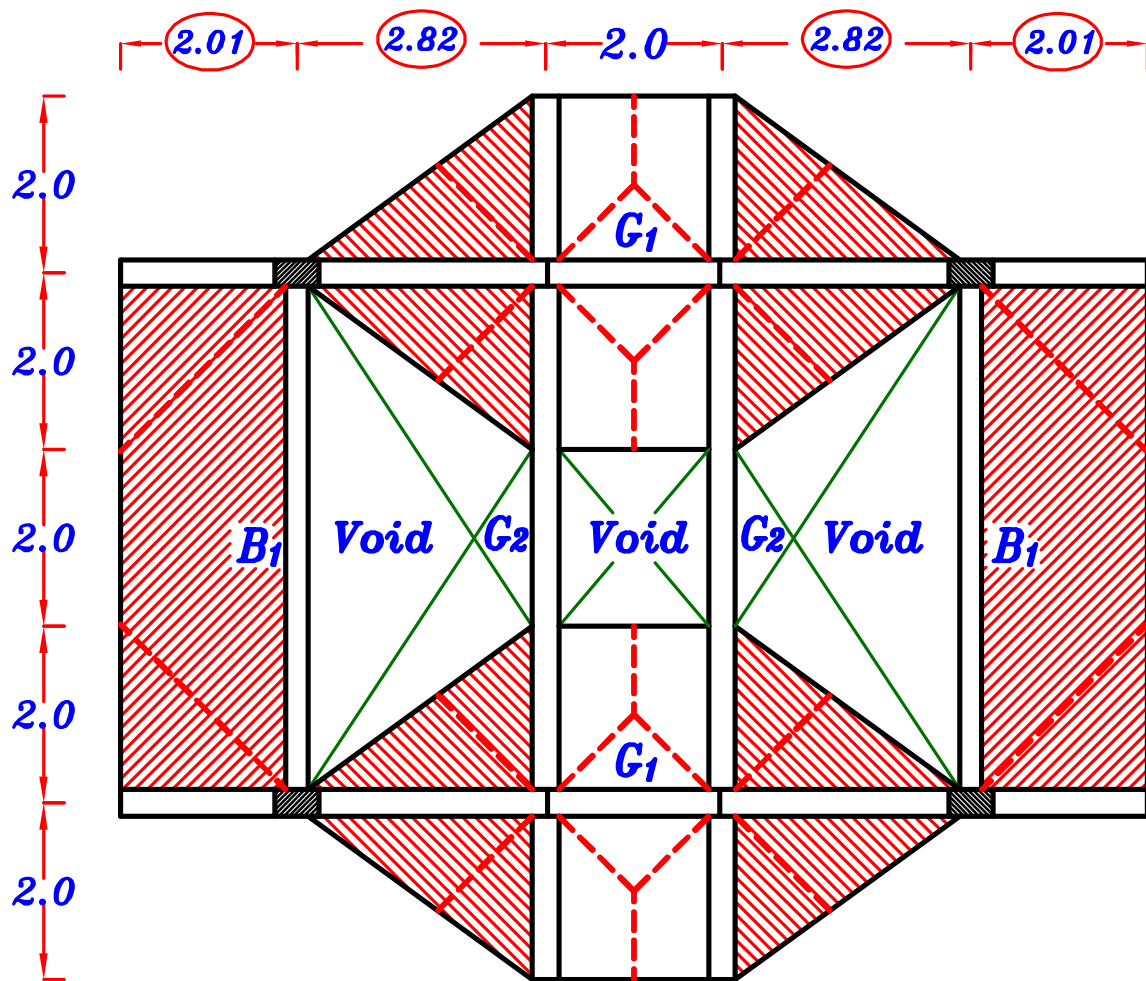
Figure 1

Solution.



1 – Draw a structural plan showing the pattern of load distribution.

أرسم ال plan بالاطوال الحقيقيه بمقياس رسم مناسب لقياس بعض الاطوال منه .



g_s, p_s

$$g_s = t_s * \gamma_c + F.C. = 0.14 * 25 + 1.0 = 4.5 \text{ kN/m}^2$$

$$p_{sh} = L.L. = 1.5 \text{ kN/m}^2 \text{ ----- HL. Slab.}$$

$$p_{si1} = L.L. * \cos \theta = 1.5 * \cos 45^\circ = 1.06 \text{ kN/m}^2 \text{ ----- For Inclination } 45^\circ$$

$$p_{si2} = L.L. * \cos \theta = 1.5 * \cos 7.12^\circ = 1.49 \text{ kN/m}^2 \text{ ----- For Inclination } 7.12^\circ$$

$$g_s = 4.5 \text{ kN/m}^2$$

,

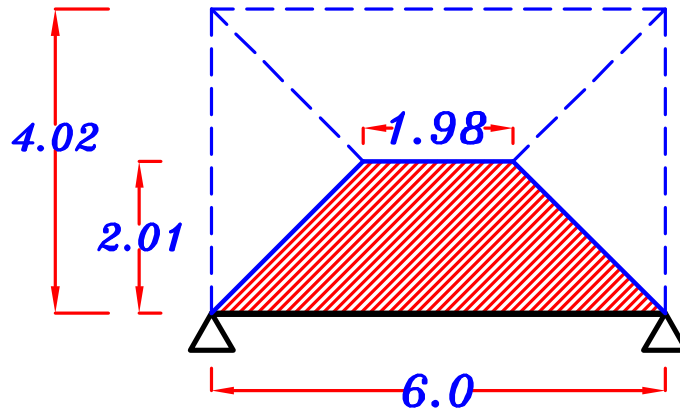
$$p_{sh} = 1.5 \text{ kN/m}^2$$

$$p_{si1} = 1.06 \text{ kN/m}^2$$

,

$$p_{si2} = 1.49 \text{ kN/m}^2$$

B_1



For Trapezoid

$$C_a = 1 - \frac{1}{2} \left(\frac{L_s}{L} \right) = 1 - \frac{1}{2} \left(\frac{4.02}{6} \right) = 0.665$$

$$C_e = 1 - \frac{1}{3} \left(\frac{L_s}{L} \right)^2 = 1 - \frac{1}{3} \left(\frac{4.02}{6} \right)^2 = 0.85$$

Load For Shear.



$$g_a = o.w. + C_a g_s L_c = 3.0 + (0.665) (4.50) (2.01) = 9.01 \text{ kN}\backslash\text{m}^{\text{`}}$$

$$p_a = C_a p_{si2} L_c = (0.665) (1.49) (2.01) = 1.99 \text{ kN}\backslash\text{m}^{\text{`}}$$

$$w_a = g_a + p_a = 9.01 + 1.99 = 11.0 \text{ kN}\backslash\text{m}^{\text{`}}$$

Load For Moment.

$$g_e = o.w. + C_e g_s L_c = 3.0 + (0.85) (4.50) (2.01) = 10.69 \text{ kN}\backslash\text{m}^{\text{`}}$$

$$p_e = C_e p_{si2} L_c = (0.85) (1.49) (2.01) = 2.54 \text{ kN}\backslash\text{m}^{\text{`}}$$

$$w_e = g_e + p_e = 10.69 + 2.54 = 13.23 \text{ kN}\backslash\text{m}^{\text{`}}$$

w_2

$$\frac{\sum \text{area}}{\text{span}} 1 = \frac{\left(\frac{2+1}{2}\right)(1.0)}{2.0} = 0.75$$

$$\frac{\sum \text{area}}{\text{span}} 2 = \frac{\left(\frac{1}{2} * 2 * 1.17\right)}{2.0} = 0.585$$

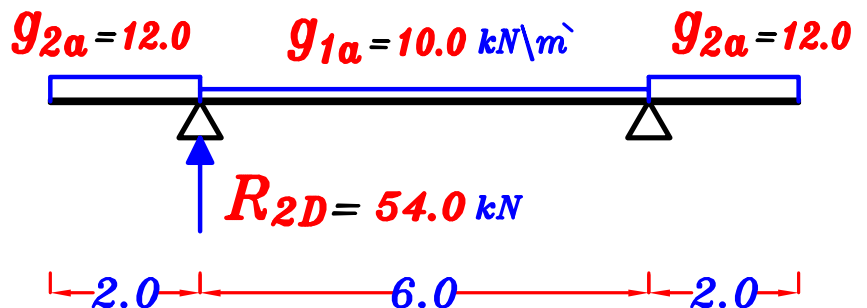
Load For Shear = Load For Moment.

$$\begin{aligned} g_{2a} = g_{2e} &= 0.W. + \frac{\sum \text{area}}{\text{span}} 1 * g_s + \frac{\sum \text{area}}{\text{span}} 2 * g_s \\ &= 6.0 + (0.75)(4.5) + (0.585)(4.5) = 12.0 \text{ kN/m} \end{aligned}$$

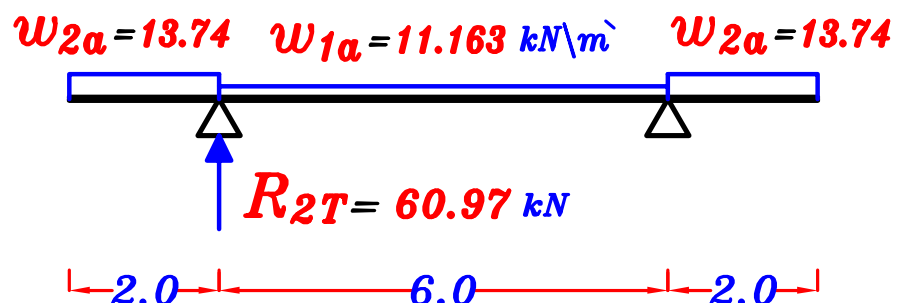
$$\begin{aligned} p_{2a} = p_{2e} &= \frac{\sum \text{area}}{\text{span}} 1 * p_{sh} + \frac{\sum \text{area}}{\text{span}} 2 * p_{si1} \\ &= (0.75)(1.5) + (0.585)(1.06) = 1.74 \text{ kN/m} \end{aligned}$$

$$w_{2a} = w_{2e} = g_2 + p_2 = 12.0 + 1.74 = 13.74 \text{ kN/m}$$

Reaction of girder G_2

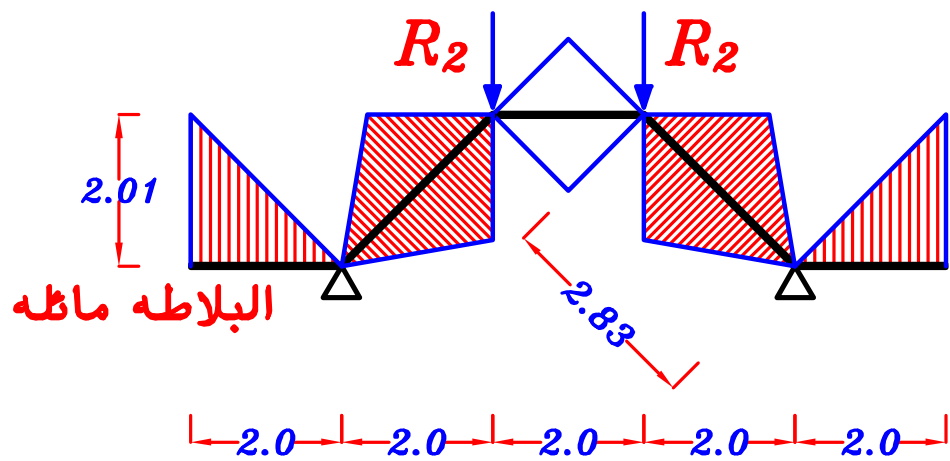


$$R_{2D} = 54.0 \text{ kN}$$



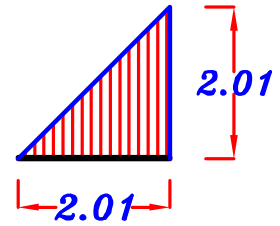
$$R_{2T} = 60.97 \text{ kN}$$

G_1

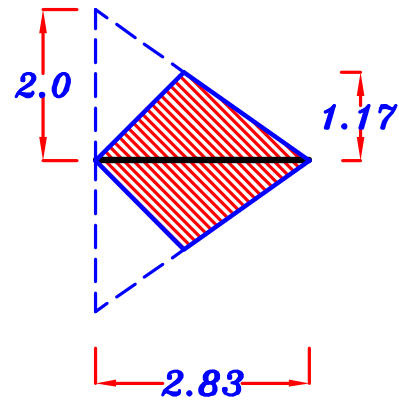


البلاطه ماظه و لكن ال *cantilever girder* أفقى

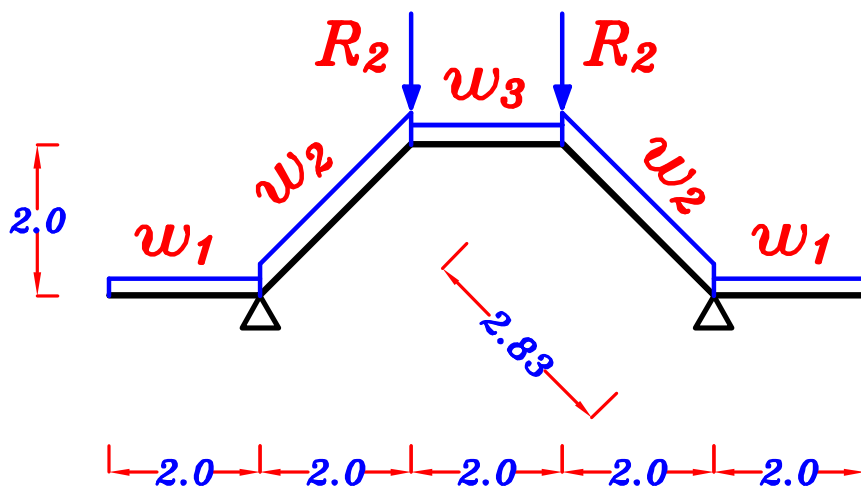
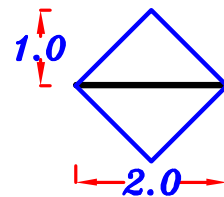
$$\frac{\sum \text{area}}{\text{span}} = \frac{\left(\frac{1}{2} * 2.01 * 2.01\right)}{2.0} = 1.01$$



$$\frac{\sum \text{area}}{\text{span}} = \frac{2 \left(\frac{1}{2} * 2.83 * 1.17\right)}{2.83} = 1.17$$



$$\frac{\sum \text{area}}{\text{span}} = \frac{2 \left(\frac{1}{2} * 2 * 1.0\right)}{2.0} = 1.0$$



W1

Load For Shear = Load For Moment



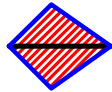
$$g_1 = 0.W. + \frac{\sum \text{area}}{\text{span}} * g_s = 6.0 + (1.01)(4.5) = 10.545 \text{ kN/m}$$

$$p_1 = \frac{\sum \text{area}}{\text{span}} * p_{si2} = (1.01)(1.49) = 1.505 \text{ kN/m}$$

$$w_1 = g + p = 10.545 + 1.505 = 12.05 \text{ kN/m}$$

W2

Load For Shear = Load For Moment



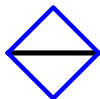
$$g_2 = 0.W. + \frac{\sum \text{area}}{\text{span}} * g_s = 6.0 + (1.17)(4.5) = 11.265 \text{ kN/m}$$

$$p_2 = \frac{\sum \text{area}}{\text{span}} * p_{si1} = (1.17)(1.06) = 1.24 \text{ kN/m}$$

$$w_2 = g + p = 11.265 + 1.24 = 12.505 \text{ kN/m}$$

W3

Load For Shear = Load For Moment



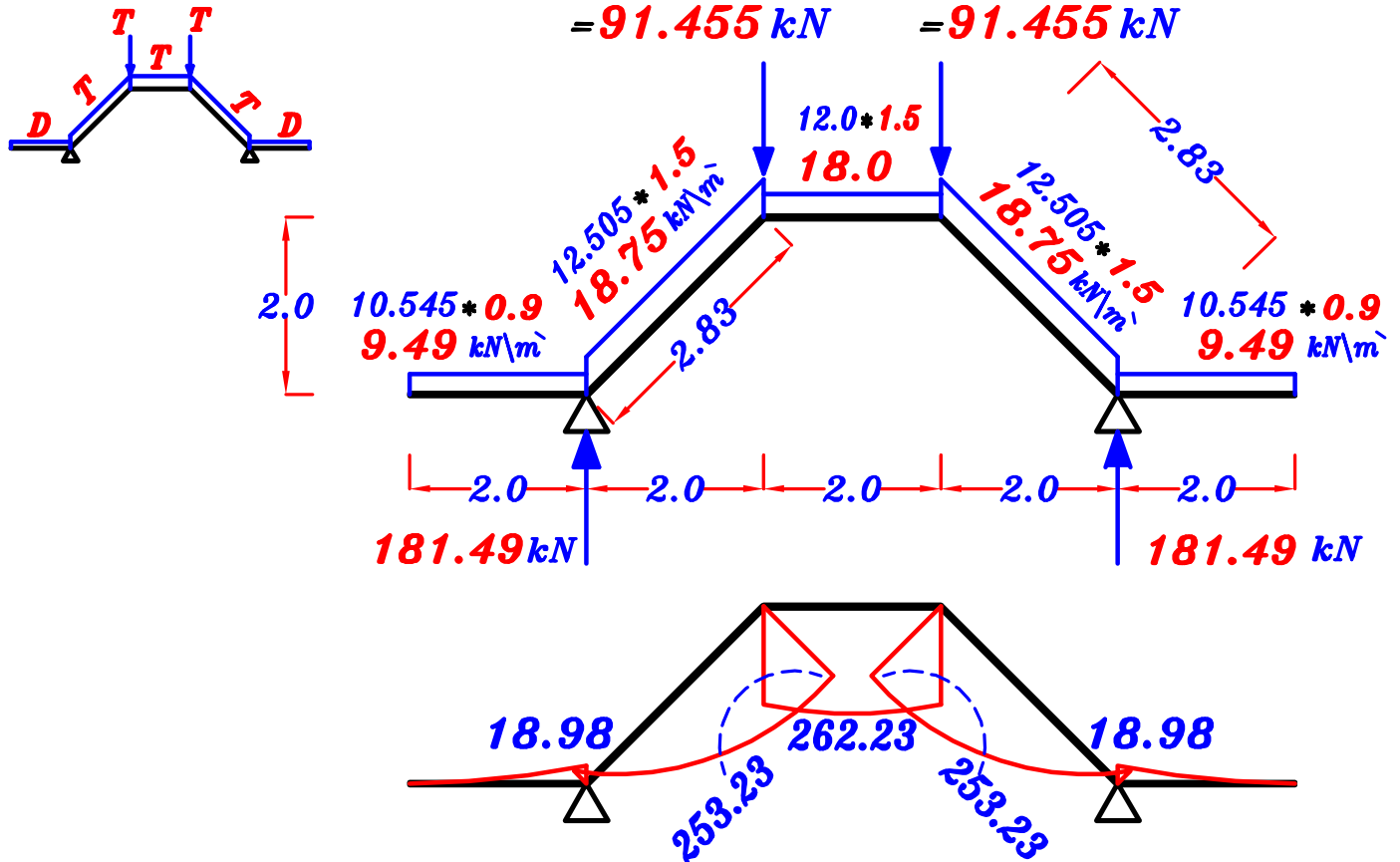
$$g_3 = 0.W. + \frac{\sum \text{area}}{\text{span}} * g_s = 6.0 + (1.0)(4.5) = 10.5 \text{ kN/m}$$

$$p_3 = \frac{\sum \text{area}}{\text{span}} * p_{sh} = (1.0)(1.5) = 1.50 \text{ kN/m}$$

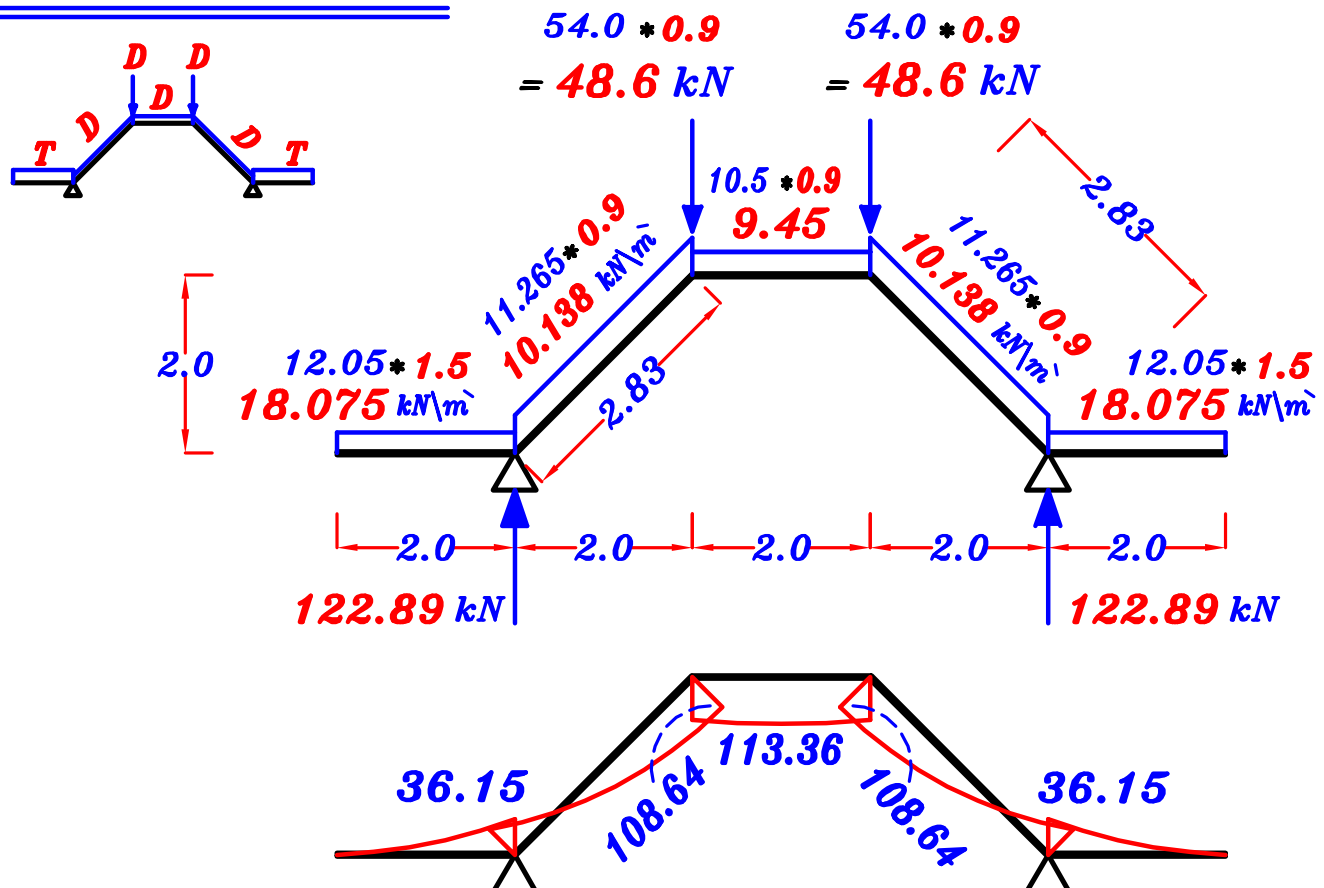
$$w_3 = g + p = 10.5 + 1.50 = 12.0 \text{ kN/m}$$

max-max U.L. B.M.D. For the Girder. G_1

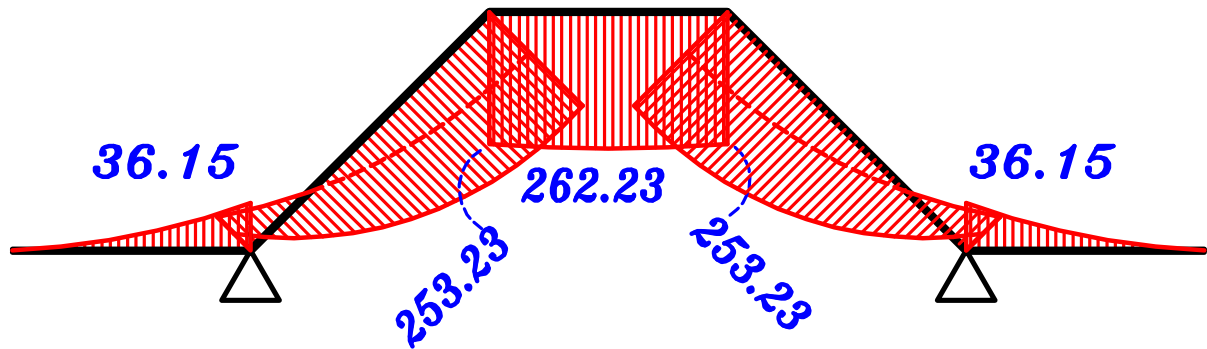
1- max. +ve B.M.D.



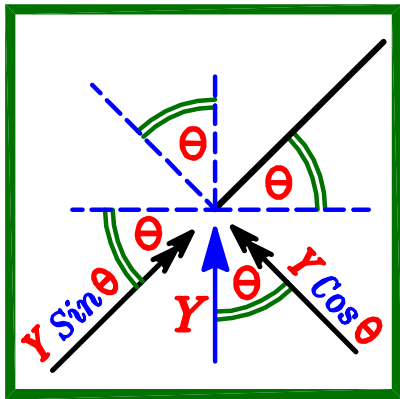
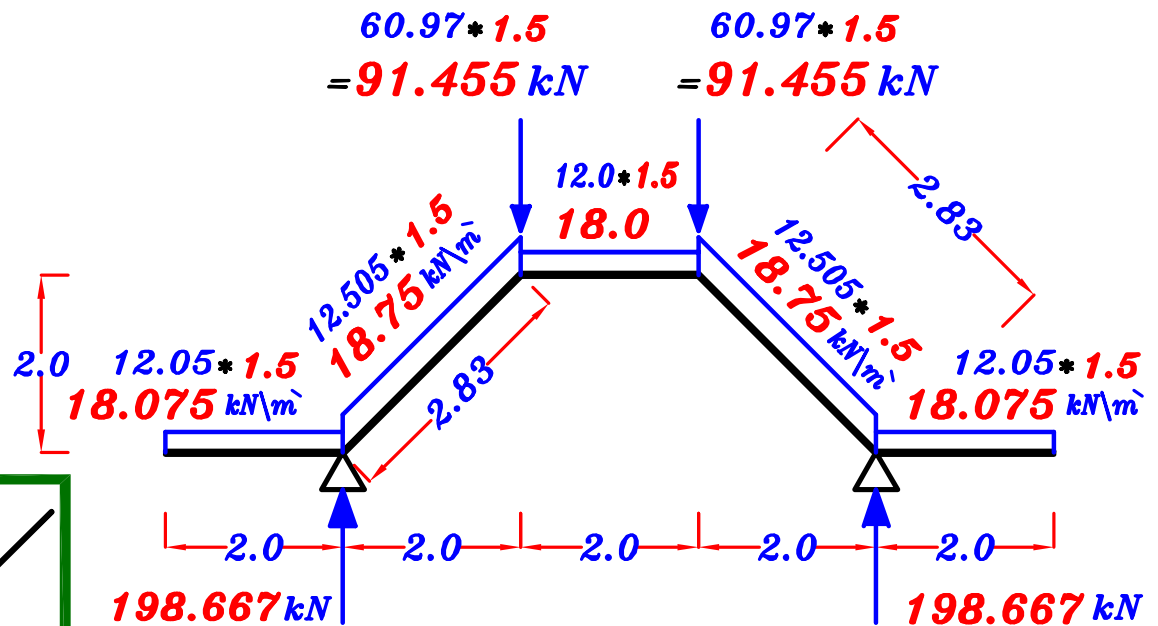
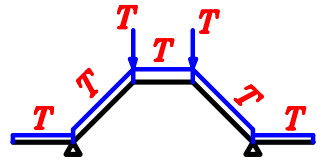
2- max. -ve B.M.D.



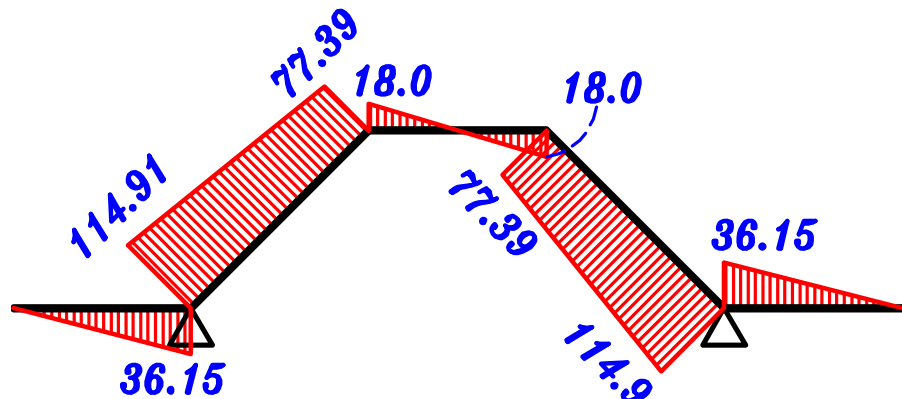
max-max U.L. B.M.D. For the Girder G_1



U.L. S.F.D. & N.F.D. For the Girder G_1



S.F.D.



N.F.D.

